

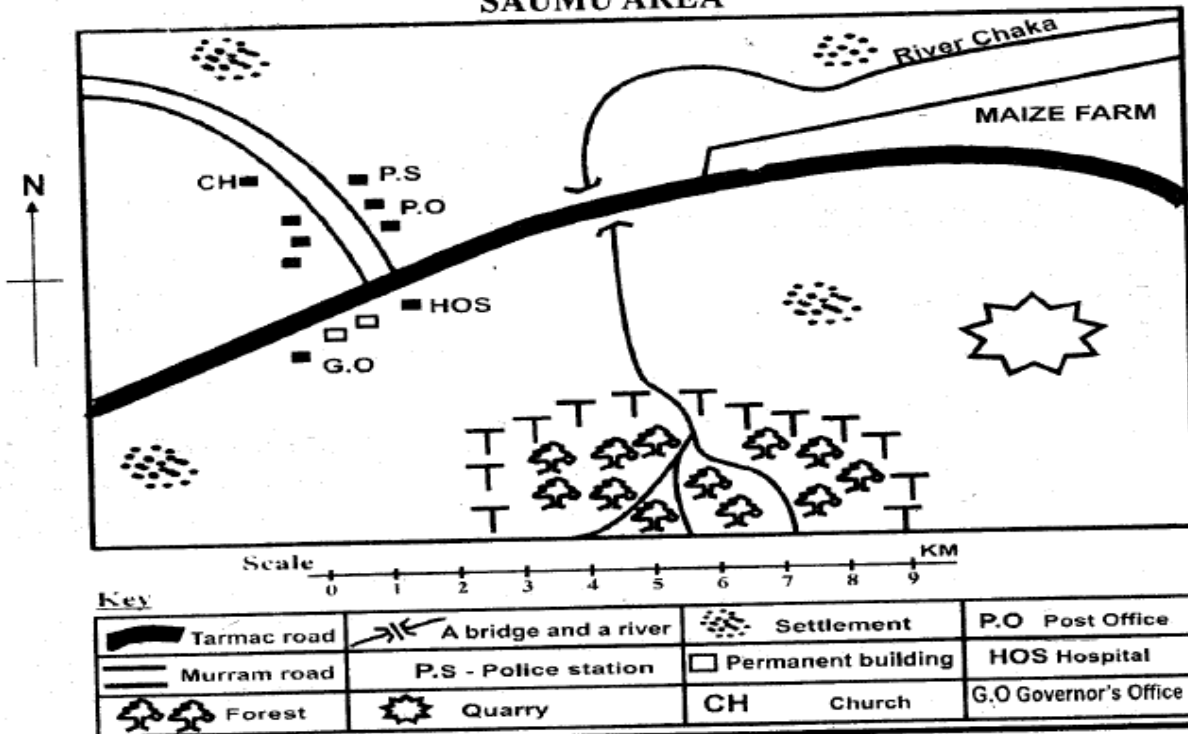
MID TERM ONE EXAM 2018

STANDARD FIVE

SOCIAL STUDIES & CRE

Time: 2hrs 15mins

SAUMU AREA



Tarmac road	A bridge and a river	Settlement	P.O Post Office
Murram road	P.S - Police station	Permanent building	HOS Hospital
Forest	Quarry	CH Church	G.O Governor's Office

Use the map of Saumu area above to answer questions 1-7

1. Which of the following regions is likely to have the highest altitude?
A. Northern region B. Eastern region
C. Southern region D. Western Region
2. What is the climate of the Southern region of Saumu area?
A. Cool and wet B. Hot and wet
C. Hot and dry D. Cool and dry
3. Saumu area is likely to be a
A. sub-county B. county
C. ward D. constituency
4. Most people in Saumu area worship in a
A. mosque B. church
C. shrine D. temple
5. River Chaka flows towards
A. North West B. South East
C. North East D. South West
6. The **main** food crop grown in Saumu area is
A. tea B. maize C. beans D. coffee
7. If a thief is found trying to break into the post office in Saumu area, he should be
A. beaten to death
B. taken to church
C. taken to hospital
D. taken to police station
8. The largest language group in Kenya is
A. Nilotes B. Cushites
C. Bantus D. Semites
9. Kenya is divided into how many relief regions?
A. Six B. Four C. Seven D. Five
10. The following are elements of a map, Which one is not?
A. Title B. Shape C. Key D. Scale
11. The direction between East and South East is
A. East South West
B. South South East
C. South South West
D. North North East
12. Majority of people in Kenya use
A. air transport B. railway transport
C. water transport D. road transport
13. The following are drainage features. Which one is **not**?
A. Swamps B. Plateaus
C. Lakes D. Rivers
14. Which one of the following relief regions experiences cool and wet climate?
A. The coastal lowlands
B. The Nyika plateau
C. The lake basin
D. The highlands
15. Who controls debate in the county assembly?
A. Governor
B. Senator
C. Speaker of the county Assembly
D. Women Representatives

16. Who among the following is **NOT** a member of a nuclear family?
 A. Uncle B. Mother C. Child D. Father
17. A child who has not been taken to school is denied the right to
 A. education B. shelter
 C. healthcare D. security
18. A lowland area that is generally flat is known as
 A. hill B. plain C. slope D. dam
19. A compass has how many cardinal points?
 A. Sixteen B. Eight C. Two D. Four


Use the map of Kenya below to answer questions 20-23



20. The country bordering Kenya marked **W** is known as
 A. Tanzania B. Kenya
 C. Uganda D. Ethiopia
21. The mountain marked **X** is known as
 A. Elgon B. Kenya
 C. Kilimanjaro D. Kulal
22. The county marked **Y** is known as
 A. Mandera B. Marsabit
 C. Wajir D. Garisa
23. The **main** language that entered Kenya using the route marked **Z** is the
 A. Nilotes B. Cushites
 C. Semites D. Bantus
24. Which of the following is **not** a product from traditional industries?
 A. Baskets B. Motorcycles
 C. Pots D. Knives
25. Mangrove forest is found at the
 A. lake basin B. highlands
 C. coastal lowlands D. arid areas
26. Disagreements in a school set up can be resolved through
 A. revenge B. fighting
 C. dialogue D. discrimination
27. Which of the following towns in Kenya receive convectional rainfall?
 A. Meru B. Kisumu
 C. Embu D. Nyeri
28. On the national flag, the colour that symbolise peace is
 A. white B. red C. green D. black

29. The national day celebrated on 20th October every year is
 A. Jamhuri day B. Madaraka Day
 C. Mashujaa Day D. Labour day
30. The following are Nilotic speakers in Kenya **except**

- A. Samburu B. Oromo
 C. Turkana D. Maasai
31. The type of soil also known as the black cotton soil is
 A. sandy soil B. red volcanic soil
 C. loamy soil D. clay soil
32. Papyrus reeds are mostly found in
 A. swampy areas B. dry areas
 C. cold areas D. hot areas
33. Below is a weather instrument. It is used to measure

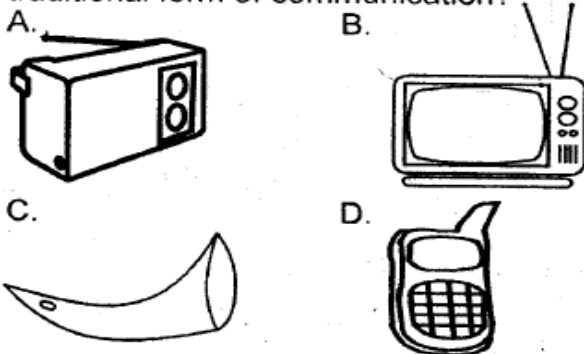


- A. wind direction B. temperature
 C. rainfall D. strength of wind
34. A good citizen is that who
 A. breaks the laws B. is lazy
 C. is corrupt D. who pays tax
35. The planting of trees together with crops is known as
 A. deforestation B. agroforestry
 C. afforestation D. reforestation
36. Which of the following materials is **not** used in constructing a modern house?
 A. Tiles B. Iron sheets
 C. Grass D. Bricks
37. The exchange of goods for other goods is known as
 A. currency trade B. barter trade
 C. monetary trade D. export trade
38. Which of the following is an importance of forests?
 A. Forests keep dangerous wild animals
 B. Thieves can hide in forests
 C. Forests provide timber
 D. Forests cause soil erosion
39. Initiation ceremonies were conducted in the past to mark the
 A. end of adulthood
 B. end of childhood
 C. beginning of childhood
 D. day of marriage
40. In traditional African society, elders performed the duty of
 A. fighting with neighbours
 B. marrying all the young girls
 C. teaching the youth
 D. building modern schools

41. Moral values help people in the society to
 A. behave well
 B. fight with each other
 C. behave badly
 D. become selfish
42. Fishing is important because
 A. it is a source of income
 B. it lead to high crime rate
 C. it causes diseases
 D. it leads to low standards of living
43. Game parks are areas set aside for
 A. domestic animals B. tamed animals
 C. pets only D. wild animals
44. People who travel and visit different places for pleasure are known as
 A. Europeans B. Citizens
 C. Tourists D. Guests
45. The direction between South and West is
 A. South East B. South West
 C. North West D. North East

46. Food crops are known as
 A. cash crops
 B. subsistence crops
 C. wild crops
 D. vegetables

47. Which of the following diagrams shows a traditional form of communication?



48. Foot bridges are constructed to be used **mainly** by
 A. motorists B. cyclists
 C. passengers D. pedestrians

49. Areas that are dry are always
 A. densely populated
 B. used for crop growing
 C. sparsely populated
 D. having a lot of forests

50. Which one is an economic use of soil?
 A. Burying the dead
 B. Decorating the body
 C. Making bricks for building houses
 D. Taking oaths

51. Road accidents can be reduced if
 A. people buy many vehicles
 B. many traffic police officers are employed
 C. all roads are tarmacked
 D. road users obey traffic rules

52. Who appoints members of the county executive committee?
 A. Senator
 B. President
 C. Governor
 D. Women representative

53. The original home of the Bantu was in
 A. Southern Sudan B. Congo Forest
 C. Ethiopian highlands D. Northern Sudan

54. Majority of Asians in Kenya are
 A. fish mongers B. farmers
 C. traders D. pastoralists

55. Which of the following factors does **not** affect climate?
 A. Distance from a large water body
 B. Relief
 C. Wind
 D. Longitudes

56. Which of the following counties is also the capital city of Kenya?
 A. Mombasa B. Kisumu
 C. Nakuru D. Nairobi

57. Which of the following is a Western Bantu?
 A. Abaluhya B. Pokomo
 C. Akamba D. Ameru

58. Child abuse involves
 A. mistreating a child
 B. taking a child to school
 C. protecting a child
 D. buying clothes to a child

59. When there is law and order in a society, people live in
 A. peace B. conflict
 C. disunity D. disagreement

60. The following are plains found in Kenya **except**
 A. Lotikipi B. Bilesha
 C. Loita D. Rusinga

C.R.E

61. Whose rib was used to create Eve?
 A. Angel Gabriel's
 B. Seth's
 C. Noah's
 D. Adam's

62. What did God use to destroy the earth during Noah's time?
 A. Five B. Hailstones
 C. Wind D. Floods

63. Where was Moses when God gave him the ten commandments?
 A. Mt Carmel B. Mt Sinai
 C. Mt Nebo D. Mt Ararat

64. Jezebel was the wife to king
 A. David B. Saul
 C. Solomon D. Ahab

65. The patriarch who was known as the father of the faith is
 A. Abraham B. Jacob
 C. Moses D. Isaac
66. Goliath was a leader of the army of the
 A. Egyptians B. Israelites
 C. Philistines D. Amalekites
67. The last book in the old testament of the bible is
 A. Psalms B. Malachi
 C. Revelation D. Exodus
68. The Israelites celebrated the first passover feast in
 A. Egypt B. Jerusalem
 C. the wilderness D. Jericho
69. Esau was the brother to
 A. Ham B. Shem
 C. Reuben D. Jacob
70. Samuel lived in the temple with the priest known as
 A. Elikanah B. Eli
 C. Nathan D. Joshua
71. The father of John the Baptist worked as a
 A. priest B. carpenter
 C. tent maker D. fisherman
72. When John the Baptist was preaching, he told the people to
 A. hate their enemies
 B. commit sins
 C. repent
 D. fight each other
73. Who told Mary that she would give birth to a baby boy?
 A. Joseph B. Simeon
 C. King Herod D. Angel Gabriel
74. The holy spirit in the form of a dove landed on Jesus when he was being
 A. tempted B. dedicated
 C. baptized D. crucified
75. While teaching, Jesus **mainly** used
 A. parables B. the bible
 C. songs D. books
76. Who among the following was called by Jesus when fishing?
 A. Matthew B. Simon Peter
 C. Judas Iscariot D. Paul
77. When Jesus raised Lazarus, he had stayed in the tomb for how many days?
 A. Five B. Three
 C. Two D. Four
78. How many loaves of bread did Jesus use when feeding the five thousand people?
 A. Two B. Five
 C. Three D. Ten
79. Ananias had a wife called
 A. Peninah B. Lydia
 C. Anna D. Saphira
80. When Jesus sent out his disciples to go and preach, he told them to carry
 A. money B. food
 C. nothing D. water
81. The disciple who denied Jesus three times was known as
 A. Simon Peter
 B. Judas Iscariot
 C. John
 D. Andrew
82. The Akamba call their God
 A. Asis B. Engoro
 C. Mulungu D. Were
83. In the past children were **not** expected to be
 A. honest B. obedient
 C. polite D. selfish
84. Who among the following could offer sacrifices to God in traditional African Societies?
 A. Warriors B. Unmarried girls
 C. Priest D. Children
85. Traditional African Society believed that God is
 A. the father of Jesus
 B. the creator
 C. an evil being
 D. not powerful
86. Christians go to church **mainly** to
 A. visit friends
 B. eat good food
 C. worship God
 D. listen to the preacher
87. People who are having AIDS should be
 A. hated
 B. loved
 C. abused
 D. isolated
88. When a person is forgiven the wrong he has done, he feels
 A. sad
 B. angry
 C. tired
 D. happy
89. After buying a book, Samson realized that he had not given money to the shopkeeper. As a Christian Samson should
 A. take the money to the church
 B. use the money to buy another book
 C. take the money to the shopkeeper
 D. take the money to his parent
90. Irresponsible boy-girl relationship can lead to
 A. unwanted pregnancy
 B. doing well in school
 C. being respected by friends
 D. peaceful life.