



**HIGH FLYER SERIES EVALUATION TEST**  
**STANDARD TWO – YEAR 2016**  
**MATHEMATICS**



DATE: .....

NAME: ..... SCHOOL: .....

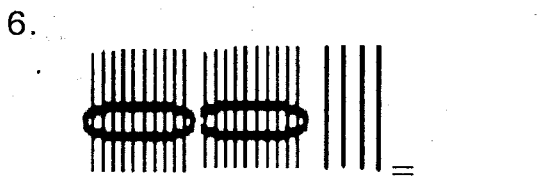
1.  $12 + 2 + 4 =$  \_\_\_\_\_

2. 
$$\begin{array}{r} 42 \\ - 20 \\ \hline \end{array}$$

3. 
$$\begin{array}{r} 17 \\ - 6 \\ \hline \end{array}$$

4. Write in words 208 \_\_\_\_\_

5. What is six plus ten = \_\_\_\_\_



7. 3 boys have \_\_\_\_\_ legs

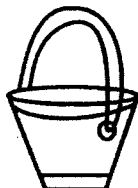
8.  $9 = 4 +$  \_\_\_\_\_

9. One week has \_\_\_\_\_ days

10. Which one holds more?



Cup



Bucket

11. 2 tens + 9 ones = \_\_\_\_\_

12. 
$$\begin{array}{r} 65 \\ + 23 \\ \hline \end{array}$$




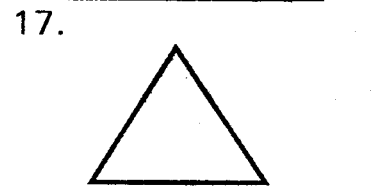
13. 
$$\begin{array}{r} 70 \\ + 77 \\ \hline \end{array}$$

14.  $54 =$  \_\_\_\_\_ tens \_\_\_\_\_ ones

15. Arrange from the smallest to the biggest 47, 39, 86, 53, 77  
\_\_\_\_\_

16. \_\_\_\_\_ tens \_\_\_\_\_ ones = 8

**Name these shapes**




(oval, rectangle, circle, triangle, square)

21. March is the \_\_\_\_\_ month of the year. (second, third, fourth)

22. Fill in the missing numbers  
86, \_\_\_\_\_, \_\_\_\_\_, 89

23. Subtract 12 from 46 = \_\_\_\_\_

24.



The time is \_\_\_\_\_ o'clock

**Write 'yes' or 'no'**

25. 2 cats have 10 legs \_\_\_\_\_

26.  $8 - \underline{\quad} = 5$

27. 
$$\begin{array}{r} 122 \\ + 246 \\ \hline \end{array}$$

**Write in numbers**

28. One hundred and twenty two = \_\_\_\_\_

29. Three hundred = \_\_\_\_\_

30. Eighty eight = \_\_\_\_\_

**Write the missing numbers**

31. 2, 4, 6, 8, \_\_\_\_\_

32. 15, 14, \_\_\_\_\_, 12, \_\_\_\_\_

33. 10, 20, \_\_\_\_\_, \_\_\_\_\_, 50

34.  $19 - \underline{\quad} = 7$

35. \_\_\_\_\_ + \_\_\_\_\_ = 8

36. 
$$\begin{array}{r} 76 \\ + 14 \\ \hline \end{array}$$

37. 
$$\begin{array}{r} 39 \\ + 18 \\ \hline \end{array}$$

38. A pencil costs sh 3. How much will I pay for 3 pencils? \_\_\_\_\_

39. What is the place value of digit 3 in 438? \_\_\_\_\_

40. Take away 9 from 19 = \_\_\_\_\_

41. 76 = \_\_\_\_\_ hundreds \_\_\_\_\_ tens \_\_\_\_\_ ones

42. \_\_\_\_\_ = 2 hundreds, 7 tens and 4 ones

43. 5 cows have \_\_\_\_\_ legs.

44.  $25 - \underline{\quad} = 20$

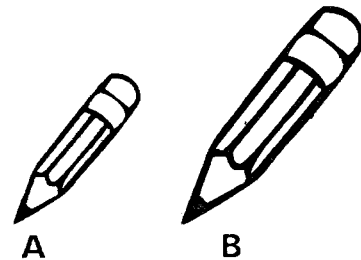
45.  $4 + 4 + 4 = \underline{\quad} \times \underline{\quad}$

46. There are \_\_\_\_\_ months in a year


47. 
$$\begin{array}{r} 79 \\ - 25 \\ \hline \end{array}$$


48. How many legs do three snakes have? \_\_\_\_\_

49. Which one is shorter?



50. Draw a curved line





**MSURURU WA MTHANI WA HIGH FLYER SERIES**  
**DARASA LA PILI – MWAKA 2016**  
**KISWAHILI: LUGHA**

TAREHE: .....

JINA: ..... SHULE: .....

Imla

1. ....
2. ....
3. ....
4. ....
5. ....

Jaza pengo

6. K    pep    o

7. K    l    mu

8. Mk    k

9. Ch    p

10. K    j    ko

Andika majina

11.



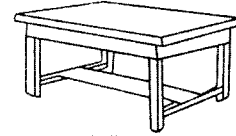
12.



13.



14.



15.



Andika wingi

16. Kitabu \_\_\_\_\_

17. Mguu \_\_\_\_\_

18. Jicho \_\_\_\_\_

19. Kisu \_\_\_\_\_

20. Nyasi \_\_\_\_\_

Andika kinyume

21. Shangazi \_\_\_\_\_

22. Panda \_\_\_\_\_

23. Mwanamke \_\_\_\_\_

24. Mwalimu \_\_\_\_\_

25. Simama \_\_\_\_\_

**Andika kwa maneno au nambari**

26. 75 \_\_\_\_\_


27. 15 \_\_\_\_\_

28. Themanini na tatu \_\_\_\_\_

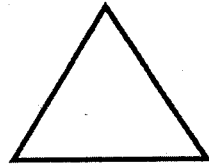
29. Mia moja na moja \_\_\_\_\_

30. 63 \_\_\_\_\_

31.



32.



**Kanusha sentensi**

33. Nimefika \_\_\_\_\_

34. Tutaenda \_\_\_\_\_

35. Mwalimu anataka kiboko  
\_\_\_\_\_

36. Tunasoma \_\_\_\_\_

37. Amkeni \_\_\_\_\_

**Chagua jibu sahihi**

38. Nilikula chakula \_\_\_\_\_  
(mtamu, tamu, kitamu)

39. Nyani ana mkia \_\_\_\_\_  
(refu, ndefu, mrefu)

40. Mwalimu \_\_\_\_\_ ni huyu.  
(wetu, yetu, zetu)

**Unda maneno**

41. Ma \_\_\_\_\_

42. Ka \_\_\_\_\_

43. Sh \_\_\_\_\_

44. Ki \_\_\_\_\_

**Andika kwa herufi kubwa au ndogo**

45. kichana \_\_\_\_\_

46. KIKOMBE \_\_\_\_\_

47. SAHANI \_\_\_\_\_

48. chungu \_\_\_\_\_

49. RANGI \_\_\_\_\_

50. nywele \_\_\_\_\_





**HIGH FLYER SERIES EVALUATION TEST**  
**STANDARD TWO – YEAR 2016**  
**ENGLISH: LANGUAGE**

DATE: .....

**NAME:** ..... **SCHOOL:** .....

**Dictation**

1. \_\_\_\_\_
2. \_\_\_\_\_
3. \_\_\_\_\_
4. \_\_\_\_\_
5. \_\_\_\_\_

**Write the opposites**

6. First \_\_\_\_\_
7. Big \_\_\_\_\_
8. Light \_\_\_\_\_
9. Slow \_\_\_\_\_
10. Strong \_\_\_\_\_  
(fast, last, weak, small, heavy)

**Use 'has' or 'have'**

11. We \_\_\_\_\_ done our work.
12. He \_\_\_\_\_ played a lot.
13. The trees \_\_\_\_\_ fallen down.
14. They \_\_\_\_\_ eaten a lot of food.
15. She \_\_\_\_\_ a lot of wealth.

**Use 'on', 'under' or 'in'**

16.



The water is \_\_\_\_\_ the jug.

17.




The ball is \_\_\_\_\_  
the table.

18.



The cat is sitting \_\_\_\_\_  
the chair.

19.



The boy is \_\_\_\_\_  
the tree.

20.



The box is \_\_\_\_\_  
the bed.

<u>Animal</u>	<u>Young one</u>
21. Pig	_____
22. Cat	_____
23. Lion	_____
24. Dog	_____
25. Hen	_____

(kitten, puppy, piglet, chick, cub)

What colour are they?

26. Blood \_\_\_\_\_
27. Grass \_\_\_\_\_
28. My teeth \_\_\_\_\_
29. Sky \_\_\_\_\_
30. Ripe banana \_\_\_\_\_

Use 'this' or 'these'

31. \_\_\_\_\_ is an orange.
32. \_\_\_\_\_ books are many.
33. Are \_\_\_\_\_ children going to school?
34. Bring me \_\_\_\_\_ pot.
35. \_\_\_\_\_ are my mother's shoes.

<u>He</u>	<u>She</u>
36. Brother	_____
37. Uncle	_____
38. Grandfather	_____
39. King	_____
40. Husband	_____

Choose the correct word

41. Do you like eating \_\_\_\_\_.  
(pears, pairs, pliers)
42. He is my \_\_\_\_\_.  
(sun, shun, son)
43. A \_\_\_\_\_ is an animal.  
(heir, hare, hair)
44. I \_\_\_\_\_ the way to the market.  
(now, no, know)
45. Monday was my \_\_\_\_\_ day.  
(bad, bird, bed)

Make two words

Class teacher = class + teacher

46. Highway = \_\_\_\_\_ + \_\_\_\_\_
47. School bus = \_\_\_\_\_ + \_\_\_\_\_
48. Handcart = \_\_\_\_\_ + \_\_\_\_\_
49. Fisherman = \_\_\_\_\_ + \_\_\_\_\_
50. Story book = \_\_\_\_\_ + \_\_\_\_\_



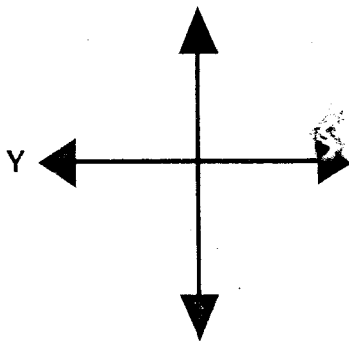
**HIGH FLYER SERIES EVALUATION TEST**  
**STANDARD TWO – YEAR 2016**  
**SOCIAL STUDIES**

DATE: .....

NAME: ..... SCHOOL: .....

1. A \_\_\_\_\_ is a high flat area.  
(swamp, plain, hill)

2.



This is a compass. The point marked y is \_\_\_\_\_ direction.  
(west, south, east)

3. A room where books are kept is called a \_\_\_\_\_.  
(store, shelf, library)

4. Heavy rains causes \_\_\_\_\_.  
(famine, floods, drought)

5. We raise the flag on \_\_\_\_\_.  
(Sunday, Saturday, Friday)

6. Strong \_\_\_\_\_ blows roofs away. (sun, wind, rain)

7. The head of a location is a \_\_\_\_\_.  
(elder, chief, pastor)

8. When it is cold, we wear \_\_\_\_\_ clothes. (cold, warm, many)

9. A \_\_\_\_\_ is a room where teachers meet.  
(office, staffroom, library)

10. We stop a bicycle by using the \_\_\_\_\_.  
(bell, brakes, lamp)

11. Games help our bodies to become \_\_\_\_\_.  
(tired, strong, weak)

12. \_\_\_\_\_ is found in your school.  
(Shop, Class, Market)

13. A \_\_\_\_\_ family is made up of one parent.  
(nuclear, extended, single parent)

14. Chairs, tables and desks are \_\_\_\_\_.  
(utensils, furniture, wooden things)

15. Tourists visit our country to see \_\_\_\_\_ animals.  
(big, wild, domestic)

16.



This road sign shows \_\_\_\_\_ nearby.

(shop, market, school)

17. Which community lives in a manyatta?

(Kikuyu, Luo, Maasai)

18. A person who goes on foot is called a \_\_\_\_\_.

(walker, pedestrian, passenger)

19. \_\_\_\_\_ is one of our needs in school. (Money, Video, Books)

20. A group of people living together make a \_\_\_\_\_.

(home, school, community)

21. An elder is in-charge of a \_\_\_\_\_.

(village, location, school)

22. A compass helps us to find the \_\_\_\_\_ of a place.

(way, direction, path)

23. A valley is a \_\_\_\_\_ feature.

(man-made, physical, earth)

24. Shoes are made of \_\_\_\_\_.

(wood, leather, wool)

25. A swampy area has a lot of \_\_\_\_\_.

(stones, soil, water)

26. We enter our school through the \_\_\_\_\_.

(roof, gate, fence)


27. Our national flag has \_\_\_\_\_ colours.

(4, 5, 3)

28. Sisal is used for making \_\_\_\_\_.

(furniture, ropes, clothes)

29.



These physical features are \_\_\_\_\_.

(rivers, forest, hills)

30. It is a right of every child to go to \_\_\_\_\_.

(shop, market, school)





# HIGH FLYER SERIES EVALUATION TEST

## STANDARD TWO – YEAR 2016

### SCIENCE

DATE: .....

NAME: ..... SCHOOL: .....

- \_\_\_\_\_ is not a living thing.  
(Tree, Dog, Stone)
- We smell things using our \_\_\_\_\_.  
(ears, nose, skin)
- We should not smell \_\_\_\_\_.  
(flowers, honey, paint)
- Which sense organ is found in the mouth? (nose, tongue, ears)

#### Match these foods with their colour.

- | Food  | Colour |
|---|--------|
| 5. Ripe banana  | White  |
| 6. Maize flour  | Red    |
| 7. Ripe pepper  | Yellow |
| 8. A personal item for cleaning the nose is _____<br>(comb, handkerchief, toothbrush) |        |
| 9. Keeping the body clean is known as _____<br>(washing, hygiene, bathing)            |        |

10.



\_\_\_\_\_ This personal item is for \_\_\_\_\_  
(brushing teeth, combing hair)

11. We should \_\_\_\_\_ water on an earthen floor before sweeping.

(pour, sprinkle)

- We wear a heavy jacket on \_\_\_\_\_ day. (cold, sunny)
- The sun gives us \_\_\_\_\_.  
(light, food, shade)

#### Draw these weather symbols.


14. Calm



15. Cloudy



16. Rainy



17. Sunny



18. On a hot day we wear \_\_\_\_\_ clothes. (heavy, light)

19.



This is a \_\_\_\_\_.  
(sunflower, onion, carrot)

- A sheep gives us \_\_\_\_\_.  
(milk, wool)
- Cactus plant grows in \_\_\_\_\_ places. (wet, dry)
- Farmers keep fish in a \_\_\_\_\_.

(kennel, pond)

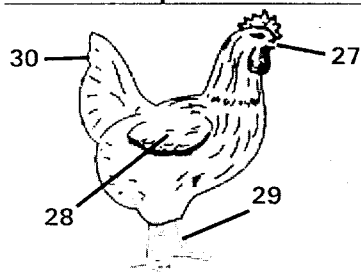
23. \_\_\_\_\_ is not a bird kept at home.  
(Turkey, Chicken, Flamingo)

24. An example of a pet animal is \_\_\_\_\_.  
(dog, cattle, snake)

25. Which insect gives us wax?  
(wasp, butterfly, bee)

26. We use \_\_\_\_\_ to make our hair smart.  
(toothbrush, comb)

Name the parts of a hen shown



27. \_\_\_\_\_ 28. \_\_\_\_\_

29. \_\_\_\_\_ 30. \_\_\_\_\_  
(Wing, tail, beak, leg, comb)

31. Fleas cause \_\_\_\_\_. (jiggers, ticks)

32. Which insect likes dirty places?  
(locust, housefly, bee)

33. Soil makes water \_\_\_\_\_.  
(clean, dirty, sweet)

34. To make long ribbons you need \_\_\_\_\_ soil. (loam, clay, sand)

35. \_\_\_\_\_ is not a vegetable.  
(spinach, pawpaw, cabbage)

36. Which one is not a utensil?  
(spoon, jiko, glass)

37. We remove soap from utensils by \_\_\_\_\_.  
(drying, rinsing)

38. A dark shape of your body on the ground is called \_\_\_\_\_.  
(shadow, light)

39. \_\_\_\_\_ cannot make a shadow.  
(Ball, Clear Glass)

40. Plucking a stretched rubber band produces \_\_\_\_\_.  
(sound, heat, light)

41. Moving air is called \_\_\_\_\_.  
(clouds, dust, wind)

42. The removal of chaff from maize is called \_\_\_\_\_.  
(winnowing, fanning)

43. A \_\_\_\_\_ cannot move on water.  
(ship, bicycle, boat)

44. The best shape for making rollers is \_\_\_\_\_.  
(circle, square, oval)


45. Which animal can you model easily? (snake, cow, camel)

46. We use a \_\_\_\_\_ to dry our hands. (handkerchief, towel)

47. It is good to \_\_\_\_\_ a modern toilet after using it. (sweep, flush)

48. Clouds bring \_\_\_\_\_.  
(wind, rain, air)

49. A \_\_\_\_\_ fruit has many seeds.  
(mango, guava, avocado)

50.  This seed is from a \_\_\_\_\_ plant. (bean, maize, sugar cane)



**HIGH FLYER SERIES EVALUATION TEST**  
**STANDARD TWO – YEAR 2016**  
**CHRISTIAN RELIGIOUS EDUCATION**

DATE: .....

NAME: ..... SCHOOL: .....

1. A good leader \_\_\_\_\_ his people.  
(hates, beats, serves)
2. \_\_\_\_\_ Brothers were jealous of him. (Jacob, Joseph, Elikanahs)
3. The Holy book of God is called \_\_\_\_\_.  
(Bible, Koran, Read with us)
4. We speak to God through \_\_\_\_\_.  
(prayers, phone, writing)
5. Jesus fed 5000 people with \_\_\_\_\_ fish and 5 loaves of bread. (2, 5, 7)
6. Jesus died because of our \_\_\_\_\_.  
(good, sins, friends)
7. The story of creation is found in the book of \_\_\_\_\_.  
(Exodus, Genesis, Matthew)
8. When Jesus was born, he slept in a \_\_\_\_\_.  
(baby cot, manger, bed)
9. \_\_\_\_\_ was swallowed by a fish. (Jonah, John, Peter)
10. Angels created the moon and stars. (Yes, I don't know, No)
11. Who agreed to sacrifice His only son? (Noah, Abraham, Moses)
12. God is happy when we live together in \_\_\_\_\_.  
(unity, hatred, enmity)
13. Who led the Israelites from Egypt?  
(John, Moses, Aaron)
14. We can thank our parents by \_\_\_\_\_.  
(singing, working hard, washing dishes)
15. Jesus met the widow of Nain going to bury her \_\_\_\_\_.  
(brother, son, daughter)
16. Samuel's parents lived in \_\_\_\_\_.  
(Shiloh, Ramah, Jerusalem)
17. Naomi had \_\_\_\_\_ sons. (3,5,2)
18. Who betrayed Jesus?  
(Thomas, Judas, John)
19. When I pray, I talk to \_\_\_\_\_.  
(God, myself, my parent)
20. Our father who art in \_\_\_\_\_.  
(earth, hell, heaven)



**MSURURU WA JARIBIO LA MTHANI WA HIGH FLYER  
DARASA LA PILI – MWAKA 2016  
KUSOMA**

TAREHE: .....

JINA: ..... SHULE: .....

**Soma maneno haya:-**

- |            |              |             |
|------------|--------------|-------------|
| 1. Hodi    | 9. Wino      | 17. Heshima |
| 2. Cheka   | 10. Pikipiki | 18. Bangili |
| 3. Dada    | 11. Ngoma    | 19. Nyani   |
| 4. Chiriku | 12. Mama     | 20. Paipai  |
| 5. Chui    | 13. Bega     |             |
| 6. Mifuko  | 14. Ishirini |             |
| 7. Kalenda | 15. Soda     |             |
| 8. Kalamu  | 16. Daftari  |             |

**Soma sentensi hizi:-**

21. Watoto wapewe chakula bora.
22. Kalamu yangu imeisha wino.
23. Huyu ni dada yake.
24. Mfuko wangu umeraruka.
25. Twende nyumbani.





**HIGH FLYER SERIES EVALUATION TEST**  
**STANDARD TWO – YEAR 2016**  
**READING**

DATE: .....

NAME: ..... SCHOOL: .....

**Read these words**

- |           |             |
|-----------|-------------|
| 1. Branch | 6. Bicycle  |
| 2. Gift   | 7. Whose    |
| 3. Colour | 8. Brought  |
| 4. Friday | 9. Quack    |
| 5. Grey   | 10. Largest |

**Read these sentences**

11. Two girls have twenty toes.
12. She has three brothers.
13. The house was in smoke and ashes.
14. Which month comes between June and August?
15. How many weeks are there in a month?

**Read the passage below**

Wild animals live in the forest. Examples are lions, giraffes, monkeys and zebras. A zebra has beautiful stripes of white and black. A giraffe has a long neck. A lion feeds on meat by killing other animals. A female lion is called a lioness. These animals are beautiful to look at.








HIGH FLYER  
SERIES  
003

# HIGH FLYER SERIES EVALUATION TEST

## STANDARD TWO – YEAR 2016

### MARKING SCHEME

ENGLISH	KISWAHILI	MATHS	SCIENCE	SOCIAL STUDIES	C.R.E.
1.	1. Kiti	1. 18	1. Stone	1. Plain	1. Serves
2.	2. Chakula	2. 22	2. Nose	2. West	2. Joseph
3.	3. Shule	3. 11	3. Paint	3. Library	3. Bible
4.	4. Kijiko	4. Two hundreds and eight	4. Tongue	4. Floods	4. Prayer
5.	5. Soko	5. 16	5. Yellow	5. Friday	5. 2
6. Last	6. Kipepeo	6. 24	6. White	6. Wind	6. Sins
7. Small	7. Kalamu	7. 6	7. Red	7. Chief	7. Genesis
8. Heavy	8. Mkuki au mkeka	8. 5	8. Handkerchief	8. Warm	8. Manger
9. Fast	9. Chupa au chapa	9. Seven	9. Hygiene	9. Staffroom	9. Jonah
10. Weak	10. Kijiko	10. Bucket	10. Brushing teeth	10. Brakes	10. No
11. Have	11. Mti	11. 29	11. Sprinkle	11. Strong	11. Abraham
12. Has	12. Ndizi	12. 88	12. Cold	12. Class	12. Unity
13. Have	13. Jani	13. 147	13. Light	13. Single parent	13. Moses
14. Have	14. Meza	14. 5 tens 4 ones	14. 	14. Furniture	14. Working hard
15. Has	15. Kalamu	15. 39, 47, 53, 77, 86	15. 	15. Wild	15. Son
16. In	16. Vitabu	16. 0 tens 8 ones	16. 	16. School	16. Ramah
17. Under	17. Miguu	17. Triangle	17. 	17. Maasai	17. 2
18. On	18. Macho	18. Oval	18. Light	18. Pedestrian	18. Judas
19. Under	19. Visu	19. Rectangle	19. Carrot	19. Books	19. God
20. Under	20. Nyasi	20. Circle	20. Wool	20. Community	20. Heaven
21. Piglet	21. Mjomba	21. Third	21. Dry	21. Village	<b>I.R.E.</b> 1. A sin
22. Kitten	22. Shuka	22. 87, 88	22. Ponds	22. Direction	2. Makka
23. Cub	23. Mwanaume	23. 34	23. Flamingo	23. Physical	3. InshaaAllah
24. Puppy	24. Mwanafunzi	24. 4 Oclock	24. Dog	24. Leather	4. Jumaa
25. Chick	25. Ketu	25. No	25. Bee	25. Water	5. Udhu
26. Red	26. Sabini na tano	26. 3	26. Comb	26. Gate	6. Ramadhan
27. Green	27. Kumi na tano	27. 368	27. Beak	27. 4	7. Fatiha
28. White	28. 83	28. 122	28. Wing	28. Ropes	8. Alhamdulillah
29. Blue	29. 101	29. 300	29. Leg	29. Hills	9. Saum
30. Yellow	30. Sitini na tatu	30. 88	30. Tail	30. School	10. 4
31. This	31. Mstatili	31. 10	31. Jiggers		11. 6
32. These	32. Pembe tatu	32. 13, 11	32. Housefly		12. right
33. These	33. Sijafika	33. 30, 40	33. Dirty		13. Bismillah
34. This	34. Hatutaenda	34. 12	34. Clay		14. Mosque
35. These	35. Mwalimu hataki kiboko	35. 4, 4	35. Pawpaw		15. Fatiha
36. Sister	36. Hatu somi	36. 90	36. Jiko		16. Al-Ikhlās
37. Aunt	37. Msiamke	37. 57	37. Rinsing		17. Muhammad
38. Grandmother	38. Kitamu	38. Sh 9	38. Shadow		18. Peace
39. Queen	39. Mrefu	39. Tens	39. Clear glass		19. Allah
40. Wife	40. Wetu	40. 10	40. Sound		20. Muslim
41. Pears	41. Maua ....	41. 0 hundreds 7 tens 6 ones	41. Wind		
42. Son	42. Kalamu ...	42. 274	42. Winnowing		
43. Hare	43. Shangazi ...	43. 10	43. Bicycle		
44. Know	44. Kiatu ...	44. 5	44. Circle		
45. Bad	45. KICHANA	45. 4 x 3	45. Snake		
46. High + way	46. Kikombe	46. 12	46. Towel		
47. School + bus	47. sahani	47. 54	47. Flush		
48. Hand + cart	48. CHUNGU	48. 0	48. Rain		
49. Fisher + man	49. rangi	49. A	49. Guava		
50. Story + book	50. NYWELE	50. 	50. Bean		