

NAIROBI INTERPRIVATE SCHOOLS EXAM

STANDARD FOUR - YEAR 2016

SCIENCE



Time: 1Hr. 40 Min.

1. The following types of food are good for our teeth except
- A. carrots
 - B. biscuits
 - C. milk
 - D. sugarcane

2. The type of tooth shown below is known as



- A. canine
- B. molar
- C. incisor
- D. premolar

3. A true insect has how many legs?

- A. Six
- B. Eight
- C. Four
- D. Two

4. Which one is **not** a source of light?

- A. Sun
- B. Torch
- C. Star
- D. Moon

5. The best soil for modelling is:

- A. loam
- B. clay
- C. sand
- D. silt


6. The first set of teeth is known as

- A. permanent teeth
- B. milk teeth
- C. dentures
- D. wisdom teeth

7. We can see all the following in the sky at night except

- A. moon
- B. star
- C. sun
- D. clouds

8. The bell shown below produces sound by



- A. plucking
- B. ringing
- C. blowing
- D. shaking

9. The following are wild animals except

- A. cow
- B. lion
- C. zebra
- D. elephant

10. Teeth start growing in a child at the age of

- A. six years
- B. six months
- C. ten years
- D. two months

11. Personal items should not be
 A. used
 B. washed
 C. kept
 D. shared
12. The sense organ for hearing is the
 A. ear
 B. tongue
 C. nose
 D. eye
13. Most leaves of plants have which colour?
 A. White
 B. Red
 C. Green
 D. Yellow
14. A kite flies well when the weather is
 A. calm
 B. windy
 C. rainy
 D. sunny
15. Which one is not a harmful animal?
 A. Fish
 B. Mosquito
 C. Tick
 D. Termite

16. The function of the tooth below is

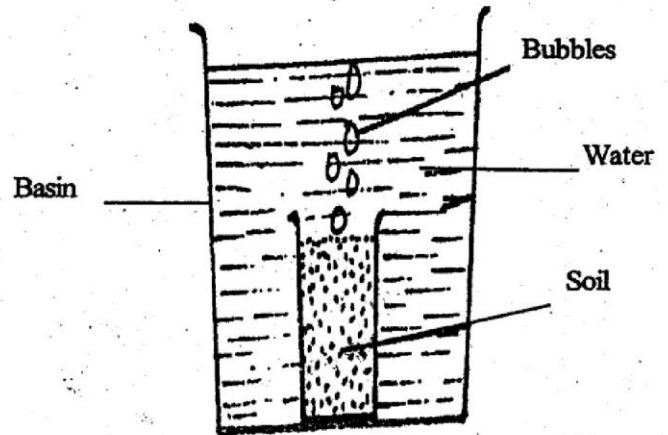


- A. cutting food B. biting food
 C. tearing food D. crushing food

17. Which of these animals has legs?
 A. Snake
 B. Earthworm
 C. Frog
 D. Snail
18. We clean our bodies using clean water and _
 A. soap
 B. grass
 C. sand
 D. soil
19. We eat food to become
 A. sick
 B. weak
 C. tired
 D. strong
20. Which one is not a requirement for good health?
 A. Rest
 B. Work
 C. Sleep
 D. Health care
21. Drinking water should be
 A. boiled
 B. sugary
 C. tasty
 D. brown
22. Which of these animals protects itself by stinging?
 A. Snake
 B. Lizard
 C. Wasp
 D. Tortoise
23. We get eggs from
 A. goats
 B. hens
 C. sheep
 D. camels


24. Which one is not a problem related to teeth?
- Dental carries
 - Dental plaque
 - Dental floss
 - Gingivitis
25. After bathing, what do we use to wipe the body?
- Handkerchief
 - Toothpaste
 - Paper
 - Towel
26. The body of a bird is covered by
- feathers
 - leaves
 - hair
 - bones
27. A person who cannot see is said to be
- dumb
 - blind
 - deaf
 - lame
28. When it is hot, we wear
- heavy clothes
 - warm clothes
 - light clothes
 - dirty clothes
29. The total number of milk teeth is
- 32
 - 28
 - 20
 - 30
30. Which part of sukumawiki do we eat?
- Stem
 - Roots
 - Flowers
 - Leaves

31. In the experiment below, the pupils concluded that



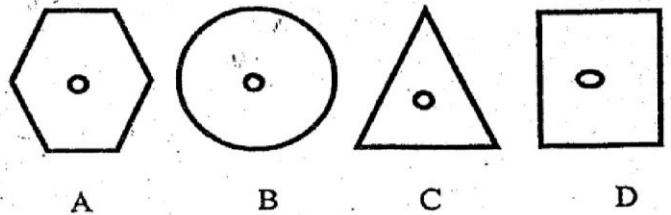
- water contains soil
 - soil contains water
 - soil contains air
 - air contains soil
32. A cow provides us with
- wool
 - eggs
 - milk
 - feathers
33. A rotten egg smells _____
- good
 - bad
 - sweet
 - nice
34. What is the colour of blood?
- Red
 - White
 - Blue
 - Yellow
35. We wear gumboots when it is
- dusty
 - sunny
 - dry
 - muddy

36. Exercises make us to be
 A. weak B. sick
 C. strong D. hungry
37. The sense organ of taste is
 A. nose B. tongue
 C. ear D. skin
38. The following are fruits except
 A. oranges B. mangoes
 C. pineapples D. spinach
39. The place where an animal lives naturally is its
 A. habitat B. environment
 C. hole D. atmosphere
40. The following diagram shows that the weather is



- A. cloudy and windy B. rainy
 C. rainy and windy D. windy
41. A ripe banana tastes
 A. bitter B. sweet
 C. sour D. bad
42. We can store water in all the following except
 A. pipes B. tanks
 C. dams D. buckets

43. Which one is not a special sound?
 A. Singing B. Ambulance siren
 C. Screaming D. Fire engine siren
44. The dirt that comes out from the ears is known as
 A. tears B. mucus
 C. wax D. blood
45. Which of these animals has no horns
 A. Donkey B. Dog
 C. Cat D. Cow
46. The animal that protects itself by coiling is
 A. chameleon B. millipede
 C. flea D. butterfly
47. Unwanted plants growing in a farm are known as
 A. seedlings B. flowers
 C. weeds D. seeds
48. The tongue is found in the
 A. nose B. ears
 C. eyes D. mouth
49. Which of these plants is used in making medicine?
 A. Neem B. Beans
 C. Yams D. Sugarcane
50. The best shape to make a wheel is _____





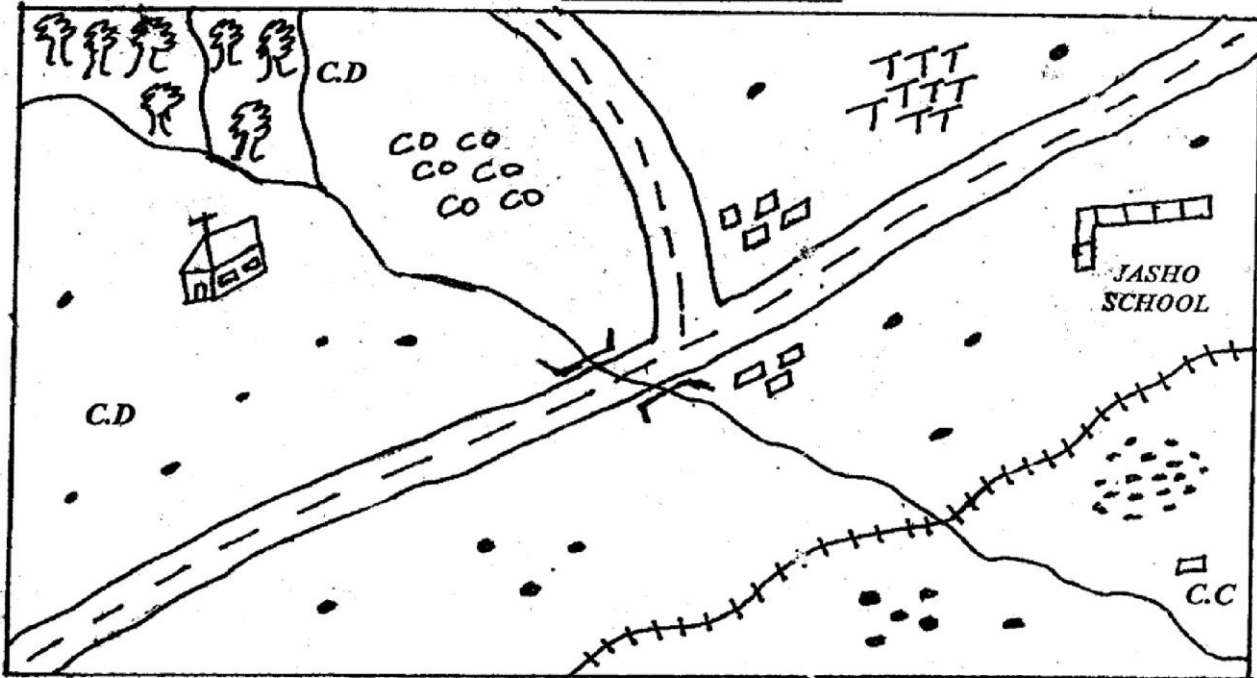
NAIROBI INTERPRIVATE SCHOOLS EXAM

STANDARD FOUR - YEAR 2016

SOCIAL STUDIES & C.R.E

TIME: 2 HOURS 15 MIN.

MAPATO AREA



KEY

	Church		Tea		River
C.D	Cattle dip		Forest		Tarmac Road
C.C	Chiefs Camp		Village		
CO	Coffee		Town		

Study the map of MAPATO AREA above and then answer questions 1 - 7:-

- What is the direction of the church from Jasho School?
A. North B. South C. West D. East
- The people of Mapato area are likely to be ____
A. Christians B. Hindu
C. Muslims D. Buddhism
- Which are the main cash crops grown in Mapato area?
A. Tea and pyrethrum B. Tea and coffee
C. Maize and tea D. Pyrethrum
- The main means of transport in Mapato area is ____
A. Railway B. Air
C. Water D. Road
- The cattle dips in Tangazo area show they ____
A. Keep bees B. Keep fish
C. Keep poultry C. Keep livestock
- The river flows from ____ to ____
A. NW to SE B. SE to NW
C. NE to SW D. North to South
- Mapato area is headed by a ____
A. Governor B. Senator
C. MCA D. Chief
- Faith a Std. 4 pupil stood facing the setting sun. The right arm was pointing to the ____
A. East B. West C. North D. South
- Which one among the following is NOT a cash crop?
A. Maize B. Pyrethrum
C. Coffee D. Tea
- Which of the following is NOT a dairy cattle?
A. Freshian B. Jersey
C. Aryshire D. Zebu
- The word Savanna means ____
A. Forest B. Mountain
C. Grassland D. River

12. An area with many people is said to be _____ populated

- A. Sparsely
- B. Highly
- C. Widely
- D. Densely

13. Morals are laws teaching people _____

- A. to ignore elders
- B. to avoid making friends
- C. to respect work
- D. to destroy property

14. _____ taught young people about traditions of the community.

- A. Spirits
- B. Nieces
- C. Grandparents
- D. Children

15. Which of the following is a member of nuclear family?

- A. Sister
- B. Aunt
- C. Grandfather
- D. Grandmother

16. Anything that people in a community did not allow was called a

- A. race
- B. taboo
- C. clan
- D. custom

17. Which of the following crops is not a food crop?

- A. Rice
- B. Maize
- C. Millet
- D. Coffee

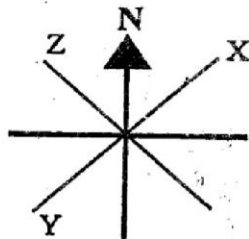
18. A crop which is just grown to feed the farmer and his family is called

- A. money crop
- B. Commercial crop
- C. Cash crop
- D. Subsistence crop

19. Which of the following is an importance of forests?

- A. They make soil cool
- B. They make us famous
- C. They protect soil erosion
- D. They have many trees

20. Direction X, Y, and Z are _____







- A. North East, South West and North West
- B. North West, West North and south West
- C. South West, East North and North West
- D. West South, North East and North West

21. _____ is the condition of the atmosphere of a place at a given time.

- A. Climate
- B. Dry
- C. Weather
- D. Element

22. People who break laws are known as

- A. bad people
- B. criminals
- C. dishonest people
- D. law bide

			
9:00a.m.	11:00a.m	2:00p.m	3:00p.m.

23. The diagram above shows a _____

- A. Rain day
- B. Weather chart
- B. Hot day
- D. Days of the week

24. The people who take care of wild animals in the game park are called _____

- A. Wardens
- B. Poachers
- C. Nurses
- D. Herders

25. Which of the following animals is not one of the Big Fives?

- A. Lion
- B. Rhino
- C. Giraffe
- D. Buffalo

26. Our national language in Kenya is

- A. English
- B. Kikuyu
- C. Kiswahili
- D. Arabic

27. One of the reasons why Jua Kali industries was started was to _____

- A. Create employment
- B. Make expensive products
- C. Develop roads
- D. Encourage people to move to towns

28. Which one of the following is NOT a resource?

- A. Lakes
- B. Forests
- C. Worship
- D. Soil

29. What is barter trade?

- A. Exchange for goods for money
- B. Buy goods for money
- C. Exchange of goods for other goods
- D. Buy things in cash

30. Who is the third president of Kenya?

- A. Mzee Jomo Kenyatta
- B. Mwai Kibaki
- C. Daniel Arap Moi
- D. George Saitoti

31. _____ is a flat land

- A. Valley
- B. Dam
- C. Plain
- D. Lake

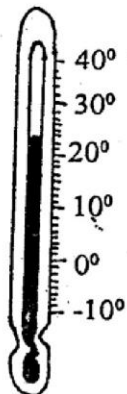
32. The main food for pastoral communities is

- A. meat
- B. millet
- C. bananas
- D. Maize

33. Which one of the following is NOT an agent of soil erosion?

- A. Wind
- B. Animals
- C. Rain
- D. Trees

34. What is the temperature according to the thermometer



- A. 10° C
- B. 20° C
- C. 0° C
- D. 40° C

35. Pipelines are used to transport _____
 A. Sugar B. Horticultural crops
 C. Grains D. Petroleum products

36. The diagram below is used to measure _____



- A. Wind direction B. Amount of rain
- C. Temperature D. Wind strength

37. The family including father, mother and children is called _____

- A. Extended B. Nuclear
- C. Goof family D. Small family

38. Which one of the following is NOT a traditional industry?

- A. Weaving B. Cement making
- C. Basketry D. Gourd making

39. Moving air is called _____

- A. Rain B. Wind
- C. Atmosphere D. Vehicles

40. Hills and rivers are examples of _____ features

- A. Long B. Physical C. Earth D. National


41. The head of a County is called a _____

- A. Senator B. Governor
- C. County Representative D. Woman Representative

42. Vegetation which is not planted is _____

- A. Tall B. Dense
- C. Natural D. Man made

Use the diagrams below to answer the questions that follows



43. The part marked M is the _____
 A. President B. Vice President
 C. Senator D. M. P

44. The animals used to carry heavy goods are called _____
 A. Pack B. Domestic C. Herd D. Wild

45. Which of the following is a traditional forms of communication?

- A. Radio B. Television
- C. 'Horn D. Telephone

Use the weather chart below to answer questions

46 - 49:-

	Monday	Tuesday	Wednesday	Thursday	Friday
Morning					
Afternoon					

46. Which day was rainy and cloudy?

- A. Tuesday B. Wednesday
- C. Friday D. Thursday

47. _____ was the day to wash and dry clothes.

- A. Monday B. Thursday
- C. Friday D. Wednesday

48. _____ was windy and sunny.

- A. Tuesday B. Friday
- C. Monday D. Thursday

49. Which day was sunny throughout?

- A. Friday B. Thursday
- C. Monday D. Tuesday

50. People in our traditional societies who can foretell the future are called _____

- A. Prophets B. Rainmakers
- C. Medicine men D. Pastors

51. The activity of making mats, ropes and baskets is called _____

- A. Leather work B. Iron working
- C. Weaving D. Pottery

52. Which of the following is the responsibility of children

- A. Working in factories
- B. Disobeying elders
- C. Fighting with other children
- D. Obeying and respecting their parents.

53. Children have a right to _____

- A. Steal B. Fight
- C. run away D. Education

54. The head of a country is given the title of

- A. Governor B. Chief Justice
- C. President D. King

55. Which one of the following is not a way of becoming a Kenyan?

- A. Birth B. Naturalization
- C. Registration D. Voting

56. People who were paid to carry goods are called _____

- A. Head carriers B. Morans
- C. Arabs D. Porters

57. The road sign below shows that _____



- A. Children are crossing
- B. No way
- C. Children on parade
- D. No vehicle

58. Which item is correctly matched with the industry in which it is made?

- A. Hoes - woodwork
- B. Pots - pottery
- C. Mats - iron working
- D. Sandal - weaving

59. We celebrate Mashujaa Day on _____ every year.

- A. 1st June
- B. 1st May
- C. 12th December
- D. 20th October

60. The Vice President of Kenya is _____

- A. Raila Odinga
- B. William Ruto
- C. Uhuru Kenyatta
- D. Professor George Saitoti

SECTION II - C.R.E

61. We care for plants by _____

- A. giving them water
- B. cutting them down
- C. letting animals eat them
- D. not weeding for them

62. Which of these animals do not live in the forest?

- A. lions
- B. donkeys
- C. elephants
- D. tigers

63. The bible has _____ books.

- A. two
- B. five
- C. sixty six
- D. twelve

64. The following are ways of worshipping God EXCEPT

- A. praying
- B. singing
- C. reading the bible
- D. shouting

65. King Ahab killed Naboth for his _____

- A. vineyard
- B. wife
- C. money
- D. food

66. _____ was given the ten commandments on Mt. Sinai.

- A. John
- B. Jacob
- C. Moses
- D. Israel

67. The day set aside for worshipping God is called _____

- A. Sabbath day
- B. Wedding day
- C. Christmas day
- D. Birth day

68. Doing something without fear is _____

- A. Patience
- B. Faith
- C. Courage
- D. Kindness

69. Jesus came back to life on the _____ day after death.

- A. second
- B. first
- C. seventh
- D. third

70. God wants us to _____ those who are unfair to us.

- A. beat
- B. forgive
- C. punish
- D. fight

71. Maasai called their God _____

- A. Ngai
- B. Nyasaye
- C. Enkai
- D. Mulungu

72. Christians and traditional ancestors both _____ to God.

- A. sacrificed
- B. afraid
- C. unfair
- D. unfriendly

73. Lazarus stayed in the tomb for _____ days.

- A. two
- B. four
- C. seven
- D. three

74. Jesus fed a crowd of 5000 people. The disciples collected _____ baskets full of leftovers.

- A. 1
- B. 2
- C. 6
- D. 12

75. Jesus was crucified on the _____

- A. Cross
- B. Skull
- C. Grave
- D. Cyrene

76. The holy spirit came when the disciples were waiting and _____

- A. fasting
- B. dancing
- C. singing
- D. praying

77. People arrested Jesus and took Him to a government leader called _____

- A. Pilate
- B. Pharaoh
- C. lawyer
- D. Scribe

78. _____ was put in a den of lions.

- A. Samuel
- B. Daniel
- C. David
- D. John

79. Goliath was in the army of the _____ and David in the army of Israel.

- A. Hebrews
- B. Philistines
- C. Jews
- D. Egyptians

80. Lydia heard Apostle _____ preaching the word of God, she believed in God and was baptized.

- A. Peter
- B. Paul
- C. Andrew
- D. John

81. The man who was beaten by robbers was helped by the _____

- A. Levite
- B. Disciple
- C. Samaritan
- D. Pastor

82. I thank _____ for Jesus Christ's over nature.

- A. Jesus
- B. Mary
- C. Isaac
- D. God

83. The greatest gift God gave us is _____

- A. Jesus
- B. Mary
- C. Peter
- D. Paul

84. The _____ helps us to know and obey God.

- A. God the father
- B. God the son
- C. The Holy spirit
- D. grandparents

85. Kamau received a gift from his father, he should say

- A. Forgive me
- B. Thank you
- C. I love you
- D. Good night

86. The New Testament has _____ books.

- A. 36
- B. 27
- C. 2
- D. 39

87. The time we spend preparing for Christmas is called

- A. Magnificent
- B. Advent
- C. Christmas
- D. birthday

88. God sent Jesus to _____ us from our sins.

- A. judge
- B. teach
- C. kill
- D. save

89. _____ and _____ were the disciples of Jesus.

- A. John and Joseph
- B. Thomas and Jacob
- C. Thomas and Nathaniel
- D. Andrew and David

90. _____ was raised from the death by Jesus Christ.

- A. Philip
- B. Lazarus
- C. Andrew
- D. Peter

JINA LA KO
JINA LA SHULE YAKO

NAIROBI INTERPRIVATE SCHOOLS EXAM
DARASALANNE - MWAKA 2016
KISWAHILI: LUGHA



MUDA: DAKIKA 40

Andika insha ya kuvutia juu yaa:-

“DARASA LETU”

NAIROBI INTERPRIVATE SCHOOLS EXAM



DARASA LA NNE - MWAKA 2016

Muda: Saa1 dak.40

KISWAHILI

Soma kifungu kifuatacho kisha ujaze vihasho 1 - 12 kwa usahihi

Kila mahali kulikuwa 1 giza 2 iwapokuwa mwangaza 3 taa za barabarani pekee ndio uliowaka. Kimya 4 kote katika mji wa Njenga. Ni 5 wachache tu waliokuwa macho wakizungukazunguka mitaani katika shughuli 6 za kulinda 7. Karibu 8 wote walikuwa wamelala. Ni wachache wenye 9 walioamua kutoka 10 maana kulikuwa na 11 kali sana. Hawa wachache walikuwa 12 makwao kutoka sinema au dansini.

- | | | | |
|-----------------|--------------|-------------|----------------|
| 1. A. na | B. mwa | C. la | D. cha |
| 2. A. maridadi | B. ile | C. ndogo | D. kubwa |
| 3. A. ya | B. la | C. cha | D. wa |
| 4. A. kilienea | B. kilitamba | C. kilielea | D. kilionekana |
| 5. A. nyota | B. polisi | C. wezi | D. wanyama |
| 6. A. zao | B. yao | C. zake | D. chao |
| 7. A. amani | B. usiku | C. wezi | D. hatari |
| 8. A. wageni | B. watu | C. wezi | D. motokaa |
| 9. A. nyumba | B. uhuru | C. sura | D. motokaa |
| 10. A. nje | B. ndani | C. kule | D. haraka |
| 11. A. sauti | B. giza | C. baridi | D. jua |
| 12. A. wakirudi | B. wakicheza | C. wakitoka | D. wakitembea |

Kamilisha methali hizi


13. Mtoto akililia wembe _____
A. mpe B. asipewe
C. usimpe D. hapewi
14. Haraka haraka haina _____
A. nafaka B. maana
C. baraka D. mwisho
15. Mtu asiyeweza kuona huitwa _____
A. kipofu B. kiziwi
C. bubu D. kiwete

Andika kinyume

16. Shangazi _____
A. babu B. wifii
C. binamu D. mjomba
17. Tajiri _____
A. maskini B. upweke
C. mpole D. mwerevu
18. Andika tarakimu. Eifu tatu na mia tano.
A. 3050 B. 30550
C. 3500 D. 3000500

Andika jibu sahihi

19. Miezi kumi na miwili ni sawa na _____ mmoja.
A. mwaka B. Disemba C. mwezi D. wiki
20. Daktari _____ ofisini.
A. yuko B. yumo C. hako D. yupo
21. Umbo hili huitwaje?



- A. Hilali
B. Pia
C. Mstatili
D. Mche mraba

22. Je, ni chombo gani hutumika kukunia nazi?
A. Mchi B. Uteo
C. Seredani D. Mbuji
23. Utamwitaje mtoto wa dadako?
A. Mpwa B. Umbu
C. Shangazi D. Binamu
24. Wanafunzi wazuri husikiliza walimu _____
A. wao B. wake
C. huyu D. hizo
25. Mbwa walikuwa _____ usiku.
A. wakicheka B. wakibweka
C. wakilia D. zinauuu!

Chagua wingi wa

26. Uta wangu umepotea
A. Nyuta zangu zimepotea
B. Nyuta zetu zimepotea
C. Nyuta yetu imepotea
D. Nyuta zenu zimepotea
27. Paka alikuwa _____ ya meza wakati alipoiba kipande cha nyama.
A. upanda B. kando
C. juu D. chini
28. Aliyekando haangukiwi na _____
A. mambo B. timu
C. mti D. mtama
29. Shikamoo? _____
A. Asante B. Hongera
C. Pole D. Marahaba
30. Jino _____ babu limeng'olewa.
A. ya B. la
C. kwa D. wa

Soma hadithi hii kisha ujibu maswali 31- 40:-

Maana ya ukimwi ni ukosefu wa kinga mwilini. Ukimwi ni ugonjwa unaosababishwa na virusi vinavyopunguza uwezo wa mwili wa kujikinga na maradhi. Kwa hivyo mtu akiambukizwa virusi hivi, huwa ni rahisi sana kupatwa na **maradhi** mengine. Ukimwi ni ugonjwa hatari sana kwa sababu hauchagui ni watu gani washikwe nao na hauna tiba. Mtu akishaugua ukimwi hujua tu **atakata kamba**. Ukimwi unaweza kumpata yeyote yule, awe mwanamke, mwanaume, msichana mvulana na hata mtoto wa shule. Ni muhimu kwa kila mtu kuchukua hatua za kujikinga nao.

- | | |
|---|--|
| 31. Ukimwi unasababishwa na _____
A. ngono
B. virusi
C. damu
D. sindano | 37. Jinsi gani tunaweza kuepukana na ukimwi?
A. Kutofanya mapenzi
B. Kucheza pamoja
C. Kusaidia wazazi
D. Kula pamoja |
| 32. Maana ya ukimwi ni _____
A. ukweli wa kuaminika milele
B. ukosefu wa kinga mwilini
C. ukosefu wa kiamama mmezidi
D. ukosefu wa kanga na mwili | 38. Mtoto wa shule anaweza kuwaambia watu mkutanoni kuhusu ukimwi akitumia njia gani?
A. Kutoroka shuleni
B. Kutumia dawa za kulevyo
C. Kusababisha vita
D. Mashairi |
| 33. Kwa nini ukimwi ni hatari?
A. Hauna tiba
B. Hauna ukweli
C. Mtu hukonda
D. Mtu huishi milele | 39. Kulingana na hadithi hii kila mtu ana _____ la kupambana na ukimwi.
A. wazimu
B. hongo
C. jukumu
D. dosari |
| 34. Ukimwi humshika _____
A. mzazi
B. mtakatifu
C. yeyote
D. muungwana | 40. Kichwa kizuri cha habari hii ni _____
A. Kukata kamba
B. Ukimwi
C. Watu
D. Maradhi |
| 35. Msemo "kukata kamba" una maana gani?
A. Kukonda
B. Kufa
C. Kujinyonga
D. Kuuza kamba | |
| 36. Neno maradhi ni sawa na _____
A. madaktari
B. virusi
C. mlo
D. magonjwa | |

Soma hadithi hii kisha ujibu maswali 41-50

Kengele ilipogongwa kwa minajili ya masomo ya alasiri angani kulitandazika mawingu meusi tititi ya mvua. Nao upepo mkali wenye ubaridi wa kufisha ganzi ulivuma bila huruma wala imani. Katherina alifurahi kuingia ndani ya darasa lake ambamo mlikuwa shwari, tulivu na vuvungu. Aliwaona wendani wake Josephina na Hildah wakiyafunga madirisha.

Baada ya dakika tano hivi mwalimu wao bwana Mwamburi Mwashighadi aliacha kuzungumzia mmomonyoka wa udongo. Matone mazito ya mvua yalikuwa yakipiga kwa nguvu mno paa la zege kiasi cha kwamba Katherina hakuweza angaa kuyasikia maneno aliyokuwa akiambiwa na Hildah.

Umeme ulikuwa ukimulika mara kwa mara kwa miangaza mikali kiasi cha kupofusha macho. Umeme huo uliandamana na ngurumo za kutisha radi ziliguruma kwa mlipuko ungedhani ni mabomu ya Osama Bin Laden jijini Nairobi na Darisalamu.

- | | |
|--|--|
| 41. Kengele iligongwa kwa minajili ya _____
A. masomo ya jioni
B. masomo ya alasiri
C. masomo ya mchana
D. masomo ya asubuhi | 46. Mwalimu wao alikuwa anaitwa _____
A. Katherina
B. Hilda
C. Mwamburi
D. Josephina |
| 42. Upepo ulivuma bila huruma wala _____
A. amani
B. amini
C. amana
D. imani | 47. Umeme huo uliandamana na ngurumo za _____
A. radi
B. mvua
C. sauti
D. mwalimu |
| 43. Mawingu yalikuwa _____
A. meusi
B. meupe
C. samawati
D. mekundu | 48. Bwana Mwamburi alikuwa akizungumzia _____
A. mvua
B. matone
C. dirisha
D. mmomonyoko |
| 44. Wendani waliotajwa ni _____
A. Hildah na Josephina
B. Josephina na Katherina
C. Hildah na Katherina
D. Katherina peke yake | 49. Tunasema mweusi tititi, na vilevile mweupe _____
A. tititi
B. pepepe
C. ndi
D. ti |
| 45. Wendani walikuwa wakifanya nini?
A. Wakifanya mazoezi
B. Wakifunga madirisha
C. Wakipunga upepo
D. Wakiifurahi | 50. Mlipuko ungedhani ni _____
A. mvua
B. radi
C. umeme
D. mabomu |

YOUR NAME	
NAME OF YOUR SCHOOL	

NAIROBI INTERPRIVATE SCHOOLS EXAM
STANDARD FOUR - YEAR 2016
ENGLISH : COMPOSITION



TIME: 40 MINUTES

Write an interesting composition about:-

“MY BEST FRIEND”

NAIROBI INTERPRIVATE SCHOOLS EXAM



STANDARD FOUR - YEAR 2016

ENGLISH : LANGUAGE

Time: 1 Hr 40 Minutes

Fill in the gaps with the correct word from the choices given below.

Long ago 1 was a chameleon and hare. They 2 friends and 3 in a forest. Mr.Lion was a king 4 the forest and he was staying 5 away. Only when there was a quarrel the animals would go to 6 him. One day he arranged a party at 7 house to 8 his daughters birthday. He invited 9 the animals and 10 whoever came first would get a 11. 12 hearing this the chameleon said 13 the hare I will be 14 to 15 there.

- | | | | |
|-----------------|---------------|----------------|---------------|
| 1. A. there | B. their | C. the | D. them |
| 2. A. was | B. were | C. is | D. by |
| 3. A. living | B. live | C. lived | D. liver |
| 4. A. by | B. with | C. o | D. of |
| 5. A. far | B. near | C. by | D. of |
| 6. A. saw | B. see | C. show | D. seen |
| 7. A. he | B. him | C. her | D. his |
| 8. A. celebrate | B. celebrated | C. celebrating | D. celebrator |
| 9. A. one | B. none | C. but | D. all |
| 10. A. say | B. saying | C. said | D. sayer |
| 11. A. present | B. present | C. present | D. present |
| 12. A. by | B. with | C. on | D. for |
| 13. A. to | B. by | C. on | D. for |
| 14. A. fast | B. first | C. first | D. first |
| 15. A. arrived | B. arrive | C. arrival | D. arriving |

For numbers 16 - 22 choose the correct answer:-

16. An elephant is _____ than a lion.
A. bigger B. big
C. biggest D. a big
17. Mr.Tembo bought six _____ from the market.
A. sheeps B. sheeping
C. sheep D. sheeped
18. My mother bought a _____ of soap yesterday.
A. bar B. pair
C. strip D. dozen
19. A young frog is called a _____
A. frog B. tadpole
C. frogling D. lizard
20. When the car broke down my dad took it to the _____
A. hospital B. garage
C. carpenter D. doctor
21. A place where wild animals are kept is a _____
A. zoo B. shed
C. hospital D. forest
22. A person who treats our teeth is known as _____
A. nurse B. doctor
C. dentist D. optician

Write the opposite of the underlined word

23. I bought a small doll yesterday.
A. big B. today
C. sold D. smaller

24. We came in the evening.
A. day B. yesterday
C. morning D. quickly
25. The tank is full of water.
A. empty B. dry
C. water D. half

Write the plural of the underlined word

26. The ox is sleeping.
A. oxen B. cows
C. bulls D. oxes
27. The pencil has broken.
A. pencils B. pen
C. book D. penciled
28. The woman is going to the market now.
A. man B. womans
C. women D. men

Complete the following questions

29. This is _____ elephant.
A. be B. an
C. a D. with
30. The boy is _____ now.
A. sleep B. slept
C. slept D. sleeping

Read the passage below and answer questions 31- 40

Once upon a time there was a crow called Pendo. He had not eaten for one week and he flew to town and arrived at 3 o'clock. He sat on a branch of a tree. While he was sitting on the branch he saw a man carrying cheese in his baskets. As the man came near he flew and picked the cheese. Keeping the piece in his mouth he flew back to the forest and ate the cheese happily.

- | | |
|---|--|
| <p>31. What was the name of the crow?
A. Cheese B. Fox
C. Pendo D. Not told</p> <p>32. Where was the crow living?
A. In the forest
B. In town
C. In the basket
D. In the cheese</p> <p>33. For how many days had the crow not eaten?
A. Three B. Seven
C. Two D. Four</p> <p>34. Where did the crow go to get food?
A. Town B. Forest
C. River D. Home</p> <p>35. At what time did the crow reach town? _____
o'clock
A. three B. twelve
C. two D. seven</p> | <p>36. What was the man carrying?
A. Basket B. Crow
C. A jembe D. A gun</p> <p>37. What was in the basket?
A. Eggs B. Fox
C. Cheese D. Tomatoes</p> <p>38. Who picked the cheese from the man?
A. The crow
B. The man
C. The fox
D. The hyena</p> <p>39. The opposite of the word near is _____
A. cheese B. far
C. wide D. deep</p> <p>40. The best title for the passage is _____
A. a big cheese
B. a basket
C. a hungry crow
D. a man of cheese</p> |
|---|--|

Read the story and answer questions 41-50

Hare and hyena were good friends and were living in a den. One day they went to the farmer and asked him to give them some food so that they could work for him. The farmer agreed and gave them a pot of maize. The animals made fire and cooked the maize as they worked. When the food was ready the hare went to fetch water in the river and hyena ate all the food. When the hare came back he was very sad and since that time they became enemies. They went to stay separate places. Hyena was very greedy.

- | | |
|--|--|
| <p>41. Hyena and _____ were good friends.
A. farmer
B. elephant
C. hare
D. rabbit</p> <p>42. Where were the two friends living? In _____
A. a home
B. a town
C. a den
D. a forest</p> <p>43. What did the hare and hyena ask the farmer to give them?
A. Honey
B. Food
C. Milk
D. Nothing</p> <p>44. What did they promise the farmer?
A. To beat him
B. To cook for him
C. To run away
D. To work for him</p> | <p>45. What type of food were the animals given?
A. Maize B. Beans
C. Honey D. Groundnuts</p> <p>46. The animals cooked food as they _____
A. sang B. danced
C. worked D. cried</p> <p>47. Who went to fetch water?
A. Farmer B. Hare
C. All of them D. Hyena</p> <p>48. Who ate all the food?
A. Farmer B. Hare
C. All of them D. Hyena</p> <p>49. The opposite of the word sad is _____
A. crying B. dancing
C. happy D. laughing</p> <p>50. The best title for the passage is _____
A. the greedy hyena
B. a pot of maize
C. hare fetches water
D. The three animals</p> |
|--|--|


NAIROBI INTERPRIVATE SCHOOLS EXAM

STANDARD FOUR - YEAR 2016


MATHEMATICS



Time: 2 Hours

- | | |
|--|---|
| <p>1. What is five thousand six hundred and ten in symbols?
 A. 5601 B. 5061
 C. 5610 D. 5160</p> <p>2. What is the place value of digit 8 in the number 2863?
 A. Tens B. Thousands
 C. Ones D. Hundreds</p> <p>3. Add: $489 + 253 =$ _____
 A. 742 B. 732
 C. 642 D. 752</p> <p>4. Which of these numbers is divisible by 5?
 A. 11 B. 26
 C. 8 D. 30</p> <p>5. Work out: $862 - 130 =$ _____
 A. 632 B. 712
 C. 732 D. 742</p> <p>6. Multiply: $6 \times 7 =$ _____
 A. 44 B. 42
 C. 48 D. 60</p> <p>7. One cow has four legs. Four cows will have how many legs?
 A. 24 B. 8
 C. 20 D. 16</p> | <p>8. What is the shaded fraction?
 
 A. $\frac{3}{5}$ B. $\frac{2}{5}$
 C. $\frac{1}{5}$ D. $\frac{4}{5}$</p> <p>9. Work out: $5 \overline{)45}$
 A. 8 B. 5
 C. 9 D. 6</p> <p>10. How many days are there in seven weeks?
 A. 70 B. 49
 C. 63 D. 35</p> <p>11. Work out: $4 \times 10 =$ _____
 A. 14 B. 44
 C. 62 D. 40</p> <p>12. What is $\frac{1}{2} \times 20 =$?
 A. 40 B. 10
 C. 15 D. 5</p> <p>13. What is the total value of digit 8 in the number 2845?
 A. 800
 B. 8
 C. 80
 D. 8000</p> |
|--|---|

14. What is the time?



- A. Twelve o'clock B. Nine o'clock
C. Three o'clock D. Eight o'clock

15. Which one is an even number?

- A. 15 B. 22
C. 3 D. 31

16. Work out: _____ x 5 = 60

- A. 12 B. 6
C. 55 D. 20

17. Take away: 436

$$\begin{array}{r} 436 \\ - 15 \\ \hline \end{array}$$

- A. 411 B. 420
C. 431 D. 421

18. One boy has 10 toes. Eight boys will have how many toes?

- A. 18 B. 88
C. 80 D. 78

19. Add: $\frac{1}{5} + \frac{2}{5} =$ _____

- A. $\frac{4}{5}$ B. $\frac{1}{5}$
C. $\frac{3}{10}$ D. $\frac{3}{5}$

20. Subtract: $637 - 175 =$ _____

- A. 462 B. 472
C. 142 D. 542

21. Add: 260

$$\begin{array}{r} 260 \\ + 128 \\ \hline \end{array}$$

- A. 388 B. 288
C. 368 D. 378

22. Which shape below is a triangle?



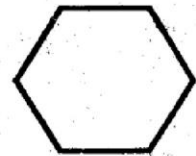
A



B



C



D

23. Work out: $\frac{6}{7} - \frac{4}{7} =$ _____

- A. $\frac{3}{7}$ B. $\frac{2}{7}$

- C. $\frac{5}{7}$ D. $\frac{1}{7}$

24. Add: $14 + 12 + 10 =$ _____

- A. 26 B. 46

- C. 36 D. 44

25. Work out: $81\text{m} + 14\text{m} =$ _____

- A. 95m

- B. 105 m

- C. 85 m

- D. 98 m

26. A cow has one tail. 25 cows will have how many tails?

- A. 26 B. 25
C. 20 D. 30

27. Add: $\frac{1}{2} + \frac{3}{4} + \frac{2}{4} =$ _____

- A. $\frac{5}{4}$ B. $\frac{4}{4}$
C. $\frac{3}{4}$ D. $\frac{6}{4}$

28. What is the next number?

5, 10, 15, _____

- A. 25 B. 22
C. 20 D. 30

29. Multiply: $5 \times 8 =$ _____

- A. 40 B. 35
C. 32 D. 48

30. Which number comes just after 1999?

- A. 2000 B. 1998
C. 10000 D. 3200

31. Which one is an odd number?

- A. 20 B. 10
C. 8 D. 11

32. Which fraction is unshaded?



- A. $\frac{4}{8}$ B. $\frac{2}{8}$
C. $\frac{5}{8}$ D. $\frac{3}{8}$

33. Moses bought a book for Sh. 25. If he paid using a Sh. 100 note, how much balance was he given back?

- A. Sh. 65 B. Sh. 25
C. Sh. 55 D. Sh. 50

34. A lorry was carrying 98 bags of maize to Ol Moran. He sold 18 bags on the way. How many bags of maize were left in the lorry?

- A. 1116 B. 80
C. 54 D. 90

35. Work out: $4 \overline{)36}$

- A. 8 B. 6
C. 7 D. 9

36. Add: Weeks Days

$$\begin{array}{r} 15 \quad 5 \\ + 12 \quad 4 \\ \hline \end{array}$$

- A. 25 wks 2 days B. 27 wks 9 days
C. 28 wks 2 days D. 25 wks 5 days

37. There are 846 packets of milk in a shop. If 82 packets are sold, how many packets remained?

- A. 1528 B. 164
C. 264 D. 1028

38. Work out: $15 + 28 =$ _____

- A. 43 B. 33
C. 45 D. 49

39. Add: $952 + 19 =$ _____

- A. 961 B. 871
C. 971 D. 907

40. Add:

Shs	Cts
72	53
+18	16

- A. Sh. 80 69 cts
- B. Sh. 90 69 cts
- C. Sh. 90 81 cts
- D. Sh. 90 48 cts

41. Work out:

$$\begin{array}{r} 878 \\ -136 \\ \hline \end{array}$$

- A. 842
- B. 756
- C. 752
- D. 742

42. Work out:

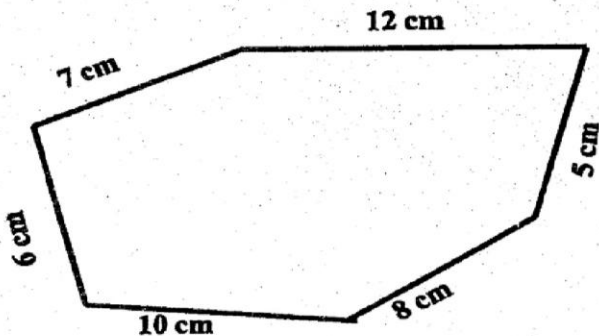
$$65 + \underline{\hspace{2cm}} = 99$$

- A. 34
- C. 44
- B. 39
- D. 26

43. Divide $7 \overline{)63}$

- A. 8
- C. 7
- B. 6
- D. 9

44. What is the distance round the figure below?



- A. 47
- C. 48
- B. 52
- D. 45

45. Work out:

$$\begin{array}{r} 298 \\ -169 \\ \hline \end{array}$$

- A. 131
- C. 192
- B. 129
- D. 139

46. Work out:

$$10 + 4 + 9 = \underline{\hspace{2cm}}$$

- A. 20
- C. 21
- B. 24
- D. 22

47. Add: $\frac{1}{6} + \frac{1}{6} = \underline{\hspace{2cm}}$

- A. $\frac{3}{6}$
- C. $\frac{2}{6}$
- B. $\frac{5}{6}$
- D. $\frac{2}{12}$

48. Subtract: $589 - 156 = \underline{\hspace{2cm}}$

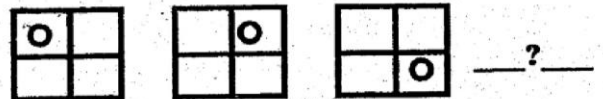
- A. 433
- C. 443
- B. 533
- D. 463

49. Add:


$$\begin{array}{r} 216 \\ 45 \\ + 9 \\ \hline \end{array}$$

- A. 269
- C. 270
- B. 260
- D. 275

50. What is the next shape in the pattern below?



- A
- C
- B
- D



NAIROBI INTERPRIVATE SCHOOLS EXAM

STANDARD FOUR - YEAR 2016

MARKING SCHEME

[4]

MATHS		ENGLISH		KISWAHILI		SCIENCE		SOCIAL STUDIES & CRE		
1. C	31. D	1. A	31. C	1. A	31. B	1. B	31. C	1. C	31. C	61. A
2. D	32. C	2. B	32. A	2. D	32. B	2. A	32. C	2. A	32. A	62. B
3. A	33. A	3. C	33. B	3. D	33. A	3. A	33. B	3. B	33. D	63. C
4. D	34. B	4. C	34. A	4. A	34. C	4. D	34. A	4. D	34. B	64. D
5. C	35. D	5. A	35. A	5. B	35. B	5. B	35. D	5. C	35. D	65. A
6. B	36. C	6. B	36. A	6. A	36. D	6. B	36. C	6. C	36. B	66. C
7. D	37. C	7. D	37. C	7. A	37. A	7. C	37. B	7. D	37. B	67. A
8. A	38. A	8. A	38. A	8. B	38. B	8. B	38. D	8. C	38. B	68. C
9. C	39. C	9. D	39. B	9. D	39. C	9. A	39. A	9. A	39. B	69. D
10. B	40. B	10. D	40. C	10. A	40. B	10. B	40. C	10. D	40. B	70. B
11. D	41. D	11. A	41. C	11. C	41. B	11. D	41. B	11. C	41. B	71. C
12. B	42. A	12. C	42. C	12. A	42. D	12. A	42. A	12. D	42. C	72. A
13. A	43. D	13. A	43. B	13. A	43. A	13. C	43. C	13. C	43. C	73. B
14. B	44. C	14. D	44. D	14. C	44. A	14. B	44. C	14. C	44. A	74. D
15. B	45. B	15. B	45. A	15. A	45. L	15. A	45. A	15. A	45. C	75. A
16. A	46. D	16. A	46. C	16. D	46. C	16. D	46. B	16. B	46. B	76. D
17. D	47. C	17. C	47. B	17. A	47. A	17. C	47. C	17. D	47. C	77. A
18. C	48. A	18. A	48. D	18. C	48. D	18. A	48. D	18. D	48. B	78. B
19. D	49. C	19. B	49. C	19. A	49. B	19. D	49. A	19. C	49. C	79. B
20. A	50. C	20. B	50. A	20. B	50. D	20. B	50. B	20. A	50. A	80. B
21. A		21. A		21. C		21. A		21. C	51. C	81. C
22. B		22. C		22. D		22. C		22. B	52. D	82. D
23. B		23. A		23. A		23. B		23. B	53. D	83. A
24. C		24. C		24. A		24. C		24. A	54. C	84. C
25. A		25. A		25. B		25. D		25. B	55. D	85. B
26. B		26. A		26. B		26. A		26. C	56. D	86. B
27. D		27. A		27. C		27. B		27. A	57. A	87. B
28. C		28. C		28. C		28. C		28. C	58. B	88. D
29. A		29. B		29. D		29. B		29. C	59. D	89. C
30. A		30. D		30. B		30. D		30. B	60. C	90. B

COMPOSITION MARKING SCHEME

MARKING CRITERIA

- The composition will be assessed according to the following guidelines.
 - The maximum mark will be 40 and the minimum mark 01
 - Does the script show that the candidate can communicate accurately fluently and imaginatively in English?
- Accuracy** (8 marks) (8 marks)
- (a) Correct tenses and agreement of verbs (4 marks) (b) Accurate use of vocabulary (4 marks)
- (16) (c) Following a sequence (4 marks) (d) Correct punctuation (4 marks)
- Fluency** (8 marks) (8 marks)
- (a) Words in the correct order (4 marks) (b) Sentence connected and paragraphs (4 marks)
- (b) Correct spelling (4 marks) (d) Ideas developed in logical sequence (4 marks)
- Imagination** (8 marks)
- (a) Unusual but appropriate use of words and phrases (4 marks)
- (b) Variety of structure (4 marks)

NB: Please, teachers are requested to scrutinize this marking scheme before use. It is worth.