

TARGETER WINGS EVALUATION TEST

STANDARD THREE - YEAR 2016

ENGLISH

003



Date:

NAME SCHOOL

Use will or shall.

1. I _____ come tomorrow.
2. _____ you draw a picture for me?
3. They _____ help them to clean the compound.
4. It _____ be well with you.
5. _____ I be allowed to sing?

Underline the odd one out.

6. Plate, spoon, cup, fork, book.
7. Sister, mother, grandmother, niece, brother.
8. yellow, blue, purple, green, flower.
9. head, flower, stem, branch, fruit.
10. blouse, picture, shirt, dress, socks

Use there is or there are

11. _____ my chair.
12. _____ our books.

13. _____ children playing.
14. _____ a cup on the table.
15. _____ boys watching football.

He _____ She

16. _____ lady
17. Grandfather _____
18. _____ sister
19. Nephew _____
20. Father _____

Write in singular.

21. berries _____
22. churches _____
23. oxen _____
24. women _____
25. Teeth _____

Present _____ Past

26. Do _____
27. _____ walked
28. Eat _____

29. write _____
30. _____ came

Choose the correct answer to fill in the gaps.

31. John and Peter _____ playing. **(is, are)**
32. Give me _____ apple. **(a, an)**
33. I have _____ sisters. **(two, too)**
34. We sit _____ a chair. **(on, in)**
35. I _____ a good handwriting. **(has, have)**

Use where, what, who or how.

36. _____ is riding the bicycle?
37. _____ is Kamau going?
38. _____ are these?
39. _____ is your family?
40. _____ is your name?

Fill in the gaps with the correct answer.

41. She looks after sick people. She is a _____. **(doctor, nurse)**

42. Where did you get _____ the bus? **(of, off)**
43. The person who collects money in a bus is a _____. **(conductor, passenger)**
44. Peter went home when it was raining. He got _____. **(dry, wet)**
45. How _____ water is in the drum? **(many, much)**

Read the story and answer the questions

Kanini was a very smart girl. She always wore a red hat. She went to visit her grandmother who lived in a village called Maua every Sunday.

46. Who was smart? _____. **(kanini, village)**
47. Kanini always wore a _____ hat. **(green, red)**
48. Grandmother lived in a _____. **(town, village)**
49. The name of the village was _____. **(Maua, Nyeri)**
50. Kanini went to visit her grandmother every _____. **(Tuesday, Sunday)**

TARGETER WINGS EVALUATION TEST

STANDARD THREE - YEAR 2016

MATHEMATICS

003

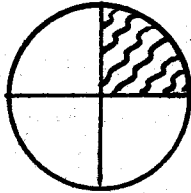


Date:

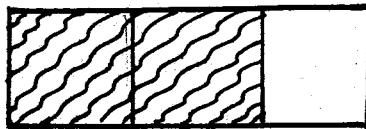
NAME SCHOOL

What fraction is shaded?

1.



2.



3.
$$\begin{array}{r} 18 \\ +24 \\ \hline \end{array}$$

4.
$$\begin{array}{r} 46 \\ -23 \\ \hline \end{array}$$

5. $\frac{1}{4}$ of 12 = _____

6. $\frac{1}{2}$ of 10 = _____

7. A half of twelve is _____

8. Write the missing number.
450, 460, _____, _____, 490.

9. Write in figures hundred and forty four _____.

10. 9678 = _____ thousands _____
hundreds _____ tens _____ ones

11. 870 = _____ thousands _____
hundreds _____ tens _____ ones.

12. $68 + 24 =$ _____

13. $18 + 79 =$ _____

14.
$$\begin{array}{r} 804 \\ +129 \\ \hline \end{array}$$

15.
$$\begin{array}{r} 9000 \\ +3178 \\ \hline \end{array}$$

16. $9 \times 8 =$

17. $2 \times 3 \times 2 =$ _____

18. $4 \times 2 \times 0 =$ _____

19.
$$\begin{array}{r} 10 \\ \times 9 \\ \hline \end{array}$$

20. Draw a clock to show 8 o'clock _____

21. A spider has 8 legs. How many legs will 6 spiders have? _____

What is the place value of digit 2 in.

22. 420 _____

23. 2905 _____

24. 200 _____

25. 7562 _____

26.
$$\begin{array}{r} 556 \\ -256 \\ \hline \end{array}$$

27.
$$\begin{array}{r} 90 \\ -32 \\ \hline \end{array}$$

$$\begin{array}{r} 28. \quad 882 \\ -463 \\ \hline \\ \hline \end{array} \qquad \begin{array}{r} 29. \quad 50 \\ -30 \\ \hline \\ \hline \end{array}$$

30. $40 \div 4 =$ _____

31. $24 \div 6 =$ _____

32. $16 \div 4 =$ _____

33. Share 18 oranges among 2 boys = _____

34. Twenty seven plus four = _____

35. Write the next number
24, 18, 12, _____

36. 5 thousands 3 hundreds 4 tens 0 ones = _____

37. 0 thousands 1 hundred 0 tens 9 ones = _____

Write in words.

38. $9006 =$ _____


39. $847 =$ _____

40. $153 =$ _____

41. $67 =$ _____

42. $18 + \square = 23$

43. Which holds more?



A.

B.

44. Arrange from the largest to the smallest 173, 189, 102, 117, 146

45. In a school there are 226 boys and 327 girls. How many pupils are there altogether?

46. $978 + 14 =$ _____

47. $100 - 70 =$ _____

48. $9 \times 2 =$ _____

49. $36 \div 9 =$ _____

50. $\square + 48 = 97$

TARGETER WINGS EVALUATION TEST


STANDARD THREE - YEAR 2016

SOCIAL STUDIES/C.R.E



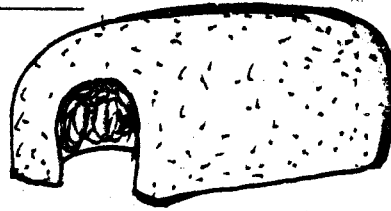
NAME SCHOOL

Date:

1. _____ is a natural physical feature.
(River, House, Bridge)
2. Food, clothes and shelter are called _____.
(secondary needs, children's needs, basic needs)
3. The person who treats sick animal is called a _____.
(nurse, veterinary, doctor)
4. The four main points of a compass are called _____ points.
(direction, cardinal, four)
5. Things that help us get wealth are called _____.
(goods, resources, items)
6. A piece of land with very many trees is called a _____.
(forest, home, habitat)
7. The black colour in our flag stands for _____.
(people, peace, blood)
8. Growing crops and keeping animals is called _____.
(herding, farming, pastoralism)
9. Father, mother and children form a _____ family.
(extended, single, nuclear)
10. Things that make up weather are called _____ of weather.
(elements, seasons, water)
11. _____ grow crops.
(Teacher, Farmer, Police)
12. Rivers that have water throughout the year are called _____ rivers.
(seasonal, forever, permanent)
13. Farmers plant during the _____ season.
(dry, rainy, hot)
14. Farmers who move with their animals from one place to another to look for grass are called _____.
(movers, nomads, pastoralists)
15. People who kill wild animals illegally are called _____.
(poachers, killers, thieves)
16. There are _____ seasons in a year. **(4, 2, 3)**
17. Children should _____ school rules. **(obey, break, ignore)**
18. I go to school for _____ days a week. **(6, 7, 5)**
19. In school we all wear _____.
(shirts, dresses, uniform)
20. We go to play in the _____.
(toilet, field, office)
21. This is _____. It grows in swamps.

(grass, reeds, rice)

22. Another name for shelter is _____
(cloth, shelter, food)

23. This is a _____



(hut, manyatta, flat)

24. During a wedding ceremony people are _____

(happy, unhappy, sad)

25. We need _____ for good health.
(school, hospital, market)

26. _____ is the head of a district.
(D.C, chief, D.O)


27. A sheep gives us _____.
(eggs, milk, wool)

Name three colours of the traffic lights.

28. _____

29. _____

30. _____



C.R.E

31. Christians worship in a _____
(church, temple, mosque)

32. _____ was the brother of Abel.

(Samuel, Cain, Isaac)

33. _____ lived with Eli in the temple
(Samuel, Hannah, Solomon)

34. _____ asked God for wisdom.

(Paul, John, Solomon)

35. Samuel was called _____ times by God.

(2, 4, 3)

36. Love your neighbour as you love _____.

(others, yourself, God)

37. _____ is the greatest commandment.
(Love, Kindness, Faith)

38. _____ built the ark.
(Moses, Noah, Abraham)

39. Jesus raised _____ from death.

(John, Philip, Lazarus)

40. _____ was the father of faith.
(Abraham, Joshua, Jacob)

41. Luo call their God _____.
(Were, Ngai, Nyasaye)

42. David killed Goliath with a stone and a _____.

(panga, arrow, sling)

43. _____ was the leader of the philistines army.

(Joshua, Goliath, Samson)

44. Prophet _____ prophesied the birth of Jesus.

(Isaiah, Jeremiah, Gabriel)

45. Jesus was born in _____.

(Jerusalem, Bethlehem, Nazareth)

46. _____ is the day set aside for worshipping God.

(Christmas, Sabbath, Easter)

47. Jesus is the son of _____
(satan, devil, God)

48. We can care for plants by _____
(cutting, burning, watering)

49. _____ was thrown in a den of lions.

(Samuel, Joseph, Daniel)

50. Jesus was born in a _____
(cot, manger, hospital)

TARGETER WINGS EVALUATION TEST

STANDARD THREE - YEAR 2016

SCIENCE

003



Date:

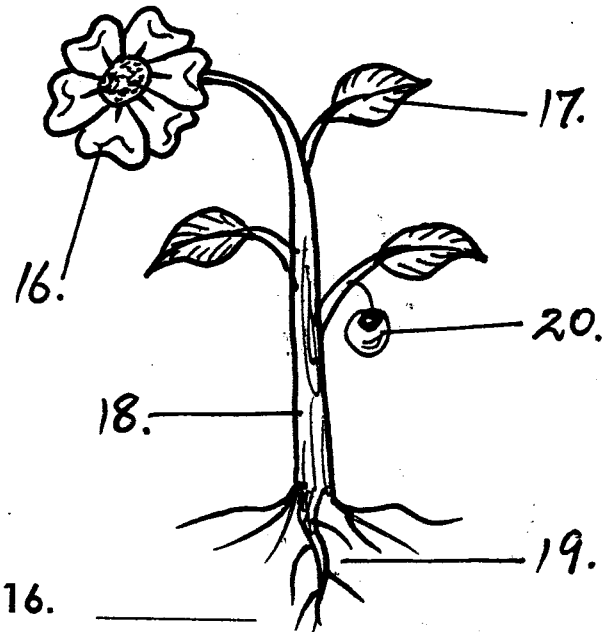
NAME SCHOOL

1. We can know colour by _____.
(touching, smelling, seeing)
2. We say something by talking and by use of _____.
(eating, gestures, sleeping)
3. _____ food can bring diseases.
(Clean, Dirty, Good)
4. _____ makes our teeth strong and healthy.
(Sweet, Milk, Charcoal)
5. Dirty latrines smell _____.
(nice, bad, good)
6. Handkerchiefs and towels should not be _____.
(washed, shared, bought)
7. _____ make our compound look beautiful.
(Papers, Tins, Flowers)
8. We throw _____ in the compost pit.
(book, food, rubbish)
9. _____ gives us light at night.
(Sun, Moon, Clouds)
10. Clouds are found in the _____.
(sky, ground, ocean)

Match the sense with its sense organ.


Sense	sense organ
11. Touch	Ear
12. taste	Eye
13. smell	Hands
14. seeing	Tongue
15. hearing	Nose

Name the parts of a plant.



16. _____
17. _____
18. _____
19. _____
20. _____
21. A cat likes to drink _____.
(milk, water, juice)
22. A cow lives in a _____.
(pen, sty, shed)
23. Long fingernails keep _____.
(dirt, oil, water)
24. We can make drinks from _____.
(coffee, banana, potatoes)
25. An aeroplane looks small when it is up in the sky. This is because it is _____.
(near, far, flying)

26. These are weather _____



(charts, drawings, symbols)

27. Sisal plant is used in making _____

(rope, chair, flowers)


28. _____ visits dirty latrines and bring germs to our food.

(Jiggers, Flies, Lice)

29. Its good to _____ hands before eating.

(clap, fold, wash)

30. This animal moves by _____



(hopping, jumping, swimming)

31. Wheels that move easily are _____ in shape.

(round, square, rectangle)

32. A snail protects itself by hiding in its _____

(house, shell, skin)

33. A spider lives in a _____

(nest, web, shed)

34. _____ cannot be eaten raw.

(Oranges, Githeri, Sweets)

35. A long period without rain is called _____

(famine, drought, flood)

36. _____ plant grows in dry areas.

(Acacia, Bean, Maize)

37. Removing unwanted plants from the farm is called _____
(seedling, watering, weeding)

38. _____ are common in rural areas.

(Toilets, Latrines, Urinals)

39. A _____ protects itself by coiling.

(wasp, caterpillar, millipede)

40. When it is cold we sit near _____

(smoke, water, fire)

41. Clean clothes make us look _____

(ugly, untidy, smart)

42. We can use a chewed _____ to brush our teeth.

(toothpaste, stick, plastic)

43. Which one of the following diseases has no cure _____

(Typhoid, HIV/AIDS, Malaria)

44. We clean our ears using _____

(earbuds, brush, match sticks)

45. You can know an angry person by looking at his _____

(hand, face, nose)

46. A _____ is a useful animal.

(mosquito, bee, lice)

47. We eat the seeds of a _____

(sugarcane, pineapple, maize)

48. We can make dirty water clean by _____ it.

(boiling, filtering, pouring)

49. Shadows are shortest at _____

(morning, evening, noon)

50. _____ is monthly weather changes.

(Symbols, Seasons, Climate)

TARGETER WINGS JARIBIO LA MTIHANI



DARASA LA TATU - MWAKA 2016

003

KISWAHILI

Tarehe:

JINA SHULE

Kamilisha methali na vitendawili

1. Kidole kimoja hakivunji_____
2. Haba na haba hujaza_____
3. Kamba ndefu lakini
haifungi kuni_____
4. Dalili ya mvua ni_____
5. Mtaka yote hukosa_____
(njia, kibaba, yote, chawa,
mawingu)

Tumia cha, la, wa, ya au za

6. Kikombe_____maziwa.
7. Tunda _____mtoto.
8. Nyama_____mbuzi.
9. Mkebe_____mafuta.
10. Kucha_____miguu.

Kamilisha sentensi hizi.

11. Baba ya baba ni_____
12. Maziwa ni ya rangi_____
13. Mzazi wa kiume ni_____
(mama, baba, babu)

14. Mtoto wa ng'ombe
huitwa_____
(kifaranga, ndama)

15. Samaki huishi_____

Chagua jibu sahihi.

16. Kusoma _____ni kwetu
(hii, huku)
17. Maji _____ni meusi.
(hizo, haya)
18. Jicho _____ni jekundu.
(hili, hiki)
19. Mapera _____ni mabichi.
(hii, haya)
20. Mtoto _____analia.
(hii, huyu)

Umoja Wingi

21. sahani _____
22. _____ karatasi
23. _____ vyumba
24. mbuzi _____
25. Ndoo _____

Ambatanisha mfanyakazi kwa kifaa chake.

Kwa mfano

mwalimu _____ chaki.

26. Mwanafunzi _____

27. Mekanika _____

28. Mkulima _____

29. Muuguzi _____

30. Mpishi _____

(Jembe, kitabu, Spana,
Dawa, Sufuria)

Andika kwa herufi kubwa au ndogo.

31. KIJIKO _____

32. MKEKA _____

33. sebule _____

34. daftari _____

35. JICHO _____

Andika kwa maneno au nambari.

36. Mia mbili thelathini _____

37. Themanini na nne _____

38. 506 _____

39. 971 _____

40. Mia moja na kumi na moja _____

Andika kwa wakati uliopita.

41. Mama anapika _____

42. Mtoto amelala _____

43. Mkulima atalima _____

44. Dereva anaendesha gari _____

45. Kalamu imepotea _____

Soma hadithi hii kisha ujibu maswali yafuatayo.

Juma ni mtoto mwenye heshima kwa wazazi na walimu wake. Yeye husoma katika shule ya msingi ya Bondeni watu wengi humpenda kwa sababu ya tabia zake nzuri.

46. _____ ni mtoto mwenye heshima.

47. Juma anasomea shule ya _____

48. Juma yuko shule ya _____
(upili, msingi)

49. _____ wengi humpenda Juma.

50. Juma ana tabia _____
(nzuri, mbaya)

TARGETER WINGS EVALUATION TEST

STANDARD THREE - YEAR 2016

READING / KUSOMA



003

Date:

NAME SCHOOL

READING

1. Read these words

- | | | | |
|--------------|--------------|--------------|-------------|
| 1. cowdug | 6. barking | 11. cupboard | 16. visits |
| 2. cough | 7. ice cream | 12. chalk | 17. project |
| 3. estate | 8. staffroom | 13. pictures | 18. reading |
| 4. repair | 9. compound | 14. feather | 19. mining |
| 5. yesterday | 10. window | 15. models | 20. allowed |

2. Read these sentences.

21. One week has seven days.
22. A doctor treats sick people.
23. The teacher likes smart pupils.
24. She has gone to the market.
25. Ticks feed on blood.

KUSOMA

1. Soma maneno haya.

- | | | | |
|-------------|------------|-------------|--------------|
| 1. Ukingo | 6. chuchu | 11. koromeo | 16. mhasibu |
| 2. wimbi | 7. ndewe | 12. suruali | 17. seremala |
| 3. winda | 8. kinywa | 13. chepeo | 18. kinyozi |
| 4. nyekundu | 9. wengu | 14. kanzu | 19. blauzi |
| 5. hilali | 10. chango | 15. kizibao | 20. nguruwe |

2. Soma sentensi hizi.

21. Redio imeharibika.
22. Alisafiri kwa kutumia tekisi.
23. Mkulima anatumia jembe kulima.
24. Mwizi alipigwa risasi akafa.
25. Mwimbaji huyu anajua kucheza kayamba.