

CROWN MERIT SERIES

STANDARD THREE TERM 1 - 2016

MATHEMATICS

003

NAME: _____

SCHOOL _____

DATE _____

What is the next number in the pattern?

1. 0, 3, 6, _____

2. 5, 7, 9, _____

3. 4, 8, _____

4. 12, 13, 14, _____

Add

5. $34 + 15 =$ _____

6. $23 + 27 =$ _____

7.	51	8.	46
	+ 38		+ 37
	_____		_____
	_____		_____

9. $18 + 12 + 10 =$ _____

10. $22 + 84 + 71 =$ _____

11.

52
75
+ 23

Subtract

12.	97	13.	32
	- 3		- 2
	_____		_____
	_____		_____

14.

40
- 5

15. $17 - 9 =$ _____

16. Subtract 41 from 80 = _____

17. What is 31 take away 13?

18. A farmer had 70 sheep. 20 of them died. How many was he left with? _____

19. Mary got 45 marks in English and 82 in Mathematics. How many marks did she get altogether? _____

20. Half of 20 = _____

Write in words or symbols

21. Four hundred and seven = _____

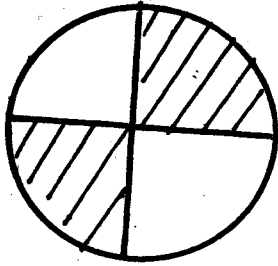
22. 201 = _____

23. 164 = _____

24. Forty nine = _____

25. Ninety nine = _____

26.



What fraction is not shaded?

27. Which is smaller?

$\frac{1}{2}$ or $\frac{1}{4}$ _____

28. $\frac{1}{3}$ of 12 = _____

29. What is twelve plus twenty two? _____

Divide

30. $16 \div 4 =$ _____

31. $4 \div 2 =$ _____

32. $3 \overline{)9}$

33. Divide 20 by 4 = _____

34. Share 12 oranges among 3 boys. _____

35. $14 \div 2 =$ _____

36. A cow has 4 legs. How many legs do 5 cows have? _____

37. 421 = _____ hundreds
_____ tens _____ ones.

38. 9 tens = _____

39. 4 tens = _____

40. What is the place value of 5 in 265? _____

Multiply

41. $5 \times 6 =$ _____

42. $2 \times 7 =$ _____

43. Multiply 10 by 4 = _____

44. $10 \times \square = 0$

45. $9 \times 3 =$ _____

46. How many days are there in 3 weeks? _____

47. weeks days

4 1

+ 3 5

48. Sh Cts

14 50

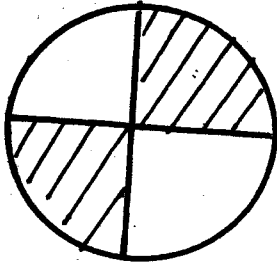
- 9 40

49. 1243

+ 3635

50. $\frac{3}{8} + \frac{1}{8} =$ _____

26.



What fraction is not shaded?

27. Which is smaller?

$\frac{1}{2}$ or $\frac{1}{4}$ _____

28. $\frac{1}{3}$ of 12 = _____

29. What is twelve plus twenty two? _____

Divide

30. $16 \div 4 =$ _____

31. $4 \div 2 =$ _____

32. $3 \overline{)9}$

33. Divide 20 by 4 = _____

34. Share 12 oranges among 3 boys. _____

35. $14 \div 2 =$ _____

36. A cow has 4 legs. How many legs do 5 cows have? _____

37. 421 = _____ hundreds
_____ tens _____ ones.

38. 9 tens = _____

39. 4 tens = _____

40. What is the place value of 5 in 265? _____

Multiply

41. $5 \times 6 =$ _____

42. $2 \times 7 =$ _____

43. Multiply 10 by 4 = _____

44. $10 \times \square = 0$

45. $9 \times 3 =$ _____

46. How many days are there in 3 weeks? _____

47. weeks days

4 1

+ 3 5

48. Sh Cts

14 50

- 9 40

49. 1243

+ 3635

50. $\frac{3}{8} + \frac{1}{8} =$ _____

CROWN MERIT SERIES

STANDARD THREE TERM 1 - 2016

ENGLISH



003

NAME: _____

SCHOOL _____

DATE _____

Dictation

1. _____
2. _____
3. _____
4. _____
5. _____

Fill in the missing letters

6. l ____ br ____ ry
7. ass ____ mbl ____
8. g ____ m ____ s
9. n ____ t ____ c ____ bo ____ rd
10. s ____ bj ____ ct

Write the words well

11. nossel _____
12. elbatmeti _____
13. esimpor _____
14. mrofinu _____
15. ptenser _____

Fill in "have" or "has" in the following

16. My teacher _____ a nice blue car.
17. I _____ a bad cold.
18. They _____ forgotten their books.

Write the opposites of the following

19. Open _____
20. Asleep _____
21. Enemy _____
22. Dull _____
23. Dry _____

Present tense

Past tense

24. Teach _____
25. Buy _____
26. Sell _____
27. Drive _____
28. Come _____

Write "to" "two" or "too" in the blanks

29. The old man is _____ tired to walk.
30. There are _____ birds in the cage.
31. Do you like _____ come with me?

Fill the blanks with "shall" or "will"

32. We _____ try again.
33. I _____ invite you to the party.
34. Mutua _____ come tomorrow.

Use "a" or "an" in the following

35. This is _____ new picture but that is _____ old picture.
36. This is _____ ox and that is _____ cow.
37. Do you want _____ apple or _____ orange.
38. Open _____ window and _____ door.

Complete the similies

39. As hot as _____
40. As happy as a _____
41. As brave as a _____

42. As cold as _____
43. As white as _____

Complete the following sentences

44. A nurse takes care of _____
45. A place where book are kept _____
46. A dog barks but a lion _____

Read the story and answer the questions

Our teacher is called Mrs Katui. She is short and thin. She keeps her hair long and neat. She is forty years old. We like her very much. She teaches standard three.

47. The teacher is called _____
48. The age of our teacher is _____ years.
49. She is _____ and _____
50. Mrs. Katui keeps her hair _____ and _____

CROWN MERIT SERIES



DARASA LA TATU MUHULA WA KWANZA - 2016

KISWAHILI

003

JINA: _____

SHULE _____

TAREHE _____

Imla

1. _____
2. _____
3. _____
4. _____
5. _____

Jaza pengo

6. s ___ b ___ le
7. m ___ jil ___ si
8. s ___ maw ___ ti
9. k ___ chinj ___ o
10. m ___ tar ___ shi

Andika vizuri

11. gudisuki _____
12. ribekiti _____
13. jbamazi _____
14. wamb _____
15. raamkain _____

Andika kwa umoja au wingi

Umoja

Wingi

16. Karatasi _____
17. _____ machungwa
18. Kochi _____
19. _____ kuta
20. Choo _____

Andika kinyume

21. Msichana _____
22. Mbele _____
23. Rafiki _____
24. Haraka _____
25. Mbali _____

(polepole, karibu, nyuma, adui, mvulana)

Tumia kiashiria "hiki" "huyu" "hili"

26. Tunda _____ ni tamu.
27. _____ ni mtoto wa shangazi yangu.
28. Kitabu _____ ni changu.

29. _____ ni mwalimu wetu.

30. Yai _____

Andika kwa herufi kubwa

31. sahani - _____

32. farasi - _____

Andika kwa herufi ndogo

33. MWALIMU - _____

34. KALAMU - _____

Andika tarakimu hizi

35. Mia tano na kumi _____

36. Mia sita sitini na tisa _____

37. 88 _____

38. 19 _____

39. 622 _____

Kamilisha sentensi hizi

40. Mwaka mmoja una miezi _____

41. Tunaenda shuleni kwa siku _____

42. Amefunua jicho jekundu _____


43. Fuata nyuki ule _____

44. Mama nibebe _____


45. Nipishe nipite _____

Andika majina ya picha hizi


46.



47.



48.



Jibu maswali haya

49. Mama wa mama yangu huitwa _____

50. Babu yako anakuita _____

(mjukuu, nyanya)

CROWN MERIT SERIES



STANDARD THREE TERM 1 - 2016

READING / KUSOMA

003

NAME: _____

SCHOOL _____

DATE _____

Read the words

- | | | | |
|-------------|--------------|-------------|---------------|
| 1. Assembly | 6. Promise | 11. Truck | 16. Calendar |
| 2. Notice | 7. Timetable | 12. Tanker | 17. Lesson |
| 3. Drawer | 8. Bandage | 13. Present | 18. Subject |
| 4. Village | 9. Whisper | 14. Labour | 19. Injection |
| 5. Basket | 10. Library | 15. Scouts | 20. Greetings |

Read the sentences

- | | |
|-----------------------------|-------------------------------------|
| 21. Mary is my best friend. | 24. His daughters are my cousins. |
| 22. The babies are crying. | 25. I always visit my grandparents. |
| 23. How old are you? | |

KUSOMA

Soma maneno

- | | | | |
|-------------|------------|--------------|---------------|
| 1. Kitunguu | 6. Sketi | 11. Nyembe | 16. Dhahabu |
| 2. Nywele | 7. Sanduku | 12. Vyoo | 17. Majilisi |
| 3. Hadithi | 8. Mnyama | 13. Alfajiri | 18. Maktaba |
| 4. Shuleni | 9. Mikuki | 14. Tarakimu | 19. Machungwa |
| 5. Duara | 10. Vyura | 15. Chumvi | 20. Kidole |

Soma sentensi hizi

- | | |
|-------------------------------|----------------------------|
| 21. Ndege alipaa angani. | 24. Umbo hili ni la duara. |
| 22. Nyembe hizi ni kali sana. | 25. Vyoo vyao ni vichafu. |
| 23. Uji huu ni moto sana. | |

CROWN MERIT SERIES

STANDARD THREE TERM 1 - 2016

SCIENCE

003

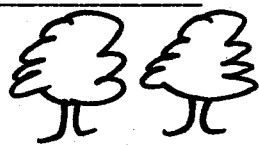



NAME: _____

SCHOOL _____


DATE _____

1. The _____ is the sense organ for sight. (eyes, ears, nose)
2. A _____ is a small animal. (elephant, buffalo, grasshopper)
3. _____ make our body healthy. (Sickness, Food, Germs)
4. A person who cannot see is _____. (deaf, blind, dumb)
5. We drink water when we are _____. (hungry, tired, thirsty)
6. Big letters are _____ to read from far than small letters. (hard, easier, difficult)
7. Our body relax when we _____. (play, exercise, sleep)
8. We are taken to _____ when we feel unwell. (teacher, doctor, classroom)
9. We make clothes from _____. (cotton, rubber, sisal)
10. The weather is _____



(rainy, sunny and calm, sunny and windy)


11. A place where a plant grow naturally is called its _____. (home, farm, habitat)
12. This is a _____ plant.



(neem, cactus, aloe vera)




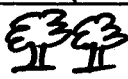




13. We get tyres from _____ (sisal, pepper, rubber)
14. We should not look at things that are _____. (near, bright, far)
15. The best soil for making ribbons is _____. (clay, loam, sand)

Name the parts of a fish

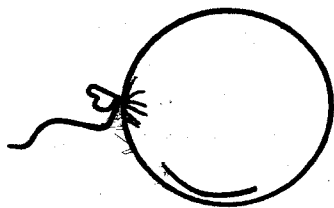


16. _____
17. _____
18. _____
19. _____
20. _____ (tail, scales, fin, eye, gills)
21. A _____ is used as a spice. (coriander, neem, barley)
22. Plants grown around a home make a _____ (gate, fence, shelter)
23. Monthly weather changes are called _____. (yearly, seasons, symbols)
24. A _____ look after domestic animals. (ranger, poacher, herdman)
25. We scrub cement floors using a _____. (mop, broom, brush)

26. _____ are movements that people make with body parts.
(**Gestures, Words, Senses**)
27. _____ protect us from sickness.
(**Water, Heat, Food**)
28. A plant grown to make medicine is _____ (castor, chillies, grapes)

Day	Morning	Afternoon
Wednesday		
Thursday		
Friday		
Saturday		


29. This is called a weather _____
(**symbol, chart, picture**)
30. It was cloudy in the morning on _____
(**Friday, Wednesday, Thursday**)
31. Pupils carried umbrellas to school on _____
(**Thursday, Wednesday, Friday**)
32. The best day to wash clothes is on _____
(**Wednesday, Saturday, Thursday**)
33. This balloon has _____



(**water, air, soil**)


34. We get water from a _____
(**mountain, river, valley**)
35. Big things look small when they are _____
(**near, far, close**)
36. A seed needs water, warmth and _____ to germinate.
(**heat, manure, air**)

37. _____ live in a hive.
(**Rabbits, Chicken, Bees**)
38. Sun, moon and stars give us _____
(**heat, light, wax**)
39. A weevil is _____
(**useful, harmful, helpful**)
40. This animal lives in a _____




(**nest, web, net**)

41. We eat the root of a _____
(**sugarcane, wheat, cassava**)
42. The body of this animal is covered with _____



(**scales, feathers, wool**)

43. A donkey help us to _____ goods.
(**ferry, pack, transport**)
44. We can separate mud from water by _____
(**boiling, filtering, frying**)
45. Rules of cleanliness is called _____
(**smartness, hygiene, bathing**)
46. Dirty _____ and hair can cause lice.
(**legs, clothes, teeth**)
47. A tick has _____ legs. (**6, 8, 4**)
48. This animal protect itself by _____



(**coiling, crawling, biting**)

49. A fish breath through _____
(**lungs, gills, scales**)
50. People with poor eye sight wear _____
(**glasses, lens, hats**)

CROWN MERIT SERIES

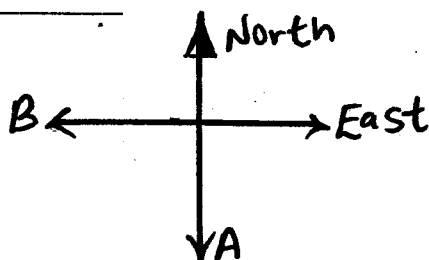


STANDARD THREE TERM 1 - 2016 SOCIAL STUDIES & C.R.E.


003

NAME: _____ SCHOOL _____ DATE _____

1. Every child has a right to _____
(education, stealing, fight)
2. Pupils I go to school with are my _____
(deskmates, schoolmates, classmates)
3. The diagram below is known as _____



- (compass, pointer, direction)
4. Many locations make a _____
(division, district, village)
5. Basic needs are food, _____ and clothing.
(shelter, church, car)
6. In _____ ceremony people are all happy.
(wedding, funeral, sleeping)
7. _____ come to visit our country and pay a lot of money to see wild animals.
(Strangers, Guests, Tourists)
8. A long period without rain is called a _____
(flood, climate, drought)
9. Draw the weather symbol




Calm

10. Reeds mainly grow near _____
(swamps, hills, plains)

11. It is the duty of _____ to take care of their children at home.
(prefects, parents, teachers)
12. People carry umbrella when it is _____
(rainy, windy, calm)
13. Hills, mountains, valleys and lakes are all _____ features.
(man-made, seasonal, physical)
14. Treating children badly is called child _____
(abuse, right, life)
15. Applying water to crops during the dry season is known as _____


Draw the following physical features

16.




Valley

17.



Hill

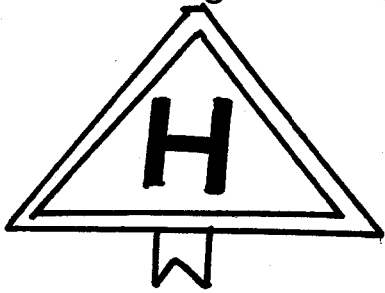
18.



Forest

19. _____ is the head of a village.
(Governor, Village elder, Chief)
20. A person whom I don't know is a _____
(teacher, stranger, parent)

21. A flat low lying land is known as a _____ (hill, river, plain)
22. Sun sets in the _____ (South, East, West)
23. People who keep animals only are called _____ (fishermen, farmers, pastoralists)
24. Another name for heroes day is _____ day. (Madaraka, Jamhuri, Mashujaa)
25. This road sign means _____



- (school, hospital, church)
26. Most people who live near lakes are _____ (miners, shopkeepers, fishermen)
27. Too much rain causes _____ (drought, heat, floods)
28. Rain, clouds, wind and sunshine are the _____ of weather. (seasons, elements, harvest)
29. The smallest administrative unit is the _____ (village, elder, district)
30. Which instrument do we use in order to know the direction from one place to another? _____ (rain gauge, thermometer, compass)

C.R.E

31. Mary and Martha were sisters of _____ (James, John, Lazarus)
32. _____ loves little children. (Adam, Jesus, Moses)
33. God created us in his own _____ (body, image, soul)

34. She was the mother of Isaac. Her name was _____ (Rebecca, Mary, Sarah)
35. God has given birds _____ to fly (fins, wings, scales)
36. David killed Goliath using a sling and a _____ (stone, wood, soil)
37. _____ prayed to God for a son. (Sarah, Peninnah, Hannah)
38. Mugo collected a ten shilling coin in the field. What is the best thing for him to do? _____ (hide in the pocket, buy sweets, give the teacher)
39. Agikuyu call their God _____ (Enkai, Ngai, Were)
40. Christians worship in _____ and Muslims worship in a _____
41. God created the sun on the _____ day. (4th, 3rd, 5th)
42. _____ was the priest when Samuel served in the church. (Elihanah, Eliazer, Eli)
43. Children must _____ their parents. (disobey, obey, abuse)
44. Sabbath day is also called _____ day. (man's, Lord's, satan's)
45. Joseph was sold by his brothers to work as a _____ (carpenter, slave, farmer)
46. Jesus had _____ disciples. (6, 12, 11)
47. We should _____ God all the time. (kill, worship, beat)
48. Samuel worshipped God by _____ in the temple. (sleeping, talking, serving)
49. Jesus raised _____ daughter. (Jairus, Nicodemus, John's)
50. Daniel was thrown into the den of lions by king _____ (David, Ahab, Darius)