

TARGETER WINGS EVALUATION TEST



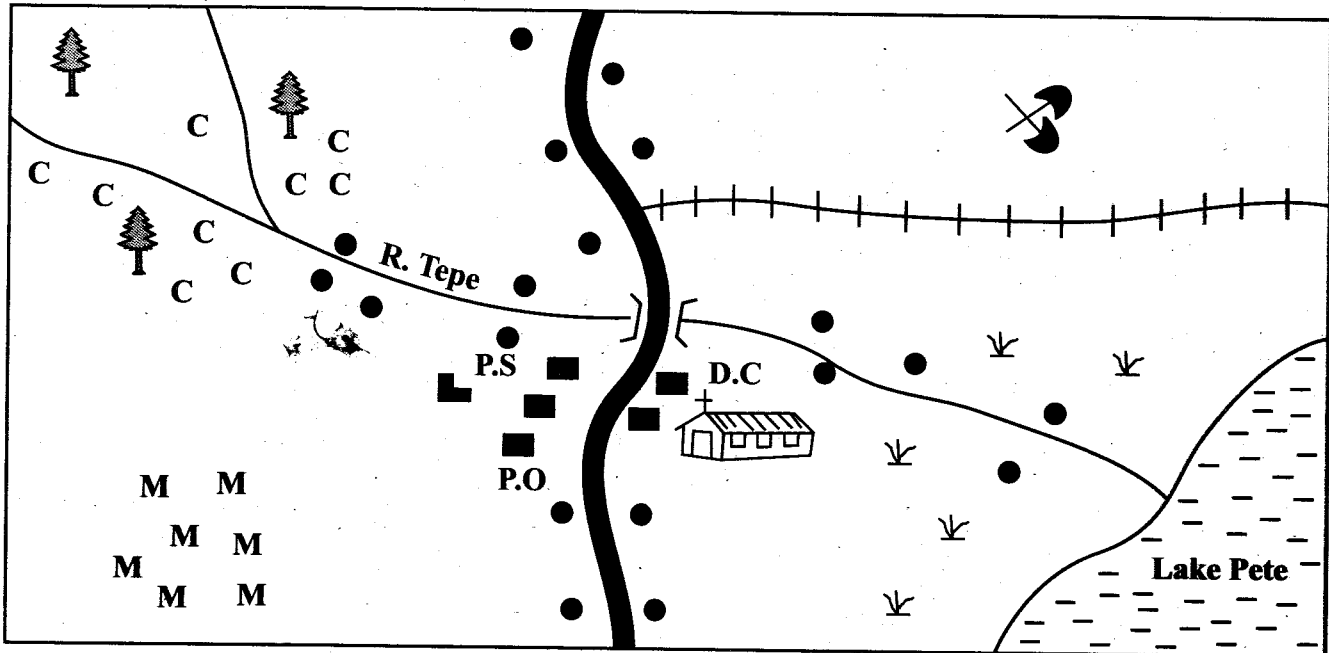
STANDARD FOUR - YEAR 2016

SOCIAL STUDIES & R.E

001

TIME: 2hrs 15 mins

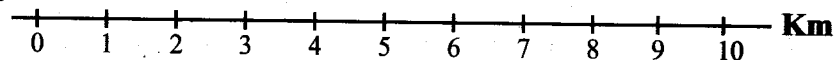
REBE AREA



KEY

School	CCC - Coffee	● ● ● Settlement	∨ ∨ Scrub
Railway line	PS - Police station	A bridge and a river	D.C - District Commissioner
MMM- Maize	Buildings	P.O - Post Office	Quarry

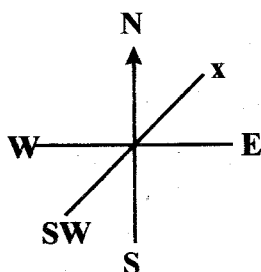
Scale



Study the map of Rebe Area above and then answer questions 1 to 7.

- Rebe area is headed by
A. D.C
B. Chief.
C. D.O
D. Governor
- _____ is a food crop grown in Rebe area.
A. Coffee
B. Tea
C. Maize
D. Pyrethrum
- The main physical feature found in Rebe area is
A. a bridge.
B. a mountain.
C. a railway.
D. a river.
- People of Rebe area are likely to be
A. Christians.
B. Muslims.
C. Pagans.
D. Buddhists.
- River Tepe ends in a
A. Forest.
B. Swamp.
C. Ocean.
D. Lake.
- When a road crosses a river we use a
A. church.
B. cattle dip.
C. bridge.
D. quarry.
- The **main** cash crop grown in the area is likely to be
A. coffee.
B. tea.
C. cotton.
D. maize.
- Which of the following is **not** a type of poultry?
C. Chicken.
B. Turkey.
C. Peacock.
D. Geese.
- Temperature is measured using an instrument called _____

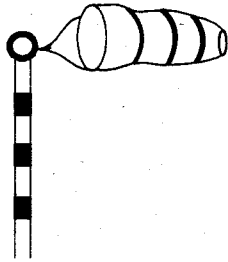
10. Rivers that dry up during the dry season are known as
 A. natural rivers.
 B. permanent rivers.
 C. man-made rivers.
 D. seasonal rivers.
11. Birds kept for meat are fed with _____
 A. layers marsh.
 B. broiler marsh.
 C. maize.
 D. left over.
12. Which of the following is a member of nuclear family
 A. sister. B. aunt.
 C. grandfather. D. grandmother.
13. People who break laws are known as
 A. bad people. B. criminals.
 C. dishonest people. D. law bide.
14. Which of the following crops is not a food crop?
 A. Rice. B. Maize.
 C. Millet. D. Coffee.
15. People who treat sick people are called _____
 A. visitors. B. tourists.
 C. doctors. D. teachers.
16. A place where things are manufactured is called _____
 A. factory. B. shop.
 C. Kenya. D. library.
17. In Kenya there are _____ counties.
 A. 40 B. 47
 C. 50 D. 45
18. People who visit game parks to see wild animals are called _____
 A. employers. B. teachers.
 C. tourists. D. visitors.
19. We celebrate Jamhuri Day on _____
 A. 1st June
 B. 12th December.
 C. 1st May.
 D. 25th December.
20. The part marked x is called _____



21. Dairy cattle are normally kept in _____ areas.
 A. hot and dry.
 B. hot and wet.
 C. wet and cool.
 D. wet and warm.

22. Which one of the following officers is in charge of a location
 A. Assistant chief. B. D.O
 C. Chief. D. Elder.
23. The head of a county is known as _____
 A. Women Representative.
 B. County Representative.
 C. Senator.
 D. Governor.
24. _____ is the smallest county in Kenya.
 A. Nairobi B. Mombasa
 C. Turkana D. Nakuru
25. Food, clothes and shelter are called _____ needs.
 A. important B. basic
 C. soil D. nice
26. Which among the following is not a natural feature.
 A. river. B. bridges.
 C. lake. D. streams.
27. Bad things done to children are called _____
 A. child right.
 B. child abuse.
 C. child beating.
 D. child punishment.
28. _____ is carrying away of top soil.
 A. Soil collection
 B. Soil erosion
 C. Soiling
 D. Raining
29. Foreigners who come to visit our country are called _____
 A. tourists. B. refugees.
 C. foreigners D. strangers.
30. The red colour in the National flag represents
 A. vegetation.
 B. peace.
 C. blood.
 D. colour of Kenyan people.
31. Which one is not an element of weather?
 A. Rainfall. B. Plains.
 C. Grassland. D. Valleys.
32. The other name for rules are _____
 A. laws. B. order.
 C. fight. D. conflicts.
33. Beef cattle are kept for _____
 A. both milk and meat. B. milk
 C. skins. D. meat.
34. The best soil for growing crops is _____
 A. loam. B. sand.
 C. clay. D. none.
35. The capital city of my country is _____
 A. Kisumu. B. Mombasa.
 C. Eldoret. D. Nairobi.
36. The head of a family is _____
 A. father.
 B. elder sister.
 C. mother.
 D. elder son.
37. The sun rises from East and set in the _____
 A. East. B. West.
 C. South. D. North.

38. The instrument drawn below is known as



- A. rain gauge. B. thermometer.
C. windsock. D. compass.

39. _____ is the head of school.

- A. Headteacher B. Chief
C. D.O D. D.E.O

40. A place where dead bodies are kept is called

- A. crematorium.
B. mortuary.
C. grace.
D. house.

41. The movement of people from one place to another is known as

- A. migration. B. transport.
C. distribution. D. population.


42. Forests provide us main with _____

- A. food. B. fruits.
C. timber. D. hiding places.

43. _____ help us to keep order at school.

- A. Bell B. Timetable
C. Rules D. Teachers

44. The road sign below shows _____



- A. a hill. B. a bump.
C. bridge ahead. D. turn left.

45. In olden days people were treated using _____

- A. herbs. B. meat.
C. medicine. D. injection.

46. Baskets are made from _____

- A. scrubs.
B. grass.
C. clay.
D. papyrus reeds.

47. Counting of people by government is called _____

- A. counting. B. voting.
C. polling. D. census.

48. The national anthem has _____ stanzas.

- A. 1 B. 4
C. 3 D. 5

49. The height above sea level is called _____

- A. longitude. B. rainfall.
C. equator. D. altitude.

50. Which of the following is not a cash crop

- A. cotton. B. sisal.
C. yam. D. pyrethrum.

51. Heavy clouds bring?

- A. floods. B. Rain.
C. Wind. D. Smoke.

52. The work of the police is to keep law and?

- A. Thieves. B. Order.
C. Arrest. D. Discipline.

53. We wear _____ clothes when it is cold.

- A. light B. heavy
C. white D. vests only

54. The following are child abuses. Which one is not?

- A. Washing utensils at home.
B. Forcing a child to eat.
C. Taking and cooking tea for teachers.
D. Washing clothes for the family.

55. _____ is a feature that is not a source of water.

- A. Lakes B. River
C. Valleys D. Dam

56. Which of these communities is a pastoralists

- A. Kikuyu. B. Kamba.
C. Maasai. D. Luo.

57. Crops that are grown for sale are called

- A. cash crops.
B. food crops.
C. irrigation.
D. subsistence crops.

58. Pyrethrum flowers are used to make?

- A. Manure. B. Insecticide.
C. Money. D. Soil.

59. Salt is used to _____ food.

- A. flavour B. sweeten
C. colour D. poison.

60. The exchange of a goat for maize was a trade called _____ trade.

- A. long distance B. barter
C. modern D. monetary

SECTION B

CHRISTIAN RELIGIOUS EDUCATION

61. The creation of the world took _____ days.

- A. 7 B. 6
C. 5 D. 14

62. Who sinned first?

- A. Eve. B. Adam.
C. Abel. D. Cain.

63. In the garden of _____ Jesus prayed to God before he was arrested.

- A. Aden
B. Jericho
C. Golgotha
D. Gethsemane

64. _____ taught the disciples the Lord's prayer.

- a. Peter B. Angel Gabriel
C. Jesus D. John the baptist

65. Jesus was born in _____

- A. Egypt. B. Bethlehem.
C. Jerusalem. D. Galilee.

66. _____ was given the ten commandments on Mt. Sinai.

- A. John B. Jacob
C. Moses D. Israel

67. Who visited Jesus at night and was told to be born again?
 A. Nicodemus. B. Judas.
 C. Barnabas. D. Paul.
68. The birth of Jesus was announced by Angel
 A. Gideon. B. Gabriel.
 C. Rucifer. D. Michael.
69. _____ was stoned to death.
 A. Stephen B. Saul
 C. David D. Job
70. God wants us to _____ those who are unfair to us.
 A. beat B. forgive
 C. punish D. fight
71. Which one of the following replaced Judas
 A. Philip. B. James.
 C. Paul. D. Mathias.
72. Maasai called their God _____
 A. Ngai.
 B. Nyasaye.
 C. Enkai.
 D. Mulungu.
73. Jacob is name changed to _____
 A. Paul.
 B. Elikanah.
 C. Israel.
 D. Joash.
74. Jesus was crucified on the _____
 A. cross.
 B. skull.
 C. grave.
 D. cyrene.
75. The mother of Samuel was _____
 A. Peninah.
 B. Hannah.
 C. Elizabeth.
 D. Naomi.
76. Abraham had a son called _____
 A. Jacob.
 B. Easu.
 C. Joseph.
 D. Isaac.
77. Jacob had 12 sons. Who was sold to Egypt?
 A. Reuben.
 B. Herod.
 C. Pilate.
 D. Joseph.
78. _____ means life without an end.
 A. Eternal life
 B. Life without love
 C. New-life
 D. Salvation
79. Who denied Jesus three times
 A. Philip.
 B. Thaddaas.
 C. Peter.
 D. Andrew.
80. Abraham was known as the father of _____
 A. honesty.
 B. Israel.
 C. jealousy.
 D. faith.
81. The disciple who Jesus loved most was _____
 A. Thomas.
 B. Judas Iscariot.
 C. Bathlomew.
 D. John.
82. Isaac had two sons Jacob and _____
 A. Andrew.
 B. Joseph.
 C. Joshua.
 D. Esau.
83. Anania and Saphira died because of _____
 A. honesty.
 B. jealousy.
 C. faith.
 D. cheating.
84. _____ led the people of Israel from Egypt.
 A. Joshua
 B. Aaron
 C. Moses
 D. Abraham
85. During Noah's time, it rained for _____
 A. 40 months.
 B. 40 nights.
 C. 40 days.
 D. 40 years.
86. Metrine received a gift from her mother, she should say
 A. forgive me.
 B. thank you.
 C. I love you.
 D. good night.
87. Goliath was a Palastine and was killed by _____
 A. AIDS. B. Saul.
 C. Paul. D. David.
88. The wife of Abraham was _____
 A. Martha.
 B. Peninah.
 C. Magdalene.
 D. Sarah.
89. God called samuel _____ times.
 A. 2 B. 4
 C. 6 D. 3
90. At Cana of Galilee Jesus _____
 A. healed a blind man.
 B. attended a party.
 C. changed water into wine.
 D. raised Lazarus to life.

TARGETER WINGS JARIBIO LA MTHANI



DARASA LA NNE - MWAKA 2016 KISWAHILI SEHEMU YA KWANZA

001

MUDA: Saa 1 dakika 40

Chagua jibu sahihi ili kujaza nafasi 1 mpaka 15.

Gulagula alikuwa mwanafunzi wa darasa 1 nne. Hakupenda masomo 2 na kuwa mtundu. Alipenda kucheza hata wakati 3 mwalimu alikuwa akifundisha. Wakati 4 mapumziko, 5 walipokuwa wameenda kucheza alibaki 6 akiiba chakula kilichobebwa na wanafunzi wengine na 7. Wanafunzi pia walilalamika kuwa vitu 8 vilikuwa vikipotea 9 darasani. 10 kuwa Gulagula alikuwa akiwaibia walipokuwa wakicheza uwanjani. Siku 11 mwalimu alimfumana akila chakula 12 Juma. Siku 13 aliona 14 na akajua kuwa siku za mwizi ni 15.

- | | | | | |
|-----|-------------|---------------|-------------|--------------|
| 1. | A. ya | B. wa | C. za | D. la |
| 2. | A. bali | B. mbali | C. kabla | D. badala |
| 3. | A. ambapo | B. ambayo | C. ambalo | D. ambazo |
| 4. | A. na | B. pa | C. wa | D. vya |
| 5. | A. mwengine | B. wengine | C. mwingine | D. nyingine |
| 6. | A. ofisini | B. uwanjani | C. nyumbani | D. darasani |
| 7. | A. kukila | B. kukula | C. kukikula | D. kulwa |
| 8. | A. zao | B. yao | C. vyao | D. lao |
| 9. | A. hilo | B. humo | C. hawa | D. hizi |
| 10. | A. Hakujua | B. Hawakujuwa | C. Hakujuwa | D. Hawakujua |
| 11. | A. moja | B. kimoja | C. mmoja | D. mumoja |
| 12. | A. vya | B. za | C. cha | D. kwa |
| 13. | A. huyo | B. hiyo | C. hizo | D. hao |
| 14. | A. haibu | B. aya | C. shoni | D. aibu |
| 15. | A. arubaini | B. thelathini | C. chache | D. nyingi |

Kutoka swali la 16 mpaka 30, chagua jibu sahihi.

16. **Kanusha:**

Huku kuna jua

- A. Huku hakujui
- B. Huku hakuna jua
- C. Huku kuna mwezi
- D. Huku hakuna mwezi

17. Chagua kiashiria katika sentensi:

Mtoto huyu wangu ni mwerevu

- A. mwerevu
- B. wangu
- C. huyu
- D. mtoto

18. Chagua sentensi iliyoandikwa katika wakati ujao.

- A. Mama anapika.
- B. Mtoto atalala.
- C. Mwalimu amefundisha.
- D. Baba aliondoka.

19. Jaza kwa kivumishi sahihi

Amenunua tunda _____.

- A. baya
- B. mbaya
- C. nzuri
- D. lekundu

20. Neno lililopigwa kistari katika sentensi ni: "Mwanamke mnene anatembea polepole"

- A. Kielezi
- B. Kitenzi
- C. Kivumishi
- D. Nomino

21. Ni nini kinyume cha 'keti'?

- A. amka
- B. simama
- C. usiketi
- D. chini

22. Bafu ni kwa kuoga; _____ ni kwa kuweka vitabu.

- A. jiko
- B. kochi
- C. sebule
- D. rafu

23. Giza linapoanza kutoweka na ndege kuanza kuimba ni wakati wa _____

- A. alfajiri
- B. aduhuri
- C. jioni
- D. alasiri

24. Sehemu hii ya mguu huitwaje?



- A. Vyanda
- B. Nguyu
- C. Wayo
- D. Kisigino

25. Ni yupi si mnyama kati ya hawa?

- A. Taa
- B. Kaa
- C. Paa
- D. Kinu

26. Babu yangu ataniitaje?

- A. Nyanya
- B. Mjukuu
- C. Kitukuu
- D. Nyanyamkuu

27. Akisami $\frac{1}{3}$ huitwa _____.

- A. nusu
- B. humusi
- C. thuluthi
- D. robo

28. Asubuhi watu huamkianaje?

- A. Umeshindaje?
- B. Umeamkaje?
- C. U hali gani?
- D. Hujambo

29. Tegua kitendawili

Hujenga nyumba kwa mate _____

- A. mchwa
- B. nyuki
- C. siafu
- D. mbu

30. Ugonjwa wa mba pia huitwa _____

- A. jipu
- B. kipindupindu
- C. choa
- D. UKIMWI

Pikipiki zimekuwa maarufu sana katika usafiri nchini Kenya. Usafiri wa pikipiki hizi uliingia nchini takribani miaka sita iliyopita. Zimesaidia sana katika usafiri hasa katika maeneo yasiyo na barabara nzuri na zisizopitika kwa magari. Sasa watu wamepata njia ya haraka ya usafiri kuliko ile ya zamani ya baiskeli au kutembea kwa miguu.

Hata hivyo pikipiki hizi zimekuwa chanzo cha ajali nyingi nchini. Hii ni kwa sababu madereva wengi wa pikipiki hizi hawajapokea mafunzo kuhusu sheria za barabarani. Wengine hukataa kutumia helmeti vichwani. Hii husababisha wengi kuangamia katika ajali kwa kupata majeraha mabaya kichwani.

Pia kuna wale wanaobeba abiria zaidi ya mmoja. Pikipiki haipaswi kubeba zaidi ya watu wawili. Abiria pia anapaswa kuvaa helmeti yake. Je, umewahi kubebwa na pikipiki? Je, ulikuwa umevalia helmeti?

31. Ni usafiri upi umekuwa maarufu nchini?
A. Wa baiskeli.
B. Wa matwara.
C. Wa matatu.
D. Wa pikipiki.
32. Pikipiki ziliingia lini nchini kwa mujibu wa kifungu?
A. 2010
B. 2013
C. 2015
D. 2008
33. Ni maeneo gani yaliyosaidika sana na usafiri wa pikipiki?
A. Yaliyo na magari mengi.
B. Yaliyo na watu wengi.
C. Yasiyo na barabara nzuri.
D. Yaliyo na barabara nzuri.
34. Usafiri wa pikipiki si wa kasi kuliko wa ____
A. miguu
B. ndege
C. wanyama
D. garimoshi
35. Ni hasara gani imesababishwa na pikipiki?
A. Ajali.
B. Nauli nafuuu.
C. Usafiri wa haraka.
D. Usafiri bora.
36. Madereva wengi wa pikipiki
A. hawajasoma
B. ni mabingwa kwa kuendesha pikipiki
C. wamefundishwa kuendesha pikipiki
D. hawajafundishwa sheria za barabarani
37. Wanaotumia pikipiki hukinga vichwa vyao kwa kuvalia _____.
A. chepeo
B. helmeti
C. kidotia
D. boshori
38. Pikipiki inapaswa kubeba abiria wangapi?
A. Mmoja.
B. Wawili.
C. Watatu.
D. Hakuna.
39. Ni usafiri gani uliotumiwa zamani za kale?
A. Kutembea kwa miguu.
B. Kutumia magari.
C. Kutumia baiskeli.
D. Kutumia pikipiki.
40. Wengi wa wanaoangamia katika ajali ya pikipiki huumia _____.
A. tumbo
B. miguu
C. kichwa
D. mikono

Soma habari ifuatayo kisha ujibu maswali 41 mpaka 50

Kim alikuwa akisomea shule ya Tusaidiane. Alikuwa mwanafunzi mwadilifu. Aliwaheshimu wakubwa kwa wadogo kwa sababu alijua kuwa heshima si... Alipopewa kazi ya ziada hakulalamika kama wanafunzi wengine. Alihakikisha kuwa ameimaliza yote na kuvipanga vitabu vyake mkobani. Wanafunzi wengine wakisahau vitabu vyao nyumbani, yeye alihakikisha amevibeba vyake. Hii ilimfanya apendwe sana na walimu wake. Alitumiwa kama mfano bora kwa wanafunzi wengine shuleni mwao.

Mwaka uliopita, alituzwa tuzo ya kuwa mwanafunzi bora zaidi katika nidhamu na pia masomoni. Mwalimu wake wa darasa la tatu alisema kuwa Kim hakupiga kelele darasani kama wanafunzi watundu. Alikuwa mpole na safi sana.

Katika mitihani yote waliyoifanya, yeye ndiye aliyeshika usukani. Aliwaomba wanafunzi wengine waziige tabia za Kim iwapo wangependa kufaulu masomoni. Je, wewe ni kama Kim?

41. Kim alikuwa akisomea shule gani?
A. Chekechea
B. Sekondari
C. Tusaidiane
D. Mashambani
42. Kulingana na taarifa hii Kim hakuwa _____
A. mtundu
B. safi
C. mwadilifu
D. mwerevu
43. Kamilisha methali, mwacha mila ni _____
A. mtume
B. mtumwa
C. mzuri
D. mwafrika
44. Ni nini kilichomfanya Kim apendwe na walimu wake?
A. Utajiri wa wazazi wake.
B. Afya yake nzuri.
C. Mavazi yake ya bei ghali.
D. Tabia zake nzuri.
45. Hivi sasa Kim yuko darasa gani?
A. Hatujaambiwa
B. La nane
C. La tatu
D. La nne
46. Kwa nini Kim alituzwa?
A. Kwa kuwa mwadilifu.
B. Kwa nidhamu na kufaulu masomoni.
C. Kwa kumaliza kazi ya ziada.
D. Kwa kutosahau vitabu nyumbani.
47. Nani alisema kuwa Kim hakupiga kelele darasani?
A. Mwalimu wa darasa.
B. Kiranja wa darasa.
C. Mwalimu mkuu.
D. Wazazi wake.
48. Kim alichukua nafasi ya ngapi katika mitihani?
A. Ya mwisho.
B. Ya pili.
C. Ya kwanza.
D. Ya tatu.
49. Ni kweli kusema kuwa Kim _____
A. hakuvisahau vitabu vyake
B. hakumaliza kazi ya ziada
C. alilalamikia kazi nyingi
D. alipiga kelele darasani
50. Kichwa kifaacho taarifa hii ni _____
A. Mwanafunzi Mzembe
B. Mwanafunzi Mwadilifu
C. Kutuzwa Zawadi
D. Kazi za Ziada

TARGETER WINGS EVALUATION TEST


STANDARD FOUR - YEAR 2016

001

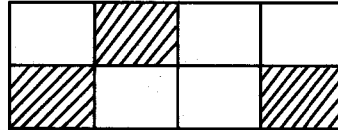


MATHEMATICS

TIME: 2 hours

- What is the place value of digit 3 in 1346?
A. Hundreds.
B. Tens.
C. Ones.
D. Thousands.
- Write 6721 in words
A. Sixty seven twenty one.
B. Six thousand and seven twenty one.
C. Six thousand seven hundred and twenty one.
D. Sixty thousand seven hundred and twenty one.
- Add $372 + 126$
A. 488
B. 498
C. 993
D. 478
- Mr Karim bought sixteen goats. Each goat gave birth to two kids, How many kids did he have altogether?
A. 18
B. 8
C. 14
D. 32
- Which is the next number in the pattern below?
2, 7, 12, _____
A. 15
B. 16
C. 17
D. 18
- The figure drawn below is called

A. Circle.
B. Square.
C. Triangle.
D. Oval.
- Mr. Hamisi had twenty oranges. He shared them equally among his four children. How much did each get?
A. 5
B. 6
C. 4
D. 7

- What is three thousand and two written in symbols?
A. 30002
B. 302
C. 3020
D. 3002
- Work out $3947 - 236 =$
A. 3771
B. 3711
C. 1711
D. 3811
- What is the fraction shaded in the figure below?



- A. $\frac{3}{5}$
B. $\frac{5}{8}$
C. $\frac{3}{8}$
D. $\frac{6}{8}$
- How many weeks are there in 28 days?
A. 7
B. 4
C. 5
D. 3
- What is the total value of digit 5 in 3521?
A. Hundreds
B. 50
C. Thousands
D. 500
- What is $127m + 42m$?
A. 547m
B. 159m
C. 169m
D. 168m
- Which of the numbers below is an even number?
A. 38
B. 43
C. 35
D. 29
- Which of the numbers below is a divisor of 32?
A. 5
B. 6
C. 12
D. 8

16. Multiply 9 by 7

A. 54

B. 63

C. 72

D. 56

17. Week Days

3 6

+ 2 3

A. 5w 9 days

B. 5w 2 days

C. 6w 2 days

D. 6w 3 days

18. What is 42 divided by 6?

A. 8

B. 7

C. 9

D. 6

19. $\frac{1}{8} + \frac{2}{8} + \frac{3}{8} =$

A. $\frac{6}{8}$

B. $\frac{6}{16}$

C. $\frac{3}{8}$

D. $\frac{5}{8}$

20. There were 236 pupils in a school. 105 were boys. How many girls were there in the school?

A. 341

B. 201

C. 131

D. 231

21. How many days are there in 5 weeks.

A. 30 days


B. 35 days

C. 42 days

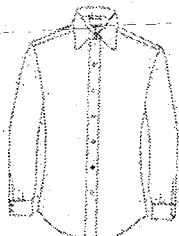
D. 28 days.

22. Jeff bought the items shown below.

Book



Sh. 105



Sh. 150



Pen

Shirt

Sh. 40

What balance did he get if he gave the shopkeeper a sh. 500 note?

A. sh. 295

B. sh. 305

C. sh. 105

D. sh. 205

23. A farmer had 526 goats and 120 cows and 36 sheep. What was the total number of animals in his farm?

A. 682

B. 666

C. 582

D. 566

24. Weeks days

8 2

- 4 6

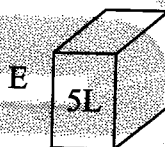
A. 4w 4d

B. 4w 3d

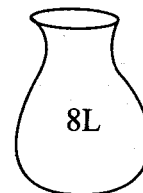
C. 3w 3d

D. 3w 4d

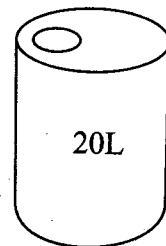
25. Which of the containers below hold less water.



F



G



A. G

B. E

C. F

D. None.

26. Mike had $\frac{3}{4}$ of a bread, he ate a $\frac{1}{4}$. What fraction was he left with?

A. 1

B. $\frac{1}{4}$

C. $\frac{1}{2}$

D. $\frac{3}{4}$

27. What is 2074 written in words.

A. Two thousand and seventy four.

B. Twenty seventy four.

C. Two hundred and fifty four.

D. Two thousand and four.

28. Divide 36 metres by 4

A. 6m

B. 12m

C. 9m

D. 11m

29. Add

Hrs	Min
3	40
+ 2	20

- A. 5hrs 60 min
- B. 6hrs
- C. 6hrs 60min
- D. 5hrs 6 min

30. Add $3229 + 6421$

- A. 9640
- B. 9650
- C. 8650
- D. 3192

31. What is the place value of digit 2 in 7521?

- A. Tens
- B. Ones.
- C. Hundreds.
- D. Thousands.

32. Moses had 5 half litres. He drank 2 half litres. How many half litres was he left with.

- A. 4 half litres
- B. 2 half litres
- C. 3 half litres
- D. 7 half litres.

33. Add

Sh	Cts
3	20
+ 2	10

- A. sh. 8 00 cts
- B. sh. 35
- C. sh. 5
- D. sh. 5 30 cts

34. Fill in the missing numbers

310, 300, 290, _____, _____

- A. 289, 288
- B. 291, 292
- C. 280, 270
- D. 300, 310

35. Multiply 6 by eight

- A. 40
- B. 56
- C. 52
- D. 48

36. Jane stayed with her grandmother for 3 days and spent 6 days with her aunt. For how many days did she stay away from home?

- A. 3 days
- B. 9 days
- C. 6 days
- D. 5 days

37. Work out

$$4200 + 361 + 12$$

- A. 4573
- B. 9010
- C. 6761
- D. 4561

38. A boy bought a plate for sh. 30 and a pen for sh. 15. How much did he pay to the shopkeeper?

- A. sh. 30
- B. sh. 20
- C. sh. 45
- D. sh. 15

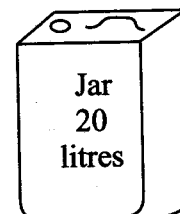
39. What is $8 \times 9 =$

- A. 64
- B. 72
- C. 63
- D. 70

40. How many weeks are there in 49 days?

- A. 6 weeks
- B. 8 weeks
- C. 7 weeks
- D. 9 weeks.


41. How many cups can fill the jar drawn below?



- A. 40
- B. 10
- C. 18
- D. 8

42. Four pupils did a test and got the following marks: Mary - 60, Jane - 52, Samuel - 58, Java - 68. Who was third?
- Samuel.
 - Java.
 - Mary.
 - Jane.

43. What is the time shown on the clock face below?



- Quarter to 11 o'clock.
- Nine o'clock.
- Quarter past 11 o'clock.
- Quarter to 12 o'clock.

44. What is $\frac{3}{4} - \frac{2}{4} =$

- 1
- $\frac{1}{4}$
- $\frac{2}{4}$
- $\frac{5}{4}$

45. What is the total value of digit 6 in 3760?

- 600
- 60
- Tens
- Ones.

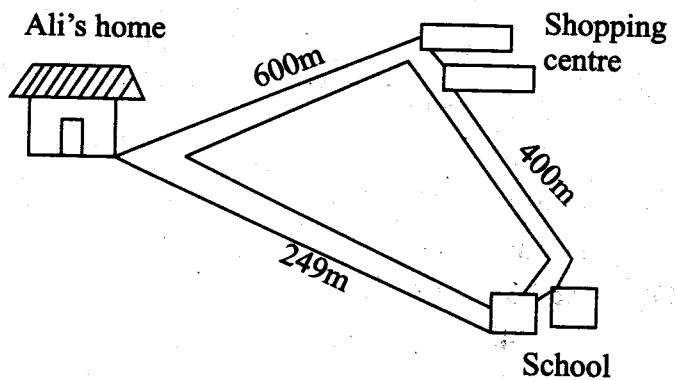
87 litres - 26 litres =

- 113 L
- 71 L
- 103 L
- 61 L

Add sh. 30 50 cts to sh. 71 60 cts

- sh. 102 10cts
- sh. 101 110 cts
- sh. 101 10 cts
- sh. 100 10 cts.

48. The figure below shows the distance from Ali's home to school.



How far is the school from Ali's home through the shopping centre?

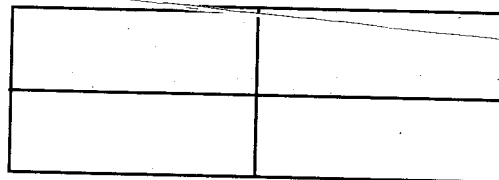
- 249m
- 849m
- 1000m
- 1249m

49.

Sh	cts
6	20
x	5

- sh. 30 100 cts
- sh. 31 00 cts
- sh. 30 00 cts
- sh. 25 00 cts

50. How many rectangles are in the figure below?



- 7
- 6
- 9
- 8

TARGETER WINGS EVALUATION TEST

STANDARD FOUR - YEAR 2016




001


SCIENCE

TIME: 1 hr 40 mins

1. The type of teeth illustrated below is known as



- A. canine
B. premolar
C. molar
D. incisor
2. Which one of the following sources of light can only give us light during the day?
- A. Moon.
B. Sun.
C. Stars.
D. Electricity.
3. Which one of the following animals protects itself by coiling?
- A. Bee.
B. Snake.
C. Chameleon.
D. Millipede.
4. The animal drawn below spends its lifetime in



- A. soil
B. air
C. water
D. mud.

5. Which one of the following types of teeth are used to cut food?

- A. Incisors.
B. Premolars.
C. Molars.
D. Canines.

6. We get sugar from which one of the following plants?

- A. Maize.
B. Sorghum.
C. Mango.
D. Sugarcane.

7. The weather shown below is _____



- A. rainy
B. cloudy
C. windy
D. calm.

8. For our body to grow strong we need one of the following. Which one?

- A. Rest.
B. Oil.
C. Water.
D. Exercise.


9. The total number of teeth that an adult has is

- A. 20 B. 16
C. 32 D. 28

10. The most appropriate soil for modelling a pot is

- A. clay soil
B. loam soil
C. sand soil
D. red soil

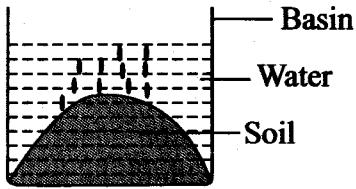
11. We wear _____ clothes when the weather is very cold
 A. light
 B. hot
 C. heavy
 D. dry
12. Which one of the following plants can be used in making a rope?
 A. Wheat.
 B. Tomatoes.
 C. Potatoes.
 D. Sisal.
13. Which of the following is **not** a good behaviour when having meals?
 A. Chewing food properly before swallowing.
 B. Chewing food with mouth open.
 C. Not talking with food in the mouth.
 D. Eating reasonable quantities of food at a time.
14. The human sense organ responsible for hearing is called
 A. ears
 B. eyes
 C. nose
 D. mouth
15. We eat the _____ of a mango plant
 A. root
 B. flower
 C. stem
 D. fruit
16. My uncle has _____ body sense organs
 A. two
 B. five
 C. four
 D. three
17. How many wheels does a wheelbarrow, which is used to transport water have?
 A. Three.
 B. Two.
 C. One.
 D. Four.
18. A crab moves by
 A. swimming
 B. hopping
 C. crawling
 D. flying.
19. A dog's shelter is called
 A. a sty
 B. a shed
 C. a kennel
 D. a hutch.
20. Unwanted crops that grow in our shamba are called
 A. weeds
 B. pests
 C. crops
 D. seedlings
21. _____ grows in dry areas.
 A. Papyrus plant
 B. Palm tree
 C. Carrot plant
 D. Acacia tree
22. Which of the following tools is used in digging?
 A. Rake.
 B. Jembe.
 C. Spade.
 D. Panga.
23. We taste food with our
 A. tongue
 B. teeth
 C. mouth
 D. eyes
24. The animal drawn below moves by



- A. hopping
 B. gliding
 C. slithering
 D. walking

25. The meat of a goat is known as
A. pork
B. beef
C. chicken
D. mutton
26. Which one of the following is a personal item?
A. Scissors.
B. Handkerchief.
C. Biopen.
D. Text books.
27. A guitar produces sound when it is
A. plucked
B. beaten
C. hit
D. blown
28. How many body parts does a true insect have?
A. Four.
B. Five.
C. Three.
D. Six.
29. An aeroplane looks small when it is up in the sky. This is because it is
A. far
B. small
C. near
D. flying.
30. We get bread from which one of the following plants?
A. Maize.
B. Cotton.
C. Wheat.
D. Coffee.
31. Food helps us to _____ when we are sick.
A. get well
B. sleep
C. grow
D. work.
32. Who among the following people treats our eyes when they have a problem?
A. Nurse.
B. Doctor.
C. Dentist.
D. Optician.
33. The wheels of a bicycle should look like a
A. square
B. circle
C. triangle
D. rectangle
34. Providing water to crops during the dry season is called
A. irrigation
B. cutting
C. weeding
D. planting
35. Which one of the following is **not** a source of water?
A. River.
B. Lake.
C. Tap.
D. Dam.
36. What is the colour of unripe banana?
A. Black.
B. Red.
C. Green.
D. Yellow.
37. Which one of the following is not a way of caring for animals?
A. Giving them food.
B. Giving them shelter.
C. Giving them water.
D. Giving them work.
38. A lorry that carries water in a big tank is called _____
A. a tractor
B. an oil tanker
C. a gas tanker
D. a water tanker.
39. The body of a fish is covered with
A. scales
B. hair
C. feathers
D. fur.

40. The picture below shows that soil has



- A. bubbles
- B. air
- C. water
- D. heat.

41. Which one of the following animals is harmful?

- A. Dog.
- B. Dove.
- C. Bat.
- D. Crocodile.

Use the weather chart below to answer questions

42 to 46.

	MON	TUE	WED	THUR	FRI
MORNING					
EVENING					

42. Friday morning the weather was

- A. sunny
- B. rainy
- C. windy
- D. cloudy

43. Clothes on a cloth line would dry fastest on which day?

- A. Tuesday.
- B. Monday.
- C. Friday.
- D. Wednesday.

44. Which day was the best for winnowing?

- A. Wednesday.
- B. Monday.
- C. Thursday.
- D. Friday.

45. People made use of umbrellas when going in their working places on

- A. Friday
- B. Tuesday
- C. Thursday
- D. Wednesday

46. In which two days was there no rainfall?

- A. Tuesday and Friday.
- B. Monday and Tuesday.
- C. Thursday and Tuesday.
- D. Wednesday and Friday.

47. From which direction does the sun rise?

- A. West.
- B. East.
- C. North.
- D. South.

48. _____ surfaces reflect light.

- A. Shiny
- B. Dull
- C. Rough
- D. Dry

49. The taste of a lemon is

- A. sour
- B. sweet
- C. tasteless
- D. bitter

50. Which one of the following animals helps us in carrying goods?

- A. Dog.
- B. Sheep.
- C. Donkey.
- D. Cow.

TARGETER WINGS EVALUATION TEST

STANDARD FOUR- YEAR 2016

001

ENGLISH

TIME: 1 hr 40 mins



Read the passage below carefully. It contains blank spaces numbered 1 to 15. For each blank space, choose the best answer from the choices given.

Once, ago, a 1 was roaming the desert land 2 Africa 3 he 4 a lion. He was very 5, 6 when he 7 that the lion had a thorn in 8 paw and was 9 pain, he helped it and they became friends.

Later soldiers 10 and arrested 11. They 12 him far 13 the sea and was 14 in a big arena to be 15 by a lion.

- | | | | | |
|-----|-------------|-------------|---------------|---------------|
| 1. | A. shepherd | B. shephard | C. shephad | D. sherpherd |
| 2. | A. in | B. at | C. off | D. of |
| 3. | A. and | B. but | C. when | D. while |
| 4. | A. meet | B. met | C. meeted | D. meant |
| 5. | A. afraid | B. fierce | C. frightened | D. worried |
| 6. | A. but | B. and | C. then | D. so |
| 7. | A. see | B. seen | C. looked | D. saw |
| 8. | A. its | B. it's | C. his | D. the |
| 9. | A. on | B. in | C. so | D. at |
| 10. | A. camed | B. come | C. came | D. disappered |
| 11. | A. them | B. her | C. it | D. him |
| 12. | A. take | B. took | C. carry | D. toke |
| 13. | A. across | B. a cross | C. above | D. beside |
| 14. | A. throwed | B. threw | C. thrown | D. putted |
| 15. | A. ate | B. taken | C. teared | D. eaten |

Choose the plural of the word given.

16. Ox
A. oxes.
B. oxen.
C. ox.
D. oxens.
17. Deer
A. Deers.
B. Deer.
C. Deeres.
D. Dear.

Choose the word that means the same as the underlined word.

18. The road is broad.
A. narrow.
B. big.
C. wide.
D. small.
19. The old man is my grandfather.
A. young.
B. weak.
C. aged.
D. grandmother.
20. Our classroom is untidy today.
A. dirtier.
B. clean.
C. tidy.
D. dirty.

For questions 21 and 22, choose the correct answer.

21. That book belongs to Ben. It is _____.
A. his. B. he's.
C. hers. D. yours.
22. The bone belongs to my dog. It is _____.
A. it's.
B. his.
C. dog's.
D. its.

Complete the following sentences correctly.

23. Dog is to bark as squirrel is _____.
A. squeal.
B. scream.
C. neigh.
D. chatter.
24. Mother is to daughter as father is to _____.
A. child.
B. sun.
C. brother.
D. son.
25. Day is to night as _____ is to asleep.
A. wake
B. woke
C. awake
D. sleepy

Identify adjectives in the sentences.

26. He is kind to everybody.
A. is. B. kind.
C. he. D. everybody.
27. She suddenly met the mad man.
A. met. B. man.
C. mad. D. suddenly.
28. We are proud of our mother.
A. proud. B. mother.
C. of. D. our.

Choose the correct alternative.

29. Jane is the _____ girl today.
A. happiest
B. happier
C. happyer
D. happy
30. My soup is _____ than yours.
A. hotter
B. hottest
C. hotter
D. hot

A boy named Bole was too lazy to wake up. One day his father decided not to give him a lift in his car and left him behind to teach him to be responsible. Bole attends Bure Bure Primary school which is twelve kilometres away from home.

When he realized that his father had left he took bus fare and left in a hurry towards the bus stop. The matatu he boarded didn't take off soon. Bole started complaining to the conductor but he shouted rudely, "shut up boy, who told you to wake up late? Get out and run to school if you are getting late.

The matatu took off but kept on stopping at every stage to pick passengers. An old man came in and stood next to Bole because there were no seats. The boy looked at the man and continued sitting. People started shouting at him to give the old man a seat but he said that he had paid. When they told him to get out of the matatu he stood up and gave the old man his seat. When he reached school the gate was closed, he knocked and the teacher opened and punished him for being late.

31. Why did Bole's father leave him behind?
A. He wanted Bole to use a matatu.
B. He was a hardworking boy.
C. Because he didn't love him.
D. He wanted him to be responsible.
32. What didn't Bole like doing in the morning?
A. Using matatu to school.
B. Waking up early.
C. Standing in the matatu.
D. Going with his father's car.
33. How far was Bole's home to school?
A. Twelve metres.
B. Twelve kilometres.
C. Not very far.
D. Ten kilometres.
34. When Bole realized that his father had left he took _____
A. his bag.
B. his breakfast.
C. his bus fare.
D. his things.
35. As used in the story 'take off' means
A. leave. B. stop.
C. come. D. wait.
36. Why did the matatu keep on stopping at every stage?
A. For people to get out.
B. For Bole to alight.
C. To delay the lazy boy.
D. To pick passengers.
37. What was Bole's reason for not giving the old man a seat?
A. He had paid.
B. He was late.
C. He was tired.
D. He had bus fare.
38. What made the boy stand for the old man?
A. The man was tired.
B. He was kind.
C. He was almost thrown out.
D. He had arrived.
39. Why was the gate closed when Bole arrived?
A. For matatus not to enter.
B. For Bole to go back.
C. It was early.
D. It was already late.
40. Suggest the best title for the story.
A. Bole in a matatu.
B. Punishment for lateness.
C. Bole learns a lesson.
D. Bole's bad day.


Read the following passage carefully and then answer questions 41 to 50.

Trees are important to both human and animal life. As we move around we see trees on our compounds, in valleys, in the forest and even on streets. In our homes trees occupy about twenty percent of our land.

Trees in our homes are planted for fruits, shade, firewood and beauty. Different trees are planted for different purposes. Different types of trees are planted in different positions because of their uses. Mostly fruit trees are planted in the garden near houses while firewood trees may be planted at the edge of the shamba far away from the house. Trees meant for beauty are planted in front of the houses.

Trees that grow in the bush on their own are of great help to birds and animals. They make a home of animals that live there throughout their life time. Birds on the other hands make their nests on these trees and feel protected from their enemies.

41. According to the passage we see trees in the following places. Which one has not been mentioned?
- A. On roads.
 - B. On people's compounds.
 - C. In forests.
 - D. In valleys.
42. About which percent of our land do we grow trees?
- A. Twelve.
 - B. Hundred.
 - C. Thirty.
 - D. Twenty.
43. According to the passage trees are planted for _____
- A. same purposes.
 - B. many purposes.
 - C. different purposes.
 - D. firewood-purpose.
44. Which one is true?
- A. Trees are grown in forests only.
 - B. Most trees are grown for shade.
 - C. Animals build homes in trees.
 - D. Trees are planted in different positions.
45. Where are fruit trees planted in many homes?
- A. On edges of shambas.
 - B. In gardens.
 - C. Along the roads.
 - D. Far away from houses.
46. _____ trees are planted in front of houses.
- A. Firewood
 - B. Beauty
 - C. Shade
 - D. Fruit
47. Trees that grow in the bush mostly help _____
- A. plants in the bush.
 - B. birds and animals.
 - C. charcoal burning.
 - D. to provide firewood.
48. How do birds protect themselves from their enemies?
- A. By building their nests on trees.
 - B. By living in the bush.
 - C. By living in the forest.
 - D. By hiding in the bush.
49. Which animals live in the forest?
- A. Tame.
 - B. Wild.
 - C. Domestic.
 - D. Bush.
50. Suggest the best title for the passage.
- A. Fruit trees.
 - B. Places where trees grow.
 - C. Importance of trees.
 - D. Uses of forest trees.



TARGETER WINGS EVALUATION TEST



STANDARD FOUR - YEAR 2016

MARKING SCHEME

001

MATHS	ENGLISH	KISWAHILI	SCIENCE	S/STUDIES/R.E			
1. A 26. C	1. A 26. B	1. D 26. B	1. A 26. B			C.R.E	I.R.E
2. C 27. A	2. D 27. C	2. B 27. C	2. B 27. A	1. A	31. C	61. B	1. C
3. B 28. C	3. C 28. A	3. A 28. B	3. D 28. C	2. C	32. A	62. A	2. A
4. D 29. B	4. B 29. A	4. C 29. A	4. C 29. D	3. D	33. D	63. A	3. C
5. C 30. B	5. C 30. C	5. B 30. C	5. A 30. C	4. A	34. A	64. C	4. B
6. D 31. A	6. A 31. D	6. D 31. D	6. D 31. A	5. D	35. D	65. B	5. A
7. A 32. C	7. D 32. B	7. A 32. A	7. B 32. D	6. C	36. A	66. C	6. B
8. D 33. D	8. A 33. B	8. C 33. C	8. D 33. B	7. A	37. B	67. A	7. A
9. B 34. C	9. B 34. C	9. B 34. B	9. C 34. A	8. C	38. C	68. B	8. B
10. C 35. D	10. C 35. A	10. D 35. A	10. A 35. C	9. B	39. A	69. A	9. A
11. B 36. B	11. D 36. D	11. A 36. D	11. C 36. C	10. D	40. B	70. B	10. C
12. D 37. A	12. B 37. A	12. C 37. B	12. D 37. D	11. B	41. A	71. D	11. B
13. C 38. C	13. A 38. C	13. B 38. A	13. B 38. D	12. A	42. C	72. C	12. D
14. A 39. B	14. C 39. D	14. D 39. A	14. A 39. A	13. B	43. A	73. C	13. B
15. D 40. C	15. D 40. B	15. A 40. C	15. D 40. B	14. D	44. B	74. A	14. C
16. B 41. B	16. B 41. A	16. B 41. C	16. B 41. D	15. C	45. A	75. B	15. A
17. C 42. A	17. B 42. D	17. C 42. A	17. C 42. A	16. A	46. D	76. D	16. B
18. B 43. D	18. C 43. C	18. B 43. B	18. A 43. C	17. B	47. D	77. D	17. C
19. A 44. B	19. C 44. D	19. A 44. D	19. C 44. D	18. C	48. C	78. A	18. A
20. C 45. B	20. D 45. B	20. A 45. D	20. A 45. B	19. B	49. D	79. C	19. B
21. B 46. D	21. A 46. B	21. B 46. B	21. D 46. D	20. D	50. C	80. D	20. B
22. D 47. A	22. D 47. B	22. D 47. A	22. B 47. B	21. C	51. B	81. D	21. A
23. A 48. C	23. A 48. A	23. A 48. C	23. A 48. A	22. C	52. B	82. D	22. C
24. C 49. B	24. D 49. B	24. D 49. A	24. C 49. D	23. D	53. B	83. D	23. B
25. B 50. C	25. C 50. C	25. D 50. B	25. D 50. C	24. B	54. B	84. C	24. D
				25. B	55. C	85. C	25. D
				26. B	56. C	86. B	26. C
				27. B	57. A	87. D	27. A
				28. B	58. E	88. D	28. A
				29. A	59. A	89. B	29. B
				30. C	60. B	90. C	30. D

COMPOSITION / INSHIA MARKING SCHEME

Marking Scheme Criterion

- The composition will be assessed according to the following general guidelines
- The maximum mark will be 40 and minimum mark 01
- The script show that the candidate can communicate accurately, fluently and imaginatively in English

Accuracy

- (a) Correct tense and agreement of verbs
- (b). Accurate use of vocabulary

- (c) Correct spelling
- (d). Correct punctuation

Fluency

- (a) Work in the correct order
- (b) Sentences connected and paragraphs

- (c) Correct spellings
- (d). Ideas developed in logic sequence

Imagination (3 mks)

- (a). Unusual but appropriate use of words and phrases (4 mks)
- (b). Variety of structure (4mks)

N.B: Please, teachers are requested to scrutinize this marking scheme before use. It is worth