

**Chagua jibu sahihi la kujaza nafasi 1-15**

Umaskini \_\_\_\_\_ 1 \_\_\_\_\_ changamoto kubwa zaidi ambayo husukuma na kusababisha \_\_\_\_\_ 2 \_\_\_\_\_ kwa banati ambao baadhi yao huwa katika shule za msingi. Mila \_\_\_\_\_ 3 \_\_\_\_\_ kwa upande mwingine zingali zinalemaza juhudi kabambe za serikali kuhusiana na suala \_\_\_\_\_ 4 \_\_\_\_\_ \_\_\_\_\_ 5 \_\_\_\_\_ hujipata katika hali ngumu \_\_\_\_\_ 6 \_\_\_\_\_ baadhi ya viongozi wa jamii husika huunga mkono nyendo \_\_\_\_\_ 7 \_\_\_\_\_ za kuwafanya watoto kuuziwa majibaba \_\_\_\_\_ 8 \_\_\_\_\_ mali. Je, \_\_\_\_\_ 9 \_\_\_\_\_ ?

<b>A</b>	<b>B</b>	<b>C</b>	<b>D</b>
1. ndiyo	ndio	ndilo	ndizo
2. kuozwa	kuchumbia	kuoleshwa	kuoana
3. baya	ushenzi	aibu	potovu
4. hili	lilivyo	haya	hii
5. Wanaharakati	Wahamasishaji	Wanamazingira	Wachunguzaji
6. pasi na	ijapo	mathalan	madhali
7. zinazostahili	zisizofaa	inayofaa	isiyostahili
8. yenye	zenye	wenye	mwenye
9. haya si maisha	huu ni ungwana	huu si ubinafsi	hii si mikosi

\_\_\_\_\_ 10 \_\_\_\_\_ inayosema kufaana kama \_\_\_\_\_ 11 \_\_\_\_\_ ni muhimu sana. Mfano ni \_\_\_\_\_ 12 \_\_\_\_\_ ambayo husaidia kuitakasa ngeu kwa kuondoa uchafu. \_\_\_\_\_ 13 \_\_\_\_\_, zipo fani nyinginezo kama vile \_\_\_\_\_ 14 \_\_\_\_\_ ambayo ni takriri, \_\_\_\_\_ 15 \_\_\_\_\_, ni maana kuwa anayeweza kukutendea mawi ni anayekujua vyema.

10. tashdidi	tanakani	tashbihi	isitiara
11. sahani na kawa	kiko na moshi	viungo vya mwili	kaburi la baniani
12. nswi	kibofu	kidari	figo
13. ingawa	aidha	kaifa	ijapokuwa
14. hapiki hapakui	yeye ni ngiri	lewa leuleu	piga mbweu
15. A. asiyekujua hakudhamini			
B. fimbo ya mbali haifungi kuni			
C. ndugu si jirani			
D. kikulacho ki nguoni mwako			

**Kutoka swali la 16-30, chagua jibu kulingana na maagizo**

- |  |  |
|--|--|
| <p>16. Ni orodha ipi iliyo na nomino dhahania pekee</p> <p>A. Maji, madhara, mazingira, maridhiano</p> <p>B. Meza, pete, nchi, Tarakilishi</p> <p>C. Wema, uchungu, mapenzi, ukali,</p> <p>D. Batamzinga, pakashume, bibiarusi, kirukanjia</p> <p>17. Chagua wingi wa:</p> <p>Ulezi aliopata ulimwezesha kufaulu maishani</p> <p>A. Malezi waliopata iliwawezesha kufaulu maishani</p> <p>B. Ulezi waliopata uliwawezesha kufaulu maishani</p> | <p>C. Malezi waliopata yaliwawezesha kufaulu maishani</p> <p>D. Ulezi waliopata uliwawezesha maishani</p> <p>18. Chagua sentensi iliyo sahihi kisarufi</p> <p>A. Alinitazama kwa macho yaliyojaa hasira</p> <p>B. Wanafunzi waliingia kwa darasa wakatulia</p> <p>C. Habari kutoka kwa rununga zinatutia wasiwasi</p> <p>D. Kwa mujibu ya gazeti la Taifa leo tumeshinda</p> <p>19. Ni kifaa kipi cha ufundi kimelinganishwa na kazi yake barabara?</p> <p>A. Timazi – kupima urefu wa ukuta</p> |
|--|--|

- B. Nyundombao – kugongomelea misumari  
 C. Fuawe – kufungia parafujo  
 D. Patasi – kutoboa matundu
20. Msemo 'piga ramli' una maana \_\_\_\_\_  
 A. Pigana na adui  
 B. Tazamiwa na mganga  
 C. Kuuza vitu rejareja  
 D. Maliza shughuli fulani
21. Kanusha sentensi:  
 Ukweli wa mambo ni kwamba wameridhika  
 A. Uongo wa mambo si kwamba wameridhika  
 B. Ukweli wa mambo ni kwamba hawajaridhika  
 C. Si kweli kwamba wao hawajaridhika  
 D. Ukweli wa mambo si kwamba hawajaridhika
22. Neno 'wakereketwa lina silabi?  
 A. Sita  
 B. Tano  
 C. Saba  
 D. Kumi na moja
23. Geuza katika kauli halisi:  
 Mzazi alimkanya mwanawe aache kuandamana na vijana watukutu  
 A. "usiandamane na vijana watukutu," mzazi alimkanya mwanawe  
 B. "unaandamana na vijana watukutu," mzazi alimwambia mwanawe  
 C. "usiwahi andamana na vijana watukutu," mzazi alimwonya mwanawe  
 D. "wacha kuandamana na vijana watukutu," mzazi alimkanya mwanawe
24. Chagua neno lililolinganishwa na ngeli yake vilivyo  
 A. Mbuzi – I-ZI  
 B. Mifugo – YA-YA  
 C. Magonjwa – U-YA  
 D. Malighafi – YA-YA
25. Bainisha aina ya kiwakilishi kilichotumiwa katika sentensi  
 Huyu ndiye alitumiwa na mgeni wangu kumbebea mkoba  
 A. Kiwakilishi kionyeshi  
 B. Kiwakilishi cha sifa  
 C. Kiwakilishi kimilikishi  
 D. Kiwakilishi cha idadi
26. Tegua kitendawili kifuatacho  
 Viziwi wawili wanakokotana  
 A. Usiku na mchana  
 B. Wachezaji wa jugwe  
 C. Jahazi na tanga  
 D. Mume na mke
27. Sakafu ya nyumba ya juu huitwa \_\_\_\_\_  
 A. paa  
 B. mabati  
 C. ghorofa  
 D. dari
28. Maskini! Mtoto wa watu atasaidiwa na nani? Neno lililopigiwa mstari ni \_\_\_\_\_ na hutumiwa kuonyesha hisia za \_\_\_\_\_  
 A. Kihusishi/ wasiwasi  
 B. Kiingizi/ woga  
 C. Kiigizi/ huzuni  
 D. Kihisishi/ huruma
29. Kipande cha tatu katika mshororo wa shairi huitwa \_\_\_\_\_  
 A. mwandamizi  
 B. mleo  
 C. utao  
 D. kipokeo
30. Teua sentensi iliyo na matumizi ya karibu ya makisio.  
 A. Wenyeji wa pwani walitukaribisha kwao.  
 B. Mwanafunzi alizoa karibu alama mia nne.  
 C. Nyumba ile ilikua karibu kuangukiwa na mti.  
 D. Kwenu na kwao ni karibu kama pua na mdomo.

**Soma ufahamu ufuatao kisha ujibu swali la 31 – 40**

Utovu wa nidhamu na mienendo bulibuli ni mojawapo ya changamoto kuu katika jamii yetu. Hali hii imekithiri na kupita mipaka miezi ya hivi punde. Habari zilizogonga vichwa vya magazeti na taarifa za idhaa za redio na runinga ni za kuatua na kuvunja mioyo.

Asili ya visa na mikasa hii ni nini hasa? Ni mpaka lini tutaipakata mikono, kufumba macho na hata kuyatia masikio yetu komango kuhusu matukio haya ya kishenzi? **Jahazi letu la ujamaa linayumbishwa** na tufani kali la tabia benibeni. Msingi thabiti wa malezi aali ya kijamii unatishwa na u karibu kuangamizwa na nduli huyu. Misukosuko katika aila inatishia kuvunja familia huku ikibainika bayana kuwa wanandoa hawaaminiani wala kuthaminiana. Wengi huelekezana vidole vya lawana huku wakitaja kuwepo kwa mmojawapo kuwa na jicho la nje.

Isitoshe, fedha zimekuwa kizingiti badala ya kuboresha maisha katika familia. Zao la udhia huu limekuwa ni talaka na hata mauaji ya kikatili yanayowaacha wengi midomo achama.

Mwana hufuata kisogo cha nina au sivyo? Ya nini basi tushangae tunaposhuhudia matendo mawi ya wanafunzi shuleni na vyuoni? Uteketezaji wa mabweni katika shule za upili na uharibu wa mali ya watu binafsi wanafunzi wanaposhiriki katika migomo ndiyo taswira halisi tunayokumbana nayo kila uchao. Uozo huu wa jamii sharti utafutiwe tiba kamili kabla ya chombo kwenda mrama.

Teknolojia kwa upande mwingine imetoa mchango wake katika kutoa mafunzo yasiyofaa kwa kizazi cha sasa. Vijulanga wengi wameyakumbatia mageni haya kana kwamba ni injili takatifu. Hali hii ya bendera kufuata upepo imesababisha mtafaruku na ukosefu wa muamala katika jamii.

Samaki mmoja akioza na mtungo pia. Ni vyema tukiwaeleza vijana wetu kwa kuonyesha mfano mwema. Maisha ya halafu yatajengeka vyema ikiwa sote tutakuwa waadilifu chombo huongozwa na dira. Mimi na wewe hatuna budi kuwa kielelezo mwafaka ili kesho yetu isipate kiza cha kaniki.

31. Chagua maelezo yasiyo sawa kulingana na aya ya kwanza  
A. Tabia mbi zimeongezeka maradufu  
B. Mwandishi anakumbwa na masikitiko  
C. Visa vyenye vitendo benibeni vimekithiri  
D. Waja wachache hawana nidhamu bora
32. Ni kundi gani limeathirika zaidi na utovu wa nidhamu?  
A. Vijana  
B. Wanaoishi mijini  
C. Watu wote  
D. Wazee
33. Katika aila kulingana na taarifa hii ni kweli kusema kuwa:  
A. Wanandoa hawatalikiani na wanauana  
B. Baadhi ya wahusika si wastahiki na hawaaminiani  
C. Ndoa zote zinavunjika na hali iliyopo  
D. Mahaba yanazidishwa na hali iliyopo
34. Katika aya ya pili, tunaarifiwa kuwa jahazi letu la ujamaa linayumbishwa maana kuwa:  
A. Upo mtafaruku katika jamaa na hata jamii  
B. Jahazi linayumbishwa na mawimbi baharini  
C. Watu wote ni wadanganyifu katika ndoa zao  
D. Wazazi hawachukui majukumu yao ipasavyo
35. Mwandishi wa makala hasa halaumu;  
A. Wazazi  
B. Jamii  
C. Vijana  
D. Teknolojia
36. Methali nazi mbovu harabu ya nzima inajitokeza dhahiri shahiri katika aya ya  
A. 40  
B. 6  
C. 50  
D. 3

37. Kulingana na aya ya nne, ni bayana mwana hufuata kisogo cha nina mandhali:
- Tabia za wazazi hulandana na za wana
  - Wazazi ndio huwa vielelezo kwa wana
  - Mtoto huiga nyendo za mzazi wake
  - Mienendo ya mzazi na mwana hufanana
38. Asili ya visa na mikasa iliyotajwa hasa ni
- Kubezwa kwa nidhamu bora
  - Kutojali kwa wazazi wa wazawa
  - Kuimarika kwa nyendo za wazazi
  - Mmomonyoko wa maandili

39. Katika aya ya tano neno muamala limetumiwa. Maana yake kimatumizi ni:
- Hali ya uelewano baina ya watu
  - Tendo la kuaminika na kutimiza ahadi
  - Msaada unaotolewa ili kuwafaidi watu
  - Uzuaji wa vurugu miongoni mwa jamii
40. Mtazamo wa mwandishi wa makala haya si:
- Jamii imezembea dhima yake
  - Wazazi na walezi hawajawajibika
  - Banati hawajahasirika kama ghulamu
  - Mitambo ya kiteknolojia ina madhara

**Soma taarifa ifuatayo kisha ujibu swali la 41 – 5**

Kila mmoja wetu alikuwa na hamu kuu ya kufika mjini bila kumaizi kilichotusubiri. Kitu cha kwanza kilichotulaki ilikuwa ni mvua iliyonyesha bila kupusa. Mimi na wandani wangu wawili tulikuwa tumekata shauri kukigura kitongoji chetu kidogo, Tulia na kupiga kambi jijini Angaza.

Tulishawishika kuwa elimu kichele tuliyopata ingetufaa kwa hali na mali. Tuliishikilia kikiki mikoba yetu ili kuhakikisha kuwa faranga chache tulizokuwa nazo za kujikimu zilikuwa zingali ndani. Waama, lisilo budi hutendwa. Ilitubidi kutafuta mahali pa kujibari mvua iliyozidisha makeke yake. Nani asiyejua mbwa hafi maji aonapo ufukwe?

Japo tulikuwa tumelowa rovurovu tulijibanza kwenye uchochoro. Tukiwa pale huku nikitetema kwa kibaridi kilichopenya mwilini, nilianza kuvuta taswira jinsi mambo yalivyokuwa kule kariani.

Wanakitongoji wenzetu walikuwa adinasi wenye utu. Usingekosa kumpata mtu wa kukuauni ingawaje uchochole uliwagandamiza na kuwavunja wengi moyo. Kumbe umoja na utangamano wa wakata unaweza kumithilishwa na mti mkavu ama niseme tasu usioangua matunda wala kupukutisha majani! Badala ya uzee kuula ujana, waliokula chumvi si haba walizitegemea nguvukazi za barobaro angalau wapate cha kutia tumboni. Hili ndilo lilitupelekea kuhamia jijini kwa nia na azma ya kutafuta gange.

Kelele za vijana waliovalia mademu ndizo zilizindua kutoka katika fikra zilizonirejesha manzilini. Mungu wangu! Walipita pale marika zetu waliovalia nusu uchi. Si kwa kutaka bali kukosa lahaua la kwata! Kumbe tulitoka kufiwako na kujitoma kuliwako nyama mbichi? Ombaomba wale walitunyoshea mikono eti tuwasaidie. Nilitaka kucheka nikalia badala yake. Kibindoni nilikuwa na sarafu chache. Shufaka zilinighubika nikajipata na uwezo kuliko wao.

Haya yakijiri, majanadume yenye mataluma manne yalijisukumisha hadi tulipokuwa. Nia yao haikuwa bayana awali awali. Pindi tu walipotufikia, tulijipata chini huku mikoba yetu ikiwa haki yao. Audhubilahi! "huu ni mji mkuu ama pango la afriti waliotokwa na utu?" nilijisaili. Kilio chetu kilikuwa bure baktata.

**The passage below contains blank spaces numbered 1 – 15. For each blank space, choose the BEST alternative from the choices provided.**

Before \_\_\_\_\_ 1 \_\_\_\_\_ the other animals \_\_\_\_\_ 2 \_\_\_\_\_ to arrive and make themselves \_\_\_\_\_ 3 \_\_\_\_\_ in their different fashions. First came three dogs, Blue Belt, Jessie and Pinches, and then the pigs who \_\_\_\_\_ 4 \_\_\_\_\_ down in the straw immediately \_\_\_\_\_ 5 \_\_\_\_\_ of the platform. The hens \_\_\_\_\_ 6 \_\_\_\_\_ themselves on the window sills, the pigeon filtered \_\_\_\_\_ 7 \_\_\_\_\_ the rafter, the sheep and cows \_\_\_\_\_ 8 \_\_\_\_\_ down behind the pigs and began to chew cud. The two cart horses, Boxer and Clover came \_\_\_\_\_ 9 \_\_\_\_\_ together, walking very slowly and settling down \_\_\_\_\_ 10 \_\_\_\_\_ vast hoofs with great care \_\_\_\_\_ 11 \_\_\_\_\_ there should be some small animals \_\_\_\_\_ 12 \_\_\_\_\_ in the straw. Clover was stout, motherly and approaching middle life, \_\_\_\_\_ 13 \_\_\_\_\_ had never quite \_\_\_\_\_ 14 \_\_\_\_\_ her figure back after her fourth \_\_\_\_\_ 15 \_\_\_\_\_.

A	B	C	D
1. there	wrong	their	long
2. begun	begin	began	begins
3. straight	comfortable	forward	serious
4. settled	went	brought	bought
5. in front	infront	incase	in case
6. jumped	flew	stays	perched
7. over	across	off	up
8. lay	lied	lie	lain
9. over	offer	along	after
10. there	their	they	them
11. rest	lest	of	off
12. concealed	contained	complained	concluded
13. whose	whom	where	who
14. took	take	get	got
15. child	kid	calf	foal

**In questions 16 to 18, complete the sentence with the BEST choices.**

16. It is common to find an exception \_\_\_\_\_ almost every rule.  
A. in    B. to  
C. from    D. about
17. If you read the description of that animal you will find several differences \_\_\_\_\_ what you see in this photograph.  
A. with    B. from  
C. between                                      D. to
18. The peacemakers were seeking a compromise \_\_\_\_\_ the two conflicting rivals.  
A. among                                        B. between  
C. of    D. to

**For question 19 to 21, choose the sentence that mean the same as the underlined sentence.**

19. If I were you, I should have that cut on your finger treated.

- A. Why haven't you had your cut finger treated as I would have done in your place
- B. I think you got to ask someone to treat your cut finger
- C. If I had my finger cut like you I should be treated
- D. Why not ask someone to treat your cut finger as I do?
20. Akiru said, "My brother isn't well today."
- A. Akiru described he brother to be ill that day.
- B. My brother is ill today. Akiru told us.
- C. Akiru said that his brother was ill that day.
- D. Akiru said that her brother was ill today.
21. The pool was so muddy that we couldn't see the bottom.
- A. The pool was very muddy for us to be able to see the bottom.

- B. It was such muddy pool that the bottom couldn't be seen.
- C. The pool was far too much muddy to see the bottom.
- D. We were unable to see the bottom of the pool because there was so much mud.

**For questions 22 and 23, use words that are mixed to make correct sentences and then answer the questions.**

22. Write Nyaliki this can than better  
The fourth word is?
- A. this
  - B. better
  - C. write
  - D. can
23. himself a Khamari sharp cutlass cut with  
The fifth word is?

- A. with
- B. a
- C. sharp
- D. cutlass

**In questions 24 and 25, choose the sentence that is correctly punctuated.**

24. A. What a beautiful suit you have!  
B. What a beautiful suit you have?  
C. What a beautiful suit you have.  
D. What a beautiful suit You have?
25. A. Oh dear "he shouted" what do I do now?  
B. "Oh! dear" he shouted." What do I do now?"  
C. "Oh dear he shouted." What do I do now?  
D. "Oh dear!" he shouted. "What do I do now?"

**Read the passage below and answer questions 26 - 38**

Getting a good rest results into better health. Sleep and heath are closely connected. Cells come to life during the sleep cycle and if the body is not fully relaxed, these cells will not be efficiently replaced. This causes a person to feel tired and during the day they will feel as though they never had enough sleep. Therefore a good bed is the gateway to good sleep. A good bed is one that offers the correct support, comfort and healthy space to sleep in. It should be fitted with a good mattress that is neither hard nor too soft and easily yields to the natural contours of the body. A good mattress enables one to have good sleep which is equally important for improved health. Timely replacement of mattress leads to positive results on sleep and overall quality of life.

It is also necessary that a mattress is changed every five years even if it is still good. This is because it loses its quality with time and also the composition collects much dust and dirt in course of time which is bad for health. A good night's sleep is priceless. However, the way people align themselves in bed makes the difference in the quality of sleep that they get. Experts say that the best way to sleep is on the back without a pillow. This allows the spine to rest with its natural curves in place. Side sleeping is not the best as it causes numb fingers due to strain on the nerves through the shoulder. Stomach sleeping is the worst position of all. It affects the lower back, neck and the lungs. It keeps the head turned to one side all night, which affects the alignment of the spine in the neck. A lot of things are therefore to be considered if one has to achieve quality sleep.

26. From the passage we learn that good rest will yield \_\_\_\_\_.
- A. Better health
  - B. Good sleep
  - C. Good cells
  - D. Good relaxation
27. According to the passage, it is TRUE to state that \_\_\_\_\_.
- A. Sleep causes good mattress
  - B. Sleep facilitates replacement of cells
  - C. Sleep causes tiredness
  - D. Sleep reduces cells
28. "A good bed is the gateway to good sleep" means \_\_\_\_\_.
- A. sleep has a gateway
  - B. a good sleep depends on the type of bed
  - C. beds have passages to sleep
  - D. good sleep comes from a gate
29. According to the passage, a good bed has the following except \_\_\_\_\_.
- A. comfort
  - B. colour
  - C. space
  - D. support

30. From the passage, qualities of a good mattress are \_\_\_\_\_.
- A. Soft but too soft  
B. Either too hard or too soft  
C. Neither hard nor too soft  
D. Both hard and very soft
31. In the passage, the word yields has been underlined. It means same as \_\_\_\_\_.
- A. opposes  
B. rejects  
C. result  
D. refuses
32. According to the passage, it is TRUE to state that \_\_\_\_\_.
- A. Mattress must not be changed every five years  
B. Good sleep and health have no connections  
C. A mattress can be used as long as it remains good  
D. Timed replacement of a mattress leads to good quality of life
33. One of the following sentences is FALSE.
- A. A mattress loses quality over time  
B. A good mattress is associated with good health  
C. A mattress need replacement after five years  
D. A mattress must be replaced frequently
34. From the passage, which one of the following causes bad health?
- A. Dust  
B. Contours  
C. Time  
D. Composition
35. According to the passage back sleeping \_\_\_\_\_.
- A. rests the spine naturally  
B. has natural cure  
C. strains the nerves  
D. hurts the spine
36. The word quality has been underlined in the last paragraph. It means same as?
- A. Great  
B. Nice  
C. Long  
D. Needed
37. According to the passage stomach sleeping is the worst method because it \_\_\_\_\_.
- A. Affects lungs  
B. Affects finger  
C. Strains nerves  
D. Relaxes the body
38. The BEST title for this passage is \_\_\_\_\_?
- A. Quality mattress  
B. A good bed  
C. Quality sleep  
D. Sleeping position

**Read the passage below and then answer questions 39 to 50.**

Udueze went into his inner compound and soon returned with his goat skin bag and a sheltered machete. "I shall take you to the man who will receive your message," he said. He led the way and the three emissaries followed silently. He took them to the house of Otikpo, who was preparing seed yams for the market. He rose to greet his visitors whom he shook hands with, then went into an inner room and returned with a rolled mat. He spread it on the mud bed for his visitors. He then went again and brought a Kola nut in a wooden bowl. Akukalia thanked him but said that they could neither eat nor drink until their mission was over.

"Can this mission you speak of be heard by me and Udueze, or does it require the elders of Okperi?" Otikpo asked. "It requires," said Akukalia. "Then you came a bad time. Everybody in Igboland knows that Okperi people do not have business on their market day. You should have come yesterday or the day before or tomorrow." Otikpo went outside and raising his voice, he called a neighbour, Ebo, and came in again. Ebo came in and saluted generally. He began to shake hands with the visitors, but when Akukalia's turn came, he refused to take Ebo's hand.

"Sit down," said Otikpo. "Akukalia has a message for Okperi which forbids him to eat Kolanut or shake hands. He wants to see the elders and I have told him it is not possible today. I have not yet heard of a message that cannot wait. Or have you brought us news that 'chuku', the high god, is about to remove the foot that holds the world? Do you people think that a market like the one we have today will break up because three men have come to Okperi?" Otikpo went on. Ebo and Otikpo burst into laughter. The three men from Umuaro exchanged

glances. Akukalia's face began to look dangerous. Udueze sat as he had done since they first came in, his chin in his left hand.

"Are you telling us that you people regard us as market women? I've borne your insults patiently. Let me remind you that my name is Okeke Akukalia of Umuaro." "Oooh, of Umuara," said Ebo, still smarting from the rebuffed handshake. "I am happy you have said Umuaro. The name of this town is Okperi!" "Go back to your house!" shouted Akukalia. "Or I will make you curse the day you were born!" "If you want to shout like a castrated bull, you must wait until you return to Umuaro. I have told you this place is called Okperi," replied Ebo sarcastically. Perhaps it was deliberate, perhaps accidental. But Ebo had just said the one thing that nobody should have told Akukalia who was impotent and whose wives were secretly given to other men to bear his children.

39. In the first paragraph, the word sheltered has been underlined. Which of the following word means the same as the underlined word?
- A. Covered                      B. Hidden  
C. Concealed                    D. Sharpened
40. According to the passage, the visitors arrived when Otikpo \_\_\_\_\_?
- A. Was ready to go to the market  
B. Was waiting for the visitors  
C. Was preparing yams and Kola nuts  
D. Was preparing seed yams
41. The visitors did not want to eat and drink before \_\_\_\_\_.
- A. Achieving their goal  
B. Listening to Odueze  
C. Buying yams  
D. Going to the market
42. From the passage, we learn that \_\_\_\_\_.
- A. Otikpo and Edueze were the only elders  
B. Udueze and Otikpo were not elders  
C. Udueze was very unfriendly  
D. The visitors were waited by Otikpo
43. According to the passage, it was TRUE to say that \_\_\_\_\_.
- A. Messages were received on day before  
B. Umuare men were regarded a market people  
C. No other business takes place on their market day  
D. People could listen to their message
44. From the passage we can describe Akukalia as \_\_\_\_\_.
- A. arrogant                      B. shy  
C. daring                          D. humble
45. According to the passage Ebo was \_\_\_\_\_.
- A. A visitor from Umuaro  
B. An emissaries  
C. A village elder  
D. A resident of Okperi
46. The words 'still smarting from the rebuffed handshake' means \_\_\_\_\_.
- A. Ebo was pained by Akukalia's contempt  
B. Ebo was a smart talker  
C. Ebo was avoiding contempt  
D. Ebo wa happy and felt overwhelmed
47. The issue of "chuku" is brought for the purpose of \_\_\_\_\_.
- A. surprise                      B. fear  
C. anger                          D. sarcasm
48. According to the passage, it is FALSE to say \_\_\_\_\_.
- A. Akukalia looked like a bull  
B. The emissaries regarded the Okperi elders  
C. Akukalia raised his voice against Ebo  
D. Akukalia hated being compared to market women
49. A fight might have been triggered by \_\_\_\_\_?
- A. Comparing Akukalia with a castrated bull  
B. The castrated bull  
C. Ebo's sarcastic tone  
D. Akukalia's shouts
50. Ebo's reference to Akukalia as a castrated bull
- A. Was accidental  
B. Was obviously deliberate  
C. May have been deliberate  
D. Was by mistake



1. In Kenya the population in 2015 was 47588092. What was the population to the nearest hundred thousand?
- A. 47500000  
 B. 47590000  
 C. 47600000  
 D. 48000000

2. What is the value of  $\frac{48 + 6^2 + 12^2 - 84 \div 12 \times 4}{12 + 8}$

- A. 10  
 B. 2  
 C.  $2\frac{2}{5}$   
 D.  $2\frac{4}{5}$

3. What is the value of  $\frac{8}{9} + \frac{1}{3} (\frac{2}{3} - \frac{1}{4})$  of  $\frac{4}{5} \div \frac{1}{2}$ ?

- A.  $\frac{1}{2}$   
 B. 2  
 C.  $\frac{17}{18}$   
 D.  $1\frac{1}{9}$

4. The following are prime factors of three numbers:

- (i)  $2^3 \times 3^3 \times 5$   
 (ii)  $2^2 \times 3^3 \times 5^2$   
 (iii)  $2^4 \times 3 \times 7$

What is the GCD of the three numbers?

- A. 75600  
 B. 12  
 C. 6  
 D. 36

5. In the number 9735926, the total value of digit 3 is added to the total value of digit 2. Which one of the following is the correct answer?

- A. 30002  
 B. 30020  
 C. 3020  
 D. 320

6. The following describes a certain quadrilateral:

- (i) Opposite sides are parallel  
 (ii) All angles are equal  
 (iii) Diagonals are equal and do not bisect each other at right angles  
 (iv) Diagonals do not bisect the angles  
 What is the name of the quadrilateral?

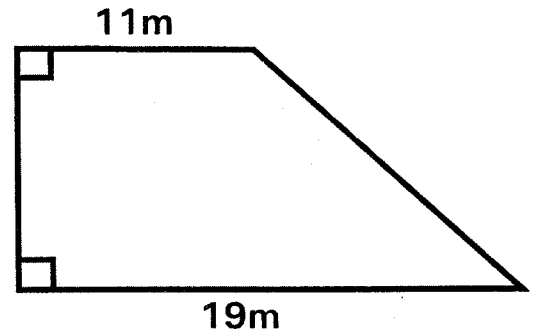
- A. Rectangle  
 B. Square  
 C. Rhombus  
 D. Trapezium

7. The perimeter of a rectangular plot of land is 113.14m. If the length of the plot is 36.14m, what is the width?

- A. 77m  
 B. 38.5m

- C. 20.43m  
 D. 10.125m

8. The area of the trapezium below is  $90\text{m}^2$ . It was fenced using three strands of wire.



What was the length of the wire used?

- A. 46m  
 B. 144m  
 C. 108m  
 D. 138m

9. Which one of the following statements is correct?

- A. 0.55 is greater than  $\frac{5}{9}$   
 B. 0.55 is equal to  $\frac{5}{9}$   
 C.  $\frac{5}{9}$  is greater than 0.55  
 D.  $\frac{5}{9}$  is less than 0.55

10. Which one of the following statements is true about the number of faces and edges of a triangular prism?

- A. 4 faces and 6 edges  
 B. 9 faces and 5 edges  
 C. 6 faces and 9 edges  
 D. 5 faces and 9 edges

11. A rectangular tank is 4.8m long, 3.2m wide and 2.5m high. How many litres of water can it hold when half full?

- A. 38400  
 B. 19200  
 C. 38.4  
 D. 19.2

12. What is the value of m in the equation  $\frac{2(m^2 + 15)}{8} = 24$ ?

- A. 9  
 B. 81  
 C. 111  
 D. 222

13. Ojwang spent  $\frac{1}{6}$  of his income on school fees,  $\frac{1}{4}$  on food,  $\frac{5}{7}$  of the remainder on rent and saved the rest. What total fraction of his money did he save?

- A.  $\frac{1}{6}$                       B.  $\frac{5}{12}$   
 C.  $\frac{1}{4}$                          D.  $\frac{2}{7}$

14. In a certain year 3600 pupils scored above 400 marks in KCPE. The following year those who scored above 400 marks were 4050. What was the percentage increase in the number of candidates who scored above 400 marks?  
 A.  $11\frac{1}{9}\%$                       B.  $88\frac{8}{9}\%$   
 C. 1.25%                        D.  $12\frac{1}{2}\%$

15. Nadimo bought a smart phone by paying a deposit of sh. 6000 plus 15 equal monthly instalments of sh 1250. The hire purchase price was 10% more than the marked price. What was the marked price?  
 A. Sh. 22275  
 B. Sh. 22500  
 C. Sh. 24750  
 D. Sh. 27500

16. The table below shows the number of bags of cereals in two stores during a certain month. The number of bags of rice in the two stores is not shown.

NAME OF STORE	CEREALS				
	Number of bags of wheat	Number of bags of maize	Number of bags of rice	Number of bags of barley	Total
Juma store	24	120		270	630
Mbugua store	16	240		168	554

- How many more bags of rice did Juma store have more than Mbugua store?  
 A. 130                              B. 216                              C. 86                                D. 346

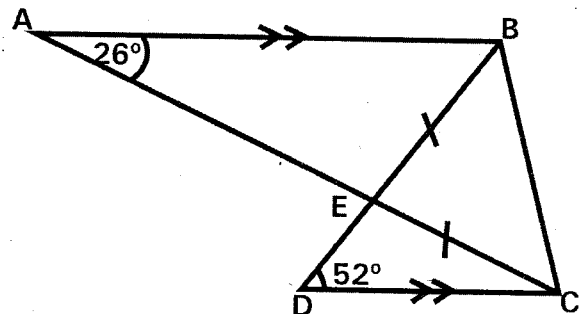
17. A wheelbarrow dealer was left with sh. 171000 after paying out a 5% commission to an agent for the sale of the wheelbarrows. What was the selling price of the wheelbarrows?  
 A. Sh. 162450  
 B. Sh. 179550  
 C. Sh. 180000  
 D. Sh. 3420000

18. What is the next number in the pattern 3, 7, 13, 21, 31, \_\_\_\_\_?  
 A. 41                                B. 45  
 C. 42                                D. 43

19. What is the value of  $\frac{y^2 + n}{q + n}$   
 Given that  $n = q + y$ ,  $q = \frac{1}{3}y$  and  $y = 6$ ?  
 A.  $4\frac{2}{5}$                               B. 2  
 C. 4                                    D.  $1\frac{9}{11}$

20. What is the smallest number possible formed from the digits 9, 7, 0, 4, 2?  
 A. 24790                            B. 02479  
 C. 20479                            D. 24079

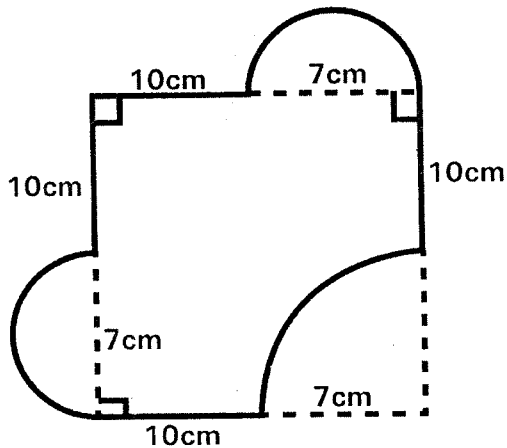
21. AB is parallel to DC and BE = EC. Angle BAC =  $26^\circ$  and BDC =  $52^\circ$



- What is the size of angle BCD?  
 A.  $78^\circ$                               B.  $51^\circ$   
 C.  $77^\circ$                               D.  $102^\circ$

22. The mean mass of 8 body builders is 91kg. The mean mass of 6 of the bodybuilders is 89kg. The remaining two bodybuilders' difference in mass is 6kg. What is the mass of the lighter bodybuilder?  
 A. 97kg                                B. 94kg  
 C. 100kg                              D. 91kg

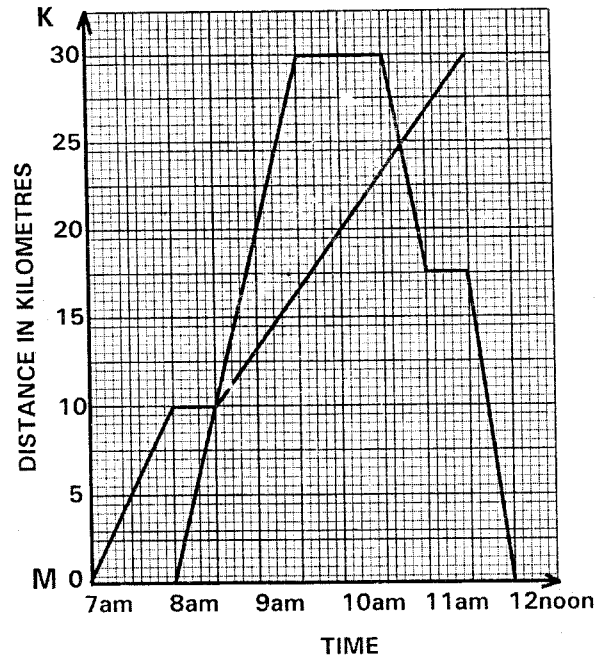
23. A design was made up of straight edges of length 10cm and arcs of circles as shown in the figure below.



What is the area of the design? (Take  $\pi = \frac{22}{7}$ )

- A.  $250.5\text{cm}^2$                       B.  $212\text{cm}^2$   
 C.  $289\text{cm}^2$                          D.  $366\text{cm}^2$
24. Opondo paid sh 7640 to buy a phone after getting  $4\frac{1}{2}\%$  discount. How much less would he have paid had he been offered a 7% discount?  
 A. Sh. 200                              B. Sh. 560  
 C. Sh. 360                              D. Sh. 920
25. A bus left Eldoret on Wednesday at 2235h and took 6hrs 40min to reach Nairobi. On what day and at what time in am/pm system did the bus arrive at Nairobi?  
 A. Thursday 5.15am  
 B. Thursday 5.15pm  
 C. Wednesday 5.15am  
 D. Wednesday 5.15pm
26. The area of a square garden is  $4096\text{m}^2$ . What is the length of one side of the garden in metres?  
 A. 16m                                    B. 1024m  
 C. 2048m                                D. 64m
27. An open cylindrical tank has an internal diameter of 4.2m and an internal height of 5m. The inside of the tank was painted. What area of the tank in square metres was painted? (Take  $\pi = \frac{22}{7}$ )  
 A. 93.72                                  B. 79.86  
 C. 46.86                                 D. 60.72

28. The graph below shows the distances covered by a cyclist travelling from town M to town K and a motorist travelling from town M to town K and back to town M.



- What was the motorist's average speed for the whole journey?  
 A.  $6\frac{2}{3}\text{km/h}$                         B.  $15\text{km/h}$   
 C.  $7\frac{1}{2}\text{km/h}$                          D.  $30\text{km/h}$

29. Wambugu had 300 two hundred shillings notes. He then changed all of the money into shilling 1000 and shilling 500 notes in the ratio 1:4 respectively. How much money was in shilling 500 notes?  
 A. Sh. 20,000                         B. Sh. 48,000  
 C. Sh. 12,000                         D. Sh. 40,000
30. Khatioli invested sh. 80000 in a bank which paid compound interest at the rate of 8% per annum. How much money did Khatioli have in the bank after two years, altogether?  
 A. Sh. 13,312                         B. Sh. 12,800  
 C. Sh. 92,800                         D. Sh. 93,312
31. What is the area of a rhombus whose diagonal are 48cm and 14cm long?  
 A.  $336\text{cm}^2$                          B.  $672\text{cm}^2$   
 C.  $168\text{cm}^2$                          D.  $600\text{cm}^2$

32. Koech makes strides of an average length of 0.85m. How many such strides will he make to cover 3.4km?  
 A. 2500                                      B. 40000  
 C. 4000                                        D. 400
33. There are 202 trees planted on both sides of a road at intervals of 5m apart. What is the distance from the first tree to the last one?  
 A. 500m                                        B. 505m  
 C. 1010m                                      D. 1005m
34. Two men can do a piece of work in 30 days. Six women can do the same piece

of work in 15 days. How long would it take to do the same piece of work if all the two men and the six women worked together?  
 A.  $7\frac{1}{2}$  days                                      B. 10 days  
 C. 12 days                                        D. 8 days

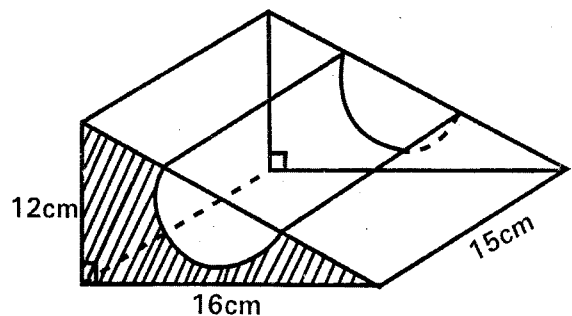
35. A school received 264 litres of milk packed into 2 decilitre packets. If the packets were in crates each holding 24 packets, how many crates were received?  
 A. 5.5    B. 11  
 C. 22    D. 55

36. The table below shows international postage charges for surface mail

TYPE OF ARTICLE AND MAXIMUM MASS	Countries within East African zone		Countries within the rest of African zone		Countries within Europe, Middle & Near East zone		Australia, America & far East zone	
	Sh	cts	Sh	cts	Sh	cts	Sh	cts
LETTER								
Maximum mass 2kg								
Up to 20g	45	00	55	00	60	00	70	00
Over 20g up to 100g	90	00	105	00	115	00	150	00
Over 100g up to 250g	150	00	180	00	205	00	260	00
Over 250g up to 500g	270	00	315	00	360	00	465	00
Over 500g up to 1kg	450	00	525	00	600	00	770	
Over 1kg up to 2kg	735	00	835	00	970	00	1335	

Mwanzia sent a 20g letter to his cousin in Iraq (Middle East) a 160g letter to his friend in America and  $1\frac{3}{4}$ kg letter to his uncle in Cameroon. How much did he pay for the postage of the letters?

- A. Sh. 1055                                      B. Sh. 1110  
 C. Sh. 1155                                      D. Sh. 1210
37. Construct triangle NPQ such that  $\angle NPQ = 50^\circ$  and line NP = 7cm and NQ = 5.5cm. Bisect angle PNQ and draw the bisector to meet PQ at R. What is the size of angle NRQ?  
 A.  $103^\circ$                                         B.  $82^\circ$   
 C.  $56^\circ$                                          D.  $77^\circ$
38. The diagram below represents a triangular prism. A semi-circular groove of radius 3.5cm has been curved out.



What is the volume of the solid? (Take  $\pi = \frac{22}{7}$ )

- A.  $1151.25\text{cm}^3$   
 B.  $862.50\text{cm}^3$   
 C.  $288.75\text{cm}^3$   
 D.  $1440\text{cm}^3$
39. In a car park, there were cars, vans and buses. The number of buses was b. The number of cars was four times the

number of buses. The number of vans was twelve less than buses. How many vehicles were in the parking area?


- A.  $6b + 12$                       B.  $3b + 8$   
 C.  $6b - 12$                       D.  $3b - 8$

40. Asha bought 10 crates of tomatoes @ sh. 2000. All tomatoes in two of the crates got damaged. She sold the remaining crates @ sh. 2300. What percentage loss did she make?  
 A.  $8\frac{16}{23}\%$                       B. 8%  
 C. 15%                              D.  $13\frac{1}{13}\%$
41. In a certain year a farmer sold 90 bags of cabbages, 225 bags of maize, 360 bags of wheat and 135 bags of beans. If these items were to be represented in a pie chart, what angle would represent the number of beans?  
 A.  $100^\circ$                               B.  $60^\circ$   
 C.  $40^\circ$                                 D.  $160^\circ$
42. The fractions  $\frac{6}{7}$ ,  $\frac{9}{11}$ ,  $\frac{11}{13}$  and  $\frac{14}{17}$  are to be arranged in order from the smallest to the largest. Which one of the following is the correct order?  
 A.  $\frac{6}{7}$ ,  $\frac{11}{13}$ ,  $\frac{14}{17}$ ,  $\frac{9}{11}$   
 B.  $\frac{9}{11}$ ,  $\frac{11}{13}$ ,  $\frac{14}{17}$ ,  $\frac{6}{7}$   
 C.  $\frac{6}{7}$ ,  $\frac{9}{11}$ ,  $\frac{11}{13}$ ,  $\frac{14}{17}$   
 D.  $\frac{9}{11}$ ,  $\frac{14}{17}$ ,  $\frac{11}{13}$ ,  $\frac{6}{7}$
43. Sosion left school by bicycle at 10.15am and took 2hrs 10min to reach town 40km away. Mudzo left the school for town by matatu at 12.05pm. The average speed of the matatu was 60km/h. What was the difference between their arrival times?  
 A. 20 minutes  
 B. 40 minutes  
 C. 1hr 30 min  
 D. 1hr 50 min
44. Which one of the expressions below is the simplest form of  

$$\frac{5(2m + n) + 10m}{3(2m + 5n) + 4m}$$

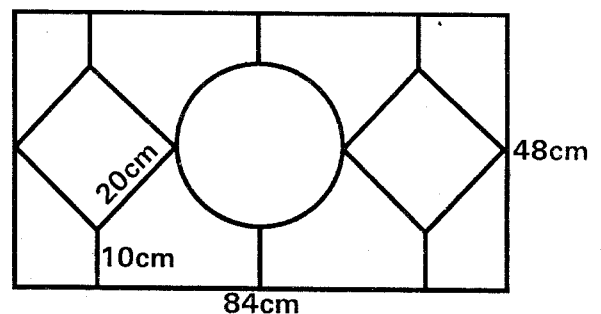
- A.  $\frac{20m + 5n}{10m + 15n}$   
 B.  $\frac{20n + 5m}{10m + 15n}$   
 C.  $\frac{4m + n}{2m + 3n}$   
 D.  $\frac{20m + n}{10m + 15n}$

45. The figure below represents a stack of cubes. The surface of the stack excluding the base was painted.



How many cubes were painted on two faces only?

- A. 12                                      B. 8  
 C. 14                                      D. 10
46. The figure below represents a design of a window. The design consists of a circle of diameter 28cm, squares of sides 20cm and a rectangular frame measuring 84cm by 48cm. The squares and circle are joined to the frame by lines each 10cm long.



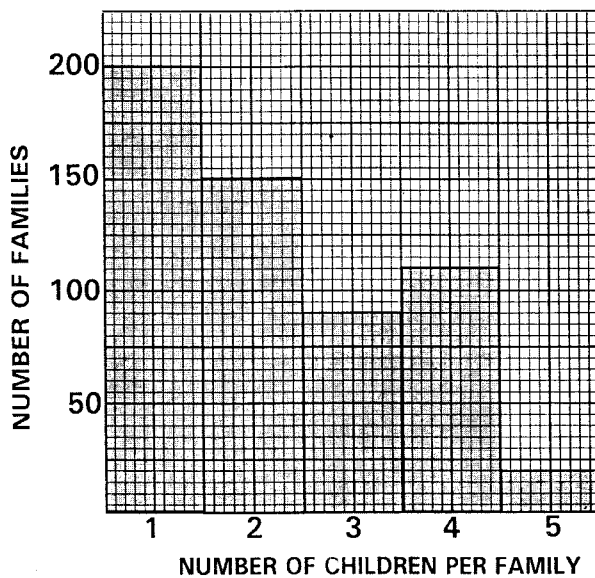
What is the total length in cm of the metal needed to make the design?  
 (Take  $\pi = \frac{22}{7}$ )

- A. 404cm                              B. 308cm  
 C. 572cm                              D. 488cm

47. Construct a triangle ABC such that line  $AB = 7\text{cm}$ , angle  $ABC = 65^\circ$  and angle  $ACB = 40^\circ$ . What is the measure of line BC?
- A. 9.8cm                      B. 10.4cm  
C. 4.7cm                        D. 6.6cm

48. During an election the winning candidate got 0.615 of the votes cast while the other two candidates got 0.198 and 0.183 respectively. There were 240 spoilt votes. How many votes did the winning candidate get?
- A. 60,000                      B. 59,760  
C. 11,880                        D. 36,900

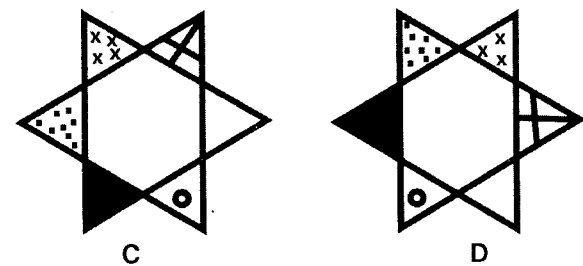
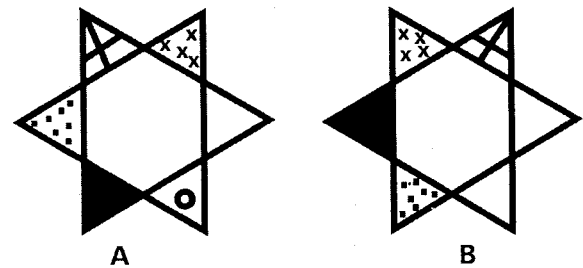
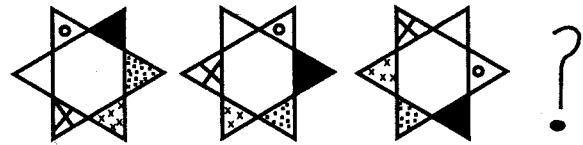
49. The graph below shows the number of school going children in each family in Karagita location.



How many school going children are in Karagita location?

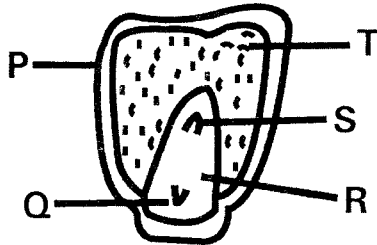
- A. 570                              B. 1310  
C. 1240                            D. 1210

50. The figure below shows a pattern of shapes



- Which list below has crops that belong to the same group?
  - Coffee, simsim, flax
  - Cotton, flax, sisal
  - Coconut, sisal, macadamia
  - Coffee, tea, sunflower

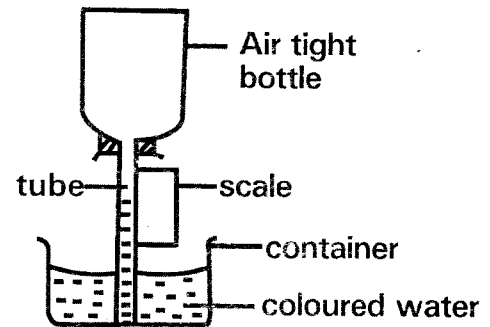
- The diagram below shows a maize grain.



Which letter represents the seed leaf?

- T
  - S
  - R
  - Q
- Which component of blood is NOT matched with its function?
    - Plasma- transport of food
    - Red blood cells- transport carbon dioxide
    - Platelets- prevent excess bleeding
    - White blood cells- fight micro organisms
  - Which one of the following is not a function of the amniotic fluid?
    - Nourish the foetus
    - Prevent drying of the foetus
    - Facilitate free movement of the foetus
    - Protect the foetus from shock
  - Which one of the following is ideal for prevention of STIs among the youth?
    - Use of condoms
    - Being faithful
    - Avoiding premarital sex
    - Seeking medical treatment promptly
  - The vaccines given to a baby at the age of 14 weeks do not protect the baby against?
    - Whooping cough
    - Tuberculosis
    - Polio
    - Tetanus

- The diagram below shows a simple weather instrument constructed by standard 5 pupils.



From the diagram it is true to say that

- It works on the fact that air occupies space
  - It works on the fact that liquids expand on heating
  - It works on the fact that air contracts on cooling
  - It works on the fact that air exerts pressure
- Which statement below is false about clouds that indicate fine weather?
    - They are mountainous
    - They are white in colour
    - They resemble cotton wool
    - They have flat bottoms
  - When modelling the solar system which planets are placed furthest from the centre of the solar system?
    - Mercury and Venus
    - Earth and Mars
    - Jupiter and Saturn
    - Uranus and Neptune
  - Which one is NOT a common feature between a frog and a hen?
    - Both lay eggs
    - Both have lungs for breathing
    - Both have varying body temperature
    - Both have a back bone
  - The following are features of a certain beak of a bird:
    - Very strong
    - Short
    - Conical in shape

Which bird has the beak described above?

- A. Duck
- B. Hen
- C. Flamingo
- D. Hawk

12. Which one of the following will help in controlling both tapeworms and ticks in livestock?

- A. Drenching the livestock
- B. Spraying the livestock
- C. Dusting the livestock
- D. Practicing rotational grazing

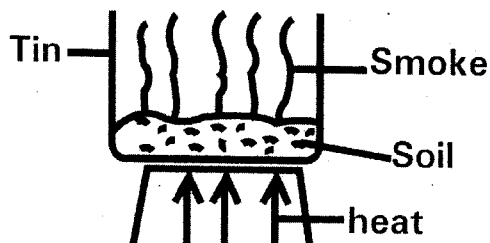
13. Which one is NOT a disadvantage of hard water?

- A. Does not lather with soap
- B. Promotes healthy teeth
- C. Deposits scale in kettle
- D. Discolours clothes

14. The following are industrial uses of water. Which one is NOT?

- A. Fountain
- B. Cooling engines
- C. Mixing herbicides
- D. Cleaning raw materials

15. The set up below was used by standard four pupils to investigate a certain component of soil.



The component being investigated comes from \_\_\_\_\_.

- A. Mineral particles
- B. Decaying plants
- C. Inorganic matter
- D. Moisture

16. Which one of the following is NOT a macro nutrient needed by plants?

- A. Zinc
- B. Nitrogen
- C. Carbon
- D. Potassium

17. Which of these practices carried by farmers will help in controlling sheet erosion?

- A. Mulching
- B. Construction of gabions
- C. Planting cover crops
- D. Practicing contour farming

18. Which list below has foods that provide the body with energy?

- A. Green banana, groundnuts, sugar cane
- B. Arrow roots, pawpaw, millet
- C. Carrots, spinach, kales
- D. Meat, fish, pork

19. The following are signs of a certain deficiency disease:

- (i) Feeling dizzy
- (ii) Pale body
- (iii) Fainting and feeling tired

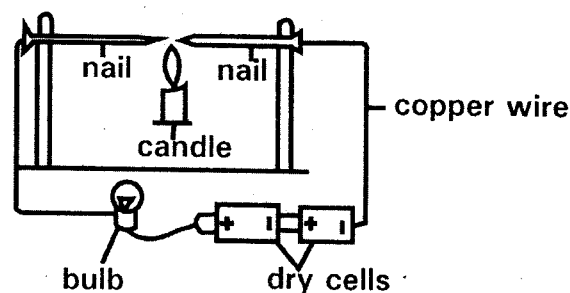
Which pair has foods recommended to prevent the above disease?

- A. Carrot and oranges
- B. Meat and eggs
- C. Kales and green grams
- D. Spinach and liver

20. The following are micro-organisms that cause food poisoning except?

- A. Bacteria
- B. Penicillin
- C. Mould
- D. Mucor

21. Standard 5 pupils carried out the activity shown below.



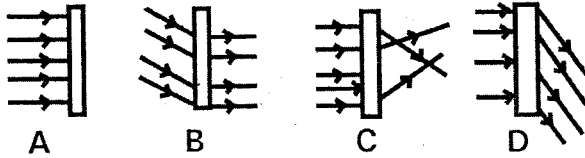
What were the pupils investigating from the above activity?

- A. Good conductors of electricity
- B. How to make a simple circuit
- C. Expansion of solids
- D. Poor conductors of heat



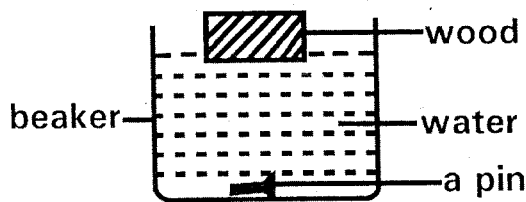
22. Which one of the following shows the energy changes that take place when a solar panel is used to light the house?
- Light → electrical → heat → light
  - Chemical → electrical → heat → light
  - Light → heat → electrical → light
  - Chemical → electrical → light → heat

23. Which diagram below shows how light behaves when it meets a translucent material?



24. Which one of the following describes the volume of a sound?
- Loudness and highness of a sound
  - Highness and lowness of a sound
  - Softness and loudness of a sound
  - Loudness and lowness of a sound
25. Which pair below has substances that have a definite shape and volume?
- Chalk dust and flour
  - Smoke and water vapour
  - Spirit and ink
  - Ice and cooking oil

26. The diagram below shows a demonstration carried out by standard four pupils.



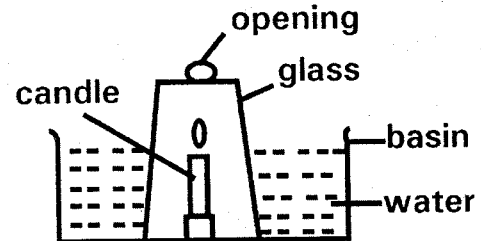
From the activity the pupils concluded that one of the following affects sinking and floating. Which one is it?

- Weight
- Shape
- Size
- Material

27. Magnetism will pass through all the following material except?
- Plastic ruler
  - Polythene paper
  - Iron sheet
  - Copper coin

28. Njoki accidentally mixed cooking oil and water. Which method would she use to separate the two liquids?
- Decantation
  - Filtration
  - Evaporation
  - Sieving

29. Standard six pupils carried out the activity shown below.

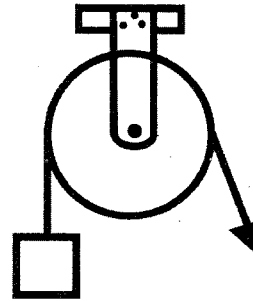


What observation did the pupils make from the activity?

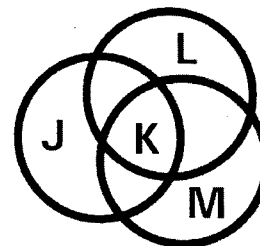
- The candle went off after sometime
  - The level of water rose in the glass
  - The candle continued to light
  - The level of water dropped in the basin
30. Which one of the following machine does not make work easier by increasing the effort distance?
- Stair case
  - Road winding up a hill
  - Ramp
  - Flag post
31. The force that opposes motion cannot be reduced by \_\_\_\_\_.
- Streamlining bodies
  - Applying adhesives between surfaces
  - Placing rollers between surfaces
  - Making surfaces smooth
32. The correct unit for measuring gravity is \_\_\_\_\_.
- Kilogram
  - Cubic centimetres
  - Newtons
  - Grams
33. Which one of the following explains why we should use simple tools safely?

- A. To reduce effort needed when doing work
  - B. Prevent accidents
  - C. To apply force conveniently
  - D. To make them more efficient
34. Which pair of plants below belongs to the same group as a mould?
- A. Toad stool and yeast
  - B. Fern and moss
  - C. Mushroom and fern
  - D. Puff balls and moss
35. Which crop pest below is not matched with its harmful effect on crops?
- A. Aphids- sucking sap from leaves
  - B. Cut worms- eating young plant leaves
  - C. Stalk borer- sucking juice from plant leaves
  - D. Weevils- boring into maize grains
36. The following are parts of the breathing system that clean the air we inhale. Which one are they?
- A. Nose and lungs
  - B. Trachea and nose
  - C. Air sacs and bronchioles
  - D. Lungs and trachea
37. During adolescent stage, both boys and girls
- A. Experience wet dreams
  - B. Have wet dreams
  - C. Grow beards
  - D. Grow pubic hair
38. The following are effects of a certain drug:
- (i) Breathing problems
  - (ii) Dizziness
  - (iii) Vomiting
- Which drug has the effects shown above?
- A. Cobbler's glue
  - B. Mandrax
  - C. Bhang
  - D. Cocaine
39. Which disease below is both immunisable and communicable?
- A. Malaria
  - B. Tetanus

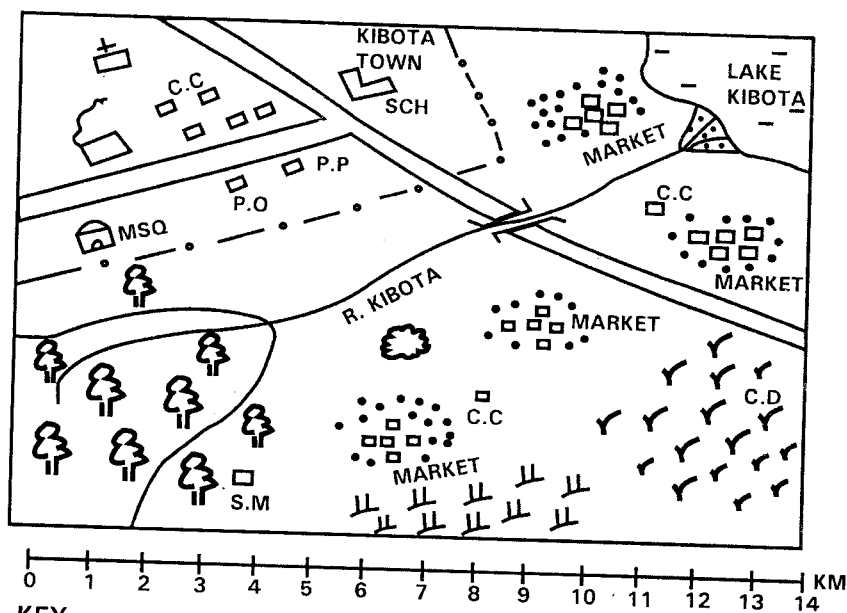
- C. Tuberculosis
  - D. Bilharzias
40. Rotational grazing does not involve
- A. Stall feeding
  - B. Tethering
  - C. Strip grazing
  - D. Paddocking
41. Which one of the following should not be done during a thunderstorm?
- A. Shelter under the tree
  - B. Wear shoes with rubber soles
  - C. Avoid open fields
  - D. Avoid carrying sharp pointed metallic objects
42. The diagram below shows a pulley in use.



- Which statement is not true about the pulley?
- A. Effort used is twice the load
  - B. Load distance is equal to the effort distance
  - C. It changes direction of effort
  - D. Effort applied is equal to the load
43. Which one of the following is NOT a factor influencing soil erosion?
- A. Afforestation
  - B. Over grazing
  - C. Ploughing along the slope
  - D. Heavy rainfall
44. The diagram below shows the various components of the environment.



# KIBOTA AREA



## KEY

— FOREST	— QUARRY
— TARMAC ROAD	— GRASS
— PERMANENT BUILDINGS	— SCRUB
— TOWN BOUNDARY	P.O — POST OFFICE
— SETTLEMENTS	P.P — POLICE POST
SCH — SCHOOL	— CHRISTIAN CENTRE
C.C — CHIEF'S CAMP	MSQ — MOSQUE
— SAW MILL	S.M — SAW MILL

**Use the map of Kibota area to answer questions 1 - 7**

1. Kibota area slopes towards one of the following directions. Which one is it?
  - A. North - West
  - B. North - East
  - C. South - West
  - D. South - East
2. Which of the following influenced the settlement pattern in Kibota area?
  - A. The transport network
  - B. Farming activities
  - C. Trading activities
  - D. Fishing activities
3. The Residents of Kibota area belong to \_\_\_\_\_
  - A. Christian religion only
  - B. Islamic religion only
  - C. Hindu religion only
  - D. Two religions
4. The head of administration in Kibota area is likely to be \_\_\_\_\_.
  - A. An assistant chief
  - B. A County Commissioner
  - C. A District Officer
  - D. A District Commissioner
5. The following are functions of the town found in Kibota area. Which one is NOT?
  - A. The town is an industrial centre
  - B. The town is a health centre
  - C. The town is a religious centre
  - D. The town is a transport and communication centre
6. What is the approximate length of the tarmac road from the junction in the town to the Western edge of the map?
  - A. 6.2 km
  - B. 14.2 km
  - C. 10.2 km
  - D. 2.2 km

7. One of the following statements about Kibota area is true. Which one is it?
- The feature formed at the mouth of River Kibota marked D was formed as a result of deposition of silt
  - There are only two economic activities in the area represented by the map
  - Kibota area represents an administrative county
  - All parts of Kibota area receive heavy and reliable rainfall
8. Which of these mountains found in Eastern Africa is NOT of volcanic origin?
- Mount Meru
  - Mount Loolmalasin
  - Mount Marsabit
  - Mount Pare
9. The following countries are found in Africa. Which among them is NOT correctly matched with its capital city?
- Equatorial Guinea – Conakry
  - Liberia – Monrovia
  - Lesotho – Maseru
  - Niger – Niamey
10. The equinox is experienced in one of the following months of the year. Which one is it?
- |          |             |
|----------|-------------|
| A. March | B. February |
| C. April | D. October  |
11. The following statements relate to a river in Africa.
- It carries a large volume of water.
  - It ends in the Atlantic Ocean in form of an estuary.
  - It has many tributaries.
  - It forms a boundary between countries.
  - It flows through an area that receives high rainfall.
- The river described above is \_\_\_\_\_.
- River Congo
  - River Nile
  - River Matandu
  - River Niger
12. Three of the following islands are located in the Atlantic Ocean. Which one is NOT?
- Canary Islands
  - St Helena islands
  - Sao Tome and Principe islands
  - Re-union islands
13. Which of the following is NOT a positive effect of mountains on human activities?
- Mountains attract rainfall that is useful in crop farming
  - It is difficult to build roads and railways in mountainous areas
  - High points of mountains are used for telecommunication
  - Some sports can be carried out in mountainous areas
14. Which of these consists of lakes that were formed through the process of volcanicity?
- Lakes Volta, Masinga and Kariba.
  - Lakes Chala, Shala and Tana.
  - Lakes Kivu, Chilwa and Bangweulu.
  - Lakes Paradise, Chad and Wum
15. The time in a town P located at  $40^{\circ}$  East is 2.00 p.m. What will be the time in a town X located at  $25^{\circ}$  East?
- |             |             |
|-------------|-------------|
| A. 1.00 p.m | B. 1.00 a.m |
| C. 3.00 a.m | D. 3.00 p.m |
16. The weather instrument with a wet bulb thermometer and a dry bulb thermometer is used in measuring the \_\_\_\_\_.
- Air pressure.
  - Humidity of the air.
  - Temperature.
  - Speed of wind.
17. All the following countries found in Eastern Africa are crossed by the Rift Valley except one. Which one is it?
- |             |           |
|-------------|-----------|
| A. Rwanda   | B. Uganda |
| C. Ethiopia | D. Sudan  |
18. One of these Ocean currents has led to arid conditions in the areas around the South-Western part of Africa. Which one is it?
- Equatorial Guinea current
  - Canary current
  - Benguela current
  - Agulhas current
19. In which climatic region of Africa is the Congo basin located?
- Equatorial climatic region
  - High Veld climatic region
  - Semi-desert climatic region
  - Mediterranean climatic region
20. The following describes a kind of vegetation found in Africa.
- Vegetation consists of short scattered thorny shrubs.
  - There are scattered patches of grass.
  - Plants have shiny leaves.

- (iv) Some plants have deep roots that enable them to reach the underground water.  
The vegetation described above is known as \_\_\_\_\_.
- A. Coniferous vegetation.
  - B. Temperate grassland vegetation.
  - C. The tropical rainforests.
  - D. Semi-desert and desert vegetation.
21. Which kind of soil found in Kenya has large particles, large airspaces and allows water to pass through it fast?
    - A. Sandy soil
    - B. Volcanic soil
    - C. Red earth soil
    - D. Alluvial soil
  22. Three of the following are soil conservation measures. Which one is NOT?
    - A. Contour ploughing
    - B. Construction of cut-off drains
    - C. Over cropping
    - D. Terracing
  23. Which of these Kenyan communities have a myth that Mwambu and Sela are their ancestors?
 

A. Akamba	B. Abagusii
C. Ababukusu	D. Pokomo
  24. The following are pre-historic sites in Eastern Africa.
    - (i) Isimilia.
    - (ii) Hyrax hill.
    - (iii) Olorgesaille.
    - (iv) Ntusi.
    - (v) Biggo.
    - (vi) Nuri.

Which of the above sites are found in Uganda?

A. (i) and (ii)	B. (ii) and (iii)
C. (v) and (vi)	D. (iv) and (v)
  25. The following are features of the German population. Which among them is NOT true?
    - A. Life expectancy among Germans is high
    - B. There is shortage of labour in Germany because the population is ageing
    - C. Majority of the people live in urban centres
    - D. The population of Germany is evenly distributed
  26. One of the following is the largest group of people in West Africa. Which one is it?
    - A. Kwa speakers
    - B. Nilo-Saharan group
    - C. Mande speakers
    - D. West Atlantic group
  27. Which of these sets of communities consist of the plains nilotes of Eastern Africa?
    - A. Iteso, Jie and Karamojong
    - B. Pokot, Luo and Dinka
    - C. Shilluk, Sebei and Iteso
    - D. Ogiek, Kipsigis and Gumuz
  28. In which of these types of marriage is polygamy allowed?
    - A. Civil marriage
    - B. Customary marriage
    - C. Christian marriage
    - D. Hindu marriage
  29. Who among the following is NOT a member of the school management committee?
    - A. The head teacher
    - B. A class representative
    - C. The treasurer
    - D. The deputy head teacher
  30. Which of the following was NOT a cultural artifact among traditional African communities in Kenya?
    - A. A grind stone
    - B. Bows and arrows
    - C. Calabashes
    - D. Old tyres
  31. In traditional African communities' skills such as iron-making, woodcarving, medicine and honey harvesting were taught to young people through \_\_\_\_\_.
    - A. Writing notes
    - B. Story telling
    - C. Apprenticeship
    - D. Proverbs
  32. The following conditions are favourable for growth of a crop in Africa.
    - (i) It requires heavy rainfall ranging between 2000 mm and 2500 mm.
    - (ii) High temperatures of between 24° c to 28° c.
    - (iii) Low altitude upto 750 metres above the sea level.
    - (iv) Protection from strong winds when the crop is young.

The above conditions favour the growth of \_\_\_\_\_.

- A. Cocoa                      B. Tea  
C. Sisal                        D. Cloves
33. In which of these places was settlers farming not practised in Kenya?  
A. Trans Nzoia                B. Lodwar  
C. Limuru                      D. Sotik
34. Three of the following facts about Perkerra irrigation scheme are true. Which one is NOT?  
A. It is located in Baringo County  
B. Water from a river is used in irrigating the scheme  
C. Furrow irrigation method is used in growing crops  
D. The main crops grown in the scheme are cucumbers and rice
35. Horticultural farming in Netherlands is mainly practised \_\_\_\_\_  
A. In the highlands.  
B. In urban centres  
C. In reclaimed land  
D. In large scale farms
36. One true statement about fish farming in both Kenya and Japan is that \_\_\_\_\_  
A. Marketing of fish in both countries is done through co-operatives  
B. Fish farming in both countries is carried out in sheltered areas along the coast  
C. Fish farming has increased food production in both countries  
D. Most fish are reared in ponds and tanks
37. Diatomite is mined in the following areas found in Kenya except one. Which one is it?  
A. Kimwarer                    B. Eburru  
C. Kariandusi                 D. Gicheru
38. Which of the following is NOT a tertiary industry?  
A. Tyre re-treading  
B. Advertising  
C. Tourism  
D. Flour milling
39. The following towns are found in Kenya.  
(i) Mombasa.  
(ii) Kisumu  
(iii) Eldoret  
(iv) Nakuru  
(v) Malindi

Which of the above towns began as early trading centres in the pre-colonial period?

- A. (i) and (ii)  
B. (ii) and (iii)  
C. (iv) and (v)  
D. (i) and (v)

40. The following are ports around Lake Victoria. Which among them is in Tanzania?

- A. Karungu bay port  
B. Shirati port  
C. Majanji port  
D. Port Bell port

41. One of the following communities found in Africa does not practise nomadic pastoralism. Which one is it?

- A. The Fulani  
B. The Baganda  
C. The Bedouins  
D. The Tswana

42. The following describes a form of transport.

- (i) It is cheap for transporting bulky goods over continents.  
(ii) It is very slow.  
(iii) It faces stiff competition from faster forms of transport.

The form of transport described above is \_\_\_\_\_

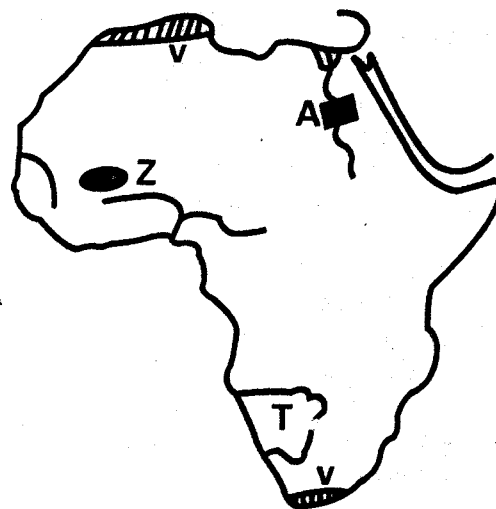
- A. Water transport  
B. Railway transport  
C. Road transport  
D. Air transport

43. Which of these minerals is MAINLY obtained through the drilling method?

- A. Soda ash                      B. Petroleum  
C. Gold                         D. Copper

Use the map of Africa to answer questions 44

- 47



44. Which of these trees are commonly found in the natural vegetation zone marked V on the map of Africa?
- A. Camphor                      B. Ebony  
C. Teak                            D. Beech
45. The development project marked A on the map was MAINLY established in order
- A. To enhance industrial development  
B. To put more land under cultivation  
C. To create a major tourist attraction site  
D. To create a major fishing ground
46. The kingdom that existed in the shaded region marked Z by 1000 AD was established by \_\_\_\_\_.
- A. The Fulani                      B. The Soninke  
C. The Berbers                    D. The Tuaregs
47. The country marked T on the map of Africa?
- A. Is known as Zimbabwe  
B. Is known as Botswana  
C. Was a former German colony  
D. Was a former Belgian colony
48. The ancient town known as Casablanca is a tourist attraction in \_\_\_\_\_.
- A. Morocco                      B. Egypt  
C. Tunisia                         D. Libya
49. Which of these pairs of countries are members of both COMESA and SADC trading blocs?
- A. Kenya and Uganda  
B. Zimbabwe and Uganda  
C. Tanzania and Seychelles  
D. Tanzania and Mozambique
50. The first chairperson of the Organization of African Unity (O.A.U) when it was formed was \_\_\_\_\_.
- A. Abubakar Tafawa Balewa  
B. Kwame Nkrumah  
C. Sekou Toure  
D. Haile Selassie
51. Who among the following traditional African leaders led his community in collaborating with the Europeans during the colonial period?
- A. Samori Toure  
B. Kabaka Mwanga  
C. Mwanawina Lewanika  
D. Mukite Wa Nameme
52. One of the following early visitors to Eastern Africa was NOT involved in trading activities. Whom is it?
- A. Carl Peters  
B. John Speke  
C. William Mackinon  
D. Seyyid Said
53. Who among the following represented the Rift Valley region in the Legislative Council (LEGCO) after the 1957 elections in which Africans were involved?
- A. Ronald Ngala  
B. James Gichuru  
C. Daniel Arap Moi  
D. Bernard Mate
54. The following were officials of Kavirondo Taxpayers Welfare Association (K.T.W.A). Who was NOT?
- A. Jonathan Okwiri  
B. Owuor Gumba  
C. Simon Nyende  
D. Tom Mboya
55. In which of the following circumstances is one assumed to be a Kenyan citizen by birth?
- A. If a foreigner lives in Kenya for a continuous period of six years, he or she is assumed to be a citizen by birth.  
B. A foreigner married to a Kenyan citizen automatically becomes a citizen by birth.  
C. A child below eight years found in Kenya and whose parents are not known.  
D. A child from a foreign country and adopted by a Kenyan citizen.
56. One achievement of Haile Selassie is that
- A. He led his country to achieve independence.  
B. He abolished the ownership of slaves in his country.  
C. He defeated the Italians during the battle of Adowa.  
D. He started the communal land ownership in his country
57. Kenyans should not be arrested without a reasonable cause by the members of the Kenya Police Service because they enjoy the \_\_\_\_\_.
- A. Freedom of association.  
B. Right to life.  
C. Right to liberty.  
D. Right to Assembly

58. Three of the following are factors that undermine national unity. Which one is NOT?
- A. Nepotism.
  - B. Political intolerance
  - C. Regionalism
  - D. National curriculum
59. Who among the following officers who work in the National Assembly is in-charge of security?
- A. The Parliament accountant
  - B. The clerk of the National Assembly
  - C. The deputy speaker
  - D. The sergent-at-arms
60. Which of the following circumstances cannot lead to a member of parliament losing his or her seat?
- A. If the member misses six consecutive sittings in parliament without notifying the speaker.
  - B. If the member is appointed by the President to become a Cabinet Secretary.
  - C. If the member is elected the speaker of the national Assembly.
  - D. If the member is declared bankrupt by a court of law.

#### **CHRISTIAN RELIGIOUS EDUCATION**

61. When Adam and Eve ate the forbidden fruit in the garden of Eden it resulted to
- A. Them developing a closer relationship with God.
  - B. Them becoming as wise as God.
  - C. Them being thrown out of the Garden of Eden.
  - D. Them naming all the animals in the Garden of Eden.
62. When Abraham left Haran to unknown land he built an altar where he worshipped God at \_\_\_\_\_.
- A. Bethel
  - B. Gilgal
  - C. Jerusalem
  - D. Shiloh
63. Who among the following was a son of Naomi and Elimelech?
- A. Mahlon
  - B. Jesse
  - C. Joel
  - D. Abijah
64. Which of the following activities was performed by Israelites on the Passover night in Egypt?
- A. They prayed in the temples.
  - B. They made altars for God.
  - C. They ate bread that had no yeast.
  - D. They collected manna that was freely given by God.
65. Who among the following personalities in the Bible never served as a Judge?
- A. Deborah
  - B. Ehud
  - C. Gideon
  - D. Nathan
66. One of these books of the Bible is put in its right group. Which one is it?
- A. Joshua – Torah book
  - B. 1 Samuel – Minor prophetic book
  - C. Job – Historical book
  - D. Daniel – Major prophetic book
67. King Saul of Israel died during the war against the \_\_\_\_\_.
- A. Midianites
  - B. Amalekites
  - C. Philistines
  - D. Hittites
68. When King Solomon asked for wisdom from God, he was added one of the following. Which one is it?
- A. Wealth
  - B. Many women
  - C. Victory over enemies
  - D. Many children
69. Prophet Isaiah foretold that the Messiah would be called \_\_\_\_\_.
- A. The king of kings
  - B. The creator
  - C. The son of the most high
  - D. The Eternal Father
70. One of the miracles performed by prophet Elisha was \_\_\_\_\_.
- A. Bringing back to life the son of the widow.
  - B. Healing Naaman of Leprosy.
  - C. Multiplying the flour for a widow at Zarephath.
  - D. Healing the paralysed man
71. The Ark of the Covenant was brought to Jerusalem by one of the following Kings. Whom is it?
- A. King Hosea
  - B. King Saul
  - C. King David
  - D. King Solomon
72. Who among the following sons of Jacob saved Joseph when the brothers wanted to kill him?
- A. Simeon
  - B. Benjamin
  - C. Reuben
  - D. Naphtali
73. Naboth refused to sell his vineyard to King Ahab mainly because
- A. The king offered little money.
  - B. The king's wife was wicked.



- C. The land belonged to the family.  
D. He hated the king's greed.
74. Who among the following was present during the trial of Jesus?  
A. Barnabas                      B. Levi  
C. Judas Iscariot                D. Peter
75. According to the Apostles' Creed Jesus suffered under \_\_\_\_\_  
A. Pontius Pilate                B. King Herod  
C. The Pharisees                D. The Chief Priest
76. 'There will be a bad smell lord. He has been buried four days!' Who said these words during the raising of Lazarus back to life?  
A. Mary                              B. Martha  
C. Phoebe                            D. Lazarus' mother
77. Who among the following women was present during the presentation of Jesus in the temple?  
A. Prophetess Anna  
B. Mary, mother of James  
C. Lydia of Thyatira  
D. Mary, sister of Lazarus
78. Which of these books in the New Testament give us the life of Jesus here on earth?  
A. Prophetic books  
B. Historical books  
C. The epistles  
D. The gospel books
79. Jesus healed a paralytic and forgave the man's sin in one of the following towns. Which one is it?  
A. Cana                              B. Carpenaum  
C. Nazareth                        D. Jerusalem
80. The parable of Jesus that teaches on bringing back sinners to salvation is \_\_\_\_\_  
A. The mustard seed.  
B. The lost coin.  
C. The sower.  
D. The ten young women.
81. Who among the following members of the early church preached the gospel mostly to non-Jews?  
A. Peter                              B. James  
C. Paul                                D. John
82. One of the following people was healed by Jesus on a Sabbath?  
A. The blind man  
B. A man with a paralysed hand  
C. Simon Peter's mother-in-law  
D. The centurion's servant
83. Jesus was accused of claiming to be the Messiah and a king before one of the following officials. Whom was it?  
A. Pontius Pilate  
B. Governor Quirinius  
C. Augustus Caesar  
D. The Chief priest
84. Peter had a vision in which he learned that all people are equal before God at \_\_\_\_\_  
A. Troas                              B. Lydda  
C. Nazareth                        D. Joppa
85. Three of the following are forms of sexual misuse. Which one is NOT?  
A. Lesbianism                      B. Bestiality  
C. Defilement                      D. Truancy
86. Which of the following was a form of cleansing in traditional African religion?  
A. Sprinkling people with blood of goats  
B. Leading people in reciting verses in the bible  
C. Leading the people in reciting creeds  
D. Baptising people with water in rivers
87. The following are Christian beliefs about God. Which one is acceptable in traditional African religion?  
A. Salvation comes through God's son  
B. God exists in trinity  
C. God will send Jesus to judge sinners  
D. God is the father
88. The names Africans gave to God in traditional African societies MAINLY describe His \_\_\_\_\_  
A. Mercy                              B. Temper  
C. Character                        D. Absence
89. Christians in the early church best showed their unity by  
A. Singing songs  
B. Performing miracles  
C. Sharing their possessions  
D. Baptising new converts
90. Which of the following is a misuse of Leisure?  
A. Attending church retreats  
B. Over indulging in the same leisure activity  
C. Listening to Christian music  
D. Visiting prisoners in correctional institutions

**Below is the beginning of a story. Complete it making it as interesting as possible.**

The spectators stood up and cheered their team as the ball was kicked towards our goal.....

.....

.....

.....

.....

.....

.....

.....

.....

.....

.....

.....

.....

.....

.....

.....

.....

.....

.....

.....

.....

.....

.....

.....

.....

.....

.....

.....

.....

.....

.....

.....

.....

.....

.....

.....

.....

.....

.....

.....

.....





# HIGH FLYER TRIAL EXAM 2016

## STANDARD EIGHT

### MARKING SCHEME

ENGLISH	KISWAHILI	MATHS	SCIENCE	SOCIAL STUDIES	I.R.E	
1. D	1. A	1. C	1. B	1. B	51. C	1. C
2. C	2. A	2. A	2. C	2. C	52. B	2. B
3. B	3. D	3. D	3. B	3. D	53. C	3. A
4. A	4. A	4. B	4. A	4. C	54. D	4. D
5. A	5. B	5. B	5. C	5. B	55. C	5. C
6. D	6. D	6. A	6. B	6. A	56. B	6. C
7. D	7. B	7. C	7. C	7. A	57. C	7. A
8. A	8. A	8. D	8. A	8. D	58. D	8. C
9. C	9. B	9. C	9. D	9. A	59. D	9. B
10. B	10. C	10. D	10. C	10. A	60. A	10. B
11. B	11. C	11. B	11. B	11. A		11. B
12. A	12. D	12. A	12. D	12. D	<b>C.R.E</b>	12. B
13. D	13. B	13. A	13. B	13. B	61. C	13. C
14. D	14. A	14. D	14. C	14. B	62. A	14. A
15. D	15. D	15. B	15. B	15. A	63. A	15. C
16. B	16. C	16. C	16. A	16. B	64. C	16. B
17. B	17. C	17. C	17. C	17. D	65. D	17. A
18. B	18. A	18. D	18. A	18. C	66. D	18. A
19. C	19. D	19. A	19. D	19. A	67. C	19. C
20. C	20. B	20. C	20. B	20. D	68. A	20. C
21. D	21. B	21. C	21. C	21. A	69. D	21. C
22. B	22. B	22. B	22. A	22. C	70. B	22. C
23. B	23. D	23. C	23. C	23. C	71. C	23. A
24. A	24. A	24. A	24. C	24. D	72. C	24. B
25. D	25. A	25. A	25. A	25. D	73. C	25. C
26. A	26. C	26. D	26. D	26. A	74. D	26. C
27. B	27. D	27. B	27. C	27. A	75. A	27. C
28. B	28. D	28. B	28. A	28. B	76. B	28. C
29. B	29. A	29. D	29. C	29. D	77. A	29. C
30. C	30. B	30. D	30. D	30. D	78. D	30. B
31. C	31. D	31. A	31. B	31. C	79. B	
32. D	32. C	32. C	32. C	32. A	80. B	
33. D	33. B	33. A	33. B	33. B	81. C	
34. A	34. A	34. B	34. A	34. D	82. B	
35. A	35. B	35. D	35. C	35. C	83. A	
36. B	36. B	36. C	36. B	36. C	84. D	
37. A	37. C	37. D	37. D	37. A	85. D	
38. C	38. D	38. A	38. A	38. D	86. A	
39. A	39. A	39. C	39. C	39. D	87. D	
40. D	40. C	40. B	40. A	40. B	88. C	
41. A	41. B	41. B	41. A	41. B	89. C	
42. B	42. A	42. D	42. A	42. A	90. B	
43. C	43. B	43. A	43. A	43. B		
44. A	44. D	44. C	44. C	44. D		
45. D	45. A	45. A	45. B	45. B		
46. A	46. C	46. C	46. C	46. B		
47. D	47. C	47. B	47. C	47. C		
48. A	48. D	48. D	48. D	48. A		
49. A	49. B	49. B	49. B	49. C		
50. B	50. A	50. C	50. D	50. D		