

STEGA SERIES

STD 2 2016

MATHEMATICS

NAME _____ DATE _____

1. $8 + 4 =$


2. 3
 $+6$
 2

3. $9 - 2 =$

Write in words

4. $8 =$

5. $26 =$

6. 
_____ tens _____ ones

7. Complete the pattern

6, 7, _____, _____, 10


8. 10, 20, 30, _____, _____

Write in symbols.

9. Seven _____

10. $74 =$ _____ tens _____ ones

11. 0 tens and 7 ones = _____

12. 
= _____ tens _____ ones

13. 50

$+20$

14. 56
 $+33$

15. Two boys have _____ legs.

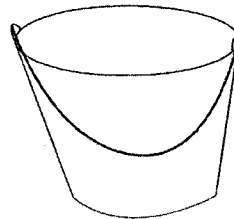
16. Name the shape _____.




(oval, rectangle, triangle)

17. Two girls have _____ legs.

18. Which holds less? _____



bucket



cup

19. $30 - \square = 25$

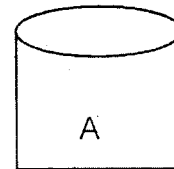
20. $5 + 5 + 5 =$ _____

21. $5 - \square = 2$

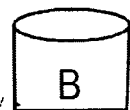
22. $4 + \square = 9$

23. 3 tens and 6 ones = _____

24. Which one holds more A or B? _____



A



B

25. $4 + 0 + 5 =$ _____

26. Write the missing numbers.

39, _____, 41, _____, 43

27. Arrange the numbers from the smallest to the biggest

36, 25, 12, 55

28. 70

+50

29. Add



= _____

30. 65

+40

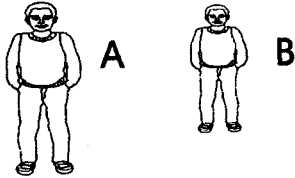
31. Complete

Tuesday, _____ Thursday, Friday

32. $59 + 0 =$

33. Which one is bigger 10 or 20? _____

34. Who is the shortest?



35.



sh 15.00



sh 8.00

How much is a ruler and a book?

= _____

36. 22

+11

37. $60 =$ _____ tens _____ ones

38. 8

+ □

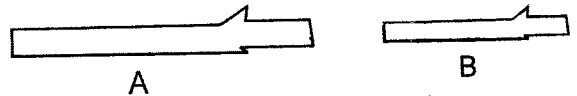
15

39. There are _____ days in a week.

(7, 10, 6)

40. $79 - 7 =$

41. Which one is long A or B? _____



42. $5 +$ _____ $= 11$

43. One week has _____ days.

44. Put together three bottles and two

bottles = _____

Write the missing numbers

45. 13, 14, _____, _____, 17, 18

46. _____ is the third day of the week.

(Wednesday, Tuesday)

47. 79, _____, 81, _____, 83

48. 80

- 60

49.  -  =

50. 6

+ 4

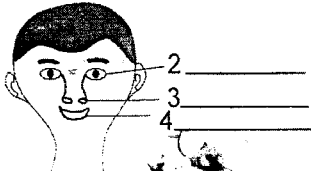
0

NAME _____

DATE _____

1. _____ is a personal item.
(handkerchief, table, books)

Name the body parts.




(nose, mouth, eye)

5. We clean our nose using a _____
(comb, handkerchief, brush)
6. We comb our hair with a _____
(stick, comb, broom)
7. This is a _____



(nose, ear, eye)

8. The weather is _____



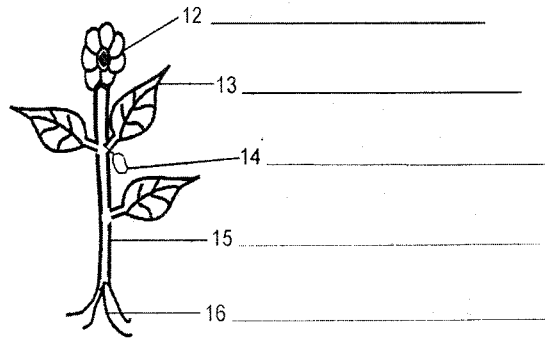
(cloudy, sunny, windy)

9. We use _____ and toothpaste
to clean our teeth.
(toothbrush, comb, jembe)
10. We clean our hands using soap
and _____
(salt, soil, water)
11. We carry this when the weather is



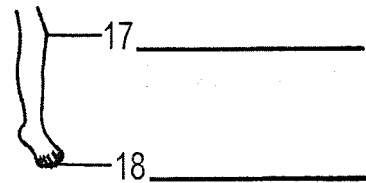
(windy, cloudy, rainy)

Name the parts of the plant.




(leaf, fruit, stem, roots, flower)

Name the body parts



(toes, knee, thigh)

19. _____ is a source of water.
(rain, tank, bottle)
20. My mother uses water to _____
utensils. (cook, wash, cut)
21. A _____ can produce light.
(stick, torch, book)
22. This girl is using a _____ to produce
sound.



(hands, eye, ear)

23. This balloon has _____ in it.



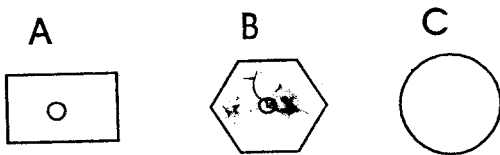
(water, soil, air)

24. Meat from a pig is called _____
(pork, mutton, beef)

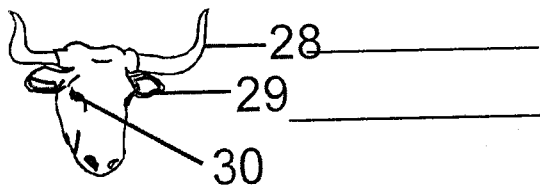
25. _____ gives us light during the day.
(moon, sun, book)

26. We use our ear for _____
(hearing, smelling, tasting)

27. Which is the best wheel for making a toy?




Name the body parts of the animal shown.



(mouth, ear, eye, horn)

31. The weather is _____



(windy, cloudy, rainy)

32. We smell with our _____
(eyes, nose, ears)

33. A _____ produces sound at school.



(whistle, bell, drum)

34. My mother cooked _____ yesterday.

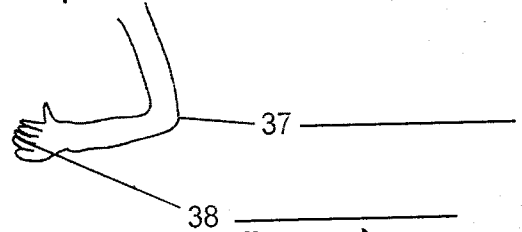


(maize, beans, oranges)

35. A _____ is an animal found at home.
(dog, elephant, lion)


36. We eat the _____ of an orange.
(fruit, stem, leaves)

The parts shown are



(leg, elbow, fingers)

39. The weather is _____



(cloudy, windy, rainy)

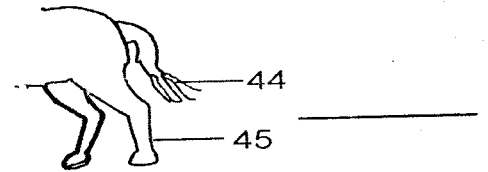
40. We can write on the _____
(milk, water, soil)

41. A _____ live in water. (cow, cat, fish)

42. Dirty legs will keep _____
(jiggers, dogs, lice)

43. A _____ is used for combing hair.
(stick, comb, jembe)

Name the parts



(leg, tail, eye)

46. We get water from _____
(soil, river, tree)

47. The weather is _____



(sunny, calm, rainy)

48. _____ cannot be seen.
(water, air, soil)

49. The sun gives us the light during the _____ only. (night, day)

50. A bicycle has _____ wheels.
(three, one, two)

STEGA SERIES

STD 2 2016

KISWAHILI

Sehemu ya A: Imla

Andika maneno nitakayosema

1. _____
2. _____
3. _____
4. _____
5. _____

Sehemu ya B: Kinyume

Andika kinyume

6. Wadogo _____
7. Rahisi _____
8. Safi _____
9. Vaa _____
10. Tajiri _____

Sehemu ya C: Kuandika kwa umoja

Andika maneno haya kwa umoja

11. _____ walimu
12. _____ magoti
13. _____ vitabu
14. _____ matunda

Sehemu ya D: Vitendawili

Tegua vitendawili hivi

15. Mama nielekee _____
16. Tik tak tik tak _____
17. Nyumba yangu haina taa _____
(saa, kaburi, kitanda)

Sehemu ya E: Kujaza pengo

Chagua silabi moja kwenye mabano ambayo inaweza kutumiwa kukamilisha neno ulilopewa

18. _____ nza (kwa, nwa)
19. nje _____ (mu, ma)
20. _____ rofa (fo, gho)

Sehemu ya F: Ufahamu

Soma hadithi hii kisha ujibu maswali

Oga alikuwa jambazi hatari.

Aliiba vitu vipya na kuviuza ovyoovy.

Siku moja Oga aliingia dukani

kimyakimya na kuiba vyuma na

vyungu vya dhahabu. Alipoingia tu,

kingora kikaanza kulia. Oga

hakutarajia hayo akaanza kutoroka.

Polisi wakafyatua risasi ikamuumiza

mguu.

21. Oga alikuwa jambazi _____
22. Aliiba vitu na kuviuza _____
23. Aliiba vyuma na vyungu vya _____
24. Ni nini kilianza kulia alipoingia tu? _____
25. Ni nani walifyatua risasi? _____

(Alama 25)

STEGA SERIES

STD 2 2016

MTIHANI WA KUSOMA

Soma kwa sauti

Marangi alifunga safari kwenda kwa Kingori.
Yeye na Kingori wakala mayai ya kukaanga.
Walipomaliza walielekea eneo la wazi
kulikokuwa na maua. Walitoa mkeka na kuulalia.
Waliwaona kuku waliokuwa wameangua
vifaranga.

(Alama 30)

STEGA SERIES

STD 2 2016

CRE

NAME _____

DATE _____

- | | |
|--|---|
| 1. Tabitha was also called _____
(Naomi, Dorcas, Hannah) | (12, 11, 10) |
| 2. Samuel was called _____ times.
(4, 2, 3) | 11. The church is the house of _____
(God, devil, animals) |
| 3. Jesus was born in _____
(Jericho, Bethlehem, Joppa) | 12. Jesus was baptised in river _____
(Tana, Jordan, Chania) |
| 4. _____ means talking to God.
(dancing, playing, praying) | 13. Jesus changed water into _____
(wine, soda, tea) |
| 5. Jesus had _____ disciples.
(12, 11, 10) | 14. _____ forgives our sins.
(parent, teachers, God) |
| 6. We should _____ our parents.
(obey, beat, laugh) | 15. Mary and Martha were sisters to _____
(Peter, Lazarus, John) |
| 7. _____ is a holy book.
(Quran, Bible, kamusi) | 16. Jesus died for our _____
(animals, money, sins) |
| 8. The _____ brought gifts to baby
Jesus.
(wisemen, shepherd, pastor) | 17. _____ obeyed God
(Abraham, Mary, Joseph) |
| 9. _____ taught his disciples the Lord's
payer.
(Jesus, Abraham, Samuel) | 18. Tabitha lived in a small town called
(Jericho, Joppa, Bethlehem) |
| 10. Joseph had _____ brothers. | 19. The little _____ shared his food.
(woman, girl, boy) |
| | 20. Jesus healed _____ mother-in-law.
(Peter, Simon Peter's, Samuel) |

STEGA SERIES

STD 2 2016

ENGLISH READING EXAM

Read the story aloud to the teacher

Father and Mike are on a trip. They want to see Sam. Sam is at school far away. They have some food for Sam. They have to take the train.

(30 Marks)

STEGA SERIES

STD 2 2016

SOCIAL STUDIES

NAME _____

DATE _____

1. A ____ helps us to cross the rivers.
(cars, bridge, trees)
2. We get ____ from trees.
(timber, soil, water)
3. People that we do not know are ____
(teachers, strangers, pedestrian)
4. It is safe to cross the road at ____
(bend, night, zebra crossing)
5. We should keep our classrooms ____
(untidy, tidy, smell)
6. _____ is not found in the house.
(bed, forest, chair)
7. Another name for class monitor is
(prefect, teacher, pastor)
8. Pupils sit on _____
(tables, chairs, books)
9. _____ guards our school at night.
(mother, teachers, watchman)
10. At school we learn how to read
and _____ (write, sleep, fight)
11. Father, mother and children form a
_____ family.
(nuclear, single, extended)
12. A house protects us from _____
(friends, rain, parents)
13. This is a _____ house.



- (manyatta, permanent, mabati)
14. The people who live near us are
called _____
(strangers, neighbours, villagers)
 15. Traditional houses are roofed with

- (grass, tiles, iron sheet)
16. The children of your aunt are ____
(nephew, cousin, uncle)
 17. People are happy during ____
(birthday, burial, death)
 18. A ____ grows crops and keep
animals.
(teacher, fisherman, farmer)
 19. A ____ helps us to carry our things.
(donkey, goats, cow)
 20. A room where we sleep is called a
(kitchen, bedroom, sitting room)
 21. ____ makes our compound look
beautiful.
(rubbish, cows, flowers)
 22. _____ is used for building.
(timber, orange, soda)
 23. On ____ we raise the flag.
(Thursday, Monday, Tuesday)
 24. Children wear ____ while going to
school.
(uniform, sacks, flag)
 25. We get meat and wool from ____
(cow, sheep, pig)
 26. We clean the compound using ____
(sticks, broom, nails)
 27. Food makes us _____
(sick, grow, eat)
 28. Clothes, shelter and ____ are
basic needs.
(medicine, food, school)
 29. We get water from the ____
(river, soil, trees)
 30. A ____ shows what we learn in a
day. (bell, timetable, register)

STEGA SERIES

STD 2 2016

ENGLISH

Part A: Dictation

Write the words as the teacher says them

1. _____
2. _____
3. _____
4. _____
5. _____

Part B: Writing in capital letters

Write the following words in capital letters

6. shell _____
7. play _____
8. wings _____
9. bird _____
10. milk _____

Part C: Write the sentences correctly

11. boy Tom is a _____
12. two have 1 feet _____
13. small girl a I am _____
14. book one have I _____
15. pet a Sam has _____

Part D: Making sentences

Make sentences using the following words

e.g pot - This is a pot

16. mat _____
17. cat _____
18. hen _____
19. sit _____
20. nose _____

Part E: Passage

Read the passage below and answer the questions

Tamara and Mat like to play games. They like hide and seek game. Mat hides in the big room. Tamara looks under the table. Mat is not there. Tamara looks under the bed. Mat is not there. Tamara looks under the big seat. Mat is not there.

21. Tamara and Mat like to play _____
22. They like playing hide and _____ game.
23. Where does Mat hide? _____
24. Tamara looks for Mat under the table and under the _____
25. Does Tamara see Mat? _____

(25 marks)