

STEGA SERIES

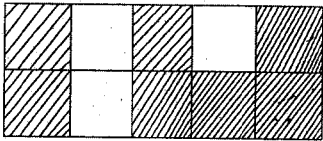
STANDARD FOUR 2016

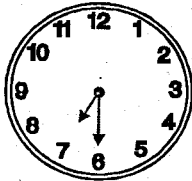
MATHEMATICS

Time: 2 Hours

- Write in figures;
Four thousand and forty four.
A. 4444 B. 4404
C. 4044 D. 400044
- Which number comes immediately before 9900?
A. 9800 B. 9899
C. 8899 D. 9999
- Fill in the missing numbers
 $\square - 55 = 55$
A. 110 B. 0
C. 100 D. 1010
- Work out;

Weeks	Days
11	0
- 6	5
<hr/>	
<hr/>	

A. 5 wks 2 days B. 4 wks 5 days
C. 4 wks 2 days D. 5 wks 5 days
- Which of the following is **not** a true statement?
A. $24 = 4 \times 6$ B. $24 = 7 \times 4$
C. $24 = 3 \times 8$ D. $24 = 12 \times 2$
- What fraction is unshaded?


A. $\frac{3}{10}$ B. $\frac{7}{10}$
C. $\frac{10}{3}$ D. $\frac{10}{7}$
- Expand; 8743
A. $800 + 700 + 40 + 3$
B. $43 + 40 + 700 + 800$
C. $8000 + 7000 + 403$
D. $8700 + 700 + 40 + 3$
- 3 hours = _____ minutes
A. 300 B. 72
C. 36 D. 180
- How many days are there in the months of April, September and December?
A. 91 B. 90
C. 92 D. 93
- What is the place value of digit 7 in the number 9876?
A. Tenths B. Hundreds
C. Ones D. Tens
- Work out;
 $\frac{4}{7} + \frac{3}{7} =$
A. $\frac{7}{14}$ B. 1
C. 2 D. $\frac{1}{7}$
- What is the time on the clock?


A. 8.30 B. 5.30
C. 6.30 D. 7.30
- Subtract 111 from 800
A. 799 B. 711

- C. 789 D. 689
14. Divide;
- $$9 \overline{)63}$$
- A. 7 B. 6
C. 8 D. 10
15. How many days are there in 5 weeks and 5 days?
A. 35 B. 70
C. 25 D. 40
16. A school has 1100 pupils. 679 are girls, how many boys are there?
A. 579 B. 521
C. 421 D. 1779
17. How many half litres packets are 10 litres?
A. 5 B. 12
C. 20 D. 40
18. Betty had 15 oranges. She shared them among her 4 friends. How many oranges remained?
A. 4 rem 3 B. 3
C. 4 D. none
19. Work out;
- $$4 \overline{) \text{sh } 16 \text{ 40 cts}}$$
- A. sh 4 01 cts B. sh 2 10 cts
C. sh 4 40 cts D. sh 4 10 cts
20. What is the next number in the pattern?
9, 14, 19, 24, _____
A. 29 B. 28
C. 30 D. 35
21. Fill in the missing numbers.
 $\square \div 7 = 7$
A. 1 B. 49

- C. 14 D. 42
22. What is $\frac{2}{9}$ of 18?
A. 4 B. 2
C. 9 D. 3
23. Arrange from the largest to the smallest.
 $\frac{1}{8}, \frac{1}{4}, \frac{1}{6}$
A. $\frac{1}{4}, \frac{1}{8}, \frac{1}{6}$ B. $\frac{1}{4}, \frac{1}{6}, \frac{1}{8}$
C. $\frac{1}{8}, \frac{1}{6}, \frac{1}{4}$ D. $\frac{1}{8}, \frac{1}{4}, \frac{1}{6}$
24. Work out;
- | | |
|-------|-----|
| Sh | cts |
| 8 | 36 |
| + .5 | 74 |
| <hr/> | |
- A. sh 14 10 cts B. sh 13 110 cts
C. sh 14 110 cts D. sh 13 10 cts
25. How many sh 50 notes are there in a sh 200 note?
A. 150 B. 4
C. 250 D. 8
26. Sh 9 _____ cents.
A. 90 B. 108
C. 900 D. 450
27. A class has 48 pupils. One day $\frac{1}{6}$ of the pupils were absent. How many pupils were absent?
A. 42 B. 6
C. 40 D. 8
28. In the 99999 the second nine represents 90. What does the fourth nine represent?
A. 900 B. 90
C. 9000 D. 90000

29. Which one is heavier?

10 kg of wool

10 kg stones

10 kg of feathers

A. None B. Stones and wool

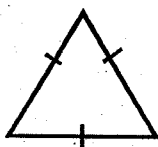
C. Stones D. Feathers only

30. After a wedding, the couple went for a holiday for 8 weeks. How many days was the holiday?

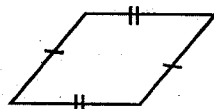
A. 40 B. 56

C. 54 D. 48

31. Which of the following shapes is a square?



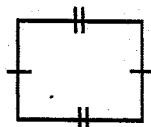
A



B



C



D

32. Joseph uses 4m of material to make a suit. How many metres will be required to make ten suits?

A. 14 B. 140

C. 41 D. 40

33. Work out;

$$6 \times 0 \times 5 =$$

A. 0 B. 300

C. 30 D. 110

34. Write $\frac{3}{4}$ in words.

A. Four thirds B. Three over four

C. Three fourths D. Three quarters

35. A class has 40 desks. In each desk there are two pupils. How many pupils are in the class?

A. 81

B. 80

C. 42

D. 402

36. Monica earned sh 9000 in January 2016. She spent sh 5775 and saved the remainder. How much was her savings?

A. 4775

B. 4225

C. 3225

D. 14775

37. Add;

wks days

9 7

+ 1 3

A. 11 wks 0 days B. 10 wks 3 days

C. 10 wks 10 days D. 11 wks 3 days

38. Complete the following

$$\square /_7 + \frac{2}{7} = \frac{5}{7}$$

A. 3

B. 2

C. 7

D. 1

39. A school received 1240 books in the year 2012 and 2946 books in the year 2015. How many books did the school receive altogether for the two years?

A. 4186

B. 3186

C. 8213

D. 7213

40. Write 10010 in words.

A. one hundred and ten

B. one thousand and ten

C. ten thousand and zero one

D. ten thousand and ten

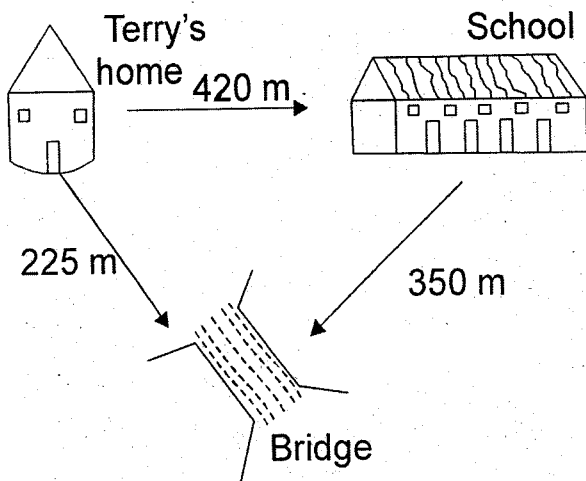
41. Use the correct words to complete the statement.

$$\frac{1}{3} \text{ --- } \frac{1}{4}$$

- A. is equal to B. is smaller than
C. is greater than D. none

42. How many sides does a triangle have?
A. 3 B. 2
C. 4 D. 5
43. Peter got an orange and shared it among his four friends. What share did each get?
A. $\frac{1}{3}$ B. $\frac{1}{2}$
C. 4 D. $\frac{1}{4}$
44. Find the product of 9 and 9
A. 18 B. 72
C. 81 D. 63

Use the diagram below to answer questions 45-46




45. How many metres are there from Terry's home to the bridge through the school?
A. 225m B. 770m

- C. 575m D. 995m

46. Terry went to the bridge and crossed it to go to school. How many metres did he walk that day?
A. 995 m B. 665 m
C. 895 m D. 575 m
47. The cost of 5 chairs is sh 250. What is the cost of 1 chair?
A. 50.00 B. 250.00
C. 100.00 D. 750.00
48. Work out;
- | | |
|-------|-------|
| sh | cts |
| 20 | 15 |
| - | 11 27 |
| _____ | |

- A. sh 31 42 cts B. sh 10 88 cts
C. sh 9 88 cts D. sh 8 88 cts
49. Which of the following numbers will not give a remainder when divided by 5?
A. 36 B. 40
C. 42 D. 28
50. A school has 250 boys, 47 teachers and 253 girls. Who are the least?
A. Girls B. All
C. Boys D. Teachers



STEGA SERIES
DARASA LA NNE 2016
KISWAHILI

MUDA: 1: DAKIKA 40

Jaza kwa kuchagua jibu sahihi zaidi

Wahenga 1 siku 2 mwizi ni 3. Rafiki 4 hakujua ukweli 5 methali
6 hadi 7 alipofumaniwa 8 maembe 9 shamba 10 Bwana
Matata.

Bwana Matata hakumwonea 11 kwa kosa 12, baada ya kumwadhibu alimpeleka
13 kwa wazazi 14 ambao walishangazwa na kitendo 15

- | | | | | |
|-----|--------------|-------------|---------------|--------------|
| 1. | A. ilisema | B. walisema | C. hawakusema | D. hawakuona |
| 2. | A. ya | B. wa | C. za | D. cha |
| 3. | A. harubaini | B. arubaini | C. harobaini | D. aruba |
| 4. | A. yangu | B. changu | C. langu | D. pangu |
| 5. | A. la | B. vya | C. za | D. wa |
| 6. | A. huyu | B. hii | C. hili | D. hiki |
| 7. | A. vile | B. mle | C. kule | D. pale |
| 8. | A. akila | B. akiiba | C. akichukua | D. akiokota |
| 9. | A. katika | B. kwa | C. na | D. ni |
| 10. | A. vya | B. mwa | C. la | D. pa |
| 11. | A. huruma | B. uruma | C. ubaya | D. uzuri |
| 12. | A. huyo | B. hicho | C. ilo | D. hilo |
| 13. | A. adi | B. hadi | C. paka | D. ati |
| 14. | A. yake | B. chake | C. wake | D. lake |
| 15. | A. icho | B. hicho | C. huyo | D. huo |

Jibu maswali kulingana na maagizo

16. Jaza kwa kivumishi kifaacho.

Kijana _____ adabu ni yule.

- A. chenye B. mwenye
C. mwenyewe D. lenye

17. Ukubwa wa neno mtoto ni

- A. kitoto B. jitoto
C. toto D. matoto

18. Suruali fupi zinazovaliwa na watoto wavulana huitwa

- A. suruali B. chupi
C. soksi D. kaptura

19. $\frac{1}{5}$ kwa maneno ni

- A. humusi B. robo
C. nusu D. thuluthi

20. Sehemu ya mbele ya uso huitwaje?

- A. kisogo B. paji
C. wayo D. ndewe

21. Kamilisha kwa tashbihi ifaayo.

Kabura ni mfupi kama

- A. mdudu B. nyoka
C. nyundo D. miguu

22. Tumia ndi ipasavyo

Shamba hili _____ lenye mapapai.

- A. ndilo B. ndicho
C. ndivyo D. ndiko

23. Yupi kati ya hawa si ndege.

- A. bata B. buibui

- C. njiwa D. mwewe

24. Jaza pengo kwa kiashiria kifaacho.

Mguu _____ umeshambuliwa na funza.

- A. hii B. huu
C. hilo D. huyu

25. Makao ya ng'ombe ni kwenye

- A. miti B. zizi
C. kiota D. msitu

26. Mwezi mmoja una wiki au majuma mangapi?

- A. Matatu B. Mawili
C. Manne D. Matano

27. Juma alitaka kwenda msalani kwa hivyo alimwambia mwalimu

- A. nisamehe B. pole
C. tafadhali D. hujambo

28. Umbo hili huitwaje



- A. duara B. nusu duara
C. mstatili D. pembe tatu

29. Binadamu ana miguu nayo magari yana

- A. tairi B. maguu
C. magurudumu D. tatendagu

30. Juma huanza siku ya

- A. Jumapili B. Jumamosi
C. Jumatatu D. Ijumaa

Soma ufahamu kisha ujibu maswali 31-40

Jamaa wa eneo hili alikwama ndani ya kanisa lao usiku wa wakati alipojaribu kuiba mali ya kanisa hilo.

Penyenye zinasema kwamba jamaa huyo aliingia ndani ya nyumba ya Mungu kupitia dirishani akiwa na nia ya kuiba vifaa vya kuhubiri na baada ya kukusanya bidhaa hizo alikwama hadi asubuhi alipopatikana na mchungaji aliyefika kanisani kwa ibada ya asubuhi.

Penyenye zilizidi kuarifu kuwa jamaa alijaribu kumhadaa pasta kwamba alikuwa amefika kanisani humo kwa sala ya asubuhi lakini uongo wake haukumsaidia ilipogunduliwa alikuwa amevunja dirisha na kukusanya vifaa vya kuhubiri. Hata hivyo, pasta alimsamehe alisema Mungu hulinda mali ya kufanya kazi yake.

31. Jamaa anayezungumziwa alikwama wapi?

A. Nyumbani B. Kanisani

C. Shuleni D. Shimoni

32. Jamaa huyo alikuwa anajaribu

A. kuomba B. kulala

C. kuiba D. kuruka

33. Kanisa ni mahali pa

A. kuchezea B. kusomea

C. kuombea D. kulala

34. Mshukiwa alipitia kwenye

A. mlango B. paa

C. ukuta D. dirisha

35. Aliponaswa kalameni huyu alisema kuwa alifika kanisani kwa

A. sala ya jioni B. sala ya usiku

C. sala ya asubuhi D. maombi

36. Kumhadaa pasta ni

A. kumdanganya

B. kuomba msamaha

C. kukataa

D. kukubali

37. Kanisani utampata pasta au

A. kasisi B. mpishi

C. daktari D. mvuvi

38. Jamaa huyo alinaswa akijaribu

A. kuruka

B. kuiba vifaa vya kuhubiri

C. kuiba bibilia

D. kuiba viti vya kanisa

39. Ni nani aliyemsamehe jamaa huyu mwizi?

A. pasta B. Mungu

C. watu D. muumini

40. Habari hii ni kuhusu

A. Kanisa laibiwa

B. mwizi anaswa kanisani

C. pasta na mwizi

D. mwizi apitia dirishani

Soma kifungu hiki kisha ujibu maswali 41-50.


Mwanaume wa hapa aliwashangaza wengi kwa kuendelea na mipango ya harusi hata baada ya kujeruhiwa vibaya na majambazi waliomshambulia. Jamaa huyo alifunga pingu za maisha akiwa na bendeji usoni akionekana kuwa na maumivu tele.

Juhudi za jamaa na marafiki kumshauri afutilie mbali mpango huo hadi apate afueni hazikufua dafu alipositiza kwamba lazima afanye harusi.

Yadaiwa kwamba, jamaa alikutana na wakora usiku, siku chache kabla ya tarehe ya harusi waliompiga na kumjeruhi vibaya. "Aliporuhusiwa kutoka hospitali, jamaa aliapa kuendelea na mipango ya harusi na kuwapuuza waliombembeleza asubiri apate nafuu," akasema mdokezi.

Waliohudhuria sherehe hiyo waliachwa vinywa wazi kuona bwana harusi akiwa na bendeji usoni.

- | | |
|--|---|
| <p>41. Mwanaume aliwashangaza wengi kwa nini?</p> <p>A. Alikuwa hajali</p> <p>B. Hakuogopa</p> <p>C. Aliendelea na harusi</p> <p>D. Hakufanya harusi alipojeruhiwa</p> | <p>47. Kupata nafuu ni</p> <p>A. kuwa mgonjwa</p> <p>B. kupona</p> <p>C. kuugua</p> <p>D. kuumia</p> |
| <p>42. Kinyume cha mwanaume ni</p> <p>A. mume B. mwanamke</p> <p>C. bibi D. bwana</p> | <p>48. Hospitali mtu hutibiwa na</p> <p>A. mkunga</p> <p>B. mwalimu</p> <p>C. daktari</p> <p>D. mama</p> |
| <p>43. Mwanaume anayezungumziwa alikutana na wakora wakati wa</p> <p>A. mchana B. jioni</p> <p>C. asubuhi D. usiku</p> | <p>49. Waliohudhuria sherehe hiyo waliachwa vinywa wazi kuona bwana harusi na</p> <p>A. bendeji mkononi</p> <p>B. bendeji kichwani</p> <p>C. kitambaa mkononi</p> <p>D. bendeji usoni</p> |
| <p>44. Waliompiga na kumjeruhi jamaa huyu ni</p> <p>A. jambazi B. wezi</p> <p>C. wakora D. watu</p> | <p>50. Habari hii ni kuhusu</p> <p>A. Harusi ya wakora</p> <p>B. Harusi ya jamaa</p> <p>C. Jamaa afanya harusi na bendeji</p> <p>D. Jamaa apata nafuu</p> |
| <p>45. Jamaa huyu alijeruhiwa</p> <p>A. vibaya B. kidogo</p> <p>C. sana D. hakujeruhiwa</p> | |
| <p>46. Aliporuhusiwa kutoka hospitalini jamaa huyu aliapa</p> <p>A. kuendelea na harusi</p> <p>B. kuacha harusi</p> <p>C. kupata njia nyingine</p> <p>D. kuwapiga wakora</p> | |



STEGA SERIES

STANDARD FOUR 2016

ENGLISH

Time: 1 hour 40 minutes

Read the following broken passage carefully. For each blank space numbered 1-10, choose the best alternative from the choices given.

Once 1 a time there lived 2 old man with his 3. His name was Maina. He 4 with his four sons. In 5 village. He had a farm but his family was 6 as the four sons 7 always busy fighting instead 8 helping their father 9 cultivating 10 land so the old man was very unhappy.

- | | | | | |
|-----|---------|----------|-----------|----------|
| 1. | A. up | B. in | C. on | D. upon |
| 2. | A. the | B. an | C. a | D. him |
| 3. | A. wife | B. wives | C. wive | D. waife |
| 4. | A. live | B. lived | C. left | D. lives |
| 5. | A. a | B. the | C. on | D. in |
| 6. | A. big | B. poor | C. unable | D. small |
| 7. | A. were | B. are | C. at | D. there |
| 8. | A. off | B. in | C. on | D. of |
| 9. | A. at | B. to | C. on | D. in |
| 10. | A. his | B. the | C. theirs | D. hers |

Read the passage below and answer questions 11-15. Choose the best words from the choices given to

fill in the blank spaces

When power rationing 11, we had to plan 12 in advance. We had to iron our 13 a day earlier. The food 14 the freezer was no longer 15 enough.

- | | | | | |
|-----|------------|----------------|----------|---------------|
| 11. | A. begun | B. began | C. begin | D. beginning |
| 12. | A. most | B. every thing | C. all | D. everything |
| 13. | A. clothes | B. cloths | C. wears | D. materials |
| 14. | A. at | B. in | C. in | D. by |
| 15. | A. poor | B. safer | C. safe | D. save |

Choose the opposite of the underlined word to answer questions 16-18

16. It was a difficult exam.
A. hard B. tough
C. easy D. fair
17. Mariam is a very pretty girl.
A. simple B. ugly
C. plain D. beautiful
18. Father allowed us to go and play.
A. permitted B. deceived
C. helped D. refused

Fill in the blanks space for questions 19 and 20 using the correct word

19. The thief jumped _____ the fence.
A. out B. over
C. across D. under
20. We are sitting _____ a tree.
A. inside B. under
C. across D. on

For questions 21-23, complete the sentences using the best simile

21. As busy as a _____
A. fly B. cat
C. bee D. dog
22. As sweet as _____
A. big G B. pancake
C. honey D. sweet
23. As soft as _____

- A. pancake B. mattress
C. butter D. clay

For questions 24-26 choose one word for the following

24. Cabbages, kales, tomatoes, _____
A. items B. fruits
C. vegetables D. greens
25. Desks, tables, chairs, _____
A. furnitures B. wood
C. furniture D. items
26. Minibuses, buses, cars, _____
A. vans B. machines
C. cars D. vehicles

For questions 27-30 choose the correct word to fill in the blank spaces

27. A nun lives in a _____
A. church B. home
C. convent D. monetary
28. Tom is too fat _____ pass through the door.
A. to B. so
C. and D. for
29. It was so funny _____ we all laughed.
A. so B. and
C. that D. for
30. The weather is hot _____ dry.
A. so B. however
C. but D. and

Read the following passage carefully and answer questions 31-40.

It is important to plant trees. Trees help attract rain. With the presence of forests in our land we get plenty of rain that makes farming easy. Crops are grown and people are able to feed themselves.

Trees are also important because they are homes to many wild animals. They include cheetahs, leopards, lions, zebras and giraffes. These animals attract tourists in our country. Tourists bring money to our country.

Trees are also a source of food to man and many animals. They also act as medicine for many diseases. We should therefore conserve our trees. Let us make it a habit to plant trees and not cut the existing trees.

Our country is now suffering due to drought that has been caused by lack of rain. This is because we have participated in cutting down trees in our country.

31. Why is it important to plant trees?
 A. They attract rain
 B. They bring drought
 C. They bring shade
 D. They make the land beautiful
32. If we have plenty of rain,
 A. grass will dry
 B. crops will grow
 C. trees will attract it
 D. farming becomes difficult
33. What attracts rain?
 A. Trees
 B. Bare land
 C. Forest
 D. Cutting down trees
34. Trees are home to all the following EXCEPT
 A. giraffe
 B. leopard
 C. lion
 D. shark
35. Tourists _____
 A. are white people
 B. come to preach
 C. bring money to our country
 D. plant trees in our country
36. Which one of the following is not one of the uses of trees?
 A. Medicine
 B. Clothing
 C. Home for man
 D. Food for man
37. We should make it a habit to
 A. plant trees
 B. cut down trees
 C. keep trees
 D. replant trees
38. Why is our country suffering?
 A. There is famine
 B. There is plenty of rain
 C. There are no forests
 D. Food has reduced
39. To avoid drought in our country we should
 A. burn wood to make charcoal
 B. avoid planting trees
 C. destroy the forest
 D. conserve the forest
40. The BEST title for the above passage is
 A. conserving the forest
 B. tree planting day
 C. cutting down trees
 D. drought in Kenya

Read the passage below carefully and answer questions 41-50.

The barber and his wife now led a comfortable life and easily afforded three full meals a day. The barber had now become a farmer, largely due to the efforts of his wife. Many people in the city came to know about the barber's achievements and among them were also the thieves who had been made to plough the field.

When the thieves realised that they had been tricked by the barber's wife, they grew very angry. They decided to go to the barber's house and ask for their share of the harvest.

The barber was puzzled to hear the thieves' words but to his relief, his wife also came there and said with laughter, "I told you there was gold in the ground but you didn't find it. I have and there's a jar full of it in the house, only you shall never have a coin of it!"

Then the thieves left the house, threatening the husband and wife to rob their house that night.

(Adapted from Daily Nation of 1st Oct 2013)

41. How many meals a day was the barber and his wife now able to afford?
- A. Three half meals
 - B. Two half meals
 - C. Three full meals
 - D. One meal a day
42. What work did the barber and his wife do?
- A. Shaving people
 - B. Trading
 - C. Farming
 - D. Keeping cattle
43. Whose effort helped the barber to become a farmer?
- A. Thieves
 - B. His wife
 - C. Friends
 - D. Neighbours
44. A person who cuts people's hair is called
- A. an optician
 - B. farmer
 - C. a barber
 - D. hairdresser
45. According to the passage who tricked the thieves?
- A. The farmer
 - B. The barber
 - C. The barber's wife
 - D. Friends
46. The word 'plough' has been used in the passage. It can also mean
- A. dig
 - B. jump
 - C. ploughed
 - D. harvesting
47. Who was puzzled to hear the thieves words?
- A. The barber's wife
 - B. The neighbours
 - C. Barber's friend
 - D. The barber
48. How were the thieves tricked?
- A. To help in farming
 - B. To help in harvesting
 - C. That there was gold in the jar
 - D. That there was gold in the ground
49. What did the thieves threaten to do?
- A. To rob the barber and his wife
 - B. To steal the gold
 - C. To kill the barber and the wife
 - D. To destroy their crops
50. What is the best title of the passage?
- A. The barber and the farm
 - B. The barber
 - C. The barber's clever wife
 - D. The barber and the thieves

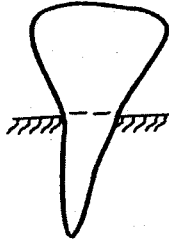
STEGA SERIES

STANDARD FOUR 2016

SCIENCE

Time: 1 hour 40 min

1. Name the tooth below.



- A. incisor B. canine
C. premolar D. molar

2. Which one of the following small animals has wings?

- A. Safari ant B. Bee
C. Snail D. Millipede

3. Which group is made up of plants that grow in dry areas?

- A. Mangrove, reeds B. Maize, papyrus
C. Acacia, cactus D. Oats, waterlily

4. A _____ is the house of a pig.

- A. sty B. stable
C. pen D. hutch

5. Dirt in the ears is known as _____

- A. mucus B. soil
C. cotton bud D. wax

6. Neem tree is used as a _____

- A. spice B. medicine
C. clothe D. sock

7. Which one of the following statements is **not** true about

soil?

- A. Soil from a river bank feels smooth
B. Soil from a building site feels rough
C. Soil from a garden feels very smooth

D. There are three types of soil

8. Class four pupils collected a clean white piece of cloth, a clean container and muddy water in a clear bottle.

The pupils wanted to _____ water.

- A. filter B. boil
C. store D. transport

9. An aeroplane flying across the sky looks small because

- A. it is near B. it is far
C. it is flying D. it is small

10. Simple machines make work _____

- A. hard B. difficult
C. less D. easier

11. In order to keep our compound safe, we can surround them with


- A. dogs B. flowers
C. fence D. gates

12. A human being has _____ incisors in each jaw.


- A. 4 B. 8
C. 3 D. 2

13. Which one of the following plants is not used as food?
 A. Maize B. Millet
 C. Cactus D. Sorghum
14. Which one of the following is a tamed animal?
 A. Lion B. Cat
 C. Termites D. Ostrich
15. The tooth that is sharp pointed is used for _____.
 A. grinding B. chewing
 C. cutting D. tearing
16. Which one of the following is **not** a harmful animal?
 A. Flea B. Tick
 C. Fish D. Rat
17. On a hot day one is likely to wear
 A. T-shirt B. Jacket
 C. Raincoat D. Pullover
18. _____ is not a source of water.
 A. Rain B. Tap
 C. Well D. Borehole
19. Which one of the following is a problem related to teeth?
 A. Tooth cavity B. Shedding teeth
 C. Dental floss D. Dental check-up
20. The first twenty teeth to grow in a child are known as
 A. incisor teeth B. wisdom teeth
 C. milk teeth D. permanent teeth
21. The following are uses of plants to human beings **except**

- A. food B. clothes
 C. paper D. water
22. To drive in nails into a piece of wood we should use
 A. spade B. rake
 C. claw hammer D. screw driver
23. Things that should not be shared are known as
 A. socks B. personal items
 C. hygiene D. towel
24. A donkey does not have
 A. horns B. tail
 C. legs D. nose
25. When cleaning a handkerchief one should use _____ to remove mucus with ease.
 A. soap B. salt
 C. warm water D. ash
26. The leaf below belongs to _____ plant.



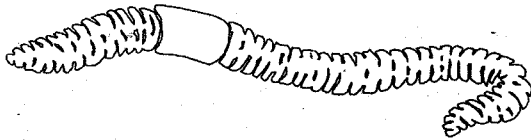
- A. maize B. bean
 C. pawpaw D. banana
27. The meat from a goat is known as
 A. beef B. fillet
 C. mutton D. pork
28. The experiment below was done by pupils at




The pupils were investigating

- A. presence of air in the soil
 B. presence of water in soil
 C. presence of air in water
 D. air bubbles
29. One of the following is a good behaviour when having meals. Which one is it?
 A. Chew with open mouth
 B. Putting alot of food in the mouth each time
 C. Not licking fingers
 D. Swallowing food before chewing
30. Plants that grow where they are not wanted are called
 A. grass B. weeds
 C. maize D. coffee
31. Moving air is important to man for the following reasons **except** in
 A. winnowing B. moving windmills
 C. drying clothes D. felling trees
32. A _____ is formed when light is blocked.
 A. image B. reflection
 C. shadow D. picture
33. Which one of the following is **correctly** matched with the part eaten?
 A. Sweet potatoes - roots
 B. Sugarcane - roots
 C. Banana - stem
 D. Oranges - seeds
34. To make water safe for drinking we should _____ it.
 A. filter B. boil
 C. store D. cook
35. A tortoise protects itself from danger by
 A. running away B. stinging
 C. hiding in a shell D. coiling
36. Which one of the following statements is **false**?
 A. Water has no air
 B. Soil has air
 C. A ball is filled with air
 D. We can feel air
37. Which one of the following is **not** a special sound?
 A. Car hooting B. Beating drums
 C. Bell ringing D. Screaming
38. We care for our animals by
 A. beating them
 B. giving them little food
 C. providing shelter
 D. not giving them water
39. A place where a plant grow is its
 A. garden B. soil
 C. field D. habitat

40. The animal below moves by



- A. crawling B. walking
C. swimming D. coiling
41. Which one of the following activities is carried out during wet season?
- A. Harvesting  B. Ploughing
C. Weeding D. Irrigation
42. A whistle produces sound by
- A. plucking B. beating
C. hitting D. blowing
43. The following foods can be eaten raw **except**
- A. carrot B. maize
C. tomato D. oranges
44. Which one of the following is a part of the arm?
- A. Thigh B. Elbow
C. Toe D. Hair
45. We do not eat leaves of
- A. carrots B. onions
C. pumpkin D. kales
46. The best soil for modelling is
- A. smooth B. rough
C. dry D. green in colour
47. We breathe in
- A. water B. air
C. smoke D. food
48. Which one of the following can be used to give light in a house at night?
- A. Stars B. Fire fly
C. Fire. D. Sun
49. Weeds should be
- A. watered B. planted
C. pruned D. uprooted
50. In HIV, letter V stands for
- A. virus B. very
C. visit D. vivid

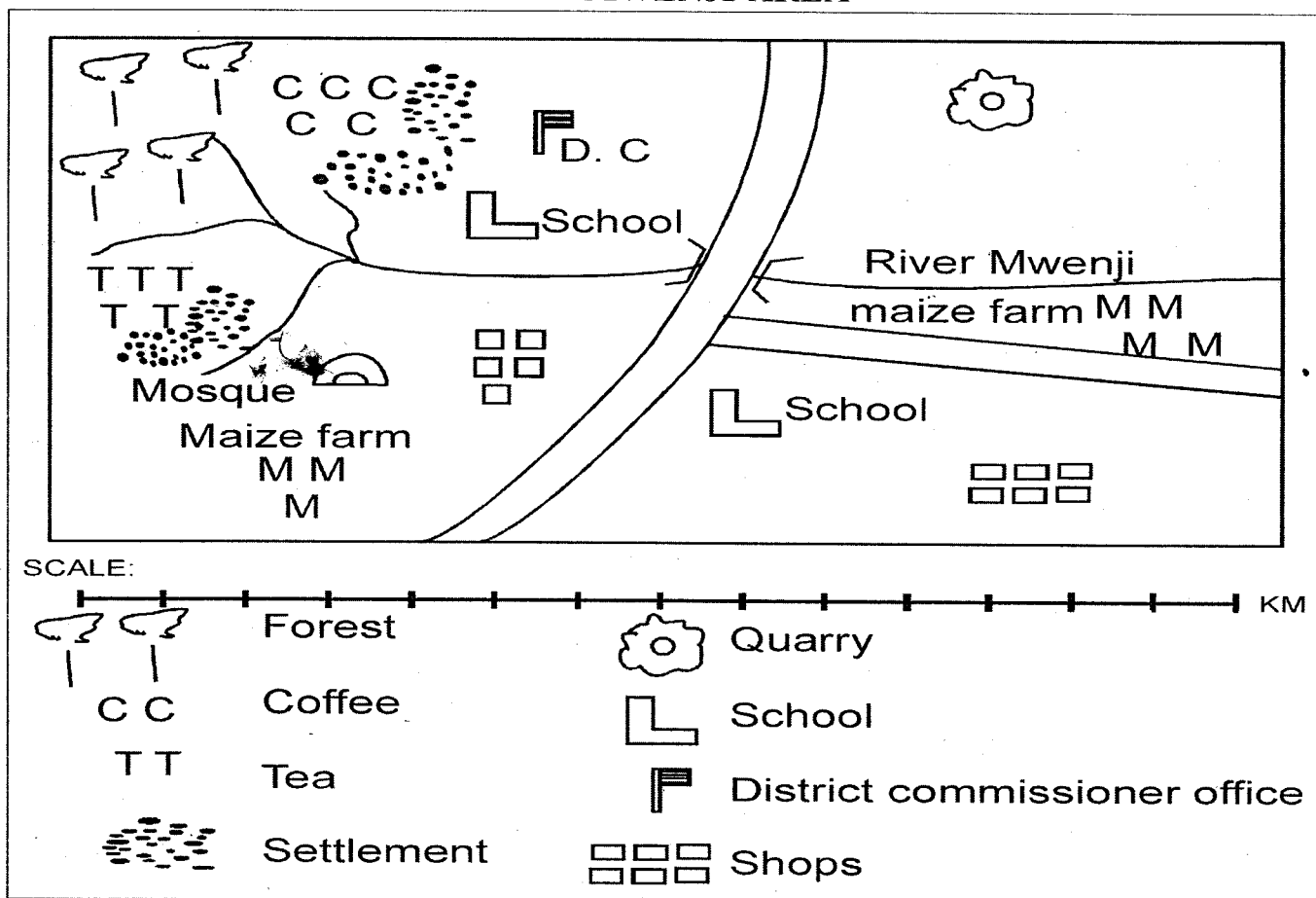
STEGA SERIES

STANDARD FOUR 2016

SOCIAL STUDIES


Time: 2 hours :15 Min

MWENJI AREA



- River Mwenji flows from _____ to _____.
A. East to West B. South to North
C. North to South D. West to East
- The administrator in charge of Mwenji area is
A. D.O B. P.C
C. Chief D. D.C
- How many schools are found in Mwenji area?
A. 1 B. 2
C. 4 D. 3
- People in Mwenji area are
A. muslims B. pagans
C. christians D. hindus
- Which one of the following crops is not grown in Mwenji area?
A. Maize B. Tea
C. Pyrethrum D. Coffee
- The means of transport in Mwenji area is
A. air B. road
C. water D. railway
- Mining in Mwenji area takes place in a'
A. quarry B. maize farm
C. forest D. mosque
- Rivers that flow throughout the year are called
A. seasonal rivers B. annual rivers
C. permanent rivers D. streams
- A family made up of mother and children is called _____ family.
A. extended B. street
C. nuclear D. single parent
- Heavily populated areas have _____ people.
A. few B. many
C. old D. young
- Paper is made from
A. wood B. stone
C. plastic D. leaves
- The head of a school is
A. headteacher B. prefect
C. teacher D. parents
- People who walk along the road are called
A. passengers B. pedestrians
C. motorists D. cyclists
- Which colour of our national flag shows vegetation
A. Green B. Black
C. Red D. White

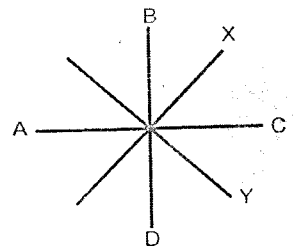
15. Many _____ make a district.
 A. locations B. divisions
 C. counties D. provinces
16. Our county has _____ districts.
 A. 9 B. 8
 C. 10 D. 7
17. River _____ flows through Nairobi National park.
 A. Embakasi B. Tana
 C. Mokoyeti D. Ngong
18. _____ is not an example of a cardinal point.
 A. East B. South West
 C. South D. North
19. _____ is the largest district in Nairobi county.
 A. Starehe district B. Njiru district
 C. Embakasi district D. Makadara district
20. Kenya has _____ counties.
 A. 47 B. 9
 C. 40 D. 8
21. The Akamba community belong to a group of people called the
 A. Cushites B. Nilotes
 C. Semites D. Bantus
22. Which of the following is the largest language group in Kenya?
 A. Cushites B. Semites
 C. Nilotes D. Bantus
23. The three basic needs are shelter, food, and _____.
 A. education B. clothing
 C. a car D. house
24. Children whose parents are dead are called
 A. widows B. refugees
 C. disabled D. orphans
25. In the traffic lights the red colour means
 A. go B. get ready
 C. stop D. overtake
26. Which of the community below keeps many animals?
 A. Luo B. Nandi
 C. Marakwet D. Maasai
27. A number of families with a common ancestor is
 A. community B. clan
 C. tribe D. family



The sign drawn above is found on our roads. It is
 a
 A. foot bridge B. ladder
 C. zebra crossing D. level crossing

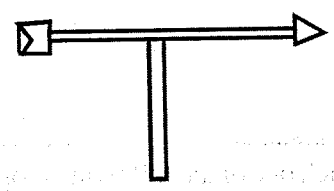
29. The vegetation that grows along the river banks is known as
 A. mangrove B. swamps
 C. moulds D. riverine
30. The largest county in Kenya is
 A. Mombasa B. Marsabit
 C. Turkana D. Nairobi

Use the diagram below to answer questions 31-32



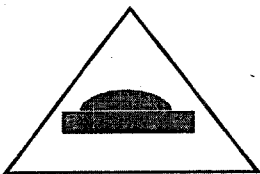
31. The direction marked x is called
 A. North East B. North West
 C. South West D. South East
32. The point marked Y is known as
 A. South East B. South West
 C. North East D. North West
33. Who was the first president of Kenya?
 A. Daniel Moi B. Mwai Kibaki
 C. Jomo Kenyatta D. Uhuru Kenyatta
34. Which of the following is a man-made feature?
 A. Valley B. River
 C. Forest D. Bridge
35. The illegal hunting of wildlife is called
 A. hunting B. poaching
 C. capturing D. killing

Use the diagram below to answer questions 36 and 37.



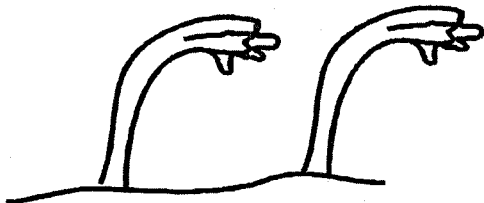
36. The weather instrument above is called
 A. windsock B. anemometer
 C. windvane D. raingauge
37. Which element of weather is measured using the above weather instrument?
 A. Speed of wind B. Strength of wind
 C. Direction of wind D. Temperature
38. The people who died long time ago are called
 A. spirits B. ancestors

39. We wash our clothes when the weather is
A. sunny B. rainy
C. calm D. cloudy
40. _____ is another name of medicinemen.
A. Doctors B. Witchdoctors
C. Prophets D. Herbalists
41. Buying and selling of goods is known as
A. hawking B. shopping
C. trade D. transport
42. An example of traditional forms of communication is
A. mobile phones B. messenger
C. radio D. television
43. The sun rises in the
A. West B. North
C. South D. East
44. One of the following is not found in Nairobi county. Which one?
A. Rivers B. Lake
C. Plain D. Hill
45. Dairy cattle are **MAINLY** kept for
A. meat B. skin
C. milk D. wool
46. The road sign below means



- A. stop B. no entry
C. bumps ahead D. danger ahead

47.



The weather above is good for

- A. winnowing B. planting
C. digging D. playing
48. Farmers plant their seeds during _____ season.
A. windy B. dry
C. hot D. rainy
49. We celebrate Madaraka day on
A. 1st June B. 12th December
C. 1st May D. 20th October
50. The Luo call their God
A. Mulungu B. Enkai
C. Asis D. Nyasaye
51. People who could tell the future in the past were called
A. prophets B. medicinemen
C. herbalists D. priests
52. The **most** expensive means of transport in Kenya is
A. road B. railway

- C. air D. water
53. The original homelland of the Nilotes is
A. Sudan B. Horn of Africa
C. Congo D. Cameroon
54. Goat provides us with _____ and _____
A. wool and meat B. beef and milk
C. mohair and milk D. beef and skin
55. _____ is an element of a good citizen.
A. Honesty B. Jealousy
C. Corruption D. Tribalism
56. People wear gumboots on a _____ season.
A. sunny B. calm
C. hot D. rainy
57. The _____ maintains law and order in our country.
A. governor B. police
C. senator D. president
58. _____ county neighbours Nairobi city county.
A. Turkana B. Nakuru
C. Kiambu D. Marsabit
59. Forest grown by man are called
A. artificial forest B. national forest
C. woodland forest D. savannah forest
60. Our national anthem has _____ stanzas.
A. 2 B. 1
C. 3 D. 4

C.R.E

61. The book of Genesis talks about
A. journey B. departure
C. creation D. Jesus
62. Which miracle shows that Jesus had power over nature?
A. Raising Lazarus B. Healing Bartimaeus
C. Feeding 5000 men D. Raising Jairus' daughter
63. Who among the following was a brother to Peter?
A. Andrew B. James
C. John D. Philip
64. In which book do we find the story of the journey of Israelites?
A. Genesis B. Exodus
C. Matthew D. Revelation
65. Which one of the following is not a quality of a good leader?
A. Generous B. Have respect
C. Kind D. Rich
66. Who doubted that Jesus had resurrected?
A. Thomas B. Peter
C. James D. John
67. Who among the following baptised Jesus?
A. Peter B. Judas
C. John D. Levi
68. The parable of the Pharisee and the tax collector teaches us to
A. pray without ceasing
B. pray for our enemies
C. pray everyday
D. be humble while praying
69. Jesus stayed in the wilderness for _____ days

- A. 20 B. 30
C. 40 D. 50
70. What did king Solomon ask from God?
A. Wealth B. Wisdom
C. Long life D. Peace
71. Where was Moses when God called him?
A. Canaan B. Egypt
C. Haran D. Mt Sinai
72. The first king of Israel was
A. Saul B. David
C. Solomon D. Ahab
73. _____ was called by God while in his way to Damascus to persecute christians.
A. Saul B. Peter
C. Naaman D. Judas
74. Lake Galilee is also known as
A. Cana B. Tiberias
C. Capernaum D. Red sea
75. Which of the following is a fruit of the Holy spirit?
A. Wisdom B. Preaching
C. Faithfulness D. Faith
76. _____ was a tax collector before Jesus called him.
A. Nathaniel B. Paul
C. Levi D. Jesse
77. _____ served under priest Eli when he was young.
A. Samuel B. Moses
C. Elijah D. David
78. Africans worshipped God in
A. churches B. mosques
C. temples D. shrines
79. _____ and Sapphira cheated the Holy spirit.
A. David B. Ananias
C. Joseph D. Ahab
80. Which is the only commandment with a promise?
A. Love your God
B. Love your neighbours
C. Respect your parent
D. Respect human life
81. The wisemen who visited Jesus brought the following gifts except
A. gold B. myrr
C. frankincense D. silver
82. Siloam means
A. open up B. sent
C. healing D. life
83. Jesus was born in
A. Nazareth B. Galilee
C. Bethlehem D. Jerusalem
84. Who prophesied the birth of Jesus?
A. Isaiah B. Jeremiah
C. Micah D. Ezekiel
85. Where was Abraham when God called him?
A. Canaan B. Ur
D. Haran D. Shechem
86. Jesus was a refugee in
A. Jerusalem B. Canaan
C. Nazareth D. Egypt
87. Happy are the pure in heart
A. they will see God
B. God will call them his children
C. they will inherit the earth
D. they will receive mercy
88. A child suffering from AIDS should be
A. avoided B. announced everywhere
C. stay alone D. comforted
89. If you find a sh 50 note on your way home
A. take it to the teacher next day
B. buy sweets
C. give it to your friends
D. take it to your parents
90. Who among the following was sold to Egypt by his brothers?
A. Joseph B. John
C. Jesus D. James

STEGA SERIES - STD 4

MARKING SCHEME 2016

<u>ENGLISH</u>		<u>KISWAHILI</u>		<u>MATHS</u>		<u>SCIENCE</u>		<u>SOCIAL STUDIES</u>		
1. D	31. A	1. B	31. B	1. C	31. D	1.A	31. D	1. D	31. A	61. C
2. B	32. B	2. C	32. C	2. B	32. D	2. B	32. C	2. D	32. B	62. C
3. A	33. A	3. B	33. C	3. A	33. A	3. C	33. A	3. B	33. C	63. A
4. B	34. D	4. A	34. D	4. C	34. D	4. A	34. B	4. A	34. D	64. B
5. A	35. C	5. D	35. C	5. B	35. B	5. D	35. C	5. C	35. B	65. D
6. B	36. C	6. B	36. A	6. A	36. C	6. B	36. A	6. B	36. C	66. A
7. A	37. A	7. D	37. A	7. A	37. D	7. C	37. B	7. A	37. C	67. C
8. D	38. A	8. B	38. B	8. D	38. A	8. A	38. C	8. C	38. B	68. D
9. D	39. D	9. A	39. A	9. A	39. A	9. B	39. D	9. D	39. A	69. C
10. B	40. A	10. C	40. B	10. D	40. D	10. D	40. A	10. B	40. D	70. B
11. B	41. C	11. A	41. C	11. B	41. C	11. C	41. C	11. A	41. C	71. D
12. D	42. C	12. D	42. B	12. D	42. A	12. A	42. D	12. A	42. B	72. A
13. A	43. B	13. B	43. D	13. D	43. D	13. C	43. B	13. B	43. D	73. A
14. B	44. C	14. C	44. C	14. A	44. C	14. B	44. B	14. A	44. B	74. B
15. C	45. C	15. B	45. A	15. D	45. D	15. D	45. A	15. B	45. C	75. C
16. C	46. A	16. B	46. A	16. C	46. D	16. C	46. A	16. A	46. C	76. C
17. B	47. D	17. C	47. B	17. C	47. A	17. A	47. B	17. C	47. A	77. A
18. D	48. A	18. D	48. C	18. B	48. D	18. B	48. C	18. B	48. D	78. D
19. B	49. A	19. A	49. D	19. D	49. B	19. B	49. D	19. C	49. A	79. B
20. B	50. C	20. B	50. C	20. A	50. D	20. C	50. A	20. A	50. D	80. C
21. C		21. C		21. B		21. D		21. D	51. A	81. D
22. C		22. A		22. A		22. C		22. D	52. C	82. B
23. C		23. B		23. B		23. B		23. B	53. A	83. C
24. C		24. B		24. A		24. A		24. D	54. C	84. A
25. C		25. B		25. B		25. B		25. C	55. A	85. D
26. D		26. C		26. C		26. D		26. D	56. D	86. D
27. C		27. C		27. D		27. C		27. B	57. B	87. A
28. A		28. B		28. D		28. A		28. C	58. C	88. D
29. C		29. C		29. A		29. C		29. D	59. A	89. D
30. D		30. A		30. B		30. B		30. B	60. C	90. A

A COMPOSITION MARKING SCHEME

MARKING CRITERION

1. The composition will be assessed according to the following guidelines.

- The maximum mark will be 40 and the minimum (mark 01)

- Does the script show that the candidate can communicate accurately, fluently and imaginatively in English?

Accuracy (8 marks)

a) Correct tenses and agreement of verbs (4 marks) b) Accurate use of vocabulary (4 marks)

(16) c) Following a sequence (4 marks)

d) Correct punctuation (4 marks)

Fluency (8 marks)

a) Words in the correct order (4 marks)

b) Sentence connection and paragraphs (4 marks)

c) Correct spelling (4 marks)

d) Ideas developed in logical sequence (4 marks)

Imagination (8 marks)

a) Unusual but appropriate use of words and phrases (4 marks)

b) Variety of structure (4 marks)

NB: Please, teachers are requested to scrutinize this marking scheme before use, it is worth