

NANDI COUNTY
STD 5 TERM 1
SCIENCE

TIME: 1Hr. 40Mins.

1. Which one of the following organs is **NOT** involved in breathing?

- A. Diaphragm B. Bronchioles
C. Oesophagus D. Windpipe

2. The amount of medicine to be taken at one time is known as:-

- A. Medicinal quantity B. Dosage
C. Prescription D. First aid

3. Which one of the following is **NOT** a use of heat?

- A. Seeing clearly B. Drying
C. Ironing D. Cooking

4. The degree of hotness or coldness of the atmosphere is called:-

- A. Air temperature B. Humidity
C. Air pressure D. Weather change

5. The following are factors affecting floating and sinking. Which one does **NOT**?

- A. Shape B. Size
C. Type D. Density

6. Proteins are also called:-

- A. Body building foods
B. Protective foods
C. Energy giving foods
D. Fibre foods

7. In the initials AIDS letter D stands for:-

- A. Acquired B. Immune
C. Deficiency D. Dead


8. Which of the following is **NOT** a use of saliva in the human digestive system?

- A. Moistening food
B. Breaking down starch
C. Making food hard
D. Making food slippery

9. Which one of the following soils is **LIKELY** to feel smooth?

- A. Sandy soil B. Clay soil
C. Loam soil D. Mixture of sand and loam soils

10. Standard 4 class performed the below experiment. They added water into a glass with soil. What were they investigating?



- A. Water in soil B. Bubbles in water
C. Air in soil D. Humus in soil

11. When pupils in a class all talk at the same time, they produce:-

- A. Noise B. Soft sound
C. Melodious sound D. Pleasant sound

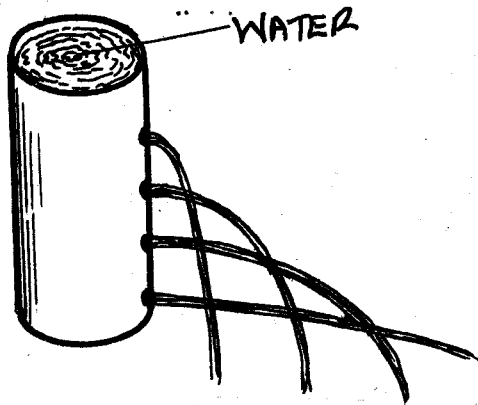
12. Which one of the following **DOES NOT** produce its own light?

- A. Sun B. Firefly
C. Moon D. Stars

13. Which of the following is **NOT** a proper way of maintaining tools?

- A. Using the tool for the right purpose
B. Proper storage of the tool
C. Using the tool for the wrong purpose
D. Sharpening cutting tools

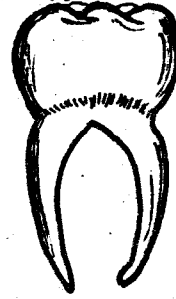
14. Std 5 pupils conducted the experiment shown below.



They concluded that pressure in liquids:-

- A. Decreases with depth
 B. Is equal at equal depth
 C. Remains constant
 D. Increase with depth
15. Which one of the following is a non flowering plant?
 A. Maize B. Beans C. Mango D. Algae
16. Which of the following plants is edible to human beings?
 A. Cabbage B. Oxalis
 C. Datura D. Sodom apple
17. The following are uses of water at home **EXCEPT:-**
 A. Cleaning our bodies B. Drinking
 C. Cooking D. Rearing fish
18. The following are ways of storing water **EXCEPT:-**
 A. Drums B. Pots C. Taps D. Dams
19. Which of the following list of food consist of a balanced diet?
 A. Beef, maize, potatoes
 B. Mutton, beans, pawpaw
 C. Potatoes, maize, mangoes
 D. Fish, oranges, rice
20. Which of the following is **NOT** a deficiency disease?
 A. Kwashiorkor B. Marasmus
 C. Whooping Cough D. Anaemia
21. The following are useful animals **EXCEPT:-**
 A. Lady bird B. Fish C. Camel D. Flea
22. Three of the following are components of soil **EXCEPT:-**
 A. Mineral particles B. Organic matter
 C. Plastic bottles D. Water

23. Which type of teeth is shown in the diagram below?



- A. Premolar
 B. Canine
 C. Molar
 D. Incisors

24. Which one of the following organs is **NOT** involved in the digestion of food?
 A. Salivary glands B. Pancreas
 C. Diaphragm D. Ileum

Use the diagram below to answer the question below

Day	Morning	Afternoon
1		
2		

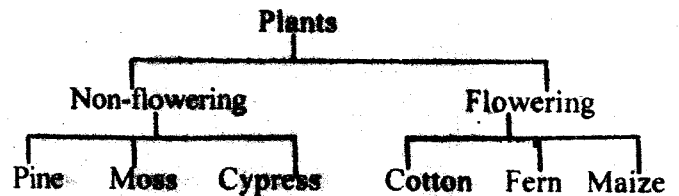
25. In which of the following days will Mwangi carry an umbrella when going to school in the evening?
 A. Day 2 B. Day 1
 C. Day 1 and 2 D. None
26. Three of the following are food crops **EXCEPT:-**
 A. Fruits B. Beverages
 C. Vegetables D. Cereals
27. Which one of the following substances is a sinker?
 A. Maize cob B. Cork
 C. Paper D. Coin
28. Which one of the following weeds is edible?
 A. Sodom apple B. Wandering jew
 C. Pig weed D. Oxalis
29. Which of the following is **NOT** a material used when cleaning a urinal?
 A. Clean water B. Disinfectant
 C. Hard brush D. Mop
30. Which is the second stage of HIV/AIDS infection?
 A. Window B. Asymptomatic
 C. Symptomatic D. Full blown
31. Which of the following types of soil can make a long ribbon?
 A. Silt B. Loam C. Clay D. Sand

32. Which of the following is a way of conserving moisture in the soil?
 A. Mulching B. Weeding
 C. Deforestation D. Clearing the bush
33. Sound from the source travels in _____ directions.
 A. Two B. All C. Four D. Three
34. Which one of the following materials can catch fire easily?
 A. Glass B. Metal strip
 C. Plastic D. Nails
35. A _____ toy wheel makes things move easily.
 A. Triangular B. Square C. Oval D. Round
36. When you weigh one kilogram of salt and one kilogram of feathers, you notice that:-
 A. The salt has more mass than the feathers
 B. The salt has less mass than the feathers
 C. The salt and the feathers have the same mass
 D. The salt and feathers have different masses
37. The following crops have the same shape of leaves **EXCEPT:-**
 A. Napier grass B. Maize
 C. Sugarcane D. Beans
38. Which of the following plants would be **ODD** growing on a farm?
 A. Sodom apple B. Coffee bushes
 C. Rice D. Maize
39. Which of the following lists consists of protective food only?
 A. Beef, maize, potatoes
 B. Fish, beans, termites
 C. Kales, spinach, tomatoes
 D. Mutton, Cassava, pawpaw
40. If fats are eaten in large amounts, some are:-
 A. Dissolved in the body
 B. Removed from the body as waste product
 C. Stored in the body for later use
 D. Turned into proteins
41. Which one of the following is **NOT** seen at the sky at night?
 A. Stars B. Moon C. Clouds D. Sun
42. Birds have _____ instead of teeth.
 A. Feathers B. Beaks
 C. Molars D. Incisors

43. Which of the following type of teeth is **WRONGLY** matched with its function?

Type of teeth	Function
A. Pre-molars	cutting
B. Incisors	biting
C. Molars	grinding
D. Canines	tearing

44. Temperature is measured using a:-
 A. Thermometer B. Rain-gauge
 C. Conductor D. Metal ball
45. Which of the following is **NOT** a proper way of using medicines?
 A. Use the medicine as instructed by the doctor
 B. Use expired medicine
 C. Do not take medicine meant for another person
 D. Throw away expired medicine
46. The plants whose leaves, branches and stems are green are called:-
 A. Non-flowering plants B. Green plants
 C. Non-green D. Mosses
47. Use the diagram below to answer the questions below.



Which crop is **WRONGLY** grouped?

- A. Cypress B. Maize
 C. Fern D. Moss
48. Which of the following foods has no nutritive value?
 A. Milk B. Fish
 C. Matoke D. Fibre
49. Which of the following animals is **WRONGLY** matched with its product?
- | Animal | Product |
|-----------------|---------|
| A. Goat | mohair |
| B. Turkey | eggs |
| C. Dairy cattle | beef |
| D. Sheep | mutton |
50. Which of the following animals moves by crawling?
 A. Cat B. Toad
 C. Fish D. Caterpillar

NANDI COUNTY

STD 5 - TERM 1

MATHEMATICS

Time: 2Hours

1. Write two hundred and thirty four thousand two hundred and twenty in figure?

- A. 20034220 B. 234220
C. 23422 D. 2003420020

2. What is the total value of digit seven in 547143?

- A. 7000 B. 7173 C. 700 D. 70000

3. What is $\frac{7}{100}$ as a decimal?

- A. 0.7 B. 0.007 C. 0.07 D. 7

4. What is the place value of digit 7 in 1001.017?

- A. Ones B. Hundredths
C. Thousandths D. Thousands

5. Which of the following numbers is divisible by 2, 5 and 10?

- A. 20 and 25 B. 45 and 55
C. 5 and 10 D. 50 and 90

6. Work out:-

$$\begin{array}{r} 26427 \\ + 34373 \\ \hline \hline \end{array}$$

- A. 60800
B. 60890
C. 607910
D. 50800

7. Work out:


$$\begin{array}{r} 7503 \\ - 3690 \\ \hline \hline \end{array}$$

- A. 4193
B. 4813
C. 3193
D. 3813

8. Kipng'eno gets 27 litres of milk from his two cows. How many litres did he get in the month of June 2011?

- A. 810 litres B. 54 litres
C. 837 litres D. 1620 litres

9. What is the area of the following figure?



- A. 25 cm
B. 150 cm
C. 150 cm²
D. 50 cm²

10. Work out: $15 \overline{) 225}$

- A. 5 B. 15 C. 25 D. 1 R 75

11. Which of the following fractions is two fifths?

- A. $\frac{5}{2}$ B. $\frac{2}{5}$ C. $\frac{1}{5}$ D. $\frac{2}{50}$

12. Work out:- $5 \times \frac{2}{11} =$

- A. $\frac{10}{25}$ B. $\frac{7}{11}$ C. $\frac{2}{55}$ D. $\frac{10}{11}$

13. Work out: $39 - 2.8 =$

- A. 36.2 B. 11 C. 39.8 D. 41.8

14. How many days are there in the last three months of last year 2011?

- A. 90 B. 91 C. 92 D. 93

15. What is the approximate height of your Maths teacher?

- A. 150 m B. 150 cm C. 150 km D. 15 cm

16. How many quarter kilogrammes would fill a sack of 50 kg?

- A. 100 B. 200 C. 50 D. 5000

17. How many meters are there in 1100 cm?


- A. 11 m B. 110 m C. 100 cm D. 1100 m

18. Work out:

$$\begin{array}{r} \text{m} \quad \text{cm} \\ 5 \quad 64 \\ \times \quad 7 \\ \hline \hline \end{array}$$

- A. 40 m 48 cm
B. 5 m 71 cm
C. 35 m 448 cm
D. 39 m 48 cm


19. Which of these angles is an obtuse angle?



20. One side of a square is 85 cm long. What is the perimeter of the square in metres?

- A. 170 m B. 85 m
C. 3.4 m D. 3 m 400 cm

21. How many cubes will make the stack below?



- A. 72
B. 45
C. 18
D. 54

22. Which of the following fractions is equivalent to $\frac{4}{9}$?

- A. $\frac{4}{9}$ B. $\frac{10}{16}$ C. $\frac{10}{18}$ D. $\frac{4}{9}$

23. Divide Sh. 397 35 cts by 9?

- A. Sh. 44 15 cts B. Sh. 44 135 cents
C. Sh. 4415 D. Sh. 44 40 cts

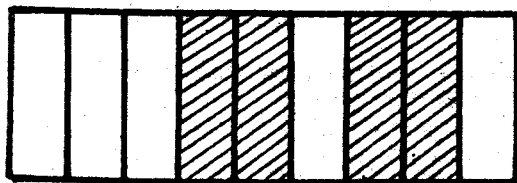
24. Musyoka had Sh.200. He bought a bread at Sh 40 and $\frac{1}{2}$ kg sugar at Sh 110. How much balance did he get?

- A. Sh. 150 B. Sh. 350 C. Sh. 50 D. Sh. 90

25. How many hours are there in 325 minutes?
 A. 6 hr 25 min B. 5 hr 25 min
 C. 3 hrs 25 min D. 4 hr 25 min
26. What is XLV in numeral?
 A. 65 B. 45 C. 55 D. 40
27. What is the L.C.M of 12, 15 and 20?
 A. 47 B. 30 C. 60 D. 40
28. What is the sum of the next two numbers in the series.
 2, 3, 5, 8, 12, _____
 A. 20 B. 18 C. 28 D. 40
29. What is the place value of digit 4 in 643101?
 A. Thousands B. Hundred thousands
 C. Ones D. Ten thousands
30. What is $\frac{20}{100}$ as a decimal?
 A. 0.2 B. 0.02 C. 0.002 D. 2.0
31. What is the sum of the prime numbers between 10 and 20?
 A. 60 B. 75 C. 30 D. 120
32. Kirui went to the shop and bought 15 kg of sugar, Mary bought 14 kg while Ng'eny bought 8 kg. How many kilograms did they buy altogether?
 A. 27 kg B. 37 kg C. 29 kg D. 22 kg
33. Work out:-

$$\begin{array}{r} 96758 \\ - 8274 \\ \hline \end{array}$$

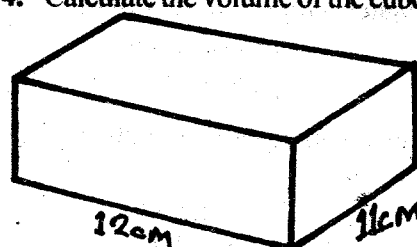
 A. 78874 B. 88484
 C. 98482 D. 88574
34. What is the area of a square whose perimeter is 32 cm?
 A. 32 cm B. 16 cm C. 64 cm D. 8 m
35. What fraction is unshaded in the figure below?



- A. $\frac{5}{7}$
 B. $\frac{4}{9}$
 C. $\frac{2}{9}$
 D. $\frac{5}{9}$
36. Which of the following fraction is equal to $\frac{6}{15}$?
 A. $\frac{1}{35}$ B. $\frac{2}{5}$ C. $\frac{8}{18}$ D. $\frac{2}{3}$
37. Name the point of intersection in the figure below.
-
- A. M
 B. Q
 C. N
 D. O
38. If Nelius uses 8 hrs to sleep every day, how many hours does she sleep in a week?
 A. 80 hrs B. 56 hrs C. 40 hrs D. 15 hrs

39. Work out: $\frac{3}{4} + \frac{1}{4} =$
 A. 0 B. 1 C. $\frac{2}{4}$ D. $\frac{4}{8}$
40. Covert $7\frac{3}{10}$ into an improper fraction.
 A. $\frac{70}{10}$ B. $\frac{72}{10}$ C. $\frac{73}{10}$ D. $\frac{73}{100}$
41. Work out:- $329 \times 33 =$
 A. 10857 B. 1185 C. 362 D. 3512
42. If the time now is 10.15, what time was it 2 hrs ago?
 A. 12.15 B. 12.45 C. 8.15 D. 7.15
43. Work out:-
- | | | |
|-------|------|-----------------|
| Wks | Days | A. 5 wks 7 days |
| 13 | 3 | B. 4 wks 3 days |
| - 8 | 6 | C. 4 wks 0 day |
| <hr/> | | D. 4 wks 4 days |

44. Calculate the volume of the cuboid shown below.



- A. 26 cm²
 B. 396 cm³
 C. 132 cm²
 D. 390 cm²

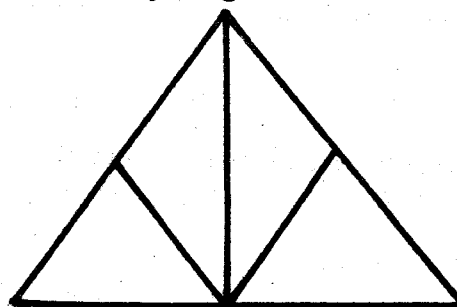
45. What is the length of a rectangular playing field whose perimeter is 176 m if the width is 15 m?
 A. 161 m B. 146 m C. 73 m D. 161 cm
46. Which number is divisible by 2 and 3?
 A. 18 B. 21 C. 22 D. 32
47. What do you get when you multiply 12 and 10?
 A. 22 B. 12 C. 210 D. 120

48. Work out:-

$$6 \overline{) \text{Sh } 11970 \text{ cts}}$$

- A. Sh. 29 95 cts B. Sh. 199 5 cents
 C. Sh. 19 95 cts D. Sh. 18 95 cents

49. $\frac{3}{4} - \frac{1}{2} =$
 A. $\frac{2}{2}$ B. $\frac{2}{8}$ C. $\frac{3}{6}$ D. $\frac{1}{4}$
50. How many triangles are there in the figure below?



- A. 9
 B. 8
 C. 7
 D. 6

NANDI COUNTY

STD 5 TERM 1

ENGLISH

TIME: 1 HR 40 MIN

Fill in the blank spaces numbered 1-15 with the correct choice from the ones given.

Once 1 was an old poor man 2 Johnson, who 3 in a small 4 in a village. After the death of 5 wife, he was staying alone as he 6 no children. Though Johnson was old, he was 7 and strong. He was always busy in helping his neighbours in one way or another and in 8 they used to give him food. 9 he was polite and 10, everybody 11 him and 12 refused him anything. He liked children very much and whenever he 13 free, he used to tell 14 to children. So he was very popular 15 children and they used to address him "Babu."

1. A. then B. this C. that D. there
2. A. names B. name C. named D. naming
3. A. lives B. lived C. livend D. stays
4. A. hut B. hat C. hart D. hole
5. A. his B. her C. their D. him
6. A. has B. had C. hand D. have
7. A. healthy B. heelthy C. heathy D. healthe
8. A. end B. thankyou C. instead D. return
9. A. of B. us C. due D. As
10. A. rude B. humble C. cruel D. hamble
11. A. likes B. liken C. liked D. hated
12. A. nobody B. somebody C. body D. anybody
13. A. was B. were C. is D. wasn't
14. A. stores B. stories C. lies D. story's
15. A. between B. at C. among D. in

For questions 16-18, choose the right word to fill in the blank spaces.

16. The cow has a stone in _____ hoof.
A. it's B. its C. their D. her
17. They have left _____ books in the class.
A. there B. his C. her D. their
18. Talking _____ in the library is not allowed.
A. allowed B. aloud C. loud D. alloud

Complete the following sentences.

19. Omolo owns a large _____ of cattle.
A. herd B. flock C. heard D. troop
20. The children were attacked by a _____ of bees.
A. bunch B. group C. swam D. swarm

21. Mongari is as fat as a _____.
A. giant B. pig C. buffalo D. elephant

Write the past tense of the following words.

22. Send _____
A. sended B. sented C. sent D. sending
23. Lose _____
A. loose B. losed C. loses D. lost
24. Cry _____
A. cried B. cryed C. cries D. cry

Fill in the blanks spaces with the CORRECT preposition.

25. The thief jumped _____ the fence.
A. aside B. below C. over D. at

Read the following passage and answer questions 26-38.

Aisha had visited Taabu dispensary a week before. The clinical officer had examined her and taken some notes. She had explained her problems to him and got examined. Her symptoms were diarrhoea, abdominal pains, loss of appetite, dehydration and general body weakness.

Later she had been asked to visit the district hospital for blood test as Taabu dispensary did not have the necessary equipment for blood tests. She got worried and then decided to go. The doctor informed her she would be tested for T.B, malaria, typhoid and HIV/AIDS. She got more worried. She took the test then waited. She saw several sick patients. Some had wounds that nurses and dressers attended to. Some mothers had brought their babies. After an hour, the doctor called her in the office. She was happy when she was told that she had typhoid. She was told to always wash hands and eat clean food. She went home happy that her disease had a cure.

26. Why did Aisha visit the clinic?
 A. She was sick
 B. She had been called
 C. She was well
 D. She was about to die
27. When had Aisha visited the dispensary?
 A. A week after B. Seven days before
 C. Two weeks before D. A month before
28. The clinical officer took down some ____
 A. drugs B. books C. notes D. bottles
29. Aisha was told to visit the district hospital for ____ test.
 A. Urine B. T.B. C. Status D. Blood
30. What did Aisha see at the District dispensary?
 A. A few patients B. several patients
 C. parents D. good doctors
31. Which disease was Aisha suffering from?
 A. Typhoid B. T.B.
 C. Malaria D. AIDS
32. Why was she advised to go to the district hospital?
 A. It was nearer
 B. She was afraid of the results
 C. Taabu had no necessary equipment
 D. She decided to do so
33. Which one of the following was **NOT** one of her symptoms?
 A. Diarrhoea B. Abdominal pains
 C. Loss of appetite D. Good health
34. What was Aisha told to do to prevent typhoid?
 A. Do a lot of practice B. Visit the dentist always
 C. Eat a lot of carrots D. Wash hands always
35. A dispensary is a place where ____
 A. sick people are admitted
 B. nurses meet for tea
 C. sick people are treated
 D. drugs are kept
36. A blood test refers to the ____
 A. removal of blood for testing
 B. removal of blood for donation
 C. removal of blood for sale
 D. addition of blood
37. Why do you think Aisha was worried when she heard she would be tested for various diseases?
 A. She thought she could be having AIDS which is incurable
 B. She would waste a lot of time in hospitals
 C. She could be having malaria then die
 D. She could feel pain
38. Why did Aisha go home happy?
 A. Her disease had not been found
 B. Her disease was curable
 C. She had bought medicine
 D. She was healed

Read the following passage and answer questions 39-50.

The cobra is the most poisonous snake in India. Its colour is sometimes yellowish, sometimes brown with a dirty underside. It is about five feet long. When it is irritated, it raises up the front part of its body, spreads out the eight front pairs of its ribs at the sides so that a shield shaped hood is formed below the head. The rest of the body is curled round and gives the snake firm support. On the back of its hood are yellow markings. Cobras live in old walls or heaps of stones, and timber and anywhere they can find sheltered holes. Therefore people should avoid sheltering near the walls.

39. What colour is cobra?
 A. yellow B. yellow or brown
 C. very dirty colour D. brown
40. The underside of a cobra is ____
 A. clean B. dirty
 C. yellow D. brown
41. People should avoid seeking shelter near ____
 A. houses B. walls
 C. big trees D. shades
42. The cobra is the ____ snake in India.
 A. most harmless B. most harmful
 C. most poisonous D. longest
43. Irritated means the same as ____
 A. joyful B. excited
 C. happy D. angry
44. Where would you find a cobra?
 A. In the branches of a tree
 B. Underground
 C. In a cave
 D. In any protected hole
45. What gives it a firm support?
 A. Its length B. Its eight pairs of ribs
 C. Its hood D. Its curled body
46. The opposite of the word long is ____
 A. lengthier B. shorter C. short D. far
47. To curl means to ____
 A. form a pattern B. form circles
 C. hear D. die
48. A cobra is a ____
 A. wild animal B. bird
 C. snake D. insect
49. How long is a cobra ?
 A. About five feet
 B. About five centimetres
 C. About five metres
 D. About five kilometres
50. The **MOST** appropriate title for this passage would be:-
 A. Types of snakes B. The cobra
 C. The Indian snakes D. How to shelter

NANDI COUNTY

DARASA LA TANO MUHULA WA KWANZA

KISWAHILI

MUDA: Saa 1 Dak. 40

Soma kifungu kifuatacho kisha ujaze nafasi zilizoachwa wazi kuanzia 1-15 kwa jibu sahihi kati ya yale ulioyopewa.

“Nisamehe jini 1 msonobari. Miye natafuta kazi 2 kuchanja kuni. Chungu 3 kitambo nilikiazima. Nikapewa 4 na majirani 5, 6. Leo nimerudia, 7 tena, kazi yangu” mchanja kuni.

Siku 8 wananchi 9 Lokesheni waliipangia. 10 kwa mapanga, majembe 11 hata mbegu na miche ya mimea 12. Walichimba mitaro, 13 matuta, wakapanda miti na nyasi ili kuzuia mchanga wao usibebwe tena na kitu 14 kilē. Chifu alikuweco kuzisimamia shughuli 15.

1. A. ya B. la C. kwa D. wa
2. A. na B. ya C. za D. kwa
3. A. alichonipa B. ulichonipa
C. unapacho D. anipacho
4. A. nyingine B. zingine C. kingine D. ingine
5. A. yangu B. mwangu C. kwengu D. zangu
6. A. walinibadilisha B. walibadilishwa
C. alibadili D. alimabadili
7. A. aliralamika B. alilalamika
C. aliraramika D. alilaramika
8. A. iliyopita B. ijayo
C. iliyofuata D. inayofuata
9. A. wa B. za C. kwa D. ya
10. A. walijitoleza B. walirudi
C. walijitokesha D. walirundi
11. A. bali B. na C. kwa D. pia
12. A. mbalimbali B. balibali
C. mbalimbari D. baribari
13. A. wakavuna B. wakala
C. wakapiga D. wakaweka
14. A. vyovyote B. chochote
C. kwokwote D. popote
15. A. hii B. ile C. hiyo D. hizi

Kutoka swali la 16-30, jibu kulingana na maagizo.

Ni neno lipi linaloonyesha kivumishi cha idadi katika sentensi hii.

16. Mkutano huo ulikuwa na watu wengi.
A. mkutano B. wengi C. ulikuwa D. watu
17. Ipi kati ya hizi si ala ya muziki?
A. Manati B. Tari C. Ngoma D. Zeze
18. **Kanusha:** Mwanafunzi alienda shuleni ____
A. Mwanafunzi haendi shuleni.
B. Mwanafunzi hajaenda shuleni
C. Mwanafunzi hakuenda shuleni
D. Mwanafunzi hataenda shuleni

19. **Kamilisha tashbihi hii.** Chuma hii ni nzito kama
A. pamba B. gundi C. shubiri D. nanga
 20. Nyumba ya kuku huitwaje?
A. Kiota B. Kizimba C. Zizi D. Kombe
- Tumia jina la makundi lifaalo**
21. Fatuma alikutana na ____ cha waimbaji.
A. Kikoa B. kikosi C. kipeto D. kibunda
 22. Nomino redio iko katika ngeli ya ____
A. U- ZI B. A - WA C. I - ZI D. A - YA
 23. Baba ya mumeo utamwita ____
A. umbu B. bavyaa C. mavyyaa D. ami

Kamilisha methali hii.

24. Ukiona vyaelea ____
A. vyamelemeta B. vikojuu
C. vyaundwa D. vimeundwa
25. Kati ya viumbe hawa yupi si ndege?
A. Popo B. Kunguru C. Chiriku D. Kanga
26. Tumia 'ndi' kwa usahihi. Magari ____ hayo.
A. ndio B. ndiye C. ndiyo D. ndipo
27. Ukitaka kupima urefu wa nyumba utatumia ____
A. kekee B. utepe C. bisibisi D. patasi
28. Lima ni kwa mkulima kama vile choka ni kwa-
A. mchokaji B. mchovu
C. mchozi D. mchokizi
29. Mafuriko mengi hutokea wakati wa ____
A. vuli B. kipupwe
C. masika D. kianguzi
30. Umbo hili linaitwa ____

- A. mtari mshazari
B. zigzagi
C. pia
D. duara

Soma ufahamu kisha ujibu maswali kutoka 31-40.

Familia ya Bwana Ojwang' ina watu wanne. Mama, baba na watoto wao wawili. Faidafu ni mtoto wao wa kike. Faidaka ni mtoto wao wa kiume.

Baba ni mkulima pia ni mfugaji mwenye mbuzi wawili na punda mmoja. Mama ni mfanyi biashara. Anauza vyakula vidogo mitaani kwenye kibanda chake. Ni muuzaji wa kunde, vitumbua, maandazi na chai ya mkandaa iliyotiwa tangawizi. Wateja ni wengi. Wanamwita kwa jina Mama Kayai.

Pesa anazopata mama Faidafu hazitoshi kwa matumizi na mahitaji yote ya nyumbani pamoja na ada ya shuleni. Madaftari, kalamu, vitabu, malipo ya ujenzi, malipo ya bawabu wa shule, malipo ya mlo shuleni, pamoja na ujira wa wapishi. Fedha zote hizi zikiwekwa kwa jumla zikawa zaidi ya uwezo wa wazazi hawa. Wazo likaja kuwa heri wamwelimishe mtoto mmoja tu kati ya hao wawili.

31. Familia ya Ojwang' ina watoto wangapi?
A. Wawili B. Mmoja C. Wanne D. Watano
32. Je, mtoto wa kike aliitwaje?
A. Faidafu B. Faidaka C. Ojwang' D. Mama
33. Baba yao mzee Ojwang' alifunga nini na nini?
A. Mbuzi na kuku B. Punda na ngamia
C. Punda na mbuzi D. Kuku, punda na kondoo
34. Mama yao alifanya kazi gani?
A. Ukulima B. Ufugaji C. Ualimu D. Uuzaji
35. Kati ya hizi nini mama hakuhusika nayo?
A. Tangawizi B. Kunde
C. Maharagwe D. Vitumbua
36. Je, kwa nini pesa alizopata mama watoto hazikutosha mahitaji yao kwa sababu _____
A. alikuwa na watoto wengi
B. matumizi yalikuwa mengi nyumbani na malipo mengi shuleni
C. kazi yake haikupata wateja wengi
D. Mama Kayai alikuwa na tabia ya kutumia pesa ovyo
37. Kulingana na ufahamu, ni matumizi gani pesa za mama watoto zilitumika kutimiza?
A. Kulipia watoto shule
B. Kulipia wafanyi kazi wake
C. Kusaidia wasio bahatika katika jamii
D. Kupeleka familia kula anasa
38. Ni wazo gani lililokujia wazazi kulingana na taarifa?
A. Kuachisha Faidaka shule
B. Kuachisha Faidafu masomo
C. Kuelimisha mtoto mmoja tu
D. Hakuna wazo liliwakujia
39. Kwa nini watoto wa mzee Ojwang' wakasoma kwa shida?
A. Wazazi wao hawakuwa na uwezo mwingi wa kifedha
B. Walikuwa hawaelewi masomo
C. Walisumbuliwa na wazazi
D. Walikuwa wanafaulu kila mtihani
40. Je, kama ni wewe mzazi wa watoto hawa, nani alifaa sana kuachishwa shule _____
A. Faidafu B. Faidaka
C. Wote wawili D. Hakuna aliyestahili

Soma ufahamu ufuateo kisha ujibu maswali kutoka 41-50.

Usiri alikuwa kijana mvivu sana. Kila siku mama yake alikuwa akimpa chakula. Kazi yake Usiri ilikuwa ni kula na kulala tu. Siku moja mamake alimwambia, "kuanzia leo usipofanya kazi basi ujue hakuna chakula chako humu nyumbani".

Siku ya pili Usiri aliamka asubuhi na mapema. Alitoka nyumbani akaenda kutafuta kazi. Huko mashambani akakutana na mkulima ambaye alimpa kazi. Mkulima akampa Usiri sarafu ya shilingi arobaini. Aliporudi nyumbani, sarafu hiyo ikaanguka na kutumbukia mtoni alipokuwa anaruka mto.

Mamake Usiri alikasirika sana. Akamwambia kwa hasira "kwa nini ukipewa kitu hukitii mfukoni?" Siku ya pili Usiri alipata kazi kwa muuzaji maziwa. Mwisho wa siku Usiri akapewa jagi zima la maziwa. Usiri akayatia maziwa yake mfukoni mwake. Alipofika nyumbani maziwa yote yalikuwa yamemwagika.

41. Taja tabia moja ya Usiri _____
A. uvivu B. mjanja
C. mpole D. mwenye bidii
42. Kwa nini mama alikasirikia Usiri?
A. Kwa sababu ya uvivu wake
B. Kwa sababu ya upole wake
C. Alikuwa mtukutu
D. Hakufaulu masomoni
43. Usiri alianzia kutafuta kazi ya siku ya ngapi?
A. Tatu B. Pili C. Nne D. Tano
44. Usiri alipata kazi ya kwanza kwa nani baada ya kugombeza na mamake?
A. muuzaji maziwa B. mfinyazi
C. jirani D. mkulima mmoja
45. Je, Usiri alilipwa pesa ngapi na mkulima?
A. Sarafu mbili na shilingi ishirini
B. Noti ya shilingi arobaini
C. Sarafu ya shilingi arobaini
D. Noti ya shilingi hamsini
46. Je, kwa nini Usiri hakufika na sarafu ile nyumbani?
A. Ilipotea njiani B. Ilianguka mtoni
C. Iliibiwa na wezi D. Aliirusha mtoni
47. Kwa nini ile sarafu ilipotea?
A. Hakuiweka mfukoni na bahati mbaya ikanguka mtoni
B. Alianza kucheza nayo mtoni
C. Aliogelea ikiwa nfukoni
D. Aliirusha mtoni
48. Je, Usiri alipata kazi ingine ipi?
A. Kuuza mboga B. Kuuza sarafu
C. Kuuza maziwa D. Kuuza hotelini
49. Kwa nini aliweka maziwa kwenye mfuko wake?
A. Hakuwa na pahali pengine pa kuibebea
B. Kwa sababu ya uzembe
C. Ili isipotee
D. Ili ajifurahishe
50. Je, ni ipi kati ya hizi si tabia ya Usiri?
A. Mjinga B. Mwerevu C. Mzembe D. Mvivu

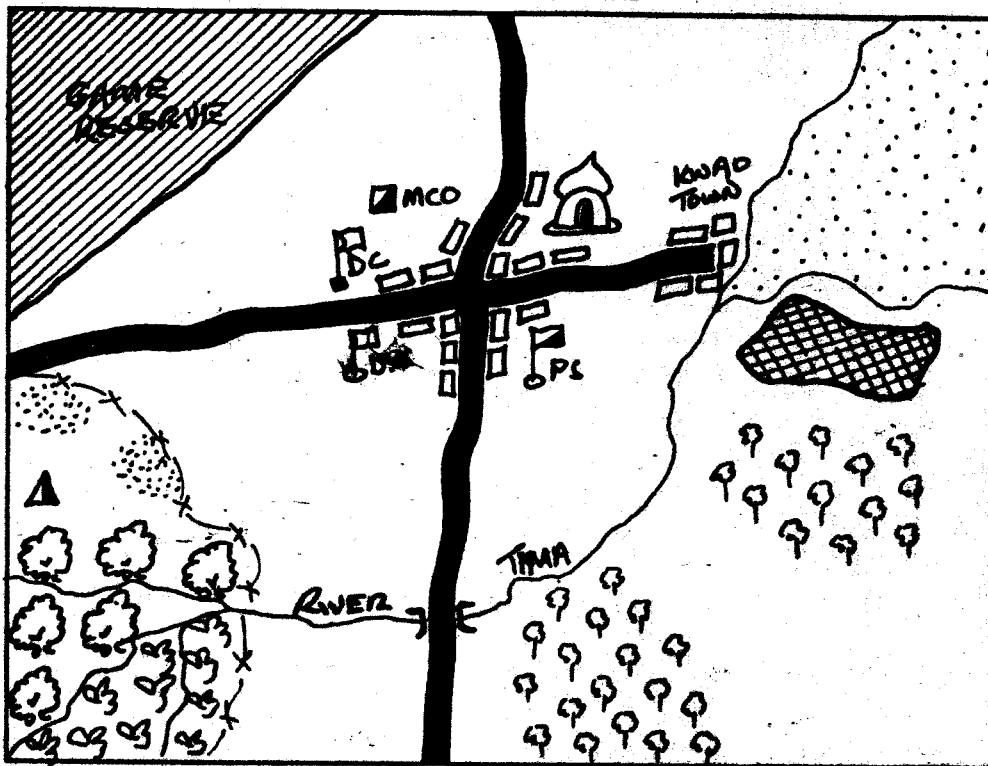
NANDI COUNTY

STD 5 - TERM 1

SOCIAL STUDIES & C.R.E.

Time:
2Hrs. 15Min.

KAGAAAREA



KEY	
	Tarmac Road
	Coffee
	Settlement
	Tea
	Hill
	Police Station
	Municipal Council Office
	Rice Irrigation
	Mosque
	Forest

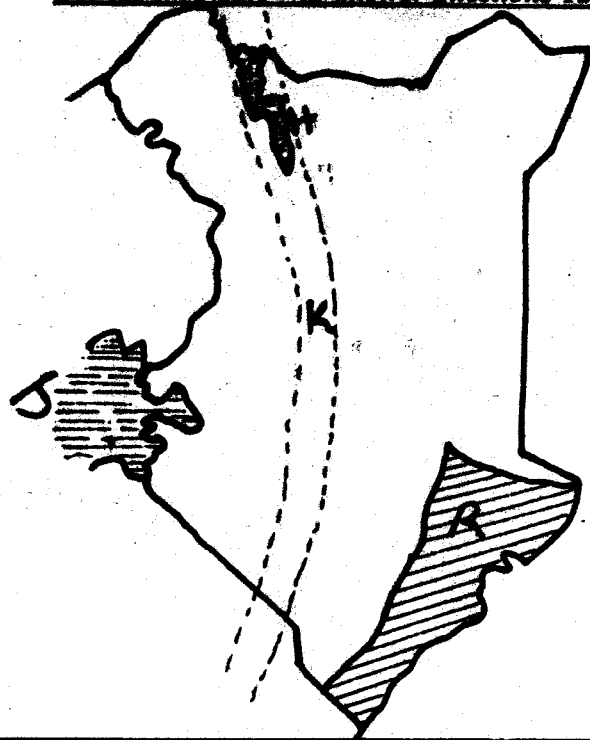
Use the map above to answer questions 1-7.


1. What is the general direction of flow of R. Tima?
A. South to East B. S.E. to N.W
C. N.E. to S.E. D. S.W. to N.E.
2. The crop grown under irrigation on the map is ____
A. Coffee B. Sugarcane C. Rice D. Tea
3. What is the economic activity that takes place at the S.E. part of the Kagaa area?
A. Crop farming B. Fishing
C. Tourism D. Lumbering
4. The two cash crops grown on the map are ____
A. Maize and sisal B. Tea and cocoa
C. Coffee and tea D. Coffee and rice
5. Mr. Maina wanted to start a shop business. He is required to get a trading licence from the ____
A. D.C's office B. D.O's office
C. Police station D. Municipal Council's office
6. Which is the highest area in the map?
A. North B. N.W C. S.W D. W
7. People in Kaagaa area are ____
A. Christians B. Hindus C. Muslims D. Pagans
8. Which one is a product of traditional pottery?
A. Iron spoon B. Baskets C. Axes D. Pots
9. The traditional exchange of goods for other goods is called ____
A. Barter trade B. Common trade
C. Culture trade D. Economic trade

10. Physical features include all the following **EXCEPT**:-

- A. Bridges B. Hills C. Rivers D. Lakes
11. Which is **NOT** an element of a map?
A. Title B. Direction C. Time D. Key


Use the map below to answer questions 12 -14.



12. The feature marked J neighbours _____
A. Somali B. Uganda C. Sudan D. Ethiopia
13. The type of vegetation found along the shaded area marked R is:-
A. Grassland B. Papyrus reeds
C. Mangrove forest D. Riverine vegetation
14. The lake marked H is called _____
A. L. Naivasha B. L. Victoria
C. L. Nakuru D. L. Turkana
15. Pyrethrin which is removed from pyrethrum flowers is used for making _____
A. Cement B. Cocoa
C. Insecticides D. Cow feeds
16. Which among the following is **NOT** a social service?
A. Education B. Housing
C. Electricity supply D. Farming
17. Which one of the following is **NOT** an importance of forests?
A. Influence on climate positively
B. Source of timber
C. Source of firewood
D. Making of car's and spare parts
18. The government encourages _____
A. Afforestation B. Deforestation
C. Desertification D. Soil erosion
19. There are many problems affecting wildlife in Kenya **EXCEPT**:-
A. Fire outbreaks B. Destruction of forests
C. Employment D. Illegal killing of animals
20. Which one of the following is **NOT** a benefit of peace in the society?
A. People love and assist each other
B. There is democracy
C. Corruption is encouraged
D. Foreigners invest in the society
21. Which one of the following may **NOT** lead to conflict in a society?
A. Failure to share resources
B. Equal distribution of resources
C. Denying people their right
D. Lack of respect
22. Which of the following industries encourages self employment?
A. Jua kali industries
B. Service industries
C. Processing industries
D. Manufacturing industries
23. The following are ways of becoming a Kenyan citizen **EXCEPT** by:-
A. Birth B. Corruption
C. Registration D. Naturalization
24. Which one of the following is a responsibility of a Kenyan citizen?
A. Participating in general election
B. Hating the country
C. Engaging in corruption
D. Breaking of laws
25. Which one of the following is **NOT** a right of a Kenyan citizen?
A. Right to own property
B. Right to move freely to any part of the country
C. Freedom to choose the religion to belong
D. Right to forcefully
26. The major cause of accident on our Kenyan roads today is:-
A. Careless of traffic officers
B. Careless use of roads
C. Bad weather
D. Use of unroadworthy vehicles
27. The most convenient method of transporting flowers is by:-
A. Road B. Sea C. Railway D. Air
28. Which one of the following is **NOT** a modern means of communication?
A. Postal services B. Telephone
C. Ululations D. Radio
29. The type of democracy where we vote in an MP is called:-
A. Representative B. Nomination
C. Liberal D. Partition
30. Which of the following is **NOT** a drainage feature?
A. Hills B. Lakes C. Oceans D. Rivers
31. One of the following is **NOT** a responsibility of a Kenyan citizen. Which one?
A. Taking part in community projects
B. Contributing in harambee projects
C. Engaging in corrupt deals
D. Maintaining peace
32. When laws are put in one document they form a:-
A. Syllabus B. Constitution
C. Curriculum D. Timetable
33. In our school law and order should be maintained by the following **EXCEPT**:-
A. Head-teacher B. Teacher
C. Prefect D. Assistant Chief
34. The road sign shown below means:-

A. No overtaking
B. Bumps ahead
C. No entry
D. Road closed to all users
35. The most commonly used form of transport in most parts of our country is:-
A. Air B. Water C. Road D. Rail
36. General elections in Kenya are held after every _____ years.
A. Ten B. Five C. Twenty D. Three
37. When the population of Kenya is in danger of HIV and AIDS, the government should provide:-
A. Money B. Health care C. Roads D. Water

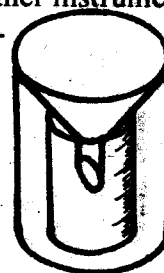
38. The counting of people in a country is known as census. A census is carried out after every:-
 A. Year B. Four years
 C. Five years D. Ten years
39. Which one of the following was **NOT** used in traditional trade?
 A. Money B. Honey
 C. Livestock products D. Cereals
40. According to the new constitution, Kenya is divided into _____ countries.
 A. 37 B. 47 C. 20 D. 57
41. Three of the following items are made in Jua kali industries **EXCEPT**:-
 A. Wheelbarrow B. Lanterns
 C. Pans D. Glassware
42. The following are traditional industries **EXCEPT**:-
 A. Vehicle assembling B. Mat making
 C. Wood carving D. Iron working
43. The major tourists attraction in Kenya is:-
 A. Good climate B. Wildlife
 C. Sandy beaches D. Historical sites
44. A national reserve is set up and controlled by the:-
 A. Government B. Kenya Wildlife service
 C. County council D. Tourist board
45. The **MAIN** problem affecting wildlife conservation is:-
 A. Desertification B. Deforestation
 C. Forest fires D. Poaching
46. The careless cutting down of trees is called:-
 A. Afforestation B. Agro-forestry
 C. Re-afforestation D. Deforestation

Study the diagram below and answer questions 47-49.



47. The type of rainfall illustrated above is called:-
 A. Relief rainfall B. Frontal rainfall
 C. Cyclonic rainfall D. Conventional rainfall
48. The above type of rainfall mainly falls:-
 A. At night
 B. In the afternoon
 C. During the dry season
 D. During the rainy season
49. Which of the following towns in Kenya does **NOT** experience the above type of rainfall?
 A. Meru B. Malindi C. Kisumu D. Mombasa

50. The compass direction between North east and North is:-
 A. North East North B. North East East
 C. North North West D. North North East
51. The conditions of the atmosphere over a long period of time is known as:-
 A. Weather B. Environment
 C. Climate D. Temperature
52. Which one of the following **DOES NOT** lead to soil erosion?
 A. Contour ploughing B. Forest fires
 C. De-forestation D. Poor farming methods
53. Chicken, ducks, geese and turkeys are collectively called:-
 A. Beef B. Poultry C. Dairy D. Layers
54. Three of the following are beverage crops **EXCEPT**:-
 A. Tea B. Coffee C. Cocoa D. Cotton
55. Which one of the following is **NOT** a responsibility of parents at home?
 A. Going to school
 B. Buying school uniform
 C. Paying school fees
 D. Providing to families basic needs
56. A family consisting of parents, children and relatives is called:-
 A. Nuclear family B. Street family
 C. Extended family D. Single parent family
57. Traditional doctors who used plant extracts to treat people were called a:-
 A. Prophets B. Herbalists
 C. Rainmakers D. Priests
58. Three of the following are elements of weather. Which one is **NOT**?
 A. Soil B. Rainfall C. Temperature D. Wind
59. The weather instrument shown below is used to measure:-



- A. Temperature
 B. Amount of rainfall
 C. Speed of wind
 D. Atmospheric pressure
60. Which one of the following is **NOT** a child right?
 A. Right to education
 B. Freedom of association
 C. Right to medical care
 D. Right to marry
- C.R.E.**
61. The different roles done by members of the society being either male or female are called:-
 A. Community roles B. Gender roles
 C. Boy roles D. Girls roles

62. How old was Noah when it rained for forty days and forty nights?
A. Six thousand years B. Sixty six years
C. Six hundred years D. Sixty three years
63. The man who was helped by the good samaritan was going from Jerusalem to:-
A. Jericho B. Emmaus C. Damascus D. Nazareth
64. According to Galatians 6:2 whose law do we obey when we share work?
A. Paul B. Christ C. Our teachers D. Our parents
65. Which one of the following is **NOT** a part of the covenant?
A. Sacrifice B. Agreement
C. No obligations D. Memorial
66. Which one of the following commandments teaches on respect for human life?
A. Do not commit adultery
B. Do not covet your neighbours property
C. Do not commit murder
D. Keep the sabbath day holy
67. By delivering the Israelites out of bondage, God showed that He was:-
A. Loving and caring B. The Messiah
C. The powerful D. The overall boss
68. Which one of the following Christian actions shows kindness, a fruit of the Holy Spirit?
A. Attending church services regularly
B. Inviting the hungry for meals
C. Playing with other friends
D. Visiting our relatives
69. Who among the following is referred to as the father of faith?
A. Abraham B. Moses C. Noah D. Isaac
70. A Christian community is a group of people who:-
A. Believe in Jesus and his teachings
B. Believe in working together in industries
C. Sing together in church halls
D. Contribute in harambee meetings
71. Which one of the following is **NOT** a fruit of the Holy Spirit?
A. Faith B. Love C. Faithfulness D. Patience
72. Christians mark Christ victory over death during:-
A. Easter B. Pentecost
C. Ascension D. Christmas
73. The ten commandments were given to Moses at:-
A. Mt. Sinai B. Mt. Zion C. Mt. Horeb D. Egypt
74. Who of the following helps Christians to overcome the challenges in life?
A. The angels B. The Holy Spirit
C. Disciples D. Fellow Christians
75. In John 6:47 Jesus said, "I am telling the truth he who believes in me has:-
A. Holy Spirit B. External life
C. Eternal life D. No truth
76. We can know a true Christian witness from:-
A. The way he goes to church
B. His works only
C. His works and deeds
D. His word and prayers
77. Who baptised Jesus?
A. Moses B. John the baptist C. Peter D. James
78. In Mathew 5:4 says, "Happy are those who mourn for:-
A. God will comfort them
B. God will judge them
C. God will call them his sons
D. God will reward them
79. Jesus healed the centurion servant because:-
A. The centurion loved Jesus
B. The centurion's servant had faith
C. The centurion had faith
D. The centurion ordered Jesus to do so
80. In washing His disciples feet, Jesus taught that:-
A. Good leaders should be brave
B. Good leaders should serve others
C. Good leaders should be proud
D. Good leaders should be fair
81. All the following are gifts of the Holy spirit **EXCEPT**:-
A. Wisdom B. Knowledge C. Healing D. Love
82. As Christians we should:-
A. Hate our enemies B. Love our friends only
C. Love our enemies D. Hate our friends
83. We can overcome the feelings of envy and dislike by asking the help from:-
A. Our parents B. Our friends
C. Our pastors D. The holy spirit
84. Abraham chose to _____ God.
A. Obey B. Disobey C. Disagree D. Hate
85. Jesus stayed in the desert for _____ days and nights.
A. 7 B. 10 C. 40 D. 30
86. In traditional African society people:-
A. Liked wars B. Were overworked
C. Shared work D. Liked easy work
87. The leaders of the early church shared work with _____ helpers.
A. Three B. Six C. Seven D. Twelve
88. Kamau was playing with his sisters in the house. They broke their mother's vase. You would advice them to:-
A. Hide the broken pieces
B. Tell their mother the truth and apologize
C. Pretend that they do not know
D. Keep silent and hope their mother would not notice
89. Jesus is also known as the prince of _____
A. Peace B. Joy C. Love D. Unity
90. What should Christians do with their wealth?
A. Use it to mistreat the poor
B. Be boastful about it
C. Use it to campaign in politics
D. Use it to help the needy

NANDI COUNTY

STD 5 TERM 1

MARKING SCHEME

<u>ENGLISH</u>			<u>MATHS</u>			<u>KISWAHILI</u>			<u>SCIENCE</u>			<u>S/STUDIES</u>			<u>C.R.E</u>		
1. C	31. A		1. B	31. A		1. D	31. A		1. C	31. C		1. D	31. C		61. A		
2. C	32. C		2. A	32. B		2. B	32. A		2. B	32. A		2. C	32. B		62. C		
3. B	33. D		3. C	33. B		3. B	33. C		3. A	33. B		3. A	33. D		63. A		
4. A	34. D		4. C	34. C		4. C	34. D		4. A	34. C		4. C	34. D		64. A		
5. A	35. C		5. D	35. A		5. D	35. C		5. B	35. D		5. D	35. C		65. C		
6. B	36. A		6. A	36. B		6. A	36. B		6. A	36. C		6. C	36. B		66. C		
7. A	37. A		7. D	37. D		7. B	37. A		7. C	37. D		7. C	37. B		67. A		
8. D	38. B		8. A	38. B		8. A	38. C		8. C	38. A		8. D	38. D		68. B		
9. D	39. B		9. C	39. B		9. A	39. A		9. B	39. C		9. A	39. A		69. A		
10. B	40. B		10. B	40. C		10. A	40. D		10. C	40. C		10. A	40. B		70. A		
11. C	41. B		11. B	41. A		11. B	41. A		11. A	41. D		11. C	41. D		71. A		
12. A	42. C		12. D	42. C		12. A	42. A		12. C	42. B		12. B	42. A		72. A		
13. A	43. D		13. A	43. D		13. C	43. B		13. C	43. A		13. C	43. B		73. A		
14. B	44. D		14. C	44. B		14. B	44. D		14. D	44. A		14. D	44. C		74. A		
15. C	45. D		15. B	45. C		15. D	45. C		15. D	45. B		15. C	45. D		75. B		
16. B	46. C		16. B	46. A		16. B	46. B		16. A	46. B		16. D	46. D		76. C		
17. D	47. B		17. A	47. D		17. A	47. A		17. D	47. C		17. D	47. D		77. B		
18. B	48. C		18. D	48. C		18. C	48. C		18. C	48. D		18. A	48. B		78. A		
19. A	49. A		19. C	49. D		19. D	49. C		19. D	49. C		19. C	49. A		79. C		
20. D	50. B		20. C	50. C		20. B	50. B		20. C	50. D		20. C	50. D		80. B		
21. B			21. D			21. B			21. D			21. B	51. C		81. D		
22. C			22. B			22. C			22. C			22. A	52. A		82. C		
23. D			23. A			23. B			23. A			23. B	53. B		83. D		
24. A			24. C			24. D			24. C			24. A	54. D		84. A		
25. C			25. B			25. A			25. B			25. D	55. A		85. C		
26. A			26. B			26. C			26. B			26. B	56. C		86. C		
27. B			27. C			27. B			27. D			27. D	57. B		87. A		
28. C			28. D			28. B			28. C			28. C	58. A		88. B		
29. D			29. D			29. C			29. D			29. A	59. B		89. A		
30. B			30. A			30. A	✓		30. B			30. A	60. D		90. D		

COMPOSITION / INSHA MARKING SCHEME MARKING CRITERION

1. - The composition will be assessed according to the following general guidelines.
 - The maximum mark will be 40 and the minimum mark 01
 - Does the script show that the candidate can communicate accurately, fluently and imaginatively in English /

Accuracy (16marks)

- | | |
|--|--|
| (a) Correct tense and agreement of verbs (4 marks) | (b) Accurate use of vocabulary (4 marks) |
| (c) Correct spelling (4 marks) | (d) Correct punctuation (4 marks) |

Fluency (16 marks)

- | | |
|---|--|
| (a) Work in the correct order (4 marks) | (b) Sentences connected and paragraphs (4 marks) |
| (c) Correct spelling (4 marks) | (d) Ideas developed in logic sequence (4 marks) |

Imagination (8 marks)

- (a) Unusual but appropriate use of words and phrases (4 marks)
- (b) Variety of structure (4marks)

NB. Please, teachers are requested to scrutinize this marking scheme before use, it is worth.