

BUSIA COUNTY

STD 3 - TERM 1

MATHEMATICS

Name..... School.....

1. Write in numbers. Nine hundred and one _____
(9001, 901, 91)

Add

2.
$$\begin{array}{r} 234 \\ + 56 \\ \hline \end{array}$$

3.
$$\begin{array}{r} 900 \\ + 643 \\ \hline \end{array}$$

4.
$$\begin{array}{r} 89 \\ + 38 \\ \hline \end{array}$$

5.
$$\begin{array}{r} 178 \\ + 302 \\ \hline \end{array}$$

Subtract

6.
$$\begin{array}{r} 1435 \\ - 123 \\ \hline \end{array}$$

7.
$$\begin{array}{r} 5538 \\ - 402 \\ \hline \end{array}$$

8. $123 - 19 =$ _____

9. $300 - 100 =$ _____

Multiply

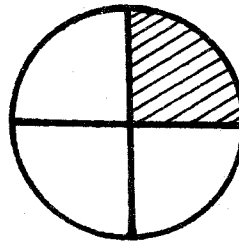
10. $8 \times 8 =$ _____

11. $7 \times 5 =$ _____

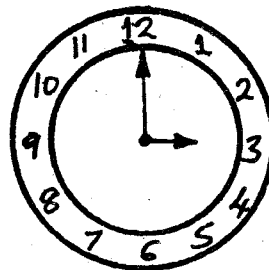
12. $6 \times 5 =$ _____

13. How many legs do 4 dogs have? _____

14. The shaded fraction is _____



15. The time is _____ o'clock.



16. $8 \times 10 =$ _____

17. $90 \div 9 =$ _____

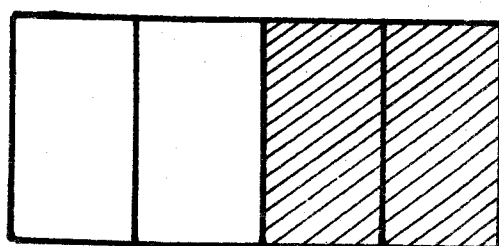
18. $48 \div 8 =$ _____

19. $16 \div 4 =$ _____

20. Take away 8 from 16 = _____

21. Fill in the missing number
10, 20, _____, 40, 50

22. What is the shaded fraction? _____



$$\begin{array}{r} 23. \quad 4632 \\ + 465 \\ \hline \end{array}$$

$$\begin{array}{r} 24. \quad 7848 \\ - 236 \\ \hline \end{array}$$

$$\begin{array}{r} 25. \quad 8 \\ \times 6 \\ \hline \end{array}$$

$$26. \quad 9 \times 9 = \underline{\hspace{2cm}}$$

$$27. \quad \square - 50 = 50$$

$$28. \quad 50 \div 5 = \underline{\hspace{2cm}}$$

$$29. \quad 188 + 266 = \underline{\hspace{2cm}}$$

$$30. \quad 904 = \underline{\hspace{1cm}} \text{ hundreds} \\ \underline{\hspace{1cm}} \text{ tens } \underline{\hspace{1cm}} \text{ ones}$$

$$31. \quad \underline{\hspace{2cm}} = 3 \text{ thousands } 4 \\ \text{hundreds } 3 \text{ tens } 0 \text{ ones}$$

$$32. \quad \text{Write one thousand and} \\ \text{seventy in figures} = \underline{\hspace{2cm}}$$

$$33. \quad \frac{1}{2} + \frac{1}{2} = \underline{\hspace{2cm}}$$

$$34. \quad \frac{5}{8} - \frac{3}{8} = \underline{\hspace{2cm}}$$


$$35. \quad \frac{3}{4} - \frac{1}{4} = \underline{\hspace{2cm}}$$

$$36. \quad \frac{2}{4} + \frac{1}{4} = \underline{\hspace{2cm}}$$

$$37. \quad 24 \div 4 = \underline{\hspace{2cm}}$$

$$38. \quad 21 \div 3 = \underline{\hspace{2cm}}$$

$$39. \quad \text{Name this shape } \underline{\hspace{2cm}}$$

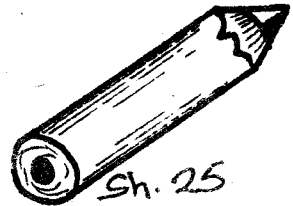



$$40. \quad \text{Four cars have 12 wheels.} \\ \text{How many wheels do one} \\ \text{car have? } \underline{\hspace{2cm}}$$

$$\begin{array}{r} 41. \quad 8864 \\ - 4432 \\ \hline \end{array}$$

$$42. \quad \square \times 9 = 36$$



$$43. \quad 36 \div \square = 6$$



$$44. \quad \text{How much do I pay for 3} \\ \text{books? } \underline{\hspace{2cm}}$$

$$45. \quad \text{Sh } 10 = \underline{\hspace{1cm}} \text{ five shilling} \\ \text{coins}$$

$$46. \quad 8 \times 7 = \underline{\hspace{2cm}}$$

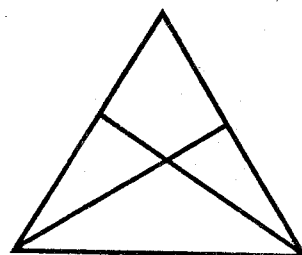


$$47. \quad \text{Name shape A } \underline{\hspace{2cm}}$$

$$48. \quad \text{Name shape B } \underline{\hspace{2cm}}$$

$$49. \quad \text{The height of a classroom} \\ \text{door is } \underline{\hspace{1cm}} \text{ (1m, 2m, 5m)}$$

$$50. \quad \text{How many triangles are} \\ \text{there? } \underline{\hspace{2cm}}$$



$$(4, 11, 7)$$

BUSIA COUNTY
STD 3 - TERM 1
ENGLISH

Name..... School.....

DICTATION

1. _____
2. _____
3. _____
4. _____
5. _____

FILL IN THE MISSING LETTERS

6. l ____ br ____ ry
7. veh ____ cle
8. u ____ if ____ rm
9. d ____ sk

USE "a" OR "an"

10. My friend gave me _____ banana.
11. Give me _____ apple.
12. That is _____ orange.
13. I saw _____ antelope.

WRITE THE PLURALS

14. Milk - _____
15. Shelf - _____
16. City - _____
17. Foot - _____

WRITE THE DOING WORDS

18. Keep - _____
19. Skip - _____
20. Drive - _____
21. Hang - _____
22. Sweep - _____

WRITE THE OPPOSITES

23. Expensive - _____
24. Behind - _____
25. Remember - _____
26. Cry - _____
27. Kind - _____

(laugh, infront, cheap, unkind, forget)

WRITE CORRECTLY

28. mesga - _____
29. chertea - _____
30. ssamege - _____
31. ckclo - _____

WRITE DOUBLE WORDS

32. Bath - _____
33. Play - _____
34. Notice - _____
35. Dust - _____
(board, bin, room, ground)

USE "has" OR "have"

36. He _____ to take a bath everyday.
37. We _____ watched the game.
38. I _____ seen an antelope.
39. She _____ to sweep the house.

WRITE ONE NAME

40. Mangoes, oranges, apples

41. Elephants, cat, zebra

CHOOSE THE RIGHT WORD

42. The young one of a cat is called a _____
(kid, puppy, kitten)
43. A person who cuts people's hair is called a _____
(saloonist, barber, tailor)
44. A person who treats sick people is called a _____
(farmer, shopkeeper, doctor)
45. I am in standard _____
46. I am _____ years old.

READ THIS STORY AND ANSWER THE QUESTIONS BELOW.

A mosquito is a dangerous insect. It spreads malaria. It sucks blood. It stays in long grass.

47. A _____ is a dangerous insect.
48. Mosquito spreads _____
49. Mosquito sucks _____
50. Mosquito stays in long _____
(blood, malaria, grass, mosquito)

BUSIA COUNTY
DARASA LA TATU MUHULA WA KWANZA
KISWAHILI

Jina..... Shule.....

IMLA

1. _____
2. _____
3. _____
4. _____
5. _____

ANDIKA KWA WINGI

6. Samaki mkubwa.

7. Mzee mnene.

8. Mti ule umekatwa.

9. Kipepeo mrembo.

10. Ua nzuri.

TUMIA SIFA "angu" KUJAZA PENGO

11. Kiatu _____ ni hiki.
12. Wazazi _____ ni hawa.
13. Mikate _____ imeoza.
14. Kalamu _____ zimepotea.
15. Mwalimu _____ ni huyu.

ANDIKA KINYUME CHA MANENO HAYA

16. Anika - _____
17. Mnene - _____
18. Malkia - _____
19. Bibi - _____
20. Nenda - _____

(mfalme, rudi, bwana, mwembamba, anua)

GEUZA SENTENSI ZIFUATAZO KWA WAKATI UJAO (fa)

21. Mtoto amelala. _____

22. Mgonjwa anapelekwa hospitali. _____

23. Watoto waliimba nyimbo nzuri. _____

24. Mfalme alifika kwa mkutano mapema. _____

25. Ndege anajenga kiota.

KANUSHA MANENO NA SENTENSI HIZI

26. Fagieni _____
27. Mtoto amesoma _____
28. Alikula tunda _____

ANDIKA MANENO HAYA VIZURI

29. hamasani - _____
30. thinilathe - _____
31. siuta - _____
32. bekem - _____

KAMILISHA METHALI NA VITENDAWILI HIVI

33. Mishale mitano _____
34. Kamba yenye magamba na meno _____
35. Macho hayana _____
36. Kuuliza si _____
37. Mtaka yote hukosa _____
38. Ukitaka cha mvunguni sharti _____

(yote, uiname, idole, kobe, nyoka, ujinga, pazia, zulia)

NI NENO GANI AMBALO HALIFAI KUWA HAPA ?

39. Baba, nyanya, babu, mwalimu _____

40. Mwewe, kuku, kanga, kunguru _____
41. Majano, samawati, nyekundu, damu _____
42. Nusu, kumi, thuluthi, robo _____

KAMILISHA SENTENSI HIZI KWA KUFUATA MAAGIZO

43. _____ anaendesha gari kwa kasi. (Nahodha, Rubani, Dereva)
44. Usipike uji _____ pika mzito. (mwepesi, nyepesi, uepesi)
45. Kijana _____ amekimbia kwenda nyumbani. (kile, yule, hiyo)
46. Unataka mvulana _____? (gani, yupi, mgani)
47. Maji _____ mwagika. (ime, yame, ina)

JAZA PENGO KWA JIBU SAHIHI

Juzi mwalimu 48 wa Kiswahili alitupeleka maktabani kusoma. Tuliingia katika maktaba 49 na kwa 50.

48. (watu, wetu, etu)
49. (polepole, kwa mbio, tukilala)
50. (adhabu, adabu, hasara)



BUSIA COUNTY

STD 3 - TERM 1

SCIENCE

Name..... School.....









1. We use _____ to see. (ears, eyes, nose)
2. When big things are far they look ____ (big, small, tall)
3. People who cannot talk use _____ to communicate. (head, feeling, gestures)
4. When a person is healthy he feels _____ (strong, weak, fat)
5. Dirty toilets, latrines and urinals smell _____ (good, smart, bad)
6. When a person is tired he should _____ (work, rest, eat)
7. _____ are found at homes. (Lions, Hens, Hippos)
Where do these plants grow?




(water, coast, desert)

11. We eat the seeds of _____ (cotton, beans, pawpaws)

Answer questions 12-14 from the weather chart below.

Days	Morning	Afternoon
Monday		
Tuesday		
Wednesday		
Thursday		

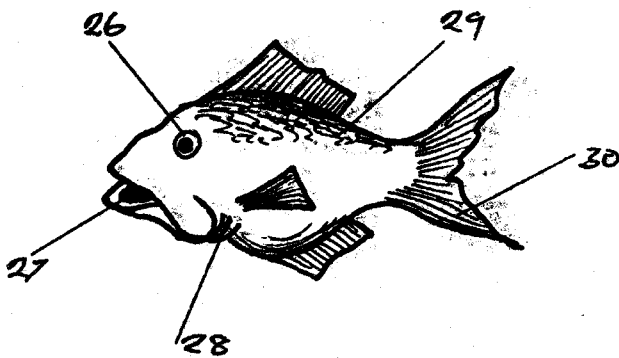
12. Monday was a _____ day. (windy, sunny, rainy)
13. Which days were calm? _____ (Tuesday and Thursday, Monday and Wednesday)
14. Which afternoon was cloudy? _____ (Monday, Thursday, Wednesday)
15. We should brush our teeth _____ eating food. (when, after, before)
16. We use _____ to clean our nose. (leaves, papers, handkerchief)
17. Sleep helps the body and mind to _____ (remember, walk, relax)
18. This is moved by _____



(water, wind, soil)

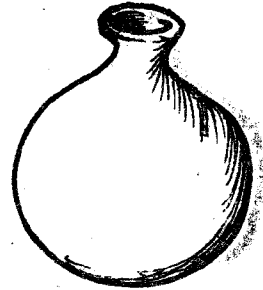
19. Strong wind can lift off a _____ (house, roof, floor)

20. The best time for winnowing is when there is _____ (rain, sun, wind)
 21. The place where a plant grows is its _____ (field, surrounding, habitat)
 22. Timber is used to make _____ (feathers, furniture, food)
 23. When it rains for many days, we call this a _____ season. (dry, fertile, rainy)
 24. When it is a _____ season plants die. (rainy, dry, cloudy)
 25. Unwanted plants that grow in a garden are called _____ (weeds, plants, flowers)
- Name the parts of a fish



26. _____
 27. _____
 28. _____
 29. _____
 30. _____
- (eye, fins, scales, gills, mouth)
31. A caterpillar moves by _____ (flying, crawling, running)
 32. Which part of a fish helps it to swim? _____ (Gills, Fins, Scales)
 33. A bird uses _____ when flying. (beak, wings, claws)
 34. Cats like drinking _____ (oil, milk, juice)

35. A pig stays in a _____ (hutch, shade, sty)
36. Drinking water should be _____ (boiled, cooked, filtered)
37. Write one source of water. _____ (river, hill, valley)
38. This is a _____ for storing water.



- (pot, sufuria, dish)
39. A _____ can be used for transporting goods. (camel, horse, goat)
 40. What can be used to make mud water clear? _____ (Filtering, Boiling, Pouring)
 41. The **BEST** soil for modelling is _____ (sand, loam, clay)
 42. Flowers make a place look _____ (green, red, beautiful)
 43. Most leaves are _____ in colour. (yellow, black, green)
 44. We eat the stem of a _____ (carrot, sugarcane, potato)
 45. A ripe orange tastes _____ (bitter, sweet, sour)
 46. We should not share _____ (food, towel, desk)
 47. A person who cannot see is called a _____ (deaf, blind, dumb)
 48. A _____ spreads malaria. (bee, mosquito, butterfly)
 49. A _____ is a useful insect. (termite, wasp, bee)
 50. We should keep our houses _____ (clean, dirty, wet)

BUSIA COUNTY

STD 3 - END-TERM 1

SOCIAL STUDIES

Name School

1. Our school is in _____ district.
2. Many divisions make a _____
(location, village, district)
3. The four part of a compass are called _____
(cardinal points, East points, direction points)
4. The needle of a compass always point to the _____
(West, North, South)

5.



This is a _____
(valley, river, hill)

6. We get timber from the _____
(forest, air, mud)
7. _____ is an element of weather. (Calm, Wet, Clouds)
8. Farmers harvest their crops during _____ season.
(dry, muddy, wet)

9. People wear heavy clothes when it is _____
(warm, cold, hot)
10. Most people in our district are _____
(Kamba, Meru, Kikuyu)
11. _____ is depending on one another. (Interdependence, dependence, help)

Weather chart.

Wednesday		
Thursday		
Friday		

12. On which day did pupils wear gum-boots? _____
13. It was _____ on Thursday afternoon.
14. On Wednesday it was _____ the whole day.

15. _____ is a building in our school. **(Shop, Latrine, Hotel)**
16. Running round the field is called _____
(athletics, skipping, swinging)
17. Haki iwe ngao na _____
(mwizi, mlizi, mlinzi)
18. Zebra crossing is also called _____
(people crossing, pedestrian crossing, pupil crossing)
19. A _____ takes letters to the post office. **(secretary, messenger, cleaner)**
20. People who are related are called _____
(grandparents, neighbours, relatives)
21. Forcing a child to do hard work like breaking stones is called child _____
(need, labour, right)
22. We should not throw rubbish on the _____
(floor, dust-bin, rubbish pit)
23. _____ is a need in our school.
(Church, Playground, Market)
24. We need _____ to feed our animals. **(tea, soda, water)**
25. Clothes keep our body _____
(warm, cold, dirty)
26. We go to school to _____
(eat, learn, fight)
27. Goats give us meat and _____
(milk, wool, eggs)
28. Watering crops during the dry season is called _____
(uprooting, irrigation, weeding)
29. People who do not live in their own houses in town pay house _____
(rent, fees, fare)
30. We fetch water for cooking from the _____
(shop, river, school)

BUSIA COUNTY

STD 3 - END-TERM 1

C.R.E.

Name School

- | | |
|---|---|
| <p>1. God is _____ with everything He created. (sad, happy, annoyed)</p> <p>2. _____ is a way of worshipping God. (Fighting, Playing, Praying)</p> <p>3. Luhya call their God _____ (Mulungu, Were, Nyasaye)</p> <p>4. _____ was a patriachs. (Isaac, David, Samuel)</p> <p>5. The time of getting ready for the coming of Jesus is called _____ (sabbath, Easter, Advent)</p> <p>6. The word Jesus means _____ (Emmanuel, Saviour, Moses)</p> <p>7. _____ killed Goliath. (Abraham, Joseph, David)</p> <p>8. When Jesus was born he was laid in a _____ (bed, manger, cot)</p> <p>9. God told _____ "I AM WHOM I AM". (Isaac, Abraham, Moses)</p> <p>10. _____ was invited by Lydia at her house. (Peter, Paul, John)</p> <p>11. Emperor _____ ordered people to be registered in Bethlehem. (Augustus, Jacob, Goliath)</p> | <p>12. During Christmas people _____ gifts. (burn, share, throw)</p> <p>13. In traditional African society people worshipped God in the _____ (church, mountain, school)</p> <p>14. Samuel stayed with priest _____ in the temple. (Eli, Zaccheaus, Naboth)</p> <p>15. Jesus raised the son of a widow who came from a town called _____ (Nazareth, Bethlehem, Nain)</p> <p>16. _____ was a short man who climbed on a tree to see Jesus. (Samuel, Zaccheus, Eli)</p> <p>17. Anania and Sapphira were punished because of _____ (abusing, cheating, fighting)</p> <p>18. _____ prepared the coming of Jesus. (Israelites, Philistines, John the baptist)</p> <p>19. _____ means God with us. (Immanuel, Saviour, Patriach)</p> <p>20. The wisemen were guided by the _____ (moon, star, sun)</p> |
|---|---|