

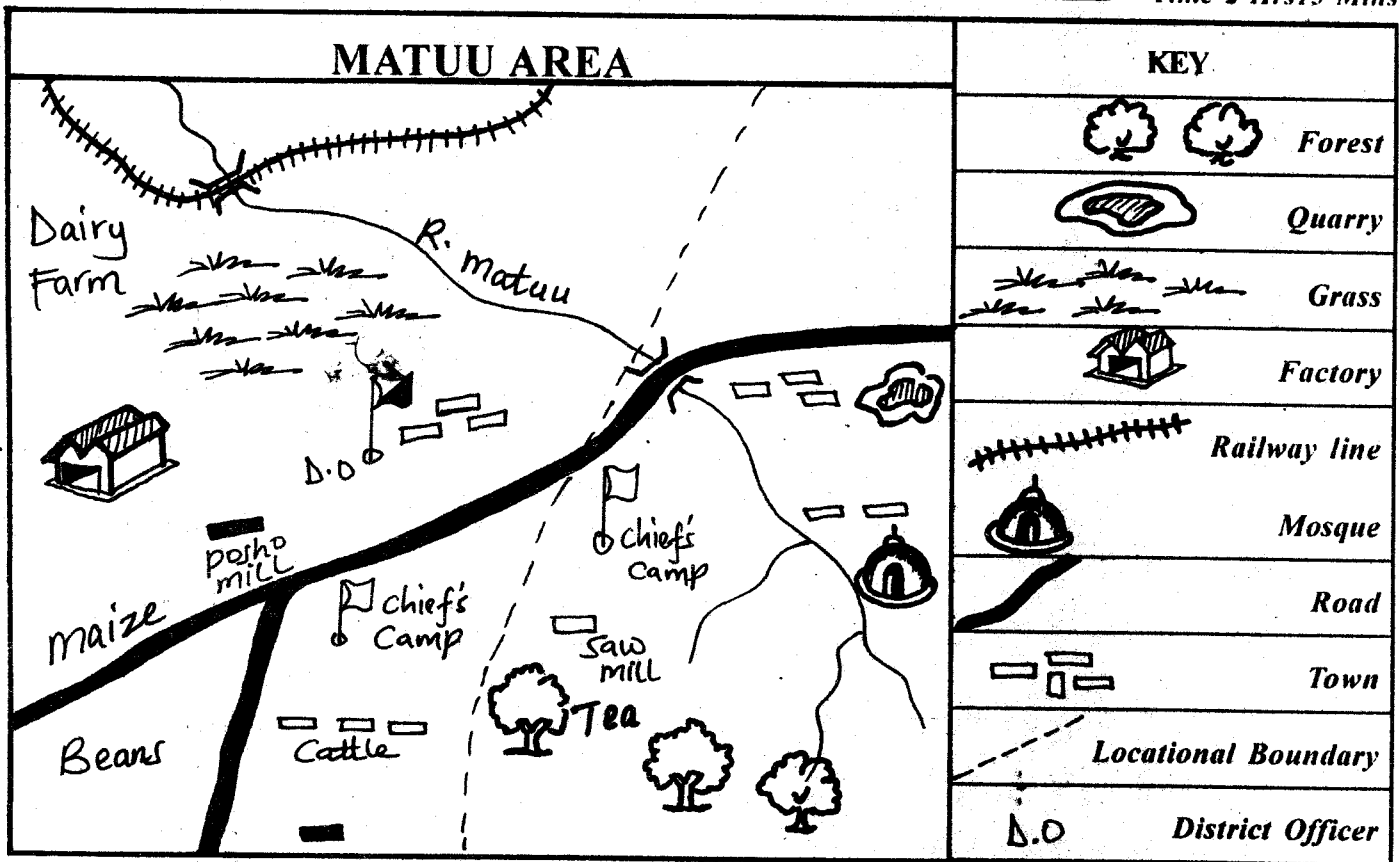
# KIRINYAGA COUNTY

## STD 4 - TERM 1

### SOCIAL STUDIES / C.R.E

PENPLUS  
KIRINYAGA

Time 2 Hrs 15 Mins

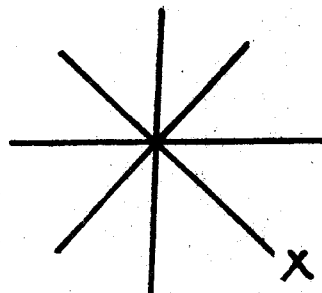


Study the map of Matuu area and answer questions 1-7.


1. Which is the direction of the factory from the Mosque?  
A. West    B. East    C. South    D. North
2. Which crop is **NOT** grown in Matuu area?  
A. Coffee    B. Tea  
C. Maize    D. Beans
3. The people of Matuu area are:-  
A. Christians    B. Buddhists  
C. Muslims    D. Traditionalists
4. Matuu area is administered by:-  
A. One chief    B. One D.O  
C. 2 D.O's    D. Assistant chief
5. The lowest point on the map is:-  
A. At the forest  
B. To the North West of the map  
C. Near cattle dip  
D. Along the railway line
6. The **MAIN** transport system in the area is:-  
A. Animals    B. Air  
C. Roads    D. Sea

7. The general flow of R. Matuu is:-  
A. South East to North West  
B. South to North  
C. North West to North  
D. North West to South
8. \_\_\_\_\_ is the name given to plants, animals and birds in their natural homes.  
A. Wildlife    B. Forests  
C. Nature    D. Tourism

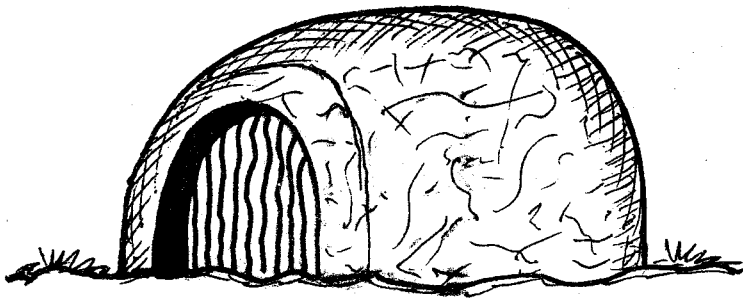
9. X is \_\_\_\_\_  
A. South East  
B. South West  
C. West  
D. North West



10. Which of the following is a beverage crop?  
A. Pyrethrum    B. Cocoa  
C. Sisal    D. Maize

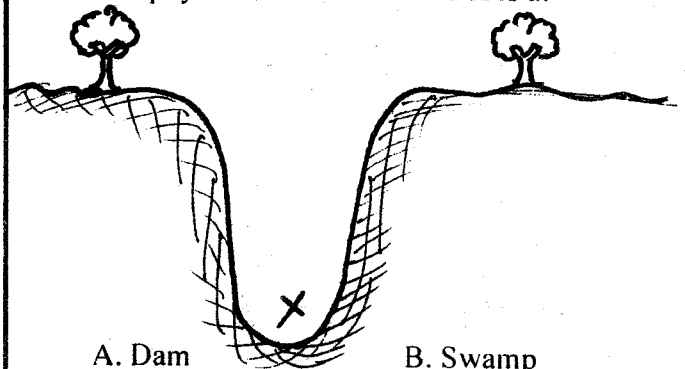
11. Which one is **NOT** a major language group in our county?  
 A. Cushites                      B. Nilotes  
 C. Bantus                         D. Asians
12. Vegetation that grows on its own is called \_\_\_\_\_ vegetation.  
 A. Good                            B. Planted  
 C. Savanna                        D. Natural
13. Many trees growing in an area make a:-  
 A. Bush                            B. Forest  
 C. Thicket                         D. Scrub
14. Which one was **NOT** a way of teaching children in the past?  
 A. Books                            B. Stories  
 C. Riddles                         D. Elders
15. The temperature of a day is measured by a:-  
 A. Thermometer                 B. Wind-vane  
 C. Barometer                     D. Rain-gauge
16. A county representative represents a:-  
 A. Ward                            B. Village  
 C. Location                        D. Sub-location
17. Who among the following call their God Enkai?  
 A. Kalenjin                        B. Maasai  
 C. Luo                               D. Njemps
18. The best soil for planting crops is:-  
 A. Loam    B. Sand    C. Clay    D. Stone
19. People born at the same time form:-  
 A. A family                        B. An age group  
 C. A clan                            D. A tribe
20. \_\_\_\_\_ is a name given to a piece of land surrounded by water.  
 A. Forest                            B. Hill  
 C. Valley                            D. Island
21. The area set aside for wildlife and managed by the county government is called:-  
 A. National park                 B. Game reserve  
 C. Wildlife                         D. Orphanage
22. Who among the following treated people in the past?  
 A. Prophets                        B. Herbalists  
 C. Seers                             D. Blacksmiths
23. One of the following is **NOT** a traditional industry. Which one?  
 A. Basketry                        B. Blacksmithy  
 C. Vehicle assembly             D. Pottery
24. Which is the **MAIN** food crop in Kenya?  
 A. Rice                              B. Potato  
 C. Maize                            D. Cassava
25. The black colour of the flag stands for:-  
 A. Blood                            B. People  
 C. Peace                            D. Vegetation
26. Herbal medicine is made from:-  
 A. Trees                            B. Animals  
 C. Hospital                         D. University
27. Exchange of goods for other goods is called:-  
 A. Money trade                    B. Migration  
 C. Barter trade                    D. International trade.
28. Moral laws were made by the \_\_\_\_\_ in the community.  
 A. Youth                            B. Elders  
 C. Women                         D. Parliament
29. Counting of people is called:-  
 A. Voting                            B. Census  
 C. Polling                           D. Elections
30. The road sign below means:-  

- A. Danger ahead                 B. Stop  
 C. Get ready                       D. Zebra crossing
31. \_\_\_\_\_ are visitors who come to our country to see wild animals.  
 A. Strangers                       B. Tourists  
 C. Traders                         D. Rangers
32. The holiday that is celebrated on the 1st June is called:-  
 A. Mashujaa day                 B. Labour day  
 C. Jamhuri day                 D. Madaraka day
33. Special skills in traditional African society were learnt through:-  
 A. Workshops                     B. Apprenticeship  
 C. Examination                 D. Reading
34. The large farms where beef animals are kept are called:-  
 A. Paddocks                        B. Stalls  
 C. Ranches                         D. Cattle dips
35. Altitude is defined as:-  
 A. Height above the sea level  
 B. High areas  
 C. Length of sea levels  
 D. Mountain region
36. Which is the fastest means of communication?  
 A. Letters                            B. Television  
 C. Radio                             D. Newspapers
37. The way of life of people is known as:-  
 A. Dressing                        B. Culture  
 C. Games                            D. Songs
38. People in Kenya are divided into three **MAIN** language groups namely Bantus, Nilotes and:-  
 A. Cushites                        B. Arabs  
 C. Waswahili                      D. Kamba

39. Which Kenyan community made houses similar to the one drawn below?

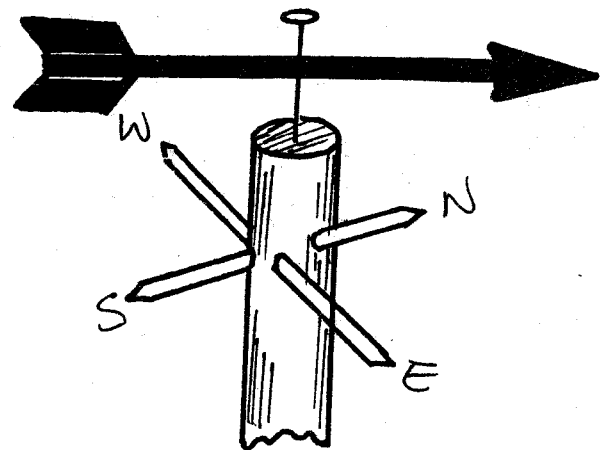


- A. Kikuyu  
C. Luo
- B. Mijikenda  
D. Maasai
40. Which one of the following was a reason for the migration in the past?  
A. Plenty of food  
C. Hostile tribal attacks
- B. Plenty of grains  
D. Good fertile soils
41. The type of rainfall received in highland areas is:-  
A. Convectional  
C. Relief
- B. Cyclonic  
D. Frontal
42. Which one of the following is **NOT** a cause of road accidents?  
A. Obeying traffic rules  
C. Poor roads
- B. Bad weather  
D. Over speeding
43. The moving air is called:-  
A. Weather  
C. Element
- B. Wind  
D. Humidity
44. Hens kept for meat are called:-  
A. Cocks  
C. Broilers
- B. Layers  
D. Chicken
45. In traditional education, children were taught to \_\_\_\_\_ their elders.  
A. Discipline  
C. Respect
- B. Mistrust  
D. Insult
46. Beef cattle are kept in \_\_\_\_\_ vegetation.  
A. Grassland  
C. Arid
- B. Forest  
D. Plains
47. Who is the Deputy President of Kenya?  
A. Raila Odinga  
C. Uhuru Kenyatta
- B. William Ruto  
D. Kalonzo
48. Which one is **NOT** a physical feature?  
A. Road  
B. Mountain  
C. Valley  
D. Lake
49. A nuclear family has father, mother and \_\_\_\_\_.  
A. Aunts  
C. Children
- B. Uncles  
D. Grandparents
50. An activity done to earn a living is:-  
A. Busy activity  
C. Living activity
- B. Economic activity  
D. Sale activity
51. Planting trees where some have been cut is the practice of:-  
A. Deforestation  
C. Afforestation
- B. Lumbering  
D. De- afforestation

52. The ceremony which marked the passage from childhood to adulthood was called:-  
A. Naming ceremony  
C. Birth ceremony
- B. Marriage ceremony  
D. Initiation ceremony
53. In the past, people worshipped in holy places called?  
A. Shrines  
C. Temples
- B. Churches  
D. Mosques
54. The idea of people coming together to work for the benefit of the community is known as:-  
A. Harambee  
C. Contribution
- B. Communal  
D. Development
55. Which name is given to rivers which dry up during the dry seasons?  
A. Permanent rivers  
C. Swamps
- B. Seasonal rivers  
D. Drainage
56. The physical feature marked X is a:-



- A. Dam  
C. Valley
- B. Swamp  
D. Mountain
57. The instrument below is used to measure:-



- A. Rainfall  
C. Speed of wind
- B. Temperature  
D. Direction of wind
58. Many people who live around lakes and rivers are **MAINLY**:-  
A. Lumberers  
C. Fishermen
- B. Miners  
D. Traders
59. Which one of the following is **NOT** a use of water?  
A. Pollution  
C. Irrigation
- B. Drinking  
D. Cooking
60. Our county is headed by a:-  
A. Senator  
C. Governor
- B. M.P.  
D. President

**C.R.E.**

61. Man is considered as a special creature because:-  
A. He is able to speak  
B. He was created lastly  
C. He is created in the image of God  
D. He was placed in the garden of Eden
62. Who delivered the Israelites from their suffering in Egypt?  
A. Joshua B. Moses C. Aaron D. Peter
63. Who among the following was a sister to Lazarus?  
A. Martha B. Magdalene  
C. Elizabeth D. Ruth
64. Joseph was sold by his brothers to:-  
A. Jericho B. Carpernaum  
C. Egypt D. Jerusalem
65. King Solomon asked God to give him:-  
A. Riches B. Wisdom  
C. Knowledge D. Faith
66. Samuel worked in the temple under priest:-  
A. Simeon B. Jethro C. Gideon D. Eli
67. Who among the following is referred to as the father of Great faith?  
A. Abraham B. Isaac C. Moses D. Jacob
68. Which one of the following is a commandment with a promise?  
A. Love the Lord your God  
B. Keep the sabbath day holy  
C. Respect your mother and father  
D. Do not kill
69. Joseph the father of Jesus was a:-  
A. Tent maker B. Fisherman  
C. Priest D. Carpenter
70. Moses was given the Ten Commandments on mount:-  
A. Horeb B. Sinai  
C. Ararat D. Carmel
71. Jesus washed his disciples' feet to show:-  
A. Service B. Kindness  
C. Love D. Faithfulness
72. Jesus went to pray with his disciples in the garden of:-  
A. Eden B. Jordan C. Gethsemane D. Olives
73. People who do not want to share their things are:-  
A. Selfish B. Kind  
C. Generous D. Merciful
74. Who was the mother in law of Ruth?  
A. Hannah B. Elizabeth  
C. Naomi D. Peninah
75. Lazarus who was raised by Jesus had been in the tomb for \_\_\_\_\_ days.  
A. Four B. Three C. Ten D. Two

76. In *John 10:11-16*, Jesus is the \_\_\_\_\_ because he takes care of his sheep.  
A. Alpha and Omega B. Light of the world  
C. Good shepherd D. Bread of life
77. All the following are qualities of a good Christian **EXCEPT:-**  
A. Love B. Kindness  
C. Peace D. Hatred
78. We remember the death and resurrection of Jesus on:-  
A. Easter B. Christmas  
C. Madaraka D. Labour day
79. Which one of the following is a good effect of weather?  
A. Crops dry up B. Animals die  
C. Crops grow D. Houses are carried away
80. Naomi, a class four pupil, found a fifty shillings note in the compound. As a Christian, what should she do?  
A. Buy some mandazi  
B. Take it to her mother  
C. Share it with Janet her friend  
D. Take it to the teacher
81. The man who was brought to Jesus through the roof was:-  
A. Blind B. Dead  
C. Deaf D. Paralysed.
82. Jesus Christ died on the cross because of our:-  
A. Goodness B. Sins  
C. Poverty D. Richness
83. The man whom Jesus helped to catch a lot of fish was called:-  
A. Paul B. Matthew C. Peter D. Daniel
84. We can help the poor in the community by:-  
A. Feeding them B. Chasing them away  
C. Laughing at them D. Hating them
85. My father beat my mother last night. What should my mother do?  
A. Abuse him. B. Run away  
C. Seek help D. Forgive him
86. Lazy people in African tradition were:-  
A. Helped B. Encouraged  
C. Loved D. Disliked
87. Jesus performed his first miracle at:-  
A. Jericho B. Antioch  
C. Cana D. Capernaum
88. David liked playing his:-  
A. Drum B. Piano C. Harp D. Guitar
89. In order to be healed by Jesus, one should have:-  
A. Courage B. Faith  
C. Wisdom D. Holy spirit
90. Jesus fed \_\_\_\_\_ people with 5 loaves of bread.  
A. Two thousand B. Fifty thousand  
C. Five thousand D. Fifteen thousand

# KIRINYAGA COUNTY

## STD 4 - TERM 1


PENPLUS  
KIRINYAGA

# MATHEMATICS

Time 2 Hrs

1. Write twenty six thousand three hundred and eighteen in figures  
A. 63018    B. 26318    C. 23618    D. 26813
2. Find the place value of digit 5 in the number 54360  
A. Thousands    B. Hundred thousands  
C. Ten thousands    D. Hundreds
3. Which of the following numbers is divisible by both 2 and 5?  
A. 20    B. 35    C. 62    D. 55
4. Arrange  $\frac{1}{2}$ ,  $\frac{1}{9}$ ,  $\frac{1}{4}$ , and  $\frac{1}{6}$  from the smallest to the largest  
A.  $\frac{1}{2}$ ,  $\frac{1}{6}$ ,  $\frac{1}{4}$ ,  $\frac{1}{9}$     B.  $\frac{1}{9}$ ,  $\frac{1}{4}$ ,  $\frac{1}{6}$ ,  $\frac{1}{2}$   
C.  $\frac{1}{9}$ ,  $\frac{1}{6}$ ,  $\frac{1}{4}$ ,  $\frac{1}{2}$     D.  $\frac{1}{2}$ ,  $\frac{1}{4}$ ,  $\frac{1}{6}$ ,  $\frac{1}{9}$
5. Work out:
 

m	cm	A. 32m 14cm
14	73	B. 33m 142cm
+ 18	69	C. 32m 42cm
		D. 33m 42cm
6. How many small squares are in the figure below?
 



A. 26
B. 24
C. 23
D. 25
7. Which of the following numbers are odd only?  
A. 30, 14, 18    B. 57, 43, 31  
C. 17, 19, 22    D. 26, 34, 45
8. What is  $\frac{1}{9}$  of 54?  
A. 6    B. 8    C. 5    D. 7
9. What are the next two multiples of 4 after 24?  
A. 16, 20    B. 24, 28  
C. 20, 24    D. 28, 32
10. Work out:-
 

6186	A. 15873
+ 9787	B. 15973
	C. 16073
	D. 15963
11. Kangi sold a bull for Sh 28750 and a heifer for Sh 24680. How much more did he get on the sale of the bull than the heifer?  
A. Sh 4070    B. Sh 4130  
C. Sh 4270    D. Sh 5070

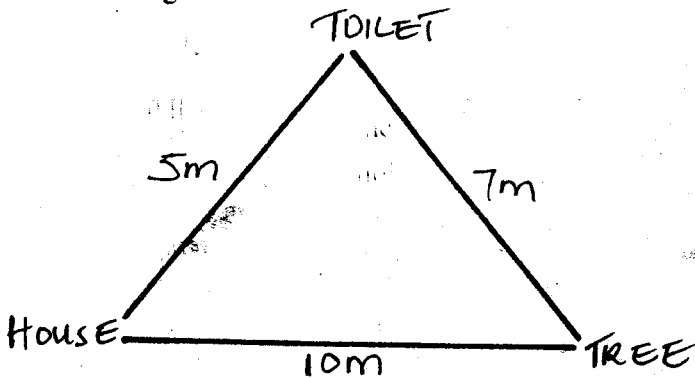
12. Which is the next number in the pattern?  
17, 12, 8, 5, \_\_\_\_\_  
A. 3    B. 1    C. 0    D. 2
13. Nafula weighs 50kg, Nasimiyu weighs 48kg, Halima weighs 55kg while Njeri weighs 44kg. Who is the heaviest among the others?  
A. Njeri    B. Nafula    C. Halima    D. Nasimiyu
14. Simplify:-  $\frac{12}{36}$   
A.  $\frac{1}{6}$     B.  $\frac{1}{5}$     C.  $\frac{1}{4}$     D.  $\frac{1}{3}$
15. Which is the smallest fraction?  $\frac{1}{10}$ ,  $\frac{1}{13}$ ,  $\frac{1}{8}$ ,  $\frac{1}{6}$   
A.  $\frac{1}{8}$     B.  $\frac{1}{4}$     C.  $\frac{1}{10}$     D.  $\frac{1}{6}$
16. Work out:-
 

weeks	days	A. 10 wks 0 days
6	1	B. 10 wks 3 days
1	5	C. 9 wks 3 days
+ 2	4	D. 9 wks 10 days
17. What is the sum of the odd numbers between 10 and 20?  
A. 85    B. 75    C. 95    D. 65
18. What is  $4 \times \frac{1}{2}$ ?  
A.  $4\frac{1}{2}$     B. 2    C. 4    D. 3
19. Work out:-  $0.3 + 0.6 =$   
A. 0.8    B. 0.7    C. 0.3    D. 0.9
20. Multiply out:-  $3 \times 0 \times 5 =$   
A. 15    B. 150    C. 0    D. 5
21. Mrs. Karanja's class has 35 pupils. Each pupil was given six exercise books. How many books did they receive altogether?  
A. 210    B. 200    C. 180    D. 41
22. A bus carried 43 passengers in each trip. It made 10 trips. How many passengers did it carry altogether?  
A. 431    B. 530    C. 430    D. 4310
23. How many litres are there in 24 half litres?  
A. 24    B. 12    C. 48    D. 6
24. What is the shape of your classroom?  
A. Triangle    B. Circle    C. Square    D. Rectangle

25. When an even number is added to an even number the result is \_\_\_\_\_ number.

A. A whole B. An odd C. An even D. A fraction

26. What is the distance from the house to the toilet through the tree?



A. 15m B. 12m C. 10m D. 17m

27. Subtract:-  $4823 - 487 =$

A. 3336 B. 4326 C. 4336 D. 4464

28. Work out:

$$\begin{array}{r} 69 \\ \times 4 \\ \hline \end{array}$$

A. 296 B. 246 C. 276 D. 226

29. Subtract:-  $\frac{6}{10} - \frac{3}{10}$

A.  $\frac{3}{10}$  B.  $\frac{3}{10}$  C.  $\frac{1}{10}$  D.  $\frac{3}{20}$

30. Add:  $\frac{4}{9} + \square = 1$

A.  $\frac{4}{9}$  B.  $\frac{5}{9}$  C.  $\frac{6}{9}$  D.  $\frac{9}{9}$

31. How many days are there in 7 weeks?

A. 49 B. 70 C. 42 D. 35

32. Work out:-  $249 \div 3 =$

A. 63 B. 82 C. 83 D. 93

33. What is the approximate weight of a Std 4 pupils?

A. 30kg B. 50kg C. 70kg D. 2kg

34. Find the total value of digit 3 in the number 63584

A. 3000 B. 300 C. 30 D. 3

35. Find the missing number.  $\square \div 5 = 10$

A. 5 B. 2 C. 50 D. 15

36. Work out:

weeks	days
9	2
- 4	5
<hr/>	

A. 6 weeks 4 days B. 13 weeks 7 days  
C. 5 weeks 4 days D. 4 weeks 4 days

37. Subtract:-  $8 - 2.7 =$

A. 10.7 B. 8.27 C. 5.3 D. 6.3

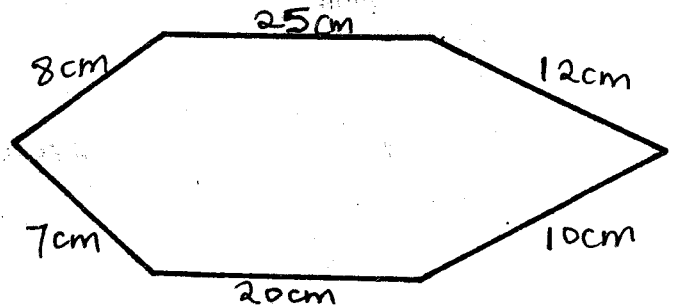
38. Which number comes immediately after 999 in words?

A. One thousand B. Ten thousand  
C. One hundred D. Hundred

39. Change 2 hours into minutes?

A. 100mins B. 200mins C. 60mins D. 120mins

40. Find the distance round the figure below.



A. 83cm B. 80cm C. 72cm D. 82cm

41. Work out:-  $2 \overline{)46}$

A. 92 B. 23 C. 24 D. 22

42. How many 10 shillings coins are there in a 200 shillings note?

A. 2000 B. 20 C. 2 D. 100

43. The cost of one Mathematics text book is Sh 250. What is the cost of 3 such text book?

A. Sh 853 B. Sh 650  
C. Sh 750 D. Sh 253

44. The unit used for measuring items like water, milk and paraffin are:-

A. Grammes B. Metre C. Litre D. Kilogram

45. A number is divisible by 5 if it:-

A. Is an even number  
B. Ends with 5 only  
C. Ends with 0 only  
D. Ends with 0 and 5

46. Work out:

$$\begin{array}{r} 87 \\ \times 4 \\ \hline \end{array}$$

A. 91 B. 248 C. 54 D. 348

47. What is  $7 \overline{)336}$

A. 37 B. 44 C. 28 D. 48

48. Change 800cm into metres.

A. 8m B. 0.8m C. 0.8cm D. 1m

49. How many days are there in the month of July and August?

A. 61 B. 62 C. 59 D. 60

50. Which of the following notes has the highest value?

A. Sh 50 B. Sh 200  
C. Sh 1000 D. Sh 500



29. What was the name of the dog?  
A. Boro                      B. Koko  
C. Robo                      D. Kobo
30. The woman went to \_\_\_\_\_  
A. fetch firewood              B. fetch water  
C. find the baby              D. fetch food
31. How old was the baby?  
A. 2 years                      B. 5 years old  
C. 3 years old                  D. one year old
32. The snake was killed by the \_\_\_\_\_  
A. man    B. woman    C. crocodile    D. dog
33. The snake was moving towards \_\_\_\_\_  
A. dog    B. woman    C. baby    D. house
34. Robo guarded the house because he was:-  
A. naughty                      B. lazy  
C. old                              D. obedient
35. The baby was not on his bed. The mother thought that he was \_\_\_\_\_  
A. eaten by the dog              B. eaten by the snake  
C. under the bed                  D. outside
36. Robo was killed by the:-  
A. baby    B. woman    C. boy    D. snake
37. From the story the woman was \_\_\_\_\_  
A. kind    B. clever    C. foolish    D. old
38. The underlined word is the past tense of the word:-  
A. Bited                              B. Bite  
C. Bitten                              D. Bittes
39. The blood that the woman saw was from the \_\_\_\_\_  
A. snake    B. dog    C. baby    D. woman
40. The **BEST** title of the story was \_\_\_\_\_  
A. The dog killed                  B. The clever woman  
C. The snake                          D. The dog and the baby

Read the passage that follows and use it to answer questions 41 - 50.

Once upon a time, there was a woman and his wife and a daughter called Nandi. Nandi was very beautiful. Nandi's mother felt sick and died. After sometime, the man got married to another woman. This woman gave birth to a girl called Lindi.

Lindi was ugly no one wanted to look at her. Her mother thought she could make her beautiful by making Nandi do all the work. But the more work Nandi did the more beautiful she became.

Lindi's mother hated Nandi. One day, she asked her to fetch a whole drum of water and twenty bundles of wood. At night when the girls went to bed, Lindi's mother boiled water in a drum. She tip-toed to the girls' room and picked the girl at the edge of the bed thinking it was Nandi. She threw her into the boiling water.

When Lindi's mother went to wake up Lindi up in the morning, she could not believe her eyes because she saw Nandi. She ran to rescue Lindi but it was too late. The woman had killed her own daughter.

41. What was the name of the girl who was hated by her step mother?  
A. Lindi                          B. Not told  
C. Nandi                          D. Daughter
42. Nandi was \_\_\_\_\_  
A. a proud girl                      B. a beautiful girl  
C. a very rude girl                  D. un ugly girl
43. What was the name of Nandi's step sister?  
A. Lindi                              B. Nandi  
C. Jane                              D. Ugly
44. Why did Lindi's mother make Nandi do all the work?  
A. Lindi's mother loved Nandi  
B. Nandi was a hardworking girl  
C. She thought she would make Lindi's beautiful by Nandi doing all the work  
D. Nandi was bigger and stronger than Lindi
45. What killed Nandi's mother?  
A. Died of old age  
B. Her husband killed her  
C. She was thrown in boiling water  
D. She fell sick
46. Lindi was \_\_\_\_\_  
A. an ugly girl  
B. a very good girl  
C. a beautiful girl  
D. hardworking
47. How many bundles of firewood did Nandi fetch?  
A. 15                                  B. 10  
C. 20                                  D. Not told
48. Who was thrown into the boiling water?  
A. The woman                      B. Lindi  
C. Nandi                              D. Her husband
49. What does the story teach us?  
A. We should not hate others  
B. We should throw others into boiling water  
C. We should be beautiful  
D. We should hate others
50. The **BEST** title for this story is:-  
A. Nandi the beautiful girl  
B. Linda the crazy girl  
C. Nandi's death  
D. The boiling water





# KIRINYAGA COUNTY

## DARASA LA NNE MUHULA WA KWANZA

PENPLUS  
KIRINYAGA

### KISWAHILI

Muda: Saa 1 Dakika 40

hagua majibu sahihi kusaza nafasi zilizoachwa wazi kuanzia 1-15.

Mtu 1 mgonjwa huenda kupata 2 3. Hospitali ni mahali ambapo 4 huenda ili utibiwa. Kuna wagonjwa 5 na kuna 6 ambao hubebwa. Wale 7 ni watoto, wazee na wagonjwa mahututi. Wagonjwa 8 hubebwa kwa 9 na 10 katika 11 au chumba cha 12. Kuna wodi 13 watoto na za watu 14. Wodini 15 vitanda.

- |                  |                 |                  |                 |
|------------------|-----------------|------------------|-----------------|
| . A. atakapokuwa | B. anapokuwa    | C. alipokuwa     | D. anayekuwa    |
| . A. matibabu    | B. matabibu     | C. magonjwa      | D. maradhi      |
| . A. dukani      | B. shuleni      | C. maktabani     | D. hospitalini  |
| . A. watu        | B. wagonjwa     | C. adnasi        | D. viumbe       |
| . A. wajipeleka  | B. wanajipeleka | C. wanaojipeleka | D. wanaopelekwa |
| . A. wale        | B. hao          | C. hawa          | D. hivi         |
| . A. hubebwa     | B. wanaobebwa   | C. wabebwa       | D. wabeba       |
| . A. wazuri      | B. maskini      | C. mahututi      | D. walalahoi    |
| . A. gari        | B. machela      | C. troli         | D. mkokoteni    |
| 0. A. kulalishwa | B. kulazwa      | C. kulalia       | D. kulala       |
| 1. A. wodi       | B. sebule       | C. pembezoni     | D. upasuaji     |
| 2. A. kupasua    | B. kupasuliwa   | C. pasuliwa      | D. upasuaji     |
| 3. A. ya         | B. la           | C. cha           | D. za           |
| 4. A. wakubwa    | B. wadogo       | C. wazima        | D. wazee        |
| 5. A. pana       | B. kuna         | C. mna           | D. ina          |

Kutoka swali la 16 – 30, jibu kila swali kulingana na maagizo

- |   |   |
|---|---|
| <p>6. <b><u>Kamilisha:</u></b> Tunda _____ limeiva ni langu.<br/>A. ambayo B. ambaye C. ambacho D. ambalo</p> <p>7. Mtoto wa mtoto wangu nitamwita<br/>A. shemeji B. kitukuu C. mpwa D. mjukuu</p> <p>8. Akisami 1/2, huitwa:-<br/>A. Tusui B. Thumni C. Ushuri D. Subui</p> <p>9. <b><u>Kamilisha kitendawili hiki:</u></b><br/>Popoo mbili zavuka mto. _____<br/>A. Kamasi B. Kinywa C. Macho D. Pua</p> <p>10. <b><u>Chagua wingi wa:</u></b> Wewe una afya.<br/>A. Wao wana afya B. Nyinyi mna afya<br/>C. Sisi tuna afya D. Wale wana afya</p> <p>11. Juma amesimama <b><u>nyuma ya gari.</u></b><br/>Maneno yaliyopigiwa mstari ni _____<br/>A. kihusishi B. kihisishi<br/>C. kiwakilishi D. kiambishi ngeli</p> <p>12. <b><u>Kamilisha methali:</u></b><br/>Mtaka cha mvunguni sharti _____<br/>A. achukue B. ainame<br/>C. aitane D. asaidiwe</p> <p>13. Yeye ni mfupi kama _____<br/>A. twiga B. nyundo C. sungura D. mlingoti</p> | <p>24. Ni mtoto _____ mbaya zaidi?<br/>A. mgani B. yupi C. nani D. upi</p> <p>25. Mtu akikuamkia, "Hujambo" utamjibu:-<br/>A. Mzuri B. Hatujambo<br/>C. Vizuri D. Sijambo</p> <p>26. Chagua nomino isiyo katika ngeli ya A-WA.<br/>A. Siafu B. Kijana<br/>C. Daktari D. Daftari</p> <p>27. Chagua sentensi iliyo sahihi.<br/>A. Baba amemvua papa<br/>B. Papa amemvua baba<br/>C. Baba amemfua papa<br/>D. Papa amemfua baba</p> <p>28. Kutoa magugu na nyasi ndogondogo shambani ni:-<br/>A. kuvuna B. kupanda<br/>C. kupalilia D. kuchipuka</p> <p>29. Mtoto wa ng'ombe huitwa ndama. Mtoto wa simba huitwa _____<br/>A. shibli B. ndama<br/>C. kifaranga D. kitungule</p> <p>30. Mtu anayeendesha ndege huitwa _____<br/>A. nahodha B. rubani<br/>C. kandawala D. sogora</p> |
|---|---|

**Soma kifungu kifuatacho kisha ujibu maswali ya ufahamu 31 - 40.**

Siku moja sungura alimkuta kinyonga akitembea polepole. Sungura alimwambia kinyonga kwa madharau ampishe apite. Kinyonga hakupendezwa. Akamuuliza sungura, "kwa nini unanidharau hivi?". Aliposikia hivyo sungura alikasirika. Kisha akamuuliza sungura kama angeweza kumshinda mbio. Kinyonga akajibu, "ndiyo". "Baada ya siku tatu wakapanga mashindano. Marafiki walingojea siku hiyo kwa hamu. Sungura na kinyonga wakaenda kuanza mashindano. Walipoanza mbio, kinyonga akapanda mgongoni mwa sungura. Sungura akatimua mbio huku kinyonga akiwa mgongoni. Sungura alipomaliza alidhani ameshinda. Alipotaka kukaa chini, kinyonga akamwambia, "usinikalie, nilifika mbele yako."

31. Ni mnyama gani mwenye mbio sana?  
A. Kinyonga                      B. Sungura  
C. Kobe                              D. Simba
32. Mashindano yalifanywa baada ya siku ngapi?  
A. 6                      B. 9                      C. 3                      D. 4
33. Marafiki walingojea nini kwa hamu?  
A. Siku ya mashindano  
B. Ushindi wa sungura  
C. Ushindi wa kinyonga  
D. Siku ya zawadi.
34. Ni kweli kusema kuwa:-  
A. sungura alibebwa  
B. kinyonga alibebwa  
C. sungura ndiye mshindi  
D. sungura na kinyonga walishinda
35. Kati ya kinyonga na sungura nani mjanja?  
A. kinyonga                      B. sungura  
C. wote                              D. hatukuambiwa
36. Sungura alimkuta kinyonga \_\_\_\_\_  
A. Akikimbia                      B. Akila  
C. Akilala                              D. Akitembeatembea
37. Kumpisha mtu ni \_\_\_\_\_  
A. kumwondokea apite                      B. kumdharau  
C. kumdanganya                      D. kumpuuza
38. **Kamilisha tashbihi:-**  
Mjanja kama \_\_\_\_\_  
A. Kinyonga                      B. Sungura  
C. Simba                              D. Chui
39. Kungojea kitu kwa hamu ni \_\_\_\_\_  
A. Kwa matarajio  
B. Kwa furaha  
C. Kwa madharau  
D. mashindano ya wanyama
40. Hadithi hii inahusu \_\_\_\_\_  
A. Mashindano ya wanyama  
B. Sungura kushinda mbio  
C. Sungura na kinyonga  
D. Mashindano ya mbio

**Soma kifungu hiki kisha ujibu maswali 41 - 50.**

Nyuki wanapenda maua mazuri ili watengeneze asali. Asali ya nyuki ni tamu sana. Wadudu hawa hupenda kuishi kwenye mazingira ambayo huwekwa juu kwenye miti. Nyuki ni wadudu hatari sana. Siku moja walifukuza wanafunzi waliokuwa wakitoka shuleni. Siku hizi watoto hao hawapiti njia hiyo tena kwa kuogopa nyuki. Malkia wa nyuki hutaga mayai mengi sana. Yuko ndege mmoja ambaye hula nyuki na hutaga yai moja jeupe kwenye kiota ambacho huwa kwenye tundu la mti.

41. Nyuki wanapenda miti yenye \_\_\_\_\_  
A. matawi                              B. harufu  
C. maua                                      D. matunda
42. Maua husaidia nyuki kwa \_\_\_\_\_  
A. ehakula                              B. harufu  
C. matunda                              D. kutengeneza asali
43. Asali ya nyuki ni \_\_\_\_\_  
A. chungu                              B. kali  
C. mbaya                                      D. tamu
44. Makao ya nyuki huitwa \_\_\_\_\_  
A. mzinga                                      B. matawi  
C. masega                                      D. kiota
45. Mizinga huwekwa juu ya \_\_\_\_\_  
A. miti    B. nyumba  
C. ua    D. meza
46. Ni nani waliofukuzwa na nyuki?  
A. Watoto wa mitaa  
B. Wanafunzi  
C. Wazazi wa wanafunzi  
D. Wanafunzi watundu
47. Kwa nini waliofukuzwa huogopa kufuata njia hiyo?  
A. Walikatazwa na wazazi wao.  
B. Ili wasishambuliwe na nyuki  
C. Ili wasiwapige nyuki  
D. Ili wasichelewe shuleni
48. Ndege anayependa kula nyuki \_\_\_\_\_  
A. hutaga mayai mengi  
B. hutaga mayai mawili  
C. hutaga mayai manne  
D. hutaga yai moja
49. Makao ya ndege ni \_\_\_\_\_  
A. mzinga                                      B. kizimba  
C. kiota    D. tundu
50. Hadithi hi inatufunza juu ya:-  
A. Nyuki    B. Ndege  
C. Maua    D. Mizinga



# KIRINYAGA COUNTY

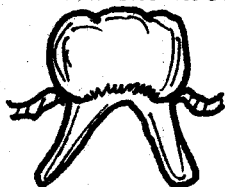
## STD 4 - TERM 1

### SCIENCE

PENPLUS  
KIRINYAGA

*Time 1 Hr 40 Mins*

1. The type of teeth shown below is known as:-



- A. Molar
- B. Canine
- C. Premolar
- D. Incisor

2. The above teeth is used for:-

- A. Biting and cutting.
- B. Chewing and grinding.
- C. Tearing and gripping.
- D. Tearing and chewing.

3. Deciduous teeth start shedding off at the age of:-

- A. six months
- B. nine months
- C. 12 years
- D. six years.

4. Which of the following is **NOT** a sign of gum disease?

- A. Bad breath
- B. Red and swollen gums
- C. Shedding of teeth
- D. Bleeding gums

5. What is the full meaning of AIDS?

- A. Acquired Immune Deficiency Syndrome
- B. Acquired Immunodeficiency Syndrome
- C. Acquired deficiency syndrome
- D. Acquired Deficiency Immune Syndrome

6. Which of the following is a weed?

- A. Sodom apple
- B. Passion fruit
- C. Pumpkin
- D. Groundnut

7. Below are sources of water. Which one is **NOT**?

- A. Rivers
- B. Taps
- C. Rainfall
- D. Dams


8. Which one of the following is a means of transporting water?

- A. Tank
- B. Dam
- C. Pipe
- D. River

9. Hot ashes are **MAINLY** used to clean pit latrines because they:-

- A. make it look beautiful
- B. attract flies
- C. spread germs
- D. kill germs and keep off bad smell

10. The clouds shown below have a flat bottom. They are **LIKELY** to be:-



- A. Nimbus
- B. Cumulus
- C. Stratus
- D. Cirrus

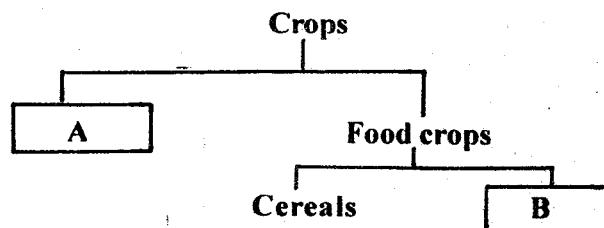
11. Which one of the following is **NOT** a sense organ?

- A. Hand
- B. Nose
- C. Tongue
- D. Skin

12. Which weed has a stem that grows along the ground?

- A. Oxalis
- B. Sodom apple
- C. Datura
- D. Wandering jew.

13. In the diagram below, letter A and B represents?



- A. Tubers and legumes
- B. Cereals and fruits
- C. Cash crop and legumes
- D. Coffee and food crops

14. Which of the following crops is an oil crop?

- A. Palm tree
- B. Coconut
- C. Beans
- D. Peas

15. Weeds should be \_\_\_\_\_

- A. Planted in the field
- B. Mixed with other crops
- C. Controlled
- D. Encouraged to grow in the field

16. Which of the following cannot be used to group clouds?

- A. size
- B. Appearance
- C. Height
- D. Shape

17. Which of the following is **NOT** an oil crop?

- A. Sunflower
- B. Coconut
- C. Groundnut
- D. Sisal

18. What causes AIDS?

- A. Coughing
- B. Germs
- C. Virus
- D. Wounds

19. Which of the following is a bad effect of moving air?

- A. Felling trees
- B. Winnowing
- C. Flying kites
- D. Sailing boats.

20. The word syndrome in AIDS means:-

- A. Got from
- B. Ability to fight diseases
- C. Lack of
- D. Group of signs

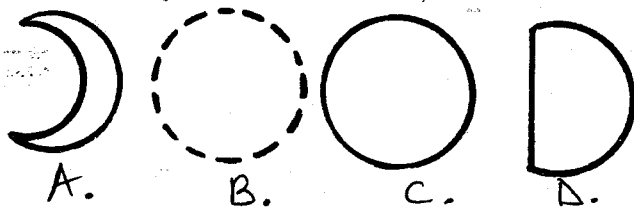
21. Below are examples of special sounds **EXCEPT**:-

- A. Ringing of a bell
- B. Hooting
- C. Screaming
- D. Laughing

22. Which of the following animals is both useful and harmful?

- A. Wasp
- B. Bee
- C. Dog
- D. Mosquito

23. Which of the following phases of the moon is a full moon?



24. Which of the following is a characteristic of all animals?  
 A. Lay eggs  
 B. Live in water  
 C. Grow  
 D. Change colour of the surrounding
25. Which is a good behaviour when having a meal?  
 A. Cough over the food  
 B. Talk with the food in the mouth  
 C. Chew food slowly  
 D. Stretch hands over the food
26. A thread that has wax and is used to clean in between the teeth is called:-  
 A. Dental floss B. Tooth paste C. Plague D. Brush
27. The tooth drawn below is a:-




- A. Molar  
 B. Premolar  
 C. Canine  
 D. Incisor

28. Which of the following is used to carry heavy loads?  
 A. Crowbar B. Spade C. Hammer D. Handcart
29. Which tooth is **CORRECTLY** matched with its function?  
 A. Incisor - cutting B. Canine - biting  
 C. Molar - tearing D. Premolar - gripping
30. Which of the following is **NOT** a way of classifying food crops?  
 A. Cereals B. Beverages  
 C. Tuber crops D. Fruits and vegetables.
31. Which activity shows caring of plants?  
 A. Weeding them B. Pulling them out  
 C. Uprooting them D. Cutting them out
32. We should take care of our teeth by:-  
 A. Using teeth to break things  
 B. Eating sugary food  
 C. Brushing them after every meal  
 D. Using tooth pick to remove food remains
33. The **BEST** method of controlling weeds in a shamba is:-  
 A. Slashing B. Digging them out  
 C. Uprooting D. Mulching
34. Which clouds bring rain?  
 A. Cumulus B. Nimbus C. Cirrus D. Stratus
35. A child who is 12 years is likely to have \_\_\_ teeth.  
 A. 32 B. 24 C. 20 D. 28

Use the below weather chart to answer questions 36 – 38.

Day	Morning	Afternoon
Monday		
Tuesday		
Wednesday		
Thursday		

36. Which two days did children use umbrellas?  
 A. Monday and Thursday  
 B. Thursday and Wednesday  
 C. Tuesday and Monday  
 D. Tuesday and Wednesday
37. Which day could children play outside and fly kites?  
 A. Thursday B. Wednesday  
 C. Monday D. Tuesday
38. Which was the **BEST** day to wash clothes?  
 A. Monday B. Thursday  
 C. Tuesday D. Wednesday
39. The different shapes of the moon at different times is called:-  
 A. Shapes B. Phases C. faces D. Colours
40. Which tooth problem is shown below?  
  
 A. Cavities  
 B. Tooth decay  
 C. Bleeding gums  
 D. Bad smell
41. Plants that grow where they are **NOT** wanted are called:-  
 A. Maize B. Weeds C. Fibre D. Datura
42. A weed with a bad smell is **LIKELY** to be:-  
 A. Mexican marigold B. Oxalis  
 C. Pigweed D. Black jack
43. Shedding of teeth starts at the age of:-  
 A. Six months B. Nine years  
 C. Six years D. Nine months
44. The clouds which are very high in the sky and look like feathers are called:-  
 A. Cumulus clouds B. Nimbus C. Cirrus D. Clouds
45. Which of the following is **NOT** a tuber crop?  
 A. Beans B. Carrots C. Cassava D. Yams
46. What are herbicides?  
 A. Drugs B. Chemicals for killing weeds  
 C. Herbs D. Insecticides
47. Which of these plants store food in the stem?  
 A. Beetroot B. Maize C. Sugarcane D. Potato
48. Which of the following foods is good for the teeth?  
 A. Biscuits B. Cakes C. Bread D. Milk
49. People plant crops in the \_\_\_ season.  
 A. Rainy B. Dry C. Hot D. Cold
50. The white part of the tooth is known as:-  
 A. Root B. Enamel C. Gum D. Tongue

# KIRINYAGA COUNTY

## STD 4 - TERM 1

### MARKING SCHEME

PENPLUS  
KIRINYAGA

ENGLISH	MATHEMATICS	KISWAHILI	SCIENCE	S/STUDIES/C.R.E
1. C 31. D	1. B 31. A	1. B 31. B	1. C 31. A	1. A 31. B 61. C
2. A 32. D	2. C 32. C	2. A 32. C	2. B 32. C	2. A 32. D 62. B
3. D 33. D	3. A 33. A	3. D 33. A	3. D 33. B	3. C 33. B 63. A
4. B 34. D	4. C 34. A	4. B 34. B	4. C 34. B	4. B 34. C 64. C
5. D 35. A	5. D 35. C	5. C 35. A	5. B 35. D	5. D 35. A 65. B
6. C 36. B	6. B 36. D	6. A 36. D	6. A 36. C	6. C 36. C 66. D
7. A 37. C	7. B 37. C	7. B 37. A	7. B 37. A	7. A 37. B 67. A
8. B 38. C	8. A 38. A	8. C 38. B	8. C 38. B	8. A 38. A 68. C
9. D 39. A	9. D 39. D	9. B 39. A	9. D 39. B	9. A 39. D 69. D
10. B 40. D	10. B 40. D	10. B 40. C	10. B 40. A	10. B 40. C 70. B
11. C 41. C	11. A 41. B	11. A 41. C	11. A 41. B	11. D 41. C 71. A
12. A 42. B	12. A 42. B	12. D 42. D	12. D 42. A	12. D 42. A 72. D
13. D 43. A	13. C 43. C	13. D 43. D	13. C 43. C	13. B 43. B 73. A
14. B 44. C	14. D 44. C	14. C 44. A	14. B 44. A	14. A 44. C 74. C
15. C 45. D	15. C 45. D	15. C 45. A	15. C 45. A	15. A 45. C 75. A
16. C 46. A	16. B 46. D	16. D 46. B	16. A 46. B	16. A 46. C 76. C
17. A 47. C	17. B 47. D	17. D 47. B	17. D 47. C	17. B 47. B 77. D
18. B 48. B	18. B 48. A	18. D 48. D	18. C 48. D	18. A 48. A 78. A
19. D 49. A	19. D 49. B	19. C 49. C	19. A 49. A	19. B 49. C 79. C
20. A 50. A	20. C 50. C	20. B 50. A	20. D 50. B	20. D 50. B 80. D
21. C	21. A	21. A	21. D	21. B 51. D 81. D
22. D	22. C	22. B	22. B	22. B 52. D 82. B
23. B	23. B	23. B	23. C	23. C 53. A 83. C
24. A	24. D	24. B	24. C	24. C 54. B 84. A
25. C	25. C	25. D	25. C	25. B 55. B 85. D
26. D	26. D	26. D	26. A	26. A 56. C 86. D
27. A	27. C	27. A	27. C	27. C 57. D 87. C
28. B	28. C	28. C	28. D	28. B 58. C 88. C
29. C	29. A	29. A	29. A	29. B 59. A 89. B
30. B	30. B	30. B	30. B	30. A 60. C 90. C

#### COMPOSITION / INSHA MARKING SCHEME

##### MARKING CRITERION

1. The composition will be assessed according to the following guidelines.
2. The maximum mark will be 40 and the minimum mark 01.

Does the script show that the candidate can communicate accurately, fluently and imaginatively in English

##### **Accuracy (16 marks)**

- |  |  |
|--|--|
| (a) Correct tense and agreement of verbs | (b) Accurate use of vocabulary (4 marks) |
| (c) Correct spelling (4 marks)           | (d) Correct punctuation (4 marks)        |

##### **Fluency (16 marks)**

- |   |  |
|---|--|
| (a) Correct flow of the story (4 marks) | (b) Well sequenced sentence and connected paragraphs (4 marks) |
| (c) Correct spelling (4 marks)          | (d) Ideas developed in logic sequence (4 marks)                |

##### **Imagination (8 marks)**

- |  |  |
|--|--|
| (a) Unusual but appropriate use of words (4 marks) |  |
| (b) Variety of structure (4 marks)                 |  |

**NB: Please teachers are requested to scrutinize this marking scheme before use, it is worth**