

**GATUNDU DISTRICT EXAMINATION**  
**STANDARD FOUR – TERM III 2016**  
**MATHEMATICS**

Time: 2 hours

1. Write 90403 in words.  
 A. Nine thousand four hundred and three  
 B. Ninety thousand four hundred and three.  
 C. Ninety thousand and forty three.  
 D. Nine hundred and four thousand and three.
2. What is the total value of digit 7 in 27398?  
 A. seven                      B. 700  
 C. 7000                      D. 70000
3. Work out:  
 $46987 + 728 + 14398$ .  
 A. 62113                      B. 52113  
 C. 62013                      D. 52013
4. Work out:  $21 \overline{)469}$   
 A. 22 rem 9                      B. 21 Rem 7  
 C. 22 Rem 21                      D. 22 Rem 7
5. Which of the following number is divisible by both 5 and 10?  
 A. 240                      B. 575  
 C. 682                      D. 893
6. What is the place value of digit 9 in 3.791?  
 A. ones  
 B. tens  
 C. hundredth  
 D. tenth
7. Work – out:
 

Weeks	Days
3	6
+ 2	5

 A. 5 weeks 11 days  
 B. 6 weeks 4 days  
 C. 5 weeks 4 days  
 D. 6 weeks 1 day
8. Write 0.49 as a fraction.  
 A.  $\frac{49}{10}$                       B.  $\frac{4}{100}$   
 C.  $\frac{100}{49}$                       D.  $\frac{49}{100}$
9. Multiply  $13 \times 90$ .  
 A. 130                      B. 933  
 C. 1170                      D. 103
10. What is fifth of 20?  
 A. 100                      B. 5  
 C. 4                      D. 15



PRINTED BY HIGHFLYER SERIES Tel: 0723 499860

**Funded By: C.D.F. Gatundu South Constituency,**  
**Patron Hon. Moses Kuria, MP Gatundu South.**

11. What is the next number in the pattern below?

0, 5, 10, 15, 20 \_\_\_\_\_

- A. 25                      B. 30  
C. 24                      D. 29

12. Subtract 246 from 734.

- A. 588                      B. 478  
C. 582                      D. 488

13. How many  $\frac{1}{2}$  litres containers will fill a 5 litre container?

- A. 7                          B. 20  
C. 10                        D. 3

14. Which of the following fractions is equal to a whole?

- A.  $\frac{3}{4}$                       B.  $\frac{4}{4}$                       C.  $\frac{2}{3}$                       D.  $\frac{1}{3}$

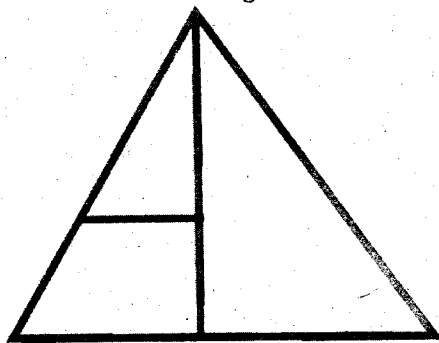
15. What is the number just before 710?

- A. 701                      B. 711  
C. 610                      D. 709

16. How many centimetres are there in 14 metres?

- A. 140                      B. 14000  
C. 14                        D. 1400

17. How many triangles can be counted in this figure?



- A. 3                          B. 5  
C. 4                          D. 2

18. Work out  $0.23 + 1.4 + 7$

- A. 2.33                      B. 8.63  
C. 7.63                      D. 1.70

19. Which of the following numbers is odd number?

- A. 764                      B. 897  
C. 960                      D. 658

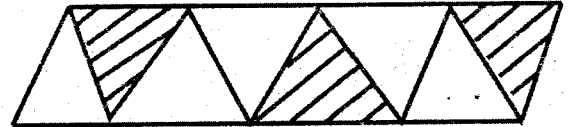
20. How many days are there in the last three months of an year?

- A. 90                        B. 91  
C. 30                        D. 92

21. What is the cost of 20 books if one book costs sh.80?

- A. 1600                      B. 100  
C. 60                        D. 1680

22. What fraction is unshaded?

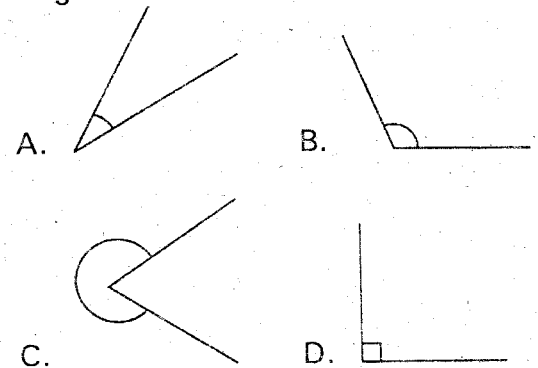


- A.  $\frac{5}{8}$                       B.  $\frac{3}{8}$   
C.  $\frac{3}{5}$                       D.  $\frac{8}{8}$

23. Subtract 9.4 from 10.

- A. 0.6                      B. 19.4  
C. 1.6                      D. 1.4

24. Which of the following is a Right Angle?



25. How many months are there in 6 years?

- A. 62                        B. 72  
C. 18                        D. 60

26. Convert 4 hours 25 minutes into minutes.

- A. 240                      B. 425  
C. 265                      D. 21

27. Work out  $4 \overline{) \text{sh.}80 \text{ 40cts}}$

- A. sh.20 10 cts  
B. sh.2 10cts  
C. sh.20 40cts  
D. sh.20 1cts

28. Kadogo bought 7kg meat, Abdi bought 12kg and Jane bought 6kg. How many kilograms did they buy altogether?

- A. 19kg                      B. 13kg  
C. 25kg                      D. 15kg

29. Find the perimeters of a rectangle with length 25cm and width 15cm.

- A. 40cm                      B. 30cm  
C. 55cm                      D. 80cm

30. What is the place value of digit 8 in 2846?

- A. Hundreds                      B. Hundredth  
C. Tens                      D. Ones

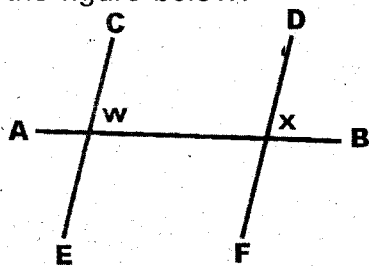
31. Convert 5m 75cm into centimeters.

- A. 5.75                      B. 5075  
C. 575                      D. 57.5

32. Work out:  $\frac{3}{8} \times 16$

- A. 2    B. 48    C. 5    D. 6

33. Name the points of intersection in the figure below.



- A. C, D                      B. E, F  
C. W, X                      D. A, B

34. Work out the following.

$$\begin{array}{r} \text{m} \qquad \text{cm} \\ 1 \qquad 75 \\ \underline{X} \qquad 4 \\ \hline \end{array}$$

- A. 4m 300cm  
B. 6m 80cm  
C. 7m  
D. 7m 30cm

35. Write down zero point five three in numbers.

- A. 0.35                      B. 0.53  
C. 053                      D. 05.3

36. Write seven minutes to ten o'clock in short form.

- A. 9.53                      B. 10.53  
C. 7.10                      D. 10.07

37. Work out:

$$\begin{array}{r} \text{Sh.} \quad \text{Cts} \\ 20 \quad 45 \\ \underline{X} \quad 6 \\ \hline \end{array}$$

- A. sh.120 70cts  
B. sh.120 270cts  
C. sh.122 270cts  
D. sh.122 70cts

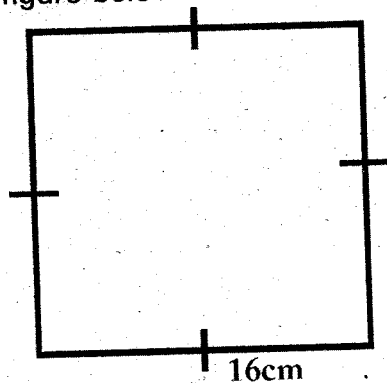
38. Write 746cm into metres and centimeters.

- A. 746m 0cm  
B. 74m 60cm  
C. 7m 460cm  
D. 7m 46cm

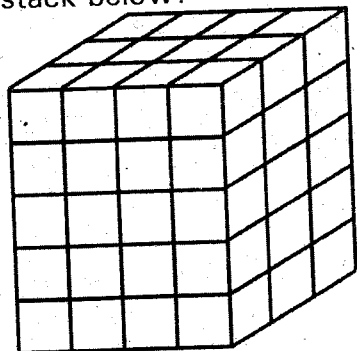
39. Work out  $\frac{6}{9} - \frac{2}{9}$

- A.  $\frac{4}{9}$                       B.  $\frac{8}{9}$   
C.  $\frac{3}{9}$                       D.  $\frac{9}{9}$

40. Calculate the perimeter of the figure below.




- A. 16cm                      B. 32cm  
C. 64cm                      D. 4cm
41. Write  $\frac{21}{100}$  as a decimal.  
A. 2.1                      B. 0.21  
C. 0.021                      D. 0.0021
42. A tank is  $\frac{4}{7}$  full of water. If  $\frac{1}{7}$  is drawn. What fraction of water will remain?  
A.  $\frac{5}{7}$                       B.  $\frac{7}{7}$   
C.  $\frac{3}{7}$                       D.  $\frac{5}{14}$
43. How many small cubes make the stack below?



- A. 60                      B. 47  
C. 48                      D. 58
44. Find the sum of 56192 and 7348.  
A. 53540                      B. 63540  
C. 63530                      D. 63440

45. How many quarter litres are there in 3 litres?  
A. 6 litres                      B. 9 litres  
C. 3 litres                      D. 12 litres
46. How many hours are there in 7 days?  
A. 84                      B. 168  
C. 210                      D. 148
47. A school has  $x$  boys and  $t$  girls. How many pupils are there in the school?  
A.  $x + t$                       B.  $x - t$   
C.  $xt$                       D.  $\frac{x}{t}$
48. How many square units are in the figure below?



- A. 85                      B. 58  
C. 40                      D. 63
49. The table below shows the number of vehicles passing through Kenyatta Road.

Vehicles	Tally Marks
Cars	
Buses	
Taxis	
Lorries	

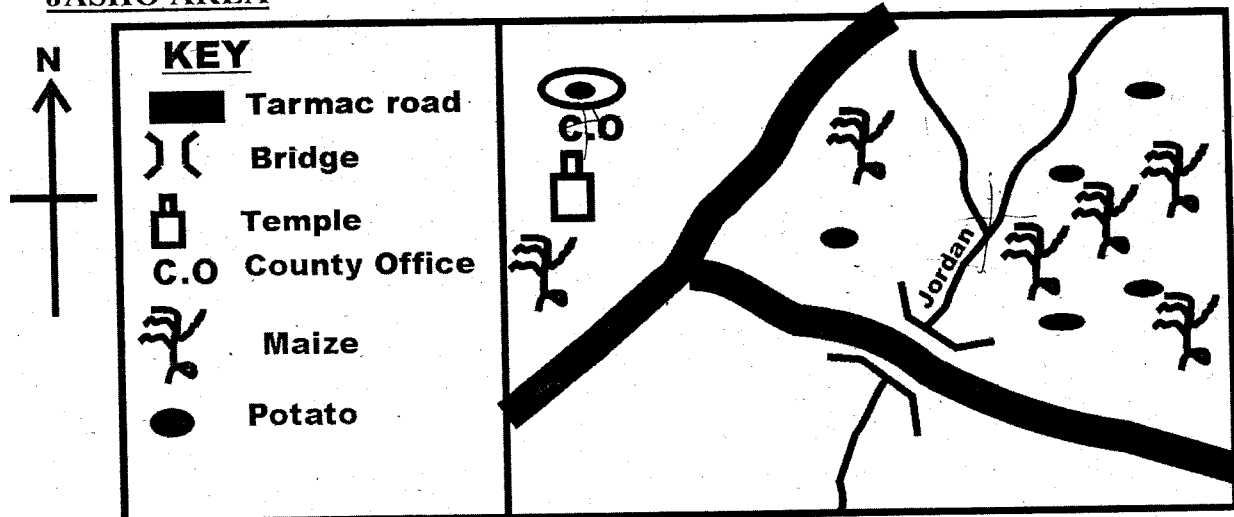
- How many cars and buses passed through the road?  
A. 7                      B. 3  
C. 72                      D. 10
50. How many more taxis than cars passed through the road?  
A. 10                      B. 3  
C. 7                      D. 17

# GATUNDU DISTRICT EXAMINATION STANDARD FOUR – END TERM III 2016

## SOCIAL STUDIES & C.R.E

Time: 2 hours 15 minutes

### JASHO AREA



- Study the map of Jasho Area and answer questions 1 - 7
- Which kind of farming is practiced by people of Jasho area \_\_\_\_\_  
A. Keeping of animals only  
B. Mixed farming  
C. None  
D. Crop farming
  - The people of Jasho area belong to \_\_\_\_\_ religion.  
A. Christians                      B. Islam  
C. Hindu                              D. Pagans
  - The common means of transport in Jasho area is \_\_\_\_\_  
A. air  
B. pipeline  
C. road  
D. railway
  - The flow of river Jordan is from \_\_\_\_\_  
A. East to West  
B. West to East  
C. North to South  
D. South to North



PRINTED BY HIGHFLYER SERIES Tel: 0723 499860.

**Funded By: C.D.F. Gatundu South Constituency,  
Patron Hon. Moses Kuria, Mp Gatundu South.**

5. Jasho area is administered by \_\_\_\_\_

- A. D.O
- B. Governor
- C. P.C
- D. Police

6. What is not shown in the map?

- A. Lake
- B. Temple
- C. Maize
- D. Potatoes

7. What is the direction of the Temple from the county office?

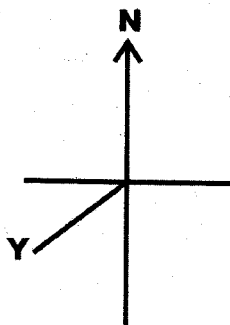
- A. North
- B. East
- C. West
- D. South

8. Which one of the following is a traditional means of communication?

- A. mobile
- B. Smoke
- C. Radio
- D. Facefax

9. The first president of Kenya was \_\_\_\_\_

- A. Moi
- B. Kibaki
- C. Kenyatta
- D. Raila



10. The diagram marked by Y below is \_\_\_\_\_

- A. South
- B. South West
- C. West
- D. North West

11. The traditional Kikuyu prophet was called \_\_\_\_\_

- A. Waiyaki
- B. Kimathi
- C. Wangu wa Makeri
- D. Mugo wa Kabiru

12. The highest mountain in Kenya is \_\_\_\_\_

- A. Mt. Kenya
- B. Mt. Tumutumu
- C. Mt. Kilimanjaro
- D. Mt. Kilimambogo

13. Most people in Kenya are \_\_\_\_\_

- A. drivers
- B. farmers
- C. teachers
- D. managers

14. The head of the family is \_\_\_\_\_

- A. mother
- B. grandpather
- C. father
- D. child

15. Buying and selling of goods and services is called \_\_\_\_\_

- A. education
- B. tourism
- C. trade
- D. hawking

16. The deputy president of Kenya is \_\_\_\_\_

- A. Uhuru
- B. Moi
- C. Musalia
- D. Ruto

17. The <sup>Smallest</sup> ~~largest~~ county in Kenya is \_\_\_\_\_

- A. Nairobi
- B. Mombasa
- C. Turkana
- D. Marsait

18. The Maasai people in Kenya are \_\_\_\_\_

- A. traders
- B. fishermen
- C. pastoralists
- D. farmers

19. Rivers that flow throughout the year are said to be \_\_\_\_\_

- A. seasonal
- B. good
- C. permanent
- D. lakes

20. The most dangerous threat to wild animals is \_\_\_\_\_

- A. Insecurity
- B. Water
- C. Poaching
- D. Lack of food

21. \_\_\_\_\_ is not an element of a map.

- A. scale
- B. key
- C. frame
- D. shape

22. Traditional iron workers were known as \_\_\_\_\_

- A. potters
- B. blacksmiths
- C. porters
- D. traders

23. The most expensive means of transport is \_\_\_\_\_

- A. road
- B. air
- C. frame
- D. pipeline

24. The instrument used to measure rainfall is \_\_\_\_\_

- A. Compass direction
- B. Thermometer
- C. Barometer
- D. Rain gauge

25. Which of the following is a major language group in Kiambu county?

- A. Nilotes
- B. Bantus
- C. Cushites
- D. Semites

26. The people who keep law and order in our country are \_\_\_\_\_

- A. judges
- B. teachers
- C. policemen
- D. parents

27. Moving air is known as \_\_\_\_\_

- A. rain
- B. clouds
- C. wind
- D. vapour

28. \_\_\_\_\_ is the height above sea level.

- A. Altitude
- B. Relief
- C. Temperature
- D. Latitude

29. The main cash crop in our county is \_\_\_\_\_

- A. cotton
- B. pyrethrum
- C. sisal
- D. tea

30. People who treat using herbs are called \_\_\_\_\_

- A. Witch doctors
- B. Seers
- C. Herbalists
- D. Prophet

31. On 20<sup>th</sup> October we celebrate \_\_\_\_\_ holiday.

- A. Jamuhuri day
- B. Labour day
- C. Mashujaa day
- D. Christmas day

32. The main tourist attraction in country is \_\_\_\_\_

- A. beaches
- B. wildlife
- C. churches
- D. hotels

33. The next census in Kenya will be held in the year \_\_\_\_\_  
 A. 1919                      B. 1913  
 C. 2001                      D. 2019
34. Fishing in our county is mostly done in \_\_\_\_\_  
 A. fishing ponds              B. lakes  
 C. oceans                      D. basins
35. Mountains, rivers and lakes are example of \_\_\_\_\_  
 A. drainage  
 B. physical features  
 C. valleys  
 D. water bodies
36. The main cause of road accidents in Kenya is \_\_\_\_\_  
 A. Careless driving  
 B. Poor roads  
 C. Good roads  
 D. Observation
37. Areas with many people are said to be \_\_\_\_\_ populated.  
 A. Sparsely                      B. packed  
 C. heavy                      D. densely
38. Which of the following is a happy ceremony?  
 A. Marriage fights  
 B. Wedding  
 C. Funeral  
 D. Initiation
39. \_\_\_\_\_ are freedoms and privileges that everyone is entitled to.  
 A. Human rights  
 B. Democracy  
 C. Powers  
 D. Morals

40. We have \_\_\_\_\_ sub - counties in Kiambu county.  
 A. 10                              B. 38  
 C. 6                              D. 47
41. A person who love his country is said to be a \_\_\_\_\_  
 A. loyal                      B. soldier  
 C. patriot                      D. citizen
42. There are \_\_\_\_\_ lines in every stanza of our national flag.  
 A. five                      B. four  
 C. six                      D. three
43. The colour on our flag that symbolizes our colour is at which part of the flag?  
 A. upper  
 B. centre  
 C. back  
 D. lower
44. The head of our county is the \_\_\_\_\_  
 A. Governor  
 B. Minister  
 C. president  
 D. MCA
45. The road sign below indicates



- A. Round about  
 B. Bumbs ahead  
 C. Danger ahead  
 D. Jam left





**C.R.E**

61. In the time of Noah, God caused rain fall and it continued causing \_\_\_\_\_  
A. Wind  
B. floods  
C. Earthquake  
D. Fire
62. The giant soldier killed by David was called \_\_\_\_\_  
A. Gideon                      B. Samson  
C. Goliath                      D. Solomon
63. Who agreed to offer his son as a sacrifice to God?  
A. Abraham  
B. Jacob  
C. Moses  
D. Esau
64. God called \_\_\_\_\_ to lead his people from Egypt  
A. Abraham  
B. Joseph  
C. Noah  
D. Moses
65. Who among the following was not a forefather of Israel  
A. Pope  
B. Isaac  
C. Jacob  
D. Abraham
66. God created human beings on the \_\_\_\_\_ day.  
A. 5<sup>th</sup> day  
B. 4<sup>th</sup> day  
C. 6<sup>th</sup> day  
D. 7<sup>th</sup> day
67. \_\_\_\_\_ separated human beings from God.  
A. Prayer                      B. sin  
C. peace                      D. love
68. Who among the following prophets prophesied that a Messiah would be born.  
A. Jeremiah                      B. Ezekiel  
C. Hosea                      D. Isaiah
69. Jesus was born in a town called  
A. Nazareth                      B. Bethlehem  
C. Galilee                      D. Egypt
70. While Mary was in Nazareth \_\_\_\_\_ announced to her that she would give birth to the savior.  
A. Angel Michael  
B. Angel Cherubim  
C. Angel Gabriel  
D. Angel Lucifer
71. When Jesus was born, he was wrapped in strips of cloth and laid in a \_\_\_\_\_  
A. Bed                      B. Manger  
C. Chair                      D. Car
72. We celebrate the birth of Jesus Christ by doing the following except  
A. Taking alcohol  
B. Singing Christmas songs  
C. Reading the Bible  
D. Giving gifts to our friends
73. Lazarus had been buried in a tomb for \_\_\_\_\_ days before being raised from the dead by Jesus.  
A. 1 day                      B. 7 days  
C. 3 days                      D. 4 days

74. In the miraculous catch for fish, we learn that Jesus has power over \_\_\_\_\_  
 A. People  
 B. weather  
 C. death  
 D. nature
75. Jesus Christ Commanded his disciples to do the following except \_\_\_\_\_  
 A. Punish sinners  
 B. Cast out demons  
 C. Spread the gospel  
 D. Heal the sick
76. Which one of the following is not a quality of a good leader?  
 A. Gentle and peaceful  
 B. Not greedy  
 C. Being proud  
 D. Being orderly
77. Who among the following people baptized Jesus?  
 A. Emperor Augustus  
 B. John the Baptist  
 C. Prophet Elijah  
 D. Angel Gabriel
78. The followers of Jesus were first called Christians at \_\_\_\_\_  
 A. Nazareth  
 B. Jerusalem  
 C. Bethany  
 D. Antioch
79. Jesus found people buying and selling inside the temple. He \_\_\_\_\_  
 A. Was happy  
 B. Joined them  
 C. Was annoyed  
 D. Ignore them
80. Which one of the following places is not sacred?  
 A. Cinema hall    B. Church  
 C. Temple         D. chapel
81. The Nandi community call their God \_\_\_\_\_  
 A. Nyasaye         B. Were  
 C. Enkai            D. Asis
82. People in traditional African society worshipped God in the following occasions except \_\_\_\_\_  
 A. When performing witchcraft  
 B. During initiation ceremonies  
 C. After the birth of a baby  
 D. After a good harvest
83. In both African traditional society and Christianity people \_\_\_\_\_  
 A. Read the Bible  
 B. Worshipped God in churches  
 C. Worshipped God  
 D. Worshipped God in shrines
84. Sharing work is important because it makes work \_\_\_\_\_  
 A. annoying         B. tiring  
 C. difficult         D. easy
85. Which one of the following is not a way of showing peace at home?  
 A. Being friendly  
 B. Forgiving others  
 C. Discouraging others  
 D. Being obedient
86. As Christians we should aim at living in \_\_\_\_\_ with one another.  
 A. Hatred            B. peace  
 C. Anger             D. Bitterness

87. Which one of the following is not an agency that works for peace?

- A. United Nations
- B. The police force
- C. African Union
- D. The war nations

88. When we do not forgive others their wrongs they \_\_\_\_\_

- A. Suffer
- B. laugh
- C. ignore
- D. enjoy

89. Tolerance helps us to do the following except \_\_\_\_\_

- A. To keep our friends
- B. Do the right thing
- C. Ignoring other people's wishes
- D. Be kind to others

90. The following are ways of contracting HIV and AIDs except

- A. Sharing food
- B. Sharing sharp objects
- C. Through sex
- D. Blood transfusion.

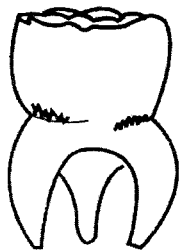
# GATUNDU DISTRICT EXAMINATION

## STANDARD FOUR – TERM III 2016

### SCIENCE

Time: 1 hour 40 minutes

1. The following teeth is used for \_\_\_\_\_



- A. cutting  
B. grinding  
C. biting  
D. tearing
2. Gum diseases cannot be prevented by \_\_\_\_\_

- A. Eating vegetable and fruits  
B. Cleaning teeth after meals  
C. Visiting a dentist  
D. Eating sugary food.

3. Which of the following is NOT a problem related to teeth?

- A. Measles  
B. Bad breathe  
C. Cavities  
D. Tooth decay

4. We wash our hands before \_\_\_\_\_

- A. Visiting toilet  
B. Doing work  
C. Eating food  
D. Greeting or shaking hand

5. The total number of canines in the lower jaw are \_\_\_\_\_

- A. 2  
B. 4  
C. 6  
D. 8

6. One of the following is not a reason why we maintain tool. Which one is it?

- A. Sharpening them.  
B. Make them last long  
C. Prevent rusting  
D. Prevent them from being stolen

7. Use the weather chart below to answer the questions that follow.

DAY	MORNING	AFTERNOON
Monday		
Tuesday		
Wednesday		
Thursday		
Friday		

Which day was calm in the morning and cloudy in the afternoon?

- A. Tuesday  
B. Wednesday  
C. Thursday  
D. Monday



PRINTED BY HIGHFLYER SERIES Tel: 0723 499860

Funded By: C.D.F. Gatundu South Constituency,  
Patron Hon. Moses Kuria, MP Gatundu South.

8. Which was the best day to wash clothes?

- A. Thursday                      B. Wednesday  
C. Friday                          D. Monday

9. Which of the following is a special sound?

- A. Ringing bell  
B. A moving vehicle  
C. Hitting a drum  
D. Clapping


10. When eating food, it is important to observe good \_\_\_\_\_

- A. Food manners  
B. Eating manners  
C. Table manners  
D. House manners

11. The best way to transporting water for a long distance is \_\_\_\_\_

- A. Using tankers  
B. Using handcarts  
C. Using bicycles  
D. Using pipes

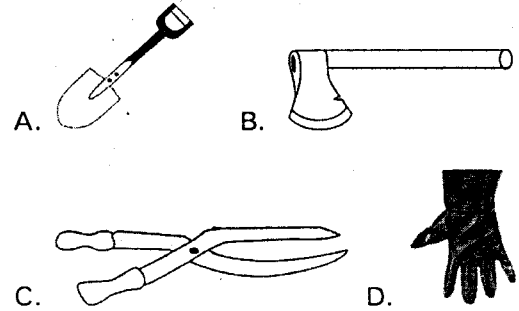
12. The following are ways of storing water. Which is not?



13. Which crops among the following cash crops is used in beer making industry?

- A. Castor see  
B. Barley  
C. Green grams  
D. Coffee

14. Which of these does not make work easier?



15. Which one of the following is not a tuber?

- A. Potatoes                      B. Groundnuts  
C. Sweet potatoes              D. Arrowroots

16. Which plant below grows well in the dry areas?

- A. Banana                      B. Kale  
C. Cactus                        D. Pineapples

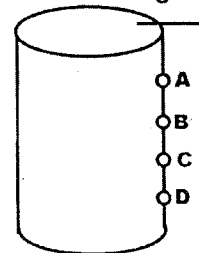
17. The place where an animal lives is called \_\_\_\_\_

- A. Shed                          B. habitat  
C. cage                          D. forest

18. The best soil used for building houses is \_\_\_\_\_

- A. loam                          B. sand  
C. clay                          D. organic matter

Use the diagram to answer question 19.



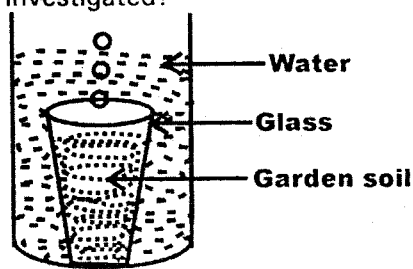
19. The water pressure is highest at point \_\_\_\_\_

- A. D                              B. B  
C. A                              D. C

20. Which of the following statements is true about light?

- A. A candle is a natural source of light.  
B. The sun is the major source of light.  
C. Light does not help use see clearly  
D. The moon has its own light.

21. Children in class four set an experiment as shown below. What was being investigated?



- A. Humus in soil
- B. Air in soil
- C. Animals in the soil
- D. Organic matter

22. Which of the objects does not sink in water?

- A. Stone
- B. Marble
- C. Plastic
- D. Pin

23. Our shadows are shortest at what time?

- A. Evening
- B. Midday
- C. morning
- D. sunset

24. What is the colour of a clear sky?

- A. Dark grey
- B. White
- C. Grey
- D. Blue

25. Which one of the following type of food does not belong to the same group as others?

- A. Rice
- B. Mutton
- C. Eggs
- D. Chicken

26. Which one is Not a characteristic of all animal?

- A. All animals remove waste.
- B. All animals feed
- C. All animals move
- D. All animals lay eggs

27. A \_\_\_\_\_ has strong hind legs for hopping.

- A. locust
- B. bee
- C. mosquito
- D. birds

28. Some animals provide us with meat and others do not. Bacon and pork are some types of meat from which animal?

- A. cattle
- B. pigs
- C. hens
- D. sheep

29. \_\_\_\_\_ soil make firm and smooth models.

- A. sandy
- B. loam
- C. clay
- D. loam and sandy

30. To demonstrate pressure in liquids you need all the following EXCEPT \_\_\_\_\_

- A. plasticine
- B. nail
- C. tin
- D. collecting jar

31. The tool shown below is used for \_\_\_\_\_




- A. Shearing
- B. Cutting timber
- C. Weeding
- D. Driving nails

32. Chemicals used by farmers to control weeds are called \_\_\_\_\_

- A. herbicides
- B. pesticides
- C. acaricide
- D. insecticide


33. Which of the following tools has no cutting edge?




A



B



C



D

34. A shoe polish tin top flats on water but a crushed tin top sinks. This is because

- A. Unfolded tin top is heavier.
- B. The shape affects sinking and floating
- C. The tin top are made of metal?
- D. A folded tin top absorb water.

35. The Acquired Immune Deficiency Syndrome is caused by \_\_\_\_\_
- Unprotected sex
  - Blood transfusion
  - Human Immuno - deficiency virus
  - Virus

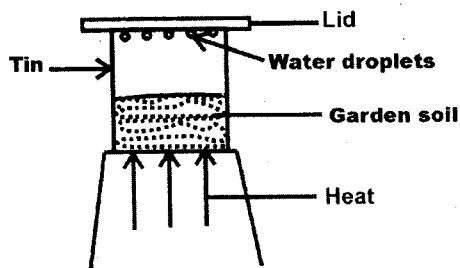
36. The ability of the body to fight against diseases is called \_\_\_\_\_
- Deficiency
  - Immunity
  - Syndrome
  - Acquired

37. The cavities are caused by \_\_\_\_\_
- Sweets
  - Plaque
  - Dental floss
  - Acids

38. Teeth can be kept healthy by eating all the following except \_\_\_\_\_
- Carrots
  - Apples
  - Sugar cane
  - Sweets

39. In which of the following fluids is HIV not likely to be found?
- semen
  - urine
  - blood
  - saliva

40. Which of the following animals is an omnivore?
- elephant
  - lion
  - pig
  - sheep



41. The set - up above show that soil contains \_\_\_\_\_
- air
  - humus
  - minerals
  - water

42. Which one of the following does NOT affect floating and sinking?
- Shape of material
  - Type of material
  - Size of the object
  - Weight of the material

43. Which one of the following is a natural way of lighting a house \_\_\_\_\_
- Open windows
  - Lighting candle
  - Using bulbs
  - Using a torch

44. Which phase of the moon is shown below?



- full moon
- Gibbous
- crescent
- new moon

45. The following are uses of heat except \_\_\_\_\_
- warming
  - cooking
  - lighting
  - drying

46. Which foods are the main sources of vitamins?
- Fruits and vegetable
  - Maize and beans
  - Fish and meat
  - Butter and irish potatoes

47. Supplying water to crops is called \_\_\_\_\_
- farming
  - watering
  - irrigation
  - cultivation

48. Which one of the following is not use of water at home?
- transport
  - cleaning
  - drinking
  - cooking

49. Which of these birds is not kept at home?
- goose
  - eagle
  - duck
  - hen

50. Which one of the following is NOT a use of light?
- Photosynthesis
  - Drying clothes
  - Photocopying
  - Controlling of traffic



**GATUNDU DISTRICT EXAMINATION**  
**STANDARD FOUR – END YEAR 2016**  
**KISWAHILI**

Muda: Saa 1 dakika 40

Chagua jibu lifaalo ili kijaza pengo.

Maua \_\_\_\_\_ 1 \_\_\_\_\_ msichana mrembo na \_\_\_\_\_ 2 \_\_\_\_\_ tabia nzuri. Alipendwa na wazazi \_\_\_\_\_ 3 \_\_\_\_\_ na watu \_\_\_\_\_ 4 \_\_\_\_\_ kijijini. Siku \_\_\_\_\_ 5 \_\_\_\_\_ kulikuwa na ngoma kijijini. Maua, pamoja na wasichana \_\_\_\_\_ 6 \_\_\_\_\_ wa umri \_\_\_\_\_ 7 \_\_\_\_\_ walijipamba na kujitayarisha ili kwenda ngomani. Urembo \_\_\_\_\_ 8 \_\_\_\_\_ Maua uliwakasirisha sana. Njiani, walikutana na marafiki wao \_\_\_\_\_ 9 \_\_\_\_\_ pia walikuwa warembo. Hata hivyo, maua \_\_\_\_\_ 10 \_\_\_\_\_ aliyekuwa mrembo zaidi. Walipokuwa wakiendelea na safari yao, walikutana pia na mzee \_\_\_\_\_ 11 \_\_\_\_\_ ambaye hakuwa akiona. Huyu \_\_\_\_\_ 12 \_\_\_\_\_ alikuwa amebeba mkongojo na matunda \_\_\_\_\_ 13 \_\_\_\_\_ Walimsalimia kwa heshima na adabu, “ \_\_\_\_\_ 14 \_\_\_\_\_ babu.” Naye mzee akaitikia, “ \_\_\_\_\_ 15 \_\_\_\_\_ wanangu”. Mzee aliwapa matunda nao wakamuonyesha njia akaenda zake.

- | A            | B         | C         | D           |
|--------------|-----------|-----------|-------------|
| 1. yalikuwa  | alikuwa   | alikua    | yalikuwa    |
| 2. yenye     | wenye     | mwenye    | zenye       |
| 3. yake      | zake      | chake     | wake        |
| 4. wote      | yote      | sote      | zote        |
| 5. mmoja     | moja      | mumoja    | monja       |
| 6. wengine   | mwingine  | nyingine  | zingine     |
| 7. yake      | lake      | wake      | chake       |
| 8. ya        | cha       | za        | wa          |
| 9. ambao     | ambayo    | ambaye    | ambazo      |
| 10. ndiyo    | ndiye     | ndiwe     | ndicho      |
| 11. wawili   | watatu    | mmoja     | wanne       |
| 12. kiziwi   | kiwete    | bubu      | kipofu      |
| 13. matano   | tatu      | masita    | nne         |
| 14. hamjambo | shikamoo  | hatujambo | habari yako |
| 15. sijambo  | hatujambo | marahaba  | sina neno   |

PRINTED BY HIGHFLYER SERIES Tel: 0723 499860

Funded By: C.D.F. Gatundu South Constituency,  
Patron Hon. Moses Kuria, Mp Gatundu South.

**Chagua jibu lililo sahihi kutoka 16 - 30**

16. Tumia neno la adabu lifaalo.

Tafadhali niende \_\_\_\_\_.

- A. choo
- B. haja
- C. chooni
- D. kukojoa

17. Andika sentensi hii kwa wakati uliopo.

Wageni waliketi sebuleni

- A. Wageni wanaketi sebuleni
- B. Wageni wameketi sebuleni
- C. Wageni wataketi sebuleni
- D. Wageni huketi sebuleni

18. Nomino kiroboto iko katika ngeli ya \_\_\_\_\_.

- A. I-ZI
- B. U-ZI
- C. A-WA
- D. KI-VI

19. Kamilisha methali ifuatayo

Mvumilivu hula \_\_\_\_\_.

- A. matunda
- B. yote
- C. mbichi
- D. mbivu

20. Usiku huwa kuna giza \_\_\_\_\_.

- A. tororo
- B. totoro
- C. fofofu
- D. tititi

21. Nyama inayoshikilia meno kinywani huitwa \_\_\_\_\_.

- A. ulimi
- B. ini
- C. ufizi
- D. pafu

22. Makao ya kuku ni kizimba kama vile makao ya mchwa ni \_\_\_\_\_.

- A. kichuguu
- B. kiota
- C. shimo
- D. kombe

23. Vazi livaliwalo na wanawake na wasichana ambalo hushikilia maziwa ni \_\_\_\_\_.

- A. kocho
- B. kaptura
- C. kamisi
- D. kanchiri

24. Umoja wa sentensi ifuatayo ni;

Karatasi zimeraruka

- A. Makaratasi yameraruka
- B. Karatasi imeraruka
- C. Makaratasi yameraruka
- D. Karatasi wameraruka

25. Mbuzi ni kifaa cha kukunia nazi. Mbuzi pia ni \_\_\_\_\_.

- A. mjinga
- B. kondoo
- C. mnyama
- D. mmea

26. Anayeendesha ndege ni rubani, Je anayeendesha meli huitwa \_\_\_\_\_.

- A. nahodha
- B. dereva
- C. utingo
- D. usukani

27.  $\frac{1}{10}$  akisami hii uitwaje?

- A. sudusi
- B. ushuri
- C. uzuri
- D. tusui

28. Alipovamiwa na wezi usiku wa manane alipiga \_\_\_\_\_.

- A. Chafya
- B. jeki
- C. Pasi
- D. kamsa

29. Ndege wanaowavutia watalii katika maziwa ni \_\_\_\_\_.
- A. Mbayuwayu                      B. Korongo  
C. Ninga                                D. Ilero

- A. Wewe                                B. nyinyi  
C. Yeye                                 D. wao

30. Alimsaidia \_\_\_\_\_ wakati wa shida.

**Soma hadithi kisha ujibu maswali 31 mpaka 40.**

Hapo zamani palikuwa na mvulana aliyetitwa Juma. Juma alitoka katika familia maskini sana. Wazazi wake walimwalia mwana wao kwa matumaini makubwa kwani yeye ndiye alikuwa kifunguamimba. Alisoma kwa shida sana ili aweze kuamaliza umaskini uliokuwa kwao. Mvulana huyu alikuwa na bidii ya mchwa na aliweza kufaulu vyema katika masomo yake. Baadaye alibarikiwa kuwa mhandisi na kuweza kuwasaidia jamaa zake sana. Kwa kweli subira huvuta \_\_\_\_\_

31. Jina la mvulana anayezungumziwa katika hadithi hii ni \_\_\_\_\_.
- A. Maskini                            B. Juma  
C. Mvulana                            D. mchwa

32. Familia ya Juma ilikuwa \_\_\_\_\_.
- A. Tajiri                                B. mhandisi  
C. Matumaini                         D. maskini

33. Wazazi wa Juma walimwalia kwa \_\_\_\_\_ makubwa.
- A. shida  
B. subira  
C. usaidizi  
D. matumaini

34. Juma alikuwa kifungua mimba maana yake ni kuwa \_\_\_\_\_.
- A. Mtoto wa kwanza kuzaliwa  
B. Mtoto wa mwisho kuzaliwa  
C. Mtoto mwenye mimba  
D. Mtoto wa kufungua mlango

35. Juma alisoma kwa \_\_\_\_\_.
- A. furaha  
B. huzuni  
C. shida  
D. raha

36. Juma alifanya bidii ya \_\_\_\_\_.
- A. Buibui                                B. mchwa  
C. Kiroboto                             D. sisimizi

37. Baada ya kufanya bidii, Juma \_\_\_\_\_.
- A. alifaulu vyema katika masomo yake  
B. hakufaulu vyema katika masomo yake  
C. alianguka katika masomo yake  
D. hakufanikiwa katika masomo yake

38. Baada ya masomo yake, Juma alibarikiwa kuwa \_\_\_\_\_.
- A. karani  
B. mkurugenzi  
C. mhandisi  
D. baharia

39. Alipoajiriwa kazi, Juma \_\_\_\_\_.
- A. hakuweza kusaidia jamaa zake  
B. alisahau jamaa zake  
C. aliitupilia mbali jamaa yake.  
D. aliweza kusaidia jamaa yake

40. Kamilisha methali hii  
Subira huvuta \_\_\_\_\_ ?
- A. amani                                B. heri  
C. imani                                 D. vita

**Soma kifungu hiki kisha ujibu maswali 41 mpaka 50**

Siku moja Sungura alimwalika rafiki yake Jongoo kwenye arusi ya binti yake aliyeitwa Korongo. Jongoo alifurahishwa sana na mwaliko huo naye akaamua kuhudhuria. Lakini kwa bahati mbaya hakuwa na miguu ya kuchezea ngoma huko arusini.

Usikukucha hakupata usingizi kwa kufikiria sana. Alikuwa na tamaa sana ya kwenda lakini hakupata jawabu. Baada ya kufikiri sana, aliamua kwenda kuazima miguu kutoka kwa rafiki yake nyoka. Jongoo alitembea kwa shida sana mpaka kwa rafiki yake. Alimpata amelala chini ya mti mkubwa mawindoni. Nyoka, ambaye alikuwa karimu sana alimwazima miguu yake bila wasiwasi wowote.

41. \_\_\_\_\_ alimwalika rafiki yake katika arusi.  
A. Sungura  
B. Jongoo  
C. Korongo  
D. Nyoka
42. \_\_\_\_\_ alialikwa na rafiki yake katika arusi.  
A. Sungura  
B. Jongoo  
C. Korongo  
D. Nyoka
43. Sungura alikuwa \_\_\_\_\_ wa Korongo.  
A. mwana  
B. mjukuu  
C. mzazi  
D. mtoto
44. Jongoo \_\_\_\_\_ na mwaliko huo.  
A. alihuzunishwa na mwaliko huo  
B. alikasirishwa  
C. aliumizwa  
D. alifurahishwa
45. Kwa bahati mbaya, jongoo hakuwa na \_\_\_\_\_ ya kuchezea ngoma.  
A. mikono  
B. miguu  
C. miti  
D. vifaa
46. Maana ya usiku kucha ni \_\_\_\_\_.  
A. usiku wenye kucha.  
B. usiku nusu  
C. usiku mchanga  
D. usiku wote
47. Usiku kucha, Jongoo hakupata \_\_\_\_\_.  
A. tamaa  
B. chakula  
C. usingizi  
D. kinywaji
48. Jongoo aliamua kwenda kuazima miguu kwa rafiki yake \_\_\_\_\_.  
A. nyoka  
B. jongoo  
C. kando  
D. katikati
49. Jongoo alimpata Nyoka \_\_\_\_\_ ya mti.  
A. juu  
B. chini  
C. kando  
D. katikati
50. Nyoka alimwazima Jongoo miguu yake kwa sababu Nyoka alikuwa \_\_\_\_\_.  
A. wasiwasi  
B. mbaya  
C. mkarimu  
D. mchoyo

# GATUNDU DISTRICT EXAMINATION STANDARD FOUR – TERM III 2016

## ENGLISH

Time: 1 hour 40 minutes

Fill in the blank spaces 1 - 15 using the best answers from the choices given.

People in Kenya \_\_\_\_\_ 1 \_\_\_\_\_ special days set aside \_\_\_\_\_ 2 \_\_\_\_\_ they celebrate special \_\_\_\_\_ 3 \_\_\_\_\_. The events may be related \_\_\_\_\_ 4 \_\_\_\_\_ an individual person's life \_\_\_\_\_ 5 \_\_\_\_\_ religion. Some celebrations \_\_\_\_\_ 6 \_\_\_\_\_ held in memory \_\_\_\_\_ 7 \_\_\_\_\_ specific events \_\_\_\_\_ 8 \_\_\_\_\_ the history of the country. At home \_\_\_\_\_ 9 \_\_\_\_\_ may organize \_\_\_\_\_ 10 \_\_\_\_\_ parties. They \_\_\_\_\_ 11 \_\_\_\_\_ friends, decorate \_\_\_\_\_ 12 \_\_\_\_\_ houses, \_\_\_\_\_ 13 \_\_\_\_\_ or buy cakes, light \_\_\_\_\_ 14 \_\_\_\_\_ and \_\_\_\_\_ 15 \_\_\_\_\_ birthday songs.

A	B	C	D
1. Having	has	have	had
2. When	where	which	how
3. Thing	action	party	events
4. On	at	to	in
5. As	all	or	was
6. Is	have	has	are
7. Off	on	of	at
8. At	in	under	on
9. Family	families	family	families
10. Birthday	eating	drinking	dancing
11. Inviting	invite	ask	inviting
12. Ours	our	they	their
13. Making	made	make	doing
14. Torches	candles	sticks	lamps
15. Sing	singing	jump	shout



PRINTED BY HIGHFLYER SERIES Tel: 0723 499860

Funded By: C.D.F. Gatundu South Constituency,  
Patron Hon. Moses Kuria, Mp Gatundu South.

**Write the plural of the underlined words**

16. The lady has gone to the market  
A. Ladys                      B. ladiyes  
C. ladies                      D. Lydies

17. He has kept the book on the shelf  
A. Shelfs                      B. shelfes  
C. shelvies                      D. shelves

**Complete the similes**

18. Wambui's dress is as white as \_\_\_\_\_  
A. Snow                      B. ice  
C. teeth                      D. paper

19. Mercy Nyambura is as proud as \_\_\_\_\_  
A. An ostrich                      B. A peacock  
C. an owl                      D. a cock

20. As brave as \_\_\_\_\_  
A. A soldier  
B. a police  
C. A lion  
D. an elephant

**Choose the correct preposition**

21. The cat hid \_\_\_\_\_ the bed.  
A. On                      B. in  
C. at                      D. under

22. There is no milk \_\_\_\_\_ the bottle  
A. In                      B. on  
C. into                      D. by

23. The thief jumped \_\_\_\_\_ the fence.  
A. across                      B. over  
C. into                      D. under

**Choose the correct word to fill the gap**

24. The teacher wrote \_\_\_\_\_ the blackboard  
A. In                      B. at  
C. on                      D. across

25. It has been \_\_\_\_\_ since morning  
A. Rain                      B. raining  
C. raning                      D. raining

**Write the opposite of the underlined word**

26. We live in a big house  
A. Small                      B. Little  
C. less                      D. huge

27. Mr Johnson Kienjeku is a tall man  
A. Little                      B. Short  
C. Huge                      D. thin

**For question 28 - 30 choose the correct spelt word**

28. A. bycicle                      B. bicycle  
C. bycircle                      D. bicicle

29. A. puppyses                      B. puppies  
C. puppys                      D. puppyes

30. A. chief                      B. chieve  
C. chieef                      D. chiif

**Read the following passage and answer questions 31 - 40**

Once upon a time, there lived a man called Waciuru. He lived in Nyeri County with his wife and children. Waciuri had seven children, three boys and four girls. His wife was called Wangeci and she was a farmer. She grew maize, beans, arrowroots and potatoes.

Waciuri was a pastoralist and he kept cattle, goats and sheep. Among his seven children was a boy called Kimathi. Kimathi grew up to become a very brave boy and he was well behaved and obedient to his parents.

When the white people came in Kenya, they stole our land and punished our people. Kimathi was not happy and he said that he must fight the white people so that they can go back to their home. Kimathi with other young men like Mathenge, Kago, Waruhiu and others managed to fight the white people, defeated them and chased them back to their homeland.

### Questions

31. What was the name of the man \_\_\_\_\_  
A. Wachira                      B. wanjohi  
C. Waciuri                      D. Wanjahi
32. In which country did the man live?  
\_\_\_\_\_  
A. Nyandarua                      B. Nyeri  
C. Kiambu                      D. Embu
33. What was the name of the man's wife  
A. Wangeci                      B. Waceke  
C. Waithira                      D. Nyawira
34. The man's wife was a \_\_\_\_\_  
A. Teacher                      B. pastoralist  
C. nurse                      D. farmer
35. Which of these crops did she NOT  
grow \_\_\_\_\_  
A. Bananas                      B. maize  
C. beans                      D. potatoes
36. Which of these animals was kept by  
Waciuri?  
A. Pigs                      B. rabbits  
C. Sheep                      D. chicken
37. How many children had the family  
A. Six                      B. eight  
C. Five                      D. seven
38. Kimathi grew up to be \_\_\_\_\_ boy.  
A. A lazy                      B. an obedient  
C. a rude                      D. a hardworking
39. Who stole our land and punished our  
people? \_\_\_\_\_  
A. The white people  
B. The black people  
C. The Indians  
D. The Americans
40. Did Kimathi and the other young men  
manage to fight the white people  
A. No                      B. I don't know  
C. I assume so                      D. Yes

### Read the following passage and answer the following questions 41 - 50

Uganda is a country which borders Kenya at the West. It got its independence in 1962. It was ruled by a country called Britain, a land of white people.

After independence, it was ruled by a black person called Kabaka Mutesa I. Later, Kabaka was removed from power and another person called Sir Milton Obote took over and started ruling Uganda as the second president.

Sir Milton Obote ruled Uganda from 1966 - 1971. He ruled Uganda for six years.

In 1971, Sir Milton Obote was removed from power by the head of the Ugandan army called Idd Amin Dada. Idd Amin dada ruled Uganda from 1971 - 1979.

He ruled Uganda for nine years. Idd Amin Dada as the third president of Uganda ruled the people of Uganda badly.

He killed and punished many people. He ordered or told all Asians to go out of Uganda and go back to their homeland.

Idd Amin Dada was removed from power by Tanzania and some Ugandan people who were not happy with his leadership.

Now Uganda is ruled by a person called Yoweri Kaguta Museveni. Uganda is now at peace and many people are happy with the leadership of Museveni.





**GATUNDU DISTRICT EXAMINATION  
STANDARD FOUR – TERM III - 2016**

**MARKING SCHEME**

ENGLISH	KISWAHILI	MATHS	SCIENCE	SOCIAL STUDIES	
1. C	1. B	1. B	1. B	1. D	51. C
2. A	2. C	2. C	2. D	2. C	52. B
3. D	3. D	3. A	3. A	3. C	53. C
4. C	4. A	4. D	4. C	4. C	54. B
5. C	5. B	5. A	5. A	5. B	55. A
6. D	6. A	6. C	6. A	6. A	56. B
7. C	7. C	7. B	7. D	7. D	57. A
8. B	8. D	8. D	8. B	8. B	58. C
9. D	9. A	9. C	9. A	9. C	59. D
10. A	10. B	10. C	10. C	10. B	60. A
11. B	11. C	11. A	11. D	11. D	
12. D	12. D	12. D	12. C	12. A	<u>C.R.E</u>
13. C	13. A	13. C	13. B	13. B	
14. B	14. B	14. B	14. D	14. C	61. B
15. A	15. C	15. D	15. B	15. C	62. C
16. C	16. B	16. D	16. C	16. D	63. A
17. D	17. <del>X</del> A	17. C	17. B	17. A	64. D
18. A	18. C	18. B	18. B	18. C	65. A
19. B	19. D	19. B	19. A	19. C	66. C
20. C	20. B	20. D	20. B	20. C	67. B
21. D	21. C	21. A	21. B	21. D	68. D
22. A	22. A	22. A	22. C	22. B	69. B
23. B	23. D	23. A	23. B	23. B	70. C
24. C	24. B	24. D	24. D	24. D	71. B
25. D	25. C	25. B	25. A	25. B	72. A
26. A	26. A	26. C	26. D	26. C	73. D
27. B	27. B	27. A	27. A	27. C	74. D
28. B	28. D	28. C	28. B	28. A	75. A
29. B	29. D	29. D	29. C	29. D	76. C
30. A	30. C	30. A	30. D	30. C	77. B
31. C	31. B	31. C	31. B	31. C	78. D
32. B	32. D	32. D	32. A	32. B	79. C
33. A	33. D	33. C	33. C	33. D	80. A
34. D	34. A	34. C	34. B	34. A	81. D
35. A	35. C	35. B	35. C	35. B	82. A
36. C	36. B	36. A	36. B	36. A	83. C
37. D	37. A	37. D	37. D	37. D	84. D
38. B	38. C	38. D	38. D	38. B	85. C
39. A	39. D	39. A	39. B	39. A	86. B
40. D	40. B	40. C	40. C	40. A	87. D
41. A	41. A	41. B	41. D	41. C	88. A
42. C	42. B	42. C	42. C	42. C	89. C
43. B	43. C	43. A	43. A	43. A	90. A
44. D	44. D	44. B	44. C	44. A	
45. B	45. B	45. D	45. C	45. A	
46. A	46. D	46. B	46. A	46. B	
47. C	47. C	47. A	47. C	47. D	
48. D	48. A	48. C	48. A	48. A	
49. B	49. B	49. D	49. B	49. B	
50. A	50. C	50. B	50. B	50. A	