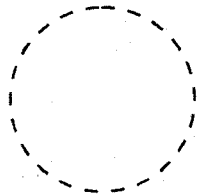


SCIENCE

Time: 1 hour 40 minutes

1. The phase of the moon shown below is



- A. New moon
- B. Full moon
- C. Half moon
- D. Gibbous

2. Which of the following is the 5th colour of the rainbow?

- A. Red
- B. Violet
- C. Blue
- D. Yellow

3. Which of the following meal contains a balanced diet?

- A. Tomatoes, green bananas, beans
- B. Ugali, milk, meat
- C. Sausage, ripe bananas, pineapple
- D. Rice, chapati, bread

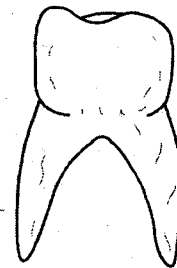
4. Which of the following animal is **CORRECTLY** matched with how it moves.

- A. Hen - flying
- B. Kangaroo - walking
- C. Snake - slithering
- D. Dog - barking

5. Which is the **BEST** day for winnowing?

- A. Windy day
- B. Calm day
- C. Sunny day
- D. Cloudy day

6. The teeth below is used for



- A. Gripping food
- B. Tearing food
- C. Grinding food
- D. Chewing food

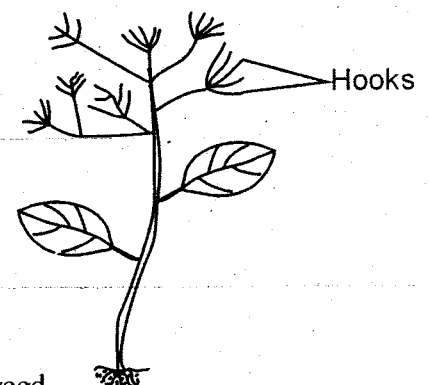
7. Which of the following body part is used in breathing?

- A. Eyes
- B. Nose
- C. Elbow
- D. Skin


8. Which of the following animal provides us with mohair only?

- A. Goat
- B. Sheep
- C. Cow
- D. Pig

9. Which weed is represented by the diagram below?



- A. Pigweed
- B. Oxalis
- C. Sodom apple
- D. Black jack

10. Which part of the kales is eaten by human beings?
 A. Roots
 B. Leaves
 C. Stem
 D. Flowers
11. Which of the following is a special sound?
 A. Singing
 B. Talking
 C. Ambulance siren
 D. Shouting
12. Which is the **BEST** way for making water safe for drinking?
 A. Boiling
 B. Warming
 C. Filtering
 D. Adding salt
13. All the following diseases can be cured **EXCEPT**
 A. Common cold
 B. Malaria
 C. Headache
 D. HIV AIDS
14. Which of the following is **NOT** a problem related to teeth?
 A. Bleeding gum
 B. Tooth cavity
 C. Dental floss
 D. Bad smell
15. Shedding of teeth starts at the age of
 A. 12 years
 B. 6 years
 C. 8 years
 D. 12 months
16. What is the tool shown below used for?
- 
17. A clear sky appears _____ in colour.
 A. black
 B. grey
 C. blue
 D. dark grey
18. Which is the **BEST** soil for modelling?
 A. Sand soil
 B. Loam and clay soils
 C. Loam soil
 D. Clay soil
19. _____ is the study of weather.
 A. Astronomer
 B. Meteorologist
 C. Meteorology
 D. Weather chart
20. Which of the following is a good table manners?
 A. Eating little food at a time.
 B. Talking while eating.
 C. Swallowing food without chewing.
 D. Sitting far from the table.
21. Which of the following is **NOT** a characteristic of all animals.
 A. Excretion
 B. Giving birth
 C. Moving
 D. Reproducing
22. Which of the following insect spreads malaria?
 A. cockroach
 B. Housefly
 C. Flea
 D. Mosquito
23. A _____ is used to measure the body temperature.
 A. Rainuage
 B. Thermometer
 C. Windsock
 D. Dental floss

- A. Driving in nails
 B. Weeding
 C. Shearing wool
 D. Firewood splitting

24. Which of the following is **NOT** part of milk teeth?
 A. Premolars
 B. Incisors
 C. Molars
 D. Canines
25. The following are recreational uses of water. Which one is **NOT**?
 A. Swimming
 B. Bathing
 C. Surfing
 D. Boat racing
26. Which of the following food group gives our body energy to work?
 A. Carbohydrates
 B. Vitamins
 C. Proteins
 D. Fats and water
27. The young one of a frog is known as
 A. fingerling
 B. calf
 C. lamb
 D. toad
28. Which of the following animal is herbivorous?
 A. Cat
 B. Dog
 C. Zebra
 D. Lion
29. Which of the following is **NOT** a requirement of good health?
 A. Security
 B. Rest
 C. Sleep
 D. Exercise
30. Removal of unwanted plants from the farm is known as
 A. harvesting
 B. irrigation
 C. uprooting
 D. weeding
31. Which of the following is a characteristic of cumulus clouds?
 A. Dark grey colour.
 B. Indicate fine weather.
 C. Found low on the sky.
 D. They are mountainous
32. _____ is the ability of the body to fight against diseases.
 A. Deficiency
 B. Acquired
 C. Immunity
 D. Immuno deficiency
33. Which of the following foods listed below consists of protective foods only?
 A. Eggs, milk, meat.
 B. Spinach, orange, kales.
 C. Arrowroots, yams, beans.
 D. Melon, Avocado, pawpaw
34. Which of the following is **NOT** a component of the soil?
 A. Mineral particles
 B. Human being
 C. Humus
 D. Water
35. Which of the following is **NOT** a source of light?
 A. Sun
 B. Moon
 C. Electricity
 D. mirror
36. Which of the following material is a sinker?
 A. Nylon paper
 B. Pebbles
 C. A leaf
 D. Feather
37. Which of the following is a reason why we maintain tools?
 A. To make them sharp.
 B. Make them last long.
 C. To get accidents.
 D. To make them rust.

38. Which of the following is a legume?

- A. Groundnut
- B. Millet
- C. Sorghum
- D. Maize

39. A canine has _____ roots.

- A. two
- B. three
- C. one
- D. four

40. To avoid having HIV AIDS we should do all the following **EXCEPT**

- A. Avoiding sharing piercing tools.
- B. Avoid sexual intercourse.
- C. Share the toothbrush.
- D. We should not touch open wounds.

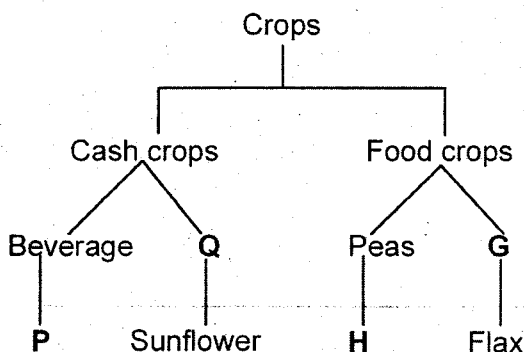
41. Which of the following is the odd one out?

- A. Slasher
- B. Panga
- C. Hoe
- D. Handkerchief

42. The following are poultry. Which one is **NOT**?

- A. Duck
- B. Hawk
- C. Hen
- D. Turkey

Study the chart below carefully and answer the questions 43-45



43. Which group of crop is represented by letter **Q**

- A. Beverage
- B. Legumes
- C. Cereals
- D. Oil crop

44. Which crop is **LIKELY** to belong to the food group **G**?

- A. Cotton
- B. Cotton
- C. Pumpkin
- D. Tea

45. Which food is likely to fit in **P**?

- A. Rice
- B. Coffee
- C. Yam
- D. Maize

46. A _____ is a medical string used to remove particles between the teeth

- A. Dental carries
- B. Toothpick
- C. Dental floss
- D. Denture

47. Which of the following is **NOT** a use of heat?

- A. Lighting a house
- B. Cooking
- C. Drying cereals
- D. Warming our bodies

48. Which of the following component of the soil will make it more fertile.

- A. Living things
- B. Mineral salts
- C. Air
- D. Humus

49. Which part of the fish makes it swim easily in water?

- A. Scales
- B. Fins
- C. Lateral lines
- D. Eyes

50. Which of the following food will make our teeth less strong?

- A. Sugarcane
- B. Roasted maize
- C. Cooked bananas
- D. Biscuits

ENGLISH
SECTION A:
LANGUAGE

Time: 1hour 40min

Read the passage below. It contains blank spaces numbered 1-15. Choose the BEST answer from the choices given.

The sun _____ 1 _____ the wind always _____ 2 _____ as each boasted that he was _____ 3 _____ than the other. One day they saw a man walking _____ 4 _____ a path. He _____ 5 _____ wearing a heavy coat.

“Aha! _____ 6 _____ is a man,” said the sun. “Let’s ask him to tell us who _____ 7 _____ us is stronger than the other.” _____ 8 _____ wind through the man was _____ 9 _____ to answer in favour of the sun. It was a cold day and warm sunshine was just what the man needed. “No,” said the wind. “Let us try to make the man remove his coat. _____ 10 _____ manages to make the man remove _____ 11 _____ coat is stronger one.”

They agreed and the wind _____ 12 _____. It _____ 13 _____ and blew, but the man held on his coat. Finally the wind _____ 14 _____ it was unable to make the man remove his coat. It was now the sun’s turn. The sun shone and shone. At first it was only pleasant warmth. However, as the heat increased the man found it very _____ 15 _____ to walk with his coat on. He removed the coat.

- | | | | | |
|-----|---------------|--------------|-----------------|---------------|
| 1. | A. or | B. and | C. but | D. was |
| 2. | A. quarrelled | B. quarreled | C. quarrel | D. quarrels |
| 3. | A. weaker | B. strong | C. stronger | D. strongest |
| 4. | A. to | B. along | C. near | D. around |
| 5. | A. is | B. were | C. are | D. was |
| 6. | A. there | B. they | C. them | D. the |
| 7. | A. among | B. or | C. between | D. but |
| 8. | A. The | B. A | C. An | D. Are |
| 9. | A. luckily | B. liked | C. likely | D. like |
| 10. | A. Whatever | B. Who ever | C. Whoever | D. Whatever |
| 11. | A. his | B. her | C. he | D. he’s |
| 12. | A. start | B. started | C. starts | D. stated |
| 13. | A. blow | B. blew | C. blown | D. blowing |
| 14. | A. admit | B. admitted | C. has admitted | D. will admit |
| 15. | A. easy | B. hard | C. difficult | D. slow |

Read the passage below and use it to answer questions 31 to 40.

It is important for people who are neighbours to live as friends. This is because in time of troubles they can come together and help each other. If they are attacked, they can fight the enemy together and defend themselves. When communities live as friends they buy and sell goods to one another.

Some communities grow crops while others keep animals. If the community that grows crops needs meat and milk, it buys the items from the community that keeps animals. The community that keeps animals buys grains and vegetables from the ones that grow crops. The community can buy grains such as maize, millets, sorghum and rice. It can also buy vegetables such as cabbage, sukuma wiki (kales), spinach and many others. Without other people, a trader cannot make any money. Again without traders, people cannot get their basic needs.

In our area people depend on one another in many different ways. For example, sick people go to doctors and nurses to give them medicine. Without doctors many people would die. In school, pupils need teachers to teach them. Without a teacher, pupils cannot learn many things. Without pupils, teachers would not have a job.

- | | |
|--|---|
| <p>31. According to the passage _____ should live as friends.
A. enemies
B. neighbours
C. family
D. children</p> | <p>36. A person who treats sick people is called
A. nurse
B. teacher
C. doctor
D. farmer</p> |
| <p>32. In times of trouble, who come together to help each other?
A. Family
B. Teachers
C. Neighbours
D. Thieves.</p> | <p>37. Who can fight enemies together?
A. Neighbours.
B. Pupils.
C. Family
D. Parents</p> |
| <p>33. When communities live as friends they
A. steal from one another.
B. buy and sell to one another.
C. fight one another.
D. don't talk.</p> | <p>38. Cabbage, kales and spinach in one name are called
A. fruits
B. kales
C. grains
D. vegetables</p> |
| <p>34. A person who grows crops is known as
A. farmer
B. teacher
C. doctor
D. shopkeeper</p> | <p>39. Person who sell goods in the market is called
A. vender
B. trader
C. buyer
D. market</p> |
| <p>35. The communities that grow crops needs _____ and _____ from those that keeps animals.
A. meat and milk
B. meat and vegetables
C. milk and spinach
D. kales and spinach</p> | <p>40. What is the BEST title for the passage?
A. Neighbours
B. Family
C. Friends
D. Enemies</p> |

Read the passage below and use it to answer questions 41 to 50.

Once upon a time, a young girl named Fadhila lived in a tiny village on the coast of Kenya. Fadhila had a special talent for picking the most marvelous fruits. Whenever Fadhila picked an orange, it was the juiciest orange; whenever she picked a banana, it was richer and denser than anyone else's bananas. This was true of every fruit she picked.

The people of Fadhila's village wondered how she found such delicious fruit, but nobody asked her to reveal her secret. It was understood that everyone has a skill, a special talent, and this was Fadhila's. And then one day, as Fadhila was walking past Spider's house, he called out to her. You see, Spider was terribly lazy. He didn't like to work for himself, and he had heard tales of Fadhila's fruits. Spider had a special talent, too. He was a trickster, and this time he thought he could trick Fadhila into sharing her talents with him.

And so, using his sweetest voice, he called out, "Fadhila, good day to you. How are you feeling this beautiful morning?"

"I'm well," Fadhila answered, and she smiled, but right away she thought Spider must be up to something. "What about you, Spider? Are you feeling well?"

"Ah," Spider sighed, "well, yes ... but I am very hungry. I wonder if I might accompany you into the bush to find some food."

Fadhila thought a moment, and she looked Spider up and down. "You know, I am sure, no one has ever come with me."

"Ah, yes," Spider said cheerfully, "I do know that. And I would consider it a special honor to be the first one to be your companion in the lonely bush."

"Well," Fadhila said, eyeing him carefully, "if you come along, you must promise you won't tell anyone my secrets."

"Of course!" Spider said. He smiled.

On they walked, Fadhila leading the way down into parts of the bush where few people ventured. Spider clicked his heels with happiness, for he knew he was about to find the special place in the bush, the place that held Fadhila's secrets. And if he discovered this, he would never again have to work too hard for food. He could offer his secret to anyone who would go into the bush for him. "Oh, yes!" Spider said, and he followed Fadhila along the path, still deeper into the bush. And when they had reached a tree so deep in the bush that no one had ever seen it, Fadhila said, "Here, this is a very special tree. Deep inside is a hole with the world's best honey."

Spider's eyes grew wide and his greed greater, and once again, he shoved Fadhila into the bushes. He climbed the tree and when he found the little hole, he squeezed himself inside, and once again, he began to eat and eat and eat, and once again, he saved nothing for anyone else. And once again, he did not say thank you.

41. According to the passage where did Fadhila come from?

- A. At the Coast of Kenya.
- B. At the Coast of Lake Victoria.
- C. On the highlands.
- D. At the town.

42. Fadhila had a special talent of

- A. picking marvelous fruits.
- B. picking bitter fruits.
- C. tricking friends.
- D. walking to the forest.

43. How many fruits are mentioned in the first paragraph?

- A. 5
- B. 6
- C. 3
- D. 10

44. Why did the people of Fadhila's village not ask her about her talent?

- A. They did not know her.
- B. They were shy.
- C. They knew everybody has a talent.
- D. They were not bothered.

45. Who called out Fadhila when she was walking?

- A. Friend
- B. Spider
- C. Enemy
- D. Nobody

46. Who lead the way to the forest?

- A. Nobody
- B. Spider
- C. Fadhila
- D. Villagers

47. According to the passage Spider had a special talent. He was

- A. kind
- B. a trickster
- C. a singer
- D. generous

48. What is the opposite of Kind?

- A. Unkind
- B. Diskind
- C. Humble
- D. Selfish

49. Where did they find the honey?

- A. In the forest.
- B. On a hill.
- C. On a tree.
- D. In a hole.

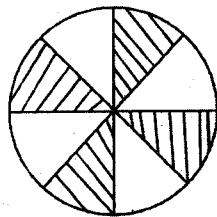
50. What would be the **BEST** title of the passage?

- A. Fadhila's special talents.
- B. Spider's greed
- C. The villagers
- D. Special fruits

MATHEMATICS

Time: 2 hours

- Which one of the following numbers is seventy thousand, seven hundred and seven?
A. 70 707 B. 70 077
C. 77 707 D. 700 707
- What is the place value of digit 5 in 50 836?
A. Ones B. Tens
C. Thousands D. Ten thousands
- Work out the following
 $30\ 105 + 6\ 899 + 564 =$
A. 47 568 B. 37 568
C. 36 558 D. 38 658
- What is the total value of 7 in 67 408?
A. 700 B. 70 000
C. 7 000 D. 70
- Subtract nine thousand, nine hundred and ninety nine from ten thousand.
A. 10 B. 1
C. 100 D. 1 000
- What fraction is shaded in the figure below?

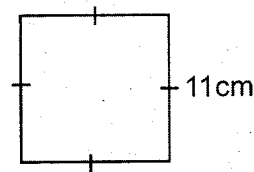


- A. $\frac{5}{8}$ B. $\frac{1}{2}$
C. $\frac{4}{9}$ D. $\frac{3}{8}$
- Find the product of the next two numbers in the pattern below.
96, 48, 24, 12, _____, _____
A. 54 B. 15
C. 45 D. 18

8. Work out

$$1 - \frac{5}{7} =$$

- A. $\frac{2}{7}$ B. $1\frac{5}{7}$
C. $\frac{1}{7}$ D. $\frac{3}{7}$
- Find the perimeter of the following square whose side is 11cm.



- A. 22cm B. 33cm
C. 44cm D. 121cm
- What is the place value of digit 9 in 32.49?
A. Ones B. Hundredths
C. Tenths D. Tens
 - Which one of the following numbers is divisible by 2, 5 and 10?
A. 435 B. 282
C. 569 D. 300

Study the attendance table below and answer questions 12 to 14

Day \ Pupils	Mon	Tue	Wed	Thur	Fri
Boys	250	309	270	280	300
Girls	280	301	295	302	310

- Find the total number of boys who attended the school that week
A. 1409 B. 1488
C. 1309 D. 1509
- Find the number of pupils who attended school on Tuesday?
A. 611 B. 592
C. 610 D. 590

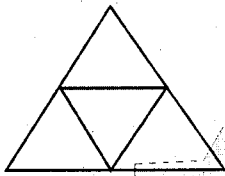
14. How many more girls than boys attended school on that week?

- A. 1488 B. 2897
C. 179 D. 79

15. Ole Lenku had 6854 cows, 8453 goats and 3724 goats. How many animals did he have altogether?

- A. 18021 B. 19031
C. 20031 D. 19021

16. How many triangles can you see in the figure below?



- A. 7
B. 8
C. 5
D. 4


17. Five tailors had a piece of material measuring 360 metres 70cm. They shared the material equally among themselves. How much material did each one of them get?

- A. 72m 14cm
B. 14m 72cm
C. 70m 44cm
D. 27m 24cm

18. Multiply 84 by 32

- A. 2578 B. 2688
C. 2866 D. 3688

19. Mariamu started washing clothes at the time shown below. She took 1½ hours to complete her washing. What time did she finish washing?



- A. Half past eleven o'clock
B. Quarter past 12 o'clock
C. Half past 12 o'clock
D. Quarter to 12 o'clock

20. In Manyanga town there are 4020 children, 1934 women and 1816 men. How many more children than adult are in that town?

- A. 2086 B. 2204
C. 270 D. 3750

21. A family uses 3 litres of milk in a day. How many litres of milk did the family use in the month of May?

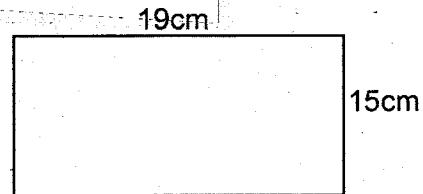
- A. 93 litres
B. 90 litres
C. 110 litres
D. 60 litres

22. Work out the following

$$\begin{array}{r} \text{M} \quad \text{cm} \\ 78 \quad 96 \\ \times \quad \quad 5 \\ \hline \end{array}$$

- A. 390m 480cm
B. 394m 80cm
C. 391m 80cm
D. 438m 0cm

23. Find the area of the figure shown below.



- A. 68cm² B. 285cm²
C. 285cm² D. 385cm²

24. Which one of the following fractions equivalent to $\frac{2}{3}$?

- A. $\frac{4}{9}$ B. $\frac{8}{16}$
C. $\frac{4}{8}$ D. $\frac{4}{6}$

25. How many bottles each holding $\frac{1}{4}$ litre can be filled from a container holding $12\frac{1}{2}$ litres?

- A. 56 bottles B. 58 bottles
C. 3 bottles D. 50 bottles

26. Which one of the following angles is an acute angle?



A.



B.



C.

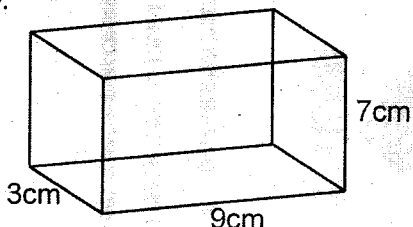


D.

27. Kibe bought $11\frac{1}{2}$ kg of sugar. He gave away $3\frac{1}{4}$ kg. How much sugar was he left with?

- A. $8\frac{1}{2}$ kg B. $7\frac{1}{4}$ kg
C. $8\frac{1}{4}$ kg D. $14\frac{1}{2}$ kg

28. Work out the volume of the cuboid shown below.



- A. 189cm^2
B. 19cm^3
C. 107cm^3
D. 189cm^3

29. How many days are there in the months of January, September and December?

- A. 91 days B. 92 days
C. 90 days D. 89 days

30. Add the following $123 + 21.7 + 0.03 =$

- A. 144.73 B. 433.73
C. 145.07 D. 244.73


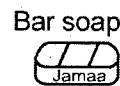
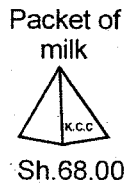
31. Murimi bought a bag of maize for sh. 1830 and sold it for sh. 2060. How much profit did he make?

- A. Sh.3890 B. Sh.1890
C. Sh.230 D. Sh. 330

32. I think of a number if I multiply it by 9 the answer is 117. What number is it?

- A. 17 B. 13
C. 11 D. 18

Use the following price list to answer questions 33 - 37



33. Wairimu bought a packet of milk and a loaf of bread. She gave the shopkeeper sh. 200. How much balance did she get back?

- A. Sh. 140.50cts
B. Sh. 59.50cts
C. Sh. 159.50cts
D. Sh. 160.50cts

34. Mama Joy bought a half kg of sugar, a loaf of bread and a packet of milk. How much money did she pay for the items?

- A. Shs. 358 50cts
B. Shs. 349 50cts
C. Shs. 149 50cts
D. Shs. 249 50cts


35. How much more is the bar of soap more than the loaf of bread?

- A. Shs.72 50cts
B. Shs.217 50cts
C. Shs.172 50cts
D. Shs.72 00cts

36. One shirt takes 25 minutes to dry on the sun. How many minutes will it take three such shirts?

- A. 75 minutes B. 25 minutes
C. 28 minutes D. 30 minutes

37. What time is shown by the clock face below?



- A. Ten minutes to 11 o'clock
B. Quarter past 11 o'clock
C. Five minutes to 10 o'clock
D. Twenty minutes to 11 o'clock

38. The area of a rectangle is 126cm^2 . Find its width if its length is 14cm .

- A. 19cm B. 7cm
 C. 15cm D. 9cm

39. Add $2x + 3y + x + 2y =$

- A. $5x + 3y$ B. $4x + 5y$
 C. $3x + 5y$ D. $7xy$

40. When you add an odd number to an odd number what do you get?

- A. Odd number
 B. Even number
 C. Prime number
 D. Zero

41. Subtract


Weeks	days
8	2
- 6	5

- A. 1 week 4 days B. 1 week 7 days
 C. 2 weeks 4 days D. 1 week 6 days

42. Which number comes before 10,000

- A. 99,999 B. 9,099
 C. 9,999 D. 999

43. How many rectangles can you count in the diagram drawn below?



- A. 5 B. 4
 C. 6 D. 9

44. Work out the following $3 \times 7 \times 0 =$

- A. 21 B. 0
 C. 10 D. 20

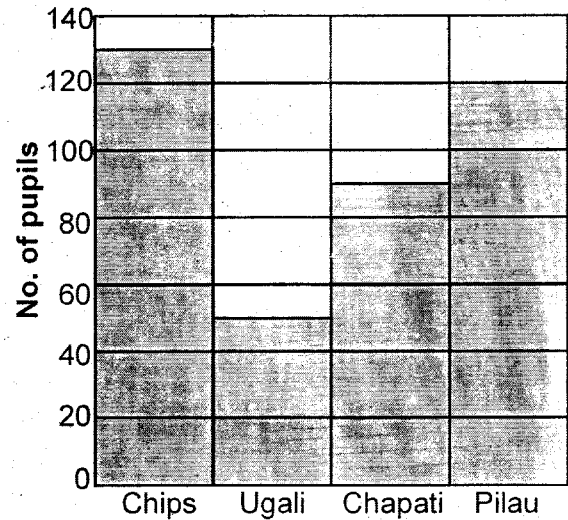
45. Write the following fraction as a decimal $\frac{5}{100}$

- A. 0.05 B. 0.5
 C. 0.005 D. 5.01

46. One crate of tomatoes contains 36 pieces. How many crates are needed to have 108 pieces?

- A. 144 B. 6
 C. 3 D. 4

The graph below shows different types of foods liked by pupils of Jivunie primary school. Use it to answer questions 48 to 50



47. Which food is liked by **MOST** pupils?

- A. Pilau
 B. Chips
 C. Ugali
 D. Chapati

48. How many more pupils like pilau than chapati?

- A. 30 B. 120
 C. 90 D. 20

49. Which food is **LEAST** liked by pupils?

- A. Chips
 B. Ugali
 C. Chapati
 D. Pilau

50. How many pupils like chips and chapati altogether?

- A. 250
 B. 180
 C. 210
 D. 220

KISWAHILI

SEHEMU YA KWANZA:

LUGHA

Muda: Saa 1 dakika 40

Soma kifungu kifuatacho. Kina nafasi 1 - 15. Katika kila nafasi, umepewa majibu manne. Chagua jibu lililo sahihi kati ya yale umepewa.


Mfanyi biashara _____ 1 _____ tajiri alikuwa anataka kusafiri kutoka _____ 2 _____ moja na kwenda nchi _____ 3 _____ pili. Alikuwa anataka kuchukua vitu kuviuza nchi _____ 4 _____ nyingine. Pia _____ 5 _____ kununua _____ 6 _____ kutoka nchi hiyo ili aiuze _____ 7 _____ kwao. Akachukua watumishi _____ 8 _____ kumi. Kazi _____ 9 _____ safarini ilikuwa ni kubeba mizigo _____ 10 _____ vyakula. Safarini watu hubeba _____ 11 _____. Ndani _____ 12 _____ kuna vitu _____ 13 _____ mfano _____ 14 _____ vitu hivyo ni _____ 15 _____ wa meno.

- | | | | |
|---------------|-------------|------------|---------------|
| 1. A. moja | B. mmoja | C. kimoja | D. wamoja |
| 2. A. nchi | B. inchi | C. wanchi | D. waanainchi |
| 3. A. za | B. la | C. ya | D. pa |
| 4. A. ile | B. hii | C. hio | D. hiyo |
| 5. A. alitaka | B. walitaka | C. akitaka | D. wakitaka |
| 6. A. thahabu | B. dhahabu | C. dhabu | D. adabu |
| 7. A. uko | B. huko | C. huku | D. guku |
| 8. A. wake | B. yake | C. ake | D. wao |
| 9. A. ao | B. yao | C. mwao | D. ya |
| 10. A. cha | B. vya | C. za | D. na |
| 11. A. gunia | B. mafiga | C. mikoba | D. kuni |
| 12. A. zake | B. chake | C. pake | D. yake |
| 13. A. nyingi | B. mingi | C. vingi | D. mengi |
| 14. A. za | B. wa | C. na | D. cha |
| 15. A. mswaki | B. muswaki | C. miswaki | D. msaki |

Chagua jibu lifaalo kujaza pengo kulingana na maagizo

16. Andika tarakimu kwa nambari:
Elfu tisini na moja mia moja kumi na moja.
A. 61 100 B. 91 100
C. 91 111 D. 91 011
17. Tedi na bibo walipenda kama
A. dhiki na faraja.
B. usiku na mchana.
C. chanda na pete.
D. pua na mdomo.
18. Mtu kiguu na njia ni
A. mgeni B. mtembezi
C. mkiambiaji D. mwenda wazimu
19. Mtoto wa paka anaitwa kinyaunyau, wa mbwa ni kelbu. Je mtoto wa kuku anaitwaje?
A. Kifaranga B. Kinda
C. Shibli D. Kiyoyo
20. Kamilisha methali:
Haba na haba hujaza
A. ukufi B. kibaba
C. nyumba D. tumbo
21. Andika kwa wingi:
Chandarua changu kimetoboka.
A. Viandarua vyangu vimetoboka.
B. Vyandarua vyangu vimetoboka.
C. Vyandarua chetu kimetoboka.
D. Vyandarua vyetu vimetoboka.
22. Mtu asiyekuwa na meno huitwaje?
A. kiwetu B. kigugumizi
C. kithembe D. kibogoyo
23. Andika kinyume cha "fumba" ni
A. fumbua B. fumbuza
C. fumbuo D. ufumbo
24. Kamilisha kitendawili:
Huku ng'o na kule ng'o.
A. Mwangaza B. Giza
C. Mbingu D. Kukataa

25. Sehemu iliyopakwa rangi ni



- A. nusu B. robo
C. thuluthi D. subui

26. Sikukuu ya mashujaa husherekewa mwezi wa

- A. Mei B. Juni
C. Desemba D. Oktoba

27. Paka akiondoka panya hutawala ni tamathali gani?

- A. msemu B. tashbihi
C. methali D. nahau

28. Ni gani baadhi ya majina haya si mdudu?

- A. nzi B. funza
C. panzi D. kibatari

29. Mtoto wakike wa mama yako ni nani?

- A. Dada B. Mpwa
C. Kaka D. Somo

30. Tunatumia _____ kuikunia nazi.

- A. mbuni B. kisu
C. mbuzi D. fuawe

Soma kifungu kisha ujibu swali la 31 – 40

Mtu mvivu ni yule ambaye hapendi kufanya kazi. Yeye hupenda kupumzika na kuwaangalia wale wengine wakifanya kazi. Hali ya kuwa mvivu inaitwa uvivu. Mtu akimwambia mwenzake kuwa ni mvivu huwa anamtukana. Uvivu ni mbaya sana. Humfanya mtu achukiwe na wenzake. Hii ni kwa sababu yeye hawezi kuwasaidia wakati wa kazi.

Kirema alikuwa mwanafunzi katika shule ya msingi ya Nkondi. Shule yao ilikuwa na shamba lililolimwa na wanafunzi. Kila wanafunzi walipokwenda kulima, Kirema aliwakimbia na kukaa chini. Lakini alikuwa wa kwanza kutaka kula chakula. Jambo hili halikuwafurahisha wanafunzi wenzake.

Siku moja wanafunzi walikataa kumpa Kirema chakula. Alipoona hakupewa kitu, alikimbia na kwenda mpaka kwa mwalimu mkuu.

“Nimenyimwa chakula mwalimu,” alishtaki.

“Kwa nini?” mwalimu mkuu alimwuliza. “Sijui.” Kirema alijibu na kuanza kulia. Mwalimu mkuu alipowaenda wanafunzi alielewa kuwa Kirema alikuwa hafanyi kazi. Kwa vile chakula hutoka shambani, aliyetaka kula alilazimika kulima. Tangu siku hiyo, uvivu wa Kirema ulikwisha.

31. Mvivu ni

- A. asiyependa kula.
- B. anayependa kula.
- C. asiyependa kufanya kazi.
- D. anayependa kufanya kazi.

32. Hali ya kuwa mvivu inaitwa

- A. furaha
- B. umaskini
- C. ujinga
- D. uvuvi

33. Mtu anapomwita mwenzake “mvivu” huwa

- A. anampongeza
- B. anamtusi
- C. anamcheka
- D. anampenda

34. Shamba lililotajwa katika ufahamu huu ni la nani?

- A. Shule
- B. Kilema
- C. Mvivu
- D. Mwalimu mkuu

35. Nkondi ni

- A. kanisa ya Kirema.
- B. shule ya Kirema.
- C. shamba la Kirema.
- D. hatujaambiwa.

36. Shamba la shule ya Kirema lililimwa na

- A. walimu
- B. wazazi
- C. wanafunzi
- D. mwalimu mkuu

37. Neno jingine lenye maana na shamba ni

- A. bonde
- B. kulima
- C. kande
- D. konde

38. Kiongozi wa wanafunzi shuleni huitwa

- A. naibu
- B. kiranja
- C. kiongozi
- D. kiganja

39. Mvivu huwa hawezi

- A. kula pamoja na mengine
- B. kushiba chakula
- C. kuketi
- D. kuifanya kazi

40. Kisa kinachofaa habari hii ni

- A. uvivu
- B. mwekevu
- C. mwalimu mkuu
- D. mwanafunzi

Soma kifungu kifuatacho kisha ujibu maswali 41 – 50

Makazi ya binadamu ni nyumbani ilhali ya ng'ombe ni zizi. Maskani ya nyuki ni mzinga. Watoto wa nyuki huitwa jana. Katika mzinga kuna vyumba vya asali viitavyo masega. Kuna nyuki aina kadha katika mzinga. Kuna wale ambao huenda kwenye maua kutafuta asali. Vilevile kuna wengine ambao hutafuta maji na wengine huilinda sehemu anapokaa malkia.

Asali ya nyuki pia huitwa uki. Asali hutumiwa kama chakula cha jana. Asali pia hutumiwa kama dawa. Pia hutumiwa kutengeneza pombe ya kienyeji. Watu wanapoitumia pombe hii hulewa chakari.

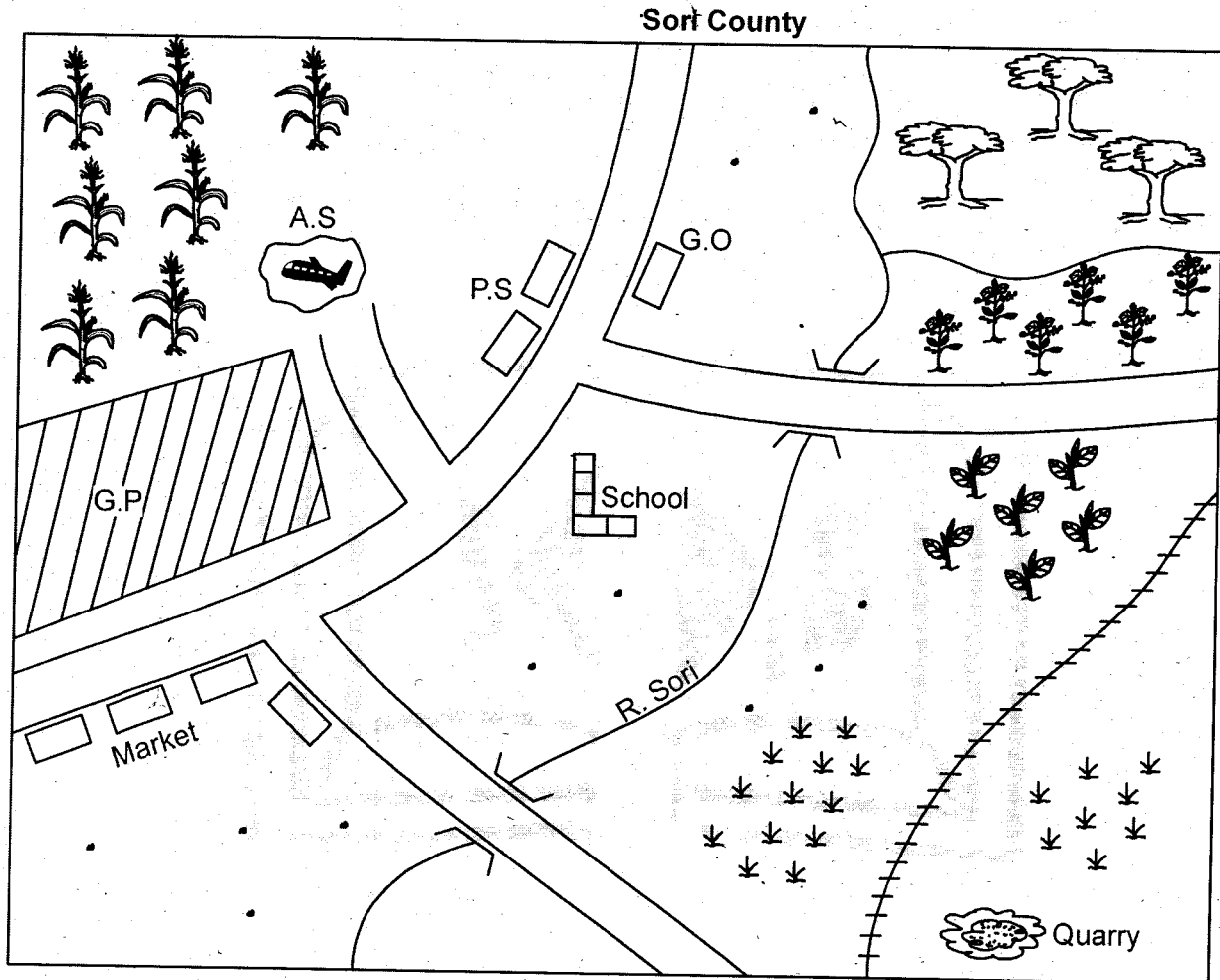
Nyuki hufugwa katika mizinga ya kisasa nyumbani. Nyuki pia hufugwa kama chakula cha binadamu. Tuwe watu wanaojali maisha ya nyuki.

- 41.** Neno jingne la uki ni
A. jana
B. juzi
C. asali
D. pombe
- 42.** Makazi ya nyuki ni
A. masega
B. mzinga
C. nyumba
D. zizi
- 43.** Mtoto wa binadamu huitwa mwana. Je, mtoto wa nyuki huitwaje?
A. Jana
B. Kiwavi
C. Mavu
D. Malkia
- 44.** Nyuki wote huwa na
A. kazi fulani
B. asali nyingi
C. maji mengi
D. akili nyingi
- 45.** Nyuki hufugwa katika nyumbani na
A. kanisani
B. sokoni
C. shuleni
D. mwambani
- 46.** Anayelindwa na nyuki katika mzinga huitwa je?
A. mfalme
B. Askari
C. Jana
D. Malkia
- 47.** Nyumba ya ng'ombe huitwa
A. zizi
B. mwamba
C. nyumbani
D. makazi
- 48.** Ufahamu huu unatufundisha tuwe watu
A. wasiojali maisha.
B. wanaojali maisha ya nyuki.
C. wakora
D. umoja
- 49.** Ni gani si faida ya uki?
A. Chakula
B. Kutengeneza pombe
C. Dawa
D. Uganga
- 50.** Kichwa kizuri cha ufahamu huu ni:
A. Jana
B. Masega
C. Nyuki
D. Asali

**SOCIAL STUDIES &
RELIGIOUS EDUCATION**

Time: 2hrs 15mins

PART I: SOCIAL STUDIES



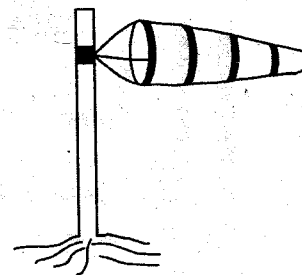
KEY

	Railway		Game park
	Forest		Maize
	Coffee	G.O	Governor's office
	Tea	P.S	Police station
	Airstrip	SCH	School

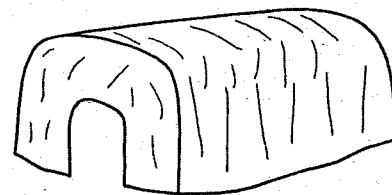
Study the map of Sori County and use it to answer questions 1 - 7

1. River Sori flows from
 A. NE to SW B. SW to NE
 C. NE to S D. SE to NW
2. The food crop grown in Sori county is
 A. tea B. coffee
 C. bananas D. maize
3. The airstrip in Sori County is **LIKELY** to transport
 A. maize B. tourists
 C. stones D. goods
4. Who is the head of Sori County?
 A. Governor B. D.C
 C. P.S D. Chief
5. Law and order is maintained in Sori County by
 A. chief B. police
 C. teachers D. tourist
6. What is the direction of the quarry from the school?
 A. SW B. NW
 C. SE D. NE
7. Which of the following economic activity is not practised in Sori?
 A. Tourism B. Mining
 C. Trading D. Fishing
8. Which of the following is **NOT** a traditional method of communication?
 A. Radio B. Drum
 C. Messengers D. Horn blowing
9. Our country is divided into _____ counties
 A. 290 B. 12
 C. 49 D. 47
10. Growing of crops and keeping of livestock is known as
 A. agro forestry B. agriculture
 C. mining D. beef farming

11. All the following methods were used to educate boys and girls in the olden days **EXCEPT**
 A. songs B. riddles
 C. reading D. stories
12. Which of the following is a cash crop?
 A. Tea B. Banana
 C. Maize D. Sorghum
13. The following are major groups **EXCEPT**
 A. Bantu B. Nilotes
 C. Cushites D. Asians
14. Among the following, which one is **NOT** a basic need?
 A. Food B. Shelter
 C. Education D. Clothing
15. A river that has water throughout the year is said to be
 A. seasonal B. permanent
 C. a tributary D. a stream
16. The weather instrument below is known as



- A. windvane B. raingauge
 C. anemometer D. windsock
17. The **MOST** common means of transport in our county is by
 A. road B. railway
 C. water D. air
18. The traditional house below belongs to the _____ community



- A. Maasai B. Akamba
 C. Mijikenda D. Agikuyu

19. Acacia and baobab are type of vegetation found in
 A. mountain B. savanna
 C. desert D. mangrove
20. A group of people who trace their origin to one ancestor make up a
 A. community B. school
 C. clan D. society
21. Which of the following is **NOT** a physical feature?
 A. Mountain B. Trees
 C. River D. Plain
22. Population census in Kenya is carried out after ____ years
 A. 3
 B. 7
 C. 10
 D. 5
23. Which of the following method of keeping meat for a long time was **NOT** used in the past?
 A. Sun - drying B. Smoking
 C. Salting D. Canning
24. The Bantu are believed to have originated from
 A. Horn of Africa B. South Sudan
 C. Congo forest D. Mt. Kenya
25. The height above the sea level is known as
 A. altitude B. longitude
 C. plateaus D. latitude
26. A woman who helps mother to give birth is called
 A. mid-wife B. doctor
 C. herbalist D. medicineman
27. A school is headed by the
 A. chief
 B. headteacher
 C. headboy
 D. class teacher
28. Mashujaa Day in Kenya is celebrated on
 A. 1st January
 B. 12th December
 C. 25th December
 D. 20th October
29. The factory where milk is processed is called
 A. brewery B. ginnery
 C. creamery D. dairy
30. The capital city of Kenya is in
 A. Kisumu B. Nairobi
 C. Mombasa D. Nyeri
31. In our county, which is the main source of rivers?
 A. Plains B. Dams
 C. Valleys D. Forests
32. Turkey, geese and chicken are all called
 A. poultry
 B. beef
 C. dairy
 D. wild
33. People who live in cool and wet areas wear ____ clothes
 A. black B. light
 C. heavy D. jackets
34. ____ people move from place to place in search of pasture for their livestock.
 A. Nomads B. Farmers
 C. Raiders D. Hunters
35. Which is the staple food for **MOST** communities?
 A. Tea B. Bananas
 C. Wheat D. Maize
36. All the following items were made by blacksmith. Which one was **NOT**?
 A. Arrowheads B. Pot
 C. Spearhead D. Knives
37. A valuable rock dug from the ground is called
 A. stone B. rock
 C. mineral D. salt
38. Throwing waste into a river, lake or land causes
 A. pollution B. flooding
 C. drought D. clean water
39. In the olden days, which of the following was **NOT** used to do trade?
 A. Beads B. Bangles
 C. Shells D. Money

40. The flag of Kenya has ___ colour at the top.
 A. white B. black
 C. green D. red
41. Chicken which are kept for meat are called
 A. broilers B. layers
 C. hens D. chicks
42. An area where few people have settled is said to be _____ populated.
 A. moderately B. sparsely
 C. highly D. densely
43. Who among the following call their God Asis?
 A. Luo B. Maasai
 C. Nandi D. Agikuyu
44. Who is the head of a county?
 A. Senator B. Chief
 C. D.C D. Governor
45. The exchange of goods for goods is known as _____ trade.
 A. trade B. selling
 C. barter D. money
46. The compass pointer always points to the
 A. north B. south
 C. east D. west
47. A long period of heavy rainfall in our county leads to
 A. swamps B. floods
 C. drought D. famine
48. _____ are laws that govern a given society.
 A. Moral laws
 B. Commandments
 C. Sheria law
 D. Traditions
49. A land surrounded by water is called
 A. lake B. island
 C. highland D. crater
50. Kemmie who walks to school everyday should always walk on the ___ hand side of the road.
 A. right
 B. light
 C. left
 D. north
51. People who visit our county for leisure are called
 A. traders
 B. foreigners
 C. tourists
 D. visitors
52. Who among the following keeps law and order in our county?
 A. Watchmen B. Police
 C. Army D. Teachers
53. Many locations make up a
 A. county B. district
 C. sub-location D. division
54. A family that is made up of step-mother, step-sisters and step-brothers is said to be
 A. polygamous
 B. single parent
 C. nuclear
 D. extended
55. A thief caught stealing from a shop should
 A. be stoned to death
 B. taken to church
 C. taken to a police station
 D. be forgiven
56. Papyrus reeds can be used to make
 A. pots
 B. baskets
 C. knives
 D. gourds
57. A member of parliament represents a
 A. county B. ward
 C. constituency D. district
58. A school is an example of
 A. community B. clan
 C. tribe D. group
59. Most of the road accidents are caused by
 A. bad vehicles B. poor roads
 C. careless drivers D. overspeeding
60. Which of the following is not a child right?
 A. Right to education
 B. Right to life
 C. Right to food
 D. Right to marry

PART II: RELIGIOUS EDUCATION

PART II: SECTION A

CHRISTIAN RELIGIOUS EDUCATION

61. When was man created according to the creation story? _____ day
- 1st
 - 3rd
 - 5th
 - 6th
62. The children of Israel were slaves in
- Canaan
 - Egypt
 - Sinai
 - Moriah
63. The father of David was called
- Jesse
 - Abraham
 - Isaac
 - Saul
64. The first passover celebration was held in
- | | |
|-------------------|-----------------|
| A. the wilderness | B. Canaan |
| C. Egypt | D. River Jordan |
65. Who among the following made a wrong choice?
- | | |
|------------|------------|
| A. Abraham | B. Moses |
| C. Ruth | D. Ananias |
66. Which of the following is **NOT** a talent?
- | | |
|--------------|-------------|
| A. Singing | B. Stealing |
| C. Preaching | D. Praying |
67. Honouring your parent is a God given commandment with a
- | | |
|------------|-------------|
| A. promise | B. faith |
| C. curse | D. blessing |
68. Moses received the God's ten commandments on Mount
- Moriah
 - Olives
 - Sinai
 - Kenya
69. Jesus taught His disciples
- The grace
 - Lord's prayer
 - Ten commandments
 - Apostle's creed
70. The name Emmanuel means
- saviour
 - Jesus
 - son of man
 - God with us
71. Kiplimo Nicholas a standard four boy is lazy and does not want to do his work. What advice can you give him as a Christian?
- Tell him it is okay not to do.
 - Do the work for him.
 - Encourage him to do his own work.
 - Ask him to copy from others.
72. Which of the following is the **BEST** way a Christian can spend free time?
- Visiting friends.
 - Reading a story book
 - Watching a film
 - Visiting a children's home
73. Zechariah the father of John the baptist was a
- priest
 - farmer
 - carpenter
 - tax collector
74. Which of the following actions does **NOT** lead to the spread of HIV/AIDS?
- Donating blood
 - Sharing injection needles
 - Sexual immorality
 - Shaking hands
75. Who among the following was raised from the dead?
- Peter
 - Lazarus
 - Moses
 - Herod

76. During the flood, who was saved together with his family?

- A. Moses
- B. Adam
- C. Noah
- D. Abraham

77. I was sold by my brothers because of envy to be a slave in Egypt. My name is

- A. David
- B. Joseph
- C. Esther
- D. Jesus

78. In the olden days children were expected to

- A. obey elders
- B. drink alcohol
- C. marry their cousins
- D. go to church

79. _____ brought gifts to baby Jesus.

- A. Angels
- B. Shepherds
- C. Herod
- D. Wisemen

80. _____ denied Jesus three times

- A. James
- B. John
- C. Peter
- D. Paul

81. Jesus chose _____ disciples to help Him preach the gospel.

- A. 10
- B. 12
- C. 7
- D. 4

82. Who broke the commandment 'Do not kill'?

- A. Cain
- B. Abel
- C. Noah
- D. Peter

83. The parable of the good Samaritan teaches us to

- A. travel
- B. help those in need
- C. avoid accident
- D. not travel at night

84. The sister of Moses was called

- A. Dorothy
- B. Olpha
- C. Miriam
- D. Rebecca

85. In olden days our forefathers worshipped in

- A. church
- B. temple
- C. mosque
- D. shrines

86. Peter the disciple was later referred to as the

- A. rock
- B. saviour
- C. vine
- D. greatest

87. Jesus washed the feet of the disciples to show

- A. pride
- B. kindness
- C. humility
- D. love

88. We celebrate the birth of Jesus during

- A. Good Friday
- B. Labour day
- C. Mashujaa day
- D. Christmas

89. Who among the following was thrown into a den of lions for kneeling and praying to God?

- A. Moses
- B. Daniel
- C. Barnabas
- D. Meshack

90. The main lesson Christians learn from the healing of the man with the demons is that Jesus

- A. forgives sins
- B. has power over evil
- C. demons are bad
- D. has power over nature

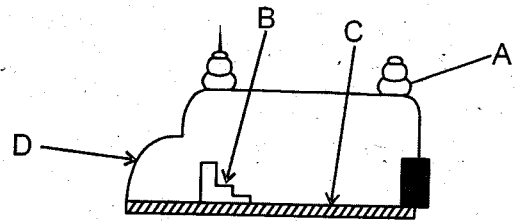
ISLAMIC RELIGIOUS EDUCATION

61. Things that happened in the year when the prophet was born are recorded in surah
A. Qureish B. Lahab
C. Kaafirun D. Fiyl
62. Surah Ikhlas emphasizes on the _____ of Allah.
A. protection
B. oneness
C. mercy
D. power
63. The people mentioned in surah Lahab are Abulhab and his
A. wife
B. uncle
C. brother
D. close friend
64. The word "Al-fatiha" means
A. seven years
B. mother of Qur'an
C. opening chapter
D. a dua
65. The holy Qur'an was first revealed to prophet Muhammad
A. on Mount Nur
B. on Mount Swafa
C. in cave Thaur
D. in cave Hira
66. Which advice among the following requires Muslims to be kind?
A. Love other Muslims as brothers.
B. Treat creatures of Allah well.
C. Tell truth when you speak.
D. Respect your parents
67. When you avoid _____, you have broken the whole religion of Islam.
A. swalah
B. swaum
C. a mosque
D. zakkat
68. "Heavy najis" is a kind of najis that you should wash
A. the whole body
B. everyday
C. seven times
D. using fine sand
69. The two prophets mentioned in "Tashahud" in salaah are Muhammad and _____ (A.S)
A. Musa
B. Ibrahim
C. Adam
D. Issa
70. Which one among the following is NOT a condition of a prayer?
A. face Qibla
B. be clean
C. know time of a prayer
D. pray in the mosque
71. We can use fine sand to make temporary ablution when there is no water. This is called
A. twahara B. ghusul
C. tayammum D. istinjaah
72. Which one is NOT among group of things we should give out as zakkat?
A. Fruits and vegetables
B. Money, gold and silver
C. Animals
D. House equipment
73. From which attribute of Allah do we get "the Islamic greetings"?
A. As-Salaam
B. Al-Mu'umin
C. Al-Rahmaan
D. Al-Azeez
74. All attributes of Allah are _____ in total.
A. 21 B. 125
C. 63 D. 99
75. The prophet asked Muslims to work very hard to avoid _____ in Islam.
A. hypocrisy B. begging
C. liars D. boredom

76. The Qureish Arabs liked all the following games. Which one is haraam and Muslims should avoid?
- A. Wrestling B. Swimming
C. Gambling D. Spear throwing
77. The biggest gift that Allah gave the prophet on Isra wal Miiraj trip was
- A. the holy Qur'an B. the five prayers
C. the prophethood D. the riches
78. Aqiiqa is a celebration done
- A. to a Muslim child
B. to Muslims who are wedding
C. to remember Ibrahim and Ismail
D. after finishing fasting Ramadhan
79. All these are bad names, avoid them. Which one does NOT mean "problems"?
- A. Mashaka
B. Taabu
C. Shida
D. Simba
80. Children who have lost both of their parents are called
- A. ghaarimiin B. masaakiin
C. yatiim D. muttaqeen
81. The most pleasant action in Islam is to obey Allah, perform swalah on time and
- A. invite guests
B. respect your parents
C. follow your friend's behaviour
D. to hate non-Muslims
82. The sub-tribe of prophet Muhammad is known as
- A. Banu Hashim B. Banu Nadhir
C. Banu Sa'ad D. Banu Kinana
83. On which of the following mountains did the prophet first gather the Qureish for open mission?
- A. Mount Nur
B. Mount Swafa
C. Mount Marwa
D. Mount Uhudi

84. The first few people who accepted Islam were
- A. respected B. made to migrate
C. persecuted D. businessmen

85. Which part of the mosque is the "mihraab"?



86. Which one of the following should NOT be done in a mosque?
- A. Advertise things for business
B. Running a school and madrasa
C. Nursing the sick people
D. An orphanage for orphans

87. The first month of the Islamic calendar is
- A. Rabiul Awwal
B. Jamaduth Thaani
C. Muharram
D. Shawwaal

88. How many brothers did prophet Yusuf have?
- A. 9
B. 7
C. 12
D. 11

89. Which dua will you say when you are telling people "Bye, see you next time"?
- A. Yarhamkum yarhamkum
B. Fii amaanillah
C. Maasha allah
D. Astagh firullah

90. Which one of the following is NOT a duty of angels of Allah?
- A. Removing souls
B. Providing rizk to us
C. Writing good and bad deeds
D. Controlling rainfall

STANDARD FOUR JR 2016
MARKING SCHEME

ENGLISH		KISWAHILI		MATHS		SCIENCE		SOCIAL STUDIES	
1. B	1. B	1. A	1. A	1. C	51. C				
2. A	2. A	2. D	2. C	2. D	52. B				
3. C	3. C	3. B	3. A	3. B	53. D				
4. B	4. A	4. C	4. C	4. A	54. A				
5. D	5. A	5. B	5. A	5. B	55. C				
6. A	6. B	6. B	6. D	6. C	56. B				
7. C	7. B	7. D	7. B	7. D	57. C				
8. B	8. A	8. A	8. A	8. A	58. A				
9. C	9. B	9. C	9. D	9. D	59. C				
10. C	10. D	10. B	10. B	10. B	60. D				
11. A	11. C	11. D	11. C	11. C	R.E.				
12. B	12. D	12. A	12. A	12. A	61. D				
13. B	13. C	13. C	13. D	13. D	62. B				
14. C	14. B	14. D	14. C	14. C	63. A				
15. C	15. A	15. B	15. D	15. B	64. C				
16. A	16. C	16. C	16. A	16. D	65. D				
17. D	17. C	17. A	17. C	17. A	66. B				
18. B	18. B	18. B	18. D	18. A	67. A				
19. B	19. A	19. D	19. C	19. B	68. C				
20. A	20. B	20. C	20. A	20. C	69. B				
21. C	21. D	21. A	21. B	21. B	70. D				
22. A	22. D	22. B	22. D	22. C	71. C				
23. A	23. A	23. C	23. B	23. D	72. D				
24. A	24. B	24. D	24. C	24. C	73. A				
25. C	25. B	25. D	25. B	25. A	74. D				
26. B	26. D	26. A	26. A	26. A	75. B				
27. D	27. C	27. C	27. D	27. B	76. C				
28. C	28. D	28. D	28. C	28. D	77. B				
29. A	29. A	29. B	29. A	29. C	78. A				
30. A	30. C	30. A	30. B	30. B	79. D				
31. B	31. C	31. C	31. D	31. D	80. C				
32. C	32. D	32. B	32. C	32. A	81. B				
33. B	33. B	33. B	33. D	33. C	82. A				
34. A	34. A	34. D	34. A	34. A	83. B				
35. A	35. B	35. A	35. D	35. D	84. C				
36. C	36. C	36. B	36. B	36. B	85. D				
37. A	37. D	37. A	37. B	37. C	86. A				
38. D	38. B	38. D	38. A	38. A	87. C				
39. B	39. D	39. C	39. C	39. D	88. D				
40. A	40. A	40. B	40. C	40. B	89. B				
41. A	41. C	41. A	41. D	41. A	90. B				
42. A	42. B	42. C	42. A	42. B					
43. C	43. A	43. D	43. B	43. C					
44. C	44. A	44. B	44. C	44. D					
45. B	45. C	45. A	45. D	45. C					
46. C	46. D	46. C	46. A	46. A					
47. B	47. A	47. B	47. B	47. B					
48. A	48. B	48. A	48. D	48. A					
49. D	49. D	49. B	49. C	49. B					
50. A	50. C	50. D	50. D	50. A					