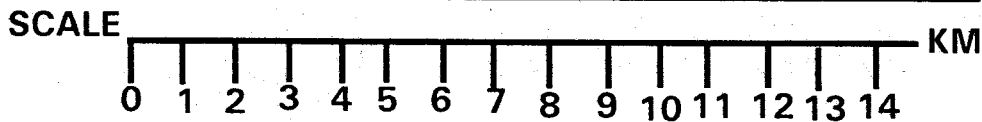
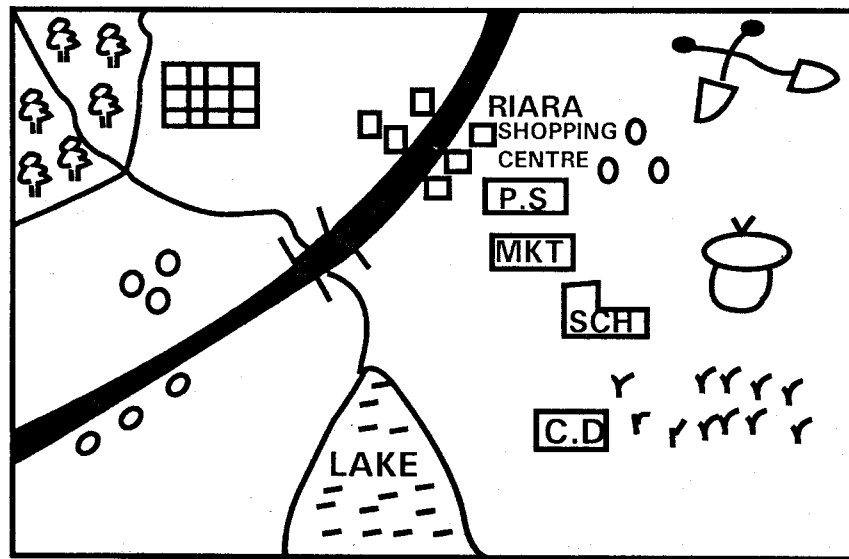


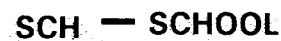
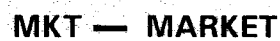
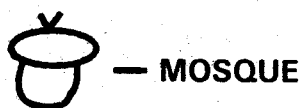
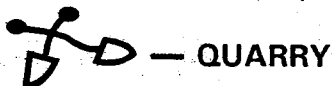
GATUNDU DISTRICT EXAMINATION STANDARD FIVE END YEAR 2016 SOCIAL STUDIES & CRE

Time: 2 hours 15 minutes

RIARA AREA



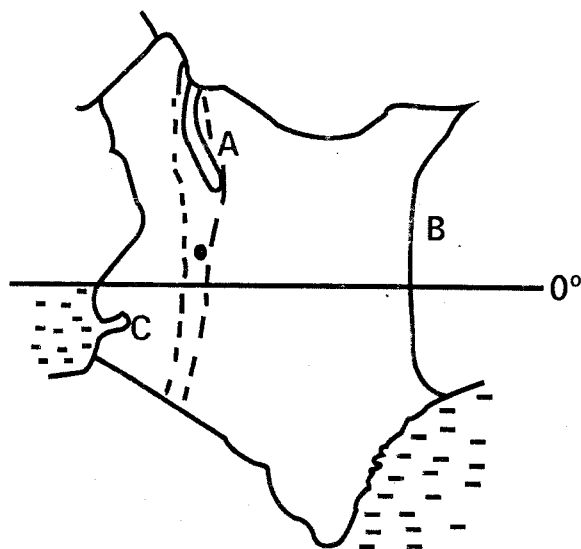
KEY



1. The climate to the North West of Riara area can be described as _____?
 A. Cool and wet
 B. Hot and dry
 C. Cold and dry
 D. Hot and wet
2. The river in the map has its mouth at _____?
 A. Forest
 B. Bridge
 C. Lake
 D. Road
3. Which economic activity is NOT found in Riara area?
 A. Mining
 B. Trading
 C. Fishing
 D. Farming
4. People in Riara area are LIKELY to be?
 A. Pagas
 B. Hindus
 C. Christians
 D. Muslims
5. What is the direction of the school from the coffee plantation?
 A. South East
 B. North West
 C. East
 D. North East
6. Which other cash crop can be grown to the North Western part of the map.
 A. Sisal
 B. Cotton
 C. Tea
 D. Wheat
7. Security in Riara area is represented by _____.
 A. Mosque
 B. Police station
 C. School
 D. Market
8. The following are arms of the government EXCEPT?
 A. Legislature
 B. University council
 C. Judiciary
 D. Executive
9. Which of the following features is commonly found in Nyika plateau?
 A. Escarpments
 B. Salty lakes
 C. Inselbergs
 D. Mountains
10. Which of the following types of vegetation is found ONLY in the coastal region in Kenya?
 A. Mangrove forest vegetation
 B. Swamp vegetation
 C. Savannah grassland vegetation
 D. Dry bushland vegetation
11. Zero – grazing is a dairy farming activity MAINLY practised where _____.
 A. Farmers do not have enough money to spend
 B. Farmers have a ready market for milk
 C. Farmers own small pieces of land
 D. Farmers are members of co-operative societies
12. Lawlessness will lead to all the following EXCEPT?
 A. Rapid development
 B. Slow development
 C. Fear
 D. Loss of life and property
13. Which one of the following is the BEST way of transporting petroleum from Mombasa to Kisumu?
 A. Pipeline
 B. Railway
 C. Air
 D. Water
14. Which one of the following town is a sea port?
 A. Nakuru
 B. Thika
 C. Eldoret
 D. Mombasa
15. Nabongo Mumia and Waiyaki wa Hinga made friends with the Europeas. They were?
 A. Resistors
 B. Collaborators
 C. Enemies
 D. Betrayers

16. Following are responsibilities of Kenyan citizens EXCEPT
- Voting
 - Showing respect
 - Paying taxes
 - Taking bribes
17. A young child who is below 8 years found in Kenya and whose country and parents are not known becomes a Kenyan citizen by _____
- Registration
 - Recommendation
 - Voting
 - Birth

Use the map of Kenya above to answer questions 18 – 22




18. The following towns in Kenya are passed by the line marked 0° EXCEPT?
- Mandera
 - Maseno
 - Nanyuki
 - Nyahururu
19. The national park marked A is _____
- Malka Mari National park
 - Mt. Kenya National park
 - Mt. Elgon National park
 - Sibiloi National park

20. ^{Which} County marked B is likely to be _____

- Ethiopia
- Somalia
- Uganda
- Tanzania

21. Rainfall LIKELY to be experienced in area marked C is _____
- Convectional rainfall
 - Lake rainfall
 - Relief rainfall
 - Orographic rainfall

22. The feature marked  is the _____?
- Plateaus
 - Rift valley
 - Lake
 - Highland

23. The MAIN tourist attraction along the coast is _____?
- Wildlife
 - Culture
 - Sandy beaches
 - Sceneries

24. Alluvial soils are also known as _____
- Young soils
 - Clay
 - Loam
 - Sandy

25. Which of five following is NOT a type of service industry?
- Hotel accommodation
 - Tourism
 - Banking
 - Vehicle assembly

26. Which of the following groups of people are plain Nilotes?
- Pokot
Luo
Samburu
 - Maasai
Keiyo
Sabaot
 - Somali
Turkana

Elmolo

- D. Samburu
Maasai
Njemps
27. The direction between North and North East is _____.
- A. North East
B. North North East
C. East North East
D. East South East
28. The second highest mountain in Kenya is _____.
- A. Mt. Kenya
B. Mt. Elgon
C. Mt. Marsabit
D. Mt. Kilimanjaro
29. In which of the following counties is one capital city of Kenya found?
- A. Kiambu county
B. Machakos county
C. Nairobi county
D. Kajiado county
30. General elections are held in Kenya after
- A. 10 years
B. 18 years
C. 5 years
D. 2 years
31. Population distribution in Kenya is influenced by all the following factors EXCEPT?
- A. Games and sports
B. Mining activities
C. Climate
D. Relief
32. Which one of the following is an example of early form of communication?
- A. Telephone
B. Letter
C. Smoke
D. Internet
33. The Maasai and the Agikuyu interacted in the past mainly through?
- A. Cattle raids
B. Trade
C. Harvest festivals

D. Initiation ceremonies

34. Which one of the following is NOT an early form of transport? The use of _____.
- A. Oxen
B. Donkeys
C. Porters
D. Bicycles
35. The MAIN duty of the Kenya police service is to _____.
- A. Maintain law and order
B. Arrest suspected criminals
C. Control traffic on roads
D. Protect Kenya from external attack
36. River Ewaso Nyiro North flows into _____ swamp.
- A. Awara
B. Lotikipi
C. Athi Kapti
D. Lorian
37. _____, temperature and winds are all elements of weather.
- A. Heat
B. Rainfall
C. Altitude
D. Distance from the sea
38. Amount of rainfall experienced in an area is measured using a _____.
- A. Rain gauge
B. Thermometer
C. Benometer
D. Wind vane
39. Among the following, which community is NOT a Bantu?
- A. Agikuyu
B. Akamba
C. Maasai
D. Aballuhya
40. The highest court in Kenya is the _____.
- A. High court
B. Supreme curt
C. Kadhis court
D. Courts of Appeal
41. Kahora loves his country very much. Kahora is therefore _____.

- A. Democratic
- B. Selfish
- C. Patriotic
- D. Tribalistic

42. The green colour in our National flag represents?


- A. Agriculture
- B. People
- C. Peace
- D. Blood shed

43. All the following are drainage features EXCEPT?

- A. River
- B. Sea
- C. Mountain
- D. Swamp

44. Which one of the following is a cultural artefact?

- A. Radio
- B. Spear
- C. Computer
- D. Watch



45. The above method of fishing is called

- A. Purse seining
- B. Long-Lining
- C. Traping
- D. Trawling

46. People born around the same time form?

- A. An age - set
- B. A Family
- C. A Clan
- D. An age group

47. Diatomite is mined at _____?

- A. Kariandusi
- B. Lake Magadi
- C. Kerio valley
- D. Malidi

48. The total number of governors in Kenya is _____?

- A. 290
- B. 8
- C. 47
- D. 35

49. Broilers are chicken kept for

- A. Domestic
- B. Poultry
- C. Laying eggs
- D. Meat

50. Map title is important because

- A. It is normally written at the top
- B. It informs the area represented
- C. It tells us the meaning of features on the map
- D. It is used to determine the length of roads on a map

51. Which one of the following was not a traditional industry?

- A. Basketry
- B. Blacksmithing
- C. Wood work
- D. Fruit processing

52. The activity of cutting down trees without planting more is known as

- A. Deforestation
- B. Forestry
- C. Reafforestation
- D. Agro - forestry

53. Things that guide us on how to behave well are known as _____?


- A. Discipline
- B. Moral laws
- C. Culture
- D. Habits

54. Areas with marshy lands are called

- A. Wet areas
- B. Flood area
- C. Swamps
- D. Muddy areas

55. Mashujaa day is celebrated on _____ ?
 A. 1st June
 B. 1st May
 C. 20th October
 D. 12th December
56. The cheapest method of preserving fish is _____ ?
 A. Canning
 B. Sun.- drying
 C. Smoking
 D. Refrigeration
57. The neighbour of Kiambu County to the south is _____ county.
 A. Kajiado
 B. Machakos
 C. Muranga
 D. Nairobi
58. Which one of the following is a softwood tree?
 A. Meru oak
 B. Elgon beak
 C. Camphor
 D. Cypress
59. Goods bought by a country from another country are _____ ?
 A. Export
 B. Imports
 C. External goods
 D. Domestic goods

60.



- The road sign symbolizes _____
 A. Bumps ahead
 B. Round about
 C. Danger ahead
 D. Children crossing

CHRISTIAN EDUCATION RELIGIOUS

61. God punished the people during the time of Noah by sending _____
 A. Flood
 B. Wind

- C. Fire
 D. Earthquake
62. Who among the following people is referred to as the father of faith _____ ?
 A. Jacob
 B. Isaac
 C. Abraham
 D. Joseph
63. Mahlon and Chilion died and left their wives with _____
 A. Abraham
 B. Naomi
 C. Ruth
 D. Orpha
64. Who among the following people was asked by God to give his son as a sacrifice?
 A. Abraham
 B. Moses
 C. Noah
 D. Jacob
65. Uriah's wife who committed adultery with King David was called _____
 A. Esther
 B. Jezebel
 C. Bethsheba
 D. Deborah
66. Which one of the following commandments teaches about respect for human life?
 A. Do not accuse anyone falsely
 B. Do not steal
 C. Do not commit murder
 D. Do not desire any man's house.
67. The best way to witness for Christ is through _____
 A. Preaching
 B. Prayers
 C. Actions
 D. Hate
68. God's word help Christians to grow _____
 A. Bodily
 B. Physically
 C. Emotionally
 D. Spiritually

69. John the Baptist said that Jesus was greater than him because he _____.

- A. Baptised with water
- B. Walked on water.
- C. Baptised with the Holy spirit
- D. Came after him.

70. The shedding of the blood of Jesus brings?

- A. Remembrance of sins
- B. Desire to die
- C. Persecution of Christians
- D. Forgiveness of sins

71. Which one of the following is a fruit of the Holy Spirit

- A. Self-control
- B. Working miracles
- C. Wisdom
- D. Preaching

72. Good relationship-among friends can be destroyed by the following except?

- A. Selfishness
- B. Forgiveness
- C. Gossip
- D. Hatred

73. Which one of the following is not a quality of a good friend _____?

- A. Sincere
- B. Corrects evil
- C. Being boastful
- D. Prays for others

74. In which of the following towns was Jesus, His mother and His disciples invited for a wedding.

- A. Bethany
- B. Jerusalem
- C. Cana
- D. Bethlehem

75. Who helps us to do the will of God?

- A. Jesus Christ
- B. Friends
- C. Holy spirit
- D. God

76. The following are ways in which Christians can overcome fear except?

- A. By getting worried
- B. Accepting the reality

- C. Reading the Bible
- D. Trusting in God

77. Who among the following prophets prophesied about the new covenant between God and His people?

- A. Jeremiah
- B. Isaiah
- C. Samuel
- D. Malachi

78. All the following happened to Saul on his way to Damascus except

- A. Seeing angel
- B. Falling on the ground
- C. Seeing a light from the sky shine around him
- D. Hearing a great voice.

79. In the apostle's creed, God will come to judge the living and the _____.

- A. dead
- B. ancestors
- C. alive
- D. unborn

80. When Jesus was born, who among the following was not there to welcome him?

- A. Wise-men
- B. Shepherds
- C. Disciples
- D. Joseph

81. Which one of the following activities can lead to immorality between boys and girls

- A. Singing and dancing
- B. Watching television
- C. Drinking alcohol
- D. Visiting the sick

82. Envy brings anger, jealousy and hatred. Rebecca, Isaac's wife was envious of _____ blessings.

- A. Jacob's
- B. Saul's
- C. David's
- D. Esau's

83. What did Joseph show to his brothers when they visited Egypt and found that he was the governor?

- A. Kindness
 - B. Tolerance
 - C. Forgiveness
 - D. Patience
84. Which one of the following is an example of child abuse?
- A. Putting food on the table.
 - B. Helping to wash the house after school
 - C. Cleaning own plate after dinner
 - D. Being left at home instead of going to school.
85. Which lessons do Christians learn from the story of David and Goliath?
- A. It is good to be selfish
 - B. Hard work pays
 - C. We should always trust in God
 - D. We should be patient
86. For God so loved the world that He gave His only son, that whoever believes in Him shall not perish but have _____" John 3:16
- A. External life
 - B. Longer life
 - C. Internal life
 - D. Everlasting life
87. When Samuel was young, he stayed in the temple with _____.
- A. Elisha
 - B. Eli
 - C. Ezekiel
 - D. Elikanah
88. Which one of the following is not a Christian deed that brings light to the world _____?
- A. Not doing evil
 - B. Condemning others
 - C. Avoiding conflicts
 - D. Praying for others
89. Name the two servants of God who were imprisoned because of casting out an evil spirit in the name of Jesus Christ?
- A. John and James
 - B. Peter and Andrew
 - C. Stephen and Philip
 - D. Paul and Silas
90. John damaged Esther's school bag while they were playing. What should John ask for _____?
- A. Compensation
 - B. Prayer
 - C. Forgiveness
 - D. Insults

GATUNDU DISTRICT EXAMINATION

STANDARD FIVE – TERM III 2016

KISWAHILI

Time: 1 Hour 40 minutes

Jaza nafasi zilizoachwa wazi kwa kuchagua jibu mwafaka zaidi.

Tusipofuata _____ 1 _____, huwa tunafanya makosa, sheria _____ 2 _____ nchi lazima zitekelezwe vilivyo, Tutakapovunja moja _____ 3 _____ ya sheria zilizopo, basi hatuna budi _____ 4 _____ kwa kosa tulilotenda. Watu wengi hujaribu kutoa hongo _____ 5 _____ matilaba yao yatimie. Yatupasa sisi _____ 6 _____ kupiga moyo konde na kuacha tabia _____ 7 _____ za ufisadi ili _____ 8 _____ kuendelea.

	A.	B.	C.	D.
1.	Njia	raia	sheria	shairi
2.	Wa	za	cha	ya
3.	Katikati	katika	ndani	kati
4.	Kuadhibiwa	kuadhibu	kukabidhiwa	kuambiwa
5.	Ili	iwapo	isipokuwa	iwe
6.	Zote	wote	nyote	sote
7.	Hiyo	hizo	hayo	hao
8.	Tuwe	tupate	tupatiwe	tupatwe

Sisi _____ 9 _____, kama _____ 10 _____ ada yake ya kila siku, Mama Baraka aliamka alfajiri na mapema. Baada ya kifungua kinywa akachukua _____ 11 _____ zake za kufanyia kazi. Akashika njia _____ 12 _____ hadi _____ 13 _____ shambani. Humo shambani _____ 14 _____ na kazi kama ilivyo _____ 15 _____ yake.

	A.	B.	C.	D.
9.	Hio	huo	hiyo	huyo
10.	Ilikuwa	ilivyokuwa	alivyokuwa	aliyekuwa
11.	Sana	zanaa	zana	vifaa
12.	Alienda	ataenda	anaenda	akaenda
13.	Kwake	pake	wake	lake
14.	Alifanya	alienda	aliendelea	alilinda
15.	Desturi	hamu	mila	mwiko



PRINTED BY HIGHFLYER SERIES Tel: 0723 499860

Funded By: C.D.F. Gatundu South Constituency,
Patron Hon. Moses Kuria, MP Gatundu South.

GATUNDU DISTRICT EXAMINATION

STANDARD FIVE – TERM III 2016

KISWAHILI

Time: 1 Hour 40 minutes

Jaza nafasi zilizoachwa wazi kwa kuchagua jibu mwafaka zaidi.

Tusipofuata _____ 1 _____, huwa tunafanya makosa, sheria _____ 2 _____ nchi lazima zitekelezwe vilivyo, Tutakapovunja moja _____ 3 _____ ya sheria zilizopo, basi hatuna budi _____ 4 _____ kwa kosa tulilotenda.

Watu wengi hujaribu kutoa hongo _____ 5 _____ matilaba yao yatimie. Yatupasa sisi _____ 6 _____ kupiga moyo konde na kuacha tabia _____ 7 _____ za ufisadi ili _____ 8 _____ kuendelea.

	A.	B	C.	D.
1.	Njia	raia	sheria	shairi
2.	Wa	za	cha	ya
3.	Katikati	katika	ndani	kati
4.	Kuadhibiwa	kuadhibu	kukabidhiwa	kuambiwa
5.	Ili	iwapo	isipokuwa	iwe
6.	Zote	wote	nyote	sote
7.	Hiyo	hizo	hayo	hao
8.	Tuwe	tupate	tupatiwe	tupatwe

Sisi _____ 9 _____, kama _____ 10 _____ ada yake ya kila siku, Mama Baraka aliamka alfajiri na mapema. Baada ya kifungua kinywa akachukua _____ 11 _____ zake za kufanyia kazi. Akashika njia _____ 12 _____ hadi _____ 13 _____ shambani. Humo shambani _____ 14 _____ na kazi kama ilivyo _____ 15 _____ yake.

	A.	B.	C.	D.
9.	Hio	huo	hiyo	huyo
10.	Ilikuwa	ilivyokuwa	alivyokuwa	aliyekuwa
11.	Sana	zanaa	zana	vifaa
12.	Alienda	ataenda	anaenda	akaenda
13.	Kwake	pake	wake	lake
14.	Alifanya	alienda	aliendelea	alilinda
15.	Desturi	hamu	mila	mwiko



PRINTED BY HIGHFLYER SERIES Tel: 0723 499860

**Funded By: C.D.F. Gatundu South Constituency,
Patron Hon. Moses Kuria, MP Gatundu South.**

Kutoka swali la 16 hadi 30 jibu kulingana na maagizo.

16. Andika wingi wa:
Toto hili linafoma jitabu zuri
A. Matoto haya yanafoma majitabu mazuri
B. Kitoto hiki kinafoma kijitabu kizuri
C. Watoto hawa wanafoma vitabu vizuri
D. Toto hili halisomi jitabu zuri
17. Kifaa cha kufungia au kufungulia skurubu huitwa _____
A. Msumeno
B. Nyundo
C. Timazi
D. Bisibisi
18. Nomino shida inapatikana katika ngeli ipi?
A. LI-YA B. I-ZI
C. U-I D. U-ZI
19. Shairi lenye mishororo mitatu katika kila ubeti huitwa _____
A. Tahnia B. tarbia
C. tathlitha D. takdisa
20. Ni sentensi gani kati ya hizi ina nomino, kivumishi, kitenzi na kielezi?
A. Mama amechoka sana
B. Mtoto mdogo ameimba vizuri
C. Mvulana mrefu amesafiri
D. Mzee huyu ni mfupi sana
21. Malipo yanayotozwa mhalifu aliyepatikana na hatia huitwa
A. Riba B. dhamana
C. faini D. ada
22. Chagua jina la kundi linalolingana na maelezo yaliyopigwa kistari: **Wezi wengi** walivamia jumba letu?
A. Kikosi cha wezi
B. Umati wa wezi
C. Kundi la wezi
D. Genge la wezi
23. Ni msimu upi watu huvaa sweta na mavazi mengine mazito mazito?
A. Kipupwe B. vuli
C. masika D. kiangazi
24. Ni upi si msamiati wa adabu
A. Tafadhali B. marahaba
C. samahani D. mjamzito
25. Chagua tashbihi isiyo sahihi
A. Mwaminifu kama mchana
B. Ngara kama mbalamwezi
C. Kwenda pope pole kama kinyonga
D. Kawaida kama sheria
26. Ndugu wa kiume wa baba huitwa _____
A. Ami B. halati
C. mjomba D. baba
27. Andika sentensi ifuatayo kwa udogo Mbwa yule anabweka
A. Jibwa lile linabweka
B. Kimbwa Yule kinabweka
C. Kimbwa kile kinabweka
D. Kijibwa kile kinabweka
28. Maamkizi 'alamsiki' hutumika wakati gani?
A. Mtu anapoingia nyumbani.
B. Watu wakiagana kwenda kulala
C. Kuomba msamaha
D. Alfajiri na mapema
29. Anayetengeneza mapambo kwa kutumia dhahabu huitwa _____
A. Mhuzi B. dalali
C. sonara D. mwashii
30. Kamilisha methali; Mtoto umleavyo ndivyo _____
A. Akuavyo B. akuwavto
C. akuwapo D. akuapo

Soma kisa hiki kisha ujibu maswali 31- 40

Katika msitu mmoja mkubwa kuliishi wanyama wengi, miongoni mwao walikuwa mbogo na buibui. Siku moja mwitu huo ulishika moto. Wanyama wote walishikwa na wasiwasi, wakaanza kukimbia ili wajiokoe. Mbogo alipokuwa akikimbia alikutana na Buibui aliyekuwa amejawa na hofu nyingi kwa sababu moto uliongezeka. Bubibui akamwambia mbogo, "Tafadhali Bwana mbogo nichukue juu ya pembe zako ili

nisiteketeo nami nitakusaidia siku nyingine". Watu husema, "akufaaye katika siku za jua mfae siku za mvua".

Mbogo hakuamini maneno aliyosema Buibui, alifikiri kwamba Buibui anamtania. Kisha kwa dharau akamjibu, "kidudu kama wewe utanifaa nini? Wewe unajidai tu." Lakini baada ya Buibui kumsihi Mbogo alimhurumia na kumbeba. Wote wawili wakautoroka moto huo na wakasalimika. Mbogo na Buibui waliendelea kukaa pamoja kwa muda mrefu huku wakipendana kama _____

- | | |
|----------------------------------------------------------------------------------------------------------------------------------------------------------------------------------------------------------------------------------------------------------------------------------------------------------------------------------------------------------------------------------------------------------------------------------------------------------------------------------------------------------------------------------------------------------------------------------------------------------------------------------------------------------------------------------------------------------------------------------------------------------------------------------------------------------------------------------------------------------------------------------------------------------------------------|--------------------------------------------------------------------------------------------------------------------------------------------------------------------------------------------------------------------------------------------------------------------------------------------------------------------------------------------------------------------------------------------------------------------------------------------------------------------------------------------------------------------------------------------------------------------------------------------------------------------------------------------------------------------------------------------------------------------------------------------------------------------------------------------------------------------------------------------------------------------------------------------------|
| <p>31. Katika msitu mmoja mkubwa kuliishi _____
 A. Mbogo na buibui tu
 B. Wanyama wasiokuwa wengi
 C. Wanyama waliokuwa wengi
 D. Wanyama kidogo</p> <p>32. Siku moja mwitu huo ulishika moto. Chagua neno lililo na maana tofauti na kushika moto.
 A. Kuugua
 B. kuungua
 C. kuchomeka
 D. kuteketea</p> <p>33. Buibui alikuwa na hofu kwa sababu moto: _____
 A. Ulipungua
 B. Ulikuwa si mwingi
 C. Ulizimwa
 D. Ulizidi</p> <p>34. Pembe ni sehemu ya mnyama inayopatikana
 A. Miguuni
 B. kichwani
 C. tumboni
 D. mgongoni</p> <p>35. "Akufaaye katika siku za jua mfae siku za mvua". Sentensi hii ni _____
 A. Methali
 B. kitendawili
 C. hadithi
 D. fumbo</p> | <p>36. Ni kweli kusema _____
 A. Wanyama wote hawakushikwa na wasiwasi
 B. Wanyama wote walikimbia ili wajiokoe
 C. Buibui na mbogo waliteketea
 D. Buibui alimbeba mbogo wakatoroka</p> <p>37. Neno kidudu ni _____ mdudu
 A. Mkubwa wa
 B. Kinyume cha
 C. Udogo wa
 D. Wastani wa</p> <p>38. Mwanzoni mbogo alifikiri kuwa Buibui _____
 A. Anamhurumia
 B. Anamtekteza
 C. Anamtoroka
 D. Anamtania</p> <p>39. Mwishoni mbogo na Buibui _____
 A. Waliangamia
 B. Walinusurika
 C. Walichomeka
 D. Hawakusalimika</p> <p>40. Tunasema, "kupendana kama
 A. Ardhi na mbingu
 B. Shilingi kwa ya pili
 C. Chanda na pete
 D. Bega kwa bega</p> |
|----------------------------------------------------------------------------------------------------------------------------------------------------------------------------------------------------------------------------------------------------------------------------------------------------------------------------------------------------------------------------------------------------------------------------------------------------------------------------------------------------------------------------------------------------------------------------------------------------------------------------------------------------------------------------------------------------------------------------------------------------------------------------------------------------------------------------------------------------------------------------------------------------------------------------|--------------------------------------------------------------------------------------------------------------------------------------------------------------------------------------------------------------------------------------------------------------------------------------------------------------------------------------------------------------------------------------------------------------------------------------------------------------------------------------------------------------------------------------------------------------------------------------------------------------------------------------------------------------------------------------------------------------------------------------------------------------------------------------------------------------------------------------------------------------------------------------------------|

Soma habari ifuatayo kisha uyajibu maswali 41-50

Mtu mmoja alishinda bahati na sibu akapata fedha nyingi. Alinunua gari la kubeba abiria. Gari lake lilisafiri kati ya Nakuru na Eldoret. Aliwapa masharti dereva na kondakta kufanya safari tano kila siku ili wapate ujira wao wa kutwa. Walipokosa kutimiza safari hizo tano, aliwapunguzia malipo yao ya kila siku.

Kila safari kutoka Nakuru hadi Eldoret na kurudi ni safari ndefu, ililazimu dereva kuendesha gari hilo kwa kasi sana ili kutimiza matakwa ya mwajiri wao.

Siku moja dereva huyo alipokuwa amekaribia kufika Timboroa huku akiendesha gari hilo kwa kasi, alikutana na lori la kubeba mchanga. Kufumba na kufumbua, wakagongana dafrao kichwa kwa kichwa. Gari hilo la abiria liliharibika vibaya sana na likapondekapondeka. Abiria watatu walikufa papo hapo na wengine

wengi wakajeruhiwa vibaya sana na kupelekwa hospitalini wakiwa mahututi. Dereva na kondakta wake walinusurika kwa kupata majeraha madogo madogo.

Dereva alimpigia tajiri wake simu na kumpasha habari kuwa gari lake lilikuwa limepata ajali na kusababisha maafa makubwa. Tajiri alikwenda upesi upesi mpaka pale palipotokea ajali hiyo. Alipata kwamba polisi walikuwa wamekwisha fika kitambo kidogo na kuwatoa wale watu watatu waliokufa na kuwalaza kando ya barabara.

Bila kujali hali ya abiria waliojeruhiwa na kupelekwa hospitalini au jinsi gari lake lilivyokuwa limeharibika alielekea moja kwa moja mpaka pale maiti walipokuwa wamelazwa. Alimwashiria dereva na kumwuliza, "je hawa ambao wamekufa, walikuwa wamelipa nauli zao?" Basi kila aliyekuwa pale alishangazwa kwa ukatili na tamaa ya tajiri huyo.

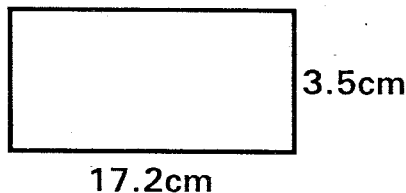
"Heri uzima kuliko mali. Kutoka leo mimi si dereva wako tena," dereva alimjibu.

- | | |
|-----------------------------------------------------------------------------------------------------------------------------------------------------------------------------------------------------------------------------------------------------------------------------------------------------------------------------------------------------------------------------------------------------------------------------------------------------------------------------------------------------------------------------------------------------------------------------------------------------------------------------------------------------------------------------------------------------------------------------------------------------------------------------|---------------------------------------------------------------------------------------------------------------------------------------------------------------------------------------------------------------------------------------------------------------------------------------------------------------------------------------------------------------------------------------------------------------------------------------------------------------------------------------------------------------------------------------------------------------------------------------------------------------------------------------------------------------------------------------------------------------------------------------------------------------------------------------------------------------------------------------|
| <p>41. Tajiri alipata wapi fedha alizonunua matatu?
A. Alikuwa amechukua mkopo
B. Alishinda katika bahati nasibu
C. Aliziokota barabarani
D. Alishiriki wizi</p> <p>42. Mshahara wa dereva na kondakta ulitegemea nini?
A. Kutunza gari vizuri
B. Kuendesha gari kwa utaratibu
C. Safari walizofanya kwa siku
D. Ukaidi wao kwa abiria</p> <p>43. Kwa nini dereva hakuweza kuepukana na ile ajali?
A. alikuwa na usingizi mwingi
B. Alikuwa mlevi chakari
C. Gari lilikuwa na kasoro
D. Alikuwa akiliendesha gari kwa kasi sana</p> <p>44. Lile lori lilikuwa nzito sana kwa sababu _____
A. Lilikuwa limebeba abiria
B. Lilikuwa limebeba mawe
C. Lilikuwa limebeba mchanga
D. Lilikuwa limebeba maiti</p> | <p>45. Ni wasafiri wangapi waliopoteza maisha yao _____
A. Wawili
B. Watatu
C. Wane
D. Watano</p> <p>46. Kipi ni kisawe cha nomino msafiri;
A. Dereva B. abiria
C. kondakta D. tajiri</p> <p>47. Ni nani alimpigia tajiri simu?
A. Polisi B. utingo
C. dereva D. abiria</p> <p>48. Kamilisha methali. Kinga yashinda _____
A. Maradhi B. tiba
C. pesa D. ukatili</p> <p>49. Ni orodha ipi ambayo haina vitate?
A. Kazi, kasi
B. Nchi, inchi
C. Mahari, mahali
D. Ndovu, tembo</p> <p>50. Ni mada gani inayofaa habari ulioisoma ?
A. Tajiri mkatili
B. Dereva na utingo wenye bidii
C. Abiria shupavu
D. Tajiri mwenye utu.</p> |
|-----------------------------------------------------------------------------------------------------------------------------------------------------------------------------------------------------------------------------------------------------------------------------------------------------------------------------------------------------------------------------------------------------------------------------------------------------------------------------------------------------------------------------------------------------------------------------------------------------------------------------------------------------------------------------------------------------------------------------------------------------------------------------|---------------------------------------------------------------------------------------------------------------------------------------------------------------------------------------------------------------------------------------------------------------------------------------------------------------------------------------------------------------------------------------------------------------------------------------------------------------------------------------------------------------------------------------------------------------------------------------------------------------------------------------------------------------------------------------------------------------------------------------------------------------------------------------------------------------------------------------|

**GATUNDU DISTRICT EXAMINATION
STANDARD FIVE – END YEAR 2016
MATHEMATICS**

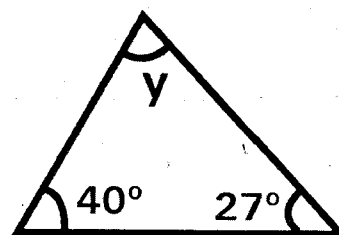
Time: 2 hours

1. Which of the following numbers is three hundred and one thousand and fifty nine.
A. 301059 B. 3159
C. 3001059 D. 301590
2. James added 4869 to 9432 and rounded off the answer to the nearest thousand. What answer did he get?
A. 14301 B. 14300
C. 14000 D. 14310
3. What is the place value of digit 6 in the number 596321?
A. 6000
B. Hundreds
C. Thousands
D. Tens of thousands
4. Find the sum of the next two numbers in the pattern below.
5, 9, 13, 17, _____, _____
A. 21 B. 25
C. 24 D. 46
5. A carton contains 246 bars of soap. How many bars of soap are there in 64 cartons?
A. 15744 B. 310
C. 1984 D. 1476
6. Calculate the perimeter of the rectangle?



- A. 43.4cm B. 60.2cm
C. 41.4cm D. 4.14cm

7. Which of the following numbers is divisible by 6?
A. 194 B. 324
C. 254 D. 148
8. Change $1\frac{3}{4}$ litres into millilitres
A. 175ml B. 17.5ml
C. 17500ml D. 1750ml
9. Calculate the value of angle y in the figure below?

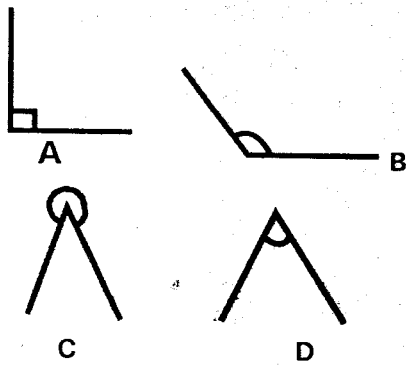


- A. 113° B. 67°
C. 103° D. 180°
10. Njoki was told to subtract $\frac{1}{8}$ from $\frac{1}{7}$. What answer did she get?
A. $\frac{2}{15}$ B. $\frac{15}{56}$
C. $\frac{1}{56}$ D. $\frac{2}{56}$
 11. Simplify $4t + 7d - t + 2d$.
A. $3t + 9d$
B. $5t - 5d$
C. $4t + 9d$
D. $3t - 9d$
 12. What is the G.C.D of 15, 30 and 45?
A. 90 B. 45
C. 30 D. 15
 13. Which of the following is a reflex angle?

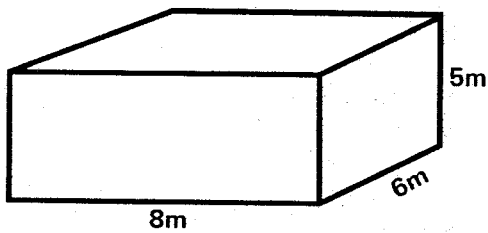


PRINTED BY HIGHFLYER SERIES Tel: 0723 499860

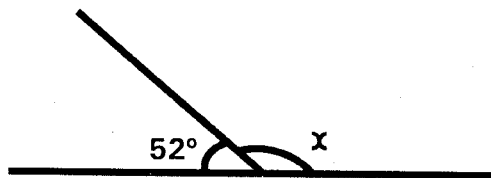
**Funded By: C.D.F Gatundu South Constituency,
Patron: Hon. Moses Kuria, MP Gatundu South**



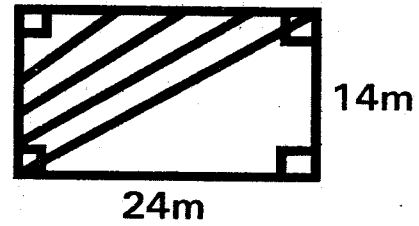
14. A shopkeeper packed 100kg of sugar into $\frac{1}{2}$ kg packets. How many packets did he pack?
 A. 50 B. 200
 C. 100 D. 150
15. What is the volume of the cuboid below



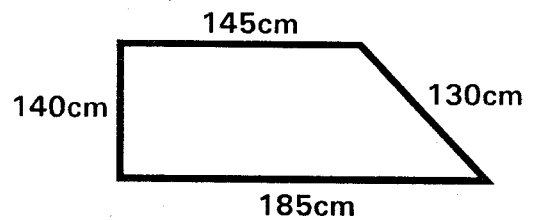
- A. 240m^3
 B. 48m^3
 C. 19m^3
 D. 320m^3
16. If yesterday was Monday when will it be after 16 days?
 A. Tuesday B. Wednesday
 C. Thursday D. Monday
17. What is the size of angle x below?



- A. 128° B. 138°
 C. 148° D. 38°
18. What is three and a quarter multiplied by four?
 A. $12\frac{1}{4}$ B. 12
 C. 3 D. 13
19. What is the area of the shaded part?



- A. 336m^2
 B. 158m^2
 C. 168m^2
 D. 148m^2
20. Change 7405cm into metres and centimetres?
 A. 7m 405cm
 B. 74m 05cm
 C. 740m 5cm
 D. 74m 50cm
21. What is the total value of digit 1 obtained after multiplying 63 by 34?
 A. 1000
 B. 100
 C. 10
 D. Thousandths
22. What is $18 + 12.08 + 9.85$
 A. 38.93
 B. 22.11
 C. 39.83
 D. 39.93
23. What is the perimeter of the figure below in metres



- A. 6 B. 6000
 C. 60 D. 600
24. Work out

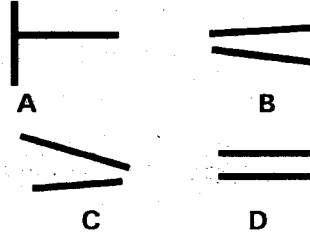
Weeks	days
10	2
-4	6
_____	_____

 A. 6 weeks 4 days
 B. 5 weeks 6 days
 C. 5 weeks 3 days
 D. 6 weeks 3 days

25. What is a sixth of 54?
 A. 7 B. 9
 C. 8 D. 6
26. Arrange the following fractions from the largest to the smallest.
 $\frac{3}{8}, \frac{1}{6}, \frac{3}{4}, \frac{2}{3}$
 A. $\frac{3}{4}, \frac{2}{3}, \frac{3}{8}, \frac{1}{6}$
 B. $\frac{1}{6}, \frac{3}{8}, \frac{2}{3}, \frac{3}{4}$
 C. $\frac{3}{8}, \frac{1}{6}, \frac{3}{4}, \frac{2}{3}$
 D. $\frac{2}{3}, \frac{3}{4}, \frac{1}{6}, \frac{3}{8}$
27. Work out $5 - \frac{2^2}{5}$
 A. $\frac{3^2}{58}$ B. $\frac{3^3}{5}$
 C. $\frac{1^3}{5}$ D. $\frac{2^3}{5}$
28. Work out $23494 \div 49$?
 A. 407 rem 92
 B. 479 rem 23
 C. 379 rem 32
 D. 478 rem 32
29. The distance from Mombasa to Voi is 160km. Jane drove from Mombasa to Voi and back three times. What distance did she travel altogether?
 A. 480km B. 320km
 C. 960km D. 906km
30. Change $8\frac{1}{3}$ hours into minutes?
 A. 500 B. 480
 C. 520 D. 340
31. Work out $6\frac{1}{3} + 1\frac{1}{4} =$
 A. $\frac{7^2}{7}$ B. $6\frac{1}{12}$
 C. $\frac{7^{12}}{7}$ D. $\frac{7^7}{12}$
32. Wanjiku's land is rectangular. It is 125m long and 42m wide. What is its area in square metres?
 A. $5052m^2$ B. $5025m^2$
 C. $5250m^2$ D. $167m^2$
33. Out of the 24 hours in a day. David sleeps for 8 hrs and 45minutes. How long does he remain awake?
 A. 15h 15min
 B. 3hr 15min

- C. 6h 30min
 D. 14h 30min

34. Which of these lines are parallel?



35. Express 0.35 as a fraction in its simplest form?

- A. $\frac{35}{100}$ B. $\frac{5}{20}$
 C. $\frac{7}{20}$ D. $\frac{7}{50}$

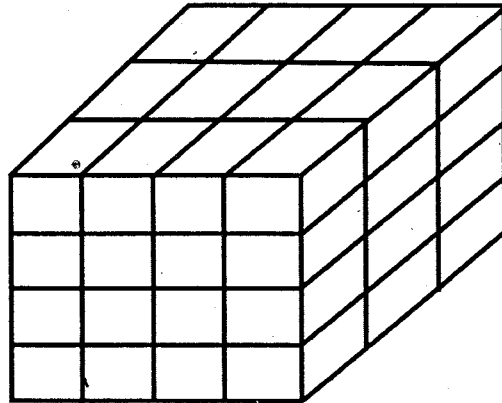
36. What is the area of a square whose sides is 11cm

- A. $121cm^2$ B. $44cm^2$
 C. $22cm^2$ D. $111cm^2$

37. What is the largest possible number that can be made from the digits 6, 1, 8, 5?

- A. 5861 B. 6851
 C. 8561 D. 8651

38. How many cubes are in the stack below



- A. 32 B. 48
 C. 64 D. 60

39. Which of the following is an equivalent fraction of $\frac{4}{7}$?

- A. $\frac{16}{26}$ B. $\frac{8}{11}$
 C. $\frac{12}{21}$ D. $\frac{8}{7}$

40. How many metres are in 0.083km?

- A. 83m
- B. 8.3m
- C. 830m
- D. 8300m

41. The table below shows postal charges for letters?

LETTERS	MASS	CHARGES	
		sh	cts
Limit weight 2 kg	Not over 20g	20	00
	Not over 50g	24	00
	Not over 100g	26	00
	Not over 250g	40	00
	Not over 500g	67	00
	Not over 1kg	107	00
	Not over 2kg	153	00

Juliet posted 2 letters one weighing 460g and the other 750g. How much did Juliet pay for the postage?

- A. 777
- B. 220
- C. 234
- D. 174

42. Work out

$$\begin{array}{r} M \quad \text{cm} \\ 14 \quad 85 \\ \times \quad 7 \\ \hline \end{array}$$

- A. 103m 95cm
- B. 98m 95cm
- C. 93m 95cm
- D. 101cm 95m

43. Wanja collected 253 eggs. She packed the eggs in trays which hold 30 eggs each. How many eggs were required to fill the last tray?

- A. 17
- B. 13
- C. 27
- D. 8

44. A plot was fenced using a barbed wire which was 320m long. If the length of the plot was 100m. What is its width?

- A. 120m
- B. 220m
- C. 60m
- D. 110m

45. Write $4\frac{2}{3}$ as an improper fraction?

- A. $\frac{3}{14}$
- B. $\frac{8}{3}$
- C. $\frac{1}{3}$
- D. $\frac{14}{3}$

46. A road is 40km long on a scale drawing. It is represented by 4cm. what is the scale used?

- A. 1 cm rep 10km
- B. 1 cm rep 20km
- C. 1 cm rep 40km
- D. 1 cm rep 4km

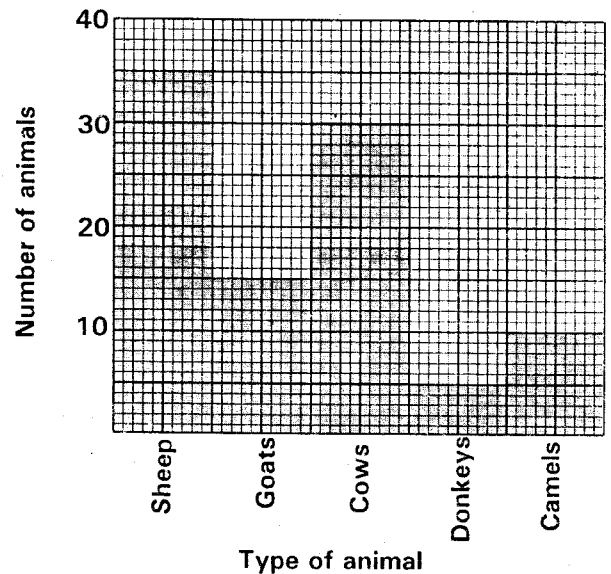
47. What is the L.C.M of 36, 48 and 72?

- A. 12
- B. 144
- C. 414
- D. 48

48. A farmer sells 44 litres of milk everyday. If he sold 1056litres for how many days had he sold the milk?

- A. 34
- B. 28
- C. 24
- D. 26

The bar graph below shows the number of animals in a farm. Use it to answer question 49 to 50.



49. How many more sheep than goats are there in the farm?

- A. 20
- B. 35
- C. 15
- D. 50

50. How many animals are in the farm altogether?

- A. 90
- B. 85
- C. 100
- D. 95

GATUNDU DISTRICT EXAMINATION

STANDARD FIVE – END YEAR 2016

ENGLISH

Time: 1 hour 40 minutes

Fill in the blank spaces 1 to 15 using the best answers from the choices given

It was the last Friday _____ 1 _____ the term. I woke up and immediately _____ 2 _____ what our English teacher had told us. He was _____ 3 _____ to test us on all the work we had _____ 4 _____ that term. I _____ 5 _____ in bed and tried to remember what I had _____ 6 _____ . Although I had _____ 7 _____ hard on my English all through the year I _____ 8 _____ a little scared. When I arrived _____ 9 _____ school, I _____ 10 _____ my friend John, " _____ 11 _____ you ready for the test?" he told me. "I only _____ 12 _____ my English book last night. I'll _____ 13 _____ you after the test." We all _____ 14 _____ into the classroom. I felt as if I _____ 15 _____ butterflies in my stomach.

- | | A | B | C | D |
|-----|------------|---------|----------|-----------|
| 1. | At | off | of | on |
| 2. | Remembered | remind | reminded | forgot |
| 3. | Went | gone | go | going |
| 4. | Did | done | do | does |
| 5. | Lied | lain | lay | laid |
| 6. | Revision | revised | reviced | revisited |
| 7. | Working | works | work | worked |
| 8. | Felt | feel | filled | velt |
| 9. | With | for | at | on |
| 10. | Met | meet | mate | meets |
| 11. | Hare | is | were | are |
| 12. | Open | opened | opens | opening |
| 13. | Told | tell | tells | telling |
| 14. | Go | went | goes | run |
| 15. | Hard | heard | herd | had |

Choose the correct tense in question 16 - 17

16. Grandmother had _____ for a walk.
- | | |
|---------|----------|
| A. Gone | B. going |
| C. went | D. go |
17. He _____ from the roof last week.
- | | |
|----------|-----------|
| A. Falls | B. fallen |
| C. fell | D. felled |

For questions 18 – 19, write the plural of the underlined word

18. The chief has helped the orphans go to school.
- | | |
|------------|-----------|
| A. chiefs | B. chief |
| C. chieves | D. cheifs |
19. The lady has a nice car
- | | |
|------------|-----------|
| A. Ladyes | B. ladys |
| C. ladyies | D. ladies |

PRINTED BY HIGHFLYER SERIES Tel: 0723 499860

**Funded By: C.D.F. Gatundu South Constituency,
Patron Hon. Moses Kuria, Mp Gatundu South.**

For question 20 and 21 choose the OPPOSITE of the underlined word.

20. This man married the beautiful woman

- A. beauty
- B. ugly
- C. hungry
- D. pretty

21. She arrived very early that morning.

- A. latter
- B. punctual
- C. late
- D. later

For questions 22 to 23, choose the correct questions tag.

22. You don't work on Sunday, _____?

- A. don't you?
- B. do you?
- C. does it?
- D. is it?

23. He was feeling hungry, _____?

- A. isn't it
- B. was he?
- C. wasn't I
- D. wasn't he?

For question 24 to 28, choose the correct answer

24. A doctor who performs operation is a

- A. surgeon
- B. dentist
- C. optician
- D. doctor

25. A horse lives in a _____.

- A. fold
- B. kennel
- C. stable
- D. sty

26. He is the _____ man in the village.

- A. wealthiest
- B. wealthy
- C. wealthier
- D. wealthiest

27. Neither John _____ Purity has come.

- A. or
- B. have
- C. has
- D. nor

28. Kibe is as faithful as a _____.

- A. lioness
- B. dog
- C. cat
- D. donkey

For question 29, choose the correct order of adjectives

29. Moses lives in a _____ house.

- A. Large, stone, brown
- B. Brown, large, stone
- C. Large, brown, stone
- D. Stone, large, brown

Change the underlined sentences into passive voice

30. Wanja bought a dress

- A. A dress for Wanja was bought
- B. A dress was bought by Wanja
- C. Wanja was bought
- D. Wanja bought a dress

Read the following passage carefully and then answer questions 31 – 40

Once upon a time, there lived an old woman called Yunny. She lived alone in a small house in Gatundu town. She had a little shop outside her house, where she sold grocery like milk, sugar, tea leaves and salt. She was always kind and nice even though no one knew much about her. In the same estate there lived a little girl called Lucy. She occasionally chatted with Yunny.

One day, Yunny called Lucy and gave her three juicy mangoes. They were very delicious. Lucy thanked her and asked her where she had bought them. Yunny answered, "From my garden. I grow a lot of fresh fruits and vegetables there. Would you like to come and see it?" Lucy had never known that the old woman had a fruit garden. The next afternoon she and her mother went to the little shop and met their friend. Yunny took them down a narrow path until

they reached a small wooden gate. What a beautiful garden and house she had! The old lady took them into the house and they were amazed to see how large and beautiful decorated her house was. Yunny took them round the garden full of ripe and juicy fruits.

What a wonderful garden it was! She grew mangoes, oranges, bananas, guavas and apples in plenty. There were rows and rows of cabbage and sukuma wiki and beans. There were green and healthy mango trees, avocado trees and guava trees. There were also vegetables of all kinds. There were even some vegetables that Lucy was amazed at how much this old woman had been doing and so silently, without showing off. Little Lucy learnt an important lesson that you can do things without showing off.

31. A person who sells grocery is a grocer. What do we call a person who sells meat?
- A. Butchery
 - B. Meater
 - C. Grocer
 - D. Butcher
32. The word occasionally as used in paragraph one means _____.
- A. sometimes
 - B. rarely
 - C. hardly
 - D. always
33. The old woman cannot be described as _____.
- A. generous
 - B. kind
 - C. mean
 - D. good
34. What did the old woman give the young girl? juicy
- A. Ripe mangoes
 - B. Juicy oranges
 - C. Three juicy bananas
 - D. Three ~~ripe~~ juicy mangoes
35. The three followed a _____.
- A. Narrow wide path
 - B. Shallow road
 - C. A narrow road
 - D. A wide path
36. took them round the garden..... as used in the passage means that _____.
- A. showed them her garden
 - B. the garden was round
 - C. showed them the garden quickly
 - D. the moved in circles
37. Which of the following is not mentioned in the passage?
- A. Guava
 - B. Apple
 - C. Plum
 - D. Banana
38. Yunny's vegetables were _____.
- A. both fresh and green
 - B. neither green nor fresh
 - C. either fresh or green
 - D. green or fresh
39. The expression "showing off" in the passage means _____.
- A. shouting
 - B. arguing
 - C. sharing
 - D. boasting
40. Which is the best title for this story?
- A. Growing fruits and vegetables in the world
 - B. A little girl learns a lesson
 - C. How to grow well
 - D. Chepkurui

Read the passage below then answer the questions 41 - 50

ALEX KOGI,
P.O. BOX 6024,
NANYUKI.
26/9/2016

Dear Mum,

I salute you most sincerely and thank you for the letter I got Yesterday. Learning is very hard but I am doing my best to excel.

I am grateful for the money you sent me to buy the books I had requested. My teacher told me you sent her the money by Mpesa surely mum you are the best and that is why I will always praise you.

Please tell Daddy that I am still waiting for the jacket he promised as it sometimes becomes very cold here. This time I was position six in my class and the teacher says I am progressing well and says I will do well in class six next year.

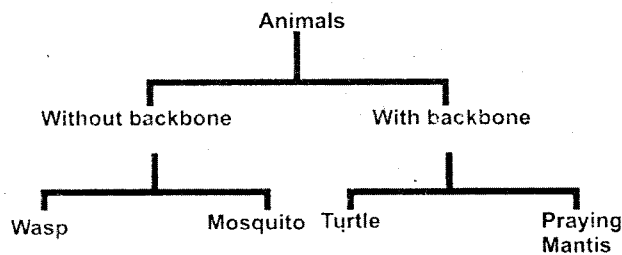
Give my best regards to everyone and send me a few necessities. I love you mum. Bye for now.

41. The letter was written in _____ term.
A. first B. second
C. third D. not said
42. We can conclude that the writer is a _____
A. teacher
B. pupil
C. parent
D. doctor
43. What class is the writer?
A. Six B. Seven
C. Four D. Five
44. The writer wanted to be brought for _____
A. jacket
B. books
C. food
D. money
45. When did the writer receive the letter?
On _____
A. 26th September
B. 27th September
C. 25th September
D. Yesterday
46. According to the letter, whom do you think the writer loves most?
- A. mother
B. father
C. sister
D. brother
47. How did the writer get the money sent to him?
A. By post office
B. By money order
C. By neighbour
D. My Mpesa
48. What has the writer requested at the end of the letter?
A. Snacks
B. A few necessities
C. Juice
D. Jacket
49. It is true that _____
A. The writer is performing poorly
B. Didn't write the letter
C. Is performing well
D. Hates school
50. The above letter is called a _____ letter.
A. school B. formal
C. business D. friendly

GATUNDU DISTRICT EXAMINATION STANDARD FIVE END YEAR - 2016 SCIENCE

Time: 1 hour 40 Min

1. A pupil classified some animals as shown in the table below.



Which of the animals was not correctly classified? _____.

- A. praying mantis
- B. wasp
- C. turtle
- D. mosquito


2. Which one of the following statements about birds is true?
_____.

- A. They have fins
- B. They are warm-blooded
- C. They live partly in water and partly on land
- D. They are cold-blooded

3. Which one of the following statements about insects is NOT CORRECT? _____.

- A. Breathe through spiracles
- B. Have internal skeleton
- C. Have compound eyes
- D. Have wings

4. The type of tooth drawn below is used in _____.



- A. Cutting and biting
- B. Tearing and holding
- C. Chewing and grinding
- D. Tearing and crushing

5. In which part of the alimentary canal does food mix with bile? _____.

- A. Stomach
- B. Rectum
- C. Duodenum
- D. Ileum

PRINTED BY HIGHFLYER SERIES Tel: 0723 499860

Funded By: C.D.F Gatundu South Constituency

Patron: Hon. Moses Kuria, MP Gatundu South

6. Which of the following organs is NOT involved in breathing? _____.

- A. Diaphragm
- B. Bronchioles
- C. Oesophagus
- D. Wind pipe

7. Animals move by various ways. Which animal below is **WRONGLY** matched with its movement? _____

- A. Snake - slithering
- B. Birds - flying
- C. Centipede - crawling
- D. Dog - hopping

8. Three of the following are vertebrates. Which one is NOT?

- A. Birds
- B. Reptiles
- C. Insects
- D. Mammals

9. Which of the following shows the correct order of change of state? _____.

- A. Solid → gas → liquid
- B. Solid → liquid → gas
- C. Gas → solid → liquid
- D. Liquid → solid → gas

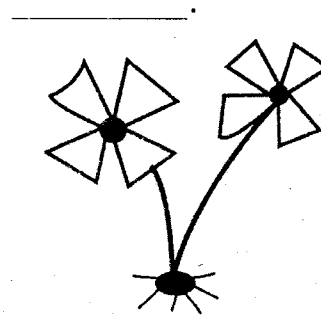
10. Which of the following groups contains floaters only? _____.

- A. Feathers, maize seeds, sand
- B. Paper, plastic, cork

C. Metals, glass, coins

D. Piece of wood, pieces of cloth, piece of wire.

11. Identify the type of weed below.



- A. Sodom apple
- B. Oxalis
- C. Black jack
- D. Wandering-jew.

12. Plants that are grown for sale are called _____.

- A. Oil crops
- B. Fibre crops
- C. Food crops
- D. Cash crops

13. Which one of the following is a non-flowering plant? _____.

- A. Mould
- B. Maize
- C. Bean
- D. mango

14. Digestion of food begins in the _____.

- A. Oesophagus
- B. Stomach

C. Small intestines

D. mouth

15. Which teeth are at the front of the mouth?

A. Incisors

B. Premolars

C. Molars

D. Canines

16. Chemicals that are used to control weeds on the farm are known as _____.

A. Insecticides

B. Pesticides

C. Sprays

D. Herbicides

17. The green colouring matter in plants is called _____.

A. Bile

B. Chlorophyll

C. Algae

D. Fungus

18. Temperature is measured using a _____.

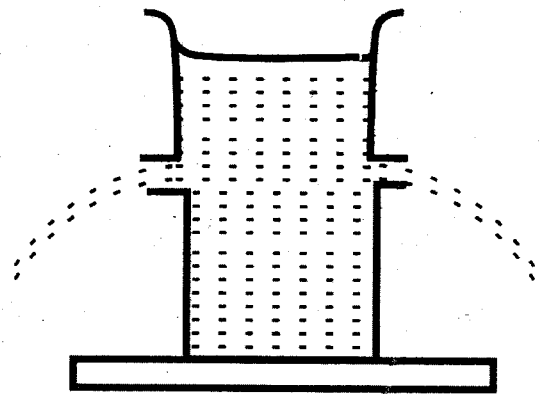
A. Thermometer

B. Insulator

C. Conductor

D. Mercury

19. The diagram below shows that _____.



A. Pressure in liquids depend on depth

B. Liquids exert pressure equally in all directions

C. Liquids exert pressure equally at the same depth

D. Liquids expand on heating

20. The degree of hotness or coldness of a body or an object is called its _____.

A. Mass

B. Volume

C. Weight

D. temperature

21. Which one of the following is NOT a gas? _____.

A. Ice

B. Air

C. Smoke

D. Steam

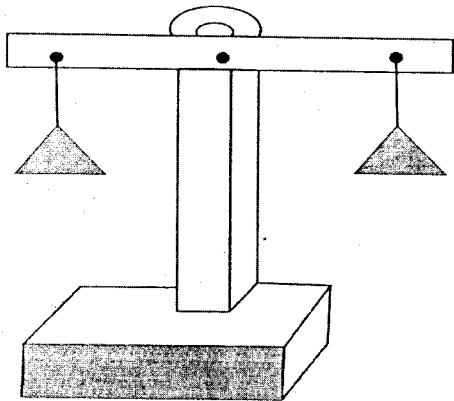
22. The first step in making a beam balance is to _____.

A. Fix the arm to the stand

B. Make a hole on the arm

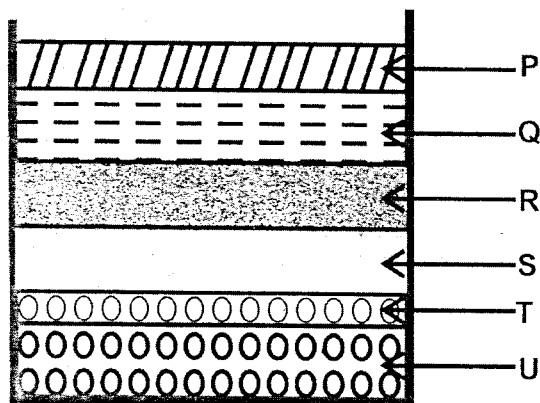
- C. Use the wire or string to hang the tines
- D. Make the base, stand and the arm

23. The diagram below is used when measuring _____.



- A. Weight
- B. Mass
- C. Density
- D. Volume

24. Use the diagram below to answer question _____.



The experiment above show the _____.

- A. Properties of soil
- B. Soil mixture
- C. Composition of soil
- D. Soil layers


25. Which one of the following about soil is not true?

- A. Loam is the best soil for farming
- B. Clay soil has a smooth feeling
- C. Sand soil cannot be used for modeling
- D. Sand soil has very fine particles

26. _____ is the rotting of dead plants and animals in the soil.

- A. Mineral salts
- B. Living organisms
- C. Decaying
- D. Organic matter

27. The following statements are false about the tool shown below except one. Which one? _____.



- A. It should be oiled or greased
- B. It is sharpened using a file.
- C. It has a movable part
- D. It is used for opening soda

28. Instead of a file, what else can be used to sharpen a panga? _____.

- A. Paper
- B. Charcoal
- C. Sharpening stone
- D. Oil

29. Which one of the following tools does not require sharpening as a maintenance practice? _____.

- A. A panga
- B. An axe
- C. A saw
- D. A hammer

30. The following materials were collected by some pupils in order to make a certain tool.

- (i) A long pole
- (ii) A panga
- (iii) A Y-shaped trunk.

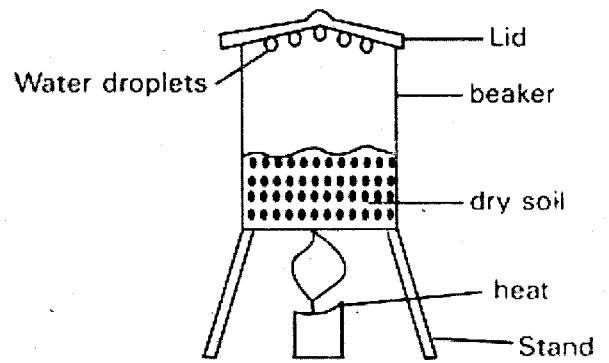
The materials were used to make a _____.

- A. See-saw
- B. Beam balance
- C. Spring balance
- D. Weighing balance

31. The HIV is transmitted by a strong virus which _____.

- A. Feed on body organs
- B. Weaken the body's defense system
- C. Can be dissolved by medicine
- D. Sucks blood of the body

32. The standard five pupils set an experiment below. What were they investigating? _____.



- A. Air in the soil
- B. Water in the soil
- C. Drainage in the soil
- D. Capillarity in the soil

33. Which of the following groups of food have same nutrients?

- A. Pork, maize, egg
- B. Spinach, bread, kales
- C. Beans, eggs, pork
- D. Ugali, kale, meat

34. H.I.V patient had the following symptoms.

- (i) looks normal and healthy.
- (ii) He/she can infect others.
- (iii) He/she tested negative

The stage that the patient was _____.

- A. Symptomatic stage
- B. Incubation stage
- C. Window stage
- D. Full blown stage

35. Which type of soil is mixed with cement?

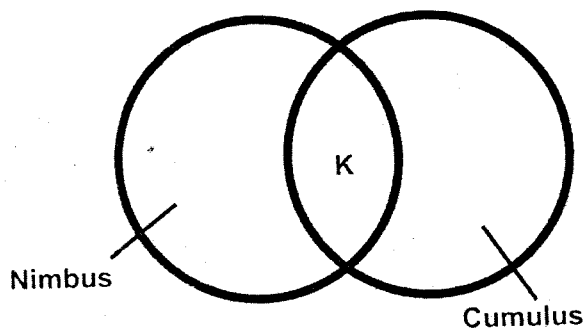
- A. Clay
- B. Loam

- C. Mixture of clay and sand
- D. Sand

36. Yams, green bananas and cooking fat provide the body with _____.

- A. Protein
- B. Energy
- C. Minerals
- D. Vitamins

37. A Std 4 pupil listed characteristics of nimbus and cumulus clouds. Which characteristic fitted at point K?



- A. Flat base
- B. Mountainous in shape
- C. White
- D. Thick feathery

38. Which one of the following is not considered when classifying clouds?

- A. Size
- B. Height
- C. Appearance
- D. Shape

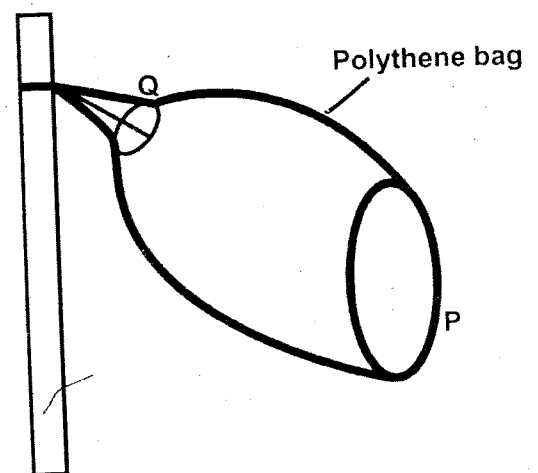
39. Which one of the following statement is correct? _____.

- A. Very bright light is good for our eyes
- B. Light enables people to fall on objects
- C. Seeds can germinate without light
- D. Pests like well-lit houses.

40. One of the following requires heat, which one? _____.

- A. Warming food
- B. Seeing clearly
- C. Taking photographs
- D. Making food in plants

41. The diagram below shows a windsock.



What was the mistake made in the construction of the weather instrument shown in the diagram.

- A. Using a wire to make end P
- B. End Q was narrower than end P
- C. Using a wooden pole
- D. Using a polythene bag to make the sock

42. A std 5 pupils carried out an activity on convection in liquids using the materials below.

- (i) Water
- (ii) Glass container
- (iii) Pieces of polythene paper

Which material did the pupil lack?

- A. Source of heat
- B. Wax
- C. Metal rod
- D. Pins


43. Doing an activity for enjoyment is called _____.

- A. Irrigation
- B. Surfing
- C. Recreation
- D. Swimming

44. Irrigation is _____.

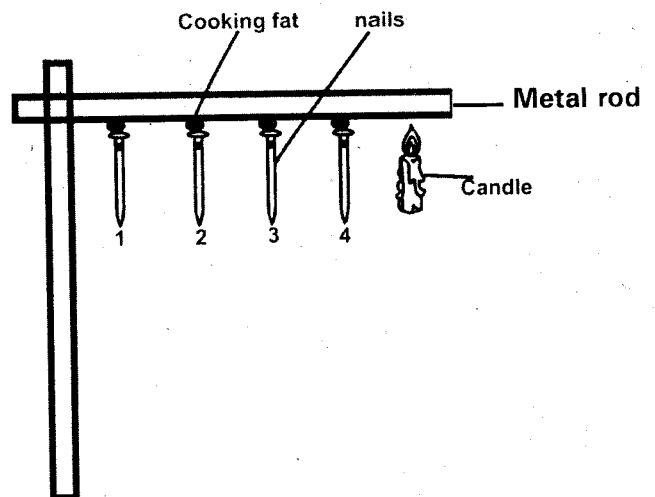
- A. Keeping animals in water
- B. Supplying water to crops
- C. Use of water in recreation
- D. Use of water for transport

45. The diagram below is used for _____.



- A. Storing water for domestic use
- B. Carrying goods to the market
- C. Cooking ugali
- D. Bathing

46. Study the diagram below:



Which pin was the last to fall?

- A. 1
- B. 3
- C. 2
- D. 4

47. A std 5 pupil was blind folded and asked to listen to a bell rang from different positions. Which aspect of

sound was being investigated?

- _____.
- A. Loud and soft sound
 - B. Noise pollution
 - C. Direction of sound
 - D. Special sounds

48. In which of the following places is there likely to be no noise?

- _____.
- A. Market
 - B. In hospitals
 - C. At matatu stage
 - D. In factories

49. Which of these is not the use of water in the industry?

- _____.
- A. Generating power
 - B. Cooling moving parts of engine
 - C. Cleaning farm tools
 - D. Washing machine

50. Which of the following statements is not true about the use of water?

- _____.
- A. Water helps cool industrial machines
 - B. Water add chemicals to industrial waste
 - C. Water is used to transport goods
 - D. Water is used for recreation

GATUNDU DISTRICT EXAMINATION
STANDARD FIVE – TERM III - 2016

MARKING SCHEME

ENGLISH	KISWAHILI	MATHS	SCIENCE	SOCIAL STUDIES	
1. C	1. C	1. A	1. A	1. A	51. D
2. A	2. B	2. C	2. B	2. C	52. A
3. D	3. D	3. C	3. B	3. C	53. B
4. B	4. A	4. D	4. C	4. D	54. C
5. C	5. A	5. A	5. C	5. A	55. C
6. B	6. D	6. C	6. C	6. C	56. B
7. D	7. B	7. B	7. D	7. B	57. D
8. A	8. B	8. D	8. C	8. B	58. D
9. C	9. C	9. A	9. B	9. C	59. B
10. A	10. B	10. C	10. B	10. A	60. A
11. D	11. C	11. A	11. B	11. C	
12. B	12. D	12. D	12. D	12. A	
13. B	13. A	13. C	13. A	13. A	
14. B	14. C	14. B	14. D	14. D	C.R.E
15. D	15. A	15. A	15. A	15. B	61. A
16. A	16. A	16. C	16. D	16. D	62. C
17. C	17. D	17. A	17. B	17. D	63. B
18. A	18. B	18. D	18. A	18. A	64. A
19. D	19. C	19. C	19. C	19. D	65. C
20. B	20. B	20. B	20. D	20. B	66. C
21. C	21. C	21. B	21. A	21. A	67. C
22. B	22. D	22. D	22. D	22. B	68. D
23. D	23. A	23. A	23. B	23. C	69. C
24. A	24. B	24. C	24. C	24. A	70. D
25. C	25. C	25. B	25. D	25. D	71. A
26. A	26. A	26. A	26. C	26. D	72. B
27. D	27. D	27. D	27. B	27. B	73. C
28. B	28. B	28. B	28. C	28. B	74. C
29. C	29. C	29. C	29. D	29. C	75. C
30. B	30. A	30. A	30. A	30. C	76. A
31. D	31. C	31. D	31. B	31. A	77. A
32. A	32. A	32. C	32. B	32. C	78. A
33. C	33. D	33. A	33. C	33. B	79. A
34. B	34. B	34. D	34. C	34. D	80. C
35. C	35. A	35. C	35. D	35. A	81. C
36. A	36. B	36. A	36. B	36. D	82. D
37. C	37. C	37. D	37. B	37. B	83. C
38. A	38. D	38. B	38. A	38. A	84. D
39. D	39. B	39. C	39. C	39. C	85. C
40. B	40. C	40. A	40. A	40. B	86. D
41. C	41. B	41. D	41. B	41. C	87. B
42. B	42. C	42. A	42. A	42. A	88. B
43. D	43. D	43. A	43. C	43. C	89. D
44. A	44. C	44. C	44. B	44. B	90. C
45. C	45. B	45. D	45. A	45. D	
46. A	46. B	46. A	46. A	46. D	
47. D	47. C	47. B	47. C	47. A	
48. B	48. B	48. C	48. B	48. C	
49. C	49. D	49. A	49. C	49. D	
50. D	50. A	50. D	50. B	50. B	