

TARGETER WINGS EVALUATION TEST

STANDARD THREE - YEAR 2016

MATHEMATICS



008

Date:

NAME SCHOOL

1. weeks days
 3 4
 + 2 2

2. weeks days
 2 3
 + 1 6

3. weeks days
 4 6
 - 2 3

4. 2litres = _____ half litres.

5. 2weeks = _____ days.

6. shs cts
 14 50
 +23 50

7. shs cts
 24 50
 + 3 30

Price list

book - sh. 30
 pencil - sh. 15
 rubber - sh. 10

8. 4 books will cost shs. _____

9. Mary bought 2 rubbers, one pencil and an exercise book. How much did she pay? _____

10. 10m x 2 = _____

11. 50m ÷ 5 = _____

12. 96kg - 16kg = _____

13. 29 + 6 = _____

14. 34 + 5 + 12 = _____

15. 508
 + 177

16. Add 2220 to 89 =

17. Write in words 702 = _____

18. Take away 28 from 97 = _____

19. A quarter of 44 = _____

20. Which is bigger? $\frac{1}{4}$ or $\frac{1}{8}$

21. Expand 462 = _____ + _____ + _____

22. 8 hundreds 4 tens 1 ones = _____


23. 4 thousands 7 hundreds 3 tens 5 ones = _____

What is the place value of 6 in

24. 6430 = _____

25. $69 = \underline{\hspace{2cm}}$

26. What fraction is unshaded?



= $\underline{\hspace{2cm}}$

27. $\square \times 3 = 9$

28. $\square \div 4 = 4$

29. $18 - \square = 9$

30. $\square + 43 = 60$

31. $\frac{1}{8}$ of 32 = $\underline{\hspace{2cm}}$

32. 3 cows have $\underline{\hspace{2cm}}$ legs.

33. Subtract 35 from 85 = $\underline{\hspace{2cm}}$

34.
$$\begin{array}{r} 79 \\ -33 \\ \hline \end{array}$$

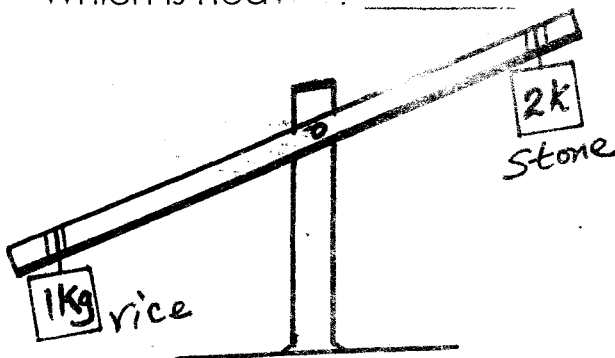
35.
$$\begin{array}{r} 896 \\ -478 \\ \hline \end{array}$$

36. Mary Susan Jane

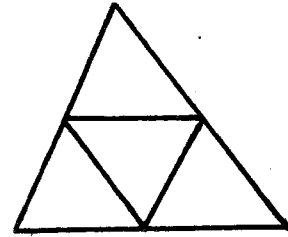
82 76 69

Who was in the 3rd position?
? $\underline{\hspace{2cm}}$

37. Which is heavier? $\underline{\hspace{2cm}}$



38. How many triangles are in this figure? $\underline{\hspace{2cm}}$



39. $10 \times 0 = \underline{\hspace{2cm}}$

40. $9 \times 1 = \underline{\hspace{2cm}}$

Write in symbols

41. Five hundred and seventy eight
 $\underline{\hspace{2cm}}$

42. $\frac{2}{8} + \frac{6}{8} =$

43. Which is the same as a whole?

44. Three boys have $\underline{\hspace{2cm}}$ heads.

45. 15 litres - 8 litres = $\underline{\hspace{2cm}}$

46. This is a $\underline{\hspace{2cm}}$ line.



47. Multiply 8 by 6 = $\underline{\hspace{2cm}}$

48. Draw a star

49. 5 eighths + 3 eighths = $\underline{\hspace{2cm}}$

50. $\frac{1}{2}$ hour = $\underline{\hspace{2cm}}$ minutes.

TARGETER WINGS JARIBIO LA MTHANI



DARASA LA TATU - MWAKA 2016

008

KISWAHILI

Tarehe:

JINA SHULE

Andika kwa wakati timilifu (me)

1. Sisi tulicheza

2. Yeye alicheka

3. Wao watalima

4. Mimi nitashinda

5. Yeye anasoma

Chagua jibu sahihi

6. Shati hili ni _____
(mpya, jipya)
7. Mbuzi huyu ni _____
(ndogo, mdogo)
8. Ukuta huu ni _____
(mrefu, refu)
9. Kisu hiki ni _____
(kali, kikali)

10. Ng'ombe huyu ni _____
(mnene, mnono)

Kanusha sentensi hizi

11. Mama atapika

12. Anaandika barua

13. Miti inapandwa

14. Ndege anaruka

15. Moto unawaka

Andika kwa nambari

16. Mia tano na thelathini

17. Mia saba _____
18. Mia moja sabini na tisa

19. Mia nane na themanini

20. Mia tatu na tatu _____

Jaza pengo

21. M ___ sw ___ l ___

22. Alf ___ j ___ r ___

23. Th ___ l ___ th ___ n ___

24. H ___ m ___ l ___

25. K ___ r ___ nj ___

Kamilisha vitendawili

26. Mama nieleke _____

27. Fatuma mchafu _____

28. Nanywa supu nyama
naitupa _____

29. Mzee mwenye mishale

30. Kombe la Sultan li wazi

Chagua jibu sahihi hili, hiki, hii, huyu, au huu.

31. Mtoto _____ ni mfupi.

32. Kiatu _____ kimeraruka.

33. Miti _____ imekatwa.

34. Tunda _____ limeoza.

35. Ukuta _____ umebomoka.

Tumia 'nani' au 'gani'

36. Unaitwa _____?

37. Unataka kitabu _____?

38. Unataka nini _____?

39. Unataka kisu _____?

40. Mnaishi na _____?

Tumia -enu

41. Gari _____

42. Kiti _____

43. Maji _____

44. Mwalimu _____

45. Nyumba _____

Andika kwa umoja

46. Mipira _____

47. Maji _____

48. Vyura _____

49. Vipande _____

50. Vyakula _____

TARGETER WINGS EVALUATION TEST

STANDARD THREE - YEAR 2016

ENGLISH

008



Date:

NAME SCHOOL

Use 'a' or 'an'

1. Help me with _____ pen.
2. Mary ate _____ egg.
3. His father is _____ engineer.
4. This is _____ church.
5. She ate _____ orange and _____ mango.

Use 'has' or 'have'

6. They _____ a big house.
7. She _____ a good bag.
8. The girl _____ long hair.
9. The clock _____ two hands.
10. I _____ a new dress.

Use 'this' or 'these'

11. _____ is my pen.
12. _____ animals are grazing.

13. _____ is our teacher.
14. _____ bag belongs to her.
15. _____ are our clothes.

Write the plurals

16. Goose _____
17. Fox _____
18. Child _____
19. Mouse _____
20. Church _____

Write the past tense

21. Take _____
22. Stand _____
23. Start _____
24. Sell _____
25. Teach _____

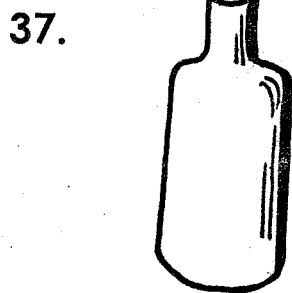
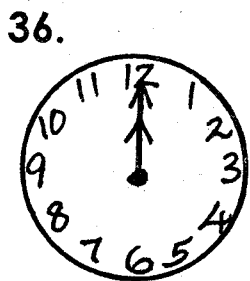
Write two separate words

- 26. Milkman = _____ + _____
- 27. Headteacher = _____ + _____
- 28. Bedroom = _____ + _____
- 29. Cupboard = _____ + _____
- 30. Classroom = _____ + _____


Use 'some' or 'any'

- 31. Give me _____ water.
- 32. Is there _____ thing for me?
- 33. Is there _____ sugar left?
- 34. Give _____ of the money to her.
- 35. He doesn't want _____ food.

Name the pictures



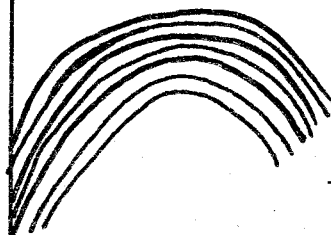
38.



39.



40.



Use 'was', 'is' or 'were'

- 41. The cat _____ in the basket.
- 42. They _____ dancing well.
- 43. There _____ many people in the church.
- 44. The house _____ dirty.
- 45. The baby _____ crying.

Use 'am' or 'are'

- 46. This chair _____ broken.
- 47. I _____ going to work.
- 48. She _____ my sister.
- 49. We _____ late for school.
- 50. Those _____ good girls.

TARGETER WINGS EVALUATION TEST

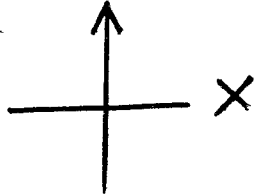
STANDARD THREE - YEAR 2016

SOCIAL STUDIES / C.R.E




Date:

NAME SCHOOL

1. This is a _____ 
- (cross, arrow, compass)
2. The point marked X is _____
(North, East, West)
3. The sun sets in the _____
(South, East, West)
4. Too much rain causes _____
(drought, floods, famine)
5. Things that make up weather are called _____ of weather.
(season, climate, elements)
6. People who kill wild animals are called _____
(killers, hunters, poachers)

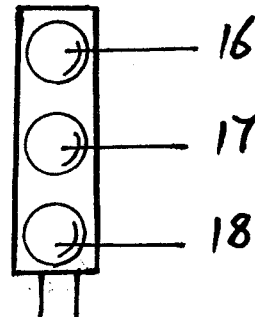
Name these features



10. Animals kept at home are called _____ animals.
(wild, home, domestic)

11. _____ is the head of a location.
(Chief, D.C, D.O)
12. _____ is the smallest administrative unit.
(Location, Village, Division)
13. Rivers that have water throughout the year are called _____ rivers.
(forever, permanent, seasonal)
14. We wear _____ clothes when it is cold.
(heavy, light, vest)
15. A nuclear family has father, mother and _____
(children, nephew, cousin)

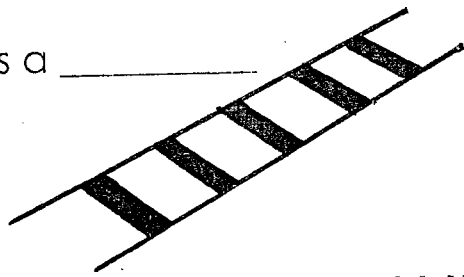
Name the colours of the traffic lights.



16. _____
17. _____
18. _____

19. People who come to see wild animals are called _____
(tourists, visitors, strangers)
20. _____ is a cash crop.
(Coffee, Maize, Potatoes)

21. This is a _____



(zebra crossing, traffic lights)

22. Ships sail on _____

(air, sand, water)

23. People are happy in a _____ ceremony.

(wedding, funeral, burial)

24. _____ arrest criminals.

(Policemen, Pastor, D.C)

25. We celebrate Madaraka day on _____ June.

(1st, 12th, 25th)

26. People walking along the road are called _____

(passengers, pedestrian, strangers)

27. People we do not know are called _____

(strangers, friends, enemies)

28. People living near lake are likely to be _____

(teachers, fishermen, sweepers)

29. _____ is used for making baskets and mats.

(Sisal, Reeds, Roots)

30. We go to school for _____ days. (5, 6, 4)

C.R.E

31. The disciples received the Holy Spirit on the day of _____

(pentecost, receiving, worship)

32. Children should _____ their parents.

(obey, fight, abuse)

33. We should help the _____

(rich, needy, children)

34. Christians worship in the _____ (temple, mosques, church)

35. The disciples were _____ when Jesus left them.

(serious, sad, happy)

36. Jesus Christ promised his disciples a _____ before going to heaven.

(helper, friend, food)

37. _____ is accepting others the way they are.

(Forgiving, Tolerance, Love)

38. _____ is the greatest commandment.

(Joy, Love, Peace)

39. King Ahab took _____ vineyard.

(Jacob, Joseph, Naboth's)

40. King Ahab's wife was called _____

(Sarah, Elizabeth, Jezebel)

41. _____ was sold by his brothers.

(John, Joseph, Peter)

42. Jacob had _____ sons.

(11, 12, 10)

43. Our first parents were Adam and _____

(Sarah, Mary, Eve)

44. _____ saw a burning bush.

(Moses, Abraham, Joseph)

45. Jesus healed _____ lepers.

(12, 10, 9)

46. Jesus was crucified at a place called _____

(Golgotha, Nazareth, Calvary)

47. _____ was swallowed by a big fish. (Jonah, Judas, John)

48. _____ baptised Jesus.

(James, John, Jacob)

49. When Jesus was being baptised the holy spirit came in form of a _____ (cat, dove, rat)

50. A _____ saves us from our sins.

(God, Adam, Satan)

TARGETER WINGS EVALUATION TEST

STANDARD THREE - YEAR 2016

SCIENCE




008

Date:


NAME SCHOOL

Name the following animals with the way they protect themselves

- | Animal | Way of protection |
|---------------------------------------|-----------------------------------|
| 1. Bees | Hide in shells. |
| 2. Rats | Coiling. |
| 3. Snail | Stinging. |
| 4. Millipede | Running away. |
| 5. Cleanliness rules are called _____ | |
| | (washing, hygiene, care) |
| 6. _____ cause diseases. | |
| | (Animals, Medicine, Germs) |
| 7. _____ can be eaten raw. | |
| | (Meat, Carrots, Beans) |
| 8. This animal lives in _____ | |



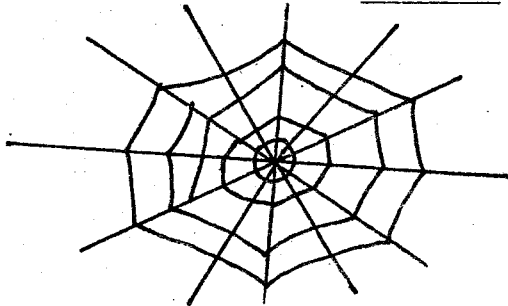
9. A fish moves by _____
(water, land, trees)
(walking, swimming, flying)
10. A tick has _____ legs.
(6, 7, 8)
11. This shows that there is _____ in the soil.



(water, bubbles, air)

12. _____ has air in it.
(Water, Combs, Pencil)
13. A _____ is used to climb a tree.
(hammer, ladder, crowbar)
14. We use _____ to split wood easily.
(an axe, a panga, a spade)
15. _____ things do not reflect light.
(shiny, dull, smooth)
16. A bee protects itself by _____
(biting, stinging, singing)
17. Camels and _____ can be used to transport water.
(donkeys, sheep, rabbits)
18. _____ soil has large particles.
(Loam, Sand, Clay)
19. We model easily using _____ soil. **(wet, dry, all)**
20. Which type of soil can make the longest ribbons _____
(clay, sandy, loam)
21. We must wash our hands with water and _____ before eating. **(soil, oil, soap)**
22. I should not _____ when I have food in the mouth.
(chew, talk, grind)
23. Food should be _____ well, before swallowing.
(coughing, chewed, transported)

24. _____ is a source of water.
(Tap, Pipe, Rain)
25. Animals kept at home are called _____ animals.
(domestic, wild, sheltered)
26. Farmers plough their farms during _____ season.
(dry, rainy, windy)
27. This is a house of a _____



- (pig, spider, bee)
28. Light travels in a _____ line.
(straight, corner, bend)
29. _____ is the main source of light.
(torch, moon, sun)
30. This is a _____



- (torch, lamp, candle)
31. The bouncing back of light is called _____
(reflection, light, wall)
32. Sound travels in _____ direction.
(one, all, no)
33. This is a source of _____



(light, sound, air)

Match these special sounds with their meaning

- | Special sound | Meaning |
|---|--|
| 34. A dog barking | A building is on fire. |
| 35. A church bell ringing | There is fear or pain. |
| 36. Siren of an ambulance | A stranger is in the compound. |
| 37. Siren of a fire engine | Service to begin. |
| 38. People screaming | A sick person being taken to hospital. |
| 39. _____ plant provides us with medicine.
(Acacia, Maize, Neem) | |
| 40. A blind man has no sense of _____
(hearing, smell, sight) | |
| 41. _____ is the ability to see.
(Sight, Smelling, Hearing) | |
| 42. Plants grow when it _____
(shines, rains, snows) | |
| 43. Raw food should be _____ before eating.
(harvested, cleaned, stored) | |
| 44. A _____ is a small animal.
(cow, flea, hen) | |
| 45. A rainbow has _____ colours.
(6, 7, 9) | |
| 46. _____ is not a personal item.
(Socks, Comb, Soap) | |
| 47. A _____ is a harmful animal.
(Snake, Cat, Donky) | |
| 48. We put on light clothes when the weather is _____
(cold, rainy, hot) | |
| 49. A seed grows into a _____
(fruit, seedling, root) | |
| 50. We take medicines when we are _____
(sleepy, hungry, sick) | |

TARGETER WINGS EVALUATION TEST

STANDARD THREE - YEAR 2016

READING / KUSOMA

008



Date:

NAME SCHOOL

READING

1. Read these words

- | | | | |
|------------|-----------|--------------|--------------|
| 1. Wearing | 6. Share | 11. Soon | 16. Rubbish |
| 2. Gloves | 7. Hammer | 12. Together | 17. Broom |
| 3. Reader | 8. Know | 13. Pound | 18. Dirty |
| 4. Driver | 9. Shine | 14. Ground | 19. Blowing |
| 5. Leader | 10. Rush | 15. Mouse | 20. Response |

2. Read these sentences.

21. The wind was blowing the trees.
22. Pam was standing reading her book.
23. The farmer will cut the grass.
24. We will miss playing in the rain.
25. The song was very long.

KUSOMA

1. Soma maneno haya.

- | | | | |
|---------------|-------------|--------------|--------------|
| 1. Barua | 6. Huathiri | 11. Nadhifu | 16. Uhuru |
| 2. Kabambe | 7. Liffi | 12. Shughuli | 17. Woga |
| 3. Jawabu | 8. Mhunzi | 13. Upele | 18. Umbo |
| 4. Changamoto | 9. Mawaidha | 14. Viumbe | 19. Stadi |
| 5. Gramu | 10. Maradhi | 15. Waridi | 20. Samawati |

2. Soma sentensi hizi.

21. Huu ndio mwisho wa hadithi.
22. Talia ni adui yangu.
23. Kompyuta hii ni yangu.
24. Tarakilishi hizi ni zetu.
25. Simu ya rununu iko juu ya meza.