



[3]
008

TOP RANK SERIES STANDARD THREE YEAR 2016

SOCIAL STUDIES & C.R.E

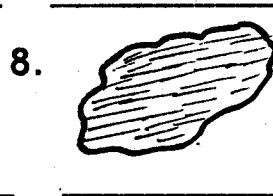

NAME: _____

SCHOOL: _____

DATE: _____

- We celebrate _____ day on 12th December.
(Jamhuri, Madaraka, Mashujaa)
- The national anthem has _____ stanzas. (1, 2, 3)
- _____ are people who keep animals and grow crops.
(farmers, poachers)
- The head of a village is called _____
(chief, sub-chief, elder)

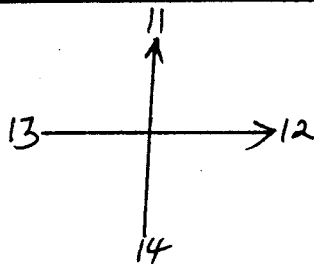
Name the physical features



(lake, river, valley, hill)

- We should cross the road on the _____
(zebra crossing, corner, junction)
- Long ago who taught the children?
(grandparents, teachers)

Name the compass directions



- _____
- _____
- _____
- _____

(North, South, East, West)

- A doctor who treats animals when sick is called a _____
(optician, dentist, veterinary)
- We should always _____
(cut trees, plant trees, uproot trees)
- Cows give us milk and _____
(pork, bacon, beef)
- We _____ crops during the dry season. (weed, irrigate, dig)
- Who is the head of a school?
_____ (headteacher, prefect)
- Who among the following is not a member of the nuclear family?
_____ (grandparents, uncles, father)
- The sun rises in the _____ and sets in the 22. _____
(East, West, North, South)
- People who come to our country to see wild animals are _____
(neighbours, tourists, strangers)

24.



This is a _____
(hut, manyatta)

25. The walls of this house are made of _____ (mud, glass, grass)

26. Many trees growing together make a _____ (forest, bush, ranch)

27. The national anthem is sang in _____ languages. (2, 3, 1)

28. All children should _____ (go to school, fight)

29. People we don't know are called _____ (strangers, visitors, tourists)

30.  This is a _____ (bridge, zebra crossing, road)
C.R.E

31. Jesus had _____ disciples. (10, 11, 12)

32. Adam was created on the _____ day. (6th, 7th, 1st)

33. Lazarus sisters were Mary and _____ (Martha, Deborah)

34. Who led the children of Israel out of Egypt? _____ (Moses, Miriam, Abraham)

35. Israel had _____ sons. (11, 12, 13)

36. _____ built the ark as commanded by God. (Moses, Noah, Lot)

37. Christians worship on _____ (Sunday, Saturday, Monday)

38. We should always _____ our teachers and parents. (kill, obey, hate)

39. We talk to God through _____ (playing, praying, fighting)

40. _____ was thrown into the den of lions. (Daniel, Abraham, Moses)

41. _____ was a blind man healed by Jesus. (Bartimeaus, Noah, Zaccheaus)

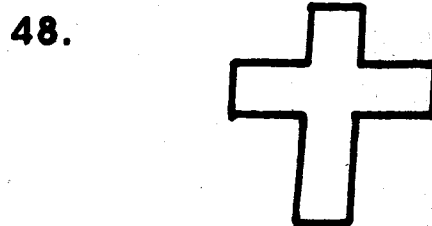


42. Most of Jesus disciples were _____ (fishermen, farmers, teachers)

43. The devil tempted Jesus _____ times. (2, 3, 4)

44. Agikuyu call their God _____ (Mulungu, Asis, Ngai)

45. The promised land was called _____ (Ur, Canaan, Egypt)

Name the following



(Bible, church, cross)

49. _____ lepers went back to thank Jesus. (9, 1, 10)

50. The father of faith in the Bible is _____ (Moses, Abraham, Joshua)



[3]
008

TOP RANK SERIES

STANDARD THREE

YEAR 2016

READING & KUSOMA

NAME: _____

SCHOOL: _____

DATE: _____

READING

Read these words

- | | | | |
|--------------|--------------|-----------|--------------|
| 1. Beautiful | 6. Writing | 11. Funny | 16. Hotel |
| 2. Table | 7. Sitting | 12. Wrist | 17. Cooking |
| 3. Cup | 8. Dictation | 13. Watch | 18. Kitchen |
| 4. Family | 9. Teacher | 14. Time | 19. Beak |
| 5. Feed | 10. Chain | 15. Road | 20. Feathers |

Read these sentences

21. Who stole my pet?
22. His uncle is a butcher.
23. It was a bad accident.
24. We all clapped when the headmaster arrived.
25. We go to school by bus.

KUSOMA

Soma maneno haya

- | | | | |
|---------------|------------|-------------|---------------|
| 1. Ng'ang'ana | 6. Karamu | 11. Matata | 16. Tafadhali |
| 2. Nyororo | 7. Tembo | 12. Ghali | 17. Tazama |
| 3. Ng'ombe | 8. Mvinyo | 13. Gari | 18. Ukuta |
| 4. Zeze | 9. Rais | 14. Ghorofa | 19. Ua |
| 5. Firimbi | 10. Ukweli | 15. Huzuni | 20. Nyufa |

Soma sentensi hizi

21. Mwizi amekamatwa na kupigwa vibaya sana.
22. Mimi siwapendi waganga.
23. Kiko cha mjomba kimeibiwa.
24. Amemfunga ng'ombe wao kwa kamba.
25. Shangazi anafua nguo zangu.



[3]
008

TOP RANK SERIES

DARASA LA TATU

MWAKA 2016

KISWAHILI

JINA _____

SHULE: _____

TAREHE: _____

Imla


1. _____
2. _____
3. _____
4. _____
5. _____

Andika kinyume


6. Giza - _____
7. Nje - _____
8. Mchana - _____
9. Mvulana - _____
10. Mzee - _____

Andika majina ya picha hizi


11.




12.



13.



14.



(kikapu, jembe, chungu, nanasi)

Kanusha sentensi hizi

15. Mama anapika.

16. Baba analima.

17. Njoo hapa.

18. Kiko hiki ni cha babu.

19. Mwalimu amefurahi.

20. Wanafunzi wanacheza.

Andika wingi wa sentensi hizi

21. Mlango umevunjika.

22. Kinu kimevunjika.

23. Nyumba imejengwa.

24. Hili ni nanasi.

25. Ninaenda sokoni.

Andika akisami hizi kwa maneno

26. $\frac{1}{4}$ = _____
27. $\frac{1}{2}$ = _____
28. $\frac{1}{3}$ = _____

Kamilisha methali na vitendawili

29. Popo mbili zavuka mto _____
30. Nyumba yangu haina mlango _____
31. Kipo lakini sikioni _____
32. Haraka haraka haina _____
33. Pole pole ndio _____
34. Bendera hufuata _____

(upepo, baraka, mwendo, yai, kisogo, macho)

Tumia '-angu' kujaza pengo

35. Hiki ni kiko _____
36. Hii ni nyumba _____

37. Mfuko huu ni _____
38. Haya ni mayai _____
39. Basi hili ni _____

Andika kwa tarakimu au maneno

40. Hamsini = _____
41. 32 = _____
42. Sitini na sita = _____
43. Kumi na nane = _____
44. Mia moja na kumi = _____
45. 96 = _____

Andika jibu sahihi

Babake Katana ni 46, yeye hupanda mimea katika shamba lao ndogo ilhali mamake ni 47 huko mjini. Yeye huwatibu wagonjwa.

(mkulima, dereva, daktari)

Soma kifungu hiki kisha ujibu maswali

Hapo zamani za kale paliondokea mzee mmoja kwa jina Hamisi. Hamisi hakuwa na mke wala watoto. Alikuwa mwindaji, alipenda kuwinda ndege na wanyama wa porini. Siku moja alipokuwa mawindoni alishambuliwa vibaya na kifaru mmoja mkubwa.

48. Mzee alitwa nani? _____
49. Je Hamisi alikuwa na mke na watoto? _____
50. Hamisi alifanya kazi gani? _____



[3]
008

TOP RANK SERIES

STANDARD THREE


YEAR 2016

SCIENCE


NAME: _____ SCHOOL: _____ DATE: _____

1. We can fly the kite when the weather is _____
(windy, rainy, cloudy)
2. Cactus plants are grown in _____ areas. (wet, dry, cold)
3. Flowers make a place look _____ (ugly, green, beautiful)
4. A rainbow has _____ colours. (6, 7, 4)
5. The meat of a pig is called _____ (pork, beef, bacon)
6. Sound travels in _____ directions. (straight, all, one)
7. Dirty hair hide _____ (lice, fleas, jiggers)

Name the parts of this bird



8. _____
9. _____
10. _____
11. _____

12. _____
13. _____
(leg, beak, eye, tail, crown, wing)
14. Drinking water should be _____ (cooled, boiled, filtered)
15. Shadows are shortest at _____ (noon, morning, evening)
16. _____ make our teeth strong. (Sweets, Biscuits, Milk)
17. _____ covers the body of a fish. (Skin, Scales, Feathers)
18. Young plants are called _____ (weeds, seedlings, seeds)
19. When things vibrate _____ is produced. (light, sound)
20. Seeds are found in the _____ (roots, leaves, fruits)
21.  This is a _____ seed. (maize, bean)
22. Fish lives in _____ (water, soil, air)
23. Every home should have a _____ (toilet, kitchen, store)

24. The best soil for farming is _____ (sand, clay, loam)

Name and draw three fruits

25. _____ 26. _____

27. _____

28. During the cold weather, we should wear _____ clothes. (warm, cold, white)

29. Among the following animals which one eats grass? _____ (donkey, dog, leopard)

30. We have _____ senses. (4, 5, 6)

31. We make gestures using _____. (hands, stomach, hair)

32. _____ is used to make ropes. (Sisal, Coffee, Tea)

33. At home food is prepared in the _____. (kitchen, store, bedroom)

34. Farmers plant during the _____ season. (rainy, sunny, cloudy)

35. A spider has _____ legs. (6, 8, 4)

36. A snake moves by _____. (slithering, walking, flying)

37. Fruits should be _____ before eating. (washed, boiled, cooked)

Name three types of soil

38. _____

39. _____

40. _____


41. Children should _____ to grow healthy. (fight, play, scream)

42. Moving air is called _____. (wind, light, sound)

Name the weather symbols

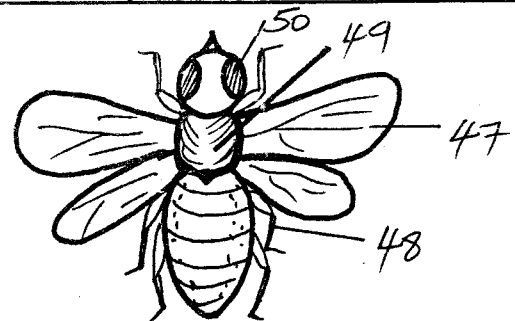


45. _____



(cloudy, rainy, calm)
46. A bird moves by _____. (hopping, flying, swimming)

Name the parts of the housefly.



47. _____

48. _____

49. _____

50. _____

(legs, wings, thorax, eyes)



[3]
008

TOP RANK SERIES

STANDARD THREE

YEAR 2016

MATHEMATICS

NAME: _____

SCHOOL: _____

DATE: _____

Fill in the missing numbers

- 82, _____, 84, _____, 86, 87
- 91, _____, 93, _____, 95, 96
- 15, 16, _____, 18, _____, 20, 21

Add

- $27 + 7 + 4 =$ _____
- $42 + 49 + 6 =$ _____
- $39 + 36 + 4 =$ _____

Arrange from the smallest to the biggest

- 912, 412, 512, 712, 212, 312
- _____

- | | |
|-------|------|
| weeks | days |
| 6 | 2 |
| + 4 | 9 |
| <hr/> | |

- | | |
|-------|------|
| weeks | days |
| 7 | 2 |
| - 5 | 1 |
| <hr/> | |

- $722 =$ _____ hundreds _____ tens
_____ ones

- $4692 =$ _____ thousands _____
hundreds _____ tens _____ ones

Work out

- | |
|-------|
| 5292 |
| - 62 |
| <hr/> |

- | |
|-------|
| 9246 |
| - 301 |
| <hr/> |

- | |
|-------|
| 2001 |
| + 99 |
| <hr/> |

- $19 \times 0 =$ _____

- $7 \times 2 =$ _____

- $20 \div 2 =$ _____

- $4 \times 6 =$ _____

- Take away 24 from 42 = _____

- Add 29 to 52 _____

- Take away sixty two from ninety two. _____

- All who is a farmer had 162 sheep. 20 of them died during a drought. How many sheep remained? _____

- 8 boys have _____ eyes.

- 14 donkeys have _____ horns.

Work out

- | | |
|-------|-----|
| Sh | Cts |
| 22 | 14 |
| + 29 | 62 |
| <hr/> | |

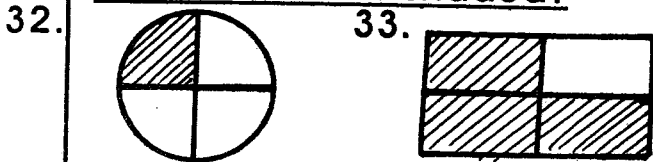
- | | |
|-------|-----|
| Sh | Cts |
| 30 | 90 |
| + 20 | 40 |
| <hr/> | |

- | | |
|-------|-----|
| Sh | Cts |
| 49 | 22 |
| - 42 | 6 |
| <hr/> | |

Write in words

28. 39 _____
 29. 46 _____
 30. 0 _____
 31. 19 _____

What fraction is shaded?



34.
$$\begin{array}{r} 262 \\ +492 \\ \hline \end{array}$$

35.
$$\begin{array}{r} 226 \\ -129 \\ \hline \end{array}$$

36.
$$\begin{array}{r} 400 \\ -9 \\ \hline \end{array}$$

Expand

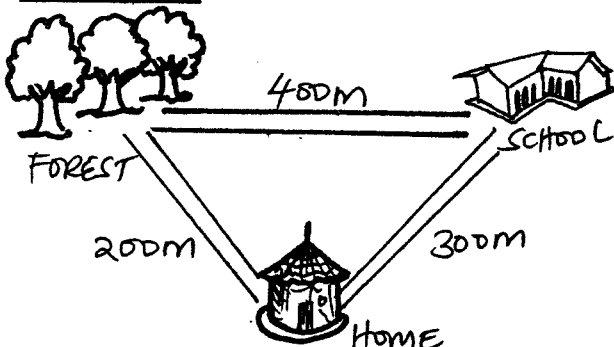
37. $4529 = \underline{\quad} + \underline{\quad} + \underline{\quad}$

38. How many days are there in the last three months of the year?

39. In Kazuka Academy there are 127 boys and 118 girls. How many pupils are in that school altogether? _____

40. $\frac{1}{9}$ of 18 = _____

Distances



41. What is the distance from home to the school? _____


42. What is the distance from the forest to home through the school? _____

43. John walked from home to the forest and back. What distance did he walk? _____

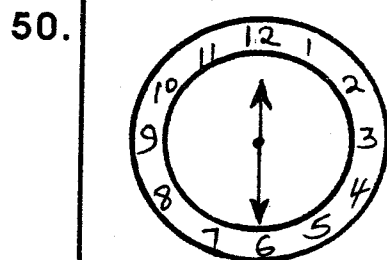
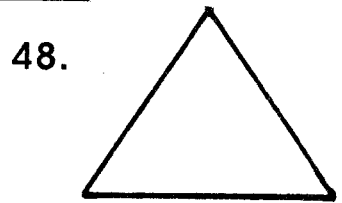

44. 1 hour = _____ minutes.

45. What number is after 92?

46. How many triangles can you count?



Name the shapes



What is the time? _____



[3]
008

TOP RANK SERIES

STANDARD THREE

YEAR 2016

ENGLISH

NAME: _____

SCHOOL: _____

DATE: _____

Dictation

1. _____
2. _____
3. _____
4. _____
5. _____

Use "a" or "an"

6. I want to buy _____ apple.
7. My father bought me _____ ball.
9. I saw _____ elephant crossing the busy road.
10. The shopkeeper gave me _____ matchbox.

Write the past tense

11. Carry - _____
12. Eat - _____
13. Sleep - _____

14. Cry - _____

15. Sit - _____

Fill in the missing letters

16. H _____ use

17. Acc _____ d _____ nt

18. Engl _____ s _____

19. Ch _____ r _____

20. T _____ bl _____

Use these words to make sentences

21. Teacher

22. Writing

23. Bus

24. By

25. Water

Write the opposites

- 26. Grandmother - _____
- 27. Uncle - _____
- 28. Mr. - _____
- 29. Strong - _____
- 30. Rich - _____

Use "they, their, there, this"

- 31. _____ are boys.
- 32. _____ ball is old.
- 33. _____ is our bull.
- 34. _____ are Mr. Kali's sons.
- 35. _____ is my lost bag.

Similes

- 36. As black as _____
- 37. As white as _____
- 38. As proud as a _____
- 39. As happy as a _____
- 40. As fast as a _____

(coal, snow, peacock, deer, king)

Write the plural

- 41. Ox - _____
- 42. Kitten - _____
- 43. City - _____
- 44. Water - _____
- 45. Donkey - _____

Write the correct answer to fill the gaps

John's father is a 46 he sells meat in their butchery, while his mother is a 47. She drives their bus.

(optician, butcher, driver)

Read the passage below and answer questions 48 - 50:

Long time ago, there was an old man who lived near small river. The man was called Orona. His wife had died long time ago and they had no children. He was lonely as he had no friends. His only friend was his pet dog called Tuna. He did fishing in the small river as he loved eating fish.

- 48. The old man was called _____
- 49. He lived near a _____
- 50. He had a pet dog called _____