



HIGH FLYER SERIES EVALUATION TEST
STANDARD THREE – YEAR 2016
READING

DATE:

NAME: SCHOOL:

Read these words

- | | |
|--------------|--------------|
| 1. Holiday | 6. Tractor |
| 2. Station | 7. Coloured |
| 3. Passenger | 8. Journey |
| 4. Illness | 9. Huge |
| 5. Wearing | 10. Exercise |

Read these sentences

11. Please return the books.
12. I have already begun the work.
13. John bought a bar of chocolate.
14. The torch gave a bright light.
15. The butcher sharpened the knife.

Read the passage below

Every Saturday, I help my aunt to make breakfast, tidy the house and wash clothes. I also feed the chicken. In the afternoon, I collect the eggs in the basket. At times, I try to milk the cow. After supper, my uncle tells me stories, and then I get to bed and sleep soundly.





HIGH FLYER SERIES EVALUATION TEST
DARASA LA TATU – MWAKA 2016
KUSOMA

TAREHE:

JINA: SHULE:


Soma maneno haya:-

- | | | |
|-------------|--------------|-------------|
| 1. Wao | 8. Kitambaa | 15. Asubuhi |
| 2. Samawati | 9. Nahodha | 16. Ghorofa |
| 3. Ubao | 10. Michezo | 17. Haribu |
| 4. Kabati | 11. Mtama | 18. Hali |
| 5. Theluthi | 12. Mwangaza | 19. Hatia |
| 6. Shabaha | 13. Buibui | 20. Sherehe |
| 7. Pua | 14. Swara | |

Soma sentensi zifuatazo:-

21. Watoto wameamka.
22. Nyumba ile ya ghorofa ni yetu.
23. Tuliamba asubuhi sana.
24. Mzee huyo alirarua kitambaa chote.
25. Kuku ameingia kwenye ghala.





HIGH FLYER SERIES EVALUATION TEST
DARASA LA TATU – MWAKA 2016
KISWAHILI: LUGHA

TAREHE:

JINA: SHULE:

Imla

1. _____
2. _____
3. _____
4. _____
5. _____

Andika wingi

6. Mshale _____
7. Kuku _____
8. Kiberiti _____
9. Uzi _____
10. Mwanafunzi _____

Kanusha amri hizi

11. Tokaa nje. _____
12. Soma kitabu chako

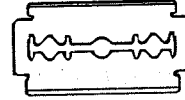
13. Kunywa maziwa

14. Mama anafua nguo

15. Simameni _____

Andika majina ya picha

16.



17.



18.



19.



20.



Andika kwa wakati ujao

21. Mwalimu alichapa mwanafunzi.

22. Mimi nilioga mwili

23. Shangazi anapiga pasi



24. Wewe ulinawa mikono _____

25. Tulicheza ngoma _____

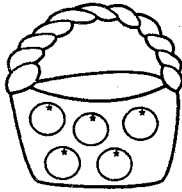
Tumia "ndani ya", "chini ya" au "juu ya"

26.




Paka humo
_____ kiti.

27.



Matunda yamo
_____ kikapu.

28.



Kikombe kiko
_____ meza.

Tumia "hiki" au "hili"

29. _____ ni kijiko cha mama.

30. _____ debe la juma.

Kamilisha methali zifuatazo

31. Akili ni _____

32. Ahadi ni _____

33. Haraka haraka _____

Unda meneno

34. Fi _____

35. U _____

Andika kwa nabari au idadi

36. 55 _____

37. 83 _____

38. Sabini na moja _____

39. Sitini na mbili _____

40. 125 _____

Tumia maneno sahihi kujaza pengo

41. Nyani ana mkia _____.
(ndefu, mrefu, refu)

42. Dada yangu ana mishipi _____.
(fupi, mifupi, mafupi)

43. Tunasema nipe chakula _____.
(nile, nikule, tule)

44. Juma ali _____ mikono.
(osha, nawa, oga)

45. Hii ni alama ya _____.
(kuongeza, kugawa)

Andika kinyume

46. Mkubwa _____

47. Swali _____

48. Mwalimu _____

Andika vizuri

49. kojivi _____

50. niyan _____





HIGH FLYER SERIES EVALUATION TEST
STANDARD THREE – YEAR 2016
MATHEMATICS

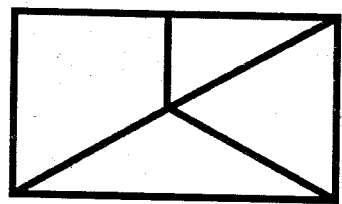


DATE:

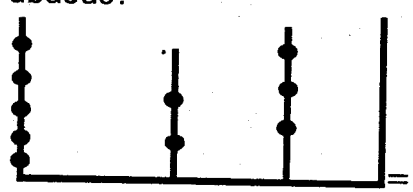
NAME: SCHOOL:

1. Write in words 6032 = _____
2. Write in figures: Two thousand and fifteen _____
3. Arrange from the smallest to the largest 324, 163, 814, 911, 415

4. $7210 = _ + _ + _ + _$
5. $8 \overline{)48} = _$
6. There are 72 pupils in class three. 40 are boys. How many are girls?
7. What number comes just before 390? _____
8.
$$\begin{array}{r} 263 \\ +159 \\ \hline \end{array}$$
9.
$$\begin{array}{r} 50 \\ +70 \\ \hline \end{array}$$
10. What is $\frac{1}{3}$ of 36 = _____



How many triangles? _____

12. Grace had sh 150. She bought a dress for sh 36. How much was she left with?
13. Take away fifty seven from one hundred and sixty eight _____
14. What number is shown by the abacus?

15. Which fraction is smaller?
 $\frac{1}{4}$ or $\frac{1}{6}$? _____
16.
$$\begin{array}{r} 362 \\ +901 \\ \hline \end{array}$$
17.
$$\begin{array}{r} 568 \\ -294 \\ \hline \end{array}$$
18. Subtract 83 from 643 = _____
19. My mother bought 3 cabbages, 6 oranges and 4 bananas. How many things did she buy altogether? _____

Complete

20. Sugar is weighed in _____
21. Milk is weighed in _____
22. Classroom is measured in _____ . (metres, kg, litres)



23. _____ + 300 + 200 = 600

24. 342 - _____ = 130

25.	Weeks	Days
	6	3
	+ 4	7
	<hr/>	
	<hr/>	

26. $2 \overline{) \text{sh } 8 \text{ } 30\text{cts}}$ = _____

27. 77 + _____ = 99

28. Multiply seven by three = _____

29. Rita bought a dress for sh 520 and a blouse for sh 513. How much money did she spend altogether? _____

30. How many days are there in the month of February? _____

31. 15 + 20 + _____ = 60

32. Twenty eight oranges shared equally among seven children. Each will get _____ oranges.

33.	85 metres
	- 19 metres
	<hr/>
	<hr/>

34. How many litres are there in 4 half litres? _____

35.	Sh	cts
	6	55
	+ 2	65
	<hr/>	
	<hr/>	

36. What is the difference between 88 and 40? _____

37. Jacob is 53cm and Mark is 58cm tall. Who is taller?

38. 1kg of meat costs sh 240. If I gave the butcher sh 500, what balance will I be given back?

39. 10 cows have _____ horns.

40. Expand 8402 = _____ + _____
+ _____ + _____

41. 29 days = _____ weeks _____ days

42. What is 300 - 64 = _____

43. 59 + 2001 + 132 = _____

44. What is the place value of digit 7 in 7246? _____

45. What is the next number 5, 9, 13, 17, _____

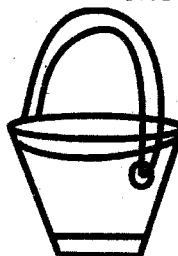
46. $\frac{9}{9} - \frac{3}{9} =$ _____

47. $8 \times$ _____ $= 64$

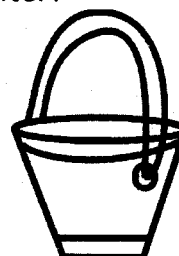
48. How many minutes are there in one hour and a half? _____

49. Lilian was number four in their class. She was in the _____ position.

50. Which one is lighter?



A 18kg



B 23kg





HIGH FLYER SERIES EVALUATION TEST
STANDARD THREE – YEAR 2016
CHRISTIAN RELIGIOUS EDUCATION

DATE:

NAME: SCHOOL:

1. God is _____ to us.
(cruel, kind, unmerciful)
2. When Jesus was being baptized, the Holy Spirit came upon Him in form of a _____.
(cloud, fire, dove)
3. Joseph the son of Jacob forgave his _____.
(mother, brothers, father)
4. _____ betrayed Jesus.
(Peter, Judas, Thomas)
5. _____ is our good Shepherd.
(Angel, parents, Jesus)
6. Naboth had a _____. (grapeyard, vineyard, oliveyard)
7. We can show fairness to others by _____.
(abusing, gossiping, sharing)
8. "Forgive them Father". Who said these words?
(Joseph, Jesus, Daniel)
9. Resurrection means _____.
(dying, sleeping, coming back to life)
10. _____ means treating people equally.

(Rudeness, Honesty, Fairness)

11. King _____ built a temple for God. (Saul, Solomon, Darius)
12. God is found _____.
(nowhere, somewhere, everywhere)
13. Shrines were places of _____.
(eating, selling, worship)
14. In traditional African society, people shook hands as a sign of _____.
(peace, jealousy, hatred)
15. _____ taught us the Lord's Prayer. (God, Jesus, Angels)
16. Children should _____ in school.
(steal, run away, work hard)
17. We should _____ God in all our needs. (doubt, trust, test)
18. The New Testament has _____ books. (66, 39, 27)
19. The Nandi name for God is _____.
(Enkai, Ngai, Asis)
20. Emmanuel means _____.
(saviour, God with us, Messiah)





HIGH FLYER
SERIES
009

HIGH FLYER SERIES EVALUATION TEST
STANDARD THREE – YEAR 2016
CHRISTIAN RELIGIOUS EDUCATION

DATE:

NAME: SCHOOL:

1. God is _____ to us.
(cruel, kind, unmerciful)
2. When Jesus was being baptized, the Holy Spirit came upon Him in form of a _____.
(cloud, fire, dove)
3. Joseph the son of Jacob forgave his _____.
(mother, brothers, father)
4. _____ betrayed Jesus.
(Peter, Judas, Thomas)
5. _____ is our good Shepherd.
(Angel, parents, Jesus)
6. Naboth had a _____. (grapeyard, vineyard, oliveyard)
7. We can show fairness to others by _____.
(abusing, gossiping, sharing)
8. "Forgive them Father". Who said these words?
(Joseph, Jesus, Daniel)
9. Resurrection means _____.
(dying, sleeping, coming back to life)
10. _____ means treating people equally.

(Rudeness, Honesty, Fairness)

11. King _____ built a temple for God. (Saul, Solomon, Darius)
12. God is found _____.
(nowhere, somewhere, everywhere)
13. Shrines were places of _____.
(eating, selling, worship)
14. In traditional African society, people shook hands as a sign of _____.
(peace, jealousy, hatred)
15. _____ taught us the Lord's Prayer. (God, Jesus, Angels)
16. Children should _____ in school.
(steal, run away, work hard)
17. We should _____ God in all our needs. (doubt, trust, test)
18. The New Testament has _____ books. (66, 39, 27)
19. The Nandi name for God is _____.
(Enkai, Ngai, Asis)
20. Emmanuel means _____.
(saviour, God with us, Messiah)





HIGH FLYER SERIES EVALUATION TEST
STANDARD THREE – YEAR 2016
ENGLISH: LANGUAGE

DATE:

NAME: SCHOOL:

Dictation

1. _____
2. _____
3. _____
4. _____
5. _____

Singular

Plural

- | | |
|-----------|-------|
| 6. Box | _____ |
| 7. Sheep | _____ |
| 8. Baby | _____ |
| 9. Tomato | _____ |
| 10. Thief | _____ |

Use 'has' or 'have'

11. They _____ gone out to play.
12. She _____ a nice doll.
13. Paul _____ a good sister.
14. She _____ lost her pencil.
15. I _____ gone home.

Write in short form

I am – I'm

16. Has not _____
17. Do not _____
18. They are _____
19. Does not _____
20. She is _____

Use 'somebody', 'nobody', 'nothing'

21. There is _____ in the house.
22. There was _____ in the box.
23. I have heard _____ knocking at the door.
24. _____ showed me the answer except the teacher.
25. I have _____ to give you.

Choose the correct word

26. My hands are _____.
(week, weak, waek)



27. She has a _____ dress.
(wrong, rong, long)

28. You have a _____ cold.
(bad, bud, bed)

29. She runs very _____.
(first, fast, vast)

30. I _____ in Nairobi.
(leave, live, leaf)

Write the present tense

31. Spoke _____

32. Cut _____

33. Slept _____

34. Paid _____

35. Wrote _____

Use 'of', 'for', 'off'

36. Keep _____ the grass.

37. Give me a loaf _____
bread.

38. Father bought a watch _____
me.

39. Switch _____ the lights.

40. A half _____ ten is five.

Who are they?

41. He flies an aeroplane
_____.

42. He teaches pupils
_____.

43. She drives a bus
_____.

44. She sells in a shop
_____.

45. He looks after the sick
_____.

Fill in with much or many

46. How _____ legs does a cat
have?

47. How _____ sugar do you
need?

48. There are _____ boys in our
school.

49. He is sick and cannot eat
_____ food.

50. How _____ tens make
fifty?






HIGH FLYER SERIES EVALUATION TEST
STANDARD THREE – YEAR 2016
SOCIAL STUDIES

DATE:

NAME: SCHOOL:

1.



Many trees growing together make a _____. (bush, valley, forest)

2. Father, mother and children make a _____ family.

(extended, nuclear, Christian)

3. In which season do you find people wearing heavy clothes?
(hot, cold, calm)

4. People who make medicine from plants are called _____.
(witchdoctors, herbalists, nurses)

5. Money paid by people to the government to help in development is called _____.
(tax, fees, rent)

6. Exchange of goods for goods is called _____ trade.
(money, barter, big)

7. Where there is law and order, there will be _____ in the society. (peace, hatred, war)

8. A long time without rain is called _____.
(drought, famine, floods)

9. People who break the law are called _____.
(soldiers, criminals, men)


10. The smallest administrative unit is the _____.
(Division, village, Location)

11. _____ is watering of crops when there is no rain.
(Irrigation, Weeding, Harvesting)


12.



13.



14.



15.



(bridge, building, railway, road)

16. Maasai, Kalenjin and Pokot belong to _____ language group.

(Nilotes, Cushites, Bantus)

17. Games and Sports are _____ activities.

(economic, education, social)

18. All children should receive food, shelter, healthcare and clothing. These are called child's _____.

(rights, gifts, wants)

19. During a _____ ceremony, people are sad.

(naming, burial, wedding)

20. The coldest month in our district is _____.

(April, July, September)

21. Which of these does not tell us about weather?

(rain, clock, shadow)

22. Donkeys and _____ are animals used for transport.

(bulls, oxen, camels)

23. Animals such as cats and dogs are called _____.

(pets, wildlife, poultry)

24. Removing dead parts of plants is called _____.

(weeding, pruning, harvesting)

25. Which is the best soil for modeling? (loam, clay, sand)

26. The house of a pig is called a _____.

(shed, sty, pen)

27. _____ is buying and selling of goods and services. (Marketing, Trading, Shopping)

28. Baskets and ropes are made by _____.


(modelling, weaving, coiling)

29. The Masaai name for God is _____.

(Ngai, Enkai, Asis)

30. Name one of our neighbouring schools _____.



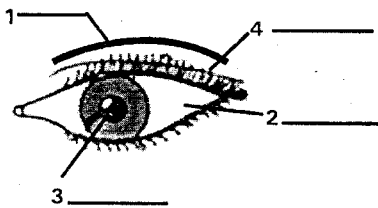


HIGH FLYER SERIES EVALUATION TEST
STANDARD THREE – YEAR 2016
SCIENCE

DATE:

NAME: SCHOOL:

Name the parts of the eye shown



(Pupil, eyelid, white part, eyebrows)

5. Gestures are used by _____ people. (blind, deaf)
6. The sense organ for hearing is the _____. (nose, tongue, ear)
- 7.
-
- This is showing a _____ face.
(sad, annoyed, happy)
8. Things appear small when they are _____. (near, far, close)
9. _____ is not an example of food.
(Milk, Alcohol, Cassava)
10. A healthy body is free from _____.
(diseases, exercise, food)
11. We get medicine from a _____.
(church, school, hospital)
12. House flies like _____ places.
(clean, dirty, noisy)
13. Which one is not an example of an exercise? (jumping, sleeping, running)
14. To clean a toilet _____ is not used.
(disinfectant, ash, water)

15. A baobab tree grows in _____ places. (dry, wet)

16. Plants farmers grow are called _____. (weeds, herbs, crops)

17.



This plant is used for making _____.
(medicine, cooking oil, wheat flour)


18. We get _____ and charcoal from trees for cooking.
(sisal, shade, firewood)

19. _____ is a herbal tree.
(Mango, Neem, Coconut)


20. _____ affects activities farmers do. (Wind, Weather, Clods)

Draw the following weather symbols.


21. Rainy day



22. Sunny day



23. Windy Day




24. Cloudy day



25. Weather changes are recorded on a _____.
(Blackboard, weather chart, weather symbol)

26. Farmers do not _____ crops during the rainy season.
(harvest, weed, plant)

Use the diagram below to answer questions 27 and 28.



27. The diagram shows a house of a _____.
(bird, wasp, spider)

28. The diagram shows a _____.
(web, nest, shell)

29. Hooves are not found on a _____.
(cow, sheep, dog)

30. A goat does not give us _____.
(meat, wool, milk)

31. The habitat of a tadpole is _____.
(air, water, soil)

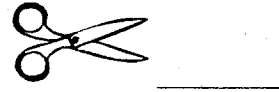
32. Dirty water can be made clean by _____.
(winnowing, filtering, boiling)

33. Safe water drinking should be _____.
(warm, clean, boiled)

34. _____ is not a source of water.
(Tank, River, Rain)

Name these simple tools.

35.



36.



37.



(Jembe saw, scissors)

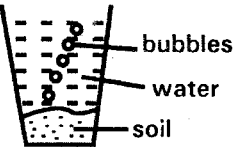
38. We cannot see _____ in a glass.
(water, juice, air)

39. When things burn they produce _____.
(light, electricity, sound)

40. In the morning our shadows are in the _____.
(west, east, north)

41. Heat makes things _____.
(cold, hot)

42.



This experiment shows that soil has _____.
(water, air, animals)

43. The best soil for modeling is _____.
(loam, clay sand)

44. The second meal of the day is called _____.
(lunch, supper, breakfast)

45. Our finger nails should be kept _____.
(long, short, dirty)

46. A leopard feeds on _____.
(meat, vegetables, milk)

47. A carpenter uses a _____ to climb on a wall.
(hammer, rope, ladder)

48. We blow a _____ to produce sound.
(drum, nyatiti, flute)

49. Floods are caused by _____.
(drought, rain)





50. When we eat _____ our teeth get spoilt.
(carrots, sweets, eggs)





HIGH FLYER
SERIES
009

HIGH FLYER SERIES EVALUATION TEST STANDARD THREE – YEAR 2016 MARKING SCHEME

ENGLISH	KISWAHILI	MATHS	SCIENCE	SOCIAL STUDIES	C.R.E.
1. -	1. _____	1. Six thousand and thirty two	1. Eyebrows	1. Forest	1. Kind
2. -	2. _____	2. 2015	2. White part	2. Nuclear	2. Dove
3. -	3. _____	3. 163, 324, 415, 814, 911	3. Pupil	3. Herbalists	3. Brothers
4. -	4. _____	4. 7000 + 200 + 10 + 0	4. Eyelid	4. Tax	4. Judas
5. -	5. _____	5. 6	5. Deaf	5. Barter	5. Jesus
6. Boxes	6. Mishale	6. 32	6. Ear	6. Peace	6. Vineyard
7. Sheep	7. Kuku	7. 389	7. Sad	7. Cold	7. Sharing
8. Babies	8. Viberiti	8. 422	8. Far	8. Drought	8. Jesus
9. Tomatoes	9. Nyuzi	9. 120	9. Alcohol	9. Criminal	9. Coming back to life
10. Thieves	10. Wanafunzi	10. 12	10. Diseases	10. Village	10. Fairness
11. have	11. Usitoke nje	11. 5	11. Hospital	11. Irrigation	11. Solomon
12. has	12. Usisome kitabu chako	12. Sh 114	12. Dirty	12. Railway	12. Everywhere
13. has	13. Usinywe maziwa	13. 111	13. Sleep	13. Bridge	13. Worship
14. has	14. Mama hafui nguo	14. 5230	14. Ash	14. Road	14. Peace
15. have	15. Msisimame	15. $\frac{1}{6}$	15. Dry	15. Building	15. Jesus
16. hasn't	16. Wembe	16. 1263	16. Crops	16. Nilotes	16. Work Hard
17. don't	17. Chungu	17. 274	17. Cooking oil	17. Social	17. Trust
18. they're	18. Jembe	18. 560	18. Firewood	18. Rights	18. 27
19. doesn't	19. Viatu	19. 13	19. Neem	19. Burial	19. Asis
20. she's	20. Ufagio	20. Kg	20. Weather	20. July	20. God with us
21. Nobody/somebody	21. Mwalimu atachapa mwanafunzi	21. Litres		21. Clock	
22. Nothing	22. Mimi nitaoga mwili	22. Metres		22. Camels	<u>I.R.E.</u>
23. Somebody	23. Shangazi atapiga pasi	23. 100		23. Pets	1. Aqiqah
24. Nobody	24. Wewe utanawa mikono	24. 212		24. Pruning	2. Jibril
25. Nothing	25. Tutacheza ngoma	25. 11wks 3days	25. Weather chart	25. Clay	3. Poor
26. Weak	26. Chini ya	26. Sh 4 15cts		26. Sty	4. 2
27. Long	27. Ndani ya	27. 22		27. Trading	5. Shahada
28. Bad	28. Juu ya	28. 21		28. Weaving	6. Taraweh
29. Fast	29. Hiki	29. 1033		29. Enkai	7. Ramadhan
30. Live	30. Hili	30. 28/29		30. _____	8. Qiyamah
31. Speak	31. Nywele	31. 25			9. Nur
32. Cut	32. Deni	32. 4			10. Iman
33. Sleep	33. Haina Baraka	33. 66			11. 2
34. Pay	34. Fimbo ...	34. 2			12. Rajab
35. Write	35. Ua ...	35. Sh 9 20cts			13. Allah
36. off	36. Hamsini na tano	36. 48			14. Makka
37. of	37. Themanini na tatu	37. Mark			15. Face
38. for	38. 71	38. Sh 260			16. Zakat
39. off	39. 62	39. 20			17. Udhu
40. of	40. Mia moja ishirini na tano	40. 8000 + 400 + 0 + 2			18. Pig
41. Pilot	41. Mrefu	41. 4wks 1 day			19. Paradise
42. Teacher	42. Mifupi	42. 236			20. Fatiha
43. Driver	43. Nile	43. 2192			
44. Shopkeeper	44. Nawa	44. Thousands			
45. Nurse	45. Kugawa	45. 21			
46. Many	46. Mdogo	46. $\frac{6}{9}$			
47. Much	47. Jibu	47. 8			
48. Many	48. Mwanafunzi	48. 90 minutes			
49. Much	49. Vijiko	49. Fourth			
50. Many	50. Nyani	50. A			