

NAIROBI INTERPRIVATE SCHOOLS EXAM

STANDARD TWO - YEAR 2016

MATHEMATICS



NAME: _____ SCHOOL: _____ DATE: _____

Write the missing numbers

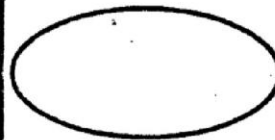
1. 11, 12, 13, 14, _____
2. 292, 293, 294, _____
3. 10, 20, 30, _____
4.
$$\begin{array}{r} 38 \\ +31 \\ \hline \end{array}$$
5.
$$\begin{array}{r} 47 \\ +42 \\ \hline \end{array}$$
6.
$$\begin{array}{r} 66 \\ +33 \\ \hline \end{array}$$
7.
$$\begin{array}{r} 80 \\ -20 \\ \hline \end{array}$$
8.
$$\begin{array}{r} 74 \\ -52 \\ \hline \end{array}$$
9.
$$\begin{array}{r} 59 \\ -27 \\ \hline \end{array}$$
10. $96 = \underline{\hspace{1cm}}$ tens and $\underline{\hspace{1cm}}$ ones.
11. $30 + \underline{\hspace{1cm}} = 35$
12. $15 - \underline{\hspace{1cm}} = 12$

Write in words


13. $9 = \underline{\hspace{2cm}}$
14. $46 = \underline{\hspace{2cm}}$
15. $98 = \underline{\hspace{2cm}}$
16. $124 = \underline{\hspace{2cm}}$
17.
$$\begin{array}{r} 2 \\ + \\ \hline \end{array}$$
18. $19 - 5 = \underline{\hspace{1cm}}$
19. $10 - 1 = \underline{\hspace{1cm}}$
20. $2 \times \underline{\hspace{1cm}} = 0$

Name the shapes

21.



22.



Fill the correct place value

23. $85 = \underline{\hspace{1cm}}$ tens + $\underline{\hspace{1cm}}$ ones

Write the numbers

24. A year has $\underline{\hspace{1cm}}$ months.

25.
$$\begin{array}{r} 77 \\ -47 \\ \hline \end{array}$$

26. _____ + 8 = 21

Write in numbers

27. Three hundred and thirty nine = _____

28. Forty four = _____

29. 3 + _____ = 9

30. The number before 99 is _____


Work out:-

31.
$$\begin{array}{r} 325 \\ +222 \\ \hline \end{array}$$

32. 7 + 8 = _____

33. 5 + 5 + 5 = _____

34. Which holds more water? _____



35. 49 = _____ tens _____ ones

36.



Which one is heavier? _____

37. 5 cows + 6 cows = _____ cows

38. Two boys have _____ fingers

39. 700 + 77 = _____

40. The fifth day of the week is called _____

41. 56 - 32 = _____

42.
$$\begin{array}{r} 9 \\ + 230 \\ \hline \end{array}$$

43. Subtract 24 from 88 _____

44. 89 - 4 = _____

45. How many legs do 5 cows have? _____

46.
$$\begin{array}{r} 87 \\ -72 \\ \hline \end{array}$$

47. 90 - 50 = _____

48.
$$\begin{array}{r} 79 \\ -9 \\ \hline \end{array}$$

49.
$$\begin{array}{r} 341 \\ +213 \\ \hline \end{array}$$

50.
$$\begin{array}{r} 7 \\ +152 \\ \hline \end{array}$$

NAIROBI INTERPRIVATE SCHOOLS EXAM
STANDARD TWO - YEAR 2016
READING & KUSOMA



NAME: _____

SCHOOL: _____

DATE: _____

READING

Read these words

- | | | | |
|----------|------------|------------|-----------------|
| 1. Boat | 6. Rich | 11. Pound | 16. Bottom |
| 2. Seven | 7. Double | 12. chalks | 17. Evening |
| 3. Big | 8. Dentist | 13. Begin | 18. Banana |
| 4. Lion | 9. Glass | 14. Family | 19. Black board |
| 5. Heavy | 10. Basket | 15. Dirty | 20. Table |

Read these sentences

21. John is washing a car.
22. The kitten is sleeping.
23. Who is digging in the shamba?
24. The carpenter has come.
25. The white cat has jumped.

KUSOMA

Soma majina haya

- | | | | |
|------------|-------------|-------------|---------------|
| 1. Chora | 6. Mseto | 11. silabi | 16. Vitatu |
| 2. Paka | 7. Kofia | 12. Gwaride | 17. Marudio |
| 3. Maua | 8. Alijibu | 13. Maswala | 18. Tarakimu |
| 4. Wino | 9. Changu | 14. Herufi | 19. Kuigiza |
| 5. Kuchora | 10. Kipindi | 15. Maneno | 20. Cherehani |

Soma sentensi hizi

21. Juma ana vifutio vitatu.
22. Majibu yote yana alama ya kikomo.
23. Hivi ni vidole zangu.
24. Je, utachora picha ngapi?
25. Mama amenunua taa ya kikopo.

NAIROBI INTERPRIVATE SCHOOLS EXAM

STANDARD TWO - YEAR 2016

ENGLISH



NAME: _____ SCHOOL: _____ DATE: _____

Dictation

1. _____
2. _____
3. _____
4. _____
5. _____

Fill the missing letters

6. Am ___ u ___ ance
7. St ___ an ___ er
8. Pat ___ en ___

Write the opposite

9. Night - _____
10. Laugh - _____
11. Small - _____

Choose the word to make one name






12. Class _____
13. Play _____
14. Break _____
15. Moon _____

(fast, light, room, ground)

What is the name of:

16. A person who preaches the gospel _____
17. A person who drives a car _____
18. A person who looks after sick people _____
19. A person who flies an aeroplane _____
20. A person who looks after our teeth _____
(pilot, a dentist, nurse, motorist, pastor)

Name the pictures drawn

21.  _____
22.  _____
23.  _____
24.  _____
25.  _____

Add 'ing

26. Cook _____

27. Fight _____

Write "a" or "an"

28. _____ nose.

29. _____ arrow.

30. _____ engine.

Use "was" or "were"

31. The cups _____ broken.

32. The girl _____ reading a book.

Use "I" or "we"

33. _____ were dancing in the hall.

34. _____ am a tall person.

Write the plurals

35. Tooth - _____

36. Loaf - _____

37. Enemy - _____

Fill in the correct answer

38. There are _____ months in a year.

39. A _____ is used for cleaning the board.

40. A _____ is used for cooking food.

41. A _____ is used for combing the hair.

(comb, duster, twelve, pot)

Today Yesterday

e.g. Wash Washed

42. Jump _____

43. Cook _____

44. Walk _____

Choose the correct word

45. This is a _____ flower.

46. She has a _____ sister.

47. A cat _____ milk.

48. A bird _____ well.

(beautiful, sings, drinks, nice)

Write these words correctly

49. ckddlopa - _____

50. ntaimou - _____

NAIROBI INTERPRIVATE SCHOOLS EXAM
DARASA LA PILI - MWAKA 2016
KISWAHILI



JINA _____

SHULE: _____

TAREHE: _____

Igila

1. _____
2. _____
3. _____
4. _____
5. _____

Andika kinyume

6. Kubwa - _____
7. Chafu - _____
8. Mchana - _____
9. Chini - _____
10. Mweupe - _____

Andika maneno vizuri

11. ndakita - _____
12. saniha - _____
13. mamliku - _____
14. oomkn - _____
15. ziemw - _____

Chora maumbo haya:-

16. Duara
17. Pembe tafu

18. Mraba

Andika kwa tarakimu au maneno:-

19. $63 =$ _____
20. Mia moja na kumi na saba
= _____
21. $203 =$ _____
22. Mia moja na thelathini na mbili
= _____

Umoja

Wingi

23. Kioo _____
24. Kijana _____
25. Mtu _____
26. Jicho _____

Jaza pengo

27. Ch _____ p _____


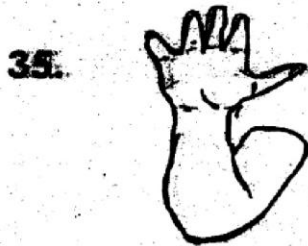
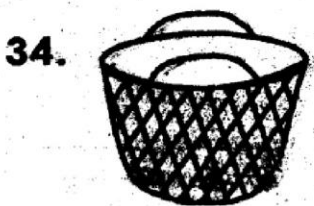
28. S _____ mak _____

29. D _____ b _____

30. B _____ nd _____ r _____

31. Mb _____ z _____

Andika majina



Tumia "huyu", "hiki" na "hii"

37. Ameingia ndani ya nyumba _____

38. Mvulana _____ anacheza vizuri.

39. Kitabu _____ hakisomeki.

Tegua vitendawili

40. Kule ng'o na huku ng'o _____

41. Nimezaliwa na mguu mmoja _____

42. Niangalie nikumbuke _____

(uoga, nzi, giza, kioo)

Unda maneno ukitumia mianzo

43. mg _____

44. nd _____

Chagua jibu sahihi

45. Dereva _____ amenisaidia.
(huyu, hili, hii)

46. Mwimbaji _____ anaitwa Stano.
(ule, yule, huu)

47. Wapishi _____ wamepika.
(wale, haya, huu)

48. Kuku _____ ni wetu.
(ile, yule, huu)

Kamilisha methali

49. Dalili ya mvua ni _____

50. Mtofo wa kuku ni _____

(kifaranga, jua, ndege, mawingu)

NAIROBI INTERPRIVATE SCHOOLS EXAM

STANDARD TWO - YEAR 2016

SCIENCE




NAME: _____

SCHOOL: _____

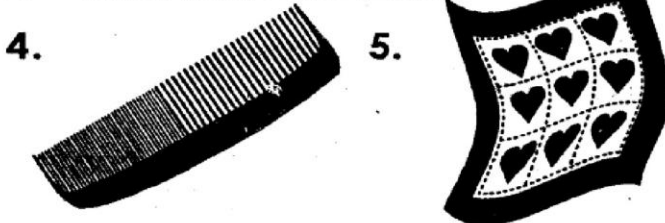
DATE: _____

1. A fish breathes through _____
(nose, gills, mouth)

2.  This is a _____
plant.
(maize, mango, bean)

3. A hot day is usually _____
(sunny, windy, cloudy)

Name the items we use



(handkerchief, toothbrush, comb)

7. Drinking water must be _____
before drinking.
(boiled, cooked, stored)

8. Plants grows from _____
(flowers, seeds, leaves)

9. The animals we keep at home are
called _____ animals.
(wild, tamed, domestic)

10. A _____ is an animal that
guards our home.
(cow, dog, donkey)

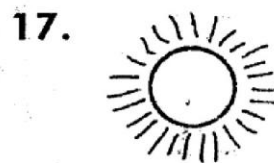
11. A _____ can sink in water.
(stone, paper, leaf)

12. When it is rainy people wear
_____ (slippers, gumboots,
open shoes)

13. We should not share _____
(food, towels, pencils)

14. We get water from the _____
(kitchen, bottle, dam)

Name the weather symbols below



19. The growing of a young plant from
seed is called _____
(seedlings, weed, germination)


20. A _____ lives in water.
(crocodile, goat, cow)

21. We taste with our _____
(teeth, tongue, nose)

22. When one is nose bleeding
_____ comes out.
(blood, water, mucus)

23. The house of bees is called _____
(nest, hive, forests)

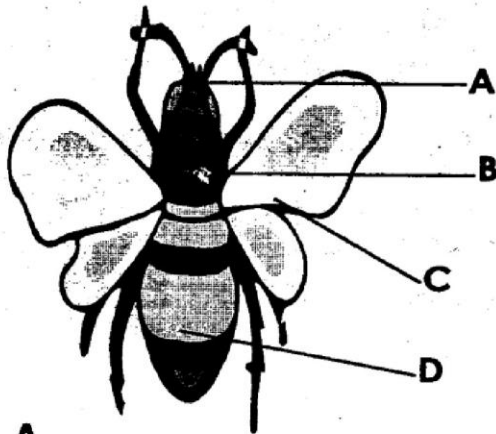
24. We feel with our _____
(hands, legs, ears)

25.  This is a _____ plant leaf. (bean, maize, peas)

26. We should cover our latrines to keep away _____ (fleas, flies, jiggers)

27. The mouth of a bird is called a _____ (beak, muzzle, mouth)

Name the parts of the insects



28. A _____

29. B _____

30. C _____

31. D _____

(wings, abdomen, thorax, head)

32. We use a towel to _____ our bodies. (shear, dry, wet)

33. A wheelbarrow has _____ wheels. (1, 2, 3)

34. We boil water to kill _____ (germs, flies, cockroaches)

35. A long period without rain causes _____ (drought, food, dry)

36. Most plants leaves are _____ in colour. (red, blue, green)

37. Personal items should not be _____ (washed, cooked, shared)

38. A young plant is called _____ (seedling, seed, bean)

39. We should always put papers in the _____ (toilets, dust bin, corner)

40. We put on _____ clothes when it is cold. (red, light, heavy)

41. Milk is good for our _____ (teeth, clothes, eyes)


42. Cooked meat smells _____ (good, bad, bitter)

43. The best soil for modelling is _____ (clay, sand, loam)


44. Fruits are _____ before eating. (washed, cooked, boiled)

45. A _____ is a domestic animal. (cat, lion, snake)

46. If we drink dirty water we become _____ (sick, healthy, tall)

47.  This kite can be moved by _____ (air, sun, wind)

48. We mix soil and _____ to make mud. (salt, sugar, water)

49. 

This farm tool is used for _____ (cutting, digging, milking)

50. Which one of the following animals lives in dirty bodies?

_____ (Mosquitoes, Lice, Cockroaches)

NAIROBI INTERPRIVATE SCHOOLS EXAM

STANDARD TWO - YEAR 2016


SOCIAL STUDIES & C.R.E



NAME: _____


SCHOOL: _____

DATE: _____


1. The sun sets in the _____
(East, West, South)
2. A place where we learn to read and write is a _____
(home, school, house)
3. A person who lives next to us is called _____
(enemy, neighbour, brother)
4.  The weather today is _____
(sunny, rainy, cloudy)
5. We keep our tools in the _____
(store, kitchen, bathroom)
6. The room where food is prepared is called a _____
(kitchen, bathroom, bedroom)
7. Maasai house is called _____
(manyatta, hut, igloo)

Draw the following pictures

8. House



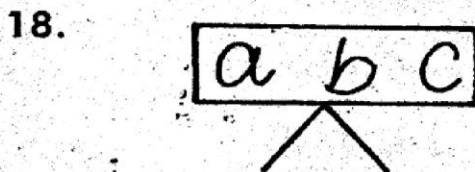

9. Bicycle



10. A _____ lives in water.
(crocodile, buffalo, lion)
11. People who drive cars are called _____
(pedestrians, motorists, children)
12. My aunts children are my _____
(parents, uncles, cousins)

13. Rubbish brings _____
which can make us sick.
(flies, grasshoppers, jiggers)
14. Heavy clouds in the sky may bring _____
(rain, wind, sun)
15. A place where we go to help ourselves is called a _____
(toilet, playground, class)

Name the things found in our school



19. _____ helps us to carry heavy things. (Cows, Dogs, Donkeys)
20. Books are kept in the _____
(shelf, toilet, kitchen)
21. Animals which are kept at home are _____
(domestic, wild, forest)
22. Name the road sign below



(children crossing, zebra crossing, hospital)

- 23. A person who sells things in the shop is called a _____
(shopkeeper, barber, market)
- 24. A low area between two hills is called _____
(hill, valley, swamp)
- 25. Many trees growing together make a _____
(mountain, forest, farm)
- 26. A _____ shows the lesson for each day.
(register, teacher, timetable)
- 27. The meat of a sheep is called _____
(beef, mutton, pork)
- 28. The _____ keep our school safe at night.
(watchman, cook, teacher)
- 29. We sit and rest in the _____
(bedroom, kitchen, sitting room)
- 30. When a child is overworked, that is called _____
(right, need, abuse)


C. R. E

- 31. Our father who art in _____
(earth, sky, heaven)
- 32. Moses was given _____ commandments.
(12, 2, 10)
- 33. _____ baptised Jesus.
(Joseph, Peter, John the baptist)
- 34. We should _____ the needy.
(beat, help, abuse)
- 35. David killed _____
(Samson, Noah, Goliath)
- 36. _____ was God's friend.
(Cain, Abraham, sathan)


- 37. _____ was sold in Egypt by his brothers.
(Daniel, Samuel, Joseph)
- 38. Jesus _____ little children
(hate, loves, beat)
- 39. _____ built an ark.
(Moses, Noah, Peter)
- 40. God created _____ to give us light during the day.
(moon, sun, stars)
- 41. We speak to God through _____
(praying, jumping, dancing)
- 42. The first book in the Bible is _____
(Matthew, Genesis, Revelation)
- 43. The first people to see baby Jesus were _____
(wisemen, shepherds, watchman)
- 44. Immanuel means _____
(God with us, saviour, God's love)
- 45. A person who cannot see is called _____
(dumb, blind, lame)
- 46. Who taught the disciple of the Lord's prayer _____
(Jesus, God, David)
- 47. _____ was the son of Abraham
(Isaac, Jonah, John)

Draw these pictures

48. Stars



49. Moon













- 50. A good _____ helped the man who was beaten by robbers
(samaritan, wisemen, Shepherd)



HIGH FLYER SERIES EVALUATION TEST

STANDARD TWO – YEAR 2016

MARKING SCHEME

ENGLISH	KISWAHILI	MATHS	SCIENCE	SOCIAL STUDIES	C.R.E.
1. –	1. Mtoto	1. Twenty seven	1. Smell	1. Forest	1. 6 th
2. –	2. Kikombe	2. Thirty three	2. Touch	2. Bridge	2. Church
3. –	3. Kisu	3. Ninety four	3. Taste	3. Valley	3. Hannah
4. –	4. Kiti	4. Sixty	4. Sight	4. Housing	4. Naomi
5. –	5. Tunda	5. 17	5. Perfume	5. Granary	5. Obedient
6. Tree	6. Mkembe	6. 18	6. Lemon	6. Toilet	6. Widow
7. Bottle	7. Samaki	7. 110	7. Water	7. Warm	7. Ezekiel
8. Book	8. Kikombe	8. 80	8. Red	8. Family	8. Jarius
9. Pencil	9. Nyumba	9. 29	9. White part	9. Rain	9. Neighbours
10. Blackboard	10. Shule	10. 15	10. Eyebrows	10. Niece	10. Jesse
11. Please	11. Minne	11. 72	11. Pupil	11. Shovel	11. Pray
12. Excuse	12. Tisa	12. 26	12. Spoon	12. Loam	12. Friday
13. Desk, disk	13. Sita	13. 37	13. Warm	13. Sisal	13. God
14. Ruler	14. Mitano	14. 23	14. Socks	14. Sitting	14. Anytime
15. House, horse	15. Kumi na sita	15. 33	15. 	15. Neighbours	15. 27
16. Boxes	16. Huyu	16. 10	16. 	16. Wild	16. Galilee
17. Pots	17. Hiki	17. 1 hundreds 0 tens 1 ones	17. 	17. Birthday	17. 1
18. Leaves	18. Hivi	18. 0 hundreds 9 tens 9 ones	18. Gloves	18. July	18. Revelation
19. Houses	19. Hawa	19. 8 0'clock	19. Toilet	19. Stores	19. Nephew
20. Mangoes	20. Wageni	20. 12	20. Seedling	20. Rainy	20. Sirs
21. Bad	21. Vyakula	21. Sh 34 95 cts	21. Zebra	21. Guard	<u>I.R.E.</u>
22. Big	22. Watoto	22. Sh 23 50 cts	22. Weeding	22. Uniform	1. Ibrahim
23. Dirty	23. Visu	23. 9 hundreds 0 tens 0 ones	23. Long thin	23. People	2. 25
24. Boy	24. Wavulana	24. 3	24. Banana	24. Heavy	3. Grasi
25. Hot	25. Fagio	25. 12	25. Wind	25. Hurt	4. Bismillah
26. Cutting	26. Kiatu	26. October	26. 	26. Money	5. Allah
27. Writing	27. Kisu	27. 70	27. 	27. Attention	6. Adam
28. Stopping	28. Saa	28. 14	28. 	28. Right	7. Quran
29. Eating	29. Mdomo	29. 10	29. 	29. Education	8. Always
30. Drawing	30. Miti	30. 2	30. 	30. Clothes	9. Four
31. Bottle	31. Kichana	31. 29	31. 		10. Salat
32. Table	32. Kikombe	32. Oval	32. 		11. Amina
33. Flower	33. Msichana	33. Square	33. Jackets		12. Faith
34. Woman	34. Chupa	34. Curved	34. Gumboots		13. Right
35. Bag	35. Kitabu	35. Triangle	35. Cow		14. Take udhu
36. 96	36. Msichana	36. Zigzag line	36. Milk and meat		15. Good
37. 14	37. Nyanya	37. 4	37. Water		16. Jumaa
38. One hundred	38. Rafiki	38. 0, 6, 12, 19, 21, 33	38. Mosquito		17. Good
39. 87	39. Mweupe	39. B	39. Web		18. 6
40. Thirty two	40. Ngumu	40. 10	40. Flea		19. Jazaakallah
41. an	41. Duara	41. 406	41. Snail		20. Al-Fatiha
42. a	42. Pembe tatu	42. Saturday	42. Glass		
43. an	43. Duara dufu	43. Sh 18	43. Donkey		
44. a	44. Usile	44. 30	44. Soil		
45. a	45. Usisimame	45. 14	45. Plants		
46. –	46. Usikimbie	46. 44	46. Dustpan		
47. –	47. Sijambo	47. 20	47. Circle		
48. Five	48. Marahaba	48. 703	48. Cakes		
49. Twelve	49. Baraka	49. 2	49. Ringworm		
50. Oval	50. Kitanda	50. 68	50. Tidy		
			51. After		
			52. Carrot		
			53. Clay		
			54. Towel		