



HIGH FLYER SERIES EVALUATION TEST
STANDARD THREE – YEAR 2016
MATHEMATICS



DATE:

NAME: SCHOOL:

1. $60 + 30 + 200 =$ _____

2. $48 + 93 =$ _____

3.
$$\begin{array}{r} 120 \\ - 48 \\ \hline \end{array}$$

4.
$$\begin{array}{r} 346 \\ + 264 \\ \hline \end{array}$$

Complete

5. 6, 12, _____, 24, 30

6. 50, 40, _____, 20, 10

7. Add 329 to 4000 = _____

8. If you subtract 268 from 400, you get _____

9. $8 \times 5 =$ _____

10. $6 \times 2 \times 2 =$ _____

11. _____ $\div 9 = 9$

12. _____ $\times 5 = 50$

13. 58 = _____ hundreds _____ tens
_____ ones

14. What is $\frac{1}{9}$ of 36? _____

15. September is the _____ month of the year.

16. Arrange from the largest to the smallest
120, 68, 246, 93, 166, 29

17. $84 - 7 =$ _____

18. Ann had 83 eggs. On her way, she fell and 38 eggs broke. How many eggs remained? _____

19. Share 72 sweets equally among 9 pupils. Each will get _____ sweets.

20. Six boys shared a piece of sugarcane. What fraction did each boy eat? _____

21. 6 weeks = _____ days

22.
$$\begin{array}{r} 507\text{m} \\ - 39\text{m} \\ \hline \end{array}$$

23.

Weeks	Days
4	6
- 1	3
<hr/>	

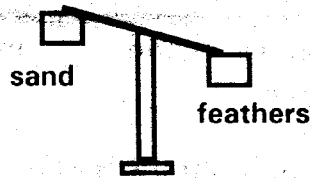
24.

Weeks	Days
6	4
+ 4	5
<hr/>	



$$\begin{array}{r} 25. \text{ Sh} \quad \text{cts} \\ 3 \quad 10 \\ \times \quad 3 \\ \hline \end{array}$$

26.

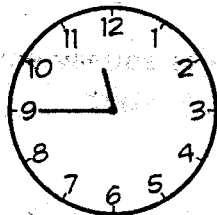


The feathers weigh _____ than the sand.
(lighter, heavier, same)

27. A 100 shilling note = _____ fifty shilling notes.

$$28. 5 \overline{) \text{sh } 25 \text{ } 50\text{cts}}$$

29.



The time shown is _____

30. Allan, Tom and Henry ate $\frac{1}{5}$ of a cake each. What fraction did they eat altogether? _____

31. _____ is the first day of the week.

32. In Upendo primary school, there are 236 girls and 362 boys. How many pupils are there altogether?

$$33. \begin{array}{r} 4686 \\ - 1785 \\ \hline \end{array}$$

$$34. \begin{array}{r} 3498 \\ + 2109 \\ \hline \end{array}$$

$$35. \quad _ \times 9 = 90$$

$$36. 56 = \quad _ \times 7$$

37. How many days are there in September and December altogether? _____

Write in words or figures

$$38. 999 = \quad _$$

$$39. 4011 = \quad _$$

40. Three hundred and nine _____

41. Which number is found between 299 and 301? _____

42. Six children have 9 sweets each. How many sweets do they have altogether? _____

43.

$$\text{OOOOOO} \text{ OOOOOO} \text{ OOOOOO} \quad _ \times \quad _ = \quad _$$

44. A new pencil costs sh 2.50. What is the cost of 2 pencils?

45. What is a half of 30? _____

46. 28 days = _____ weeks

$$47. \begin{array}{r} \text{Weeks} \quad \text{Days} \\ 5 \quad 4 \\ - 2 \quad 6 \\ \hline \end{array}$$

48. 3 litres = _____ half litres

49. 200 cents = _____ shillings

50. Which one is heavier? 2kg of stones or 2kg of cotton?
(stone, none, cotton)





HIGH FLYER SERIES EVALUATION TEST

STANDARD THREE – YEAR 2016

SCIENCE

DATE:

NAME: SCHOOL:

1. _____ gives us energy to do work.
(Clothes, Food, Exercise)

2. We should sleep for _____ hours in a day. (eight, ten)

Match these animals with how they move.

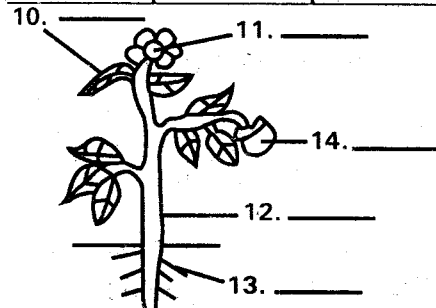
<u>Animal</u>	<u>how it moves</u>
3. Ostrich	flying
4. Bat	swimming
5. Millipede	walking
6. Turtle	crawling

7. Sight is ability to _____.
(hear, smell, see)

8. _____ does not lay eggs.
(Lizard, Monkey, Ostrich)

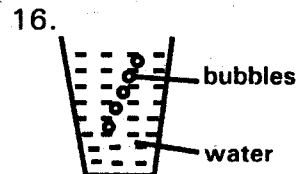
9. _____ does not give us light.
(Candle, Bell, Star)

Name the plants of a plant shown.



(Fruit, stem, root, leaf, flower)

15. Which plant grows in dry places?
(arrow root, cactus, papyrus)




The bubbles show that water has _____. (soil, air, animals)

17. An optician treats our _____.
(teeth, ears, eyes)

18. Medicines got from plants are called _____.
(drugs, herbs)

19. _____ makes bean seeds to germinate. (water, light, soil)

20. We pluck a _____ to produce sound. (drum, whistle, nyatiti)

21.  This is a _____.
(knife, panga, jembe)

22. Clothes are made from _____.
(cotton, sunflower, palm tree)

23. Mosquitoes spread _____.
(cholera, malaria, typhoid)

24. Sick people should visit _____ to get treatment.
(Church, hospital, Mosque)

25. Which animal lives in the soil?
(earthworm, cockroach, fish)

26. We use _____ to kill germs in the toilet. (soap, disinfectant, spirit)

Name these personal items.

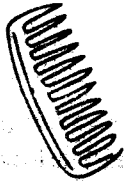
27.



28.



29.



(Comb, handkerchief, toothbrush)

30. A mirror _____ a lot of light.
(absorbs, reflects, produces)

31. Which soil feels rough?
(clay, loam, sand)

32. A flightless bird is _____.
(ostrich, weaver bird, flamingo)

33.



This is a _____ leaf.
(maize, banana, jacaranda)

34. A _____ has many legs.
(millipede, snail, snake)

35. Crops cannot be cared for by _____.
(uprooting, weeding, watering)

36. We eat the leaves of _____.
(sugar cane, onion, carrot)

37. Sound travels in _____ directions.
(two, all, one)

38. A balloon is normally filled with _____.
(water, air, smoke)

39. The dark part of the eye is called _____.
(eyebrows, white part, pupil)

40. A chameleon _____ to escape its enemies.
(coils, plays dead, changes colour)

41. Bees make honey and _____.
(wax, glue)

42. Which one is not a social animal?
(termite, bees, butterflies)

43. We cannot see _____ in the sky at night. (clouds, stars, sun)

44.



This symbol shows a _____ day.
(rainy, cloudy, windy)

45. _____ is not a special sound.
(Ringing Bell, Screaming, Shouting)

46. Pork meat is got from a _____.
(cow, pig, sheep)

47. We transport water by _____.
(dams, pipes, tanks)

48. The body of a fish is covered with _____.
(hair, scales, feathers)

49. A modern toilet is also called _____.
(urinal, latrine, water closet)

50. Which one is a form of rest?
(sleep, exercise, skipping)





HIGH FLYER SERIES EVALUATION TEST
DARASA LA TATU – MWAKA 2016
KISWAHILI: LUGHA

TAREHE:

JINA: SHULE:

Imla

1. _____
2. _____
3. _____
4. _____
5. _____

Jaza pengo

6. ____ iat ____
7. Ny ____ k ____
8. Ng ____ ru ____ e
9. M ____ h ____ l ____
10. ____ m ____ e

Andika maneno vizuri

11. ndatu _____
12. mbanyu _____
13. sarada _____
14. eezm _____
15. kemwanam _____

Kanusha sentensi hizi

16. Kunywa maji _____
17. Andika vibaya _____
18. Mfereji umetoboka _____
19. Ingia darasani _____
20. Baba alikuja jana _____

Andika kinyume

21. Kufa _____
22. Cheka _____
23. Ndefu _____
24. Tamu _____
25. Adui _____

Kamilisha methali

26. Macho hayana _____
27. Haba na haba hujaza _____
28. Fuata nyuki ule _____
(asali, pazia, mpende, kibaba)

Andika tarakimu kwa maneno

29. 562 _____
30. 603 _____

31. 513 _____

32. 124 _____

Chagua jibu sahihi

33. Chakula ni _____
(hii, hiki, huyu)

34. Sitaki _____
(kula, kukula)

35. _____ ni mahali panapo
pandwa mimea.
(Chambani, Shambani)

36. Matunda _____ ni matamu.
(hii, hizi, haya)

Kamilisha sentensi

37. Baba ya baba yangu ni?

(babu, nyanya)

38. Kaka wa baba yangu ni? _____
(mjomba, ami, baba)

39. Anaye tibu wagonjwa ni? _____
(dereva, daktari)

40. Anaye funza watoto ni? _____
(shangazi, mwalimu)

41. Anaye uguza wagonjwa ni

(daktari, muuguzi)

Andika kwa wakati uliopita

42. Mgonjwa atapona _____

43. Uzi unakatika _____


44. Mama atapika _____

45. Mtoto atalia _____


46. Mwalimu amefika _____

Chora maumbo haya


47. Pembe tatu




48. Mraba



49. Duara



50. Mstatili





HIGH FLYER SERIES EVALUATION TEST
STANDARD THREE – YEAR 2016
READING

DATE:

NAME: SCHOOL:

Read these words

- | | |
|--------------|-------------|
| 1. Afternoon | 6. Birthday |
| 2. Palace | 7. Evening |
| 3. Assembly | 8. Daughter |
| 4. Buttons | 9. Buzz |
| 5. Please | 10. Ladder |

Read these sentences

11. The children are writing.
12. Asha cooked the sweet food.
13. Did she wash all the clothes?
14. He is going out to cut the tree.
15. The people were singing loudly.

Read the passage below

There are four members in my family. My mother is called Mrs. Muhindi. She is a housewife. I have one sister but no brother. We love and respect each other. We live as a happy family for we forgive one another.





HIGH FLYER SERIES EVALUATION TEST
STANDARD THREE – YEAR 2016
ENGLISH: LANGUAGE

DATE:

NAME: **SCHOOL:**

Dictation

1. _____
2. _____
3. _____
4. _____
5. _____

Make doing words -ing

6. Drive _____
7. Run _____
8. Clean _____
9. Break _____
10. Swim _____

Opposites

11. Shallow _____
12. Late _____
13. Outside _____
14. Start _____
15. Infront _____
(behind, deep, early, inside, stop)

Use 'was' or 'were'

16. The pens _____ lost.
17. The glasses _____ broken.
18. She _____ angry.
19. They _____ sad.
20. The house _____ dark.

Use a or an

21. My sister ate _____ egg.
22. My grandfather has _____ phone.
23. I saw _____ elephant at the park.
24. The girl found _____ coin.
25. My mother sat on _____ chair.

Choose the correct word

26. Where is your brother? Is _____ coming? (she, he, they)
27. My cousin _____ near me. (lives, leaves, lifes)
28. I like my shoes _____ are new. (it, he, they)

29. Allan went _____ bed early.
(to, too, two)

30. It is _____ o'clock.
(too, two, to)

Use 'this' or 'these'

31. _____ are oranges.

32. Is _____ my pen?

33. Are _____ children going to school?

34. Come and take _____ box.

35. Bring _____ story books.

Write in words or figures

36. 116 _____

37. Eighty six _____

38. Three hundred and six _____

39. 49 _____

40. 93 _____

Use mine, yours, ours

41. These are our books. They are _____.

42. Give me this umbrella. It is _____.

43. That is our house. It is _____.

44. This is your dog. It is _____.

45. That is my ball. It is _____.

Complete

46. As fat as a _____

47. As tall as a _____

48. As busy as a _____

49. As cold as _____

50. As happy as a _____
(bee, pig, king, ice, giraffe)





HIGH FLYER SERIES EVALUATION TEST
DARASA LA TATU – MWAKA 2016
KUSOMA

TAREHE:

JINA: SHULE:

Soma maneno haya:-

- | | | |
|------------|--------------|------------|
| 1. Jogoo | 8. Goti | 15. Saa |
| 2. Vibanda | 9. Vyandarua | 16. Rangi |
| 3. Mbolea | 10. Adhuhuri | 17. Nywele |
| 4. Buchari | 11. Wakati | 18. Mraba |
| 5. Sikio | 12. Chafya | 19. Washa |
| 6. Mkate | 13. Ruhusa | 20. Picha |
| 7. Meza | 14. Kitabu | |

Soma sentensi zifuatazo:-

21. Nifundishe kuwasha moto.
22. Wamechukua vyombo vyao vyote.
23. Ng'ombe alizaa ndama.
24. Wageni walibeba mizigo.
25. Nyinyi mlicheza uwanjani.





HIGH FLYER SERIES EVALUATION TEST
STANDARD THREE – YEAR 2016
CHRISTIAN RELIGIOUS EDUCATION

DATE:

NAME: SCHOOL:

1. _____ is the day one was born.
(**Birthday, Sunny day, Christmas**)
2. _____ praised God for giving her a son. (**Peninah, Hannah, Miriam**)
3. The first disciples of Jesus were _____
(**tax-collectors, fishermen, farmers**)
4. The Kings of Egypt were called _____
(**President, Patriachs, Pharaohs**)
5. When my friend does something wrong, I should _____
(**beat, abuse, forgive**)
6. Jesus parents lived in _____
(**Jerusalem, Bethlehem, Nazareth**)
7. A _____ person cannot see.
(**dumb, deaf, blind**)
8. When we say the truth, we are _____
(**sorry, honest, jealous**)
9. We should always _____ before sleeping. (**eat, pray, bath**)
10. On the Sabbath day, we should _____
(**work, rest, play**)
11. The disciples received the _____ Spirit on the day of Pentecost.
(**bad, Holy, evil**)
12. _____ annoys God.
(**Honesty, Sin, Friendship**)
13. The father of John the Baptist was called _____
(**Eli, Elikanah, Zachariah**)
14. God cares for His creation.
(**yes, I don't know, No**)
15. David killed _____
(**Saul, Solomon, Goliath**)
16. _____ is the time of getting ready for the birth of Jesus.
(**Pentecost, Advent, Christmas**)
17. Who was the father of Moses?
(**Aaron, Amram, Jochebed**)
18. The patriach of Israel who called "the father of Faith" was _____
(**Isaac, Jacob, Abraham**)
19. The wife of _____ was called Zipporah. (**Noah, Moses, Eli**)
20. Elijah was taken up in a _____ of fire. (**aeroplane, wind, chariot**)





HIGH FLYER SERIES EVALUATION TEST
STANDARD THREE – YEAR 2016
SOCIAL STUDIES

DATE:

NAME: SCHOOL:

1. Many _____ put together make a division.
(districts, locations, villages)

2. _____ is not a source of water. (Rain, River, Tap)

3.



The weather shown is _____.
(windy, rainy, cloudy)

4. When we throw dirty things in the river, we are _____ it.
(cleaning, washing, polluting)

5. A child has a right to _____.
(be beaten, be abused, food)

6. Drinking water should be _____.
(cleaned, filtered, boiled)

7. On hot days, we wear _____ clothes. (few, light, heavy)

8. District Education Officer is in-charge of _____ in the district.
(health, education, animals)

9. Road signs must be followed by _____.
(pilots, passengers, motorists)

10. If we disturb bees, they can _____ us.
(bite, sting, kick)

11. When riding a bicycle, you put your feet on the _____.
(sandal, pedal, carrier)

12. Some things that can be used to make life comfortable are called _____.
(land, pollution, resources)

Match these people with their work places

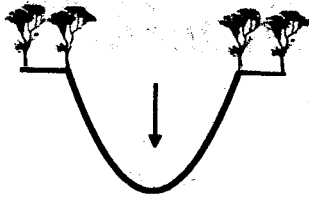
13. Typist _____ hospital

14. Policeman _____ office

15. Nurse _____ police station



16.



This physical feature is a _____.
(hill, valley, swamp)

17. Crops grown for eating at home are known as _____ crops.
(food, sale, cash)

18. _____ clouds bring rain.
(White, Dark, Light)

19. We record weather on a _____.
(time table, weather chart, register)

20. Ducks, chicken and turkeys are examples of _____.
(livestock, dairy, poultry)

21. _____ takes his orders from the District officer.
(Chief, D.O., Elder)

22. Houses protect us from the following except _____.
(bad weather, friends, wild animals)

23. Money paid for the houses which we live in is called house _____.
(tax, fare, rent)

24. People who sell fish are called _____.
(fish eaters, hawkers, fish mongers)

25. Sheep give us meat and _____.
(pork, wool, eggs)

26. The fastest means of transport is _____ transport.
(road, railway, air)

27. On 12th December every year, we celebrate _____ Day.
(Heroes, Jamhuri, Makadara)

28. _____ is the main source of water.
(River, Tap, Rain)

29. How many days do you go to school in a week?
(seven, four, five)

30. The Deputy President of Kenya is _____.
(Ruto, Uhuru, Raila)

