



HIGHRANK EXAM SERIES

STANDARD THREE

YEAR 2016

[3]

MATHEMATICS

NAME: _____ SCHOOL: _____ DATE: _____

1. What is the place value of digit 6 in 4612? _____

Write in symbols or words

2. $614 =$ _____

3. Eight hundred and sixteen
 $=$ _____

4. $460 =$ _____

Arrange from the largest to the smallest

5. 604, 214, 506, 447

6. 835, 915, 951, 853

7.
$$\begin{array}{r} 1 \\ 6 \\ +3 \\ \hline \end{array}$$

8.
$$\begin{array}{r} 8 \\ 5 \\ +3 \\ \hline \end{array}$$

9. $6483 =$ _____ thousands _____
hundreds _____ tens
_____ ones.

10. $156 =$ _____ thousands _____
hundreds _____ tens
_____ ones.

11. 2 thousands 4 hundreds 7 tens
9 ones $=$ _____

12.
$$\begin{array}{r} 2164 \\ +3241 \\ \hline \end{array}$$

13.
$$\begin{array}{r} 4630 \\ +2165 \\ \hline \end{array}$$

14.
$$\begin{array}{r} 7895 \\ -6312 \\ \hline \end{array}$$

15.
$$\begin{array}{r} 9546 \\ +4613 \\ \hline \end{array}$$

16. $7 \times 10 =$ _____

17. $8 \times 10 =$ _____

18. Five cows have _____ legs.

19. Nine hens have _____ eyes.

20. $64 \div 8 =$ _____



HIGHRANK EXAM SERIES

[3] STANDARD THREE

ENGLISH YEAR 2016

NAME: _____ SCHOOL: _____ DATE: _____


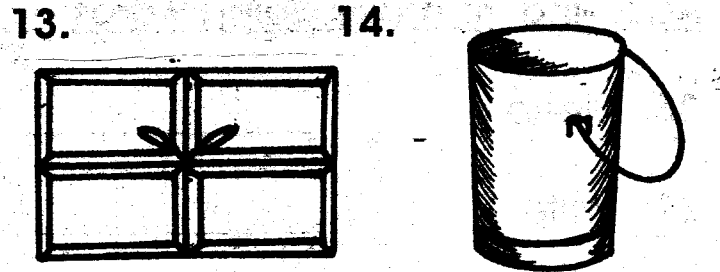

Dictation

1. _____
2. _____
3. _____
4. _____
5. _____

Arrange the letters to make correct words

6. stga - _____
7. okob - _____
8. ichdl - _____
9. anteleph - _____
10. sheterl - _____

Write the names of the pictures



Write the past tense

16. Sleep - _____
17. Think - _____
18. Eat - _____
19. Jump - _____
20. Come - _____

Write the opposites

21. Hot - _____
22. Float - _____

23. Clean - _____
24. Dark - _____
25. Come - _____

Add '-ing' to make doing words

26. Sleep - _____
27. Write - _____
28. Take - _____
29. Give - _____
30. Jump - _____

Write in plural

31. Ox - _____
32. Leaf - _____
33. Hand - _____
34. Church - _____
35. Jug - _____

Use 'was' or 'were'

36. The dog _____ barking yesterday.
37. They _____ given fruits.
38. Tom _____ taken to school last year.

39. All parents _____ present last week.

40. She _____ given a present.

Arrange in ABC order

41. pot, apple, ball, good

42. angel, cow, pen, blanket


43. meat, grass, spoon, hen

44. plate, sweet, girl, boy

45. chalk, look, glass, finger

Complete the sentences by choosing the correct word

46. The young one of a cows is a _____ (cub, calf, kitten)
47. A _____ cuts people's hair. (cobbler, tailor, barber)
48. The sister to my father is my _____ (aunt, uncle, grandmother)
49. The colour of milk is _____ (purple, green, white)
50. A _____ flies an aeroplane (driver, cyclist, pilot)



HIGHRANK EXAM SERIES

STANDARD THREE

YEAR 2016

[3]

READING & KUSOMA

NAME: _____

SCHOOL: _____

DATE: _____

READING

Read these words

- | | | | |
|--------------|-------------|----------------|--------------|
| 1. Ambulance | 6. Accuse | 11. Television | 16. True |
| 2. Bandage | 7. Polite | 12. Elephant | 17. Leopard |
| 3. Blouse | 8. Flute | 13. Science | 18. Mosquito |
| 4. Sweat | 9. Garden | 14. Female | 19. Trough |
| 5. Excuse | 10. Syringe | 15. Destroy | 20. Farmer |

Read these sentences

21. We have eaten all the oranges.
22. She gave me this shirt.
23. Two policemen came here yesterday.
24. His tongue was swollen yesterday.
25. The door to that house is broken.


KUSOMA

Soma malina haya

- | | | | |
|-------------|--------------|--------------|-------------|
| 1. Nguruwe | 6. Mwavuli | 11. Zulla | 16. Uongo |
| 2. Masikio | 7. Chiriku | 12. Maombi | 17. Maradhi |
| 3. Dhambi | 8. Theluji | 13. Shangazi | 18. Uongozi |
| 4. Mawimbi | 9. Mzalendo | 14. Udongo | 19. Lugha |
| 5. Barabara | 10. Karakana | 15. Kaptura | 20. Vumbi |

Soma sentensi hizi

21. Wanafunzi wote wameenda shambani.
22. Daktari yule anaenda kuwatibu wagonjwa.
23. Jua hutua upande wa magaribi.
24. Ni vyema kuwafii wazazi wetu.
25. Vitabu vyote viliwekwa ndani ya mkoba.



HIGH RANK EXAM SERIES

[3]
KISWAHILI

DARASA LA TATU
MWAKA 2016

JINA _____

SHULE: _____

TARHE: _____

Imla

1. _____
2. _____
3. _____
4. _____
5. _____

Andika kwa wingi au umoja

6. Mikeka - _____
7. Klatu - _____
8. Nguo - _____
9. Jicho - _____
10. Wavuvi - _____

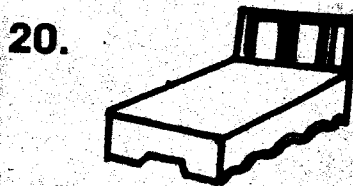



Jaza pengo

11. K ____ ch ____
12. W ____ z ____ zi
13. Bl ____ nk ____ ti

14. M ____ mb ____

15. Ask ____ r ____

Andika majina ya picha



Andika kinyume

21. Baridi - _____
22. Enda - _____
23. Ndogo - _____
24. Chini - _____
25. Msihana - _____

Kamilisha methali na vitendawili

26. Haraka haraka halina _____
27. Askari mlangoni _____
28. Agnesi maridadi _____
29. Adui _____
30. Asiyesikia la mkuu huvunjika _____

(guu, baraka, kipepeo, mpende, kufuli)

kamilisha ukitumia 'huyu' au 'hawa'

31. _____ ni watoto wadogo.
32. _____ ni wageni wetu.
33. Mbuzi _____ anakula nyasi.
34. Mzazi _____ ana gari jipya.
35. Walimu _____ ni wazuri.

Kanusha sentensi

36. Enda nyumbani.

37. Pika chakula.

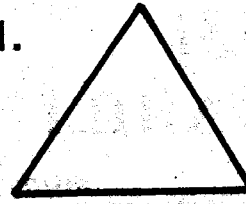
38. Anasoma gazeti.

39. Yule ni nyanya.


40. Kuja hapa.

Andika majina ya maumbo haya


41.



42.




43.



44.



45.



Chagua neno tofauti kati ya haya

46. Punda, ng'ombe, simba, mbuzi

47. Kalamu, koti, kitabu, rula.

48. Lori, matatu, basi, kitanda.

Kamilisha sentensi hizi

49. Mtoto wa mjukuu ni _____
(binamu, ami, kitukuu)
50. Rangi ya damu ni _____
(nyeusi, nyekundu, nyeupe)



HIGHRANK EXAM SERIES

STANDARD THREE


YEAR 2016

[3]


007 SCIENCE

NAME: _____ SCHOOL: _____ DATE: _____


1. A _____ moves by crawling.
(cat, snake, cow)
2. The sense organ of sight is the _____
(eyes, ears, tongue)
3. Honey tastes _____
(sour, bitter, sweet)
4. Air cannot be _____
(breathed, seen, felt)
5. We eat the _____ of carrots
(leaves, roots, stems)
6. Which is the best shape for a wheel?



A.



B.



C.

7. A _____ coils when touched.
(frog, leaves, millipede)
8. Most leaves are _____ in colour.
(white, red, green)
9. A _____ is not a source of water.
(dam, tap, river)
10. A kite flies best when it is _____
(calm, rainy, windy)

11. When seeds begin to grow, we say that they are _____
(drying, germinating, ripening)

12.  This animal lives in _____
(soil, grass, water)

13. An insect has _____ legs
(6, 4, 8)

14. Unwanted plants are called _____
(fruits, weeds, trees)

15. The best soil for modelling is _____
(loam, sand, clay)

16. A _____ does not have legs.
(snail, donkey, pig)

17. A cow has _____ horns.
(6, 2, 4)

18. We taste food using the _____
(eyes, nose, tongue)

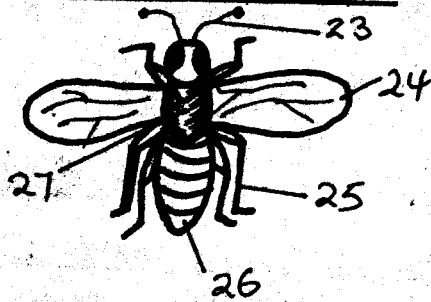
19. After hardwork, we need _____
(rest, exercise, more work)

20. Shadows are shortest at _____
(morning, evening, noon)

21. A bird flies using its _____
(beak, claws, wings)

22. A _____ is a source of light.
(whistle, glow worm, drum)

Name the parts of an insect


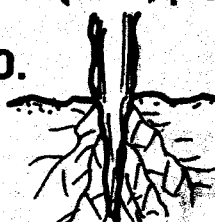



23. _____
 24. _____
 25. _____
 26. _____
 27. _____

(Thorax, Feelers, Legs, Abdomen, Wings)

28. A rainbow has _____ colours
 (7, 6, 5)
29. We take care of animals at home by _____
 (beating them, killing them, giving them water)
30. We _____ a drum to produce sound.
 (blow, hit, shake)
31. A hen gives us _____
 (eggs, milk, wool)
32. We eat the _____ of oranges.
 (roots, fruits, leaves)
33. Milk is _____ in colour
 (white, large, small)
34. Big things look _____ when they are far away from us.
 (white, large, small)
35. Boiling water kills _____
 (dirt, colour, germs)
36. The way of expressing your feeling using your face is called _____
 (shouting, facial expression, hiding)

37.  This is a source of _____
 (rainfall, air, light)

38. Clean water is _____
 (green, blue, colourless)
39. A _____ has horns.
 (cat, donkey, cow)
40. A _____ is a harmful animal.
 (flea, dog, fish)
41. A knee is part of the _____
 (arm, leg, neck)
42. A long period without rain is called _____
 (drought, floods, sunshine)
43. We wear light clothes when it is _____
 (cold, rainy, hot)
44.  This is a seed for _____
 (maize, pineapple, beans)
45. A _____ moves by flying
 (butterfly, centipede, rat)
46. Long and dirty fingers carry _____
 (water, food, germs)
47. Moving air is called _____
 (clouds, dust, wind)
48. _____ is a special sound.
 (Whispering, Snoring, Screaming)
49. A _____ sinks in water.
 (nail, paper, feather)
50.  This a _____ of a plant.
 (fruit, leaf, root)



HIGHRANK EXAM SERIES

STANDARD THREE

[3]

007 SOCIAL STUDIES & C.R.E

YEAR 2016

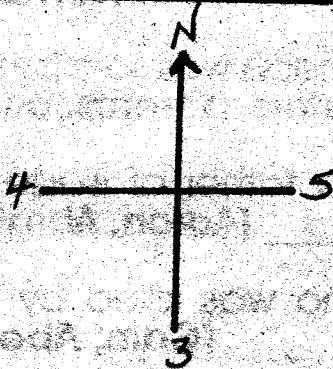
NAME: _____

SCHOOL: _____

DATE: _____

1. _____ is an element of weather.
(Vegetation, Soil, Sunshine)

Use the diagram to answer questions 2 - 5:-



2. The above diagram is used to show _____
(distance, direction, size)

3. The part marked 3 is _____
(North, South, East)

4. The part marked 4 is _____
(East, West, South)

5. The part marked 5 is _____
(West, North, East)

6. A nuclear family is made up of father, children and _____
(aunt, grandfather, mother)



This is a house for the _____
(Akamba, Luo, Maasai)

8. We sleep in the _____
(kitchen, bathroom, bedroom)

9. People walking along the road are called _____
(passengers, motorists, pedestrians)

10. People who catch fish are called _____
(pastoralists, farmers, fishermen)

11. Class rules must be _____
(disobeyed, hated, obeyed)

12. The national flag has _____ colours. (4, 5, 3)

13. Many trees growing together form a _____
(hill, valley, forest)

14.  This is a _____
(valley, plain, swamp)

15. Our Sub-county is called _____

16. Our school is headed by a _____
(headteacher, prefect, watchman)

17. People buy and sell goods in a _____
(hotel, market, farm)

18. Every child has a right to _____
(flight, work, educate)

19. Every school must have _____
(classrooms, buses, cows)


20. We wear gumboots when it is _____
(dusty, muddy, dry)

21. The roof of a hut is thatched using _____
(tiles, grass, iron sheets)

22. Our deputy president is called _____
(Uhuru, Ruto, Kalonzo)

23. A _____ is a means of communication.
(basket, radio, book)

24. _____ is an economic activity.
(Shouting, farming, Sleeping)

25.  This road sign shows _____ ahead.
(zebra crossing, hospital, round about)

26. We enter the school through the _____
(fence, window, gate)

27. A compass has _____ cardinal points. (2, 6, 4)

28. Mother and father are my _____
(children, parents, cousins)

29. Pupils go to school to _____
(learn, play, eat)

30. Cutting of trees without replacing is called _____
(afforestation, reafforestation, deforestation)

C.R.E

31. The first book in the Bible is _____
(Matthew, Exodus, Genesis)

32. Adam and Eve lived in the garden of _____
(Gethsemane, Eden, Olives)

33. _____ built an ark
(Moses, Aaron, Noah)

34. Who was the priest when God called Samuel?
(Elkanah, Elizabeth, Eli)

35. The Maasai call their God _____
(Enkal, Ngai, Asis)

36. God gave Moses the ten commandments on mount _____
(Nebo, Ararat, Sinai)

37. The Old Testament has _____ books. (66, 39, 27)

38. Muslims worship in a _____
(church, shrine, mosque)

39. Joseph was sold by his _____
(sisters, parents, brother)

40. The father of Isaac was called _____
(Aaron, Abraham, Terah)

41. Who was killed by his brother?
(Cain, Abel, Seth)

42. During the time of Noah, God destroyed the earth using _____
(fire, wind, floods)

43. Jesus was born in _____
(Bethlehem, Nazareth, Cana)

44. The _____ gave baby Jesus gifts.
(shepherds, wisemen, disciples)

45. King _____ wanted to kill baby Jesus.
(David, Herod, Pilate)

46. Jesus taught that we should _____ our enemies. (beat, hate, love)

47. Jesus healed _____ lepers
(1, 2, 10)

48. Who denied Jesus three times?
(Judas, Thomas, Peter)

49. Telling the truth is being _____
(obedient, honest, respectfully)

50. When you wrong your deskmate, you should say _____
(very bad, thank you, sorry)