



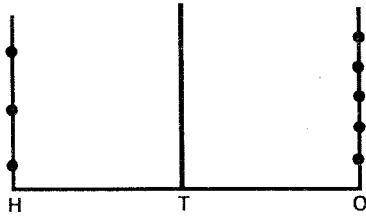
HIGH FLYER SERIES EVALUATION TEST
STANDARD THREE – YEAR 2016
MATHEMATICS



DATE:

NAME: SCHOOL:

1. 2046 is _____ than 4046.
 (bigger, smaller)



2. What number is shown in the abacus? _____

3. $309 + 346 =$ _____

4. $752 - 324 =$ _____

5. What is $\frac{1}{2}$ of 12 = _____

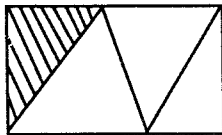
6. $906 + 54 =$ _____

7. _____ is the third day of the week.

8. 456 people visited a hospital. If 249 were children, how many were adults? _____

9. 675 take away 56 = _____

10. What fraction is not shaded?



11. What number is missing?
 4, 8, 12, _____, 20

12. A pen costs sh 7. How much will I pay for 5 pens? _____

13. $64 = 8 \times$ _____

14. $99 - 89 =$ _____

15. Grandfather had 40 goats. He sold 12 goats. How many goats remained? _____

16. _____ - 23 = 50

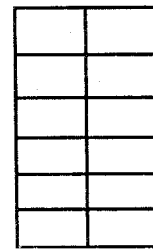
17. $296 +$ _____ = 300

18. Kate got 38 marks in a test and 97 in another test. How many marks did she get altogether?

$$\begin{array}{r} 588 \\ +292 \\ \hline \end{array}$$

$$\begin{array}{r} 108 \\ -97 \\ \hline \end{array}$$

21. Which number is greater 901 or 801? _____



22. How many small squares can you count? _____

Weeks	Days
3	4
+ 4	2
<hr/>	

$$\begin{array}{r} 265 \\ 300 \\ +183 \\ \hline \end{array}$$



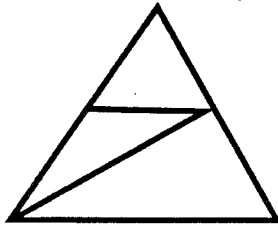
$$\begin{array}{r} 25. \quad \text{Sh} \quad \text{cts} \\ \quad 39 \quad 40 \\ + 23 \quad 45 \\ \hline \end{array}$$

26. We weigh meat in _____
(litres, kg, metres)

27. One boy has 2 legs. How many legs do 10 boys have? _____

$$\begin{array}{r} 28. \quad 975\text{m} \\ - 245\text{m} \\ \hline \end{array}$$

29. How many triangles? _____



30. A farmer had 680 goats. After drought 270 died, how many were left? _____

31. What is the difference between 500 and 380? _____

32. What month comes after May?

33. _____ + 120 = 360

$$\begin{array}{r} 34. \quad \text{Weeks} \quad \text{Days} \\ \quad 0 \quad 6 \\ + 1 \quad 2 \\ \hline \end{array}$$

35. $8 \times \underline{\quad} = 24$

36. $40 \div \underline{\quad} = 8$

37. A housefly has 6 legs. How many legs do 3 houseflies have?

38. Take away 215 from 300 _____

39. The wheel of a car is ___ in shape

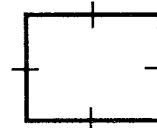
40. Write 2053 in words _____

$$\begin{array}{r} 41. \quad 558 \\ - 398 \\ \hline \end{array}$$

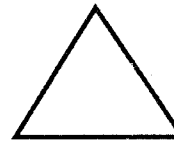
$$\begin{array}{r} 42. \quad 326 \\ - 195 \\ \hline \end{array}$$

Name these shapes

43.



44.



45. How many legs do 6 snakes have?

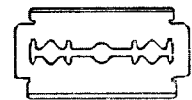
Find the cost



sh 3



sh 4



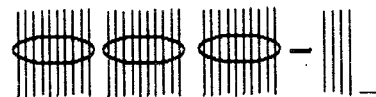
sh 7

46. 3 books and one razor blade will cost sh _____

47. What is the cost of 2 razor blades, one book and one pencil? _____

48. A cabbage weighs 3kg. How many kg will 4 cabbages weigh?

49.



50. Draw the next shape





HIGH FLYER SERIES EVALUATION TEST
STANDARD THREE – YEAR 2016
ENGLISH: LANGUAGE

DATE:

NAME: SCHOOL:

Dictation

1. _____
2. _____
3. _____
4. _____
5. _____

Write the opposite of the underlined word

6. He has a good father _____
7. He is a rich man _____
8. Shut the door _____
9. The tea is very hot _____
10. I have no enemy _____

Use 'was', 'were', 'with'

11. I cut _____ a knife.
12. You _____ late for school.
13. The gate _____ closed.
14. We _____ playing when the rain started.

15. The teacher _____ angry with me.

Name these pictures

16.




17.



18.

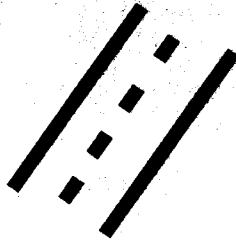


19.





20.



Write well

21. ybos _____

22. cilpen _____

23. syot _____

24. ttleba _____

25. lidayho _____

Use 'what', 'who', 'why', 'where', 'when'

26. _____ is your homework book?

27. _____ is your best friend?

28. _____ is your birthday?

29. _____ are you late?

30. _____ are you looking for?

Complete

31. tall, _____, tallest

32. _____, bigger, biggest

33. fat, _____, fattest

34. thin, thinner, _____

35. _____, better, best

Use 'to', 'too', 'two'

36. A bicycle has _____ wheels.

37. When are you coming _____ visit me?

38. There are _____ birds in the cage.

39. She is _____ old to walk.

40. The boys are going _____ the field.

Match the words

41. In _____ box

42. Bed _____ post

43. Flag _____ paste

44. Match _____ room

45. Tooth _____ side

Underline the odd word

46. dog, horse, lion, sheep

47. chair, sugar, table, bed

Complete

48. I am in class _____.

49. My teeth are _____ in colour.

50. We do not go to school for _____ days a week.





HIGH FLYER SERIES EVALUATION TEST

STANDARD THREE – YEAR 2016

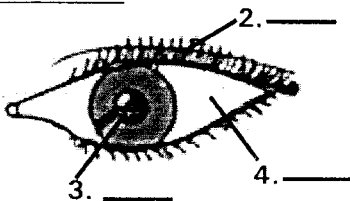
SCIENCE

DATE:

NAME: SCHOOL:

1. _____ is not a sense organ.
(Skin, Tongue, Heart)

Name the parts of the eye shown for question 2-4.



(white part, eye brows, iris)

5. Big things appear small when they are _____. (near you, far from you)
6. People with no sense of hearing are called _____. (blind, deaf)
7. We use _____ to communicate without speaking.
(phones, gestures, mouth)
8. Diseases make our body _____.
(strong, weak, active)
9. _____ is not good for a healthy body. (Rest, Exercise, Alcohol)
10. Which one is not a root we eat?
(carrot, onion, cassava)
11. _____ is not a form of exercising the body. (Skipping, Sleeping, Running)
12. We use _____ to kill germs in a latrine. (disinfectant, soap, water)
13. Drinking unboiled water can cause _____. (malaria, aids, cholera)

14. _____ is not a personal item.
(Hair brush, Toothbrush, Spoon)
15. We wipe our body with _____.
(towel, handkerchief, blanket)
16. Which plant does not grow in dry places? (cactus, sisal, arrowroot)
17. We eat the grains of _____.
(cabbage, maize, banana)
18. _____ plant is used for making cooking oil.
(Bean, Sunflower, Coffee)

Use the weather chart below to answer questions 19-22.

Day	Morning	Afternoon
Monday		
Tuesday		
Wednesday		
Friday		

19. It was _____ on Friday.
(rainy, sunny, cloudy)
20. On which day did pupils use umbrellas in the morning?
21. The weather conditions on Wednesday were _____ and _____.



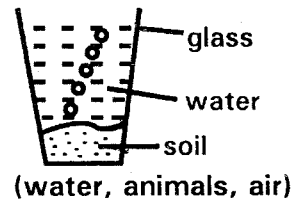
22. How many days did it rain?
23. Our shadows are shortest at _____.
(night, midday, morning)
24. The sun is always in the _____ in
the morning. (west, east, south)
25. All animals _____. (fly, move, walk)

**Match these animals with how they
move.**

- | <u>Animal</u> | <u>how it moves</u> |
|------------------|---------------------|
| 26. Snail | leaping |
| 27. Cockroach | swimming |
| 28. Grass hopper | gliding |
| 29. Tadpole | crawling |
30. A _____ coils to escape danger.
(centipede, lady bird, millipede)
31. Pig's meat is called _____.
(beef, mutton, pork)
32. A snail lives in a _____.
(shell, nest, web)
33. A _____ provides us with security
at home. (donkey, horse, dog)
34. Which is not a source of water?
(river, tap, rain)
35. We should always _____ drinking
water. (cool, boil, warm)
36. A _____ is not used to store
drinking water. (pot, dam, jerrican)
37. We can make water clean by _____.
(boiling, filtering, storing)
38. Which soil is sticky when wet?
(clay, sand, loam)

**Match the soils with where they are got
from.**

- | <u>Type of soil</u> | <u>where got from</u> |
|---------------------|-----------------------|
| 39. Loam | river bed |
| 40. Clay | garden |
| 41. Sand | river bank |
42. The first meal of the day is called
_____. (lunch, breakfast, supper)
43. You should not _____ fingers when
eating. (wash, lick)
44. Which food gives us energy to play?
(carrot, yams, kales)
45. _____ energy makes things hot.
(Sound, Heat, Light)
46. When things vibrate they produce
_____. (light, sound, electricity)
47. A fire engine and _____ are special
sounds. (screaming, shouting, crying)
48. This activity shows that soil has



49. We use _____ to cut timber.
(jembe saw, knife)

50.



This simple tool is called
_____. (pliers, spanner, screw driver)





HIGH FLYER SERIES EVALUATION TEST
DARASA LA TATU – MWAKA 2016
KUSOMA

TAREHE:

JINA: SHULE:

Soma maneno haya:-

- | | | |
|-----------------|--------------|--------------|
| 1. Karani | 8. Vikombe | 15. Kifuniko |
| 2. Mwalimu | 9. Chupa | 16. Mchele |
| 3. Kipindupindu | 10. Karatasi | 17. Kijiko |
| 4. Ombwa | 11. Mlango | 18. Sakafu |
| 5. Moja | 12. Shamba | 19. Mbegu |
| 6. Mjusi | 13. Jembe | 20. Kalamu |
| 7. Jambazi | 14. Mmea | |

Soma sentensi zifuatazo:-

21. Udongo huu ni mwekundu.
22. Kumbe wewe ni mwizi?
23. Matunda yale.
24. Jumba lile lina chumba cha kulala.
25. Joka limechoka.





HIGH FLYER SERIES EVALUATION TEST
STANDARD THREE – YEAR 2016
READING

DATE:

NAME: SCHOOL:

Read these words

- | | |
|---------------|---------------|
| 1. Sunshine | 6. Engineer |
| 2. Shoes | 7. Chase |
| 3. Television | 8. Berry |
| 4. Field | 9. Breakfast |
| 5. Leopard | 10. Beautiful |

Read these sentences

11. A barber shaves people's hair.
12. They are hiding under the table.
13. A donkey carries heavy loads.
14. My car is black in colour.
15. How much milk do you want?

Read the passage

My father's name is Mr. Omondi. He is a fisherman. He catches fish from the lake near our home. He then takes them to a fish monger. Fish provide us with proteins. They do not stay for long before going bad. I love eating fish with ugali. I will also learn how to catch fish.





HIGH FLYER
SERIES
007

HIGH FLYER SERIES EVALUATION TEST
DARASA LA TATU – MWAKA 2016
KISWAHILI: LUGHA

TARĪHE:

JINA: SHULE:

Imla

1. _____
2. _____
3. _____
4. _____
5. _____

Jaza pengo


6. S ___ m ___ h ___ ni
7. D ___ r ___ v ___
8. Sh ___ mb ___ n ___
9. M ___ z ___
10. Nd ___ z ___

Andika majina

11.



12.



13.



14.



15.



Andika kwa wingi

16. Mlima _____
17. Ndizi _____
18. Kikombe _____
19. Choo _____
20. Jiko _____

Chagua jibu sahihi

21. Mpe mtoto maji _____
(akunywe, anywe)
22. Wageni wamekaa _____
(bafuni, sebuleni)
23. Anaendesha meli _____



(rubani, nahodha)

24. Wanyama huchinjwa pahali panaitwa?
(kinu, kichinjio)

25. Anaye pika chakula huitwa nani?
(mpishi, mpiki)

26. Pole pole ndio _____

27. _____ hufuata upepo

28. _____ kimoja hakifunji chawa.

29. _____ akitolewa nje hufa.

30. Mishale mitano _____.
(kidole, mwendo, vidole, bendera, samaki, jua)

Andika kwa herufi kubwa au ndogo

31. jogoo _____

32. CHUMBA _____

33. MAJILISI _____

34. Buchari _____

35. KARATASI _____

Tunga neno

36. Ya _____

37. Sh _____

38. Ch _____

39. Ki _____

40. Ta _____

Andika kinyume

41. Nyanya _____

42. Shuka _____

43. Cheka _____

44. Nje _____

Andika vizuri

45. ndakita _____

46. busele _____

47. rampi _____

48. ngufuo _____

49. Vikombe _____ vinapendeza.
(hizi, hivi)

50. Kuku _____ ni wetu.
(hizo, hao)





HIGH FLYER SERIES EVALUATION TEST
STANDARD THREE – YEAR 2016
CHRISTIAN RELIGIOUS EDUCATION

DATE:

NAME: SCHOOL:

- | | |
|---|---|
| <p>1. Children should, show _____ to their teachers.
(hatred, love, disobedience)</p> <p>2. We should always say _____.
(the truth, lies, rude)</p> <p>3. Jesus came to _____ us from our sins. (heal, save, love)</p> <p>4. _____ had 11 brothers.
(Jacob, Joseph, Jesus)</p> <p>5. The Holy Spirit came upon the disciples on the day of _____.
(Christmas, Pentecost, Easter)</p> <p>6. We should not _____.
(steal, love, share)</p> <p>7. King _____ killed Naboth.
(Saul, David, Ahab)</p> <p>8. Joseph's brother's went to buy food in _____.
(Caanan, Israel, Egypt)</p> <p>9. Tolerance is being _____ with other people. (patient, annoyed, hurt)</p> <p>10. When a loved one dies, we feel _____. (happy, sad, grateful)</p> | <p>11. _____ doubted that Jesus had resurrected.
(Thomas, Andrew, Simon)</p> <p>12. We should _____ when we are wronged by others.
(fight, forgive, love)</p> <p>13. God protected _____ from lions.
(Daniel, Stephen, Joseph)</p> <p>14. Which gift was not given to baby Jesus? (Silver, Gold, Myrrh)</p> <p>15. Muslims worship in a _____.
(Temple, Mosque, Shrine)</p> <p>16. We should _____ trees to protect the environment.
(cut, plant, uproot)</p> <p>17. Joseph was able to explain the meaning of _____.
(Parables, dreams, stories)</p> <p>18. Parents should take _____ of their children.
(care, hatred, bribes)</p> <p>19. Jesus loves _____ children.
(no, some, all)</p> <p>20. Who baptized Jesus?
(James, John, Peter)</p> |
|---|---|





HIGH FLYER SERIES EVALUATION TEST
STANDARD THREE – YEAR 2016
SOCIAL STUDIES

DATE:

NAME: SCHOOL:

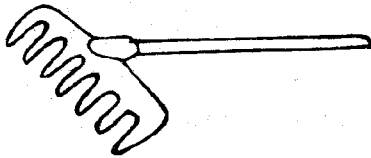
1. A _____ is a place where we buy and sell things.
(farm, school, market)

2. We get _____ from rivers.
(firewood, charcoal, water)

3.



The picture alongside shows a _____.
(tree, flag, colours)



4. This tool is used to put rubbish together. It is called a _____.
(fork, rake, jembe)

5. Villages, locations and sub-locations are known as _____ units.
(church, administrative, community)

6. _____ are rules that guide people to do what is right in the district. (Values, Morals, Laws)

7. On 20th October, we celebrate _____ day.
(Heroes, Makadara, Jamhuri)

8. Paul's short is torn. He should take it to the _____ for repair.
(carpenter, tailor, cobbler)

9. Fishermen are found living near _____.
(plains, valleys, lakes)

10. Leather comes from _____.
(wool, skin, trees)

11. Some people in our district get money by _____ goods in the market.
(throwing, selling, giving)

12. _____ visit our country to see wildlife.
(Poachers, Tourists, Rangers)


13. A carpenter is to wooden furniture as a _____ repairs car.
(mason, driver, mechanic)
14. When farmers add manure to crops, they will _____.
(dry, grow well, die)
15. Bread is made from _____ flour.
(maize, wheat, millet)
16. _____ helps to balance the bicycle.
(Reflectors, Pedals, Handlebars)
17. Traffic rules prevent _____ to happen.
(safety, accidents, transport)
18. A person whom you do not know is a _____.
(enemy, neighbour, stranger)
19. We should _____ for the environment.
(care, destroy, ignore)
20. Classroom is for pupils but staffroom is for _____.
(parents, secretary, teachers)
21. Cyclists should ride bicycles on the _____ side of the road.
(wrong, right, left)
22. White colour on our national flag stands for _____.
(light, people, peace)
23. When the plants are growing, the farmers takes care of them by _____.
(planting, weeding, cutting)
24. A rope can be made using _____.
(wool, sisal, cotton)
25. Playing games is good because it makes us strong and _____.
(healthy, weak, fat)
26. The clothes we wear at school are called _____.
(inform, uniform, onform)
27. We use umbrellas when the weather is _____.
(cloudy, windy, rainy)
28. The needle of a compass always points to be _____ direction. (West, South, North)
29. The Agikuyu call their God _____.
(Ngai, Enkai, Mulungu)
30. Animal kept by a farmer are called _____ animals.
(domestic, home, wild)



HIGH FLYER SERIES EVALUATION TEST

STANDARD THREE – YEAR 2016

MARKING SCHEME

ENGLISH	KISWAHILI	MATHS	SCIENCE	SOCIAL STUDIES	C.R.E.
1. -	1. Shumizi	1. Smaller	1. Heart	1. Market	1. Love
2. -	2. Vitabu	2. 305	2. Eyebrows	2. Water	2. The truth
3. -	3. Hesabu	3. 655	3. Iris	3. Flag	3. Save
4. -	4. Sukari	4. 428	4. White part	4. Rake	4. Joseph
5. -	5. Mwanamume	5. 6	5. Far from you	5. Administrative	5. Pentecost
6. Mother	6. Samahani	6. 960	6. Deaf	6. Laws	6. Steal
7. Poor	7. Dereva	7. Tuesday	7. Gestures	7. Heroes	7. Ahab
8. Open	8. Shambani	8. 207	8. Weak	8. Tailor	8. Egypt
9. Cold	9. Meza	9. 619	9. Alcohol	9. Lakes	9. Patient
10. Friend	10. Ndizi	10. $\frac{3}{4}$	10. Onion	10. Skin	10. Sad
11. With	11. Mpira	11. 16	11. Sleeping	11. Selling	11. Thomas
12. Were	12. Kikombe	12. Sh 35	12. Disinfectant	12. Tourists	12. Forgive
13. Was	13. Mti	13. 8	13. Cholera	13. Mechanic	13. Daniel
14. Were	14. Mvua	14. 10	14. Spoon	14. Grow well	14. Silver
15. Was	15. Ufunguo	15. 28	15. Towel	15. Wheat	15. Mosque
16. Envelop	16. Milima	16. 73	16. Arrow root	16. Handle bars	16. Plant
17. Leaf	17. Mandizi	17. 4	17. Maize	17. Accidents	17. Dreams
18. Kettle	18. Vikombe	18. 135	18. Sunflower	18. Strangers	18. Care
19. Blackboard	19. Vyoo	19. 880	19. Sunny	19. Care	19. All
20. Road	20. Meko	20. 11	20. Wednesday	20. Teachers	20. John
21. Boys	21. Anywe	21. 901	21. Rainy and calm	21. Left	
22. Pencil	22. Sebuleni	22. 12	22. 2	22. Peace	
23. Toys	23. Nahodha	23. 7wks 6 days	23. Midday	23. Weeding	<u>I.R.E.</u>
24. Bottle	24. Kichinjio	24. 748	24. East	24. Sisal	1. Dhul Hijjah
25. Holiday	25. Mpishi	25. Sh. 62 85cts	25. Move	25. Healthy	10th
26. Where	26. Mwendu	26. Kg	26. Gliding	26. Uniform	2. Rabiul awwal
27. Who	27. Bendera	27. 20	27. Crawling	27. Rainy	3. Water
28. When	28. Kidole	28. 730m	28. Leaping	28. North	4. Yusuf
29. Why	29. Samaki	29. 6	29. Swimming	29. Ngai	5. 99
30. What	30. Vidole	30. 410	30. Millipede	30. Domestic	6. One finger
31. Taller	31. JOGOO	31. 120	31. Pork		7. Trees
32. Big	32. Chumba	32. June	32. Shell		8. Cat
33. Fatter	33. Majilisi	33. 240	33. Dog		9. Isa
34. Thinnest	34. BUCHARI	34. 2wks 1day	34. Tap		10. Slaughter
35. Good	35. Karatasi	35. 3	35. Boil		11. Allah
36. two	36. Yai ...	36. 5	36. Dam		12. Faatiha
37. to	37. Shamba ...	37. 18	37. Filtering		13. Imaan
38. two	38. Chaki ...	38. 85	38. Clay		14. Mosque
39. too	39. Kiatu ...	39. Circle	39. Garden		15. Lahab
40. to	40. Tamasha ...	40. Two thousand and fifty three	40. Riverbank		16. Right
41. Inside	41. Babu	41. 160	41. Riverbed		17. Alaq
42. Bedroom	42. Panda	42. 131	42. Breakfast		18. Taurat
43. Flag post	43. Lia	43. Square	43. Lick		19. Son
44. Matchbox	44. Ndani	44. Triangle	44. Yams		20. Faatiha
45. Toothpaste	45. Kitanda	45. 0	45. Heat		
46. Lion	46. Sebule	46. Sh 16	46. Sound		
47. Sugar	47. Mpira	47. Sh 21	47. Screaming		
48. Three	48. Funguo	48. 12kg	48. Air		
49. White	49. Hivi	49. 26	49. Saw		
50. Two	50. Hao	50. 	50. Spanner		