


PERFECT ENERGIZER SERIES

STANDARD FOUR - YEAR 2016

ENGLISH

Time: 1 Hrs 40 Min



Read the passage below and fill in the blank spaces with the correct answer

Masnik 1 rather went 2 the 3 Masnik wanted a yellow 4 of trousers. There many people buying and selling clothes. They moved 5 one seller to another. They soon 6 one but it could not fit Masnik. Masnik then 7 a yellow dress. Her father asked her to try it on. It 8 the right size. 9 father 10 two hundred and fifty shillings 11 the dress. She 12 her father thank you. The seller put the dress in a paper and they left Masnik was very happy because the 13 was nice.

- | | | | | |
|-----|---------|--------|--------|---------|
| | A | B | C | D |
| 1. | And | With | From | On |
| 2. | From | By | With | To |
| 3. | Maket | Market | Marked | Markit |
| 4. | Pair | Pare | Pairs | Paire |
| 5. | From | With | To | Paire |
| 6. | Found | Find | Finded | For |
| 7. | Find | Found | Found | Founded |
| 8. | So | Saw | Sour | Finded |
| 9. | Him | Is | Her | Seen |
| 10. | Payed | Paid | Pay | His |
| 11. | Four | For | Of | Bayed |
| 12. | Telling | told | Telled | And |
| 13. | Pack | Bag | Back | Tele |
| | | | | Park |

Choose the opposite of the given word

14. Find
A. Take B. Look C. Miss D. See
15. Present
A. Today B. Absent C. In D. Came
16. Dark
A. Night B. Black C. Bright D. Day
17. Pass
A. Fail B. Jump C. Go D. Around
18. Full
A. In B. Of C. Empty D. Fill

Write the plural of the sentences below

19. The girl is crying
A. The girl is cry
B. The girls are crying
C. The girl's are crying
D. The girls is crying
20. Give her sweets
A. Gives her sweets
B. Give hers sweets
C. Give them sweets
D. Give him sweets

21. This is a mouse
A. This is a miouises
B. These is mouces
C. These are mouses
D. These are mice

Fill in the correct articles to the following sentences

22. This is _____ pen
A. a B. An C. Is D. On
23. My sister lives in _____ Nakuru
A. An B. a
C. The D. Requires no answer

Arrange the following words in their alphabetical order

24. A. Maize, mail, mass, mute
B. Matter, Master, Mutter, Mother
C. Master, Mother, Matter, Mutter
D. Master, Matter, Mother, Mutter

Write the plurals of the following

25. Fox
A. Foxies B. Foxen
C. Foxes D. Foses

26. **Mouse**
 A. Mouse B. Mices
 C. Mice D. Mouses

Write one word for the following

27. Chair, table, bed, cupboard, desk
 A. Furniture B. Cutlery
 C. Utensils D. Books

Write one word for the following

28. A person who teaches
 A. Pilot B. Doctor C. Nurse D. Teacher

29. A person who flies an aeroplane
 A. Flyer B. Artist C. Mechanic D. Pilot .

30. A place where children learn
 A. Cinema B. Factory C. Market D. School

31. A person who cures sick people
 A. Doctor B. Teacher C. Nurse D. Farmer

Fill in the correct preposition in the following sentences

32. The child is sleeping _____ the mattress
 A. On B. Under C. Above D. Over

33. The teacher is writing _____ the blackboard
 A. Under B. On C. Above D. In

Use the present tense to complete the following sentences

34. Asha is _____ holes for plants
 A. Dig B. Dug C. Dugged D. Digging

35. Police asked him to show his _____ licence
 A. Driving B. Drove C. Drive D. Drives

36. What was she _____ to her mother?
 A. Say B. Saying C. Said D. Saing

Read the following story and answer questions that follows

My family stays in Nakuru, Ngata farm we have a big farm of fifty acres. Every Saturday I go with my father to the farm.

My father has divided the farm into three parts. One part is of twenty acres where maize is grown, the second part also is twenty acres. The third part is five acres where fruits and vegetables are grown. There are ten cows and ten pigs on the farm.

We have a tractor and a pick-up on the farm. The tractor is used for ploughing the land and the pick-up is used to transport the crops. There are fifteen people employed by my father to work in the farm. There are three dogs on the farm, the dog I like most is "Shujaa", my father gave it the name because

one day he got hold of a thief. The dogs guards the farm.

Whenever I go to the farm I enjoy very much eating fresh fruits and play with dogs. The dogs lives in their smart built houses.

37. According to the story, where does the stated family stays?
 A. Eldoret B. Nakuru
 C. Mogotio D. Rongai

38. What is the name of the farm?
 A. Ngata B. Nakuru
 C. Farm D. Town

39. What is the total size of the farm?
 A. Fifteen acres B. Twenty acres
 C. Ten acres D. Fifty acres

40. When do they visit the farm?
 A. Saturday B. Monday
 C. Sunday D. Fridays

41. The farm has been divided into how many parts?
 A. Four B. Five C. Three D. Two

42. Give one name for fruits and vegetables
 A. Plants B. Horticulture C. Citrus D. Trees

43. What is the tractor used for in the story?
 A. Ploughing B. Driving
 C. Transport D. Sweeping

44. The pick-up is used to
 A. Plough B. Driving
 C. Transport D. Seating on

45. How many people are employed to work in the farm?
 A. 10 B. 5 C. 6 D. 15

46. What is the name of one of the dogs
 A. Mpenzi B. Fredo C. Killer D. Shujaa

47. What does the writer enjoy very much in the farm?
 A. The tractor B. Eating fresh fruits
 C. Pick-up D. Vegetable

48. How many dogs are there in the farm?
 A. 2 B. 6 C. 3 D. 4

49. What is the name of dog's house
 A. Hutch B. Store
 C. Pen D. Kennel

50. What can be the title of the story?
 A. My home B. Our farm
 C. Fruits D. Dogs

PERFECT ENERGIZER SERIES

DARASA LA NNE - MWAKA WA 2016

KISWAHILI

Muda : Saa 1 Dakika 40

PES
2016

Soma vifungu vifuatavyo huku ukijaza mapengo valioachwa kutoka nambari kumi na tano.

Ilikuwa ni siku ya Alhamisi. Asubuhi hiyo 1 na rafiki yangu wa chanda na 2 tulifunga 3 kwenda mtoni kuteka maji ya kuosha darasa letu. Tulikuwa 4 na mwalimu wetu wa darasa Bibi Moto sana tukiongea lugha yetu ya 5 ambayo ilikuwa imepigwa marufuku shuleni mwetu. Tulipofika mtoni tuliamua 6 kabla ya kurudi shuleni. Tulivua nguo 7 na kuziweka kando ya mto na kujitoma majini chubwi!

- | A | B | C | D |
|--------------|-----------|--------------|-------------|
| 1. wewe | mimi | yeye | sisi |
| 2. pete | mkono | kidole | mate |
| 3. nyumba | shule | miguu | safari |
| 4. tumeongea | tumeshika | tumepatikana | tumeshikana |
| 5. ukoo | mama | nyumbani | kigeni |
| 6. kuogea | kuosha | kulima | kuogelea |
| 7. zenu | yetu | zetu | zao |

I 8 kuwa ni siku ya furaha. Dada yangu alikuwa anaolewa siku 9 ya Jumamosi. 10 tuliamka 11 na kujitayarisha.

Nilioga na 12 ya kuoga nikaenda 13 chumba cha kulala. Nilitafuta nguo yangu 14 niliyonunuliwa na shangazi 15 sikuipata.

Papo hapo nikaanza kulia. Dada yangu alisikia kilio changu na kuja kujua sababu ya kilio changu. Mkononi alikuwa ameishika nguo yangu.

Mara nikaanza kutabasamu.

- | A | B | C | D |
|-----------|----------|----------|--------------------|
| 8. li | ta | me | na |
| 9. hii | hiyo | hiq | ile |
| 10. zote | sote | wote | nyote |
| 11. jioni | alasiiri | adhuhuri | alfajiri na mapema |
| 12. kabla | badala | kati | baada |
| 13. kwa | kwenye | katikati | ndani |
| 14. lipya | jipya | nyeupe | mpya |
| 15. bila | lakini | wala | kwa sababu |

Kutoka swali la 16 mpaka 30 chagua jibu sahihi

16. _____ kwa ugonjwa mama
A. asante B. tafadhali C. pole D. salama
17. Mbuzi _____ nyanya ni mnono
A. yake B. wake C. zake D. wao
18. Ndege ni kwa kiota _____ ni kwa kizimba
A. ng'ombe B. konokono C. kuku D. nyuki
19. Chagua sentensi sahihi
A. Mbwa yetu ni mkali
B. Chakula hiki ni kitamu
C. Gari yake ni mpya
D. Mguu yake inauma
20. Jaza pengo ndovu ni mnyama _____
A. kubwa B. nono C. mkubwa D. ndogo
21. Dada yake baba ni _____
A. mama B. mama mdogo
C. shangazi D. mpwa
22. Chagua sentensi sahihi
A. ameona magari mbili
B. yeye ana visu tatu
- C. anasoma darasa la moja
D. amekula chungwa moja
23. Alivunjika mguu akafungwa _____
A. plasta B. bendeji C. sindano D. machela
24. Wingi wa; kisu hiki ni kikali
A. Visu hivi ni vikali B. Visu hivyo ni vikali
C. Visu vile ni vikali D. Visu hiyo ni kali
25. Aliingia _____ kuomba ruhusa
A. wala B. bila C. lakini D. kwa sababu
26. 1/2 huitwa _____
A. thumni B. humusi C. thuluthi D. subui
27. Alilala _____ ya kuchoka sana
A. Baada B. kabla C. nyuma D. mbele
28. Kanusha, Amesimama
A. hakusimama B. hasimami
C. hajasimama D. hatasimama
29. Mlango wa darasa una umbo la _____
A. mraba B. duara C. pembe tatu D. mstatili
30. Tegua kitendawili; Fika umwone umpendaye
A. kitanda B. kioo C. macho D. kivuli

Soma habari ifuatayo kisha uyajibu maswali 31 hadi

Siku moja, ami alinitembeza katika mbuga za wanyama. Niliwaona wanyama walionifurahisha sana. Kuna walionifanya nicheke mpaka mbavu zikanjuma. Wanyama hawa ni kama ngiri aliyetokeza huku akiyatokeza meno mawili nje. Nilicheka hadi alipotokomea vichakani.

Na kiboko je? Sura yenyewe siwezi kuelezea kwani mbaya hata kushinda ya ngiri. Karibu ni umizwe na miiba nikimtoroka.

Nilipotazama juu mtini, nilimwona nyani aliyeninyoshea mkono. Hata kabla kuelezwa alichotaka tayari alikuwa chini ya mti na kunipokonya ndizi yangu. Alirudi mtini na kuketi kitako katika panda na kuila ndizi yangu yote. Kilichonishangaza ni vile alivyoyatoa maganda kama mtu.

Nilianza kuogopa na kumuuliza baba mkubwa tutoko kule. Nilianza kushika njia ya kurudi. Baada ya kwenda hatua chache niliwaona wanyama wengine mbali kidogo na pale tulipokuwa. "Ala, kwani huku huwa kuna ng'ombe?" Nikamuuliza ami. Alisema kwamba walikuwa nyati.

Siku hiyo niliwaona wanyama wengi sana kama vile swara, kifaru, pundamilia, mbweha na wengine wengi ambao sikuuliza majina yao.

31. Mwandishi anatumbeza kuwa alitembezwa na
A. mama mkubwa B. baba mkubwa
C. Dada ya mama D. shangazi
32. Mnyama ambaye huwa na meno yaliyotokeza nje ni yupi?
A. Kiboko B. Kifaru C. Ngiri D. Nyati
33. Jisa jingine la nyati ni lipi?
A. kifaru B. swara C. pundamilia D. mbogo
34. _____ hufanana na mbuzi
A. swara B. mbweha C. Nyani D. Pundamilia
35. Ni nani aliyenyang'anya mwandishi ndizi yake?
A. Ami B. Ng'ombe C. Nyani D. Swara
36. Kulingana na habari hii
A. Nyani hula maganda ya ndizi
B. Nyani hali ndizi
C. Nyani hapandi mtini
D. Nyani hali maganda ya ndizi
37. Ni kweli kusema
A. Nyati hafanani na Ng'ombe
B. Nyati anafanana na Ng'ombe
C. Kulikuwa na Ng'ombe mbugani.
D. Nyati ni mnyama wa kufugwa
38. Kilichomfanya mwandishi atamani kutoka mbugani ni
A. Furaha B. Haraka C. Woga D. Njaa
39. Mwandishi aliwaona wanyama hawa wote isipokuwa
A. Sungura B. Nyati C. Ngiri D. Kiboko
40. Kati ya wanyama wafuatao mmoja wao si mnyama wa mwituni.
A. Farasi B. Simba C. Chui D. Ndovu

Soma hadithi ifuatayo kisha ujibu maswali

Siku ya Jumamosi watu wa kijiji cha Mamboleo walikutana uwanjani Kago kushuhudia mechi ya mchezo wa kandanda kati ya timu ya Tembo na chui. Mchezo huo ulikuwa wa kuvutia sana. Baada ya mchezo kuisha mashabiki wa timu ya chui walishangilia kwa vigelegele na hoiohoio baada ya timu hiyo kuifunga timu ya Tembo mabao matatu kwa sufuri.

Saa moja kasorobo, Jemo alikumbuka kuwa ilikuwa zamu yake kumpelekea nyanyake maziwa. Hakuamini macho yake alipoona kuwa giza lilikuwa tayari laingia. Alipiga mbio kuelekea nyumbani na bila kupoteza wakati, aliyachukua maziwa yake kuelekea kwa nyanyake umbali wa thuluthi ya kilomita.

Alipiga hodi nyumbani kwa nyanyake mwendo wa saa moja unusu, na kumpatia nyanyake maziwa. Lakini lo! Chupani mle mlikuwa mmejaa maji. Jemo alihuzunika sana na kumwelezea nyanyake kuwa hangeweza kuchagua chupa yenye maziwa kwa sababu alikuwa na haraka na angechelewa sana. Nyanyake alimkumbusha methali isemayo "Haraka haraka haina baraka"

MASWALI

41. Siku ya Jumamosi watu walikutana _____
A. Kijijini mamboleo B. Uwanjani kwa jemo
C. Kijijini kwa nyanya D. Uwanjani Kago
42. Timu ya Tembo ilifunga mabao mangapi?
A. 1 B. 0 C. 3 D. 2
43. Jemo alikuwa afanye nini jioni hiyo?
A. Acheze kandanda B. Awinde chui
C. Apige mbio D. Apeleke maziwa
44. Jemo alipiga mbio kuelekea nyumbani. Je, kupiga mbio ni _____
A. kukimbia haraka B. kuchemua
C. kutembea kwa miguu D. kunyosha nguo
45. Kwa nyanyake Jemo ni umbali wa thuluthi ya kilomita. Je, thuluthi ni _____
A. $\frac{1}{4}$ B. $\frac{1}{3}$ C. $\frac{1}{2}$ D. $\frac{1}{3}$
46. Ni Kweli kusema _____
A. Nyanya alipata maziwa
B. Jemo hakufika kwa nyanyake
C. Nyanya hakupata maziwa
D. Maziwa yalikuwa yameharibika
47. Jemo hakuweza kuchagua chupa yenye maziwa kwa sababu _____
A. Alikuwa mjinga B. Alikuwa na woga
C. Alipiga hodi D. Alikuwa na haraka
48. Jemo alifika kwa nyanyake _____
A. saa moja unusu. B. Saa moja kasorobo
C. Saa mbili D. Saa kumi na moja unusu
49. Kamilisha methali:- Haraka haraka haina _____
A. Mwendu B. furaha C. baraka D. waraka
50. Jemo alikuwa nani kwa nyanyake
A. kitukuu B. mjukuu C. mwana D. mjomba

PERFECT ENERGIZER SERIES

STANDARD FOUR - YEAR 2016

SCIENCE

PES
2016

1. The sun is a star. It looks larger than other stars because it is
- A. Too hot
 - B. Closer to the earth than other stars
 - C. Too bright
 - D. Seen during day time

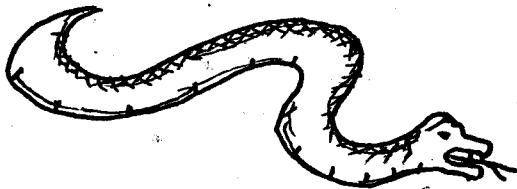
2. Which one of the following will NOT spread AIDS if shared by two people?

A. food B. toothbrush
C. razor D. needle

3. The main source of light is _____

A. clouds B. sun
C. moon D. stars

4. The animal below moves by _____

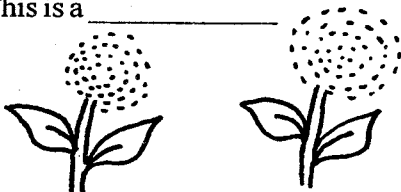


A. sliding B. coiling
C. slithering D. crawling

5. The first set of the teeth is called _____ teeth.

A. permanent B. premolar
C. milk D. molars

6. This is a _____



A. fruit B. oil
C. cereal D. vegetable

7. The weather shown below is



A. windy B. rainy
C. cloudy D. calm



8. We should brush our teeth _____

A. daily B. after six months
C. weekly D. yearly

9. When there are no clouds the sky is _____

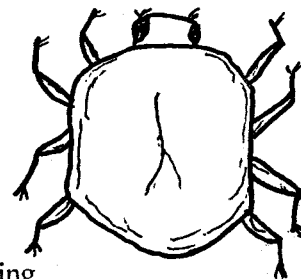
A. blue B. white
C. brighter D. yellow

10. The product below is from which plants?



A. sisal plant B. palm tree
C. coconut plant D. coffee shrub

11. The animal below moves by _____



A. leaping B. crawling

- C. hopping
- D. walking

12. The clouds which are thick and look like huge heaps of cotton wool are called
- A. cirrus
 - B. nimbus
 - C. stratus
 - D. cumulus

13. Which type of crop is this?




- A. fruits
- B. legumes
- C. cereals
- D. vegetables

14. _____ is a doctor who treats teeth

- A. optician
- B. nurse
- C. dentist
- D. doctor

15. This product is _____

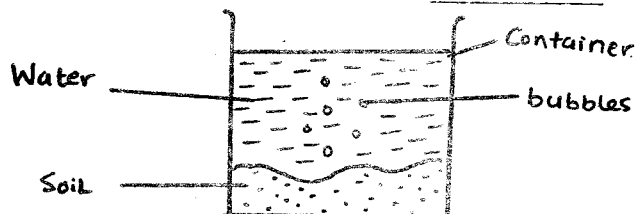


- A. basket
- B. clothes
- C. oil
- D. beer

16. All living things _____

- A. sleep
- B. make their own food
- C. move
- D. die

17. This experiment was carried out by pupils from Forest View Academy. It shows that _____



- A. soil contains water
- B. container contains air
- C. water contains air
- D. soil contains air

18. We are not able to see _____ at night

- A. sky
- B. stars
- C. moon
- D. sun

19. _____ are chisel like

- A. incisors
- B. canines
- C. molars
- D. pre molars

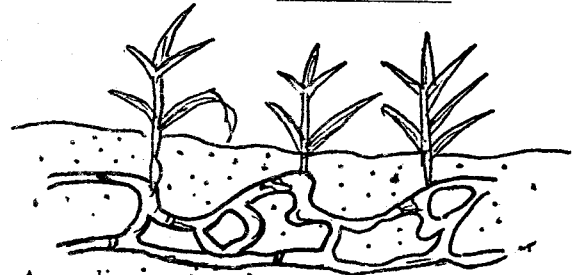
20. The type of soil which is good for growing crops is?

- A. sand
- B. loam
- C. clay
- D. top soil

21. Which of the crops below is an oil crop?

- A. avocado
- B. cassava
- C. cotton plant
- D. coconut tree

22. The weed are called _____




- A. oxalis
- B. couch grass
- C. thorn apple
- D. double thorn

23. We harvest during which season?

- A. floody
- B. rainy
- C. dry
- D. wet

24. This animal protect itself by _____.




- A. runnung away B. crying
C. hopping D. flying

25. The _____ reflects light from the sun.

- A. moon B. skies
C. clouds D. stars

26. _____ plants produces this



- A. cotton B. palm
C. sisal D. rose flower

27. Which is domestic animal?

- A. dog B. lion
C. hare D. giraffee

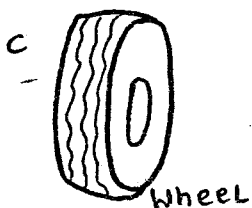
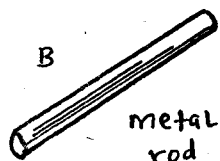

28. Which disease has no cure?

- A. cholera B. malaria
C. AIDS D. leprosy

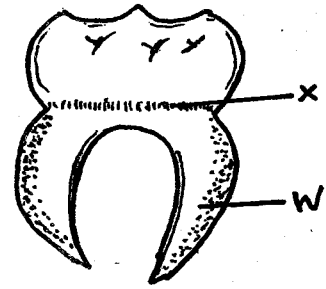
29. Which is the best food for teeth?

- A. cakes B. vegetables
C. sweets D. chocolates

30. Which of the following will float on water?



Use the diagram to answer questions 31-34:-



31. The part 'W' is called _____

- A. root B. branch
C. gum D. crown

32. The part 'X' is called _____

- A. enamel B. root
C. gum D. crown

33. The type of tooth is called _____

- A. molars B. premolars
C. incisors D. canine

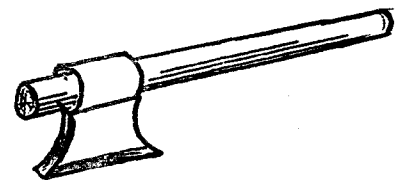
34. The tooth above is used for _____

- A. rearing B. grinding
C. chewing D. cutting

35. How many teeth has an adult?

- A. 15 B. 20
C. 42 D. 32

36. The tool drawn below is called _____



- A. ladder B. hammer
C. axe D. crow bar

37. Which of the following lay egg?

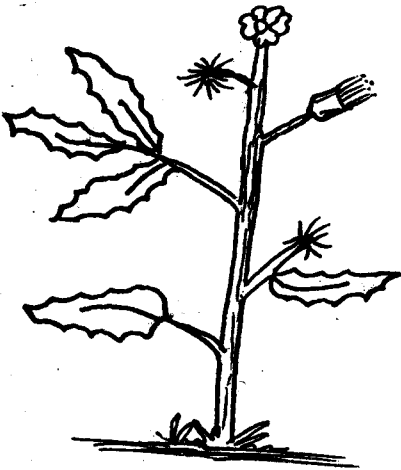
- A. cow B. cat
C. goat D. insect

38. A young one of a cow is called _____
A. piglets B. calf
C. cub D. puppy

39. The best tool used to cut a piece of wood is _____
A. panga B. spade
C. knife D. axe

40. Flowers make place to look _____
A. green B. stand
C. beautiful D. red

41. The type of weed drawn below is called



- A. black jack B. mexican merigold
C. oxalis D. pig weed

42. The phase below is of a



- A. moon B. clouds
C. star D. sun

43. The removal of weeds growing among crop is called
A. pruning
B. cutting
C. weeding
D. thinnig

44. Farmers should plant seed
A. During dry season
B. After it rains for two months
C. When they are ready for harvesting
D. At the start of the rains

45. It is true to say that
A. Sound travels in one direction
B. Sound is heard in the morning
C. Sound travels in all directions
D. Sound travels upwards

46. We get _____ from cows.
A. beef
B. wool
C. mutton
D. pork

47. A _____ is not a cereal crop
A. maize
B. coconut
C. millet
D. sorghum

48. Papers are made from
A. sand
B. trees
C. feathers
D. stones

49. In AIDS letter "A" stands for
A. Addition
B. a thing
C. acquired
D. and

50. Another name for body building food is
A. carbohydrates
B. Proteins
C. Vitamins
D. Minerals salts

PERFECT ENERGIZER SERIES

STANDARD FOUR - YEAR 2016


SOCIAL STUDIES & C.R.E

PES
2016

HOW TO USE THE ANSWER SHEET

1. Use only an ordinary pencil.
2. Make sure that you have written on the answer sheet:
(i) YOUR NAME (ii) NAME OF THE SCHOOL
3. For each question show the correct answer by drawing a line in the bracket in which the letter you have chosen is written

MATOKE AREA



KEY	
CC	Chief's Camp
	Air strip
	Road Transport
	Quarry
	Maize
	Hospital
	Grass
	Church
	Sisal

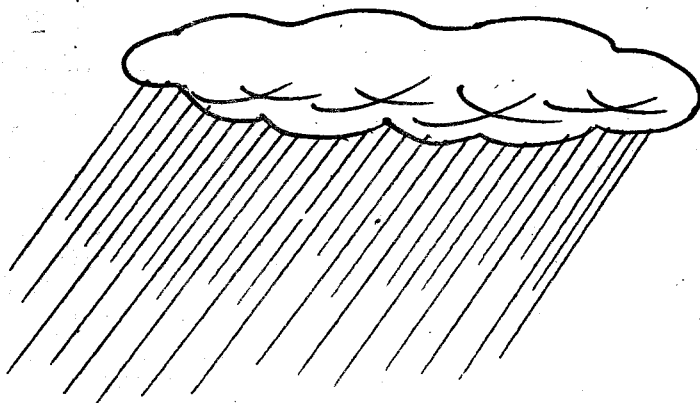
1. What form of transport is used in Makoke area
A. air B. road C. water D. railway
2. How many wards are in Matoke area?
A. 1 B. 4 C. 3 D. 2
3. Which is the economic activity in the area
A. mining B. cattle keeping
C. beef keeping D. trade
4. People of Matoke area are likely to be _____
A. Buddhist B. Pagans
C. Muslims D. Christians
5. Name the food crop grown in the area
A. pyrethrum B. sisal
C. maize D. tea
6. Which item is found in the airstrip
A. cars B. lorry
C. aeroplanes D. Train
7. Name the crop in the map where we get fibre
A. sisal B. maize C. tea D. coffee
8. Heroes day in Kenya is celebrated on _____
A. 20th October B. 1st June
C. 1st May D. 12th December
9. General elections in Kenya are held after _____ years
A. 5 years B. 10 years C. 3 years D. 6 years
10. Which is the main crop grown in Mwea Tebere
A. rice B. onions C. maize D. chillies
11. Wind is a moving _____?
A. sound B. air
C. soil D. weather
12. Dairy cattle are kept for _____
A. Meat B. Blood C. Milk D. Water
13. Beef animals are kept in big farms called _____
A. zero grazing B. ranches
C. cattle dip D. farms
14. An area of fairly high flat land is called _____
A. Plain B. plateau
C. mountain D. hills
15. What is the name given to official counting of people in a country?
A. population data B. tally
C. census D. Population density
16. The direction where the sun sets is _____
A. North B. East
C. West D. South

17. The following are main language groups in Kenya.

Which one is not?

- A. Bantu
- B. Cushites
- C. Nilotes
- D. Pourtugues

18. What does this weather element indicate



- A. cloudy
- B. raining
- C. sunny
- D. clouds

19. Fishing is carried out in _____

- A. land
- B. forests
- C. rivers
- D. towns

20. Mangrove swamps are found at _____

- A. coastal areas
- B. lake basin
- C. along the river
- D. mountains

21. The area of flat level area is called _____

- A. plateau
- B. lake
- C. plain
- D. mountain

22. The black colour in our flag means _____

- A. land
- B. people
- C. vegetation
- D. peace

23. The smallest county in Kenya is _____

- A. Nairobi
- B. Nyanza
- C. Eastern
- D. Coast

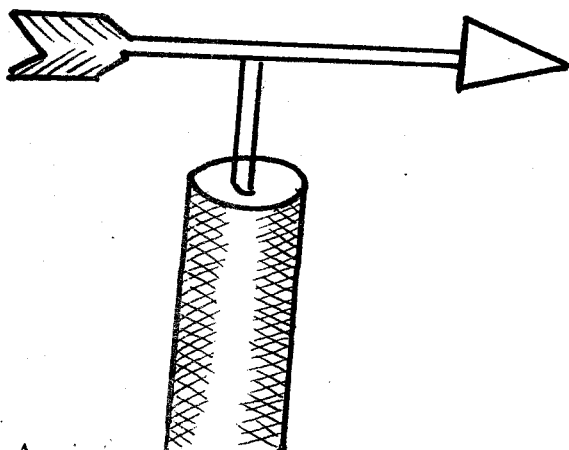
24. The four points of a compass are called _____

- A. direction
- B. Pointer
- C. cardinal points
- D. magnetic North

25. Exchange of goods for other goods is known as _____

- A. barter trade
- B. currency trade
- C. local trade
- D. international trade

26. What is the name of this instrument



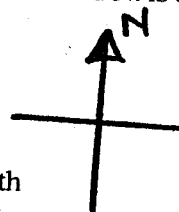
- A. wind stock
- B. windvane

C. hygrometer D. anenometer

27. The word grassland is also known as _____

- A. dry land
- B. water'
- C. savanna
- D. desert

28. The point marked N. is called _____



- A. North
- B. South
- C. East
- D. West

29. Rainfall is measured by an instrument called _____

- A. barometer
- B. hygrometer
- C. raingauge
- D. anenometer

30. Kenya National flag has how many colours?

- A. 2
- B. 3
- C. 4
- D. 5

31. The people who kill wild animals without permission are called _____

- A. killers
- B. poachers
- C. thiefs
- D. hunters

32. People who come to our country to see wild animals are called _____

- A. visitors
- B. poachers
- C. tourists
- D. tourism

33. Which of the following is a food crop?

- A. tea
- B. maize
- C. pyrethrum
- D. coffee

34. What is the name of president of Kenya?

- A. Daniel Arap Moi
- B. Railla Odinga
- C. Uhuru Kenyatta
- D. Mwai Kibaki

35. What do we call places where meat is sold?

- A. post office
- B. banks
- C. butcheries
- D. markets

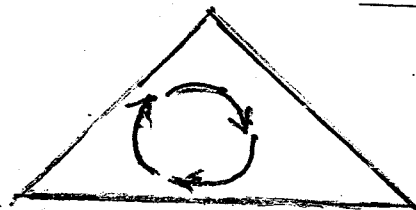
36. _____ is the head of county

- A. Chief
- B. County commissioner
- C. Governor
- D. Police Commissioner

37. Where do muslims go to worship their God

- A. church
- B. synagogue
- C. temple
- D. mosque

38. The road sign below shows _____



- A. round about
- B. bumps
- C. danger
- D. corner

39. What is the work of police?

- A. beating thieves
- B. maintaining law and order
- C. arresting innocent people
- D. killing thieves

40. Which of the following is NOT a physical feature?
 A. plain B. mountains
 C. towns D. rivers
41. Bees provide us with _____
 A. milk B. skin
 C. egg D. honey
42. Which of the following is not a basic need?
 A. food B. shelter
 C. car D. clothing
43. Which is not a wild animal?
 A. elephant B. zebra
 C. monkey D. hen
44. Which is the fastest mean of travel
 A. train B. aeroplains
 C. cars D. ship
45. _____ is the movement of goods and people from one place to another.
 A. communication B. transport
 C. barter trade D. travelling
46. Which mineral is mined at lake Magadi
 A. flourspar B. diatomite
 C. limestone D. sodash
47. Which of the following is not a cultural activity?
 A. burial ceremony B. birth ceremony
 C. fishing D. wedding ceremony
48. What is the name given to change from childhood to adulthood
 A. beliefs B. initiation
 C. customs D. ceremonies
49. Which is NOT an element of weather
 A. rain B. unshine
 C. wind D. trees
50. What do we call the item alongside
 A. radio B. fax
 C. mobile phone D. computer



51. Which of the following can be eaten and made cooking oil?
 A. Wheat B. Rice C. Mecademia D. Coffee
52. People who move from one place to another looking for pasture are called
 A. farmers B. tourist
 C. nomads D. grazers
53. There are _____ cities in Kenya
 A. one B. two
 C. three D. four
54. Long ago boys and girls were taught by _____
 A. fathers B. mothers

- C. grand parents D. elders
55. Among the following which one is NOT a fruit
 A. tomato B. spinach
 C. carrots D. avocado
56. Kenya is divided into _____ counties
 A. 6 B. 22
 C. 47 D. 290
57. People walking along the road are called _____
 A. travellers B. passengers
 C. pedestarians D. walkers
58. Riverline vegetation grows along _____
 A. water B. river
 C. swamp D. forest
59. The needle of a compass always points
 A. North B. Cotton
 C. West D. South
60. Kenya got independence in the year
 A. 1960 B. 1963
 C. 1966 D. 1964

CRE

61. _____ knew us before we were born
 A. our mothers
 B. God
 C. our fathers
 D. our parents
62. When we obey our parents
 A. we shall die quickly
 B. we shall hate them
 C. we shall live longer
 D. we shall abuse them
63. How old was Jesus when he went with his parents in Jerusalem for the passover festival
 A. 33 years
 B. 30 years
 C. eight years
 D. 12 years
64. "If you are God's son, order the stone to turn into bread". Who said these words?
 A. Jesus
 B. God
 C. Satan
 D. King Solomon
65. We cannot say we love God if
 A. we do not hate our brothers
 B. we do not love our neighbours
 C. we do not love Jesus
 D. we do not pray
66. What happened to the man who was walking from Jerusalem to Jericho?
 A. he was taken to hell
 B. he was taken to heaven
 C. he was killed by robbers
 D. he was attacked by robbers
67. Jesus changed _____ into wine
 A. blood
 B. ocean


- C. water
D. milk
68. When we _____ our parents we are obeying God's commandments
A. respect
B. hate
C. pray
D. fast
69. When we ask Jesus to help us we must have?
A. assistant
B. helper
C. faith
D. Holy Spirit
70. In which book of the Bible we do find the Holy of creation?
A. Exodus
B. Genesis
C. Revelation
D. Deutronomy
71. Our bodies are the temple of _____
A. Jesus
B. Holy Spirit
C. the church
D. the christians
72. An agreement between God and man is called
A. promise
B. Holy
C. church
D. covenant
73. Which one of the following is not one of the Gospels
A. Mark
B. John
C. Paul
D. Luke
74. "Saul !Saul! why do you persecute" to persecute means _____
A. love christians
B. to treat christians cruedly
C. to take christians to Jerusalem
D. to call christians to church
75. _____ prayed for Saul to regain his eye sight
A. Jesus
B. Paul
C. God
D. Ananias
76. On _____ day the desciples recieved the Holy Spirit
A. the pentecost
B. christian day
C. ressurection
D. Easter
77. Jesus want us to _____ our neighbours
A. laugh
B. rough
C. love
D. hate
78. Jesus was _____ by the power of the Holy Spirit
A. born
B. conceived
C. killed
D. crucified
79. Who among the following was the beloved desciple of Jesus
A. John
B. Peter
C. Simon
D. Matthew
80. _____ was the first christian martyr
A. Peter
B. James
C. Mark
D. Stephen
81. The stories which Jesus used in his teachings were known as _____
A. Bible
B. parables
C. New Testament
D. miracles
82. One of the following wanted to see Jesus. He was too short to see Him . He climbed up a tree. Who was he?
A. Zakaria
B. Zebedee
C. Zacchaeus
D. Lazarus
83. Who of the following disciples saw Jesus walking on the water and went to meet him?
A. Peter
B. John
C. Matthew
D. Mark
84. _____ baptized Jesus
A. God
B. John the baptist
C. dove
D. Peter
85. The Holy Spirit of God produces _____
A. kindness
B. unhapiness
C. badness
D. hatred
86. King Ahab wanted _____ killed because of his vineyard
A. David
B. Peter
C. Uriah
D. Naboth
87. The first disciples to be called by Jesus were _____
A. disciples
B. fishermen
C. followers
D. preachers
88. Who was the cousin to Mary
A. Racheal
B. Ruth
C. Lydia
D. Elizabeth
89. As christians we should _____ the poor
A. Hate
B. ignore
C. send away
D. help
90. The christian community started in _____
A. Jerusalem
B. Bethlehem
C. Antioch
D. Jericho

PERFECT ENERGIZER SERIES

STANDARD FOUR - YEAR 2016

MATHEMATICS


Time: 2 hours



1. Which of the following is nineteen thousand and nine?
 A. 909 B. 19009
 C. 1909 D. 1099

2. Which number is just before one thousand?
 A. 1001 B. 990
 C. 999 D. 1000

3. What is the place value of digit 6 in 23600?
 A. hundreds
 B. ones
 C. thousands
 D. tens

4. What is the perimeter of this figure?


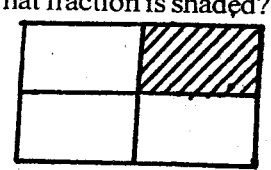
 A. 28cm B. 32cm
 C. 50cm D. 56cm

5. Which of these fractions is biggest?
 $\frac{1}{2}, \frac{1}{4}, \frac{1}{8}, \frac{1}{7}$
 A. $\frac{1}{4}$ B. $\frac{1}{8}$
 C. $\frac{1}{2}$ D. $\frac{1}{7}$

6. What is the value of $\frac{1}{4}$ of 40
 A. 20 B. 10
 C. 5 D. 4

7. Four English books cost sh.200 What is the cost of one book.
 A. sh.50 B. sh.100
 C. sh.200 D. sh.40

8. Work out
 $\frac{11}{12} - \frac{7}{12} =$ _____
 A. $\frac{4}{12}$ B. $\frac{12}{12}$
 C. $\frac{3}{12}$ D. $\frac{9}{12}$

9. What fraction is shaded?



 A. $\frac{1}{2}$ B. $\frac{1}{3}$
 C. $\frac{1}{5}$ D. $\frac{1}{4}$

10. 15 men have 10 cows each. How many cows do they have altogether?
 A. 15 B. 10
 C. 150 D. none

11.

M	cm
3	43
+ 1	75

 A. 4m 18cm
 B. 5m 18cm
 C. 4m 118cm
 D. 4m 8cm

12. What is the area of this figure in square units


 A. 6 B. 24
 C. 20 D. 15


13. What is the value of $0.8 - 0.3 =$ _____

- A. 0.3 B. 0.8
C. 0.5 D. 0.00

14. Martha bought 8 bars of soap for sh.620.40. How much was the cost of one bar of soap?

- A. sh.77.55 B. sh.612.40
C. sh.90.25 D. sh.80.40

15. Write the time shown on the clock face



- A. 10.15 B. 3.50
C. 9.15 D. 9.45

16. Work out


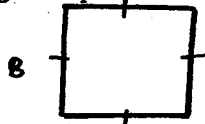
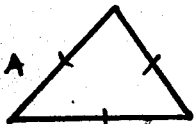
$2y + y + 7y =$

- A. $3y$ B. $8y$
C. $10y$ D. y

17. Round off 48 to the nearest ten

- A. 40 B. 48
C. 49 D. 50

18. Which of the following is a square



19. Write $\frac{5}{10}$ as a decimal

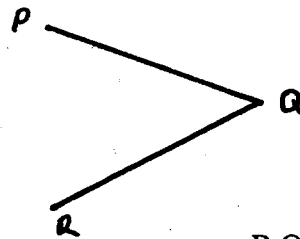
- A. 5.0
B. 0.5
C. 50
D. 0.05

20. Which is the next number in the pattern below

4, 8, 12 _____, 20

- A. 16 B. 18
C. 13 D. 20

21. Name the point of intersection of these lines



- A. P B. Q
C. R D. PR

22. Which of the following is not a multiple of 6

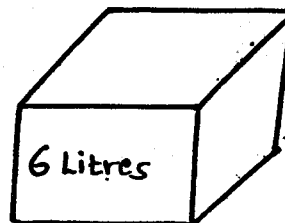
- A. 14 B. 21
C. 27 D. 28

23. Work out

$$\begin{array}{r} 23785 \\ +12466 \\ \hline 20013 \\ \hline \end{array}$$

- A. 55254
B. 61992
C. 90084
D. 56264

24. How many cups will fill the debe



- A. 6 B. 8
C. 1 D. 12

25. Write $\frac{5}{9}$ in words

- A. five ninths B. nine five
C. five nine D. nine

26. Fill in the box $\frac{1}{2} = \frac{\quad}{6}$

- A. 3 B. 4
C. 12 D. 16

27. How many months are there in 2 years

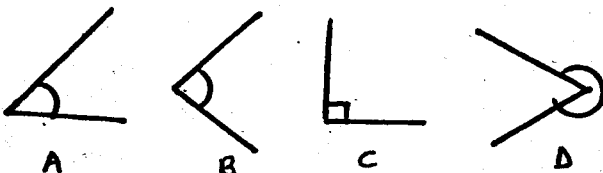
- A. 12 B. 16
C. 18 D. 24

28. Arrange these numbers from the smallest to the largest

10324, 10234, 10432, 10243

- A. 10432, 10324, 10243, 10234
B. 10234, 10243, 10324, 10432
C. 10324, 10243, 10432, 10234
D. 10243, 10324, 10432, 10234

29. Which of the following is a right angle

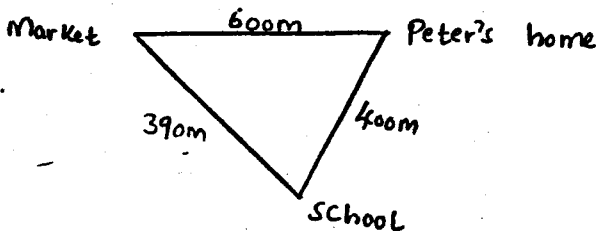


30. Ochieng bought a radio for sh.650 and later sold it making a profit of sh.150. How much did he sell it.

- A. sh.800 B. sh.600
C. sh.500 D. sh.700

31. In by Grace academy there are 274 boys and 346 girls. How many pupils are there altogether

- A. 520 B. 400
C. 72 D. 620



32.

One day Peter went to market from home and then to

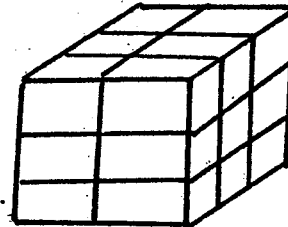
school. In the evening he went straight home from school. How many metres did he cover that day

- A. 390 B. 790
C. 600 D. 1390

34. What is the value of 12 $\overline{)738}$

- A. 6 rem 6
B. 61 rem 1
C. 12 rem 16
D. 61 rem 6

35. How many small cubes have made this stack



- A. 36
B. 27
C. 18
D. 21

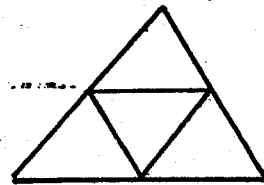
36. What is the place value of 6 in 3602

- A. hundreds
B. ones
C. Thousands
D. tens

37. Change 2 hours 33 minutes into minutes

- A. 35 minutes
B. 120 minutes
C. 70 minutes
D. 153 minutes

38. Count how many triangles are there?



- A. 4
B. 3
C. 6
D. 5

39. Numbers whose last digit is 0, 2, 4, 6, 8 are called

- A. odd B. even
C. prime D. multiples

40. Kabiru has 500 chicken. He sold 192 of them .How many chicken remained?

- A. 692 B. 308
C. 400 D. 192

41. Work out

$20 \times \square = 120$

- A.5 B.6
C.4 D.8

42. Which of the following is a curved line



43. Which one of the following is heavier


- | | |
|-----------------|-------------|
| 1kg salt | 1kg wool |
| 1kg feathers | 1kg stone |
| A. 1kg feathers | B. 1kgstone |
| C.1kg salt | D.none |

44. Convert 7m to cm

- A. 700cm B. 70cm
C. 7cm D.7000cm

The graph shows how Mrs Muraya sold her milk to St.Kelins school for five days.Use it to answer

questions 45



45. Which day did Mrs.Muraya sell alot of milk

- A. Wednesday
B.Thursday
C.Tuesday
D.Monday

46. Which two days did she sell the same number of litres.

- A. Monday and Tuesday
B. Wednesday and Friday
C. Monday and Friday
D. Tuesday and Thursday

47. What is the difference between the highest sale and the lowest sale

- A. 25 B.45
C.30 D. 15


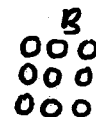
48. If she sell one litre for sh.20 .How much money did she get on Wednesday.

- A. sh.900
B.sh.200
C.sh.1200
D.sh.450

49. What is the approximate length of your pen

- A. 1m B. 1/2m
C.10cm D.40cm


50. _____



YOUR NAME	
NAME OF YOUR SCHOOL	

PERFECT ENERGIZER SERIES

DARASA LA NNE - MWAKA WA 2016



INSHA

MUDA: DAKIKA 40

Andika insha ya kuisimua juu ya:-

“SIKU AMBAYO SITAI SAHAU”



[4]

PERFECT ENERGIZER SERIES

STANDARD FOUR - YEAR 2016

MARKING SCHEME

MATHS		ENGLISH		KISWAHILI		SCIENCE		SOCIAL STUDIES & CRE		
1. C	31. D	1. A	31. A	1. B	31. B	1. B	31. A	1. B	31. B	61. B
2. C	32. D	2. D	32. A	2. A	32. C	2. A	32. D	2. A	32. C	62. C
3. A	33. -	3. B	33. B	3. D	33. D	3. B	33. B	3. A	33. B	63. D
4. D	34. D	4. A	34. D	4. C	34. A	4. C	34. -	4. D	34. C	64. C
5. C	35. C	5. A	35. A	5. B	35. C	5. C	35. C	5. C	35. C	65. C
6. B	36. A	6. A	36. B	6. D	36. D	6. B	36. D	6. C	36. C	66. D
7. A	37. D	7. C	37. B	7. C	37. D	7. C	37. D	7. A	37. D	67. C
8. A	38. D	8. A	38. A	8. A	38. C	8. A	38. B	8. A	38. A	68. A
9. D	39. B	9. C	39. D	9. B	39. A	9. A	39. D	9. A	39. B	69. C
10. C	40. B	10. B	40. A	10. B	40. A	10. C	40. C	10. A	40. C	70. B
11. B	41. D	11. B	41. C	11. D	41. D	11. B	41. A	11. B	41. D	71. A
12. B	42. C	12. B	42. B	12. D	42. B	12. D	42. A	12. C	42. C	72. D
13. C	43. D	13. A	43. A	13. B	43. D	13. B	43. C	13. B	43. D	73. C
14. A	44. A	14. C	44. C	14. D	44. A	14. C	44. D	14. B	44. B	74. B
15. A	45. A	15. B	45. D	15. B	45. D	15. C	45. C	15. C	45. B	75. D
16. C	46. C	16. C	46. D	16. C	46. C	16. D	46. A	16. C	46. D	76. A
17. B	47. D	17. A	47. B	17. B	47. D	17. D	47. B	17. D	47. C	77. C
18. B	48. A	18. C	48. C	18. C	48. A	18. D	48. B	18. B	48. B	78. B
19. B	49. C	19. B	49. D	19. B	49. C	19. A	49. C	19. C	49. D	79. A
20. A	50. B	20. C	50. B	20. C	50. B	20. B	50. B	20. A	50. C	80. D
21. B		21. D		21. C		21. A		21. A	51. C	81. B
22. C		22. A		22. D		22. B		22. B	52. C	82. C
23. D		23. D		23. A		23. C		23. A	53. D	83. B
24. D		24. D		24. A		24. D		24. C	54. C	84. B
25. A		25. C		25. B		25. A		25. A	55. B	85. A
26. C		26. C		26. B		26. C		26. B	56. C	86. D
27. D		27. A		27. A		27. A		27. C	57. C	87. B
28. B		28. D		28. C		28. C		28. A	58. B	88. D
29. C		29. D		29. D		29. B		29. C	59. A	89. D
30. A		30. D		30. B		30. D		30. C	60. B	90. A

COMPOSITION MARKING SCHEME

MARKING CRITERIA

1. The composition will be assessed according to the following guidelines.
- The maximum mark will be 40 and the minimum mark 01
 - Does the script show that the candidate can communicate accurately fluently and imaginatively in English? (8 marks)
- Accuracy** (8 marks)
- (a) Correct tenses and agreement of verbs (4 marks)
 - (b) Accurate use of vocabulary (4 marks)
 - (c) Following a sequence (4 marks)
 - (d) Correct punctuation (4 marks)
- Fluency** (8 marks)
- (a) Words in the correct order (4 marks)
 - (b) Sentence connected and paragraphs (4 marks)
 - (c) Correct spelling (4 marks)
 - (d) Ideas developed in logical sequence (4 marks)
- Imagination** (8 marks)
- (a) Unusual but appropriate use of words and phrases (4 marks)
 - (b) Variety of structure (4 marks)

NB: Please, teachers are requested to scrutinize this marking scheme before use. It is worth.