

HIGH FLYER SERIES EVALUATION TEST

STANDARD TWO – YEAR 2016

MATHEMATICS



DATE:

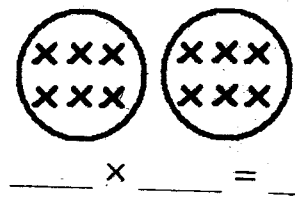
NAME: SCHOOL:

1. $53 = \underline{\quad}$ tens $\underline{\quad}$ ones
2. $7 + \underline{\quad} = 17$
3. $42 - 32 = \underline{\quad}$
4. Circle the biggest number
39, 86, 42, 5
5. $\underline{\quad} = 2$ hundreds 4 tens 3 one
6. Which month comes after April?
(June, March, May)
7. $19 - 0 = \underline{\quad}$
8. $8 + 9 + 10 = \underline{\quad}$
9.
$$\begin{array}{r} 69 \\ - 33 \\ \hline \end{array}$$
10.
$$\begin{array}{r} 560 \\ - 60 \\ \hline \end{array}$$
11. $\underline{\quad} + \underline{\quad} = 26$
12. Share 10 sweets between 2 boys.
Each will get $\underline{\quad}$ sweets
13. $19 - \underline{\quad} = 9$
14. $3 + 0 + 13 = \underline{\quad}$
15. $\underline{\quad} + 10 = 30$

17. Eight hundred and six = $\underline{\quad}$
18. Two hundred and nineteen = $\underline{\quad}$
19. 20 cows have $\underline{\quad}$ tails.
20. How much money is this? $\underline{\quad}$

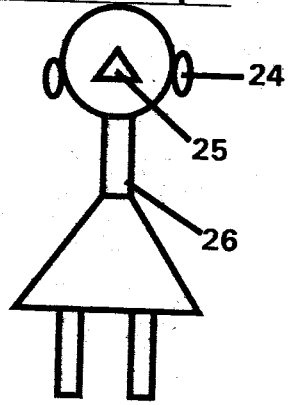


21.
$$\begin{array}{r} \text{O O O O} \quad \text{O O} \\ \text{O O O O} \quad \text{O} \\ \hline \end{array}$$
22.
$$\begin{array}{r} \text{X X X} \quad \text{X X X} \\ \text{X X X} \quad \text{X X X} \\ \hline \end{array}$$



23. $\frac{1}{3} + \frac{1}{3} = \underline{\quad}$

Name the shapes



24. $\underline{\quad}$

Write in figures (symbols)

16. Forty three = $\underline{\quad}$

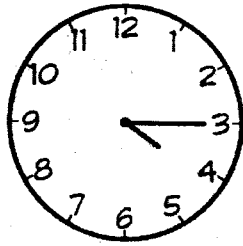
25. _____

26. _____

27. Share 16 mangoes equally between 2 pupils. Each will get _____ mangoes

28. The third day of the week is _____ (Wednesday, Tuesday, Thursday)

29.



The time is _____ past 4

| | | |
|-------|------|-----|
| 30. | Sh | cts |
| | 60 | 30 |
| | - 20 | 30 |
| <hr/> | | |

| | | |
|-------|-----|-----|
| 31. | Sh | cts |
| | 33 | 00 |
| | +66 | 50 |
| <hr/> | | |

32. $5 \times 4 =$ _____

33. $7 \times 0 =$ _____

34. How many cents are there in one shilling? _____

| | |
|-------|------|
| 35. | 575 |
| | - 35 |
| <hr/> | |

| | |
|-------|-----|
| 36. | 118 |
| | - 6 |
| <hr/> | |

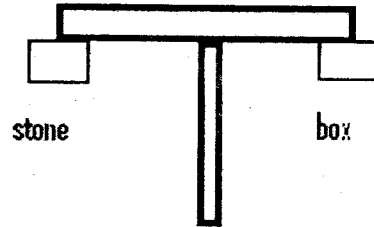
| | |
|-------|-------|
| 37. | 768 |
| | + 131 |
| <hr/> | |

| | |
|-------|-------|
| 38. | 123 |
| | + 321 |
| <hr/> | |

39. How many 5 shilling coins are there in one ten shilling coin?

40. 0 hundreds 5 tens 8 ones = _____

41.



The stone has _____ mass as the box. (less, more, same)

42. How many tens are there in 38?

43. How many eyes do 5 hens have?
_____ \times _____ = _____

| | |
|-------|------------|
| 44. | 10 |
| | \times 6 |
| <hr/> | |

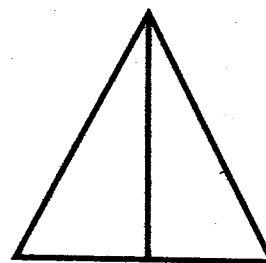
45. $5 \times$ _____ = 20

46. What is the next number in the pattern? 1, 3, 5, 7, _____

| | |
|-------|-----|
| 47. | 36 |
| | + 8 |
| <hr/> | |

| | |
|-------|-----|
| 48. | 25 |
| | - 3 |
| <hr/> | |

49.



How many triangles can you see?

50. What is six plus four plus two?





HIGH FLYER SERIES EVALUATION TEST
STANDARD TWO – YEAR 2016
ENGLISH: LANGUAGE

DATE:

NAME: SCHOOL:

Dictation

1. _____
2. _____
3. _____
4. _____
5. _____

Write correctly


6. abl _____
7. iachr _____
8. eekw _____
9. efnki _____
10. klacb _____

Give the opposite

11. My friend is _____. (tall)
12. You came to school _____.
(late)
13. She was the _____ in the list.
(first)
14. I _____ those shoes. (hate)
15. My room is _____. (dirty)

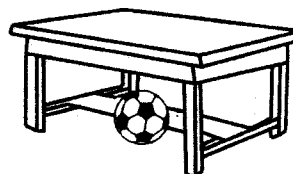
Use 'on', 'in', 'under'

16.



The plate is _____ the table.

17.




The ball is _____ the table.

18.



The spoon is _____ the glass.


19.



The salt is _____ the tin.



20.



The boy is _____ the tree.

Plurals

21. Deer _____

22. Key _____

23. Foot _____

24. Lady _____

25. Hair _____

Use 'this' or 'these'

26. _____ is a cupboard.

27. Give me _____ books.

28. _____ are big animals.

29. Are _____ our spoons.

30. _____ girl is pretty.

Write in ABC order

31. wrist, knee, ankle, elbow _____

32. yellow, green, pink, blue

33. North, East, South, West _____

Use 'shall' or 'will'

34. _____ we iron these clothes.

35. The teacher _____ give me a present.

Use 'am', 'is' or 'are'

36. This _____ my brother's bicycle.

37. He _____ a class prefect

38. I _____ in class two.

39. Those knives _____ very sharp.

40. Whose book _____ this?

Complete: Homes

41. The _____ of a pig.

42. The _____ of a rabbit.

43. The _____ of a horse.

44. The _____ of a dog.

45. The _____ of a lion.

(hutch, stable, sty, den, kennel)

Complete

46. ash + tray = _____

47. _____ + room = bedroom

48. house + _____ = housefly

49. cash + box = _____

50. _____ + way = railway





HIGH FLYER SERIES EVALUATION TEST

STANDARD TWO – YEAR 2016

SCIENCE

DATE:

NAME: SCHOOL:

1. A human being has ____ sense.

(dirty, clean, happy)

Match the sense organ with the sense

| <u>Sense organ</u> | <u>sense</u> |
|--------------------|--------------|
| 2. Nose | taste |
| 3. Skin | hearing |
| 4. Tongue | smell |
| 5. Ear | touch |

6. A ____ tastes sour.
(lemon, water, honey)

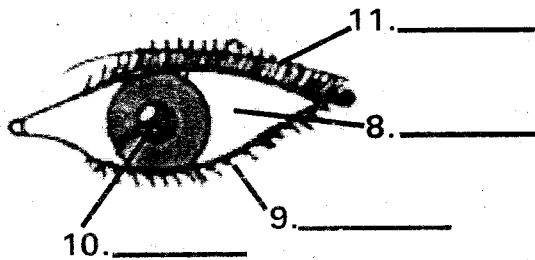
15. ____ and warm water removes mucus from a handkerchief.
(Salt, Soap, Sugar)

7. Unripe bananas are colour ____.
(yellow, green, orange)

16. Socks are worn on our ____.
(feet, hands, head)

17. We use a ____ when sweeping.
(broom, dustbin, duster)

Name the parts of the eye shown



(Eyelashes, pupil, white part, eyebrows)

18. We should ____ water on an earthen floor before sweeping.
(pour, sprinkle)

19. Urinals are used to pass out ____.
(faeces, urine)

20. New plants grow from ____.
(flowers, roots, seeds)

21. A fruit with many seeds is ____.
(mango, pumpkin, avocado)

12. A chewed stick makes a ____.
(comb, hair brush, tooth brush)

22. Seeds need ____ to germinate.
(water, soil, light)

23. Black jack is a ____.
(weed, crop)

13. We use ____ to make our hair tidy.
(handkerchief, comb, tooth brush)

24. Many leaves are colour ____.
(yellow, green, red)

14. Hygiene means being ____.

25. A plant with a big leaf is ____.
(arrow root, bean, groundnut)

26. A long thin leaf comes from _____ . (maize, banana, jacaranda)

27. Seeds are planted in the _____ . (water, air, soil)

28.



This leaf is from a _____ . (banana, bean, arrow root)

29. The daily changes of a place are _____ . (rain, clouds, weather)

Draw weather symbols showing the following.

30. Cloudy day




31. Sunny day



32. Rainy day



33. Calm day



34. On a rainy day we wear _____ when walking on a muddy road. (gumboots, scarf, raincoat)

35. Cattle are cows and _____ . (sheep, bulls, goats)

36. _____ is not an example of poultry.

(Chicken, Flamingo, Turkey)

37. Fish are kept in _____ . (hutch, fish pond, poultry house)

38. A goat gives us meat and _____ . (eggs, wool, milk)

39. Cleaning muddy water is known as _____ . (boiling, filtering, storing)

40. To separate things from water we can use _____ . (paper, leaf, cloth)

41. _____ soil makes the longest ribbon. (Loam, Clay, Sand)

42. _____ visiting the latrine you should wash your hands. (Before, After)

43. Which one is not a vegetable? (kales, spinach, potatoes)

44. Our bodies make _____ when we stand in the sun. (shadow, light, sound)

45. At midday your shadow is always _____ . (big, small)

46. We pluck _____ to produce sound. (xylophone, drum, guitar)

47. Wind makes a _____ to move. (train, ship, bicycle)

48. The shape used to make wheels is _____ . (circle, triangle, rectangle)

49. To push a heavy box easily _____ are used. (rollers, rope, ladder)

50. Kites fly well when the weather is _____ . (calm, rainy, windy)



HIGH FLYER SERIES EVALUATION TEST
DARASA LA PILI – MWAKA 2016
KISWAHILI: LUGHA

TAREHE:

JINA: SHULE:

Jaza pengo

1. K _ _ f _ _ a

2. K _ _ v _ _ l _ _

3. Pat _ _ p _ _ t _ _

4. Ul _ _ m _ _

5. C _ _ oo

Andika majina ya picha

6.




7.



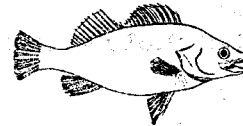
8.



9.



10.



Jibu salamu

11. Habari _____

12. Shikamoo _____

13. Hujambo _____

Andika kwa wakati uliopita

14. Mtoto analia _____

15. Mama anapika _____

16. Kijana analia _____

Tumia - angu

17. Mkate _____

18. Kitabu _____

19. Jicho _____

Andika kwa herufi ndogo

20. MKOMBA _____

21. SABUNI _____

22. KIFUA _____

23. SOKO _____

24. CHAKULA _____

25. MPIRA _____

Kamilisha vitendawili

26. Alala hafumbi macho _____


27. Popote niendapo ananifuata _____

28. Mti wenye matawi matano _____


29. Analilia mwituni _____
(kivuli, mkono, samaki, shoka)

Andika majina ya maumbo

30.



31.



Kamilisha sentensi

32. Rangi ya ubao ni _____.

33. Rangi ya nyasi ni _____.

34. Mwalimu mkuu anaitwa _____.

35. Nguo ya shule inaitwa _____.

Andika tarakimu hizi

36. 48 _____

37. 29 _____

38. Mia moja na kumi _____

39. Thelathini na tisa _____

40. 217 _____

Kanusha sentensi

41. Analala _____

42. Mtoto analia _____

43. Kisu kimepotea _____

44. Panya amepotea _____

Kinyume

45. Mwanafunzi _____

46. Mrefu _____

47. Moto _____

Andika wingi

48. Chumba _____

49. Sufuria _____

50. Kioo _____





HIGH FLYER SERIES EVALUATION TEST
DARASA LA PILI – MWAKA 2016
KUSOMA

TAREHE:

JINA: SHULE:

Soma maneno haya:-

- | | | |
|-----------|-------------|---------------|
| 1. Nazi | 8. Mzazi | 15. Kimbia |
| 2. Kanzu | 9. Chapati | 16. Vuta |
| 3. Mshipi | 10. Yai | 17. Asubuhi |
| 4. Shati | 11. Jicho | 18. Fumbua |
| 5. Chai | 12. Kalamu | 19. Harakisha |
| 6. Rafiki | 13. Kofia | 20. Macho |
| 7. Sahani | 14. Shimizi | |

Soma sentensi hizi:-

21. Babu amealia kanzu yake.
22. Huu ni mshipi wangu.
23. Kofia ya mtoto imepotea.
24. Mbona mwanidharau.
25. Tuna vuta kamba.





HIGH FLYER SERIES EVALUATION TEST
STANDARD TWO – YEAR 2016
SOCIAL STUDIES

DATE:

NAME: SCHOOL:

1. A school is a place where _____ go to learn.

(pupils, parents, Christians)

2. _____ is a food crop.

(Tea, Maize, Coffee)

3. Clothes dry faster when the weather is _____.

(calm, windy, rainy)

4. A _____ catches fish.

(farmer, fisherman, tailor)

5.



The weather is _____.

(windy, cloudy, calm)

6. Parents and children make a _____ family.

(extended, single, nuclear)

7. We rest in the _____ room.

(dining, sitting, bath)

8. Playing near the road can cause

(cold, hatred, accidents)

9. _____ keeps records in our school.

(Secretary, Watchman, Prefect)

10. _____ cooks food in our school. (Teacher, Cook, Cleaner)

11. _____ come to our country to see wild animals.

(Poachers, Tourists, Visitors)

12. We cook food in the _____.

(store, garage, kitchen)

13.



These shoes are useful during the _____ season.

(windy, rainy, sunny)

14. When it rains, our crops _____.

(die, grow, burn)



15. We sing _____ when raising the flag.
(Baby Jesus, Lord's Prayer, National Anthem)

16. The head of a school is a _____.
(head teacher, class teacher, chief)

17. A sister to my mother is my _____.
(uncle, cousin, aunt)

18. Water is stored in a _____.
(tank, well, tap)

19. At home, we learn from our _____.
(teachers, parents, pastors)

20. Sick people get medicine from the _____.
(school, church, hospital)

21. Children should _____ their teachers.
(disobey, abuse, respect)

22. After sweeping, we put rubbish in the _____.

(toilet, dustbin, desk)

23. Farmers prepare their farms during the _____ season.
(rainy, dry, wet)

24. We raise the flag at _____.
(home, church, school)

25. A _____ repairs cars.
(doctor, mechanic, driver)

26. _____ makes our compound beautiful.
(Rubbish, Flowers, Flag)

27. When riding the bicycle, we should keep _____.
(centre, right, left)

28. A _____ usually tells stories.
(father, uncle, grandparent)

29. Beef is the meat of a _____.
(sheep, cow, pig)

30. Every pupil should have a _____ to carry books'.
(paper, sack, bag)





HIGH FLYER SERIES EVALUATION TEST
STANDARD TWO – YEAR 2016
CHRISTIAN RELIGIOUS EDUCATION

DATE:

NAME: SCHOOL:

1. The first book in the Bible is _____.
(Exodus, Mark, Genesis)
2. Adam and Eve were our first _____.
(children, parents, neighbours)
3. Joseph was sold as a slave in _____.
(Egypt, Israel, Jerusalem)
4. A person who cannot hear is _____.
(deaf, dumb, lame)
5. Who was sick with bad fever?
(Samaritan, Bartimaeus, Simon's mother-in-law)
6. Zacheus was a _____ man.
(huge, short, tall)
7. When we are wrong, we should say sorry and ask for _____.
(presents, forgiveness, punishment)
8. The girl who was brought back to life by Jesus was the daughter of _____.
(Peter, John, Jairus)
9. _____ was helped by a rich woman from Shunem.
(Elisha, Isaiah, Jacob)
10. My _____ is the temple of the Holy Spirit.
(spirit, body, mind)
11. Love your _____ as you love yourself. (parent, friends, neighbour)
12. David killed Goliath using a _____.
(gun, stone, sword)
13. _____ of Cyrene helped Jesus to carry the cross.
(Joseph, Simon, Thomas)
14. Jacob had _____ sons.
(7, 11, 12)
15. _____ a disciple of Jesus was a tax collector before.
(Luke, Matthew, John)
16. Jesus father worked as a _____.
(Shepherd, doctor, carpenter)
17. The National Anthem is a prayer for our _____.
(school, teachers, country)
18. God wants us to _____ our teachers. (hate, obey, disobey)
19. During Easter, we celebrate the _____ of Jesus.
(birth, death, life)
20. God created man in His own _____.
(shape, image, soul)



HIGH FLYER SERIES EVALUATION TEST
STANDARD TWO – YEAR 2016
READING

DATE:

NAME: SCHOOL:

Read these words

- | | |
|-------------|-------------|
| 1. Sunrise | 6. Bucket |
| 2. Florist | 7. Elbow |
| 3. Hundred | 8. Tomorrow |
| 4. Porridge | 9. Towel |
| 5. Lunch | 10. Heavy |

Read these sentences

11. Who looks after this small child?
12. Watermelon, mangoes and oranges are fruits.
13. A rotten egg smells bad.
14. These seats are for the visitors.
15. The poor lady died of malaria.

Read the passage below

One day, hare was going to look for food. He found hippo on the way. Hippo refused to give hare way to pass. Hare was angry and tied one of hippo's legs. Hippo tried to walk but could not. He pulled until the rope cut. He fell down and hare laughed at him.














HIGH FLYER
SERIES
008

HIGH FLYER SERIES EVALUATION TEST

STANDARD TWO – YEAR 2016

MARKING SCHEME

| ENGLISH | KISWAHILI | MATHS | SCIENCE | SOCIAL STUDIES | C.R.E. |
|----------------------------------|-------------------------------|-----------------------------|--|------------------------|-----------------------------|
| 1. _____ | 1. Kifua | 1. 5 tens 3 ones | 1. 5 | 1. Pupils | 1. Genesis |
| 2. _____ | 2. Kivuli | 2. 10 | 2. Smell | 2. Maize | 2. Parents |
| 3. _____ | 3. Patipati | 3. 10 | 3. Touch | 3. Windy | 3. Egypt |
| 4. _____ | 4. Ulimi | 4. 86 | 4. Taste | 4. Fisherman | 4. Deaf |
| 5. _____ | 5. Choo | 5. 243 | 5. Hearing | 5. Calm | 5. Simon's mother-in-law |
| 6. Ball | 6. Mti | 6. May | 6. Lemon | 6. Nuclear | 6. Short |
| 7. Chair | 7. Msichana | 7. 19 | 7. Green | 7. Sitting | 7. Forgiveness |
| 8. Week | 8. Kikombe | 8. 27 | 8. White part | 8. Accidents | 8. Jairus |
| 9. Knife | 9. Gari | 9. 36 | 9. Eye lashes | 9. Secretary | 9. Elisha |
| 10. Black | 10. Samaki | 10. 500 | 10. Pupil | 10. Cook | 10. Body |
| 11. Short | 11. Njema | 11. 20 + 6 | 11. Eye brows | 11. Tourists | 11. Neighbour |
| 12. Early | 12. Marahaba | 12. 5 | 12. Tooth brush | 12. Kitchen | 12. Stone |
| 13. Last | 13. Sijambo | 13. 10 | 13. Comb | 13. Rainy | 13. Simon |
| 14. Love | 14. Mtoto alilia | 14. 16 | 14. Clean | 14. Grow | 14. 12 |
| 15. Clean | 15. Mama alipika | 15. 20 | 15. Salt | 15. National Anthem | 15. Matthew |
| 16. on | 16. Kijana alilia | 16. 43 | 16. Feet | 16. Head teacher | 16. Carpenter |
| 17. under | 17. Wangu | 17. 806 | 17. Broom | 17. Aunt | 17. Country |
| 18. in | 18. Changu | 18. 219 | 18. Sprinkle | 18. Tank | 18. Obey |
| 19. in | 19. Langu | 19. 20 | 19. Urine | 19. Parents | 19. Death |
| 20. under | 20. Mkoba | 20. Sh 35 | 20. Seeds | 20. Hospital | 20. Image |
| 21. deer | 21. Sabuni | 21. 5 | 21. Pumpkin | 21. Respect | I.R.E. |
| 22. keys | 22. Kifua | 22. $6 \times 2 = 12$ | 22. Water | 22. Dustbin | 1. Muhammad |
| 23. feet | 23. Soko | 23. $\frac{2}{3}$ | 23. Weed | 23. Dry | 2. Shahada |
| 24. ladies | 24. Chakula | 24. Oval | 24. Green | 24. School | 3. 5 |
| 25. hair | 25. Mpira | 25. Triangle | 25. Arrow root | 25. Mechanic | 4. Three |
| 26. this | 26. Samaki | 26. Rectangle | 26. Maize | 26. Flowers | 5. 2 |
| 27. these | 27. Kivuli | 27. 8 | 27. Soil | 27. Left | 6. Clean and punctual |
| 28. these | 28. Mkono | 28. Tuesday | 28. Banana | 28. Grandparent | 7. Allah |
| 29. these | 29. Shoka | 29. $\frac{1}{4}$ (quarter) | 29. Weather | 29. Cow | 8. Amina |
| 30. this | 30. Duara | 30. Sh 40 00 cts | 30.  | 30. Bag | 9. Peace |
| 31. Ankle, elbow, knee, wrist | 31. Mraba | 31. Sh 99 50 cts | 31.  | | 10. Clean |
| 32. Blue, green, pink, yellow | 32. Nyeusi | 32. 20 | 32.  | | 11. Bad |
| 33. East, North, South, West | 33. Kijani kibichi | 33. 0 | 33.  | | 12. 4 |
| 34. shall | 34. _____ | 34. 100 | 34.  | | 13. Ramadhan |
| 35. will | 35. Sare | 35. 540 | 35.  | | 14. Worship |
| 36. is | 36. Arubaine na nane | 36. 112 | 36.  | | 15. Allah |
| 37. is | 37. Ishirini na tisa | 37. 899 | 37.  | | 16. 4 |
| 38. am | 38. 110 | 38. 444 | 38.  | | 17. Food |
| 39. are | 39. 39 | 39. 2 | | | 18. Ramadhan |
| 40. is | 40. Mia mbili kumi na saba | 40. 58 | | | 19. Amina |
| 41. Sty | 41. Halali | 41. Same | | | 20. Mosque |
| 42. Hutch | 42. Mtoto halii | 42. 3 | | | |
| 43. Stable | 43. Kisu hakijapotea | 43. $2 \times 5 = 10$ | | | |
| 44. Kennel | 44. Panya hajapotea | 44. 60 | | | |
| 45. Den | 45. Mwalimu | 45. 4 | | | |
| 46. Ashtray | 46. Mfupi | 46. 9 | | | |
| 47. Bed | 47. Baridi | 47. 44 | | | |
| 48. Fly | 48. Vyumba | 48. 22 | | | |
| 49. Cashbox | 49. Sufuria | 49. 3 | | | |
| 50. Rail | 50. Vioo | 50. 12 | | | |