



# HIGHPERFORMANCE EXAM SERIES

## STANDARD ONE

### YEAR 2016

# [1]

## MATHEMATICS

NAME: \_\_\_\_\_

SCHOOL: \_\_\_\_\_

DATE: \_\_\_\_\_

### Add

1.  $20 + 11 = \underline{\hspace{2cm}}$
2.  $0 + 31 = \underline{\hspace{2cm}}$
3.  $6 + 9 + 7 = \underline{\hspace{2cm}}$
4.  $10 + 11 + 20 = \underline{\hspace{2cm}}$
5.  $6 + 3 + 4 + 1 + 3 = \underline{\hspace{2cm}}$
6.  $59 = \underline{\hspace{1cm}}$  tens  $\underline{\hspace{1cm}}$  ones
7.  $62 = \underline{\hspace{1cm}}$  tens  $\underline{\hspace{1cm}}$  ones
8.  $9 = \underline{\hspace{1cm}}$  tens  $\underline{\hspace{1cm}}$  ones

### Subtract

9.  $7 - 4 = \underline{\hspace{2cm}}$
10.  $8 - 1 - 2 = \underline{\hspace{2cm}}$
11.  $9 - 3 - 2 = \underline{\hspace{2cm}}$
12.  $9 - 6 = \underline{\hspace{2cm}}$
13. 
$$\begin{array}{r} 30 \\ - 10 \\ \hline \end{array}$$
14. 
$$\begin{array}{r} 42 \\ - 2 \\ \hline \end{array}$$
15. 
$$\begin{array}{r} 7 \\ - 7 \\ \hline \end{array}$$

### Fill in the missing numbers

16.  $10 \underline{\hspace{1cm}}, 12, \underline{\hspace{1cm}}, 14, \underline{\hspace{1cm}}$
17.  $21, \underline{\hspace{1cm}}, \underline{\hspace{1cm}}, 24, \underline{\hspace{1cm}}, \underline{\hspace{1cm}}$

### Write the numbers in words:-

18.  $6 = \underline{\hspace{3cm}}$
19.  $9 = \underline{\hspace{3cm}}$
20.  $4 = \underline{\hspace{3cm}}$
21. Seven cows have  $\underline{\hspace{1cm}}$  heads
23. There are  $\underline{\hspace{1cm}}$  days in a week.
24. 
$$\begin{array}{r} 27 \\ + 12 \\ \hline \end{array}$$
25. 
$$\begin{array}{r} 55 \\ + 34 \\ \hline \end{array}$$
26.  $\underline{\hspace{1cm}} - 9 = 5$
27.  $12 - \underline{\hspace{1cm}} = 6$
28.  $8 + \underline{\hspace{1cm}} = 12$
29.  $\underline{\hspace{1cm}} + 5 = 15$
30. We eat lunch food at  $\underline{\hspace{2cm}}$   
(night, evening, noon)

31. Which one holds more tea? \_\_\_\_\_



32.  $40 + 10 + 30 =$  \_\_\_\_\_

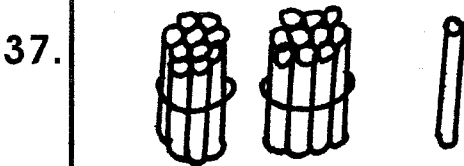

**Write in figures**

33. Fifteen = \_\_\_\_\_

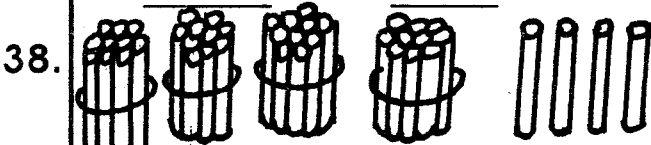
34. Twenty nine = \_\_\_\_\_

35. Thirty seven = \_\_\_\_\_

36. Which one is longer? \_\_\_\_\_


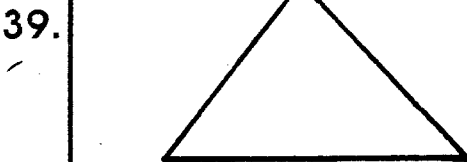


tens                      ones



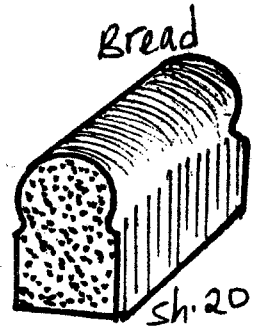
tens                      ones

**Name the shapes**



(square, circle, rectangle, oval, triangle)

**Shopping Price List**



42. John bought a bread and a pencil. How much did he pay for the items? \_\_\_\_\_

43. My mother bought 2 cups and a bread. How much did she pay? \_\_\_\_\_

44. I bought 10 sweets, how much did I pay? \_\_\_\_\_

45. 2 eggs + 7 eggs = \_\_\_\_\_ eggs

46. I have \_\_\_\_\_ fingers on one hand.

47. 
$$\begin{array}{r} 32 \\ +15 \\ \hline \end{array}$$

48. 
$$\begin{array}{r} 9 \\ +7 \\ \hline \end{array}$$

49. 
$$\begin{array}{r} 65 \\ -43 \\ \hline \end{array}$$

50. 
$$\begin{array}{r} 40 \\ +6 \\ \hline \end{array}$$



# HIGH PERFORMANCE EXAM SERIES

## STANDARD ONE

YEAR 2016


### [1] SCIENCE

NAME: \_\_\_\_\_

SCHOOL: \_\_\_\_\_

DATE: \_\_\_\_\_

#### Name the parts of the bird



1. \_\_\_\_\_
2. \_\_\_\_\_
3. \_\_\_\_\_
4. \_\_\_\_\_
5. \_\_\_\_\_

(tail, foot, eye, beak, crown)


6. Tongue is the sense organ for \_\_\_\_\_  
(hearing, smelling, tasting)
7. Teeth are found in the \_\_\_\_\_  
(mouth, eyes, stomach)
8. I clean my body with water and \_\_\_\_\_  
(soil, milk, soap)
9. Moving air is called \_\_\_\_\_  
(clouds, rain, wind)
10. A \_\_\_\_\_ is a big animal  
(lion, cat, snake)
11. A snake has \_\_\_\_\_ legs.  
(2, 4, 0)

12.



We eat with our \_\_\_\_\_  
(noses, eyes, mouth)

13.




This is the house of a \_\_\_\_\_  
(bird, spider, snake)

14. Leaves are \_\_\_\_\_ in colour  
(blue, black, green)


15. Milk is \_\_\_\_\_ in colour.  
(white, blue, black)

#### Name the weather symbols

16.



17.



18.



19.

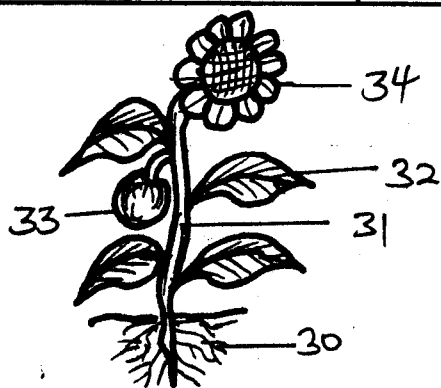


(calm, sunny, cloudy, rainy)

20. We eat a ripe \_\_\_\_\_  
(banana, maize, roots)
21. \_\_\_\_\_ gives us wool.  
(Sheep, Goat, Cow)
22. Dirty hair keep \_\_\_\_\_  
(fleas, flies, lice)


23. \_\_\_\_\_ spoil our teeth.  
(Sweets, Milk, Ugali)
24. A bird lives in a \_\_\_\_\_  
(hole, house, nest)
25. A rainbow has \_\_\_\_\_ colours  
(6, 7, 8)
26. We eat the \_\_\_\_\_ of sugarcane  
(leaves, roots, stem)
27. A bicycle has \_\_\_\_\_ wheels.  
(2, 4, 8)
28. People drink little water when it is  
\_\_\_\_\_ (hot, warm, cold)
29. We wash our hands with \_\_\_\_\_  
and soap. (mud, leaves, water)

Name the parts of the plant



30. \_\_\_\_\_
31. \_\_\_\_\_
32. \_\_\_\_\_
33. \_\_\_\_\_
34. \_\_\_\_\_


(Roots, Stem, Leaf, Flower, Fruit)

35.  We use this when the weather is \_\_\_\_\_  
(calm, windy, rainy,
36. The best soil for modelling is \_\_\_\_\_  
(sand, loam, clay)


37. A \_\_\_\_\_ lives in water.  
(snake, fish, monkey)
38. Seeds are found in a \_\_\_\_\_  
(leaf, root, fruit)
39. The house of bees is called a \_\_\_\_\_  
(house, palace, hive)
40. We eat food to \_\_\_\_\_  
(grow, fight, sleep)
41. A \_\_\_\_\_ is a source of water.  
(borehole, tap, bank)
42. Apples are \_\_\_\_\_  
(seeds, fruits, leaves)
43. We fly kites when the weather is \_\_\_\_\_  
(windy, cloudy, sunny)

Draw things found in the kitchen


44. Cup




45. Plate




46. Spoon



47. Bowl



48. Knife



49.  This is a \_\_\_\_\_ seed.  
(maize, bean, potato)

50. Name the farm tool below.



(slasher, jembe, panga)



# HIGH PERFORMANCE EXAM SERIES

## STANDARD ONE

### YEAR 2016

# [1]

# ENGLISH

NAME: \_\_\_\_\_

SCHOOL: \_\_\_\_\_

DATE: \_\_\_\_\_

### Dictation

1. \_\_\_\_\_
2. \_\_\_\_\_
3. \_\_\_\_\_
4. \_\_\_\_\_
5. \_\_\_\_\_

### Write in small letters

6. FATHER - \_\_\_\_\_
7. CAT - \_\_\_\_\_
8. BIG - \_\_\_\_\_
9. ZEBRA - \_\_\_\_\_
10. UNIFORM - \_\_\_\_\_

### Put 'a' or 'an'


11. \_\_\_\_\_ empty bucket.
12. \_\_\_\_\_ ripe apple.
13. \_\_\_\_\_ small zebra.
14. \_\_\_\_\_ ox.
15. \_\_\_\_\_ pineapple
16. \_\_\_\_\_ apple

### Name the pictures

17.




18.



19.



20.



### Add '-ing'

Example: Cry - Crying

21. Play - \_\_\_\_\_
22. Laugh - \_\_\_\_\_
23. Carry - \_\_\_\_\_
24. Sleep - \_\_\_\_\_
25. Sing - \_\_\_\_\_

### Fill in the missing letters

26. B \_\_\_\_ g
27. Sl \_\_\_\_ p
28. B \_\_\_\_ d
29. T \_\_\_\_ cher
30. B \_\_\_\_ k

**Use the words given below to complete the sentences**



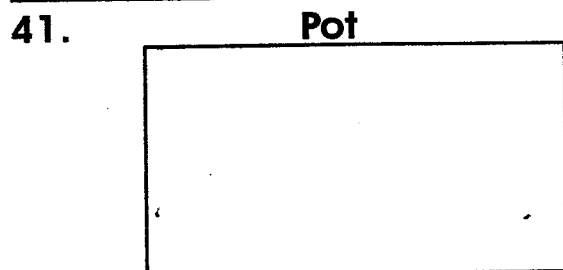
31. A person who grows crops is called \_\_\_\_\_
32. We go to church on \_\_\_\_\_
33. Oranges, apples and pineapples are all \_\_\_\_\_
34. In a class, we sit on the \_\_\_\_\_
35. \_\_\_\_\_ teaches children

(desks, teacher, Sunday, farmer, fruits)

**Write the opposite**

36. Night - \_\_\_\_\_
37. Dark - \_\_\_\_\_
38. Brother - \_\_\_\_\_
39. Small - \_\_\_\_\_
40. Black - \_\_\_\_\_


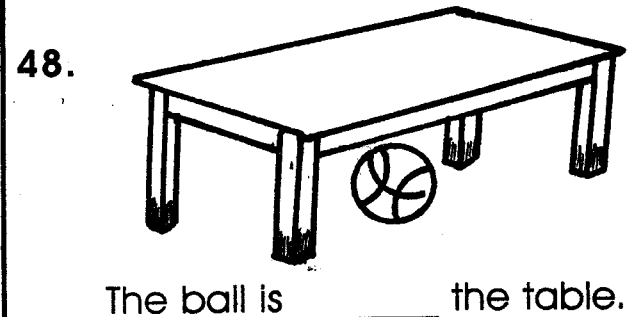

**Draw pictures**



**Write the plurals**

44. Pencil - \_\_\_\_\_
45. Dress - \_\_\_\_\_
46. House - \_\_\_\_\_

**Use 'on', 'under' or 'in'**



50. My name is \_\_\_\_\_  
and I am in class \_\_\_\_\_



# HIGH PERFORMANCE EXAM SERIES

## STANDARD ONE

YEAR 2016

[1]

### READING & KUSOMA

NAME: \_\_\_\_\_

SCHOOL: \_\_\_\_\_

DATE: \_\_\_\_\_

## READING

### Read these words

- |          |           |            |            |
|----------|-----------|------------|------------|
| 1. Book  | 6. Fish   | 11. Bottle | 16. Chain  |
| 2. Smoke | 7. Bird   | 12. Food   | 17. Flower |
| 3. Desk  | 8. Ruler  | 13. Song   | 18. Glass  |
| 4. Nose  | 9. Plate  | 14. Maize  | 19. Paper  |
| 5. Seven | 10. Beans | 15. House  | 20. Ground |

### Read these sentences

21. I like sweet bananas.
22. The children are going to school.
23. The colour of milk is white.
24. The ink pen has broken.
25. Ten minus five is five.


## KUSOMA

### Soma majina haya

- |            |            |              |              |
|------------|------------|--------------|--------------|
| 1. Kimbia  | 6. Daktari | 11. Gazeti   | 16. Mfuko    |
| 2. Kikombe | 7. Kikapu  | 12. Barabara | 17. Shingo   |
| 3. Maswali | 8. Sungura | 13. Msitu    | 18. Karatasi |
| 4. Kitenge | 9. Mawingu | 14. Kitambaa | 19. Kisigino |
| 5. Mgeni   | 10. Siafu  | 15. Bendera  | 20. Dawati   |

### Soma sentensi hizi

21. Sisi tunapenda kucheza mpira
22. Maji moto yako kwa sufuria.
23. Baba yangu ni mkali sana.
24. Ng'ombe hutupa maziwa.
25. Samaki wanarukaruka majini



# HIGH PERFORMANCE EXAM SERIES

## DARASA LA KWANZA

MWAKA 2016

[1]

### KISWAHILI

JINA \_\_\_\_\_

SHULE: \_\_\_\_\_

TAREHE: \_\_\_\_\_

#### Imia

1. \_\_\_\_\_
2. \_\_\_\_\_
3. \_\_\_\_\_
4. \_\_\_\_\_
5. \_\_\_\_\_

#### Unganisha silabi kuunda neno


6. Ka + ka = \_\_\_\_\_
7. Mwa + li + mu = \_\_\_\_\_
8. Nya + si = \_\_\_\_\_
9. Ti + ke + ti = \_\_\_\_\_
10. Wi + mbo = \_\_\_\_\_

#### Jibu maamkizi

11. Jambo - \_\_\_\_\_
12. Shikamoo - \_\_\_\_\_
13. Pole - \_\_\_\_\_

#### Andika majina ya mavazi haya

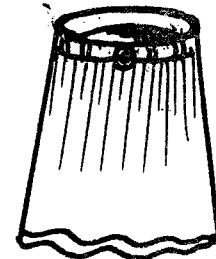
14.



15.



16.



(Soksi, Rinda, Suruali)

#### Andika kwa wingi

17. Maji - \_\_\_\_\_
18. Jino - \_\_\_\_\_
19. Mti - \_\_\_\_\_
20. Meza - \_\_\_\_\_
21. Kiti - \_\_\_\_\_
22. Kalamu - \_\_\_\_\_



**Andika sehemu za kichwa**



23. \_\_\_\_\_  
 24. \_\_\_\_\_  
 25. \_\_\_\_\_  
 26. \_\_\_\_\_  
 27. \_\_\_\_\_

(sikio, pua, mdomo, jicho, nywele)

**Unda majina ukitumia silabi hizi:**

28. be \_\_\_\_\_  
 29. ka \_\_\_\_\_  
 30. mwa \_\_\_\_\_  
 31. m \_\_\_\_\_  
 32. ki \_\_\_\_\_

**Andika kinyume cha maneno haya**



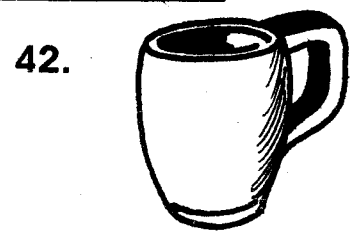
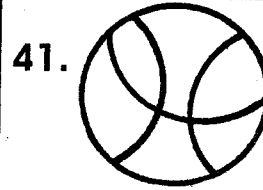
33. Lala - \_\_\_\_\_  
 34. Lia - \_\_\_\_\_  
 35. Dada - \_\_\_\_\_  
 36. Mchana - \_\_\_\_\_

**Jaza pengo**

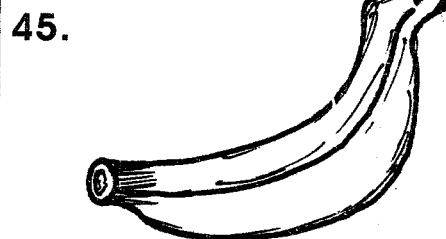
37. Mk \_\_\_\_\_ t \_\_\_\_\_  
 38. Ny \_\_\_\_\_ ki \_\_\_\_\_  
 39. Mw \_\_\_\_\_ l \_\_\_\_\_ mu \_\_\_\_\_

40. Ny \_\_\_\_\_ mb \_\_\_\_\_

**Andika majina ya picha hizi**



(nyumba, kikombe, mti, mpira)

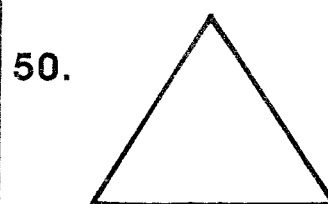




Tunda hili huitwa \_\_\_\_\_  
 (chungwa, nanasi, ndizi)

46. Mamake baba ni \_\_\_\_\_  
 (nyanya, kaka, babu)

47. Mzazi wa kike ni \_\_\_\_\_  
 (baba, mama, dada)

**Andika majina ya maumbo haya**



(Mraba, Pembe tatu, Mstatili)



# HIGH PERFORMANCE EXAM SERIES

## STANDARD ONE

### YEAR 2016

[1]

SOCIAL STUDIES & C.R.E

NAME: \_\_\_\_\_

SCHOOL: \_\_\_\_\_

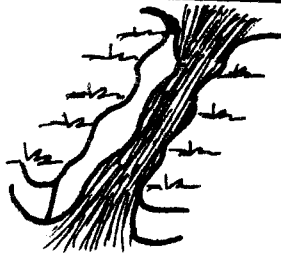
DATE: \_\_\_\_\_

Name the following physical features

1.



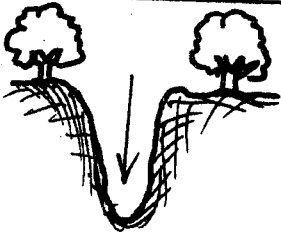
2.




3.



4.



5.




\_\_\_\_\_ (river, hill, valley, lake, forest)

6. \_\_\_\_\_ is a wild animal.  
(Lion, Sheep, Cow)

7. Who is the head of a family? \_\_\_\_\_  
(Mother, Father, Chief)

8. Sheep gives us \_\_\_\_\_  
(wool, mohair, milk)

9. Our flag has \_\_\_\_\_ colours.  
(four, five, six)

10.  The walls of this house are made of \_\_\_\_\_ (bricks, cow dung, timber)

11. \_\_\_\_\_ arrests thieves.  
(Policemen, Pastors, Teachers)

12. We cross the road at the \_\_\_\_\_ crossing.  
(zebra, cows, junction)

13. We should not play with \_\_\_\_\_ at home.  
(food, dolls, medicine)

14. \_\_\_\_\_ is our President.  
(Raila, Uhuru, Ruto)

15. The basic needs are food, shelter and \_\_\_\_\_.  
(car, television, clothes)

16. There are \_\_\_\_\_ days in a week.  
(seven, four, three)


17. A wedding ceremony is a \_\_\_\_\_ occasion.  
(sad, happy, noisy)

18. We can get water from \_\_\_\_\_.  
(stones, rivers, trees)

Name two types of buildings in your school

19. \_\_\_\_\_


20. \_\_\_\_\_

21.  People can store water in a \_\_\_\_\_.  
(tank, pipe, lake)


Name the tools used by a farmer

22. \_\_\_\_\_

23. \_\_\_\_\_




24.



\_\_\_\_\_ (panga, rake, jembe)

25. Things are bought and sold in a \_\_\_\_\_ (market, school, farm)

26.  Farmers harvest when the weather is \_\_\_\_\_ (cloudy, rainy, sunny)

27.  This pot can be used to store \_\_\_\_\_ (water, milk, sugar)

28. The red colour in our flag stands for \_\_\_\_\_ (peace, blood, crops)

29. Which animal gives us milk and beef? \_\_\_\_\_ (goat, cow, sheep)

30.  This is a \_\_\_\_\_ (hut, manyatta, church)  
**C.R.E**

31. Jesus is the son of \_\_\_\_\_ (Adam, God, Eve)

32. Jesus had \_\_\_\_\_ disciples.

33. \_\_\_\_\_ was the wife of Adam. (Eve, Sarah, Mary)

34. Jacob had \_\_\_\_\_ sons. (ten, eleven, twelve)

35. \_\_\_\_\_ killed his brother Abel. (Cain, Joseph, Jacob)


Name the following things created by

God

36.



37.



38.



39.



\_\_\_\_\_ (Star, Sun, Moon, Tree)

40. God rested on the \_\_\_\_\_ day. (7th, 6th, 4th)

41. We should \_\_\_\_\_ our enemies (love, kill, hate)

42. \_\_\_\_\_ died for our sins. (Jesus, God, Satan)

43. \_\_\_\_\_ was an angel of God. (Gabriel, Samson, Noah)


44. In church we read the \_\_\_\_\_ (story book, Bible, chart)

45. Jesus died on the \_\_\_\_\_ (tree, hill, cross)

46. \_\_\_\_\_ was a strong man. (Samson, Saul, David)

47. \_\_\_\_\_ are bad people. (Thieves, Teachers, Bishops)

48.  This is a \_\_\_\_\_ (newspaper, coffin, Bible)

49.  Jesus died on this. It is called \_\_\_\_\_ (plus, tree, cross)

50. We go to church to \_\_\_\_\_ (sleep, buy, pray)