



# HIGH RANK EXAM SERIES

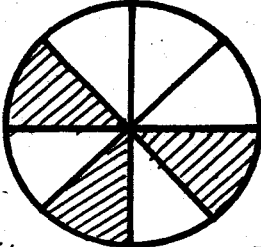
## STANDARD FOUR

YEAR 2016

[4]

### MATHEMATICS

Time: 2 Hours

- Write 4044 in words.  
A. Four hundred and forty four  
B. Forty thousand four hundred and four  
C. Forty thousand and forty four  
D. Four thousand and forty four
- What is the place value of digit 4 in the number 64281?  
A. Hundreds  
B. Thousands  
C. Tens  
D. Ten thousands
- What is the total value of digit 8 in the number 62843?  
A. 8000  
B. 80  
C. 800  
D. 8
- Which number is divisible by both 2 and 5?  
A. 10  
B. 15  
C. 22  
D. 18
- Add:  $\frac{1}{4} + \frac{2}{4}$   
A.  $\frac{1}{4}$   
B.  $\frac{2}{4}$   
C.  $\frac{3}{8}$   
D.  $\frac{3}{4}$
- Jack had 986 goats. He sold 439 goats. How many goats remained?  
A. 543  
B. 547  
C. 553  
D. 557
- What is the next number in the series?  
6, 9, 12, 15, \_\_\_\_\_  
A. 19  
B. 17  
C. 20  
D. 18
- Which fraction is equivalent to  $\frac{1}{2}$ ?  
A.  $\frac{6}{9}$   
B.  $\frac{2}{5}$   
C.  $\frac{5}{10}$   
D.  $\frac{3}{4}$
- Which one is an odd number?  
A. 262  
B. 50  
C. 36  
D. 21
- What fraction is shaded in the figure below?  
  
A.  $\frac{5}{8}$   
B.  $\frac{3}{8}$   
C.  $\frac{4}{8}$   
D.  $\frac{6}{8}$
- Which number is the largest?  
A. 550  
B. 505  
C. 555  
D. 500
- Add:  $\begin{array}{r} 6215 \\ + 2368 \\ \hline \end{array}$   
A. 8573  
B. 8583  
C. 7583  
D. 8582

13. Work out:

$$14 \times 5 = \underline{\hspace{2cm}}$$

- A. 19                      B. 80  
C. 72                      D. 70

14. Which one is an even number?

- A. 311                      B. 545  
C. 112                      D. 137

15. Divide:

$$6 \overline{)54}$$

- A. 8                      B. 9  
C. 6                      D. 12

16. Add:

$$6832 + 428 = \underline{\hspace{2cm}}$$

- A. 6260                      B. 6360  
C. 7160                      D. 7260

17. How many Sh. 50 notes are there in a Sh. 1000 note?


- A. 200                      B. 20  
C. 50                      D. 25

18. Work out:

$$10 \times 8 = \underline{\hspace{2cm}}$$

- A. 80                      B. 88  
C. 18                      D. 90

19. Name the shape below.



- A. Triangle                      B. Rectangle  
C. Oval                      D. Circle

20. Add:

$$2.63 + 1.26 = \underline{\hspace{2cm}}$$

- A. 3.98                      B. 2.98  
C. 3.79                      D. 3.89

21. How many years are there in 36 months?

- A. 5                      B. 3  
C. 4                      D. 2

22. How many  $\frac{1}{2}$  litres are there in 14 litres?

- A. 7                      B. 21  
C. 12                      D. 28

23. In a meeting, there are 213 men and 469 women. How many people are in the meeting altogether?

- A. 782  
B. 672  
C. 682  
D. 692

24. How many minutes are there in two hours?

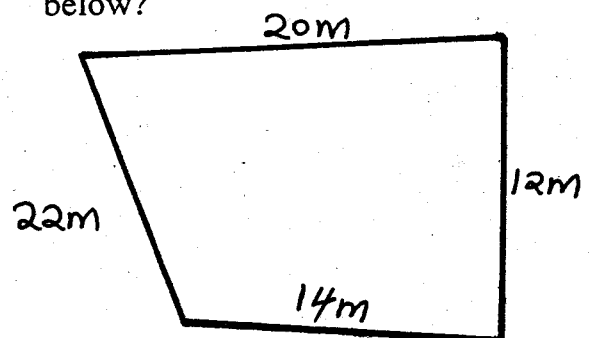
- A. 30                      B. 100  
C. 120                      D. 140

25. Multiply:

$$26 \times 3 = \underline{\hspace{2cm}}$$

- A. 68                      B. 78  
C. 72                      D. 80

26. What is the distance round the figure below?



- A. 68 m                      B. 76 m  
C. 58 m                      D. 66 m

27. Jeremy had 91 mangoes. He shared them equally among 7 pupils. How many mangoes did each pupil receive?

- A. 14                      B. 11  
C. 13                      D. 16

28. Subtract:

$$6.43 - 2.12 = \underline{\hspace{2cm}}$$

- A. 4.31                      B. 4.41  
C. 4.21                      D. 4.12

29.  $\frac{1}{4}$  of 28 =           

- A. 112                      B. 4  
C. 8                         D. 7

30. A cow has 4 legs. How many legs do 13 cows have?

- A. 17                      B. 52  
C. 54                      D. 46

31. There are 40 pupils in a class. The teacher divided the class in 8 equal groups. How many pupils were in each group?

- A. 160                      B. 20  
C. 6                         D. 5

32. Moses had five litres of paraffin. He put one litre in one lamp, then two litres in another lamp. How many litres remained?

- A. 3                         B. 4  
C. 2                         D. 1

33. Weeks                      Days

9	3
- 2	5
<hr/>	

- A. 7 weeks 4 days  
B. 6 weeks 6 days  
C. 6 weeks 5 days  
D. 6 weeks 4 days

34. Odd number + odd number =           

- A. Odd number  
B. Even number  
C. Fraction number  
D. Decimal number

35. What do I take away from ninety five to get thirty three?

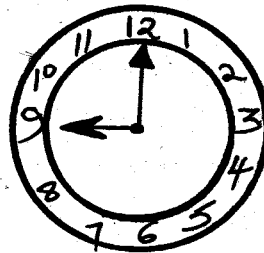
- A. 62                      B. 52  
C. 123                      D. 30

36. Work out:

$$1000 - 901 = \underline{\hspace{2cm}}$$

- A. 90                      B. 99  
C. 91                      D. 107

37. What is the time?



- A. Twelve o'clock    B. Eight o'clock  
C. Half past twelve    D. Nine o'clock

38. Which of these fractions is the largest?

- A.  $\frac{1}{7}$                       B.  $\frac{1}{4}$   
C.  $\frac{1}{5}$                       D.  $\frac{1}{2}$

39. A farmer had 68 sheep, 57 goats and 126 cows. How many animals did he have altogether?

- A. 251                      B. 205  
C. 257                      D. 215

40. Add:      Weeks          Days

12	5
+ 5	6
<hr/>	
<hr/>	

- A. 17 weeks 1 day
- B. 18 weeks 1 day
- C. 18 weeks 4 days
- D. 17 weeks 1 day

41. Subtract 148 m from 782m.

- A. 930
- B. 634
- C. 734
- D. 643

42.

$$7 \overline{) 49}$$

- A. 8                      B. 6
- C. 9                      D. 7

43. How many fingers do 16 boys have?

- A. 80                      B. 120
- C. 96                      D. 160

44.  $12 \times 11 =$  \_\_\_\_\_

- A. 132                      B. 122
- C. 120                      D. 136

45. Which number is divisible by 10?

- A. 68
- B. 101
- C. 70
- D. 42

46. Work out:

$$65 \times 5 = \underline{\hspace{2cm}}$$

- A. 315                      B. 325
- C. 352                      D. 225

47. Add:      478

12
+ 5
<hr/>
<hr/>

- A. 495                      B. 405
- C. 455                      D. 485

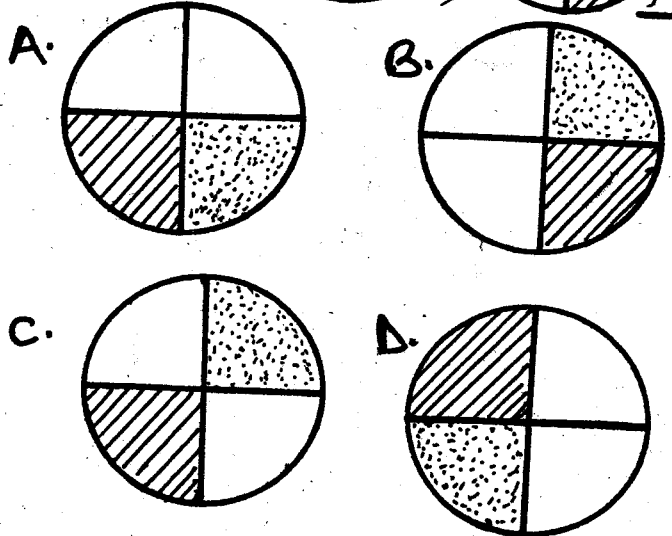
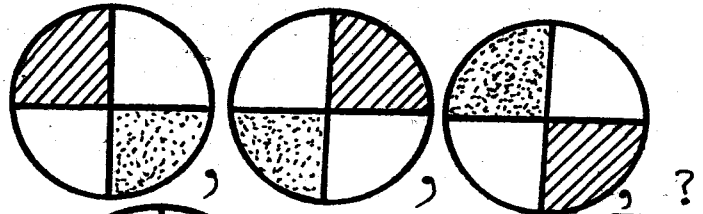
48. How many weeks are there in 63 days?

- A. 8                      B. 7
- C. 9                      D. 6

49. Six and seven are factors of

- A. 6                      B. 13
- C. 7                      D. 42

50. What is the next shape below?



# HIGH RANK EXAM SERIES STANDARD FOUR YEAR 2016



[4]

SCIENCE

Time: 1Hr. 40 Min.


1. Which one is a problem related to teeth?
- A. Shedding of teeth
  - B. Dentures
  - C. Dental floss
  - D. Cavity

2. HIV is a virus that causes
- A. Malaria
  - B. AIDS
  - C. Cholera
  - D. Headache

3. Which one is a personal item?
- A. Chair
  - B. Toothpaste
  - C. Handkerchief
  - D. Book

4. The following are cereal crops except
- A. millet
  - B. maize
  - C. barley
  - D. yams

5. The type of tooth below is called \_\_\_\_\_



- A. canine
- B. molar
- C. incisor
- D. premolar

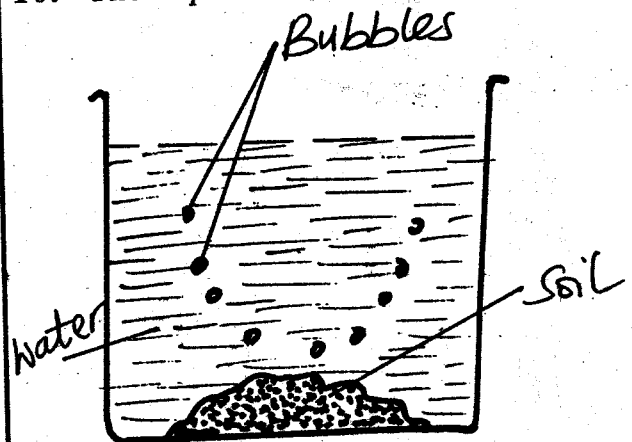
6. The following are sources of water except
- A. tap
  - B. dam
  - C. rainfall
  - D. ocean

7. Weeds can best be controlled by
- A. slashing
  - B. uprooting
  - C. digging out
  - D. using chemicals

8. The main source of light is the
- A. moon
  - B. sun
  - C. stars
  - D. electricity


9. A true insect has how many legs?
- A. Eight
  - B. Four
  - C. Two
  - D. Six

10. The experiment below shows that there is



- A. soil in air
- B. air in soil
- C. bubble in soil
- D. stones in water

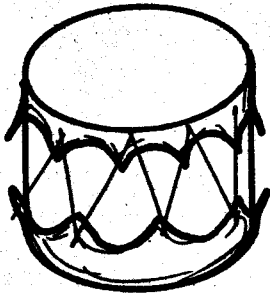
11. A \_\_\_\_\_ does not have legs.  
 A. centipede                      B. bee  
 C. snail                              D. bird
12. Which type of food is good for our teeth?  
 A. Cakes                              B. Sweets  
 C. Biscuits                            D. Milk
13. In the word AIDS, letter D stands for deficiency which means  
 A. signs and symptoms  
 B. lack of  
 C. get from  
 D. body's immunity
14. A snake moves by \_\_\_\_\_  
 A. slithering                      B. gliding  
 C. flying                              D. walking
15. The following are requirements for good health except \_\_\_\_\_  
 A. exercise                      B. rest  
 C. work                              D. food
16. Which weed can be used as a vegetable?  
 A. Blackjack  
 B. Sodom apple  
 C. Oxalis  
 D. Pigweed
17. The best soil for modelling is  
 A. clay                              B. loam  
 C. sand                              D. pebbles
18. Which one is a vegetable?  
 A. Spinach  
 B. Sugarcane  
 C. Arrowroots  
 D. Cassava
19. Which teeth is not part of the deciduous set of teeth?  
 A. Molars  
 B. Canines  
 C. Incisors  
 D. Premolars
20. At night we cannot observe the \_\_\_\_\_ in the sky  
 A. moon                              B. clouds  
 C. sun                              D. stars
21. What is the colour of most leaves?  
 A. Yellow                              B. White  
 C. Blue                              D. Green
22. The following are special sounds except  
 A. laughing  
 B. screaming  
 C. ringing a bell  
 D. ambulance Siren
23. The plant below is known as \_\_\_\_\_



- A. sisal                              B. sunflower  
 C. maize                              D. beans

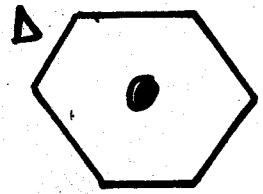

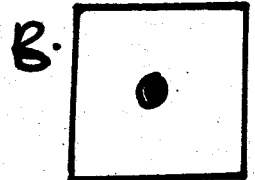
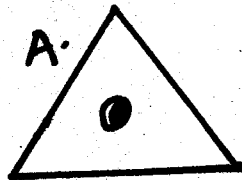
24. We can use all the following to transport water except  
 A. dam                              B. pipe  
 C. tanker                              D. animals

25. Which weed produces bad smell?  
 A. Wandering jew    B. Double thorn  
 C. Blackjack        D. Mexican marigold
26. Which of these clouds causes heavy rains?  
 A. Nimbus            B. Cumulus  
 C. Stratus            D. Cirrus
27. Which animal does not protect itself by stinging?  
 A. Wasp                B. Bee  
 C. Scorpion            D. Mosquito
28. The sense organ for taste is the \_\_\_\_\_  
 A. eye                 B. ear  
 C. tongue             D. nose
29. We take care of plants by \_\_\_\_\_ them.  
 A. burning            B. cutting  
 C. uprooting          D. watering
30. Which one is a harmful animal?  
 A. Mosquito          B. Fish  
 C. Earthworm         D. Goat
31. The following are cash crops except  
 A. sisal                B. coffee  
 C. maize               D. tea
32. Sound is produced from a drum by



- A. plucking            B. hitting  
 C. blowing            D. shaking

33. A goat provides us with all the following except  
 A. milk                 B. mohair  
 C. mutton             D. beef
34. A human being has how many sense organs?  
 A. Six                  B. Five  
 C. Three                D. Four
35. Filtering water helps to remove  
 A. colour              B. dirt  
 C. taste                D. germs
36. Which teeth is used for biting food?  
 A. Molars  
 B. Premolars  
 C. Canines  
 D. Incisors
37. Winnowing grains is done when the weather is  
 A. calm                 B. rainy  
 C. cloudy               D. windy
38. Which animal moves by leaping?  
 A. Frog                 B. Butterfly  
 C. Fish                 D. Snail
39. Which is the best shape for a wheel?



40. Which one is a fibre crop?

- A. Sisal
- B. Maize
- C. Sugarcane
- D. Millet

41. Which of the following is the best for removing food particles between the teeth?

- A. Toothpick
- B. Dental floss
- C. Tissue paper
- D. Chewed stick

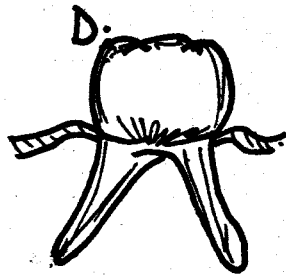
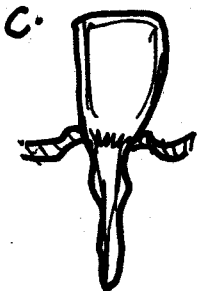

42. Which of these animals has a beak?

- A. Hen
- B. Pig
- C. Sheep
- D. Donkey

43. Fingernails should not be kept

- A. clean
- B. short
- C. dirty
- D. tidy

44. Which teeth is shed last?



45. A sheep provides us with

- A. wool
- B. pork
- C. mohair
- D. milk

46. Which one is not a way of caring for animals at home?

- A. Feeding
- B. Slaughtering
- C. Watering
- D. Housing

47. Which of these animals produces light?

- A. Dog
- B. Frog
- C. Cat
- D. Firefly


48. Which of the following will best reflect light?

- A. Paper
- B. Leaf
- C. Wood
- D. Mirror

49. Which one has one wheel only?

- A. Wheel barrow
- B. Lorry
- C. Bus
- D. Aeroplane

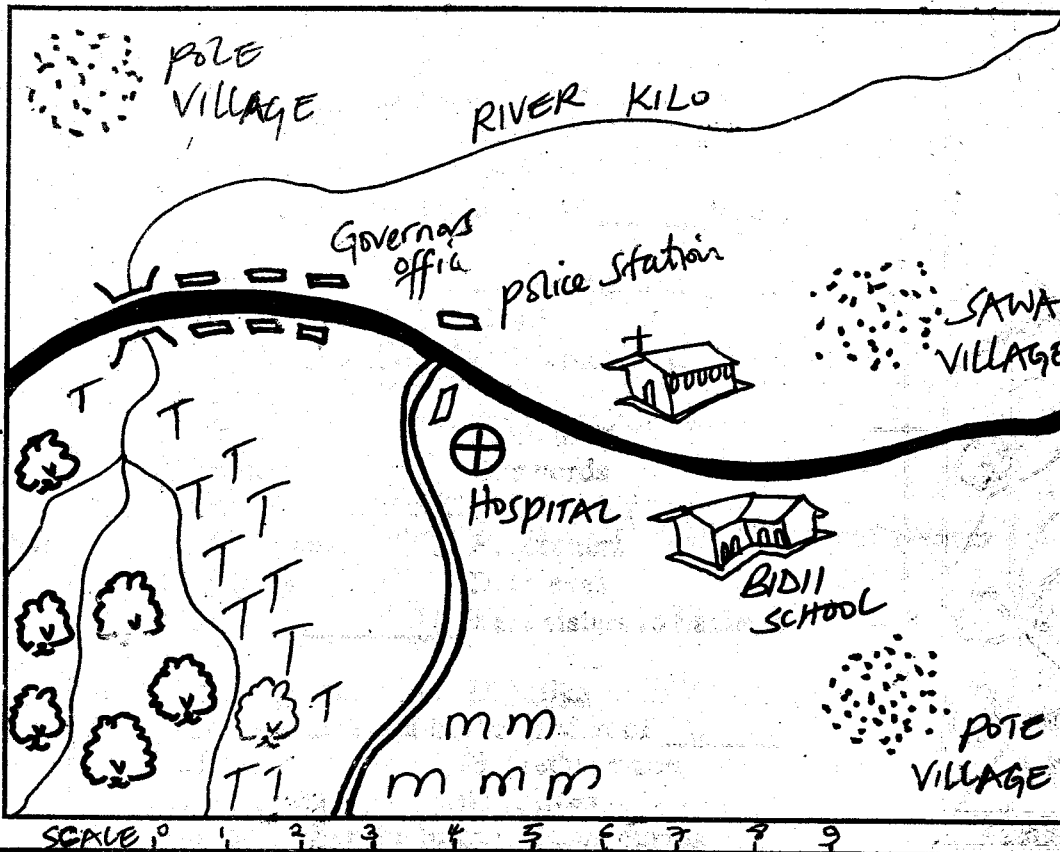
50. All the following plants have the type of leaf shown below except



- A. Maize
- B. Sugarcane
- C. Pawpaw
- D. Rice



**PANGO AREA**



**KEY**

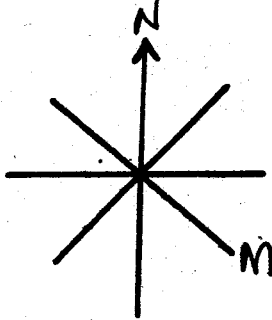
	Tarmac Road
	Murrum Road
	River & Bridge
	Forest
	Maize
	Tea
	Permanent Houses
	Huts

Use the map of PANGO AREA above and answer questions 1 - 7:-

- River kilo flows from which direction?  
 A. North East      B. South East  
 C. South West      D. North West
- The people of Pango area are  
 A. Muslims      B. Christians  
 C. Hindus      D. Traditionalists
- The main means of transport in Pango area is  
 A. road      B. railway  
 C. air      D. water
- The food crop grown in Pango area is  
 A. tea      B. maize  
 C. coffee      D. beans
- How many villages are in Pango area?  
 A. Four      B. Five  
 C. Two      D. Three

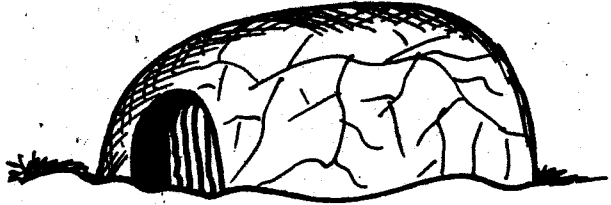
- The head of Pango area is  
 A. senator  
 B. governor  
 C. county representative  
 D. member of parliament
- The hospital provides \_\_\_\_\_ to the people of Pango area  
 A. education      B. security  
 C. health services      D. food
- An area where very many people are living is said to be  
 A. sparsely populated      B. densely populated  
 C. lowly populated      D. not populated
- Which one is a basic family need?  
 A. Radio      B. Television  
 C. Shelter      D. Vehicle
- The best soil for growing crops is  
 A. loam      B. clay  
 C. sand      D. pebbles

11. Who takes care of the school property at night?  
 A. Prefect                      B. Classteacher  
 C. Watchman                  D. Headteacher
12. The head of a nuclear family is the  
 A. mother                        B. father  
 C. child                          D. uncle
13. Cattle kept MAINLY for milk production are known as  
 A. beef cattle                  B. poultry  
 C. broilers                       D. dairy cattle
14. The colour of the national flag that symbolises peace is  
 A. red                              B. black  
 C. green                          D. white
15. Kenya is divided into how many counties?  
 A. 290                              B. 350  
 C. 8                                 D. 47
16. The following are moral values except  
 A. honesty                        B. respect  
 C. stealing                        D. obedience
17. The side marked M in the compass below is known as



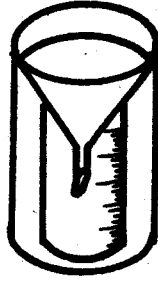
- A. South West                  B. South East  
 C. North East                  D. North West
18. The movement of people together with their goods from one place to another is known as  
 A. communication              B. settlement  
 C. transport                      D. trade
19. A compass has how many cardinal points?  
 A. Four                            B. Three  
 C. Two                              D. Eight
20. Who among the following is NOT a member of the nuclear family?  
 A. Father                         B. Daughter  
 C. Aunt                            D. Son
21. The capital city of Kenya is  
 A. Mombasa                      B. Nairobi  
 C. Nakuru                        D. Kisumu
22. Which holiday is celebrated on 1st June every year?  
 A. Jamhuri                      B. Mashujaa  
 C. Madaraka day                D. Labour day

23. Many Sub-counties make up a  
 A. ward                            B. county  
 C. village                         D. constituency
24. Pots are made from  
 A. clay soil                        B. sand soil  
 C. loam soil                        D. stones
25. The house below belongs to the



- A. Maasai                        B. Akamba  
 C. Luo                              D. Agikuyu
26. Children in the past were taught by the  
 A. warriors                        B. elders  
 C. school teachers                D. hunters
27. Vegetation growing along the river is known as  
 A. grassland                        B. scrubs  
 C. riverine                         D. cactus
28. Our deputy president is called  
 A. Uhuru Kenyatta                B. Mwai Kibaki  
 C. Kalonzo Musyoka                D. William Ruto
29. The fastest means of transport is  
 A. air                                B. railway  
 C. water                            D. road
30. The hotness or coldness of a place is known as  
 A. sunshine                        B. temperature  
 C. thermometer                    D. rainfall
31. Most rivers flow from  
 A. highlands                        B. valleys  
 C. dams                              D. oceans
32. Vegetation growing on its own is known as  
 A. planted vegetation  
 B. man-made vegetation  
 C. natural vegetation  
 D. artificial vegetation
33. Which of the following marked the end of childhood and beginning of adulthood?  
 A. Birth                              B. Initiation  
 C. Marriage                         D. Naming
34. The people's way of life is known as  
 A. culture                         B. values  
 C. habits                            D. activities
35. Another name for grassland vegetation is  
 A. desert                            B. woodland  
 C. savannah                        D. scrubs
36. The national anthem has how many stanzas?  
 A. Five                              B. Two  
 C. Four                              D. Three

37. The weather instrument below is used to measure



- A. temperature      B. rainfall  
C. direction of wind      D. speed of wind
38. Small rivers that join to form a big river are called  
A. dams      B. lakes  
C. plains      D. tributaries
39. The first President of Kenya was called  
A. Daniel Moi      B. Mwa Kibaki  
C. Jomo Kenyatta      D. Oginga Odinga
40. Below are cardinal points of a compass **except**  
A. East      B. North West  
C. North      D. South
41. Which among the following is a man-made feature?  
A. Valley      B. Hill  
C. Bridge      D. Mountain
42. Moving air is known as  
A. dust      B. clouds  
C. sound      D. wind
43. Which colour is not in the national flag?  
A. Blue      B. White  
C. Red      D. Black
44. Farmers prepare their land for planting when the weather is  
A. rainy      B. dry  
C. wet      D. muddy
45. People who visit places of interest for fun are known as  
A. elders      B. pupils  
C. tourists      D. traders
46. The sun rises in the  
A. West      B. North  
C. South      D. East
47. Crops grown **MAINLY** for sale are called  
A. food crops      B. subsistence crops  
C. cash crops      D. cereal crops
48. Many trees growing together make a  
A. forest      B. hill  
C. river      D. lake
49. Law and order in our county is maintained by  
A. teachers      B. prefects  
C. police      D. judges

50. Every child has a right to  
A. work      B. fight  
C. education      D. hate others
51. Buying and selling of goods is known as  
A. farming      B. communication  
C. transport      D. trade
52. Children should **NOT** take gifts from  
A. friends      B. strangers  
C. parents      D. teachers
53. Which of the following is not a wild animal?  
A. Zebra      B. Giraffe  
C. Hyena      D. Camel
54. Which of the following is a social activity?  
A. Singing and dancing  
B. Cattle keeping  
C. Fishing  
D. Mining

Use the diagram below to answer questions

55 - 57.



55. The type of rainfall above is known as  
A. convectional      B. relief  
C. cyclonic      D. frontal
56. The side marked A is known as  
A. leeward      B. rainshadow  
C. dry side      D. windward
57. The best economic activity on the side marked B is  
A. tea farming      B. dairy farming  
C. pastoralism      D. flower growing
58. Children should **NOT** play near  
A. open pits      B. friends  
C. playgrounds      D. toys
59. Who is the head of a school?  
A. Headboy      B. Classteacher  
C. Headteacher      D. Watchman
60. Asians and Europeans found in our county most carry out which activity?  
A. Farming      B. Cattle keeping  
C. Trade      D. Mining

## SECTION II - C. R. E

61. Which one is a bad effect of weather?  
A. Enough rain that makes crops to grow  
B. Enough sunshine that dries clothes  
C. A lot of wind that destroy buildings  
D. Enough rain that gives us water
62. Adam had a wife called \_\_\_\_\_  
A. Sarah B. Eve  
C. Deborah D. Elizabeth
63. The second book in the Bible is \_\_\_\_\_  
A. Genesis B. Mark  
C. Psalms D. Exodus
64. What did God tell Noah to build?  
A. Ark B. Temple  
C. Palace D. Dam
65. The first person to die was  
A. Cain B. Ham  
C. Seth D. Abel
66. The son of Abraham was called  
A. Joseph B. Jacob  
C. Isaac D. Reuben
67. The Israelites celebrated their first Passover in  
A. Egypt B. the wilderness  
C. Canaan D. Jerusalem
68. King \_\_\_\_\_ built the temple  
A. David B. Saul  
C. Ahab D. Solomon
69. Daniel was thrown into the den of  
A. thieves B. lions  
C. leopards D. hyenas
70. On Which mountain did Moses see the burning bush?  
A. Mout Sinai B. mount Ararat  
C. Mount Nebo D. Mount Olives
71. Who told the shepherds that baby Jesus had been born?  
A. Herod B. Wisemen  
C. Angel D. Holy Spirit
72. The mother of Jesus was called \_\_\_\_\_  
A. Elizabeth B. Peninnah  
C. Sara D. Mary
73. Baby Jesus and His parents were refugees in  
A. Egypt B. Nazareth  
C. Cana D. Jerusalem
74. The devil told Jesus to change stones into  
A. wine B. fruits  
C. bread D. fish
75. John the Baptist baptised people in river  
A. Nile B. Jordan  
C. Tigris D. Euphrates
76. When Jesus was being baptised, the Holy Spirit came in the form of a  
A. toungues of fire B. sunbird  
C. dove D. peacock
77. Who taught the disciples the Lord's Prayer?  
A. Jesus B. John  
C. Peter D. Andrew
78. Who betrayed Jesus?  
A. Peter B. Judas  
C. Thomas D. Phillip
79. Jesus fed five thousand people using two fish and \_\_\_\_\_ loaves of bread.  
A. two B. four  
C. three D. five
80. Jesus did not want people to \_\_\_\_\_ in the temple  
A. pray B. worship God  
C. trade D. sit
81. When Jesus sent out the disciples He told hem to carry  
A. food B. nothing  
C. money D. swords
82. Jesus was crucified together with two \_\_\_\_\_  
A. disciples B. teachers  
C. priests D. thieves
83. Mary and \_\_\_\_\_ were sisters to Lazarus  
A. Ruth B. Naomi  
C. Martha D. Milka
84. Jesus was arrested in the garden of \_\_\_\_\_  
A. Eden B. Gethsemane  
C. Golgotha D. Olives
85. We remember the birth of Jesus during  
A. Easter B. Passover  
C. Pentecost D. Christmas
86. Jesus made the \_\_\_\_\_ to see.  
A. deaf B. dumb  
C. lame D. blind
87. The disciple of Jesus who tried to walk on water like Jesus was  
A. Peter B. Judas  
C. Matthew D. Andrew
88. We should \_\_\_\_\_ people who have HIV/AIDS.  
A. help B. abuse  
C. hate D. beat
89. A good leader should NOT be  
A. honest B. brave  
C. fair D. dishonest
90. If you have seen your friend stealing a teacher's textbook, what should you do?  
A. Run away  
B. Tell him to steal two books  
C. Beat him  
D. Tell him that stealing is bad



# HIGH RANK EXAM SERIES

## STANDARD FOUR

### YEAR 2016

[4]  
ENGLISH

Time: 1Hr. 40 Min.

Fill in the blank spaces numbered 1 - 15 with the best alternative:-

Mike \_\_\_\_\_ 1 \_\_\_\_\_ looking \_\_\_\_\_ 2 \_\_\_\_\_ his father's sheep. While \_\_\_\_\_ 3 \_\_\_\_\_ sheep were \_\_\_\_\_ 4 \_\_\_\_\_ grass, he \_\_\_\_\_ 5 \_\_\_\_\_ to look \_\_\_\_\_ 6 \_\_\_\_\_ fruits in the forest. He \_\_\_\_\_ 7 \_\_\_\_\_ there were \_\_\_\_\_ 8 \_\_\_\_\_ wild fruits \_\_\_\_\_ 9 \_\_\_\_\_ people could \_\_\_\_\_ 10 \_\_\_\_\_ but he \_\_\_\_\_ 11 \_\_\_\_\_ not remember \_\_\_\_\_ 12 \_\_\_\_\_ he had \_\_\_\_\_ 13 \_\_\_\_\_ them. While \_\_\_\_\_ 14 \_\_\_\_\_ was walking in the forest, he saw the \_\_\_\_\_ 15 \_\_\_\_\_.

- |               |          |               |            |
|---------------|----------|---------------|------------|
| 1. A. is      | B. are   | C. were       | D. was     |
| 2. A. at      | B. after | C. with       | D. for     |
| 3. A. the     | B. a     | C. an         | D. is      |
| 4. A. ate     | B. eat   | C. eating     | D. eats    |
| 5. A. went    | B. go    | C. gone       | D. going   |
| 6. A. in      | B. up    | C. for        | D. with    |
| 7. A. known   | B. knew  | C. know       | D. knowing |
| 8. A. all     | B. this  | C. half       | D. some    |
| 9. A. who     | B. whom  | C. which      | D. whose   |
| 10. A. eat    | B. ate   | C. eating     | D. eaten   |
| 11. A. should | B. could | C. will       | D. shall   |
| 12. A. are    | B. what  | C. while      | D. where   |
| 13. A. seeing | B. sees  | C. seen       | D. saw     |
| 14. A. it     | B. she   | C. we         | D. he      |
| 15. A. fruits | B. cars  | C. aeroplanes | D. feeds   |

For questions 16 - 18, choose the past tense of the given words

16. Keep - \_\_\_\_\_  
A. keeping                      B. keeps  
C. kept                              D. kept
17. Leave - \_\_\_\_\_  
A. leaved                        B. lefted  
C. left                                D. leaves
18. Come - \_\_\_\_\_  
A. comed                        B. coming  
C. comes                        D. came

For questions 19 - 21, complete the similes

19. As fast as a \_\_\_\_\_  
A. deer                              B. wolf  
C. cat                                D. dog
20. As fat as a \_\_\_\_\_  
A. cow                                B. hyena  
C. pig                                D. goat
21. As busy as a \_\_\_\_\_  
A. puppy                            B. bee  
C. kitten                            D. peacock

For questions 22 - 24, choose the plurals of the underlined words

22. He bought an ox.  
A. oxs                                B. oxes  
C. oxens                            D. oxen
23. The chief is coming.  
A. chieves                        B. chiefs  
C. chieve                        D. chiefes

24. A thief was caught yesterday  
A. thieves  
B. thieve  
C. thiefes  
D. thievers

Write the young ones of the following animals in questions 25 - 27

25. Goat - \_\_\_\_\_  
A. kid                                B. lamb  
C. calf                                D. cub
26. Dog - \_\_\_\_\_  
A. kitten                            B. puppy  
C. ram                                D. calf
27. Lion - \_\_\_\_\_  
A. lamb                                B. cub  
C. kid                                D. kitten

For questions 28 - 30, complete the sentences correctly

28. He is walking \_\_\_\_\_ foot  
A. on                                B. with  
C. by                                D. at
29. A \_\_\_\_\_ cuts people's hair  
A. cobbler  
B. tailor  
C. barber  
D. plumber
30. She is \_\_\_\_\_ sick to walk.  
A. to  
B. two  
C. too  
D. but

Read the passage below and answer questions 31 to 40:-

Thomas has a big cupboard full of toys. Some of the toys are new but most of them are old. He does not want to get rid of them. All of them are still good for him. During the weekend when he has not gone to school, he wakes up very early in the morning to play with the toys.

The toy he likes best is his clockwork train. The oldest toy is a teddy bear which his mother bought for him for his first birthday. Thomas also has a big crane and a tractor. These are almost new. The crane can lift the tractor right off the floor.

- |   |   |
|---|---|
| <p>31. The cupboard that Thomas has is _____<br/>A. small<br/>B. big<br/>C. old<br/>D. black</p> <p>32. The cupboard is full of _____<br/>A. utensils<br/>B. books<br/>C. clothes<br/>D. toys</p> <p>33. Most of Thomas' toys are _____<br/>A. new<br/>B. old<br/>C. white<br/>D. big</p> <p>34. All the toys are still _____<br/>A. old for Thomas<br/>B. bad for Thomas<br/>C. good for Thomas<br/>D. small for Thomas</p> <p>35. Thomas does not go to school during _____<br/>A. Mondays<br/>B. Fridays<br/>C. Weekends<br/>D. Tuesdays</p> | <p>36. At what time does Thomas wake up to play with his toys?<br/>A. Night<br/>B. Morning<br/>C. Noon<br/>D. Evening</p> <p>37. The toy that Thomas likes most is the _____<br/>A. clockwork train<br/>B. teddy bear<br/>C. tractor<br/>D. crane</p> <p>38. Which is the oldest toy?<br/>A. Tractor<br/>B. Teddy bear<br/>C. Crane<br/>D. Clockwork train</p> <p>39. Who bought for Thomas his first toy?<br/>A. Father<br/>B. Aunt<br/>C. Grand mother<br/>D. Mother</p> <p>40. The crane that Thomas has is _____<br/>A. small<br/>B. big<br/>C. broken<br/>D. bad</p> |
|---|---|

**Read the passage and answer questions 41 to 50:-**

In the village of Sacho, there lived an old man, his wife and children. The children were three sons and two daughters. They lived happily because the man was able to provide all that they wanted. Ali, who was the father was very hardworking.

Ali's children were not like him. They were very lazy. They didn't like to work. What they liked most was playing. They could spend the whole day playing with other lazy children in the forest. One day, Ali called all of them and told to stop being lazy. From that day, they began working hard and helping their parents.

- |  |   |
|--|---|
| <p>41. Sacho is the name of a _____</p> <p>A. village<br/>B. school<br/>C. town<br/>D. farmer</p> <p>42. Ali had how many children?</p> <p>A. Six<br/>B. Three<br/>C. Five<br/>D. Four</p> <p>43. How many daughters did Ali have?</p> <p>A. Five<br/>B. Two<br/>C. Four<br/>D. Three</p> <p>44. Ali was not a _____ man</p> <p>A. lazy<br/>B. honest<br/>C. hardworking<br/>D. responsible</p> <p>45. Ali's family had how many people?</p> <p>A. Six<br/>B. Eight<br/>C. Five<br/>D. Seven</p> | <p>46. At first, Ali's children were</p> <p>A. lazy<br/>B. hardworking<br/>C. responsible<br/>D. obedient</p> <p>47. What did Ali's children like most at first?</p> <p>A. Eating<br/>B. Fighting<br/>C. Playing<br/>D. Singing</p> <p>48. Ali's children used to play with _____</p> <p>A. good children<br/>B. older children<br/>C. lazy children<br/>D. obedient children</p> <p>49. Who called all the children?</p> <p>A. Ali's father<br/>B. Ali's wife<br/>C. The teacher<br/>D. Ali</p> <p>50. The story teaches us that we should be _____</p> <p>A. lazy<br/>B. hardworking<br/>C. disobedient<br/>D. rude</p> |
|--|---|





# HIGH RANK EXAM SERIES

## DARASALANNE

MWAKA 2016

[4]  
KISWAHILI

Muda: Saa 1 Dk. 40

Jaza nafasi zilizoachwa wazi 1 - 15 kwa kuchagua jibu sahihi:-

Panya ni mnyama \_\_\_\_\_ 1 \_\_\_\_\_ ambaye \_\_\_\_\_ 2 \_\_\_\_\_ nyumbani \_\_\_\_\_ 3 \_\_\_\_\_ shambani.  
Panya \_\_\_\_\_ 4 \_\_\_\_\_ mkia \_\_\_\_\_ 5 \_\_\_\_\_ na meno \_\_\_\_\_ 6 \_\_\_\_\_. Miguu \_\_\_\_\_ 7 \_\_\_\_\_ ni mifupi  
\_\_\_\_\_ 8 \_\_\_\_\_ anaweza kwenda mbio \_\_\_\_\_ 9 \_\_\_\_\_. Panya \_\_\_\_\_ 10 \_\_\_\_\_ kwenye tundu \_\_\_\_\_ 11 \_\_\_\_\_  
shimo. Je, \_\_\_\_\_ 12 \_\_\_\_\_ umewahi \_\_\_\_\_ 13 \_\_\_\_\_ shimo \_\_\_\_\_ 14 \_\_\_\_\_ panya \_\_\_\_\_ 15 \_\_\_\_\_.

- |                 |               |                 |               |
|-----------------|---------------|-----------------|---------------|
| 1. A. kidogo    | B. ndogo      | C. mdogo        | D. dogo       |
| 2. A. upatikana | B. hapatikani | C. zinapatikana | D. hupatikana |
| 3. A. ili       | B. au         | C. wala         | D. lakini     |
| 4. A. ana       | B. haina      | C. hana         | D. anao       |
| 5. A. mdogo     | B. mirefu     | C. mrefu        | D. ndefu      |
| 6. A. wakali    | B. makali     | C. mkali        | D. kali       |
| 7. A. za panya  | B. wa panya   | C. la panya     | D. ya panya   |
| 8. A. vile      | B. sababu     | C. lakini       | D. ila        |
| 9. A. sana      | B. ndefu      | C. nyingi       | D. kali       |
| 10. A. anaficha | B. huficha    | C. hufichwa     | D. hujificha  |
| 11. A. na       | B. cha        | C. au           | D. za         |
| 12. A. wewe     | B. sisi       | C. nyinyi       | D. mimi       |
| 13. A. kukiona  | B. kuliona    | C. kuwaona      | D. kukiwaona  |
| 14. A. la       | B. ya         | C. wa           | D. cha        |
| 15. A. .        | B. !          | C. ,            | D. ?          |

**Kutoka swali la 16 - 30, jibu kila swali kulingana na maagizo uliyopewa**

**16. Kanusha:**

Enda nyumbani.

- A. Hutaenda nyumbani
- B. Usiende nyumbani
- C. Huendi nyumbani
- D. Ataenda nyumbani

**17. Akisami  $\frac{1}{6}$  kwa maneno ni**

- A. sudusi
- B. humusi
- C. nusu
- D. robo

**18. Andika kwa wingi:**

Hili ni yai langu.

- A. Hili ni yai letu
- B. Hii ni mayai zetu
- C. Haya ni mayai zetu
- D. Haya ni mayai yetu

**19. Kamilisha sentensi hii;**

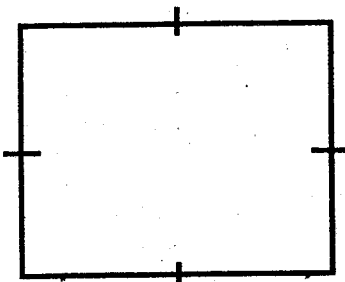
Kiti \_\_\_\_\_ ni changu.

- A. hii
- B. hiki
- C. hizi
- D. hili

**20. Mwana wa mjukuu ni \_\_\_\_\_**

- A. kilembwe
- B. kining'ina
- C. binamu
- D. kitukuu

**21. Umbo hili ni gani?**



- A. Mche
- B. Mraba
- C. Mstatili
- D. Pia

**22. Kamilisha methali:**

Mvumilivu hula \_\_\_\_\_

- A. mbivu
- B. yote
- C. mbichi
- D. tamu

**23. Yupi ni mnyama wa porini?**

- A. Kondoo
- B. Ngamia
- C. Pundamilia
- D. Kuku

**24. Anayewatibu wagonjwa ni \_\_\_\_\_**

- A. nesi
- B. daktari
- C. mwalimu
- D. dereva

**25. Upinde wa mvua una rangi ngapi?**

- A. Nne
- B. Sita
- C. Tano
- D. Saba

**26. Mmea ambao huzaa ndizi ni**

- A. mbuni
- B. mboga
- C. mwembe
- D. mgomba

**28. Kinyume cha GIZA ni \_\_\_\_\_**

- A. jua
- B. mchana
- C. mwangaza
- D. mbalamwezi

**29. Tegua kitendawili:**

Askari mlangoni.

- A. Kifuli
- B. Kifuli
- C. Shoka
- D. Taa

**30. Kamilisha;**

Mipira \_\_\_\_\_ imetoboka

- A. watisa
- B. mitisa
- C. matisa
- D. tisa

**Soma taarifa ifuatayo kisha ujibu maswali 31 - 40:-**

Onyango aliamua kwenda sokoni siku ya Jumamosi. Alifika sokoni saa tatu unusu. Akatembelea vibanda panapouzwa kuku na mabata. Kuku mmoja alipouzwa aliponyoka kutoka mikononi mwa mnunuzi. Mara akakata kamba ya miguni, akaanza mbio huku na huko. Yule mnunuzi alitaka arudishiwe pesa zake. Lakini yule mwuzaji akakataa katakata akisema kosa lilikuwa la mnunuzi kwani hakumpokea kuku huyo kwa uangalifu.

Mara punda mmoja aliyekuwa amebeba mizigo akatimua mbio, aliwaogofya watoto. Akapiga mateke yale mafungu ya viazi, mihogo hata vikapu vya nafaka. Pia matunda yalitawanyika kila mahali. Vyungu vilivyokuwa vikiuzwa pia vilivunjwawunjwa . Onyango alirudi nyumbani jioni saa kumi.

- |   |  |
|---|--|
| <p>31. Onyango alienda sokoni siku gani?<br/>A. Jumapili<br/>B. Jumamosi<br/>C. Alhamisi<br/>D. Jumanne</p> <p>32. Onyango alifika sokoni saa ngapi?<br/>A. Saa nne<br/>B. Saa tano<br/>C. Saa saba<br/>D. Saa tatu unusu</p> <p>33. Onyango alitembelea vibanda palipokuwa pakiuzwa<br/>A. kuku<br/>B. samaki<br/>C. kuku na mabata<br/>D. nyama</p> <p>34. _____ aliponyoka kutoka mikononi mwa mnunuzi.<br/>A. Punda<br/>B. Bata<br/>C. Kuku<br/>D. Ng'ombe</p> <p>35. Kuku alikata nini?<br/>A. Kamba<br/>B. Jiwe<br/>C. Kitambaa<br/>D. Nguo</p> | <p>36. Mnunuzi alitaka arudishiwe nini?<br/>A. Kuku<br/>B. Kamba<br/>C. Nyama<br/>D. Pesa</p> <p>37. Nani hakumpokea kuku kwa uangalifu?<br/>A. Onyango<br/>B. Mwuzaji<br/>C. Punda<br/>D. Mnunuzi</p> <p>38. Punda alikuwa amebeba nini?<br/>A. Mayai<br/>B. Mizigo<br/>C. Gari<br/>D. Mboga</p> <p>39. Punda aliwaogofya akina nani?<br/>A. Watoto<br/>B. Wazazi<br/>C. Wakulima<br/>D. Walimu</p> <p>40. Onyango alirudi nyumbani wakati gani?<br/>A. Asubuhi<br/>B. Usiku<br/>C. Adhuhuri<br/>D. Jioni</p> |
|---|--|


**Soma habari ifuatayo kwa makini kisha ujibu maswali 41-50:-**

Mzee Abdi aliishi katika kijiji cha Jaku. Siku moja, alitoka nje usiku wa giza totoro. Alipoangalia mbinguni, aliona nyota zikimetameta. Nyota nyingine kubwa zilitoa mwangaza mkali, usiometa. Hizo ni sayari. Mara upepo ulivuma. Ukaleta mawingu manene yaliyozifunika mbingu na hata mwezi uliokuwa uking'aa


Baada ya muda mfupi, mvua ikaanza kunyesha. kukatokea umeme mkali hata macho ya Mzee Abdi yakafungika. Umeme huo ulifuatwa na ngurumo za radi. Umeme huo pia ulipasua miti mikubwa iliyokuwapo mbele ya nyumba ya mzee Abdi.

- |   |   |
|---|---|
| <p>41. Jaku ni jina la _____<br/>A. mzee<br/>B. mvua<br/>C. kijiji<br/>D. gari</p> <p>42. Mzee Abdi alitoka nje wakati wa _____<br/>A. mchana<br/>B. usiku<br/>C. asubuhi<br/>D. jioni</p> <p>43. Usiku huo ulikuwa wa _____<br/>A. jua kali<br/>B. makelele<br/>C. mwangazakuu<br/>D. giza totoro</p> <p>44. Mzee Abdi aliona nini mbinguni?<br/>A. Jua<br/>B. Nyota<br/>C. Upepo<br/>D. Jua</p> <p>45. Nyota zilikuwa _____<br/>A. zikiungua<br/>B. zikichomeka<br/>C. zikiyumbayumba<br/>D. zikimetameta</p> | <p>46. Nyota zilizokuwa zikitoa mwangaza mkali usiometa zilikuwa _____<br/>A. jua<br/>B. sayari<br/>C. mwezi<br/>D. mawingu</p> <p>47. Mawingu yaliletwa na _____<br/>A. upepo<br/>B. jua<br/>C. joto<br/>D. watu</p> <p>48. Mawingu yalikuwa _____<br/>A. manene<br/>B. mafupi<br/>C. madogo<br/>D. meupe</p> <p>49. Macho ya Mzee Abdi yalifungika kwa sababu ya _____<br/>A. mvua<br/>B. baridi<br/>C. sayari<br/>D. umeme</p> <p>50. Umeme ulipasua nini?<br/>A. Nyumba<br/>B. Miti<br/>C. Magari<br/>D. Vyumba</p> |
|---|---|













# HIGH RANK EXAM SERIES

## STANDARD FOUR

### YEAR 2016

# {4}

## MARKING SCHEMES

MATHS		ENGLISH		KISWAHILI		SCIENCE		SOCIAL STUDIES & CRE		
1. D	31. D	1. D	31. B	1. C	31. B	1. D	31. C	1. C	31. A	61. C
2. B	32. C	2. B	32. D	2. D	32. D	2. B	32. B	2. B	32. C	62. B
3. C	33. C	3. A	33. B	3. B	33. C	3. C	33. D	3. A	33. B	63. D
4. A	34. B	4. C	34. C	4. A	34. C	4. D	34. B	4. B	34. A	64. A
5. D	35. A	5. A	35. C	5. C	35. A	5. A	35. B	5. D	35. C	65. D
6. B	36. B	6. C	36. B	6. B	36. D	6. A	36. D	6. B	36. D	66. C
7. D	37. D	7. B	37. A	7. D	37. D	7. C	37. D	7. C	37. B	67. A
8. C	38. D	8. D	38. B	8. C	38. B	8. B	38. A	8. B	38. D	68. D
9. D	39. A	9. C	39. D	9. A	39. A	9. D	39. C	9. C	39. C	69. B
10. B	40. C	10. A	40. B	10. D	40. D	10. B	40. A	10. A	40. B	70. A
11. C	41. B	11. B	41. A	11. C	41. C	11. C	41. B	11. C	41. C	71. C
12. B	42. D	12. D	42. C	12. A	42. B	12. D	42. A	12. B	42. D	72. D
13. D	43. D	13. C	43. B	13. B	43. D	13. B	43. C	13. D	43. A	73. A
14. C	44. A	14. D	44. A	14. A	44. B	14. A	44. D	14. D	44. B	74. C
15. B	45. C	15. A	45. D	15. D	45. D	15. C	45. A	15. D	45. C	75. B
16. D	46. B	16. D	46. A	16. B	46. B	16. D	46. B	16. C	46. D	76. C
17. B	47. A	17. C	47. C	17. A	47. A	17. A	47. D	17. B	47. C	77. A
18. A	48. C	18. D	48. C	18. D	48. A	18. A	48. D	18. C	48. A	78. B
19. B	49. D	19. A	49. D	19. B	49. D	19. A	49. A	19. A	49. C	79. D
20. D	50. C	20. C	50. B	20. D	50. B	20. C	50. C	20. C	50. C	80. C
21. B		21. B		21. B		21. D		21. B	51. D	81. B
22. D		22. D		22. A		22. A		22. C	52. B	82. D
23. C		23. B		23. C		23. B		23. B	53. D	83. C
24. C		24. D		24. B		24. A		24. A	54. A	84. B
25. B		25. A		25. D		25. D		25. A	55. B	85. D
26. A		26. B		26. D		26. A		26. B	56. D	86. D
27. C		27. B		27. C		27. D		27. C	57. C	87. A
28. A		28. A		28. C		28. C		28. D	58. A	88. A
29. D		29. C		29. A		29. D		29. A	59. C	89. D
30. B		30. C		30. D		30. A		30. B	60. A	90. D

### COMPOSITION MARKING SCHEME

#### MARKING CRITERIA

1. The composition will be assessed according to the following guidelines.

- The maximum mark will be 40 and the minimum mark 01

- Does the script show that the candidate can communicate accurately fluently and imaginatively in English?

**Accuracy** ( 8 marks)

(a) Correct tenses and agreement of verbs ( 4 marks)

(b) Accurate use of vocabulary ( 4 marks)

(16) (c) Following a sequence ( 4 marks)

(d) Correct punctuation

( 4 marks)

**Fluency** ( 8 marks)

(a) Words in the correct order ( 4 marks)

(b) Sentence connected and paragraphs ( 4 marks)

(b) Correct spelling ( 4 marks)

(d) Ideas developed in logical sequence ( 4 marks)

( 8 marks)

**Imagination** ( 8 marks)

(a) Unusual but appropriate use of words and phrases ( 4 marks)

(b) Variety of structure ( 4 marks)

**NB: Please, teachers are requested to scrutinize this marking scheme before use. It is worth.**