

SCHOOL BASED EVALUATION TEST

DARASA LA SABA - MUHULA WA PILI - 2016

PENPLUS
MK2 - 2016

KISWAHILI

Muda: Saa 1 Dakika 40

JINSI YA KUTUMIA KARATASI YA MAJIBU

1. Tumia penseli ya kawaida.
2. Hakikisha umeandika kwa karatasi ya majibu:
(I) JINA LAKO (II) JINA LA SHULE YAKO
3. Kwa kila swali onyesha jibu sahihi kwa kuchora kistari katika kibanduku chenye herufi uliyochagua kuwa ndiyo jibu.

Soma vifungu vifuatavyo kisha ujaze nafasi zilizoachwa wazi kwa jibu sahihi.

Ukimwi ni ugonjwa 1 na tabia za kujamiana. Jambo hili limekuwa tatizo kubwa katika 2 nyingi za dunia. Umma unaoishi mahali 3 hakupatikani maadili na utu huwa 4 nguvu za kuangamiza 5 za kuzuilia gongwa hili. Kwingineko tatizo huwa la kutopata maarifa ya kukinga mwili kutokana na jamba hili. Katika hali namna 6 suluhisho ni kuelimisha watu 7 ya kujikinga kwani kinga ni bora kuliko tiba.

- | | | | |
|---------------------|------------------|-------------------|--------------------|
| 1. A. unaosababisha | B. unaosababisha | C. unaosababishwa | D. unaosababishana |
| 2. A. pembe | B. kuta | C. bahari | D. nyumba |
| 3. A. ambapo | B. ambamo | C. ambalo | D. ambako |
| 4. A. hauna | B. hakuna | C. hawana | D. haina |
| 5. A. ila | B. wala | C. bali | D. ili |
| 6. A. hizi | B. hili | C. hivi | D. hii |
| 7. A. mbinu | B. harakati | C. jinsi | D. hatua |

Rafiki 8 panga ananienzi na 9 10 chanda na pete 11 wetu ni wa kufa 12 panga ni mwungwana si kidogo ana umri 13 miaka 14 nilimjua na 15 tangu awali, kwetu na kwao ni karibu kama pua na mdomo.

- | | | | |
|---------------------|------------------|-----------------|-----------------|
| 8. A. wangu | B. yangu | C. zangu | D. yetu |
| 9. A. kunichukia | B. kinitweza | C. kunipenda | D. kunikejeli |
| 10. A. lau | B. kama | C. ila | D. mithili |
| 11. A. ushuba | B. uadui | C. kupenda | D. ushuhuda |
| 12. A. kupona | B. kuzikana | C. kucheka | D. kulia |
| 13. A. wa | B. ya | C. za | D. la |
| 14. A. kumi na tano | B. kumi na mbili | C. kumi na sita | D. kumi na tatu |
| 15. A. kumfahamu | B. kumwona | C. kumbeza | D. kumjali |

Kutoka swali la 16-30, chagua jibu sahihi kulingana na maagizo

16. Chagua neno ambalo si kitawe.
A. Mto B. Duma
C. Kima D. Kaa
17. Chagua kiunganishi sahihi kukamilisha sentensi
Yeye ni tajiri sana _____ hana watoto wa kumrithi.
A. madhali B. wala
C. aidha D. japo
18. Mtoto wa nzi huitwa _____
A. shibli B. kimatu
C. kiweto D. kinegwe
19. Chagua usemi wa taarifa ufaao wa sentensi
"Ukila utashiba sana", mama alisema.
A. Mama alisema ungekula utashiba sana
B. Mama alisema kuwa akila atashiba sana
C. Mama alisema kuwa angekula angeshiba sana
D. Mama alisema ukila utashiba sana
20. Neema ni mtoto wa dada yangu. Kwa hivyo Neema ni nani?
A. Mpwa wangu
B. Kining'ina changu
C. Binamu yangu
D. Kilembwe wangu
21. Tumia kirejeshi: Mgeni ambaye atafika ni mcheshi
A. Mgeni atakayefika ni mcheshi.
B. Mgeni afikaye ni mcheshi.
C. Mgeni atayefika ni mcheshi
D. Mgeni ambaye atakayefika ni mcheshi
22. Maafisa, mitume na viroboto ni nomino katika ngeli ya:-
A. I-ZI B. A-WA
C. U-ZI D. I-I
23. Malipo kwa mtu aliyeadhiwa ili kumtuliza hasira huitwa _____
A. fidia B. mapoza
C. ridhaa D. dia
24. Chagua kivumishi katika sentensi ifuatayo.
Safari ndefu huanza kwa hatua ya kwanza
A. Safari
B. Ndefu
C. Hatua
D. Kwanza
25. 9,006,009 kwa maneno ni _____
A. tisa milioni, mia tisa elfu na sita
B. tisa milioni, elfu mia tisa na tisa
C. tisa milioni, laki sita na tisa
D. tisa milioni, sita elfu na tisa
26. Machungwa ishirini pamoja huitwa _____ moja ya machungwa.
A. darzeni
B. bunda
C. jozi
D. korija
27. Chagua sentensi inayoonyesha "kwa" ya nia.
A. Alitembea kwa madaha
B. Naenda kwa nyanya kulima
C. Alitimua mbio kwa kujisalimisha
D. Alisafiri kwa baiskeli
28. Kanusha sentensi:
Wimbo uliimbwa na ukafurahisha
A. Wimbo uliibwa na ukuaudhi
B. Wimbo uliimbwa na haukufurahisha
C. Wimbo haukuimbwa na ukaudhi
D. Wimbo hukuimbwa wala kufurahisha
29. Tegua kitendawili.
Hana haja ya kukaribishwa _____
A. nzi
B. jirani
C. mgeni
D. nyoka
30. Masalkheri ni sungura ndiko kusena kuwa masalkheri _____
A. pengine ni mjanja
B. yamkini ni mjanja
C. ni mjanja
D. si mjanja

Soma habari hii kisha ujibu maswali 41-50.

Uchaguzi wa mwaka wa elfu mbili na saba nchini Fisadi ulikuwa wa kuisimua na vilevile wa kushangaza. Mahuluki walijitokeza kwa wingi katika maeneo bunge yote ili kumchagua kiongozi wao. Kila mja alijikakamua vilivyo na kupiga kura kwa hamu na shauku ghaya. Chambilecho wenyewe, walichoshwa na kuchushwa na katiba iliyokuwa na hitilafu chungu nzima.

Wananchi walichoshwa na ukosefu wa usalama katika mitaa kadhaa wa kadhaa nchini, uhaba wa vyakula na hata siha nzuri. Ajabu ni kwamba baada ya uchaguzi ambao waliona ndiyo kamba ya matumaini, kulibainika wazi kwamba kulikuwa na wizi wa kura. Jambo hili lilizua zogo na zahama nchini kwani hakukueleweka aliyekuwa mshindi wa kura za Urais.

Pindi tu mshindi alipotangazwa, vita vya kikabila vikazuka katika kila janibu ya nchi. Katika hekaheka hizi, mali ya watu yaliporwa kabisa na mengine kuharibiwa kwa kuteketezwa. Nyumba nyingi vilevile zilitiwa moto na kubakia majivu tu. Watu wengi walihama makwao na kuwa wakimbizi wa ndani kwa ndani katika nchi yao. Aibu iliyoje? Walioishi mipakani wakakimbilia nchi jirani kusalimisha roho zao. Takribani watu elfu moja walipoteza maisha yao na wengine takribani nusu milioni kukosa makao.

Fauka ya hayo, kulikuwa na adha nyingi sana zilizotokea baada ya uchaguzi huo. Watalii wengi ambao walikuwa wakizuru nchi yetu walisitisha ziara zao kwani hakukuwa na usalama wa kutosha. Nayo sekta ya biashara pia ikazua balaa kama si beluwa kwa kupandisha bei ya bidhaa muhimu. Aidha nauli ilipanda na kuathiri sana wananchi na hata nchi jirani.

Katika kambi za wakimbizi ya Firauni yalishuhudiwa wakati ambapo maradhi ya zinaa yalisambazwa kwa urahisi. Vilevile magonjwa kama kifua kikuu, kipindupindu, taifodi na mengineyo yaliambukizwa.

- | | |
|---|--|
| 41. Uchaguzi wa mwaka elfu mbili nchini Fisadi ulikuwa wa kuisimua kwa kuwa:- A. insi wengi walijitokeza B. mahuluki wengi hawakujitokeza C. insi wengi walisimka D. ulisisimua na kushangaza | 46. Tunasema mali yaliporwa aidha nyumba _____ A. yaliteketezwa B. ziliteketezwa C. uliteketezwa D. paliteketezwa |
| 42. Kwa nini kila mja alijikakamua kupiga kura kwa ari? A. Walichoshwa na kuchushwa B. Katiba ilikuwa rasimu C. Katiba iliyokuwa ilikuwa na dosari D. Katiba ilikuwa chungu nzima | 47. Waliopoteza makao ni takribani _____ A. watu elfu moja B. watu laki moja C. watu milioni moja D. watu milioni mmoja |
| 43. Wananchi walichoshwa na haya ila:- A. mfumuko wa bei ya bidhaa B. uhaba wa vyakula C. ukosefu wa kazi na afya nzuri D. usalama bora katika mitaa kadhaa | 48. Nchi ya fisadi iliathirika vipi? A. Katika sekta ya utalii B. Kiuchumi C. Katika muundo msingi D. Mipakani |
| 44. Kisawe cha neno zogo ni:- A. ukete B. uraufu C. tandabelua D. utulivu | 49. Kamilisha methali. utaona Firauni. A. Ukistaajabu ya Firauni B. Ukistaajabu ya Musa C. Ukistaajabia ya Musa D. Ukistaajabika ya Firauni |
| 45. Vita vilizuka kila janibu _____ A. kabla ya mshindi kutangazwa B. uchaguzi ulipokuwa ukiendelea C. tume ya uchaguzi ilipovunjwa D. baada ya mshindi kutangazwa | 50. Ni mada ipi itafaa kwa habari hii? A. Mjenga nchi ni mwananchi B. Amani hajji ila kwa ncha ya upanga C. Alla Alla jirani kama ndugu mli kule D. Dunia mtego wa panya |

SCHOOL BASED EVALUATION TEST

PENPLUS
MK2 - 2016

STD 7 - TERM 2 - 2016

Time: 1 Hr 40 Mins

ENGLISH

READ THESE INSTRUCTIONS CAREFULLY

1. Use only an ordinary pencil.
2. Make sure that you have written on the answer sheet:-
(I) YOUR NAME (II) NAME OF YOUR SCHOOL
3. For each question show the correct answer by drawing line in the brackets in which the letter you have chosen is written.

Read the passages below. They contains blank spaces numbered 1 to 15. Choose the best alternative from the choices given.

Once there was a great guitarist 1 Faraniko. She was so talented in music 2 everybody in 3 country admired her. One day the king declared a music competition to celebrate his birthday. The winner would 4 a fully-equipped production studio. Everybody was certain that Faraniko 5 be the winner.

Trying to outdo everyone, Faraniko outdid 6 she decided that since everyone was playing a real guitar, she would play air guitar. So she 7 to animatedly play an imaginary guitar. Her 8 strumming and loud singing did not impress anyone, least of all the king. 9 he declared that she had lost her mind and ordered 10 her to be taken to a mental hospital immediately.

- | | | | |
|-------------------|----------------|----------------|----------------|
| 1. A. call | B. called | C. caled | D. callen |
| 2. A. to | B. which | C. that | D. so |
| 3. A. his | B. herself | C. himself | D. her |
| 4. A. receive | B. recieve | C. receivi | D. riceive |
| 5. A. could | B. will | C. would | D. can |
| 6. A. her | B. herself | C. himself | D. she |
| 7. A. start | B. begin | C. begun | D. began |
| 8. A. exaggerated | B. exagerrated | C. exaggerated | D. exagerrated |
| 9. A. infact, | B. in fact! | C. in fact | D. in fact? |
| 10. A. to | B. for | C. from | D. in |

It is hot and makes us 11. It is neither carry 12 pepper. It is a household pet yet it is not an animal. It is easy to look 13 and survive 14 on a diet of twigs and dry grass. It tends to die if given too much to drink. Sadly it leaves black marks 15 the ceiling.

- | | | | |
|-----------------|------------|----------|------------|
| 11. A. swaet | B. sweet | C. swort | D. sweat |
| 12. A. no | B. either | C. nor | D. or |
| 13. A. at | B. for | C. after | D. forward |
| 14. A. happiest | B. happier | C. happy | D. happily |
| 15. A. on | B. in | C. at | D. under |

Complete the sentences below with the best answer

16. The medicine was in a _____ bottle.
A. round, small, brown, glass
B. small, round, brown, glass
C. brown, round, small, glass
D. round, brown, small, glass
17. _____ Ali and his friend went to the library.
A. Both by
B. Both in
C. Both
D. Both of
18. She disagreed with him, _____
A. did she? B. didn't she?
C. wasn't she? D. was she?
19. Choose the sentence which means the same as given one
I did not have a camera. I did not take photographs.
A. I wish I had a camera. I would have taken photographs.
B. I wish I hadn't a camera. I would have taken photographs.
C. I wish I had a camera. I wouldn't have taken photographs.
D. I wish I was not having a camera. I would not take photographs.
20. Choose the best conjunctions to fill in the blank space.
Mother was washing clothes _____ father was trimming the hedge.
A. because B. and
C. while D. although

21. Choose the sentence which is correctly punctuated.

- A. "Who washed the utensils," asked Fatuma?
B. "Who washed the utensils"?' asked Fatuma.
C. "Who washed the utensils? asked Fatuma."
D. "Who washed the utensils?" asked Fatuma.
22. Which of the following sentences is correct?
A. Mr. Ogot gets his fish from Lake Victoria.
B. mr. Ogot gets his fish from Lake Victoria.
C. Mr. ogot gets his fish from Lake Victoria.
D. Mr. Ogot gets his fish from lake victoria.

Use the information given below to answer questions 23-25.

Mercy, Leah, Winnie and Mary have learnt how to cook different types of food. All the girls can cook ugali, while rice can only be cooked by Mercy and Winnie. Leah knows how to cook mandazi. Everyone except Winnie knows how to cook chapati.

23. Who can cook everything except rice?
A. Mary
B. Mercy
C. Leah
D. Winnie
24. Which food can be cooked by everyone?
A. Mandazi
B. Ugali
C. Rice
D. Chapati
25. Who can cook ugali and chapati only?
A. Winnie B. Mary
C. Leah D. Mercy

Read the passage below and then answer questions 26 to 38.

Meena and Sita awoke early. It was only four o'clock in the morning and still very dark. But they could not sleep any longer. They were excited. It was Divali day. Like, most of the families in the village, they were Hindus and they had been preparing for weeks for this very special day. On this day they would honour the Goddess mother Lakshmi who offers the gifts of good health, peace of mind, knowledge and understanding.

The girls got up to look through the window. They wanted to see if they could still see the deya which their father had lit the night before. On the night before Divali, Mr. Rampaul lights a deya on the south side of the house and asks God to bless the family and protect it from sickness and death on this day. Deyas are little shallow day bowls about two inches wide. These are made by the local potters who make thousands of them especially for Divali.

Soon the girls' mother, Mrs. Rampaul and their grandmother were up and about. There was a lot to do. Today they would make special sweets and lots of tasty dishes. Grandma was an expert at making the lovely Indian sweets that the children liked so much. She had bought all the special spices she needed to make these delicacies.

Mrs. Rampaul woke her husband and her big son. They were tired. They had worked all week, cleaning the yard and the area around their home and setting up the bamboo arches for the deyas. They had also been fasting for the last two weeks.

When the family had bathed and dressed, they went out into the front yard and made an offering of water at the djhandi, or bamboo flags, which were planted in the ground. They thanked mother earth for the blessings of life and health she had given them. After this prayer the family went inside and the girls helped their mother to prepare breakfast. The everyone sat down to enjoy a meal of fresh fruits.

Divali is a day of joy, but it is also a day of prayer. During the day Mr. Rampaul played special songs on his stereo. Grandma who seemed to know all the songs sang along and encouraged the girls to join her.

26. Why were the girls excited?
- A. Because they could not sleep any longer
 - B. Because it was in the morning
 - C. Because they were Hindus
 - D. Because it was Divali day
27. How long had the family been preparing for this very special day?
- A. Four weeks
 - B. One week
 - C. Some weeks
 - D. One year
28. The following are gifts offered by mother Lakshmi:-
- A. good health, peace of mind and understanding
 - B. understanding, knowledge and wealth
 - C. Good health, wealth and wisdom
 - D. Understanding, knowledge and wisdom
29. When did Mr. Rampaul light the deya?
- A. On the night before Divali
 - B. On Divali day
 - C. When he woke up
 - D. When the girls woke up
30. Who made the deyas?
- A. Mr. Rampaul
 - B. Meena and sita
 - C. Grandma
 - D. The local potters
31. According to the passage who blessed the family and protects it from sickness and death?
- A. The Goddess
 - B. Mother Lakchmi
 - C. The God
 - D. Mrs. Rampaul
32. Which of the following statement is correct according to the passage?
- A. Mrs. Rampaul lit the deya
 - B. Grandma was an expert at making Indian sweets
 - C. Rampaul's family lived in the urban area
 - D. Meena and Sita were twin sister
33. They had been fasting for the last two weeks..... This refers to:-
- A. Mr. Rampaul and his son
 - B. Mr. Rampaul and her son
 - C. Grandma and Mrs. Rampaul
 - D. Neema and Sita
34. Who did not do the following work, cleaning the yard and setting up the bamboo arches?
- A. Mr. Rampaul
 - B. The big son
 - C. Mr. Rampaul and the big son
 - D. Mrs. Rampaul
35. The meal mentioned in the passage was of:-
- A. fresh fruits
 - B. tasty dishes
 - C. special spices
 - D. delicacies
36. Divali is not a day of _____
- A. joy
 - B. singing
 - C. sadness
 - D. prayer
37. Who seemed to know all the songs played on the stereo?
- A. Mrs. Rampaul
 - B. Grandma
 - C. Mr. Rampaul
 - D. The girls
38. What is the best title of the story?
- A. Deyas
 - B. The Goddess
 - C. Rampaul's family
 - D. Divali

SCHOOL BASED EVALUATION TEST

STD 7 - TERM 2 - 2016

PENPLUS
MK2 - 2016

MATHEMATICS

Time: 2Hrs

READ THESE INSTRUCTIONS CAREFULLY

- Use only an ordinary pencil.
- Make sure that you have written on the answer sheet:-
(I) YOUR NAME (II) NAME OF YOUR SCHOOL
- For each question show the correct answer by drawing line in the brackets in which the letter you have chosen is written.

1. What is twelve million, seven hundred and two written in symbols?

- A. 1200702 B. 12000702
C. 127002 D. 12000072

2. Work out:

$$\frac{48 + 3 + 51}{17}$$

- A. 54 B. 6
C. 3 D. 27

3. What is the value of $\frac{4}{5} + \frac{3}{5} \times \frac{2}{9} - \frac{2}{3}$?

- A. $\frac{5}{12}$ B. $\frac{4}{5}$
C. $\frac{6}{9}$ D. $\frac{4}{15}$

4. What is the value of:


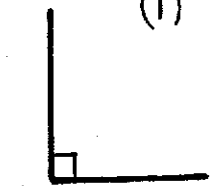

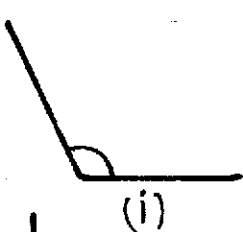
$$\frac{1.2 \times 1.6}{0.3 \times 0.2}$$

- A. 3.2 B. 320
C. 32 D. 0.32

5. What is 1450199 rounded off to the nearest thousands?

- A. 1450000 B. 1450200
C. 1450100 D. 1550000

6. Name the following angles.



- | | | | |
|----------------|--------|-------------|--------|
| (i) | (ii) | (iii) | (iv) |
| A. Acute | reflex | right angle | obtuse |
| B. Obtuse | reflex | right angle | acute |
| C. Reflex | obtuse | right angle | acute |
| D. Right angle | acute | reflex | obtuse |

7. What is the difference in the value of the square root of $\frac{25}{64}$ and $\frac{1}{49}$?

- A. $\frac{27}{56}$ B. $\frac{5}{8}$
C. $\frac{1}{7}$ D. $\frac{43}{56}$

8. The table below shows the foods should in a kiosk. Price in shillings

| Item | Tea | Ndazi | Chapati | Fish |
|-------|-----|-------|---------|------|
| Price | 20 | 10 | 30 | 50 |

If three people took fish and chapati while 8 people ordered tea and ndazi, what was their total bill?

- A. Sh 660 B. Sh 450
C. Sh 110 D. Sh 480

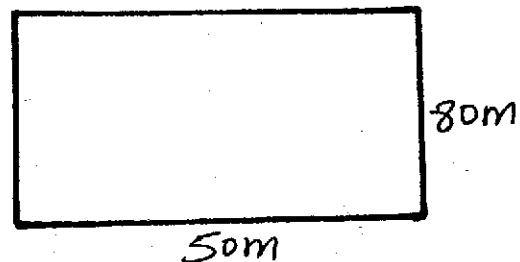
9. What is the simplified form of the expression below $\frac{1}{3}(6a + 9b) + \frac{2}{5}(15a + 10b)$

- A. $21a + 19b$ B. $6c + 8b$
C. $8a + 7b$ D. $11a + 9b$

10. A man spent $\frac{2}{5}$ of his salary on food, $\frac{1}{4}$ on clothing, $\frac{1}{6}$ on other expenses and saves the rest. What fraction of his salary did he save?

- A. $\frac{49}{60}$ B. $\frac{13}{24}$
C. $\frac{11}{60}$ D. $\frac{38}{60}$

11. Mwakio piece of land below was fenced with three strands of wire. What is the length of wire used?



- A. 780m B. 260m
C. 4000m D. 130m

12. The cost price of a pen is Sh p and book Sh $p - 6$.
What is the cost of two pens and one book?
A. Sh $(9p)$ B. Sh $(3p - 6)$
C. Sh $(2p - 6)$ D. Sh $(8p - 6)$

13. What is the next number in the pattern?
2, 3, 5, 7, 11, 13, _____
A. 15 B. 19
C. 16 D. 17

14. What is the value of:
$$\frac{2z}{z-x} + \frac{2x+4y}{z-y}$$

given $x = 2, y = 3, z = 4$

- A. 16 B. 17
C. 20 D. $16\frac{3}{4}$
15. What is the sum of the compliment of 60° and supplement of 70° ?
A. 130° B. 30°
C. 110° D. 140°

16. Nyariki bought the following farm tools:
3 jembes @ Sh 250
5 pangas @ Sh 150
2 spades @ Sh 165
1 wheelbarrow for Sh 2500 and a hammer for Sh 320

What balance did he get from Sh 5000?

- A. Sh 9650 B. Sh 750
C. Sh 350 D. Sh 4650
17. How many days were there between January 25th and March 12th in the year 2012?
A. 46 days B. 47 days
C. 49 days D. 48 days
18. Pupils in a certain school contributed some money to help a needy pupil. 2 - two hundred shillings, 50 - ten shilling coins and 10 - twenty shilling coins. What was the total money contributed?
A. Sh 700 B. Sh 1100
C. Sh 500 D. Sh 1200
19. Kamau bought goods worth Sh 800 and later sold them at Sh 1000. What was his percentage profit?
A. 10% B. 30%
C. 40% D. 25%

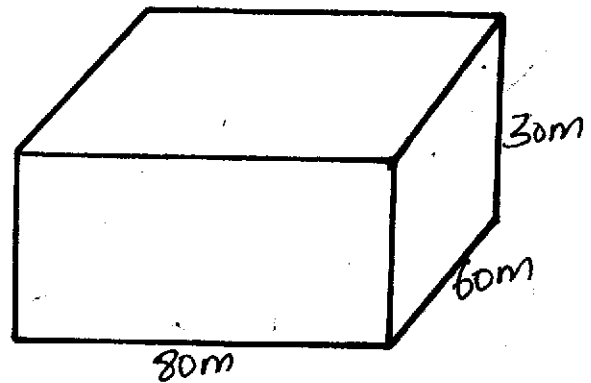
20. The table below shows a train travel schedule over several stations MNOP.

| Town | Arrival time | Departure time |
|------|--------------|----------------|
| M | 7.50 am | 8.00 am |
| N | 10.00 am | 10.45 am |
| O | 12.05 pm | 1.10 am |
| P | 2.10 pm | 2.20 pm |

In which station did the train take the longest time?

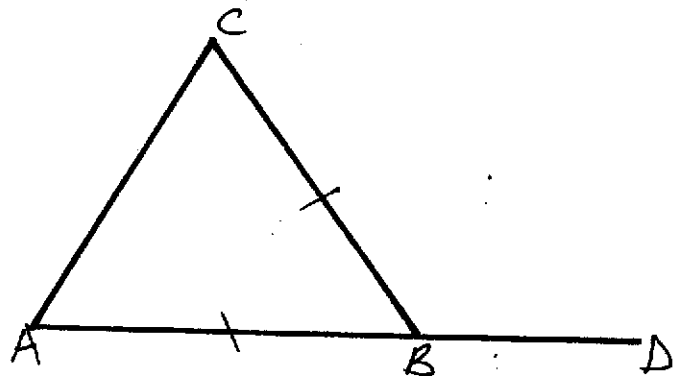
- A. O B. M C. P D. N

21. Calculate the amount of water in the following cuboid.



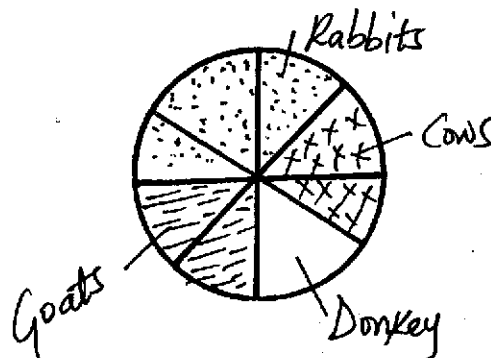
- A. $4800m^3$ B. $48000m^3$
C. $144000m^3$ D. $24000m^3$

22. In the triangle below ABC, angle $BAC = 50^\circ$. What is the value of angle CBD?



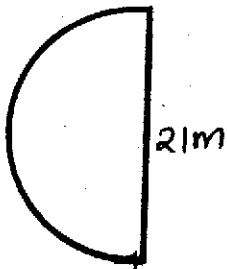
- A. 60° B. 30°
C. 80° D. 120°

23. The mean scored by six pupils in an examination was 74. If the marks of five of them were 84, 70, 72, 68, 66. What was the mode?
A. 84 B. 74
C. 70 D. 68
24. The marked price of an item was Ksh 2500. A discount of Ksh 400 was allowed. What was its buying price?
A. Sh 2900 B. Sh 2460
C. Sh 2100 D. Sh 2400
25. The pie chart below shows the total number of animals in a farm. There are 120 animals together. How many donkeys are there in the farm?




- A. 1 B. 15 C. 30 D. 20

26. Calculate the circumference of the following figure.
(Take $\pi = \frac{22}{7}$)



- A. 33m B. 54m C. 42m D. 21m
27. What is the value of p in the following inequality?
 $2p + 5 > p + 11$
A. 4 B. 5 C. 7 D. 6
28. What is the value of x in: $9 + \frac{1}{5}x = 20$
A. $20\frac{1}{3}$ B. 55
C. 29 D. 12
29. What is the sum of the total value of digit 3 and 8 in the number 3678091?
A. 3800000 B. 2992000
C. 3080000 D. 3008000
30. Ann, Cheronno and Auma shared 25 oranges. Ann got as equal number of oranges as Auma. Cheronno got five oranges. How many oranges did Ann get?
A. 20 B. 10
C. 15 D. $12\frac{1}{2}$
31. Kamau and Matoo shared Sh 1500 in the ration of 1:2. How much money was received by Matoo?
A. Sh 1200 B. Sh 1000
C. Sh 700 D. Sh 500
32. Which of the following sets of measurements will form a right angled triangle when constructed?
A. 5cm by 6cm by 7cm
B. 7cm by 8cm by 10cm
C. 4cm by 6cm by 10cm
D. 3cm by 4cm by 5cm
33. How many blocks are used to make the stack below?



- A. 24 B. 28 C. 20 D. 30

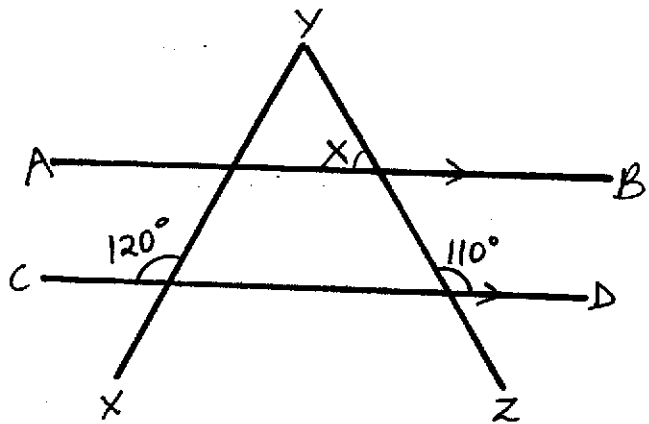
34. Which quadrilateral has the following properties?

- (i) Opposite sides are equal
(ii) Opposite angles are equal and each is 90°
(iii) Diagonals do not bisect each other at 90°

- A. Square B. Rectangle
C. Rhombus D. Parallelogram

35. A square piece of land is represented by a square sides 10cm. The scale used is 1cm represent 10m. What is the actual ares of the plot?
A. 10000cm² B. 100cm²
C. 10000m² D. 100m²

36. Line AB is parallel to CD and line XY and ZY are transversal. What is the size of angle X?

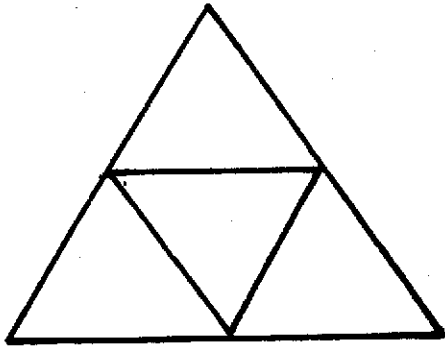


- A. 60° B. 50°
C. 70° D. 80°
37. In a certain county, the population of pigs was 41907. The number of female pigs increased by 540 after an year. In the second and third year the increase was thrice that of first year. What was the new population now?
A. 44067 B. 43527
C. 43547 D. 42447
38. The inland postage charges below were used by Rotich to send three letters weighing 40g, 150g and 700g. What was his total charges?

| Mass of letters | charges |
|-----------------|---------|
| Not over 50g | Sh 90 |
| Not over 200g | Sh 140 |
| Not over 500g | Sh 250 |
| Not over 1kg | Sh 300 |

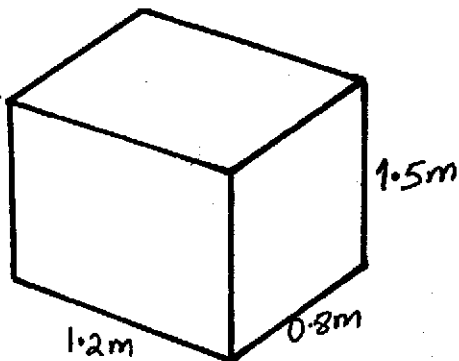
- A. Sh 780 B. Sh 530
C. Sh 230 D. Sh 480
39. One shirt cost Sh 350 and one blouse cost Sh 700. What is the cost of 3 shirts and two blouses?
A. Sh 1750 B. Sh 10500
C. Sh 2450 D. Sh 1400

40. The figure below is made up of triangles.

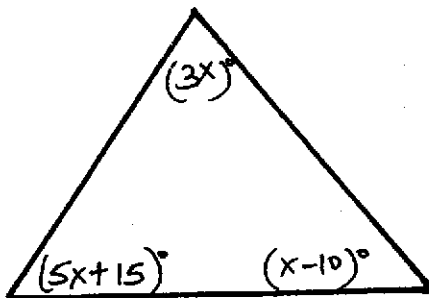


How many triangles are there?

- A. 5 B. 4
C. 8 D. 6
41. A shopkeeper bought 30 eggs for Sh 150. Five of the eggs broke. He sold the remainder at Sh 5.50 each. What was his loss?
- A. Sh 137.50 B. Sh 12.50
C. Sh 136.26 D. Sh 13.75
42. What is the volume of the solid below?

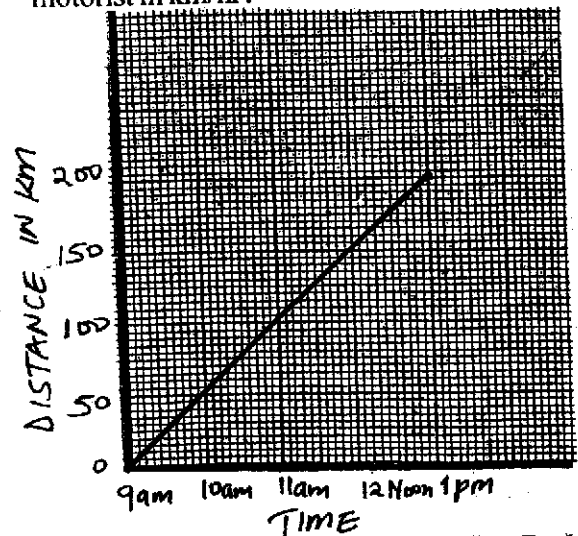


- A. $14.4m^3$ B. $1.44m^3$
C. $144m^3$ D. $1440m^3$
43. Mr. Hinga's plot is in form of square with an area of $49000m^2$. What was the size of Hinga's land in hectares?
- A. 490 ha B. 49 ha
C. 0.49 ha D. 4.9 ha
44. Which one is the simplified algebraic expression for the sum of angles in triangle below?

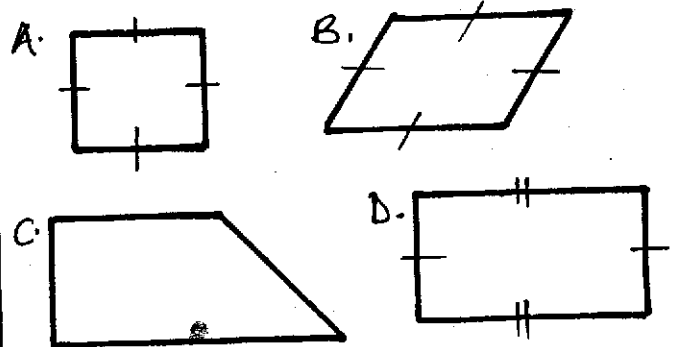


- A. $(9x + 5)^\circ$ B. $(9x + 25)^\circ$
C. $(8x + 5)^\circ$ D. $(9x - 5)^\circ$

45. The graph below shows a motorist journey from town A to town B. What was the speed of the motorist in km/hr?



- A. 40km/hr B. 50km/hr C. 30km/hr D. 60km/hr
46. Kirumba was sent to the post office with three parcels weighing 432g, 218g and 944g. What was the total mass in kg of the parcels posted?
- A. 1594kg B. 1.594kg C. 15.94kg D. 159.4kg
47. Muli bought 50 bananas for Sh 600. What will be the cost of 200 bananas if cost price of the bananas was the same?
- A. Sh 5000 B. Sh 4800 C. Sh 3000 D. Sh 2400
48. Mr. Kioko deposited Ksh 10000 in a bank that offered simple interest of Sh 500 per month. He later withdrew the total money after ten months. How much did he withdraw?
- A. Sh 5000 B. Sh 10500
C. Sh 15000 D. Sh 1500
49. Mwenda cycled for 2hrs 20 min. He had a stop over for 15 min then continued with his journey for 1 hr 10 min. He arrived at 2.00pm. At what time had he started his journey?
- A. 10.15 am B. 10.05 am
C. 10.00 am D. 9.50 am
50. The following are types of quadrilaterals. Which is the correct order of their names?



- A. Rectangle, trapezium, rhombus, square
B. Square, rhombus, trapezium, rectangle
C. Rhombus, square, rectangle, trapezium
D. Trapezium, rhombus, rectangle, square

SCHOOL BASED EVALUATION TEST

PENPLUS
MK2 - 2016

STD 7 - TERM 2 - 2016

SCIENCE

Time: 1 Hr 40 Mins


READ THESE INSTRUCTIONS CAREFULLY

1. Use only an ordinary pencil.
2. Make sure that you have written on the answer sheet:-
(I) YOUR NAME (II) NAME OF YOUR SCHOOL
3. For each question show the correct answer by drawing line in the brackets in which the letter you have chosen is written.

1. Which one of the following is **NOT** a function of the nose in the breathing system?

- A. Cleaning the air B. Exchange of gases
C. Warming the air D. Moistening the air

2. The following are diagrams of different types of teeth. Which diagram shows a type of tooth used for cutting?



3. The following are effects of HIV infection on the family **EXCEPT**:-

- A. lowering of self esteem
B. a lot of medical expenses
C. lack of parental care
D. loss of earnings

4. Which one of the following shows a pair of natural sources of light?

- A. Moon, torch
B. Moon, stars
C. Glow worms, the stars
D. Torch, lamp

5. Freezing is _____

- A. changing of solids to gas
B. changing of gas to liquid
C. changing of solid to liquid
D. changing of liquid to solid

6. Class seven pupils of Kiyo primary wanted to test soil texture in their Science lesson. Which of the following materials was not needed?

- A. Sand soil B. Water
C. Clay soil D. Loam soil

7. Which of the following is **NOT** a function of saliva during digestion?

- A. Kill germs
B. Moistens food
C. Sticks food particles together
D. Break down food particles

8. Insectivorous plants grow on soil which lack some nutrients like nitrogen thus they feed on insects. Which of the following is **NOT** an insectivorous plant?

- A. Venus fly trap B. Sundew
C. Aloe vera D. Cobra lily

9. Which of the following water borne diseases mainly attack the small intestines?

- A. Cholera B. Bilharzia
C. Dysentery D. Typhoid

10. Which of the following is common sign in marasmus and kwashiorkor?

- A. Pot bellied B. Wrinkled face
C. Thin and weak D. Brown hair

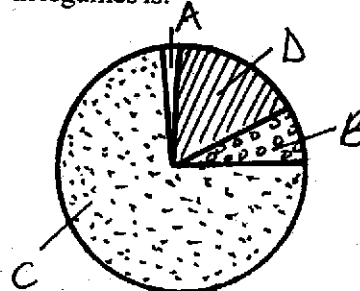
11. Which of the following is found among all reptiles but not in amphibians?

- A. Laying eggs B. Scales
C. Back bone D. Cold blooded

12. Which of the following is a flowering plant?

- A. Moss B. Grass
C. Fern D. Liverworts

13. The gas that is used in the process of protein making in legumes is:-



14. The following practices can spread AIDS. Which one cannot?

- A. Female genital mutilation
- B. Blood transfusion
- C. Circumcision
- D. Swimming

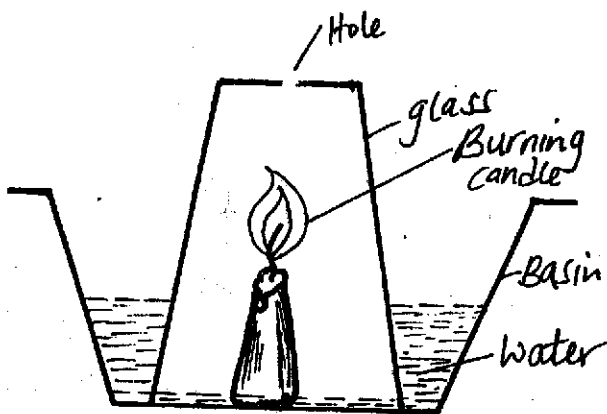
15. Which one of the following is **NOT** a fungal infection?

- A. Yeast
- B. Dandruffs
- C. Athletes foot
- D. Ringworm

16. The following are importances of HIV testing **EXCEPT:-**

- A. to overcome fear
- B. to avoid marriage
- C. to change behaviour
- D. to campaign against the spread of HIV

17. A std 6 pupil from Kasugi primary school carried out an experiment below.



They made a hole at the bottom of a glass. What observation did they make?

- A. The level of water in the basin dropped
- B. The level of water in the glass rose
- C. The candle continued burning
- D. The candle went off after some times

18. Which one of the following lists consists of body fluids through which the HIV can be transmitted?

- A. Breast milk, saliva, blood
- B. Blood, urine, saliva
- C. Blood, tears, saliva
- D. reproductive fluid, urine, bile

19. Which statement is **TRUE** about the following animals: snails, fish, snakes and earthworms?

- A. They all have scales in their bodies
- B. They all live in soil
- C. They all live in water
- D. They do not have legs

20. Which of the following diseases are **WRONGLY** classified?

Immunizable diseases **Water borne diseases**

- | | |
|-----------------|-----------|
| A. Tetanus | typhoid |
| B. Measles | bilharzia |
| C. Diptheria | tetanus |
| D. Tuberculosis | cholera |

21. Which one of the following parts of a flower is **NOT CORRECTLY** matched with its function?

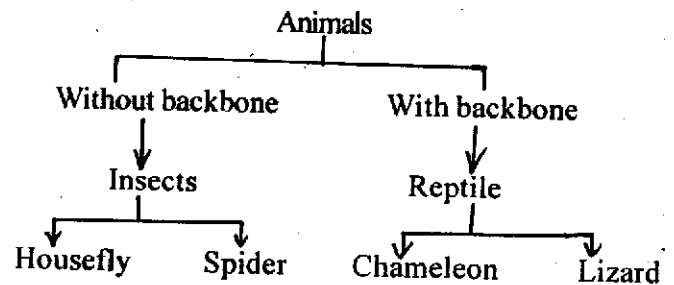
Part of flower **Function**

- | | |
|-----------------|-------------------|
| A. Pollen grain | Fertilizes ovules |
| B. Stigma | produces pollen |
| C. Style | Support stigma |
| D. Filament | Supports anthers |

22. The changes that affect the feelings behaviour of an adolescent are called:-

- A. emotional changes
- B. physical changes
- C. adolescent changes
- D. chemical changes

23.



Which of the following animals was **NOT** classified correctly?

- A. Spider
- B. Housefly
- C. lizard
- D. Chameleon

24. A farmer noticed small and shallow channels forming the soil in the garden due to running water. This type of soil erosion is called:-

- A. splash
- B. sheet
- C. gully
- D. rill

25. The type of soil erosion that is common around houses roofed with corrugated iron sheets is _____

- A. gully erosion
- B. sheet erosion
- C. splash erosion
- D. rill erosion

26. Which one of the following statements is **NOT** correct?

- A. Medicines are used to prevent diseases
- B. Medicines are taken in excess to speed up recovery
- C. Medicines are used to relieve pain
- D. Medicines are used to cure diseases

27. Which one of the following shows a pair of a major and a minor component of the environment respectively?

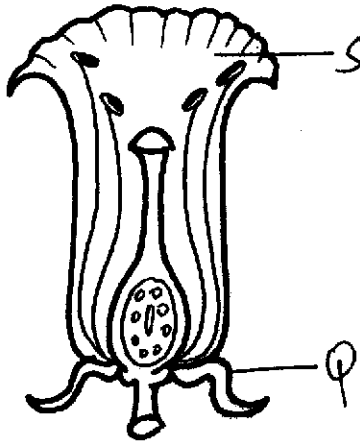
- A. Water, soil/
- B. Sound, water
- C. Buildings, tools
- D. Animals, light

28. The following are the qualities of some blood vessels. Which combination shows a description of an artery?

- (i) Take blood to all parts of the body
- (ii) Have valves
- (iii) Carry blood away from the heart
- (iv) Have thin walls
- (v) Blood flows in waves
- (vi) Have thick walls

- A. (iii), (v), (vi)
- B. (iii), (i), (ii)
- C. (iv), (vi), (i)
- D. (i), (iv), (vi)

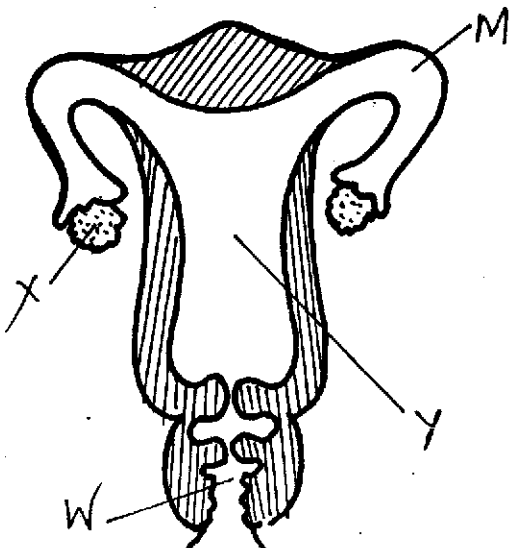
29.



The above diagram shows a flower. Which one of the following represents the functions of parts S and Q respectively?

- | S | Q |
|--------------------------|---------------------------------|
| A. Produce pollen grains | contains ovules |
| B. Attracts butterflies | protect flower in the bud stage |
| C. Protect the flower | attracts insects |
| D. Brightly coloured | holds the flower |

30. The diagram below represents a female reproductive system.



In which of the following parts does fertilization take place?

- A. M
- B. X
- C. Y
- D. W

31. Standard five pupils grouped some small animals. Which one of the following animals can be grouped together with mites?

- A. Tick, spider, scorpion
- B. Moth, weevil, ant
- C. Grasshopper, bee, spider
- D. Earthworms, tapeworms, slugs

32. During a nature walk, std 6 pupils saw exposed roots of a tree in their school compound. Which type of soil erosion had occurred?

- A. Sheet
- B. Rill
- C. Splash
- D. Gully

33. Lewis a standard four boy was spraying herbicides on his small garden. This is an example of _____ usage of water.

- A. domestic use of water
- B. farm use of water
- C. industrial use of water
- D. recreation use of water

34. The following are processes that take place during germination.

- (i) The plumule forms a shoot with tiny leaves
- (ii) The seed absorbs water through the micropyle
- (iii) The radicle comes out through the micropyle
- (iv) The testa bursts and splits open
- (v) The seed swells up

Which is the **CORRECT** order of germination?

- A. (v), (iv), (iii), (ii), (i)
- B. (ii), (v), (iv), (i), (iii)
- C. (ii), (v), (iv), (iii), (i)
- D. (i), (ii), (iii), (iv), (v)

35. Which of the following **DOES NOT** help an animal to grow healthy?

- A. Proper medical care
- B. Proper feeding
- C. Adding fertilizer
- D. Proper housing


36. The best prevention against bad breath is _____

- A. good oral hygiene
- B. eating raw carrots
- C. using dental floss
- D. avoiding sugary foods

37. A child was seen to have fever, abdominal pains, aches in muscles and joints and skin rash. Which is the best way of preventing the noted disease?

- A. Wear protective clothes
- B. Kill water snails using chemicals
- C. Sleep under mosquito net
- D. Dispose of faeces properly

38. The heat moves sideways or downwards in the air using _____ method.
- convection
 - conduction
 - sublimation
 - radiation
39. The following are sources of light at our homes **EXCEPT:-**
- | | |
|-------------|----------------|
| A. candle | B. electricity |
| C. fire fly | D. biogas |
40. Which of the following methods require decrease of the heat?
- Melting and evaporation
 - Freezing and condensation
 - Melting and conduction
 - Freezing and evaporation
41. Which of the following tools requires greasing and oiling to function well?
- Wheelbarrow
 - Panga
 - Combined fork jembe
 - Sickle
42. Muturi and Preston were balancing on a see-saw. They sat at the same distance from the Y-shaped trunk.



For the two boys to balance on the see-saw:-

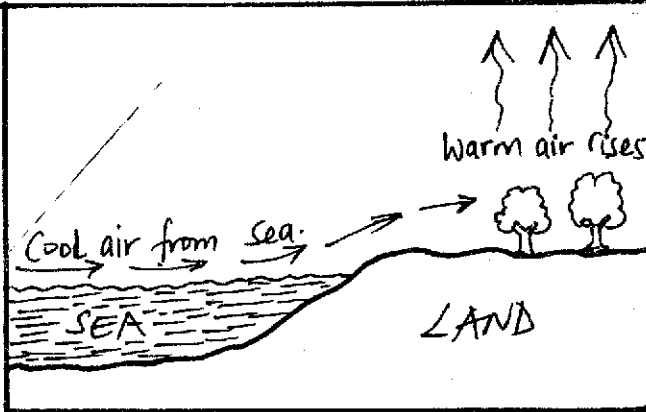
- Preston should jump
 - Muturi should move towards the Y-shaped tree trunk
 - Preston should move away from the Y-shaped tree trunk
 - Muturi should move away from the Y-shaped tree trunk
43. The following are effects of noise pollution.
- Noise makes people become less alert
 - Noise makes people feel uncomfortable
 - Noise makes people to work very well
 - Noise can cause deafness

Which one is **NOT** an effect of noise pollution?

- | | |
|----------|---------|
| A. (i) | B. (ii) |
| C. (iii) | D. (iv) |

44. Which one of the following is a star?
- Mercury
 - Sun
 - Venus
 - Mars
45. The following are some weather instrument used to measure various aspects of weather. Which ones measures temperature and strength of wind respectively?
- Liquid thermometer and windsock
 - Raingauge and windvane
 - Windsock and windvane
 - Liquid thermometer and raingauge
46. Various pupils were told to prepare a meal. They gave the following answer.
- Jane** : Maize and beans, chapati
Mary : Ugali, spinach, beans
Tom : Mashed potatoes, meat, orange
Ken : Chapati, bean stew, mango
- Who **DID NOT** give a balanced diet?
- Tom
 - Mary
 - Ken
 - Jane
47. The following are states of matter. Which is the odd one out?
- Stone, salt, firewood
 - Milk, water, tea
 - Vapour, milk, stones
 - Vapor, smoke, vapour
48. Which one of the following is **NOT** a colour of the spectrum?
- Indigo
 - Violet
 - Purple
 - Red
49. Force is measured in _____
- kilograms
 - newtons
 - grammes
 - metres
50. Which one of the following is **NOT** a reason for lighting a house?
- To feel warm
 - For safety purpose
 - To discourage pests
 - To read comfortably

52.

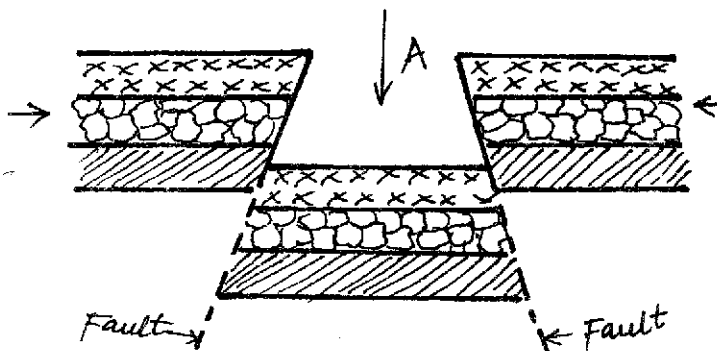


The type of breeze illustrated above is:-

- A. sea breeze
- B. land breeze
- C. coast breeze
- D. wind breeze

Study the diagram below and answer questions

53-54.



53. The feature shown by the arrow marked A is:-
 A. lake B. mountain C. river D. Rift Valley

54. Which of the following features is likely to be found on the floor of the feature shown above?
 A. Lake Victoria B. Lake Tanganyika
 C. Lake Kyoga D. Lake Gambi

55. The features below describe a climate zone in Africa.
 (i) Hot, dry summers and cool and wet winters
 (ii) Rains brought by Westerly winds
 (iii) It is experienced in places like Cape Town

The climatic region describes is:-

- A. Mediterranean climate
- B. Desert and semi desert climate
- C. Savannah climate
- D. Mountain climate

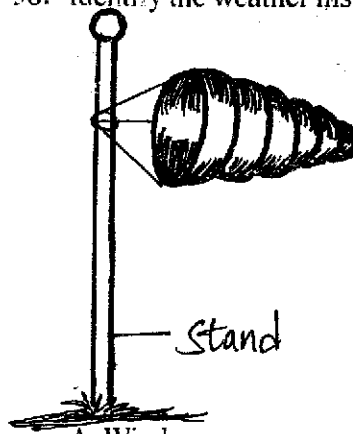
56. The form of democracy practiced where pupils are given opportunity to elect the children government leaders is known as:-

- A. delegative democracy
- B. nominational democracy
- C. participatory democracy
- D. indirect democracy

57. Which one of the following is a cause of lawlessness on a society?


- A. Patriotism
- B. Drug abuse
- C. Equality
- D. Elections

58. Identify the weather instrument drawn below.



- A. Windvane
- B. Anemometer
- C. Barometer
- D. Windsock

59. The diagram below shows a fishing method.



The fishing method shown is:-

- A. trawling
- B. purse-seining
- C. long lining
- D. net drifting

60. Which one of the following is **NOT** a type of human right as found in the Bill of Rights in the constitution of Kenya?

- A. Right to life
- B. Right to education
- C. Right to child abuse
- D. Right to food

CHRISTIAN RELIGIOUS EDUCATION

61. Adam and Eve were put in the garden of Eden mainly to:-

- A. dominate all the animals
- B. cultivate and guard it
- C. stay away from God
- D. to eat fruits in it

62. God chose Noah to save mankind because:-

- A. he knew how to build the ark
- B. he was a wealthy man
- C. he had a lot of wisdom
- D. he was righteous


63. On which of the mountains below did God give to Moses the ten commandments?


- A. Sinai
- B. Carmel
- C. Olives
- D. Ararat

64. King David committed adultery with Uriah's wife. Her name was:-

- A. Elizabeth
- B. Elisheba
- C. Bethsheba
- D. Abigail

65. Among the following people, who is the father of faith?
A. Joseph B. Abraham C. Jesus D. David
66. Purity means _____
A. wearing clean clothes B. avoiding other people
C. obeying our leaders D. having good intentions
67. Jesus in the beatitudes taught that the spiritually poor would:-
A. receive the kingdom of heaven
B. will receive what God has promised
C. be called the sons of God
D. receive a great reward in heaven
68. Christians celebrate the Holy Communion to remember:-
A. the coming of the holy spirit
B. the feeding of the five thousand men
C. the suffering and death of Jesus
D. the birth of Jesus Christ
69. What would Christians learn from the parable of the prodigal son?
A. Persistence B. Thankfulness
C. Humility D. forgiveness
70. Which one of these events took place last?
A. Crucifixion B. Pentecost
C. Last Supper D. Turning water into wine
71. Who among the old testament prophets foretold the coming of the Holy Spirit?
A. Hosea B. Amos C. Joel D. Micah
72. Who among the following is described as the light of the world?
A. Jesus Christ B. Angel Gabriel
C. Angel Michael D. Cephas the rock
73. Who among the following was called by God to preach the gospel to the Gentiles?
A. Peter B. Stephen C. Philip D. Paul
74. How did Christians during the time of apostle Paul receive the Holy Spirit?
A. Singing together B. Laying of hands
C. Reading the Bible D. Praying together
75. Three of the following are healing miracles Jesus performed except one. Which one is it?
A. Healing of the paralysed man
B. Curing the blind
C. Walking on water
D. Healing the deaf
76. "Your faith has made you well." To whom were these words spoken?
A. Bartimaeus B. Zaccheaus
C. Lazarus D. Simon
77. The disciples of Jesus were commanded to do three of the following except one. They were:-
A. to preach the gospel B. to heal the sick
C. to cast demons D. to go to believers only
78. The best use of leisure by a Christian is to:-
A. read the Bible B. visit prisoners
C. sing in a choir D. visit friends
79. When Jesus washed the disciples feet, He demonstrated _____
A. tolerance for others B. leadership
C. humility in service D. hard work
80. The **main** teaching of the sermon on the mount is:-
A. values of Christian living
B. Christian suffering on earth
C. being peacemakers
D. being merciful to others
81. Which one of the following is **NOT** a characteristic of eternal life?
A. Believe in God B. Accepting suffering
C. Being just and fair D. Working miracles
82. The action of Jesus which teaches Christians that there is life after death is:-
A. feeding the hungry B. raising of Lazarus
C. healing the sick D. driving out demons
83. The two disciples whom Jesus met after his resurrection were on their way to:-
A. Jericho B. Bethany C. Emmaus D. Jerusalem
84. People could ask for rain in traditional African society by:-
A. offering sacrifices
B. naming of children after seasons
C. prayer and fasting
D. bribing God
85. Which one of the following is a rite of passage in traditional African society?
A. Baptism B. Marriage
C. Pregnancy D. Confirmation
86. The Agikuyu people prayed facing mount Kenya because:-
A. it is a water catchment area
B. it had snow at the peaks
C. it is near heaven
D. it was a sign of God's presence
87. In Acts 20:37, "It is more blessed to give than to receive." This teaches Christians to:-
A. be generous B. pray together
C. visit the needy D. worship together
88. As a Christian which one of the following is the BEST advise to give to a person living with HIV/AIDS?
A. Do not greet others
B. Do not donate blood
C. Avoid sitting close to others
D. Avoid sharing food
89. When we perform duties assigned to us in school by our teachers, we are learning to be:-
A. servants B. honest
C. responsible D. hardworking
90. Mercy a standard six-pupil is lazy and does not complete her class work. How best would you help her overcome this problem?
A. Encourage her to do it
B. Do the work for her
C. Give her your work to copy
D. Tell her brother to do it for her





SCHOOL BASED EVALUATION TEST

PENPLUS
MK2 - 2016

STD 7 - TERM 2 - 2016

MARKING SCHEME

| ENGLISH | | | MATHEMATICS | | | KISWAHILI | | | SCIENCE | | | S/STUDIES/C.R.E | | |
|---------|-------|--|-------------|-------|--|-----------|-------|--|---------|-------|--|-----------------|-------|-------|
| 1. B | 31. C | | 1. B | 31. B | | 1. C | 31. B | | 1. B | 31. A | | 1. C | 31. A | 61. B |
| 2. C | 32. B | | 2. A | 32. D | | 2. A | 32. C | | 2. C | 32. D | | 2. D | 32. D | 62. D |
| 3. D | 33. A | | 3. D | 33. A | | 3. D | 33. B | | 3. A | 33. B | | 3. A | 33. B | 63. A |
| 4. A | 34. D | | 4. C | 34. B | | 4. A | 34. A | | 4. C | 34. C | | 4. C | 34. C | 64. C |
| 5. C | 35. A | | 5. A | 35. C | | 5. B | 35. C | | 5. D | 35. C | | 5. D | 35. B | 65. B |
| 6. B | 36. C | | 6. B | 36. C | | 6. D | 36. A | | 6. B | 36. A | | 6. A | 36. A | 66. D |
| 7. D | 37. B | | 7. A | 37. A | | 7. C | 37. B | | 7. A | 37. D | | 7. B | 37. C | 67. A |
| 8. A | 38. D | | 8. D | 38. B | | 8. B | 38. C | | 8. C | 38. D | | 8. C | 38. B | 68. C |
| 9. C | 39. C | | 9. C | 39. C | | 9. C | 39. D | | 9. D | 39. C | | 9. B | 39. D | 69. D |
| 10. B | 40. A | | 10. C | 40. A | | 10. B | 40. A | | 10. A | 40. B | | 10. D | 40. C | 70. B |
| 11. D | 41. D | | 11. A | 41. B | | 11. A | 41. A | | 11. B | 41. A | | 11. D | 41. D | 71. C |
| 12. C | 42. C | | 12. B | 42. B | | 12. A | 42. C | | 12. B | 42. D | | 12. C | 42. C | 72. A |
| 13. C | 43. B | | 13. D | 43. D | | 13. A | 43. D | | 13. C | 43. C | | 13. B | 43. A | 73. D |
| 14. D | 44. C | | 14. C | 44. A | | 14. C | 44. C | | 14. D | 44. B | | 14. A | 44. D | 74. B |
| 15. A | 45. D | | 15. D | 45. B | | 15. A | 45. D | | 15. A | 45. A | | 15. C | 45. A | 75. C |
| 16. B | 46. A | | 16. C | 46. B | | 16. B | 46. B | | 16. B | 46. D | | 16. A | 46. B | 76. A |
| 17. C | 47. C | | 17. A | 47. D | | 17. D | 47. C | | 17. C | 47. C | | 17. D | 47. D | 77. B |
| 18. B | 48. D | | 18. B | 48. C | | 18. B | 48. B | | 18. A | 48. C | | 18. B | 48. B | 78. D |
| 19. A | 49. B | | 19. D | 49. A | | 19. C | 49. B | | 19. D | 49. B | | 19. C | 49. A | 79. C |
| 20. C | 50. C | | 20. A | 50. B | | 20. A | 50. A | | 20. C | 50. A | | 20. B | 50. C | 80. A |
| 21. D | | | 21. C | | | 21. A | | | 21. B | | | 21. A | 51. B | 81. D |
| 22. A | | | 22. D | | | 22. B | | | 22. A | | | 22. D | 52. A | 82. B |
| 23. C | | | 23. A | | | 23. B | | | 23. A | | | 23. B | 53. D | 83. C |
| 24. B | | | 24. C | | | 24. B | | | 24. D | | | 24. D | 54. B | 84. A |
| 25. B | | | 25. B | | | 25. D | | | 25. C | | | 25. A | 55. A | 85. B |
| 26. D | | | 26. B | | | 26. D | | | 26. B | | | 26. C | 56. C | 86. D |
| 27. C | | | 27. D | | | 27. C | | | 27. D | | | 27. D | 57. B | 87. A |
| 28. A | | | 28. B | | | 28. D | | | 28. A | | | 28. B | 58. D | 88. B |
| 29. A | | | 29. D | | | 29. A | | | 29. B | | | 29. A | 59. A | 89. C |
| 30. D | | | 30. B | | | 30. C | | | 30. A | | | 30. C | 60. C | 90. A |

COMPOSITION / INSHA MARKING SCHEME

MARKING CRITERION

1. The composition will be assessed according to the following guidelines.

2. The maximum mark will be 40 and the minimum mark 01.

Does the script show that the candidate can communicate accurately, fluently and imaginatively in English

Accuracy (16 marks)

- (a) Correct tense and agreement of verbs (b) Accurate use of vocabulary (4 marks)
(c) Correct spelling (4 marks) (d) Correct punctuation (4 marks)

Fluency (16 marks)

- (a) Correct flow of the story (4 marks) (b) Well sequenced sentence and connected paragraphs (4 marks)
(c) Correct spelling (4 marks) (d) Ideas developed in logic sequence (4 marks)

Imagination (8 marks)

- (a) Unusual but appropriate use of words (4 marks)
(b) Variety of structure (4 marks)

NB: Please teachers are requested to scrutinize this marking scheme before use, it is worth