



DOUBLE MERIT NATIONAL EXAMINATIONS STANDARD FOUR - YEAR 2016 ENGLISH.

SN.G123562

Time: 1 Hr 30 Min

Fill in the blank spaces 1 to 15 using the best answers from the choices given.

One day, John and Peter 1 going 2 the market. They 3 to buy exercise books 4 some fruits. They had money 5 they were given by 6 father. They were very 7 because they were going to also 8 some of their friends. When they reached the 9, they went to where books were being 10. They 11 five books each. They then decided to 12 and buy some fruits. John 13 to buy bananas 14 Peter wanted to buy oranges. At last they 15 decided to buy oranges.

- | | | | |
|----------------|------------|------------|-------------|
| 1. A. was | B. are | C. is | D. were |
| 2. A. on | B. to | C. from | D. onto |
| 3. A. wanted | B. wanting | C. wants | D. want |
| 4. A. for | B. again | C. and | D. so |
| 5. A. whose | B. who | C. whom | D. which |
| 6. A. they | B. their | C. there | D. them |
| 7. A. happy | B. happily | C. happier | D. happiest |
| 8. A. met | B. meet | C. meeting | D. meeting |
| 9. A. hotel | B. school | C. stage | D. market |
| 10. A. eaten | B. sold | C. stolen | D. hid |
| 11. A. by | B. buying | C. bought | D. buys |
| 12. A. go | B. went | C. gone | D. going |
| 13. A. wanting | B. wanted | C. wants | D. says |
| 14. A. so | B. while | C. that | D. neither |
| 15. A. two | B. whole | C. both | D. hall |

In questions 16 to 18, give the feminine word.

16. Bull _____
A. Goat
B. Calf
C. Cow
D. Sheep
17. Dog _____
A. Puppy
B. Bitch
C. Kitten
D. Cub

18. Nephew _____
A. Miss
B. Niece
C. Cousin
D. Sister

For questions 19 to 21 the choose the similar word to the underlined.

19. Our school has a round flower garden.
A. square
B. small
C. circular
D. triangular

20. Shut the door.

- A. Open
- B. Lock
- C. Push
- D. Pull

21. He is yet to start his work.

- A. help
- B. halt
- C. begin
- D. stop

For questions 22 to 24, write one word of the words given.

22. Car, bus, taxi, lorry

- A. Furniture
- B. Transport
- C. Matatu
- D. Vehicle

23. Brother, sister, uncle, aunt


- A. Teachers
- B. Patients
- C. Relatives
- D. Men

24. Cows, goats, sheep

- A. cattle
- B. poultry
- C. livestock
- D. wildlife.

25. Spoon, fork, knife

- A. utensils
- B. Fooding
- C. Cutlery
- D. Cookery

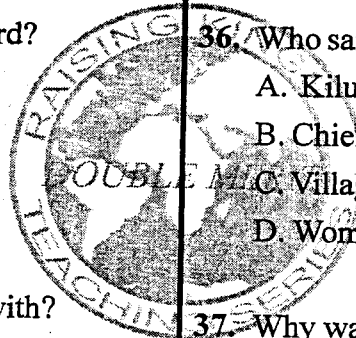


Read the passage below then answer the questions 26 to 38.

A long time ago, there was a small village. It was a peaceful village. One early morning, the villagers were busy selling fruits and vegetables in the market. They noticed ten rats running under their stalls. "Rats! Rats!" They shouted. Some people chased the rats. They tried to kill the rats with sticks, but the rats were too fast for them. Some people screamed and ran away. One rat ran up Mr. Kilui and sat on his head. Mr. Kilui roared loudly. He ran around the market waving his hands in the air.

The next market day, there were one thousand rats running around. "What is happening? This is dreadful!" Shouted the chief, "I will give a reward to anyone who can get rid of the rats. The person can have gold. He can also marry my daughter."

26. The village was:-
A. fearsome
B. peaceful
C. dangerous
D. unpeaceful
27. When were the villagers felling their fruits and vegetables? In the :-
A. evening
B. morning
C. night
D. afternoon
28. How many rats were seen altogether?
A. Ten
B. One thousand
C. One thousand and ten
D. One
29. What was to be offered as a reward?
A. Stick
B. Daughter
C. Rat
D. Fruits
30. What did they try to kill the rats with?
A. Poison
B. Cat
C. Sticks
D. Stones
31. How many people ran away?
A. One
B. All
C. None
D. We are not told
32. One rat sat on Mr. Kilui's:-
A. hand
B. leg
C. head
D. chair
33. The following market day _____ were seen.
A. ten rats
B. one rat
C. no rats
D. rats
34. Who shouted?
A. Kilui
B. Villagers
C. Nobody
D. Chief
35. How many items did the chief propose to reward?
A. Two
B. Three
C. Four
D. One
36. Who said this words? "This is dreadful"
A. Kilui
B. Chief
C. Villager
D. Women
37. Why was it difficult for the villagers to kill the rats? The rats:-
A. were many
B. were too small
C. were too fast
D. were clever
38. Choose the correct title for the passage.
A. Rat's day
B. Rats in the market
C. Kilui's rat
D. Rats and cats



Read the passage below and answer questions 39 to 50.


One day, the hare was walking near the forest. He saw a shamba full of vegetables. There were cabbages, sukumawiki, carrots and tomatoes. He dug up some carrots and ate them greedily. He did this for many days but one day, the owner, Mr. Kisowe caught him.

"I am very sorry," Hare told the owner. "please don't kill me. I will do anything you want if you spare my life". Allright, I will not kill you but if you want to live you have to pay for it. You will have to go to the land of ghosts and get me some special nuts. I have been told that if I eat the nuts I will live forever," said Mr Kisowe.

Hare knew that to get to the land of ghosts he had to cross a wide river full of crocodiles. When he reached the bank of the river, he found mother crocodile warming herself in the sun. Her mouth was wide open. I have tricked bigger and more fierce animals. Why should I not trick this laughing crocodile?" Hare said to himself.

39. Whose vegetables were stolen?
A. Ghost
B. Kisowe
C. Crocodiles
D. Carrots
40. Mr kisowe wanted to eat _____ to live long.
A. carrots
B. nuts
C. cabbage
D. none
41. The hare was walking near the:-
A. river
B. shamba
C. forest
D. village
42. Which vegetables were stolen?
A. Cabbages
B. Carrots
C. Tomatoes
D. Sukumawiki
43. The river hare had to cross was:-
A. narrow
B. deep
C. wide
D. small
44. Mother crocodile was:-
A. resting
B. eating
C. warming
D. sleeping
45. The hare thought of _____ the crocodile.
A. killing
B. eating
C. tricking
D. jumping
46. How many days did the hare eat the vegetables?
A. Two
B. Many
C. Three
D. ten
47. Kisowe wanted to _____ the hare.
A. Kill
B. chase
C. see
D. beat
48. Hare was sent to the land of:-
A. crocodiles
B. water
C. forest
D. ghosts
49. Crocodile's mouth was:-
A. closed
B. open
C. smelling
D. locked
50. Choose the suitable title for the passage.
A. The mother crocodile
B. The hare and the farmer
C. Crocodile river
D. The vegetation







DOUBLE MERIT NATIONAL EXAMINATIONS
DARASA LA NNE MWAKA 2016
KISWAHILI:LUGHA

SN:G123562

Muda: Saa 1 Dak. 40

Kutoka swali la 1 hadi 15 chagua jibu lifaalo zaidi kati ya vale uliyopewa.

Mapera 1 yalinunuliwa 2 hayajakomaa vizuri. Tulijaribu 3 sokoni, lakini soko hilo 4 lilikuwa limefungwa 5. Tulichukua 6 kikubwa tukampa mama. 7 alituambia kuwa mapera 8 hayawezi kuoza 9 pahali 10. Mama 11 mapera 12 akauzia 13. Nasi tukashika njia 14 zetu nyumbani. Tulifurahi 15 pesa.

- | | | | |
|------------------------|--------------------|------------------|------------------|
| 1. A. mbichi | B. mibichi | C. mabichi | D. bichi |
| 2. A. zikiwa | B. ikiwa | C. ukiwa | D. yakiwa |
| 3. A. kuyarudisha | B. kuzirudisha | C. kuirudisha | D. kuvirudisha |
| 4. A. nayo | B. nacho | C. nalo | D. naye |
| 5. A. tayari | B. bado | C. baadaye | D. kamwe |
| 6. A. mfuko | B. gunia | C. debe | D. kikapu |
| 7. A. nao | B. nayo | C. naye | D. nacho |
| 8. A. zote | B. yote | C. lote | D. vyote |
| 9. A. yakitunziwa | B. yakitunzwa | C. yakitunza | D. yakitunzana |
| 10. A. nzuri | B. mzuri | C. zuri | D. pazuri |
| 11. A. waliyachukua | B. alizichukuwa | C. aliyachukua | D. aliyachukuwa |
| 12. A. lenyewe | B. yenyewe | C. zenyewe | D. mwenyewe |
| 13. A. mwingine | B. mengine | C. mwengine | D. ingine |
| 14. A. wakaenda | B. mkaenda | C. tukaenda | D. nikaenda |
| 15. A. tuliporudishiwa | B. waliporudishiwa | C. tulirudishiwa | D. walirudishiwa |

Jibu maswali 16 hadi 30 kulingana na maagizo.

16. Kamilisha methali hii:-

Baada ya dhiki :-

- A. faraja
- B. furahia
- C. dhiki
- D. amani

17. Andika kwa tarakimu :- mia nne arobaini na tano.

- A. 455
- B. 454
- C. 445
- D. 45

SN: G123562 2016

KISWAHILI DARASA LA NNE

18. Maneno haya yako katika ngeli gani?

(hura, kipepeo, kioboto)

- A. I-ZI
- B. A-WA
- C. I-I
- D. LI-YA

19. Kanusha sentensi hii :-

Wewe umelima .

- A. Wewe hujalima
- B. Wewe hulimi
- C. Wewe hukulima.
- D. Wewe hulimangi.

20. Jibu maamkizi haya :-

Hajambo?

- A. Hamjambo
- B. Hatujambo
- C. Jambo
- D. Sijambo

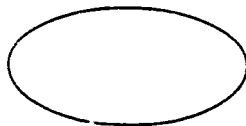

21. Jiko la makaa huitwa :-

- A. meko
- B. stovu
- C. seredani
- D. majiko

22. Jua huzama upande upi ?

- A. Mashariki
- B. Magharibi
- C. Kusini
- D. Kaskazini

23. Taja maumbo haya



- A. Mstatili, duaradufu
- B. Mraba, duara
- C. Duaradufu, mche
- D. Pia, mstatili

24. Makao ya mchwa ni kichuguu nayo ya ndege ni :-

- A. mzinga
- B. kizimba
- C. kiota
- D. zizi

25. Tumia -ote- :-

Nywele _____ zimekatwa.

- A. chote
- B. Zote
- C. Yote
- D. Lote

26. Tumia -enye-

Nyumba _____ nyufa zimebomolewa.

- A. chenye
- B. yenye
- C. mwenye
- D. zenye

27. Andika kwa wingi :-

Mfuko ule ulinunuliwa jana.

- A. Mifuko ile ilinunuliwa jana
- B. Mifuko zile zilinunuliwa jana
- C. Mfuko zile ilinunuliwa jana
- D. Mfuko ule ulinunuliwa jana

28. Tumia kiulizi -pi- kinachofaa

Tuuzi maembe _____ ?

- A. kipi
- B. zipi
- C. yapi
- D. ipi

29. Geuza sentensi ifuatayo iwe katika wakati uliopo:- Tuliimba wimbo mzuri.

- A. Tutaimba wimbo mzuri
- B. Tunaimba wimbo mzuri
- C. Tumeimba wimbo mzuri
- D. Tuliimba wimbo mzuri

30. Mtoto wa mjukuu ni:-

- A. kitukuu
- B. mjukuu
- C. kilembwe
- D. mjomba

Soma habari ifuatayo kisha ujibu maswali 31 hadi 40:

Mtukutu alikuwa akisomea katika shule ya Twasonga. Mtukutu alikuwa na mazoea ya kusumbua walimu na hata pia wanafunzi wenzake darasani. Yeye hakuwa akimaliza kazi za ziada kwa hivyo kila siku aliadhibiwa na walimu.

Darasani alipiga kelele tangu asubuhi hadi jioni. Yeye alikuwa domo kaya. Wanafunzi wenzake hawakupendezwa na tabia yake kamwe. Kila wakati alipofanya kosa watoto wenzake walimripoti kwa walimu.

Wazazi wake pia walilalamika kuhusu tabia ya mwana wao. Alipoachiwa kazi yoyote nyumbani hakuifanya.

31. Kijana anayetajwa katika taarifa hii anaitwaje?

- A. Twasonga
- B. Mtukutu
- C. Mtiifu
- D. Hatujaambiwa

32. Shuleni alikuwa na tabia ya:-

- A. kuwasumbua walimu
- B. kufanya kazi
- C. kuwafurahisha wenzake
- D. kuwaheshimu wote

33. Shule iliyotajwa kwenye makala haya ni:-

- A. Bidii
- B. Twasonga
- C. Twaenda
- D. Hekima

34. Kusema 'Mtukutu alikuwa domo kaya' ni kumaanisha alikuwa na :-

- A. mdomo mrefu
- B. maneno machache
- C. kunyamaza kwingi
- D. kupiga kelele sana

35. Tunaweza kusema kuwa mtukutu alikuwa na:-

- A. mwenye heshima
- B. na tabia njema
- C. na adabu
- D. mtiifu

36. Mtukutu :-

- A. hakumaliza kazi za ziada
- B. hakuenda shuleni
- C. alikuwa mtiifu
- D. alikuwa anapenda kazi ya ziada

37. Wazazi wa mtukutu walilalamika kuhusu :-

- A. kufaulu kwa mwana wao
- B. tabia ya mwana wao isiyopendeza
- C. kucheza kandanda kwa mwana wao
- D. kupenda masomo kwa mwana wao

38. Wanafunzi wenzake walimripoti Mtukutu wapi?

- A. Kwa walimu
- B. Kwa wazazi
- C. Kwa chifu
- D. Kwa majirani

39. Tabia ya Mtukutu inaonyesha :-

- A. mfano mzuri kwa wenzake
- B. mfano mbaya kwa wengine
- C. utiifu
- D. upole

40. Kifungu hiki kinaeleza kuhusu :-

- A. uzuri wa mtukutu
- B. watoto na walimu
- C. wazazi wa mtukutu
- D. tabia ya mtukutu
- D. kuogopa maji

Soma kifungu kifuatacho kisha ujibu maswali 41 hadi 50

Maji ni uhai, kila kiumbe duniani huwa kinategemea maji. Bila maji maisha ya binadamu na viumbe wengine yatakuwa hatarini.

Kwa hakika maji yana matumizi mengi ambayo hayawezi kuhesabika. Kwanza maji hutumiwa kwa kuogea. Bila maji, watu watakuwa wakinuka vibaya. Maji pia hutumiwa kwa kupikia, katika kilimo, kufua nguo, kujengea nyumba na katika matumizi mengi mengine.

Kwa hivyo, kila mmoja ni vyema ahifadhi maji. Kuna baadhi ya watu ambao huchafua maji bila kujali. Nawashauri nyote mshikane mikono ili muweze kuyahifadhi na kuyatunza maji.

41. Maji ni uhai yaani :-
A. tunaweza kuishi bila maji
B. hatuwezi kuishi bila maji
C. maji hayana faida
D. maji hayana maana
42. Bila maji maisha ya viumbe vyote yatakuwa:-
A. Hatarini
B. Mema
C. Sawa
D. Kamili
43. Mwandishi anaposema matumizi ya maji hayawezi kuhesabika inamaanisha:-
A. Matumizi machache
B. Matumizi madogo
C. Matumizi haba
D. Matumizi mengi
44. Ni yapi si matumizi ya maji hapa?
A. Kufua
B. Kupikia
C. Kuleta magonjwa
D. Kujengea nyumba
45. Makala yanasema kuwa ni vyema kila mtu:-
A. ahifadhi maji
B. aharibu maji
C. achafue maji
D. asitunze maji
46. Makala yanatuambia kuwa watu watakuwa wakinuka vibaya. Hili litatokana na:-
A. kuoga kila mara
B. kukosa maji ya kuogea
C. kuwa na maji mengi
D. kuogopa maji
47. Mwandishi amesema watu washikane mikono wafanye nini?
A. Waharibu maji
B. Wachafue maji
C. Wahifadhi na kutunza maji
D. Wachote maji
48. Maji hutegemewa na
A. Wanyama pekee
B. Binadamu pekee
C. Kila kiumbe
D. Miti pekee
49. Wanyama hutegemea maji kwa:-
A. kunywa na kupata chakula
B. kupikia
C. kuoga
D. kulima
50. Kichwa kinachofaa zaidi katika makala haya ni kipi :-
A. Maji na kilimo
B. Maji na wanyama
C. Kutumia maji kwa kuogea
D. Umuhimu wa maji



DOUBLE MERIT NATIONAL EXAMINATIONS
DARASA LA NNE MWAKA - 2016

SEHEMU YA PILI: INSHA

Muda: Dakika 40

SN:G123562


Jina

Shule

Andika insha ya kulisimua kuhusu:

DARASA LETU.

Blank lined area for writing the response.

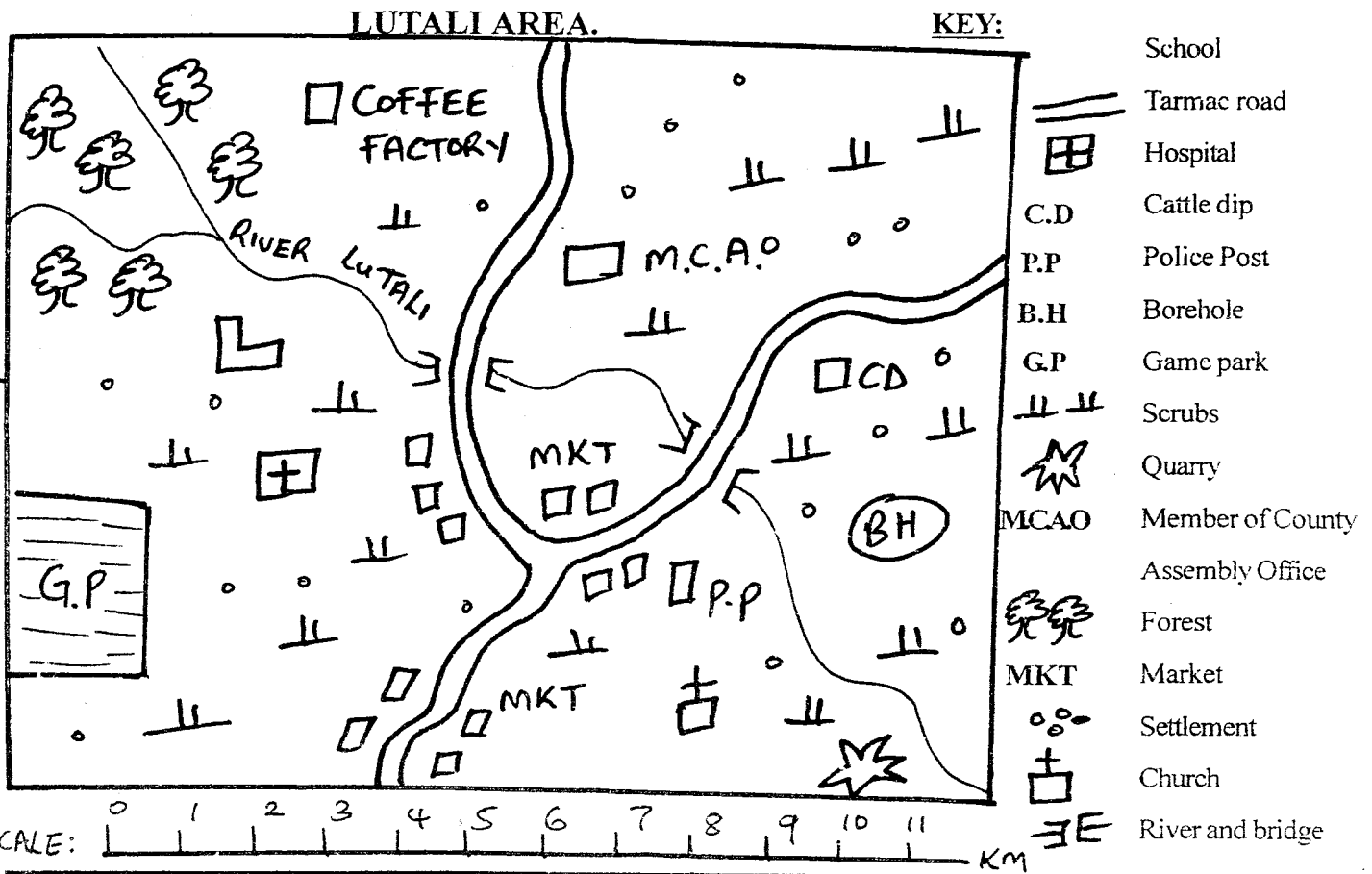




DOUBLE MERIT NATIONAL EXAMINATIONS STANDARD FOUR - 2016 SOCIAL STUDIES/C.R.E

SN:G123562

Time : 2 Hours 15 Min

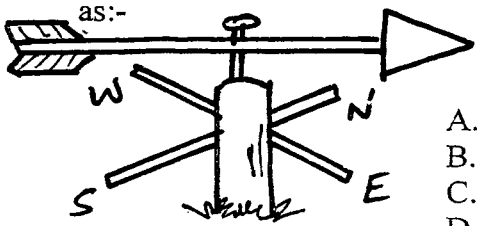


Study the map of Lutali area and answer questions 1 to 7

- The **main** economic activity in the area is :-
A. mining B. tourism
B. farming D. fishing
- What is the direction of the borehole from the hospital?
A. North B. West
C. East D. South
- The **most senior** politician in the area above is
A. county representative B. council
C. member of parliament D. governor
- Which of the following places is **likely** to be at the highest point in Lukali area?
A. Near the borehole
B. Near to church
C. Near the game park
D. Near the coffee factory

- River Lutali flows from:-
A. South West B. North East
C. North West D. South East
- Which of the following activities is **not** carried out in Lutali area?
A. Tourism B. Fishing
C. Farming D. Trading
- The people living in Lutali area are likely to be:-
A. Christians B. Muslims
C. Hindus D. Tradionalists
- The sun sets in the:-
A. West B. East
C. North D. South
- The national day that is celebrated on 1st June every year is
A. Mashujaa day B. Jamhuri day
C. Madaraka day D. Labour day

10. Thermometer is used to record:-
 A. wind B. temperature
 C. air D. sunshine
11. Population is the number of _____ in a given place.
 A. lives B. vegetation
 C. census D. people
12. Plateaus are also called:-
 A. mountains B. hills
 C. tablelands D. flat lands
13. The other name for the four main points of a compass is:-
 A. compass directions B. compass points
 C. directions D. cardinal points
14. Old beliefs that guides people to behave well are known as
 A. moral values B. vices
 C. immoral values D. respect
15. Mixed farming is the growing of crops and:-
 A. cutting of vegetation B. keeping of cattle
 C. keeping of bees D. keeping of fish
16. Which one of the following is a resource?
 A. Mining B. Transport
 C. Mineral D. Forestry
17. The third president of Kenya was:-
 A. Mwai Kibaki B. Uhuru Kenyatta
 C. Daniel arap Moi D. Daniel Moi
18. A traditional place of worship was called:-
 A. temple B. synagogue
 C. church D. shrine
19. Raw materials are changed into finished goods in:-
 A. an industry B. a shamba
 C. an airport D. a shop
20. Temperature is the hotness or _____ of a place.
 A. dryness B. coldness
 C. smoothness D. roughness
21. The carrying away of soil by water or wind is known as:-
 A. soil fertility B. soil texture
 C. soil layers D. soil erosion
22. Nuclear family is made up of:-
 A. children and relatives
 B. father, mother and grandparents
 C. children and parents
 D. parents and grandparents
23. Lakes that were not made by man are called:-
 A. natural lakes B. human made lakes
 C. permanent lakes D. seasonal lakes
24. Things that we do in order to get money are called
 A. resources B. economic activities
 C. natural activities D. human rights
25. Law breakers are arrested by:-
 A. Prison police B. Kenya navy
 C. C.I.D D. Kenya police
26. The main economic activity of Kenya is:-
 A. fishing B. mining
 C. agriculture D. trading
27. The animals that are found in the forest are called _____ animals.
 A. wild B. forest C. domestic D. beef
28. Which one of the following is not a traditional industry?
 A. Boat making B. Cement making
 C. pottery D. Sculpture
29. All citizens in a democratic country enjoy:-
 A. human life B. human power
 C. human rights D. human activities
30. Democracy is the rule by the:-
 A. rich B. youth
 C. elders D. people
31. Milk and mohair are from:-
 A. a cow B. a goat
 C. a sheep D. a pig
32. The condition of a place that changes after a short time in a day is called:-
 A. weather B. climate
 C. temperature D. pressure
33. The forests that are planted by people are called:-
 A. natural forests B. planted forests
 C. permanent forests D. mountain forests
34. Mediation is the process of solving:-
 A. a problem B. mathematics
 C. issues D. rights

35. All Kenyans below 18 years have no right to:-
A. live B. eat
C. vote D. elect
36. Kenya has three cities. Which one is not a city in Kenya?
A. Kisumu B. Nairobi
C. Mombasa D. Nakuru
37. Who among the following people was the first president of Kenya?
A. Daniel rap Moi B. Oginga odinga
C. Jomo Kenyatta D. Mwai Kibaki
38. Broilers are birds kept for:-
A. eggs B. meat
C. chicks D. tourism
39. The point where two rivers join to make a big river is called:
A. source B. delta
C. estuary D. confluence
40. The weather instrument shown below is known as:-
- 
41. The above instrument is used to measure:-
A. temperature B. air pressure
C. direction of wind D. rainfall
42. The senator represents ___ in the national government.
A. a county B. a country
C. a constituency D. a ward
43. A person who has all the right to belong to a particular country is known as a
A. a worker B. a broker C. a dealer D. a citizen
44. Every citizen in our country should **not** give or receive:-
A. blame B. right C. bribe D. power
45. Which one of the following is **not** a fishing ground in Kenya?
A. Malindi B. Ocean
C. Lakes D. Seas
46. Moral values are important because they
A. allow polygamy B. teach good behaviours
C. allow divorce D. allow polygamy
47. River Tana is the longest river in:-
A. Uganda B. Kenya
C. Somalia D. Nairobi

48. "Oh God of all creation is a phrase in which stanza of our national anthem?
A. Stanza 1 B. Stanza 2
C. Stanza 3 D. Stanza 4
49. Horticultural crops are fruits, flowers and:-
A. bananas B. potatoes
C. sugarcane D. vegetables
50. Kenyatta day has changed to:-
A. Labour day B. Boxing day
C. Mashujaa day D. Moi day
51. Irrigation is the name given to supplying of water to:-
A. cattle B. crops
C. houses D. industries
52. Cutting down of trees without replacing is called:
A. re-afforestation B. afforestation
C. agro-forestation D. deforestation
53. The Europeans are the Germans, British and
A. Africans B. Arabs
C. Italians D. Chinese
54. Corrupt people ask for ___ when serving in the government.
A. bribes B. food
C. money D. houses
55. Fish farming is the rearing of fish in dams and:-
A. lakes B. ponds
C. rivers D. oceans
56. The Kenya national security is divided into ___ groups.
A. five B. one C. 3 D. two
57. Which one of the following trees is found in the natural forests?
A. Cypress B. Cedar
C. Legumes D. Ebony
58. Measuring, recording and observing weather is known as:-
A. astronomy B. astrology
C. meteorology D. geology
59. In the Maasai community, young after initiation young men they became:-
A. warrior B. powerful C. strong D. parents
60. Equator passes in three of the following towns **except**:-
A. Nanyuki B. Machakos
C. Timboroa D. Nyahururu

CHRISTIAN RELIGIOUS EDUCATION

61. Adam and Eve were created by:-
A. God B. angels
C. Spirit D. the world
62. Lazarus was raised from the dead after staying in the tomb for how many days
A. 10 B. 3


- C. 4 D. 7
63. Which disciple of Jesus betrayed him for coins?
A. Peter B. Judas
C. John D. Matthew
64. Zacheus climbed a tree to see Jesus because he was
A. lame B. crippled
C. poor D. short
65. "I am who I am" God said these words to:-
A. Adam B. Moses
C. David D. Isaac
66. Matthew the disciple of Jesus was a:-
A. tax collector B. king
C. levite D. missionary
67. Those people who only think about themselves are said to be:-
A. kind B. proud
C. selfish D. experts
68. From the story of a Good Samaritan, the injured man was going to:-
A. Jerusalem B. Galilee
C. Judea D. Jericho
69. One great leader who visited Jesus at night was
A. Nicodemus B. Herod
C. Caiaphas D. Joseph
70. Naomi had two daughters in-law, who left her when she wanted to return home from Moab?
A. Ruth B. Esther
C. Orpah D. Rebecca
71. The day which the disciples received the holy spirit is known as:-
A. Exodus B. Pentecost
C. Last supper D. Passover
72. Jesus walked on water to show that he had
A. power over life B. power over death
C. power over water D. power over nature
73. John the baptist baptised ___ in river Jordan.
A. Jesus B. God
C. Angels D. Mary and Joseph
74. The day when God rested is known as
A. the holy day B. the Pentecost
C. the sabbath D. Easter
75. Among the children of Jacob, who was the first to move to Egypt?
A. Reuben B. Joseph
C. Benjamin D. Judah
76. Who helped Jesus to carry the cross?
A. Peter B. Judas
C. James D. Simon the cyrene
77. The wife of Elkanah who gave birth to Samuel was known as:-
A. Rachael B. Benjamin
C. Hannah D. Rahab
78. The following disciples of Jesus were fishermen **except**
A. Mathew B. James
C. John D. Peter
79. During the wedding at Cana, Jesus changed ___ into wine.
A. soda B. milk
C. oil D. water
80. Jesus stayed in the grave for ___ days
A. one B. three
C. four D. two
81. During the time of Noah, God destroyed the world with flood for ___ days
A. 10 B. 100
C. 40 D. 12
82. Which prophet prophesied the birth of Jesus?
A. Elijah B. Isaiah
C. Elisha D. Samuel
83. Jesus cleansed the temple at Jerusalem when he found people:-
A. crying
B. shouting
C. singing and dancing
D. selling and buying
84. Jesus performed the miracle on paralytic man to show that he had power to:-
A. heal B. pray
C. forgive D. raise people
85. "God with us" is the meaning of the name:-
A. Jesus B. Christ
C. Saviour D. Emmanuel
86. The first man to die in the world was:-
A. Abel B. Jesus
C. Adam D. Moses
87. According to the teaching of Jesus, the greatest commandment is
A. joy B. do not commit murder
C. love D. do not
88. Which of these events of Jesus showed Jesus defeated death?
A. Rising Lazarus B. His resurrection
C. Crucifixion D. Ascension
89. King Ahab and Jezebel were unfair to:-
A. David B. Samuel
C. Uriah D. Naboth
90. Which of these was **not** done by Jesus?
A. Being worshiper B. Healing the sick
C. Feeding the hungry D. Performing miracles



DOUBLE MERIT NATIONAL EXAMINATIONS STANDARD FOUR - YEAR 2016 SCIENCE

SN.G123562

Time : 1 hours 40 minutes

1. Which are the first teeth to develop ?
 - A. Canines
 - B. Incisors
 - C. Premolars
 - D. Molars
2. Which one of the following is **not** a method of weeding?
 - A. Digging out
 - B. Spraying
 - C. Harvesting
 - D. Mulching
3. Which one of the following is **not** a natural source of light?
 - A. Moon
 - B. Sun
 - C. Stars
 - D. Firefly
4. The weather sign below shown is:-

 - A. cloudy
 - B. windy
 - C. rainy
 - D. sunny
5. In AIDS "D" Stands for:-
 - A. Disease
 - B. Deficiency
 - C. Death
 - D. Drug
6. Which one of the following are **not** cash crop?
 - A. Beverage crops
 - B. Legumes
 - C. Fibre crops
 - D. Oil crops
7. The study of stars is called:-
 - A. meteorologists
 - B. meterology
 - C. starology
 - D. astronomy
8. The white clouds that resemble bundles of cotton wool are called:-
 - A. cumulus
 - B. cirrus
 - C. nimbus
 - D. stratufus
9. Cattle that are kept for meat are called:-
 - A. dairy
 - B. layers
 - C. beef
 - D. borans
10. The movement of animals in air is known as:-
 - A. swimming
 - B. walking
 - C. crawling
 - D. flying
11. The weeds which have hooks are:-
 - A. oxalis
 - B. black jack
 - C. pigweed
 - D. wandering jew

12. How many sets of teeth does a human being have?
 A. 2
 B. 4
 C. 20
 D. 32
13. Which one of the following is **not** a special sound?
 A. Baby playing
 B. Screaming
 C. Bell ringing
 D. Ambulance
14. Animals remove solid waste matter called:-
 A. sweat
 B. urine
 C. tears
 D. faeces
15. An insect has 3 body parts. Which one is **not** a part?
 A. Head
 B. Abdomen
 C. Spiracles
 D. thorax
16. Name the phase of the moon below?
-
- A. Crescent
 B. 1st quarter
 C. Full moon
 D. gibbous
17. How many teeth are shed off?
 A. 4
 B. 8
 C. 32
 D. 20
18. Three of the following are uses of wind. Which one is **not**?
 A. Felling trees
 B. Flying kites
 C. Windmill
 D. Sailing boats
19. What is the function of the tooth drawn below?
-
- A. Cutting and biting
 B. Grasping and tearing
 C. Chewing and crushing
 D. Holding and biting.
20. The falling out of milk teeth is:-
 A. deciduous teeth
 B. falling out
 C. milk teeth
 D. shedding off teeth
21. Three of the following are signs of bleeding gums **except** :-
 A. gums becoming red
 B. gums soften and swell
 C. normal gums
 D. gums starts bleeding
22. The following are requirements for good health of a person **except**:-
 A. food
 B. medical care
 C. not using latrines
 D. enough rest
23. Which one of the following is **not** a sensory organ?
 A. hand
 B. Eye
 C. Skin
 D. Tongue
24. People who **cannot** see at all are called:-
 A. deaf
 B. bumb
 C. lame
 D. blind

25. We go to see a ___ when we feel sick.
- teacher
 - doctor
 - police officer
 - parent
26. Coffee is made from the ___ of a coffee tree.
- leaves
 - berries
 - roots
 - flowers
27. The following are ways in which animals try to protect themselves. Which one is **not**?
- Coiling
 - Hiding in shells
 - Stinging
 - Sleeping
28. Which one of the following is **not** a source of water?
- Rain
 - Well
 - Tap
 - River
29. A std 3 pupil was blind-folded and a bell was rang from different positions. What were they trying to find?
- Directions of sound
 - Special sounds
 - How the bell behaves
 - Different times of ringing the bell
30. A pupil placed soil in a drinking glass and poured water in the drinking glass. What did he observe?
- Some smoke
 - Nothing
 - Different layers of soil and water
 - Bubbles of air
31. Which one of the following is **not** a simple tool?
- Spade
 - Engine
 - Bottle opener
 - Wheelbarrow
32. Which one of the following is **not** a personal item?
- Toothbrush
 - Toothpaste
 - Towel
 - Handkerchief
33. Which one of the following is **not** a use of plants to human beings?
- Source of food
 - Making clothes
 - Making medicine
 - Source of water
34. Three of the following are oil crops. Which one is **not**?
- Cocoa
 - Coconut
 - Groundnut
 - Corn
35. Which one of the following plants stores its food in the root?
- Cassava
 - Groundnuts
 - Irish potatoes
 - Onions
36. Which one of the following animals lives in water?
- Man
 - Cow
 - Duck
 - Fish


37. Three of the following activities are done during rainy season. Which one is **not**?
- Weeding
 - Harvesting
 - Pruning
 - Planting seeds
38. Three of the following are factors considered when classifying clouds. Which one is **not**?
- Colour
 - Appearance
 - Size
 - Height
39. What is the name given to the type of clouds which gives rise to rain?
- Nimbus
 - Cumulus
 - Cirrus
 - Stratus
40. One of the following is an industrial use of water. Which one is it?
- Swimming
 - Watering animals
 - Cleaning the house
 - Cooling machines
41. Which one of the following pairs of crops can be used to make mats and carpets?
- Sunflower and palm
 - Simsim and castor seed
 - Flax and cotton
 - Sisal and cocoa
42. Which among the following plants is a cereal crop?
- Peas
 - Beans
 - Maize
 - Groundnuts
43. Which one of the following cannot be used to make wheels?
- Metals
 - bottle top
 - clay
 - rubber
44. Meat from a sheep is called:-
- Pork
 - Beef
 - Mutton
 - Fillet
45. The following animals are found at home. Which one is **not**?
- Pigs
 - Cow
 - Chicken
 - Leopard
46. Three of the following are small animals. Which one is not?
- Grasshopper
 - Ostrich
 - Termite
 - Spider
47. Moving air is called:-
- rain
 - wind
 - spirit
 - calm
48. The following are parts of a plant. Which one is **not**?
- Flower
 - Fruit
 - Roots
 - Tree
49. Which one of the following is **not** a method of feeding in animals
- Suckling
 - Biting
 - Crawling
 - Pecking
50. Which one of the following **cannot** be seen at all at night?
- Sun
 - Clouds
 - Stars
 - Moon



DOUBLE MERIT NATIONAL EXAMINATIONS STANDARD FOUR - YEAR 2016 MATHEMATICS.

SN.G123562

Time : 2 Hours

- Write ninety seven thousand six hundred and thirty in symbols.
A. 97630
B. 976039
C. 9700639
D. 97000600309
- What is the place value of digit 6 in the number 64807?
A. Thousands
B. Tens
C. Ten thousands
D. Hundreds
- What is the total value of digit 7 in the number 4756?
A. 7
B. 70
C. 700
D. 7000
- Find the next number in the sequence below.
8, 13, 18, 23, ____
A. 30
B. 29
C. 26
D. 28
- What is 9 multiplied by 8?
A. 72
B. 71
C. 63
D. 81
- An even number plus an even number gives:-
A. odd number
B. even number
C. prime number
D. no answer
- Which one of the following numbers is not a multiple of 9?
A. 18
B. 27
C. 30
D. 36
- Add:-
 $\frac{3}{8} + \frac{2}{8} + \frac{1}{8}$
A. $\frac{6}{8}$
B. $\frac{5}{8}$
C. $\frac{6}{24}$
D. 6
- Which one of the following numbers is divisible by 2?
A. 25
B. 33
C. 26
D. 41
- What is the time shown on the clockface below?

A. Ten minutes past six
B. Ten minutes to six
C. Half past ten
D. Quarter to six
- Write the first four multiples of 6.
A. 6, 18, 24, 30
B. 6, 1, 2, 24, 48
C. 6, 12, 18, 24
D. 12, 24, 48, 96


12. Add 569 to 1563.
 A. 2032
 B. 2122
 C. 1132
 D. 2132

13. Find the missing number below:-

$$24 \times \square = 144$$

- A. 6
 B. 8
 C. 12
 D. 9

14. How many rectangles are there in the figure below?



- A. 3
 B. 4

15. Which of the following fractions is the smallest?

- A. $\frac{1}{2}$
 B. $\frac{1}{5}$
 C. $\frac{1}{8}$
 D. $\frac{1}{12}$

16. What is the difference between 872 and 489?

- A. 393
 B. 383
 C. 493
 D. 483

17. Which one is not an even number?

- A. 40
 B. 22
 C. 37
 D. 86

18. Which one of the following numbers is divisible by both 5 and 10?

- A. 65
 B. 70
 C. 125
 D. 122

19. Work out:-

$$3 \overline{) 81}$$

- A. 17
 B. 27
 C. 7
 D. 9

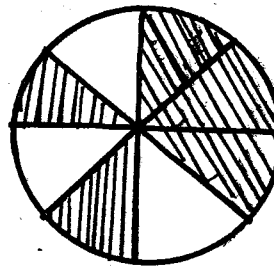
20. How many minutes are there in 3 hours?

- A. 180 minutes
 B. 120 minutes
 C. 603 minutes
 D. 150 minutes

21. Which one of the following months has the least number of days?

- A. January
 B. July
 C. August
 D. November

22. What fraction is unshaded in the figure below?

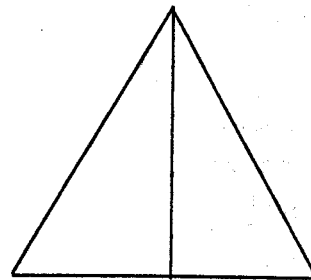


- A. $\frac{3}{5}$
 B. $\frac{3}{8}$
 C. $\frac{5}{8}$
 D. $\frac{1}{2}$

23. Mark had 108 goats. If he sold 29 goats, how many goats remained?

- A. 137
 B. 89
 C. 79
 D. 81

24. Which number comes just before 10000?
 A. 10001
 B. 9999
 C. 999
 D. 9000
25. Write three eighths in symbols.
 A. 38
 B. $\frac{3}{8}$
 C. $\frac{8}{3}$
 D. 83
26. Subtract 71 from 90.
 A. 19
 B. 21
 C. 20
 D. 18
27. Work out:- $13 \times 0 \times 28 =$
 A. 364
 B. 264
 C. 0
 D. 104
28. What is the approximate height of your classroom door?
 A. 200m
 B. 5m
 C. 1m
 D. 2m
29. How many sh 5 coins are there in a sh 200 note?
 A. 205
 B. 40
 C. 1000
 D. 195
30. $37 + 69 =$
 A. Even number
 B. Odd number
 C. Prime number
 D. Mixed number
31. It takes 20 minutes to boil an egg in a sufuria. How long does it take to boil 5 eggs in the same sufuria?
 A. 4 minutes
 B. 20 minutes
 C. 25 minutes
 D. 100 minutes
32. Add: $346 + 30 + 1560 =$
 A. 1936
 B. 1926
 C. 8020
 D. 7920
33. Work out:-
 $23 \times 4 =$
 A. 92
 B. 82
 C. 27
 D. 812
34. Which is the next multiple of 9 after 72?
 A. 63
 B. 81
 C. 90
 D. 99
35. Which one of the following is an odd number?
 A. 20
 B. 44
 C. 18
 D. 27
36. Work out:- $0.3 + 6 + 0.02$
 A. 0.92
 B. 0.092
 C. 6.5
 D. 6.32
37. There are 762 pupils in a school. If there are 344 boys, how many girls are there in the school?
 A. 344
 B. 1108
 C. 428
 D. 418
38. How many triangles are in the figure below?



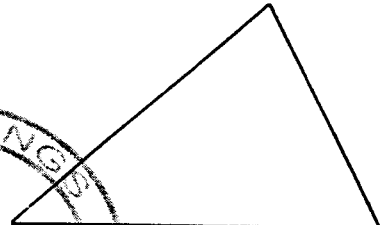
- A. 1
 B. 2
 C. 3
 D. 4

39. Which one is heavier, 10 kgs of salt or 10kgs of cotton wool?
 A. Stones
 B. Cotton wool
 C. They are equal
 D. It is imposible to tell
40. The cost of a pencil is sh 45. What is the cost of six pencils?
 A. Sh 240
 B. Sh 270
 C. Sh 180
 D. Sh 300
41. Thirty six sweets were shared equally among nine pupils. How many sweets did each pupil get?
 A. 27
 B. 45
 C. 4
 D. 324
42. How many groups of 10 are there in 180?
 A. 18
 B. 170
 C. 1800
 D. 190
43.

Sh	cts
25	50
+ 52	60

 A. Sh 77 110cts
 B. Sh 78 10cts
 C. Sh 77 100cts
 D. Sh 78 110cts
44. Work out:-

Weeks	days
4	5
+ 5	6

 A. 10 wks 1day
 B. 9wks 4days
 C. 10wks 4days
 D. 9wks 11days
45. Which one is not a factor of 16?
 A. 2
 B. 4
 C. 8
 D. 3
46. $15 \div \square = 3$
 A. 12
 B. 5
 C. 9
 D. 18
47. How many points of intersection are there in the figure below?

 A. 5
 B. 4
 C. 3
 D. 6
48. If 2016 is a leap year which will be the next leap year?
 A. 2018
 B. 2024
 C. 2020
 D. 2022
49. Which of the following consists of even numbers only?
 A. 12, 26, 35, 38
 B. 60, 78, 84, 89
 C. 28, 36, 42, 50
 D. 13, 27, 30, 33
50. How many months are there in 8 years?
 A. 16
 B. 48
 C. 240
 D. 96

DOUBLE MERIT NATIONAL EXAMINATIONS



STANDARD STD 4 2016 MARKING SCHEME

SN:G123562

MATHS	ENGLISH	KISWAHILI	SCIENCE	SOCIAL STUDIES
1. A 26. A	1. D 26. B	1. C 26. D	1. B 26. B	1. B 26. C 51. B 74. C
2. C 27. C	2. B 27. B	2. D 27. A	2. C 27. D	2. C 27. A 52. D 75. B
3. C 28. D	3. A 28. C	3. A 28. C	3. A 28. C	3. A 28. B 53. C 76. D
4. D 29. B	4. C 29. B	4. C 29. B	4. D 29. A	4. D 29. C 54. A 77. C
5. A 30. A	5. D 30. C	5. A 30. A	5. B 30. D	5. C 30. D 55. B 78. A
6. B 31. B	6. B 31. D	6. D 31. B	6. B 31. B	6. B 31. B 56. C 79. D
7. C 32. A	7. A 32. C	7. C 32. A	7. D 32. B	7. A 32. A 57. D 80. B
8. A 33. A	8. C 33. D	8. B 33. B	8. A 33. D	8. A 33. B 58. C 81. C
9. C 34. B	9. D 34. B	9. A 34. D	9. C 34. A	9. C 34. A 59. A 82. B
10. C 35. D	10. B 35. A	10. D 35. C	10. D 35. A	10. B 35. C 60. B 83. D
11. C 36. D	11. C 36. B	11. D 36. A	11. B 36. D	11. D 36. D C.RE 84. C
12. D 37. D	12. A 37. C	12. C 37. B	12. A 37. B	12. C 37. C 85. D
13. A 38. C	13. B 38. B	13. B 38. A	13. A 38. C	13. D 38. B 61. A 86. A
14. C 39. C	14. B 39. B	14. C 39. B	14. D 39. A	14. A 39. D 62. C 87. C
15. D 40. B	15. C 40. B	15. A 40. D	15. C 40. D	15. B 40. B 63. B 88. B
16. B 41. C	16. C 41. C	16. A 41. B	16. C 41. C	16. C 41. C 64. D 89. D
17. C 42. A	17. B 42. B	17. C 42. A	17. D 42. C	17. A 42. A 65. B 90. A
18. B 43. B	18. B 43. C	18. B 43. D	18. A 43. A	18. D 43. D 66. A
19. B 44. C	19. C 44. C	19. A 44. C	19. B 44. C	19. A 44. C 67. C
20. A 45. D	20. B 45. C	20. D 45. A	20. D 45. C	20. B 45. D 68. D
21. D 46. B	21. C 46. B	21. C 46. B	21. C 46. B	21. D 46. B 69. A
22. B 47. C	22. D 47. A	22. B 47. C	22. C 47. B	22. C 47. B 70. C
23. C 48. C	23. C 48. D	23. A 48. C	23. A 48. D	23. A 48. A 71. B
24. B 49. C	24. C 49. B	24. C 49. A	24. D 49. C	24. B 49. D 72. D
25. B 50. D	25. C 50. B	25. B 50. D	25. B 50. A	25. D 50. C 73. A

It is advisable for the teachers to confirm the marking scheme before proceeding

COMPOSITION MARKING SCHEME

MARKING CRITERIA

The composition will be assessed according to the following guidelines.

The maximum mark will be 40 and the minimum 01

Does the script show that the candidate can communicate accurately, fluently and imaginatively in English?

Accuracy (8 marks)

- (a) Correct tenses and agreement of verbs (4 marks) (b) Accurate use of vocabulary (8 marks)
(c) Following a sequence (4 marks) (d) Correct punctuations (4 marks)

Fluency (8 marks)

- (a) Words in the correct order (4 marks) (b) Sentence connected and paragraphs (4mks)
(b) Correct spelling (4 marks) (d) Ideas developed in logical sequence (4mks)

Imagination (8 marks)

- (a) Unusual but appropriate use of words and phrases (4 marks)
(b) Variety of structure (4 marks)