

GATUNDU DISTRICT EXAMINATION STANDARD FIVE – MID TERM II 2016

ENGLISH

Time: 1 hour 40 minutes

Fill in the blank spaces 1 to 15 using the best answers from the choices given

During the weekends 1 our mother 2 to the market and leaves 3 some work to do at home. As the first born I am the eldest and mother says I am 4 charge whenever she is away. My two brothers and three sisters 5 in doing the work. Both my brothers 6 sisters are obedient so they do not 7 when I ask them to do something.

One Saturday morning 8 mother left for the market as usual. We decided to 9 the work in order to finish 10 mother came back. I told my sisters to 11 the clothes, clean the house and cook lunch. My brothers 12 to cut the grass and trim the fence. Suddenly, a goat 13. It had lost its 14. "Who will look after the animals 15 "I asked.

- | A | B | C | D |
|------------|---------|-----------|-------------|
| 1. . | ? | ! | , |
| 2. went | go | goes | going |
| 3. us | them | we | as |
| 4. for | in | of | above |
| 5. helped | helping | helps | help |
| 6. or | but | and | also |
| 7. disobey | obey | obedience | disobedient |
| 8. . | ? | ? | ! |
| 9. chair | shear | sheer | share |
| 10. before | as | after | between |
| 11. watch | wash | watcher | washes |
| 12. is | was | were | are |
| 13. brayed | barked | mooed | bleated |
| 14. kid | lamb | kitten | calf |
| 15. . | ? | ! | ! |

For question 16-17, choose the plural of the underlined word.

16. The furniture that father bought is new.
 A. funitures B. furnitures
 C. furniture D. funictures

17. Children like eating juicy mango in the forest.

- A. Mangoses B. Magos
 C. Mango D. Mangoes

PRINTED BY HIGHFLYER SERIES Tel: 0723 499860

**Funded By: C.D.F. Gatundu South Constituency,
Patron Hon. Moses Kuria, Mp Gatundu South.**

For question 18-19 write the opposite of the underlined word.

18. My new pen is very dear.

- A. Expensive B. Strong
C. Cheap D. Valueless

19. The departure time of the train is eight o'clock.

- A. Arrival B. Arrive
C. Leave D. Going

For number 20-21, pick out the abstract nouns

20. Wanjiku is very proud of her beauty.

- A. very B. beauty
C. proud D. liar

21. Your laziness will put you into trouble.

- A. trouble B. put
C. your D. laziness

Choose the correct question tag in number

22-23

22. He was feeling hungry.

- A. was he? B. isn't it?
C. wasn't he? D. isn't me?

23. I am not late.

- A. am i? B. aren't i?
C. isn't it D. isn't me?

Choose the correct preposition to fill in the blank spaces

24. The girl was proud _____ her victory.

- A. with B. of
C. from D. to

25. Do not write _____ the desk.

- A. for B. of
C. with D. on

For question 26 - 27 choose the correct order of adjectives

26. Joshua lost her _____ gumboots.

- A. Old, green, rubber
B. Old, rubber, green
C. Rubber, old, green
D. Green, rubber, old

27. The man made a _____ aeroplane for the child.

- A. Small, paper, green
B. Green, paper, small
C. Small, green, paper
D. Green, small, paper

Fill in the blank spaces with the best alternative

28. Peter is the _____ runner in our school.

- A. more fast B. fastest
C. fast D. faster

29. She cooks _____ than her mother.

- A. good B. best
C. bad D. better

For question 30 choose the correct answer to fill in the blank

30. The mother of your mother is your

- _____ ?
A. Grandmother
B. Sister in law
C. Step mother
D. Mother

Read the following passage and then answer questions 31 to 40

Long time ago, the Hare and the Hyena were good friends. The Hare was known for his intelligence and wisdom. Every evening, grandfather Hare spent his time telling the young ones about their culture and their clever great grandfathers. The Hyena on the other hand did not have any great stories to tell his children. This made him very sad.

One day the Lion got ill. When the other animals learnt about this, they all went to visit him. However, the Hare did not visit the King. Instead, he spent the whole day on his farm working hard to get food for his family. He worked from cock crow to sunset. The animals were very sad to see their King very sick. They travelled far and wide looking for medicine.

The Hyena became very jealous of the Hare. He reported to the King that Hare had not gone to see him while he was sick. When Hare was brought to the King, he was asked why he had not gone to visit the King. The clever Hare told the King that he had been busy searching for the cure for the King's illness. He claimed he had roamed the whole forest looking for the cure. This

made the King happy. He asked him to go on with his search. Two weeks later the Hare came back claiming he had found the cure. He told the King that he needed to take soup from the back legs of the Hyena. Immediately the King sent his servant to cut the back legs of the Hyena. This left the Hyena in a lot of pain. That is why even today, the Hyena still limps.

31. According to the passage the Hare was known for
- A. Being cunning
 - B. His intelligence
 - C. His greed
 - D. A friend of Hyena
32. What would grandfather Hare do every evening?
- A. Teach the young ones to be cunning
 - B. Tell them dull stories
 - C. Teach his grandchildren about their clever grandfathers
 - D. Teaching them to be kind
33. What made the Hyena sad?
- A. He did not have children
 - B. Hare did not teach Hyena's children
 - C. He had no teachings for Hare's children
 - D. He had no stories to tell his children
34. Why didn't Hare visit the lion?
- A. Hare's children were sick
 - B. He prepared to work on his farm
 - C. He was searching for the cure
 - D. He did not know that he was sick
35. When the King was sick the animals did the following except _____.
- A. Brought the medicine that cured him
 - B. Visited him
 - C. Searched for medicine
 - D. Travelled far and wide to look for medicine
36. Why did the Hyena report the Hare?
- A. He wanted him to suffer
 - B. He wanted him to be punished
 - C. He was jealous of him
 - D. He wanted him to stop lying
37. What excuse did the Hare give for not visiting the King?
- A. He did not know
 - B. He was searching for his children's food
 - C. He had to dig his shamba
 - D. He was searching for medicine to cure the King.
38. What was the cure according to the Hare?
- A. Herbs from the forest
 - B. The back leg of the Hyena
 - C. The limping Hyena
 - D. Products from his farm
39. Why were the Hyena's back legs cut off?
- A. The Hare had claimed its soup was the cure of the King's illness
 - B. They wanted the Hyena to suffer
 - C. It was the cure for King
 - D. The Hare ordered the servants to cut them
40. The best summary for this passage is _____.
- A. The ungrateful Hyena
 - B. The sick Lion
 - C. The clever Hare
 - D. The clever Hyena

Read the passage below and answer questions 41 – 50

Mercy was a small girl of dark complexion. Some people called her black beauty. Once she picked up money that someone had lost, instead of spending it on sweet and ice cream, she gave it to her teacher. This made her schoolmates think it was also foolish.

One Friday evening, Mercy arrived home from school feeling hungry. She quickly dropped her school bag, dashed into the kitchen and poured herself a cup of tea, buttered some bread and began to eat it. Just then, her mother came into the kitchen and told her that her grandmother was very sick and she and their father were going to see her that night. Mercy

got excited thinking that she too would go along but her mother told her she would remain to take care of her brother Paul and Sister Judy.

After dinner, Mercy gently tucked Paul and Judy into bed and checked the windows and doors to confirm that they were locked. She was too scared to sleep so she walked around the house checking that nobody was hiding under the beds, chairs and tables. After doing a thorough search of the house, she sat up to watch TV because she had decided she would wait until her parents came back.

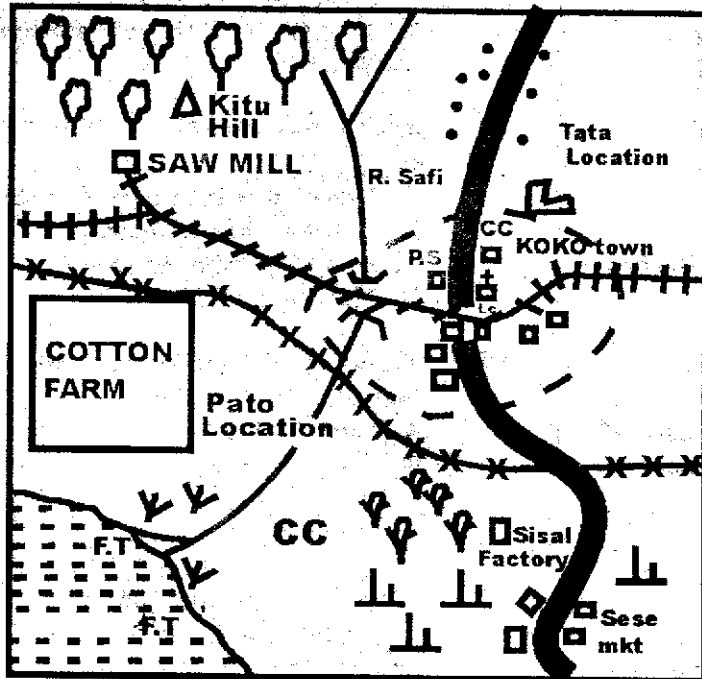
Suddenly she heard the sound of footsteps outside the house. She quickly switched off television and ran to the window from where she heard the footsteps and peeped through a small opening in the curtain. Then she saw three men dressed in black and wearing masks. They were carrying weapons that she could not identify and were talking amongst themselves, pointing towards the house. Mercy was so frightened. She was trembling. She quickly ran to the phone and dialed the police hotline number which she had memorized.

41. What was the name given to Mercy by some people?
- A. Handsome girl
 - B. Dark girl
 - C. Foolish
 - D. Black beauty
42. What did Mercy do after she picked up money lost by someone?
- A. She bought sweet and ice cream
 - B. She took it to her mother
 - C. She gave it to her teacher
 - D. She kept it in her bag
43. The word dashed has been underlined in the passage. What does it mean?
- A. Run
 - B. Closed
 - C. Tip toed
 - D. Opened
44. What was the number of Mercy's family?
- A. Six
 - B. Five
 - C. Four
 - D. Three
45. Who went to sleep first on Friday evening?
- A. Mercy's parents
 - B. Judy and Mercy
 - C. Paul and Mercy
 - D. Paul and Judy
46. It is true to say that _____.
- A. Mercy is a courageous girl
 - B. Mercy is a brave girl
 - C. Mercy is a coward girl
 - D. Mercy is a foolish girl
47. Whom did Mercy's parents went to see that evening?
- A. Some people
 - B. Her grandfather
 - C. Her grandmother
 - D. Her uncle
48. What kind of weapons were the three men that Mercy saw carrying?
- A. Guns
 - B. We are not told
 - C. Stones
 - D. Pangas
49. When Mercy saw the men pointing their house. What did she do?
- A. Asked for help from neighbours
 - B. Started crying loudly
 - C. Called her brother and sister
 - D. Called the police through the phone
50. What would be the best title for this passage _____?
- A. The night Mercy shall never forget
 - B. The sick grandmother
 - C. The black beauty
 - D. The foolish girl

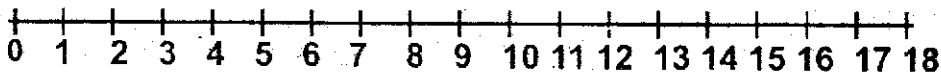
GATUNDU DISTRICT EXAMINATION STANDARD FIVE MID TERM II - 2016 SOCIAL STUDIES & CRE

Time: 2 hours 15 minutes

FURAHA AREA



SCALE



KEY

CC — Chief's camp	⊞ — Church
🌳 — Forest	—x—x—x— — Locational boundary
— — Tarmac road	••• — Settlements
P.S — Police station	⊞ — Sch
mkt — Market	🌿 — Sisal farm
🌿 — Papyrus seeds	⊞ — Scrubs
—x—x—x— — Railway	
SM — Saw mill	




PRINTED BY HIGHFLYER SERIES Tel: 0723 499860

**Funded By: C.D.F. Gatundu South Constituency,
Patron Hon. Moses Kuria, Mp Gatundu South.**

1. The natural vegetation found around Sese market _____
A. Forest B. papyrus roads
C. scrubs D. Scattered trees
2. What is the direction of the school from the cotton farm
A. South East B. North East
C. South West D. North West
3. Which of the following economic activities is not carried out in Furaha area _____
A. saw milling B. trading
C. fishing D. mining
4. Furaha area is administered by
A. DO B. Chief
C. Governor D. DC
5. The railway line on the map is used to transport _____
A. Cotton B. timber
C. sisal D. Tourists
6. The climate of the southern part of Furaha area can be described as
A. Hot and wet
B. Cool and wet
C. Hot and dry
D. Cold and wet
7. What is the evidence that the area around Kitu hill receives high rainfall
A. There is a saw mill
B. There is a hill
C. There is a railway line
D. There is a forest
8. The white colour in our national flag symbolizes
A. Blood shed by freedom fighters
B. Our vegetation
C. The colour of Kenyan
D. Peace in our country
9. Which is not an early form of communication?
A. Messengers
B. Ululations
C. Media
D. Blowing horns
10. Which of the following industries is a service industry
A. Electronic assembling
B. Tea processing
C. Glass making
D. Tyre repairing
11. Which one is not true about shifting cultivation?
A. It is also known as slash and burn
B. Farmers practised crop rotation
C. Small portions of land were cultivated at a time
D. It was a form of subsistence farming
12. Acacia and baobab are mainly found in _____
A. Desert and semi desert vegetation
B. Tropical climate region
C. Equatorial climatic region
D. Mountain climate region
13. Which of the following lakes is not found in the rift valley
A. Lake Baringo
B. Lake Victoria
C. Lake Nakuru
D. Lake Magadi
14. Which one of the following factors has contributed to the growth of population in Magadi town?
A. Farming B. mining
C. ranching D. fishing
15. The following are descriptions about a certain town in Kenya
i. It is located in Kano plains
ii. It has railway terminal
iii. It is the third largest city in Kenya
The town described above is _____
A. Thika B. Mombasa
C. Kisumu D. Eldoret
16. Which of the following is not a problem facing dairy farming in Kenya
A. The cost of transporting dairy product is high
B. Mismanagement of cooperative societies


- C. Inadequate facilities for cooling and storing milk at collecting centres.
- D. Exportation of dairy products earns revenue

Use the diagram to answer questions 17 and 18



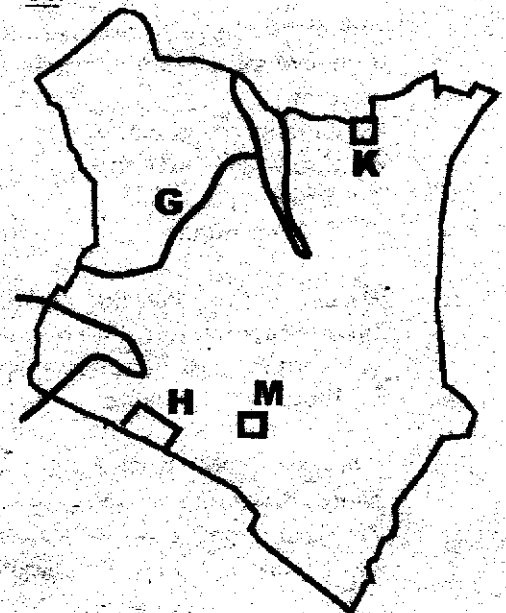
17. The method of fishing shown above is known as
 - A. Trawling
 - B. Purse-seining
 - C. Net drifting
 - D. Long lining
18. The method of fishing shown above is used to catch fish in
 - A. Rivers
 - B. oceans
 - C. ponds
 - D. dams
19. Which of the following forests found in Kenya is not a planted forest
 - A. Londiani forest
 - B. Arabuko Sokoke forest
 - C. Turbo forest
 - D. Burnt forest
20. The Olkaria Geothermal power station is found in
 - A. Nairobi
 - B. Mombasa
 - C. Naivasha
 - D. Machakos
21. Which of the following mountain has a beautiful snow covering on its peak
 - A. Mt Elgon
 - B. Mt Kenya
 - C. Mt Marsabit
 - D. Mt Longonot
22. Which of the following is not a benefit of tourism in Kenya?
 - A. Low earnings by potential tourists
 - B. Creates market for local produced goods
 - C. Helps to promote good relations with other countries
 - D. Land is well utilized

23.



- The above instrument is used for measuring
- A. Speed of wind
 - B. Amount of rainfall
 - C. Temperature
 - D. Strength of wind
24. The above weather instrument is known as
 - A. Wind vane
 - B. anemometer
 - C. windsock
 - D. thermometer
 25. Which of the following statements does not refer to international trade
 - A. Kenya imports goods from Uganda
 - B. A trader in Mombasa sells her goods to a trader in Kakamega
 - C. Uganda export goods to Kenya
 - D. Somalia sells her goods to Kenya

Use the map to answer question 27 - 30



26. The town marked K on the map is known as
 A. Mandera B. Moyale
 C. Marsabit D. Garissa
27. The national reserve marked H on the map is known as
 A. Amboselli
 B. Tsavo east national park
 C. Maasai Mara
 D. Ruma national park
28. The mineral mined on the area marked M on the map is _____
 A. Fluorapar
 B. Limestone
 C. Soda ash
 D. Diatomite
29. The river marked G drains in to lake Turkana. It is known as
 A. R Ewaso Nyiro
 B. R Nyando
 C. R Tana
 D. R Turkwel
30. The practice whereby some people are allowed to keep wild animals on their farm for purposes of selling wildlife products is know as
 A. Game trophies
 B. Anti poaching
 C. Game sanctuaries
 D. Game ranching
31. Which of the following raw materials is correctly matched with its final product
 A. Limestone- glass
 B. Crude oil - lubricants
 C. Steel -glass
 D. Textile- paper
32. Which of the following things cannot have its symbol on the key of a map?
 A. Margin B. mountain peak
 C. River D. Road
33. Three of the following are plains found in Kenya except
 A. Kano plain B. Lotikipi
 C. Chalbi D. Bilesha
34. The following are characteristics of a certain relief region in Kenya
 i. There are small hills within the area
 ii. It borders Indian ocean
 iii. The height of the land rises from the sea level
- The relief region describes about is
 A. Coastal region B. plateaus
 C. lake basin D. rift valley
35. Which of the following types of soil mostly found in Njewa Tebere irrigation scheme
 A. Volcanic soil
 B. Black cotton soil
 C. Alluvial soil
 D. Sandy soil
36. Which of the following is an economic use of soil
 A. Making shrines and altars
 B. Decorating traditional houses
 C. Making bricks
 D. Smearing mud on the body
37. Keeping large numbers of animals which cannot be supported by available land is known as
 A. Ranching
 B. Arable farming
 C. Stall grazing
 D. Overstocking
38. Which of the following communities belong to the plains nilotes?
 A. Samburu B. Marakwet
 C. Giriama D. Gabbra
39. Which of the following minerals is correctly matched with the areas where it is mined?
 A. Diatomite - Kimwarere
 B. Limestone- Kerio Valley
 C. Salt - Ngomeni
 D. Soda ash- Kariandusi
40. Which of the following species of fish are found in sea fishing
 A. Dagaa B. mudfish
 C. Trout D. Parrot fish

41. National parks are controlled directly by the government through a body known as _____
 A. Municipal Council
 B. Kenya Wildlife Service
 C. Kenya Revenue Authority
 D. HABITAT
42. Which one of the following is a form of child abuse
 A. Cleaning the school compound
 B. Attending lessons in school
 C. Employing the child
 D. Doing homework at home
43. The second prime minister of Kenya was _____
 A. Jomo Kenyatta
 B. Mwai Kibaki
 C. Raila Odinga
 D. William ruto
44. Planting of new trees to replace the ones cut down is called _____
 A. Destructions
 B. afforestation
 C. deforestation
 D. re-afforestation
45. Which of the following features is commonly found in Nyika plateau
 A. Escarpments
 B. inselbergs
 C. mountains
 D. salty lakes
46. Which of the following was mainly acquired through apprenticeship
 A. Iron-smelting skills
 B. Collecting fire wood
 C. Hunting
 D. Nurturing babies
47. Cultural artifacts are important mainly because of the following except
 A. They tell the history of the community
 B. Help future generations to learn about modern education system
 C. Tells about the culture of our ancestors
 D. Helps to know of our ancestors
48. A child whose mother is a citizen of Kenya and whose father is a citizen of another country become a citizen by _____
 A. Registration
 B. adoption
 C. Birth
 D. Naturalization
49. Which one of the following colours is used to represent vegetation in maps?
 A. Black
 B. White
 C. Green
 D. Blue
50. Population census in Kenya is held after every _____ years
 A. Four
 B. ten
 C. five
 D. twenty
51. The road sign below indicates



- A. Round about ahead
 B. bumps ahead
 C. danger ahead
 D. turn left
52. The main tourist attraction in Kenya is _____
 A. mountains
 B. hot springs
 C. sand beaches
 D. wildlife
53. Members of the county assembly are elected to represent an areas called _____
 A. constituency
 B. ward
 C. county
 D. country
54. which of the following is not responsibility of a Kenya citizen
 A. Paying taxes?
 B. Take care of the environment
 C. Taking bribes
 D. Being loyal and patriotic

55. Before the coming of Europeans Mijikenda were ruled by _____
 A. clan heads
 B. council of elders
 C. chiefs
 D. kings
56. Which of the following lakes in Kenya is famous for flamingoes
 A. Lake Magadi
 B. Lake Nakuru
 C. Lake Naivasha
 D. Lake Bogoria
57. The largest sea port in Kenya is
 A. Nairobi B. Kisumu
 C. Mombasa D. Nakuru
58. Which of the following international bodies headquarter is not found in Nairobi
 A. United Nations
 B. UN-HABITAT
 C. United Nations Environment programme
 D. Africa Medical Research Foundation
59. According to the new constitution Kenya is made up of _____ county governments.
 A. 68 B. 47
 C. 50 D. 192
60. Cotton is processed in a _____
 A. Combine harvester
 B. Textile factory
 C. Green house
 D. Ginnery
- C.R.E**
61. On the _____ day God rested after creation.
 A. 1st day B. Seventh
 C. sixty D. Third
62. God wants us to use our bodies properly except?
 A. Doing the right things
 B. Using our time wisely
 C. Leading a selfish life.
 D. Being strong in our faith
63. Which one of the following is a good emotion
 A. Fear
 B. Hate
 C. Joy
 D. anger
64. Irresponsible sexual behaviour leads to the following except
 A. Self respect
 B. Dropping out of school
 C. Contracting sexually transmitted diseases.
 D. Getting HIV/AIDs
65. Which one of the following was not offered by the devil to Jesus?
 A. Earthly powers
 B. Riches
 C. Changing stone to bread
 D. Eternal life
66. Which one of the following is the day of the Lord?
 A. Pentecost
 B. Sabbath
 C. Christmas
 D. Good Friday
67. Which one of the following commandments has a promise?
 A. Seventh
 B. Second
 C. Eighth
 D. fifth
68. Why should a Christian not steal?
 A. Be satisfied with what we have
 B. One becomes rich
 C. Stealing is forbidden by God
 D. Respect for other people's property.
69. Which one of the following is a similarity between the new and the old covenant?
 A. The covenant to be written in people's hearts.
 B. People to dedicate themselves to God.
 C. Blood of animals to be used in sealing the covenant
 D. Blood of Jesus used in sealing the covenant.

70. The following are important beliefs of the Christian church except?
 A. I believe in God
 B. The holy catholic church
 C. Deliver us from evil
 D. Communion of saints
71. The word catholic means ___?
 A. Jewish
 B. Universal
 C. Roman
 D. Christians
72. Which one of the following does not show true witness?
 A. Confesses Jesus Christ
 B. Lives a holy life
 C. Does good to others
 D. Pretend to be a friend of Jesus
73. True happiness is not found when we
 A. Repent
 B. Humble ourselves before God
 C. Mourn
 D. Get maternal wealth
74. The story of the good Samaritan teaches us that a good neighbour is _____
 A. Anyone who needs your help
 B. Your greatest friend
 C. Anyone next to your home
 D. Your desk mate
75. How many jars of water did Jesus ask for during the wedding at Cana of Galilee
 A. Seven B. Twelve
 C. six D. ten
76. Which one of the following shows new life in Christianity
 A. Eucharist
 B. Baptism
 C. Singing in the choir
 D. Going to church
77. Moses helped in sealing the covenant between people and God at _____
 A. Mt. Moriah
 B. Mt. Horeb
 C. Mt. Camel
 D. Mt. Sinai
78. Who prophesied the new covenant which was to be written in people's hearts?
 A. Isaiah
 B. Jeremiah
 C. Moses
 D. Joel
79. Which one of the following miracles was not performed by Jesus?
 A. Feeding the 5,000
 B. Changing water into wine
 C. Calming the storm
 D. Healing the lame man at the beautiful gate.
80. Which one of the following is not a challenge of living a new life?
 A. Singing in church
 B. Facing temptations
 C. Experiencing betrayal
 D. Serving God under difficult conditions
81. Which one of the following is not a special ability given by the Holy Spirit?
 A. Kindness
 B. Healing
 C. Faith
 D. Knowledge
82. The woman with the problem of bleeding was healed because of having the gift of ____
 A. Healing
 B. Faith
 C. Working miracles
 D. Wisdom
83. Which one of the following is not quality of a good friend?
 A. Being at peace with others
 B. Having self control
 C. Showing envy
 D. Seeing good in others
84. Who had a dream at Bethel about a stairway from earth to heaven?
 A. Joseph
 B. David
 C. Isaac
 D. Jacob

85. The Maasai called their God
A. Asis
B. Nyasaye
C. Enkai
D. Were
86. In which places did the African traditional society hold their prayers
A. Church
B. Shrines
C. Temple
D. Mosques
87. Which one of the following Christian communities was started by missionaries?
A. The seventh Day Adventist
B. The Akorino church
C. Africa Israel Church Nineveh
D. African Divine church
88. The following are ways in which children are exploited through work except _____
A. Denial to attend school
B. Physical and verbal abuse
C. Work for long hours
D. Given time to play
89. As John was walking home from school he found a one hundred shilling note on the path. What should he do?
A. Spend the money
B. Give the money to his parents
C. Share among his friends
D. Burn the money
90. Jane misplaced Peter's pencil. What advice should you give to Peter?
A. Insult peter.
B. Fight with peter
C. Report to the teacher
D. Forgive Jane

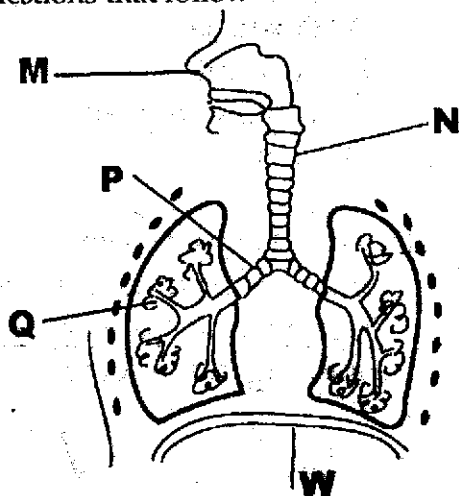
GATUNDU DISTRICT EXAMINATION

STANDARD FIVE – MID TERM II 2016

SCIENCE

Time: 1 hour 40 minutes

1. The diagram below shows the breathing system. Use it to answer questions that follow



Which part separates the abdomen and the chest cavity?

- A. W
 - B. Q
 - C. M
 - D. P
2. Warming, cleaning and moistening is done in the part marked
- A. N
 - B. M
 - C. Q
 - D. P

3. Which one of the following is a liquid fuel?

- A. Petroleum gas
- B. Paraffin
- C. Coal gas
- D. Biogas

4. Three of the following plants can provide fibre except _____

- A. Cotton
- B. sisal
- C. Maize
- D. Palm tree

5. Which one of the following food crops is a stem tuber?

- A. Cassava
- B. Arrowroot
- C. Irish potato
- D. sweet potato

6. Which one of the following plants produces flowers which are green and are found around the plant head

- A. Sodom apple
- B. pigweed
- C. Double thorn
- D. Stinging nettle



PRINTED BY HIGHFLYER SERIES Tel: 0723 499860

Funded By: C.D.F. Gatundu South Constituency,

Patron: Hon. Moses Kuria, MP Gatundu South.

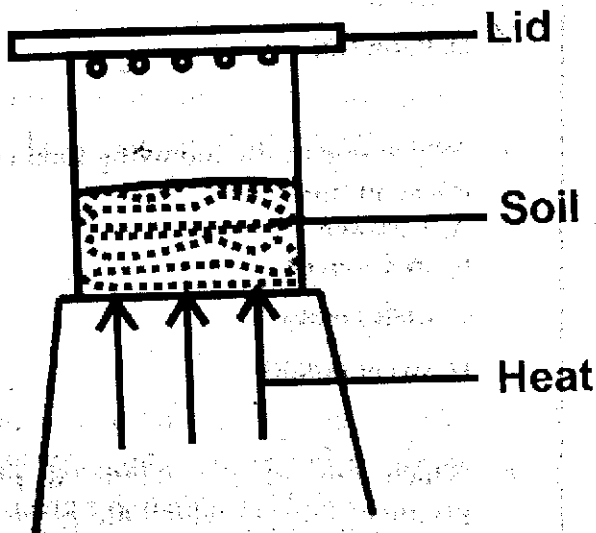
7. Which one of the following is a poisonous weed

- A. Black jack
- B. Oxalis
- C. Thorn apple
- D. Wandering jew

8. Which of the following groups only consists of non flowering plants

- A. Cactus, cassava, carrot
- B. Moss, kale, cedar
- C. Sisal, sugarcane, onion
- D. Cedar, pine, cypress

9. In a certain investigation, std 4 pupils set the experiment as shown below. This was to find _____



- A. Living things in the soil
- B. Water in the soil
- C. Humus in the soil
- D. Air in the soil

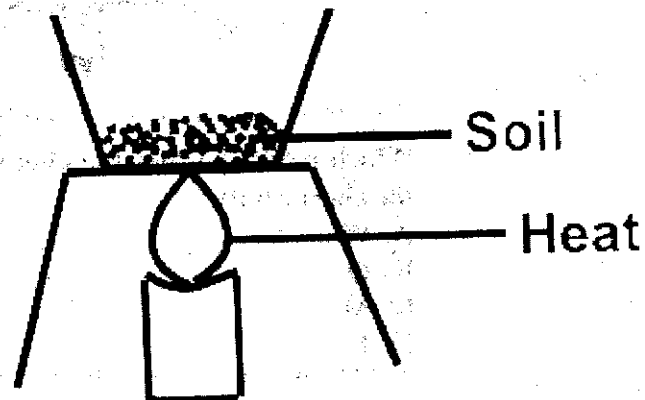
10. Standard four pupils used the following materials to find out whether soil contains air

- i. Plastic jar
- ii. Wet soil
- iii. Water in a glass
- iv. A tin

They did not observe bubbles because they used

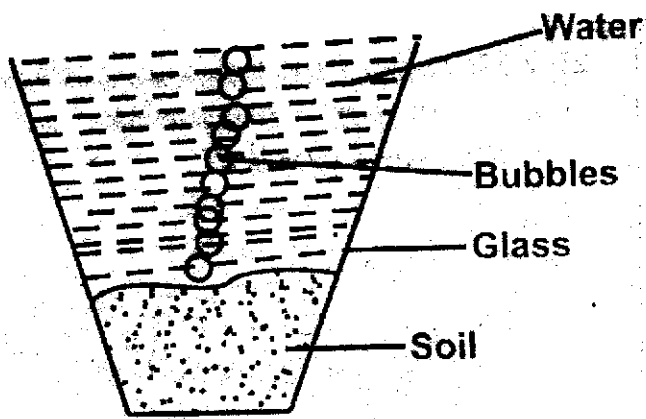
- A. Plastic jar
- B. Wet soil
- C. water in a glass
- D. A tin

11. The diagram below shows a set up used by standard 4 pupils to show presence of water in the soil. What is missing in the set up



- A. Strong source of heat
- B. A lid
- C. Enough soil
- D. Wet soil

12. In a certain investigation on soil, pupils poured water on soil as shown below. This was to find out the presence of _____




- A. Living things in the soil
- B. Water in the soil
- C. Humus in the soil
- D. Air in the soil

13. Which one of the following is the use of fats and oil in our body?

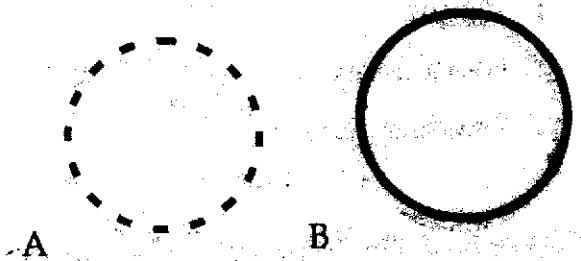
- A. Provides protection
- B. Builds the body
- C. Provide energy
- D. Makes us fat

14. The tooth drawn below is used for



- A. Biting food
- B. Crushing food
- C. Chewing food
- D. Tearing food

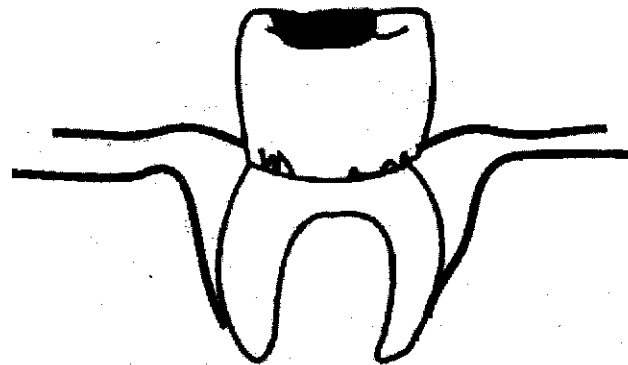
15. Which diagram below represents a crescent of the moon?



16. All the following materials are needed in the construction of a rain gauge EXCEPT

- A. Bottle
- B. Funnel
- C. Straw
- D. Scale

17. The tooth problem shown in the diagram below is likely to be




- A. Cavities
- B. Plaque
- C. Tooth decay
- D. Bleeding gum

18. Which of the following is a source of vitamins?

- A. Tuber crops
- B. Termites
- C. Tomatoes
- D. Mutton

19. The diagram below shows a type of a cloud _____



The correct name of the cloud is


- A. Cirrus
- B. Cumulus
- C. Nimbus
- D. Stratus

20. Which one of the following is wrongly matched with its movement


A	Snake	Slithering
B	Birds	Flying
C	Centipede	Crawling
D	Dog	Hopping

21. Which one of the following tools does not require sharpening as a maintenance practice?


A.



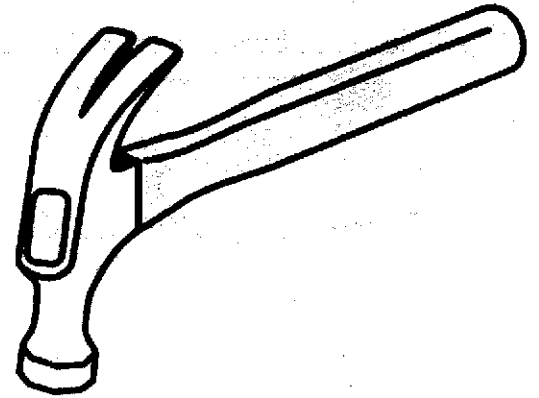
B.



C.



D.



22. Which one of the following animals is correctly matched with what it feeds on?

A	Butterflies	Feed on rotting materials
B	Rats	Suck blood
C	House flies	Suck nectar
D	Grasshoppers	Chew grass

23. Which one of the following are warm blooded animals?

- A. Reptiles and fish
- B. Mammals and amphibians
- C. Birds and reptiles
- D. Mammals and birds

24. Which one of the following animals does not lay eggs?

- A. Spiny ant eater
- B. Shark
- C. Whale
- D. Frog


25. Bees, earthworms, ticks, snail are all examples of

- A. Invertebrates
- B. Vertebrates
- C. Warm blooded animals
- D. Cold blooded animals

26. In which part of the alimentary canal does food mix with bile?

- A. Stomach
- B. Rectum
- C. Duodenum
- D. Ileum

27. The type of tooth drawn below is used for _____



- A. Biting and crushing
- B. Tearing and chewing

- C. Crushing and tearing
- D. Grinding and chewing

28. Digestion of carbohydrates, fats and proteins is completed in the

- A. Mouth
- B. Stomach
- C. Colon
- D. Small intestine

29. Which one of the following tools is not correctly matched with its use?

A	Wheel barrow	Carrying loads
B	Scissors	Cutting paper
C	Axe	Raising objects
D	Slasher	Cutting grass

30. Which one of the following tools can be used for digging a hard soil?

- A. Panga
- B. jembe
- C. forked Jembe
- D. Spade

31. Which one of the following is false ?

- A. A panga has both wooden and metallic parts
- B. We can use an axe for weeding
- C. A saw has a toothed blade and handle
- D. We can use a panga to cut Napier grass and tree branches

32. In which of the following activities is water used for recreation?

- A. Watering plants
- B. Cooking
- C. Washing clothes
- D. Swimming

33. Which one of the following is not a source of water

- A. Taps
- B. Streams
- C. Wells
- D. Rivers

34. Which one of the following is not a use of water at home

- A. Washing clothes
- B. Cooking
- C. Washing tools
- D. Mopping

35. John a std four boy was giving water to his three goats. This is an example of

- A. domestic use of water
- B. recreation use of water
- C. industrial use of water
- D. farm use of water

36. Standard four pupils saw water jetting out and their teacher told them it is a fountain. this is an example of

- A. industrial use of water
- B. recreation
- C. farm
- D. transport

37. Three of the following are uses of heat. Which one is not?

- A. Warming
- B. Drying
- C. Cooking
- D. Lighting

38. Mirrors and shiny spoons reflect light. This is because

- A. They are rough
- B. They are smooth and shiny
- C. They are white
- D. They are made of metal

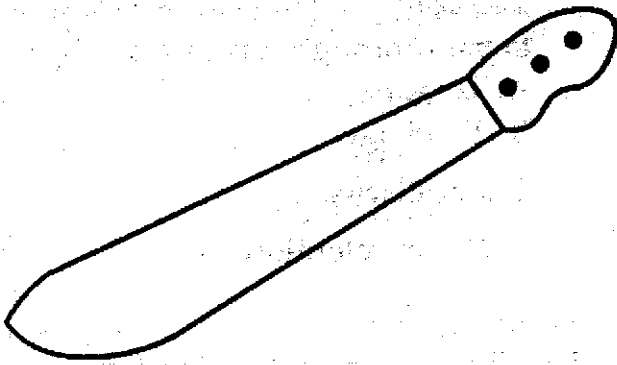
39. Which one of the following is Not True?

- A. The sun is useful during the day
- B. Most artificial sources of light are useful during the night
- C. Too bright light is good for reading
- D. Windows should be large enough to allow in natural light.

40. Which one of the following does not require heat?

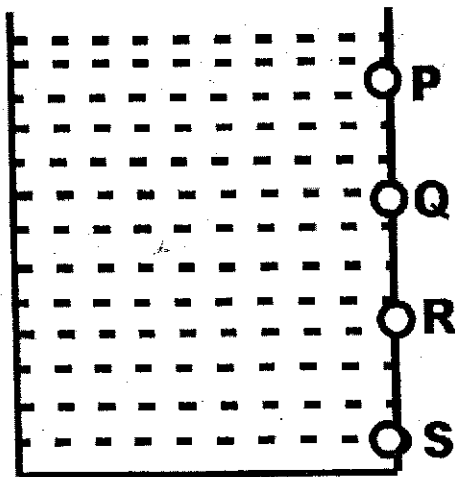
- A. Cooking food
- B. Drying grains and harvested crops
- C. Drying wet clothes
- D. Taking good photographs

41. The diagram below shows a simple tool. The tool can be maintained in all the following ways except



- A. Cleaning it after use
- B. Using it for the right purpose
- C. Painting the cutting blade
- D. Sharpening it

42. The diagram below shows a water tank.



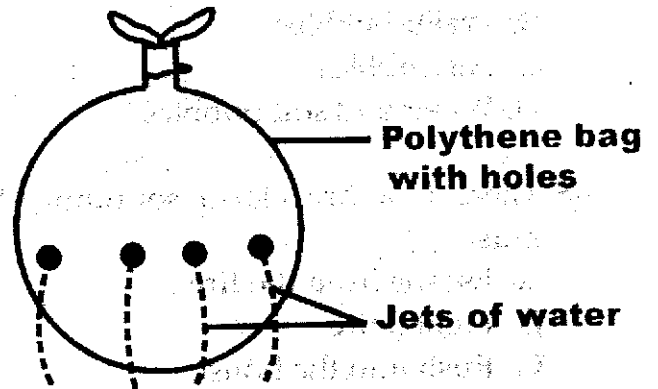
Which position among the above would be the most suitable to place a tap

- A. P
- B. Q
- C. R
- D. S

43. Which of the following will float on water

- A. Piece of woods
- B. Small stone
- C. Piece of wire
- D. Iron ball

44. A pupil put water into a polythene bag like the one shown below.



She then made holes from all the sides and water flowed out. The experiment was used to investigate that

- A. Liquids exert pressure equally in all sides at the same depth
- B. Matter expands when heated
- C. Water is good conductor of heat
- D. Hole can throw water out

45. Which of the following does not affect floating and sinking

- A. Shape
- B. material
- C. Weight
- D. Size

46. Which of the following substances floats on water

- A. Wood ash
- B. sand
- C. Saw dust
- D. beans

47. Boiling water makes _____ appear

- A. Soil bubbles
- B. Water bubbles
- C. Air bubbles
- D. Water and soil bubbles

48. There is a fire alarm sounding. We must

- A. Escape from the fire
- B. Light a fire
- C. Rush into the house
- D. Cry

49. The ability of the soil to allow water to pass through it is called

- A. Texture
- B. Drainage
- C. Capillarity
- D. Water retention

50. Which of the following tools is used for sharpening other tools

- A. Hack saw
- B. pliers
- C. File
- D. spanner

GATUNDU DISTRICT EXAMINATION

STANDARD FIVE – MID TERM II 2016

ENGLISH

Time: 1 hour 40 minutes

Fill in the blank spaces 1 to 15 using the best answers from the choices given

During the weekends 1 our mother 2 to the market and leaves 3 some work to do at home. As the first born I am the eldest and mother says I am 4 charge whenever she is away. My two brothers and three sisters 5 in doing the work. Both my brothers 6 sisters are obedient so they do not 7 when I ask them to do something.

One Saturday morning 8 mother left for the market as usual. We decided to 9 the work in order to finish 10 mother came back. I told my sisters to 11 the clothes, clean the house and cook lunch. My brothers 12 to cut the grass and trim the fence. Suddenly, a goat 13. It had lost its 14. "Who will look after the animals 15" I asked.

- | A | B | C | D |
|------------|---------|-----------|-------------|
| 1. . | ? | ! | . |
| 2. went | go | goes | going |
| 3. us | them | we | as |
| 4. for | in | of | above |
| 5. helped | helping | helps | help |
| 6. or | but | and | also |
| 7. disobey | obey | obedience | disobedient |
| 8. . | . | ? | ! |
| 9. chair | shear | sheer | share |
| 10. before | as | after | between |
| 11. watch | wash | watcher | washes |
| 12. is | was | were | are |
| 13. brayed | barked | mooed | bleated |
| 14. kid | lamb | kitten | calf |
| 15. . | ? | . | ! |

For question 16-17, choose the plural of the underlined word

16. The furniture that father bought is new.
- | | |
|--------------|---------------|
| A. funitures | B. furnitures |
| C. furniture | D. funictures |

17. Children like eating juicy mango in the forest.

- | | |
|-------------|------------|
| A. Mangoses | B. Magos |
| C. Mango | D. Mangoes |

PRINTED BY HIGHFLYER SERIES Tel: 0723 499860

**Funded By: C.D.F. Gatundu South Constituency,
Patron Hon. Moses Kuria, Mp Gatundu South.**

For question 18-19 write the opposite of the underlined word.

18. My new pen is very dear.
A. Expensive B. Strong
C. Cheap D. Valueless

19. The departure time of the train is eight o'clock.
A. Arrival B. Arrive
C. Leave D. Going

For number 20-21, pick out the abstract nouns

20. Wanjiku is very proud of her beauty.
A. very B. beauty
C. proud D. lie

21. Your laziness will put you into trouble.
A. trouble B. put
C. your D. laziness

Choose the correct question tag in number 22-23

22. He was feeling hungry.
A. was he? B. isn't it?
C. wasn't he? D. isn't me?

23. I am not late.
A. am I? B. aren't I?
C. isn't it D. isn't me?

Choose the correct preposition to fill in the blank spaces

24. The girl was proud _____ her victory.
A. with B. of
C. from D. to

25. Do not write _____ the desk.
A. for B. of
C. with D. on

For question 26 - 27 choose the correct order of adjectives

26. Joshua lost her _____ gumboots.
A. Old, green, rubber
B. Old, rubber, green
C. Rubber, old, green
D. Green, rubber, old

27. The man made a _____ aeroplane for the child.
A. Small, paper, green
B. Green, paper, small
C. Small, green, paper
D. Green, small, paper

Fill in the blank spaces with the best alternative

28. Peter is the _____ runner in our school.
A. more fast B. fastest
C. fast D. faster

29. She cooks _____ than her mother.
A. good B. best
C. bad D. better

For question 30 choose the correct answer to fill in the blank

30. The mother of your mother is your _____?
A. Grandmother
B. Sister in law
C. Step mother
D. Mother

Read the following passage and then answer questions 31 to 40

Long time ago, the Hare and the Hyena were good friends. The Hare was known for his intelligence and wisdom. Every evening, grandfather Hare spent his time telling the young ones about their culture and their clever great grandfathers. The Hyena on the other hand did not have any great stories to tell his children. This made him very sad.

One day the Lion got ill. When the other animals learnt about this, they all went to visit him. However, the Hare did not visit the King. Instead, he spent the whole day on his farm working hard to get food for his family. He worked from cock crow to sunset. The animals were very sad to see their King very sick. They travelled far and wide looking for medicine.

The Hyena became very jealous of the Hare. He reported to the King that Hare had not gone to see him while he was sick. When Hare was brought to the King, he was asked why he had not gone to visit the King. The clever Hare told the King that he had been busy searching for the cure for the King's illness. He claimed he had roamed the whole forest looking for the cure. This

made the King happy. He asked him to go on with his search. Two weeks later the Hare came back claiming he had found the cure. He told the King that he needed to take soup from the back legs of the Hyena. Immediately the King sent his servant to cut the back legs of the Hyena. This left the Hyena in a lot of pain. That is why even today, the Hyena still limps.

31. According to the passage the Hare was known for _____.
- A. Being cunning
 - B. His intelligence
 - C. His greed
 - D. A friend of Hyena
32. What would grandfather Hare do every evening?
- A. Teach the young ones to be cunning
 - B. Tell them dull stories
 - C. Teach his grandchildren about their clever grandfathers
 - D. Teaching them to be kind
33. What made the Hyena sad?
- A. He did not have children
 - B. Hare did not teach Hyena's children
 - C. He had no teachings for Hare's children
 - D. He had no stories to tell his children
34. Why didn't Hare visit the lion?
- A. Hare's children were sick
 - B. He prepared to work on his farm
 - C. He was searching for the cure
 - D. He did not know that he was sick
35. When the King was sick the animals did the following except _____.
- A. Brought the medicine that cured him
 - B. Visited him
 - C. Searched for medicine
 - D. Travelled far and wide to look for medicine
36. Why did the Hyena report the Hare?
- A. He wanted him to suffer
 - B. He wanted him to be punished
 - C. He was jealous of him
 - D. He wanted him to stop lying
37. What excuse did the Hare give for not visiting the King?
- A. He did not know
 - B. He was searching for his children's food
 - C. He had to dig his shamba
 - D. He was searching for medicine to cure the King
38. What was the cure according to the Hare?
- A. Herbs from the forest
 - B. The back leg of the Hyena
 - C. The limping Hyena
 - D. Products from his farm
39. Why were the Hyena's back legs cut off?
- A. The Hare had claimed its soup was the cure of the King's illness
 - B. They wanted the Hyena to suffer
 - C. It was the cure for King
 - D. The Hare ordered the servants to cut them
40. The best summary for this passage is _____.
- A. The ungrateful Hyena
 - B. The sick Lion
 - C. The clever Hare
 - D. The clever Hyena

Read the passage below and answer questions 41 – 50

Mercy was a small girl of dark complexion. Some people called her black beauty. Once she picked up money that someone had lost, instead of spending it on sweet and ice cream, she gave it to her teacher. This made her schoolmates think it was also foolish.

One Friday evening, Mercy arrived home from school feeling hungry. She quickly dropped her school bag, dashed into the kitchen and poured herself a cup of tea, buttered some bread and began to eat it. Just then, her mother came into the kitchen and told her that her grandmother was very sick and she and their father were going to see her that night. Mercy

got excited thinking that she too would go along but her mother told her she would remain to take care of her brother Paul and Sister Judy.

After dinner, Mercy gently tucked Paul and Judy into bed and checked the windows and doors to confirm that they were locked. She was too scared to sleep so she walked around the house checking that nobody was hiding under the beds, chairs and tables. After doing a thorough search of the house, she sat up to watch TV because she had decided she would wait until her parents came back.

Suddenly she heard the sound of footsteps outside the house. She quickly switched off television and ran to the window from where she heard the footsteps and peeped through a small opening in the curtain. Then she saw three men dressed in black and wearing masks. They were carrying weapons that she could not identify and were talking amongst themselves, pointing towards the house. Mercy was so frightened. She was trembling. She quickly ran to the phone and dialed the police hotline number which she had memorized.

41. What was the name given to Mercy by some people?
A. Handsome girl
B. Dark girl
C. Foolish
D. Black beauty
42. What did Mercy do after she picked up money lost by someone?
A. She bought sweet and ice cream
B. She took it to her mother
C. She gave it to her teacher
D. She kept it in her bag
43. The word dashed has been underlined in the passage. What does it mean?
A. Run
B. Closed
C. Tip toed
D. Opened
44. What was the number of Mercy's family?
A. Six
B. Five
C. Four
D. Three
45. Who went to sleep first on Friday evening?
A. Mercy's parents
B. Judy and Mercy
C. Paul and Mercy
D. Paul and Judy
46. It is true to say that _____
A. Mercy is a courageous girl
B. Mercy is a brave girl
C. Mercy is a coward girl
D. Mercy is a foolish girl
47. Whom did Mercy's parents went to see that evening?
A. Some people
B. Her grandfather
C. Her grandmother
D. Her uncle
48. What kind of weapons were the three men that Mercy saw carrying?
A. Guns
B. We are not told
C. Stones
D. Pangas
49. When Mercy saw the men pointing their house. What did she do?
A. Asked for help from neighbours
B. Started crying loudly
C. Called her brother and sister
D. Called the police through the phone
50. What would be the best title for this passage _____?
A. The night Mercy shall never forget
B. The sick grandmother
C. The black beauty
D. The foolish girl

**GATUNDU DISTRICT EXAMINATION
STANDARD FIVE – MID TERM II 2016
KISWAHILI**

Time: 1 Hour 40 minutes

Soma kifungu kifuatacho na uchague majibu yafaayo kujazia nafasi zilizoachwa

Taifa ___ 1 ___ linahitaji kujengwa. Uchafu ___ 2 ___ wa tabia na matendo ___ 3 ___
tusafishe na kutupa katika biwi ___ 4 ___ takataka na kuvichoma ___ 5 ___ moto.
Tunahitaji ___ 6 ___ au marekebisho ___ 7 ___ kuzibadili ___ 8 ___ za watu. Tujitambue
kuwa sisi ni watu wenye tabia ___ 9 ___. Tuheshimiane ___ 10 ___ kupendana kama ndugu.

A.	B	C	D
1. hili	hii	huu	hiki
2. wote	chote	zote	yote
3. mbaya	mabaya	baya	mibaya
4. ya	za	wa	la
5. na	ni	kwa	katika
6. mabati	mienendo	hesabu	ukarabati
7. wala	ili	ndivyo	ndio
8. vitendo	tabia	maisha	utu
9. jema	zuri	nzuri	njema
10. na	wala	lakini	ndio

Ukweli ni kwamba ___ 11 ___ ya nyumba zinazobomoka na kuwafunika watu kwenye vifusi
ni zile ___ 12 ___ ziliwekwa misingi dhalili. Ni ___ 13 ___ wa kila ___ 14 ___ kuyajali maisha ya
watakaoshi katika majengo ___ 15 ___.

A.	B	C	D
11. kati	miongoni	baadhi	juu
12. ambako	ambao	ambazo	ambavyo
13. jukumu	wadhifa	uzuri	wajibu
14. mwashi	seremala	sonara	mjenzi
15. hayo	hiyo	hizo	haya



PRINTED BY HIGHFLYER SERIES Tel: 0723 499860

**Funded By: C.D.F. Gatundu South Constituency,
Patron Hon. Moses Kuria, MP Gatundu South.**

**Jibu maswali 16-30 kulingana na
maagizo**

16. Neno "mkono" liko katika ngeli ipi?
A. LI-YA B. U-I
C. U-U D. YA-YA
17. Andika tarakimu hii kwa maneno
10,001
A. Kumi elfu na moja
B. Elfu kumi na moja
C. Laki moja na moja
D. Elfu moja na moja
18. Ni nini ukubwa wa "mto huu
hauvukiki"
A. Jito hili halivukiki
B. Kijito hiki hakivukiki
C. Mito hii haivukiki
D. Vijito hivi havivukiki
19. Kanusha sentensi hii:
Mwanawe mzee Mwema alitwa.
A. Mwanawe hakuitwa
B. Mwanawe mzee Mwema hataitwa
C. Mwanawe mzee Mwema
hakuitwa
D. Mwanawe mzee Mwema alitika
20. Anayetengeneza vyungu kwa
udongo ni _____
A. Mfinyanzi B. Mgema
C. Mhunzi D. Mwashii
21. Andika wingi wa; Yeye ana miguu
mirefu.
A. Yeye wana miguu mirefu
B. Wao ana miguu mirefu
C. Wao wana miguu mirefu
D. Miguu mirefu ni wao
22. Chagua irabu kati ya herufi zifuatazo
A. E B. b C. o D. f
23. Andika kinyume cha:

Meli ilipakiwa mizigo yote.

- A. Meli ilipakuliwa mizigo yote.
B. Meli haikupakiwa mizigo yote
C. Meli iliwekwa mizigo yote
D. Meli yalipakiwa mizigo yote
24. Ni neno lipi halina maana sawa na
umati?
A. Msafara B. Kaumu
C. Halaiki D. Hadhara
25. Tumia kiulizi kifaacho.
Mimea _____ iliyopandwa?
A. Vipi B. mingapi
C. Migani D. yupi
26. Badala ya kusema "Ninaenda
kujisaidia" Utasema haya
isipokuwa _____
A. Ninaenda msalani
B. Ninaenda haja ndogo
C. Ninaenda pembeni
D. Ninaenda kujifungua
27. Ni sentensi ipi ambayo ni sahihi?
A. Duka imefunguliwa
B. Jiko inawaka
C. Soko lile limejaa
D. Shati ipo pale
28. Tegua kitendawili
Haukamatiki haushikiki
A. Moshi B. Jua
C. Baridi D. Giza
29. Chagua kiashiria katika sentensi:
Kiti hicho ni kizuri sana
A. Kizuri B. Hicho
C. Kiti D. Sana
30. Mgeni _____ mpatie maji _____
A. akikuja, akunywe
B. akija, anywe
C. aje, anywe
D. alikuja, akikunywa

Soma habari ifuatayo kisha ujibu maswali

Ng'ombe ni mmojawapo wa wanyama wanaofugwa na binadamu. Kuna ng'ombe wa kike na wa kiume. Binadamu huwalisha ng'ombe hawa kwa nyasi na vyakula vinginevyo ili wawe wenye afya nzuri. Wanyama hawa hupelekwa kwenye majosho ili wawe wenye afya njema.

Ng'ombe wa kiume hutumiwa kwa kazi za nyumbani kama vile kulima, kukokota mikokoteni na mapipa ya kuchotea maji. Kilimo ndicho uti wa mgongo wa uchumi wa nchi yetu. Ng'ombe wanapomsaidia mwananchi katika kupanda na kupalilia mimea yake bila shaka huwa wanainua uchumi wa taifa la Kenya.

Watu wengi pia hula nyama ya ng'ombe ambayo ina protini inayompa binadamu joto mwilini. Mbali na nyama, ng'ombe wanapochinjwa ngozi zao, mifupa na pembe pia huuzwa. Ng'ombe ni mnyama mwenye umuhimu katika maisha ya binadamu yeyote.

31. Kulingana na taarifa sababu ya maalum ya kuwalisha ng'ombe ni?
A. waweze kutoa maziwa
B. wawe wenye afya
C. waweze kutoa mbolea
D. waweze kuzaana
32. Ni mdudu yupi anayefanya ng'ombe apelekwe kwenye josho?
A. chawa
B. mbu
C. fuaza
D. kupe
33. Mnyama anayetajwa katika ufahamu huu huishi zizini ilhali konokono huishi katika _____?
A. kombe
B. kizimba
C. mzinga
D. majini
34. Nyama ya ng'ombe katika taarifa ina madini gani katika mwili wa binadamu?
A. Vitamin
B. protini
C. Kemia
D. heroini
35. Ng'ombe wa kiume anatajwa kufanya kazi nyingi za kinyumbani, ipi si mojawapo ya kazi zake?
A. Kulima
B. Kukokota mikokoteni
C. Kuchotea maji
D. Kulinda nyumbani
36. Ili kuzuia wadudu wasiwashambulie ng'ombe, wanapaswa kuogeshwa wapi?
A. mnadani
B. joshoni
C. mtoni
D. visimani
37. Mbali na nyama ya ng'ombe, ni kipi kingine ambacho mnyama huyu hutupatia?
A. maini
B. gundi
C. ngozi
D. ulimi
38. Kulingana na taarifa kilimo ndicho _____ wa nchi yetu.
A. Uti wa mgongo
B. Mgongo
C. Mgongo wa uti
D. Kiinua mgongo
39. Ni aina ngapi za ng'ombe ambao wametajwa katika taarifa?
A. aina moja
B. aina tatu
C. aina mbili
D. aina tano
40. Toa kichwa cha taarifa hii kulingana na maelezo
A. Manufaa ya kilimo
B. Ng'ombe jike
C. Ng'ombe wa kiume
D. Faida za ng'ombe

Soma ufahamu huu kisha ujibu maswali 41-50 kwa usahihi

Mavazi ni muhimu kwetu kwa njia mbalimbali. Kwanza kabisa, mavazi hutuficha uchi. Vile vile, mavazi hutukinga kutokana na baridi, jua kali na upepo mkali.

Kunayo mavazi ya kike, ya kiume na yale ambayo huvaliwa na watu wote. Watoto wachanga pia wanayo mavazi yao. Pia, kuna mavazi ya kazi mbalimbali. Kwa mfano, bwelasuti au ovaroli huvaliwa na injinia au mekanika kuzuia uchafu wanapofanya kazi. Pia, kuna mavazi ya michezo.

Mavazi yanayovaliwa na watu wa kike ni kama vile blauzi, sketi, sidiria, shimizi, gagro na rinda. Sidiria kifuani huvaliwa kushikilia maziwa. Pia, huitwa kanchiri. Gagro au gagulo huvaliwa ndani ya nguo kuanzia kiunoni hadi miguuni. Gagro vilevile huitwa kishida au kirinda.

Mavazi ya kiume ni kama vile kanzu, shati na kikoi. Vilevile, wanaume huvalia kofia kama vile chepeo, tarbushi na bulibili. Mavazi yanayovaliwa na wake kwa waume ni kama vile kizibao, chupi au kocho, kaptura, koti na suti.

41. Mavazi huvaliwa ili kusitiri au kuficha _____.

- A. uchi B. uji
C. uchafu D. jua

42. Mavazi hutuzuia kutokana na _____

- A. baridi na jua kali
B. hewa na watu
C. watu na joto
D. upepo na hewa

43. Vazi lipi kati ya haya huvaliwa na wanawake pekee?

- A. Kocho B. suruali
C. Kizibao D. shimizi

44. Shati kwa wavulana ni kama _____ kwa wasichana.

- A. suruali B. bushati
C. blauzi C. koti

45. Vazi linalovaliwa juu ya nguo ili kuzuia uchafu huitwa.

- A. sweta B. suruali
C. bwelasuti D. buli

46. Ni vazi gani pia huitwa kirinda _____?

- A. gagro B. sketi
C. sidiria D. koti

47. Jina jingine la kocho ni _____

- A. Kaptura B. bombo
C. kappa D. chupi

48. Gani si aina ya kofia kati ya haya mavazi?

- A. bulibili B. kikoi
C. tarbushi D. chepeo

49. Chagua neno ambalo ni tofauti na mengine:

- A. Miwani B. kizibao
C. Kanchiri D. kikoi

50. Anwani inayofaa ufahamu huu ni _____

- A. mavazi ya kike
B. mavazi ya kiume
C. mavazi
D. mavazi ya kazi

**GATUNDU DISTRICT EXAMINATION
STANDARD FIVE - MID TERM II 2016
MATHEMATICS**

Time: 2 hours

1. Write 910,010 in words.
 - A. Nine hundred thousand and ten.
 - B. Nine hundred and ten thousand.
 - C. Nine hundred and ten thousand and ten.
 - D. Nine million ten thousand and ten.
2. What is the total value of digit 7 in the number 871,246?
 - A. 700
 - B. 70000
 - C. 7
 - D. 7000
3. Wambui added 6792 to 2431 and rounded off the answer to the nearest 100. What answer did she get?
 - A. 9223
 - B. 9200
 - C. 9000
 - D. 10000
4. Which of the following numbers is divisible by both 3 and 6?
 - A. 363
 - B. 759
 - C. 231
 - D. 108
5. Find the next number in the pattern below: 5, 9, 13, 17, 21, _____
 - A. 25
 - B. 22
 - C. 24
 - D. 29
6. What is the sum of prime numbers between 20 and 40?
 - A. 186
 - B. 215
 - C. 120
 - D. 93
7. Work out $4792 + 8057 + 409?$
 - A. 13158
 - B. 12258
 - C. 13248
 - D. 13258
8. Which fraction is the largest?
 - A. $\frac{3}{4}$
 - B. $\frac{3}{10}$
 - C. $\frac{2}{5}$
 - D. $\frac{1}{2}$
9. Find the L.C.M of 4, 6, and 8.
 - A. 18
 - B. 48
 - C. 24
 - D. 16
10. Change the following mixed number into improper fraction: $6\frac{1}{3}$
 - A. $\frac{10}{3}$
 - B. $\frac{19}{3}$
 - C. $\frac{18}{3}$
 - D. $\frac{7}{3}$
11. A poultry farmer sells 20 trays of eggs per day. How many trays did he sell in the month of December?
 - A. 620
 - B. 600
 - C. 580
 - D. 61
12. Add

km	m	cm
3	400	79
+ 7	273	14

 - A. 10km 673m, 93cm
 - B. 10km 673m, 83cm
 - C. 11km 73m 93cm
 - D. 11km 766m
13. Work out $5\frac{3}{8} + 5\frac{1}{2}$
 - A. $10\frac{7}{8}$
 - B. $11\frac{7}{8}$
 - C. $10\frac{4}{10}$
 - D. 4
14. What is the place value of 6 in 54.681?
 - A. Hundreds
 - B. Ones
 - C. Hundredths
 - D. Tenths

PRINTED BY HIGHFLYER SERIES Tel: 0723 499860

Funded By: C.D.F Gatundu South Constituency,
Patron: Hon. Moses Kuria, MP Gatundu South

31. How many minutes are there in 4 hours?
 A. 180 min B. 240min
 C. 120 min D. 60 min

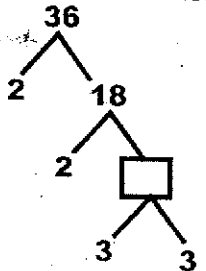
32. Change 27km 200m into metres.
 A. 27200M B. 2900m
 C. 26800m D. 2700m

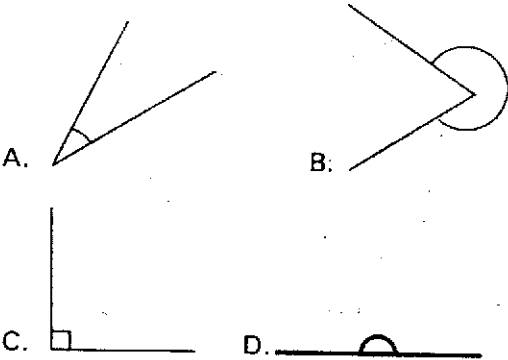
33. What is the missing number in $\frac{3}{4} = \frac{12}{?}$.
 A. 16 B. 19
 C. 12 D. 3

34. Work out $4 \overline{) 1756}$
 A. 444 B. 440
 C. 439 D. 539

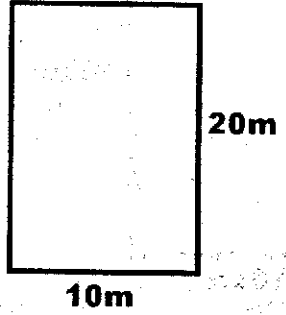
35. Work out: $736.896 + 90.11$
 A. 745.907 B. 826.896
 C. 827.906 D. 827.006

36. How many days are there in 2 fortnights?
 A. 21 B. 14
 C. 28 D. 7

37. What is the missing number?

 A. 9 B. 7
 C. 11 D. 16

38. Which one of the following is a right angle?


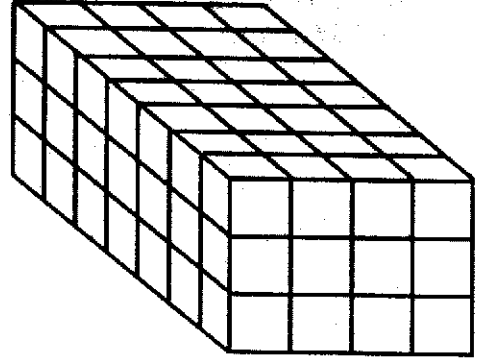
39. Use the formular $p = 2(L + W)$ to find the perimeter of the figure below.



- A. 40m
 B. 20m
 C. 60m
 D. 30m

40. A bag of sugar weighs 40kg. How many such bags can be obtained from 800kg?
 A. 200 B. 20
 C. 2 D. 22

41. How many small cubes make the stack below?

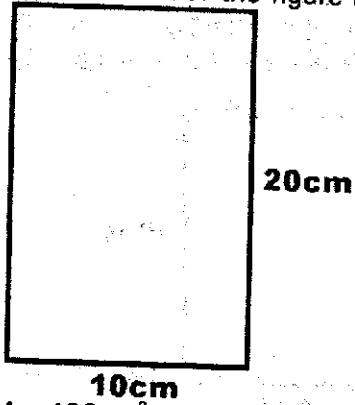


- A. 74 B. 96
 C. 72 D. 84

42. A farmer sold 8 goats and earned 24000 shillings. How much did each goat cost?
 A. 3000
 B. 19200
 C. 24008
 D. 23992

43. Work out $79683 + 8869 + 778$
 A. 90330
 B. 89440
 C. 89430
 D. 89330

44. Find the area of the figure below.



- A. 400cm^2 B. 200cm^2
 C. 30cm^2 D. 60cm^2

45. Divide $9 \overline{) 270\text{km } 108\text{m}}$

- A. 3km 12m B. 30km 1m
 C. 30km 10m D. 30km 12m

46. Work out

	sh	cts
	24	65
x		4

- A. 96sh. 40cts
 B. 97sh 60cts
 C. 98sh 60cts
 D. 96sh 60cts

Use the table below to answer questions 47 to 50 as recorded by pupils in Boi Primary School.

Buses	###, ## //
Lorries	## ## ## //
Matatus	## //
Vans	## ## ## ##

47. How many more lorries than buses were recorded?
 A. 18
 B. 6
 C. 12
 D. 30
48. Which type of vehicle had the least number counted?
 A. 57
 B. Buses
 C. Matatus
 D. Lorries
49. How many vehicles were recorded?
 A. 57
 B. 30
 C. 20
 D. 27
50. Which type of vehicle had the highest number recorded.
 A. Vans
 B. Matatus
 C. Buses
 D. Lorries

CATUNDU DISTRICT EXAMINATION
STANDARD FIVE – MID TERM II - 2016

MARKING SCHEME

ENGLISH	KISWAHILI	MATHS	SCIENCE	SOCIAL STUDIES	
1. D	1. A	1. C	1. A	1. C	51. A
2. C	2. A	2. B	2. B	2. B	52. D
3. A	3. B	3. B	3. B	3. D	53. B
4. B	4. D	4. D	4. C	4. A	54. C
5. D	5. C	5. A	5. C	5. B	55. B
6. C	6. D	6. C	6. B	6. C	56. B
7. A	7. B	7. D	7. C	7. D	57. C
8. B	8. B	8. A	8. D	8. D	58. A
9. D	9. D	9. C	9. B	9. C	59. B
10. A	10. A	10. B	10. B	10. D	60. D
11. B	11. C	11. A	11. B	11. B	
12. C	12. C	12. A	12. D	12. B	
13. D	13. D	13. A	13. C	13. B	<u>C.R.E</u>
14. A	14. A	14. D	14. A	14. B	
15. B	15. A	15. C	15. C	15. C	61. B
16. C	16. B	16. B	16. C	16. D	62. C
17. D	17. A	17. D	17. A	17. A	63. C
18. C	18. A	18. C	18. C	18. B	64. A
19. A	19. C	19. B	19. B	19. B	65. D
20. B	20. A	20. C	20. D	20. C	66. B
21. D	21. C	21. C	21. D	21. B	67. D
22. C	22. A	22. D	22. D	22. A	68. C
23. A	23. A	23. C	23. D	23. D	69. B
24. B	24. A	24. A	24. C	24. C	70. C
25. D	25. B	25. D	25. A	25. B	71. B
26. A	26. D	26. A	26. C	26. B	72. D
27. C	27. C	27. B	27. D	27. C	73. D
28. B	28. A	28. C	28. D	28. C	74. A
29. D	29. B	29. C	29. C	29. D	75. C
30. A	30. B	30. D	30. C	30. D	76. B
31. B	31. B	31. B	31. B	31. B	77. D
32. C	32. D	32. A	32. D	32. A	78. B
33. D	33. A	33. A	33. A	33. C	79. D
34. B	34. B	34. C	34. C	34. A	80. A
35. A	35. D	35. D	35. D	35. B	81. A
36. C	36. B	36. C	36. B	36. C	82. B
37. D	37. C	37. A	37. D	37. D	83. C
38. B	38. A	38. C	38. B	38. A	84. D
39. A	39. C	39. C	39. C	39. C	85. C
40. C	40. D	40. B	40. D	40. D	86. B
41. D	41. A	41. D	41. C	41. B	87. A
42. C	42. A	42. A	42. D	42. C	88. D
43. A	43. D	43. D	43. A	43. C	89. B
44. B	44. C	44. B	44. A	44. D	90. D
45. D	45. C	45. D	45. D	45. B	
46. A	46. A	46. C	46. C	46. A	
47. C	47. D	47. B	47. C	47. B	
48. B	48. B	48. C	48. A	48. C	
49. D	49. A	49. A	49. B	49. C	
50. A	50. C	50. A	50. C	50. B	