

# SCHOOL BASED EVALUATION TEST

PENPLUS  
MK2 - 2016

## STD 3 - TERM 2 - 2016

### ENGLISH

Name ..... School .....

#### Dictation

1. \_\_\_\_\_
2. \_\_\_\_\_
3. \_\_\_\_\_
4. \_\_\_\_\_
5. \_\_\_\_\_

#### Fill in the missing letters

6. fl\_\_g
7. br\_\_ak
8. n\_\_tice
9. libr\_\_ry
10. s\_\_elf

#### Write these words correctly

11. mblyasse \_\_\_\_\_
12. mesga \_\_\_\_\_
13. pero \_\_\_\_\_
14. mbco \_\_\_\_\_
15. pswee \_\_\_\_\_

#### Add -ing to these words

16. Skip \_\_\_\_\_
17. Play \_\_\_\_\_
18. Ride \_\_\_\_\_
19. Read \_\_\_\_\_
20. Sweep \_\_\_\_\_

#### Write the joining words

21. Dust \_\_\_\_\_
22. Bath \_\_\_\_\_
23. Tooth \_\_\_\_\_
24. Black \_\_\_\_\_
25. Book \_\_\_\_\_

(shelf, room, bin, brush, board)

#### Write the opposite

26. Come - \_\_\_\_\_
27. Give - \_\_\_\_\_
28. Go - \_\_\_\_\_
29. Happy - \_\_\_\_\_

Write the past tense by adding -ed

30. Want - \_\_\_\_\_  
31. Clean - \_\_\_\_\_  
32. Wash - \_\_\_\_\_

Add -ing

33. Climb - \_\_\_\_\_  
34. Sweep - \_\_\_\_\_  
35. Come - \_\_\_\_\_

Write the plural

36. Apple - \_\_\_\_\_  
37. Pencil - \_\_\_\_\_  
38. Ball - \_\_\_\_\_  
39. Dog - \_\_\_\_\_

Use "am" "is" or "are"

40. This boy \_\_\_\_\_ crying.  
41. I \_\_\_\_\_ going to school.  
42. The man \_\_\_\_\_ sick.

43. We \_\_\_\_\_ late for school.  
44. She \_\_\_\_\_ reading a story book.  
45. They \_\_\_\_\_ sweeping the room.  
46. He \_\_\_\_\_ playing football.

Read the passage and answer the questions.

The name of my friend is Jack. He has three brothers and two sisters. His father's name is Mr. George. Jack and I are in standard three. We play together after doing our homework.

47. The name of my friend is \_\_\_\_\_  
(John, Jack)  
48. Jack is in standard \_\_\_\_\_  
(5, 2, 3)  
49. Jack has \_\_\_\_\_ sisters.  
(3, 2, 5)  
50. We \_\_\_\_\_ together.  
(play, do homework)

# SCHOOL BASED EVALUATION TEST

PENPLUS  
MK2 - 2016

## STD 3 - TERM 2 - 2016

### MATHEMATICS

Name ..... School .....

#### Write in words.

1. 838 \_\_\_\_\_  
\_\_\_\_\_
2. 96 \_\_\_\_\_

#### Write in symbols.

3. seven hundred and nine \_\_\_\_\_
4. Five hundred and two \_\_\_\_\_
5. two hundred and sixty seven \_\_\_\_\_

#### Arrange these numbers in order from the smallest to the largest.

6. 14, 21, 28, 7, 42, 35  
\_\_\_\_\_
7. 138, 291, 146, 261, 151  
\_\_\_\_\_
8. 
$$\begin{array}{r} 94 \\ + 41 \\ \hline \end{array}$$
9. 
$$\begin{array}{r} 15 \\ - 9 \\ \hline \end{array}$$
10. 
$$\begin{array}{r} 66 \\ 56 \\ + 47 \\ \hline \end{array}$$
11. 
$$\begin{array}{r} 80 \\ - 42 \\ \hline \end{array}$$

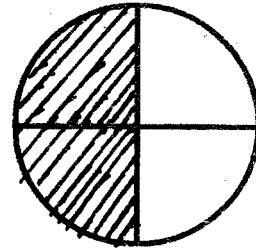
#### What is the next number in the pattern?

12. 9, 16, 24, 33, \_\_\_\_\_
13. 3, 6, 9, 12, 15, \_\_\_\_\_
14. Add 328 to 564 = \_\_\_\_\_

15. Subtract 67 from 90 = \_\_\_\_\_
16. 
$$\begin{array}{r} 588 \\ + 292 \\ \hline \end{array}$$
17. 
$$\begin{array}{r} 906 \\ - 669 \\ \hline \end{array}$$

18. 
$$\begin{array}{r} 500 \\ - 267 \\ \hline \end{array}$$

19. How many legs do three girls have? \_\_\_\_\_
20. Which part is shaded? \_\_\_\_\_



21.  $\frac{1}{2}$  of 16 = \_\_\_\_\_
22.  $\frac{1}{4}$  of 20 = \_\_\_\_\_
23.  $\frac{1}{8}$  of 24 = \_\_\_\_\_
24. Which one is smaller?  
 $\frac{1}{2}$  or  $\frac{1}{4}$  = \_\_\_\_\_
25. How many months are there in a year? \_\_\_\_\_
26. Which is the second day of the week? \_\_\_\_\_
27. \_\_\_\_\_ is the seventh month of the year.

28.  $5 \times 3 =$  \_\_\_\_\_

29.  $8 \times 6 =$  \_\_\_\_\_

30.  $20 \div 5 =$  \_\_\_\_\_

31.  $24 \div 3 =$  \_\_\_\_\_

32. How much money is 2 twenty shilling coin? \_\_\_\_\_

33.	Sh	Cts
	25	00
	+ 10	50
<hr/>		
<hr/>		

34.	Sh	Cts
	423	50
	- 13	00
<hr/>		
<hr/>		

35.  - 13 = 5

36.  + 6 = 14

37.  $12 -$    $= 3$

38.  $9 +$    $= 16$

39.	Sh	Cts
	45	50
	+ 26	00
<hr/>		
<hr/>		

40.  $572 + 14 + 9 =$  \_\_\_\_\_

41.  $463 - 20 =$  \_\_\_\_\_

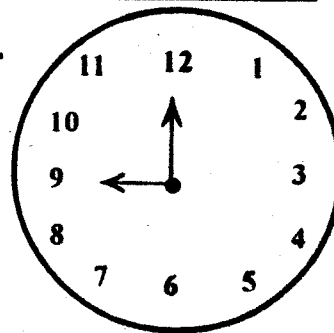
42.  $896 - 400 =$  \_\_\_\_\_

43.  $765 + 73 =$  \_\_\_\_\_

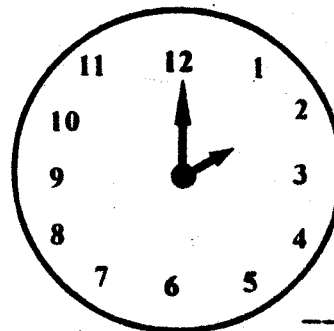
44. One week has \_\_\_\_\_ days.

**What time is it?**

45.




46.

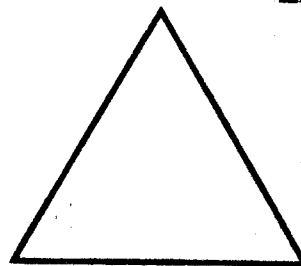


**Name this shapes.**

47.



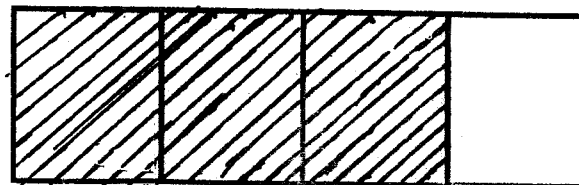
48.



49. Which number is missing?

6, 11, 17, \_\_\_\_\_, 32, 41

50. Which part is unshaded? \_\_\_\_\_



# SCHOOL BASED EVALUATION TEST

## DARASA LA TATU MUHULA WA PILI - 2016

PENPLUS  
MK2 - 2016

### KISWAHILI

Jina..... Shule .....

#### Imla

1. \_\_\_\_\_
2. \_\_\_\_\_
3. \_\_\_\_\_
4. \_\_\_\_\_
5. \_\_\_\_\_

#### Jaza pengo

6. ny\_\_\_ma
7. ch\_\_\_ng\_\_\_
8. d\_\_\_r\_\_\_s\_\_\_
9. mw\_\_\_n\_\_\_funz\_\_\_
10. ch\_\_\_p\_\_\_

#### Andika kinyume

11. Ugua \_\_\_\_\_
12. Kaka \_\_\_\_\_
13. Kijana \_\_\_\_\_
14. Mimi \_\_\_\_\_
15. Baridi \_\_\_\_\_

#### Andika kwa nambari

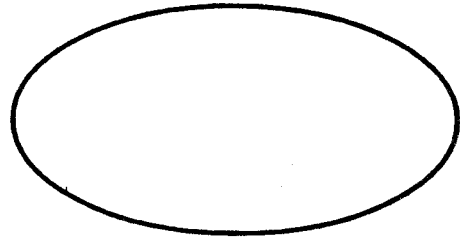
16. Mia tatu \_\_\_\_\_
17. Sabini \_\_\_\_\_
18. Mia moja na moja \_\_\_\_\_

#### Tumia "hii", "haya" au "vile"

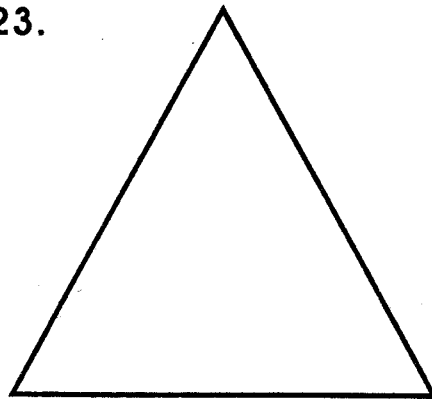
19. Maembe \_\_\_\_\_ yameoza.
20. Visu \_\_\_\_\_ ni vya nyanya.
21. Mikebe \_\_\_\_\_ imetoboka.

#### Andika majina ya maumbo.

22.



23.




#### Andika kwa wingi

24. Ndizi \_\_\_\_\_
25. Ufagio \_\_\_\_\_
26. Karatasi \_\_\_\_\_
27. Chakula \_\_\_\_\_
28. Jiko \_\_\_\_\_

Andika majina ya michoro hii

29.



\_\_\_\_\_

30.




\_\_\_\_\_

31.



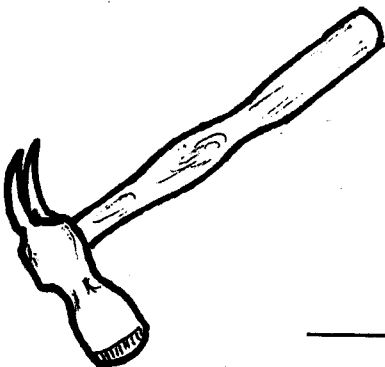
\_\_\_\_\_

32.



\_\_\_\_\_

33.



\_\_\_\_\_

Kamilisha vitendawili

34. Askari mlangoni \_\_\_\_\_  
35. Natembea na nyumba yangu \_\_\_\_\_  
36. Nishike kiuno tucheze ngoma \_\_\_\_\_  
37. Nyumba yangu haina mlango \_\_\_\_\_  
38. Bubu anayesema \_\_\_\_\_  
39. Akitolewa nje hufa \_\_\_\_\_

Andika kwa maneno.

40. 401 \_\_\_\_\_  
41. 185 \_\_\_\_\_  
42. 235 \_\_\_\_\_

Jibu maamkizi

43. Habari? \_\_\_\_\_  
44. Hujambo? \_\_\_\_\_  
45. Shikamoo? \_\_\_\_\_  
46. Hamjambo? \_\_\_\_\_  
47. Habari ya kushinda? \_\_\_\_\_

Soma habari hii kisha ujibu maswali

Kabanda alikuwa mtoto mzuri sana. Alikuwa na tabia njema. Mtu akimwita "Kabanda!" alitika "Naam!" Alipenda usafi pia.

48. Kabanda hupenda \_\_\_\_\_  
49. Alipoitwa Kabanda huitika \_\_\_\_\_  
50. Kabanda alikuwa na tabia \_\_\_\_\_

# SCHOOL BASED EVALUATION TEST

**PENPLUS  
MK2 - 2016**

**STD 3 - TERM 2 - 2016**

## SCIENCE

Name ..... School .....

- \_\_\_\_\_ is the ability to see.  
(Smelling, Hearing, Sight)
- Movements that people make with their body to communicate are called \_\_\_\_\_ (gestures, signs, words)
- We clean our teeth with water and \_\_\_\_\_ (soap, salt, toothpaste)
- The body need exercise in order to \_\_\_\_\_ (grow, sleep, relax)
- \_\_\_\_\_ is a plant used to make medicine. (Rubber, Cabbage, Eucalyptus)
- The weather can be recorded using \_\_\_\_\_ (letters, symbols, pictures)
- \_\_\_\_\_ are important to a farmer. (seasons, wind, clouds)
- This animal moves by \_\_\_\_\_



(walking, swimming, crawling)











- The body of a fish is covered with \_\_\_\_\_ (hair, scales, fur)
- Boiling water helps to \_\_\_\_\_ (kill germs, remove dirt, remove colour)
- Taking water from one place to where it will be used is called \_\_\_\_\_ (filtering, boiling, transporting)
- The best soil for building is \_\_\_\_\_ (loam, sand, clay)
- The way to behave when taking meals is called \_\_\_\_\_ (house manners, table manners, food manners)
- We eat the \_\_\_\_\_ of a carrot.



(stem, root, leaves)

- \_\_\_\_\_ treats our eyes.  
(Dentist, Doctor, Optician)
- When we look ourselves in the mirror, we see our \_\_\_\_\_ (image, picture, face)
- Animals kept at home are called \_\_\_\_\_ (domestic animals, wild animals)
- A mosquito is a harmful animals. It spreads \_\_\_\_\_ (HIV, malaria, cough)
- Cows gives us meat and \_\_\_\_\_ (milk, eggs)

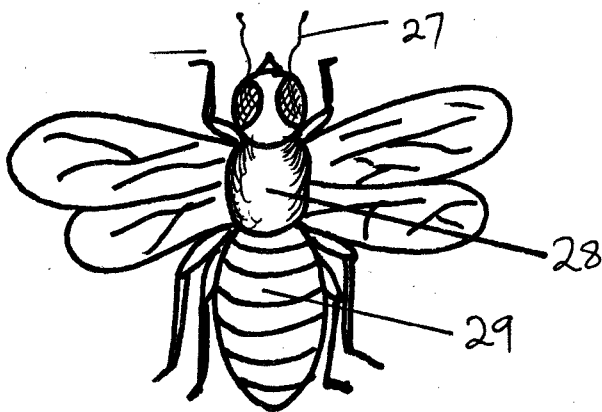
Use the weather chart to answer questions 20-24.

Day	Morning	Evening
Mon		
Tue		
Wed		
Thur		
Fri		

- Which day did the pupils went to school with an umbrella? \_\_\_\_\_ (Thursday, Monday, Wednesday)
- Which day was sunny the whole day? \_\_\_\_\_ (Monday, Thursday, Tuesday)
- On which day was sunny in the evening and cloudy in the morning? \_\_\_\_\_ (Tuesday, Friday, Thursday)

23. Which was the best day to wash clothes?  
\_\_\_\_\_ (Thursday, Friday, Wednesday)
24. On which day was rainy in the morning and windy in the evening? \_\_\_\_\_  
(Friday, Wednesday, Monday)
25. \_\_\_\_\_ is used to tell direction. (Compass, Rain gauge, Thermometer)
26. We eat \_\_\_\_\_ of a sugarcane.  
(leaves, stem, root)

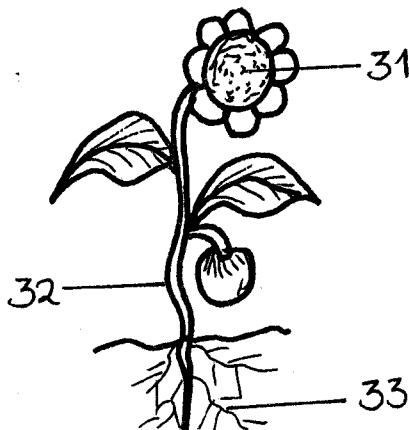
Name the parts of the housefly



(abdomen, thorax, antennae)

30. We should wash our hands \_\_\_\_\_ visiting the toilet. (before, after)

Name the parts of a plant



31. \_\_\_\_\_
32. \_\_\_\_\_
33. \_\_\_\_\_

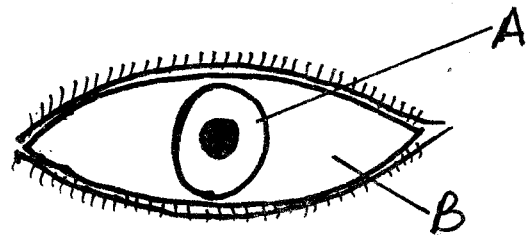
34. When it is raining, It is dangerous to stand \_\_\_\_\_  
(under a tree, in the house, in the office)
35. \_\_\_\_\_ can be eaten without cooking.  
(Maize, Tomato, Rice)
36. A long period without rain is called \_\_\_\_\_  
(drought, floods, weather)

37. A \_\_\_\_\_ reflects light.  
(mirror, stone, timber)
38. These are \_\_\_\_\_ seeds.



(maize, beans)

Name the parts marked



39. Part A is \_\_\_\_\_
40. Part B is \_\_\_\_\_  
(pupil, iris, eyebrows)
41. The weather is \_\_\_\_\_



(sunny, cloudy, windy)

42. We plant seeds during \_\_\_\_\_ seasons.  
(dry, rainy)
43. When we are thirsty we drink \_\_\_\_\_  
(beer, milk, water)
44. Unwanted plants are called \_\_\_\_\_  
(waste, maize, weeds)
45. Nose is an organ for \_\_\_\_\_  
(smelling, tasting, seeing)
46. My sister was sent to buy panadol. She went to a \_\_\_\_\_  
(market, chemist, butchery)
47. We clean toilets to keep away \_\_\_\_\_  
(air, germs)
48. The best day for winnowing grains is on \_\_\_\_\_ day.  
(windy, cloudy, rainy)
49. A snake has \_\_\_\_\_ legs. (2, 4, 0)
50. The brooms are used for \_\_\_\_\_  
(sweeping, painting, wiping)



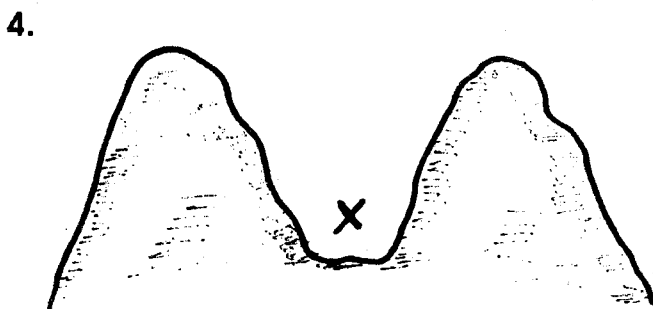
# SCHOOL BASED EVALUATION TEST

## STD 3 - TERM 2 - 2016 SOCIAL STUDIES/C.R.E.

PENPLUS  
MK2 - 2016

Name ..... School .....

1. A \_\_\_\_\_ is used to tell direction.  
(West, Compass, East)
2. The sun rises in the \_\_\_\_\_  
(West, East, South)
3. A \_\_\_\_\_ is a physical feature.  
(table, chair, mountain)

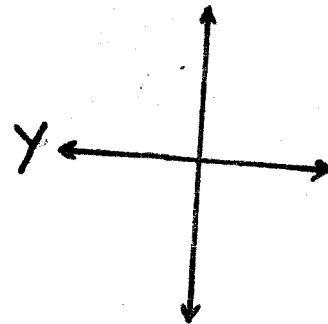


X above is a \_\_\_\_\_  
(valley, mountain, swamp)

5. Fish lives in \_\_\_\_\_  
(soil, air, water)
6. We get timber from \_\_\_\_\_  
(hill, forest, lake)
7. The sun set in the \_\_\_\_\_  
(North, West, East)
8. We use an \_\_\_\_\_ when it is raining.  
(panga, umbrella, soil)
9. When it is hot we wear \_\_\_\_\_ clothes.  
(light, heavy, short)
10. When it rains for a long time in the district, it is the \_\_\_\_\_ season.  
(cold, heavy, wet)
11. We repair roofs during the \_\_\_\_\_ season. (windy, dry, rainy)
12. When children go to school \_\_\_\_\_ help them to learn. (parents, teachers, doctors)
13. A \_\_\_\_\_ is a group of people who live together.  
(community, relatives, friend)

14. People who worship together form a \_\_\_\_\_ community. (farming, teaching, religious)
15. Houses protect us from \_\_\_\_\_ and bad people. (bad weather, domestic animals, rivers)
16. The person who treat sick animal is called \_\_\_\_\_ officer.  
(nurse, doctor, veterinary)

17.



In a compass the point Y is called \_\_\_\_\_  
(North, West, East)


18. Many \_\_\_\_\_ make a district.  
(locations, divisions, sub-locations)
19. The Maasai lives in a house called \_\_\_\_\_  
(bomas, location, manyatta)
20. This is a \_\_\_\_\_



(ocean, hill, forest)

21. A dam is a \_\_\_\_\_ feature.  
(natural, man-made)

22. Food, clothes and houses are called \_\_\_\_\_ needs. **(basic, parents, fathers)**
23. When we \_\_\_\_\_ our animals they do not get diseases easily. **(milk, sell, spray)**
24. We go to school to \_\_\_\_\_ **(pray, learn, play)**
25. We warm ourselves when it is \_\_\_\_\_ **(hot, cold, dry)**
26. This is a \_\_\_\_\_




**(lake, swamp, mountain)**

27. West, North, East and South are called the \_\_\_\_\_ points. **(cardinal, South, North)**
28. Strong wind can blow away the \_\_\_\_\_ of our houses. **(floor, roof, window)**
29. Wild animals are found in \_\_\_\_\_ **(district, forest, home)**
30. We plant trees during the \_\_\_\_\_ season. **(wet, hot, cold)**

### C.R.E.

31. God created everything in \_\_\_\_\_ days. **(eight, five, six)**
32. God is called the \_\_\_\_\_ in the traditional African society. **(source, creator, constructor)**
33. The kings of Egypt were called \_\_\_\_\_ **(Jews, Pharaoh, pirates)**
34. Jesus healed a blind man called \_\_\_\_\_ **(Zacheaus, Lazarus, Bartimeaus)**
35. The wife of Isaac was called \_\_\_\_\_ **(Rebecca, Leah, Rachel)**

36. God changed the name of Jacob to \_\_\_\_\_ **(Israel, Immanuel, Gabriel)**
37. Jesus was baptized by \_\_\_\_\_ **(Luke, Joseph, John)**
38. Who worship in this place?



**(Muslims, Egyptians, Christians)**

39. The son of Abraham was called \_\_\_\_\_ **(Samuel, Isaac, Jacob)**
40. Joseph was sold to Egypt by his brothers. He was a son of \_\_\_\_\_ **(Moses, Jacob, Isaac)**
41. The mother of Isaac was called \_\_\_\_\_ **(Hannah, Sarah, Tabitha)**
42. The younger brother of Jacob was \_\_\_\_\_ **(Jesse, Esau, Jezebel)**
43. God created man on \_\_\_\_\_ day. **(sixth, fifth, fourth)**
44. The father of Samuel was called \_\_\_\_\_ **(Jesus, Elikanah, David)**
45. There are \_\_\_\_\_ books in the Old Testament. **(66, 27, 39)**
46. \_\_\_\_\_ betrayed Jesus. **(Peter, Paul, Judas)**
47. \_\_\_\_\_ climbed a tree to see Jesus. **(Bartimeaus, Zacheaus, Lazarus)**
48. Christians give \_\_\_\_\_ during Sunday service. **(offering, sins, food)**
49. \_\_\_\_\_ was given to God as a gift by Hannah. **(John, Samuel, drum)**
50. The head of Philistines army was a giant called \_\_\_\_\_ **(Jesus, Joseph, Goliath)**

# SCHOOL BASED EVALUATION TEST

PENPLUS  
MK2 - 2016

## STD 3 - TERM 2 - 2016

### READING

Name ..... School .....

#### Read the words.

- |                |                |
|----------------|----------------|
| 1. Greengrocer | 9. Village     |
| 2. Mechanic    | 10. Bakery     |
| 3. Trough      | 11. Optician   |
| 4. Kitchen     | 12. Button     |
| 5. Hospital    | 13. Television |
| 6. Chimney     | 14. Ladder     |
| 7. Monitor     | 15. Geese      |
| 8. Perhaps     |                |

#### Read the sentences.

1. She takes care of the animals in the game park.
2. Where is your garden?
3. We learn directions in scouting.
4. Those photographs and pictures are important.
5. We were glad that the thief did not hurt me.

## KUSOMA

#### Soma maneno haya

- |             |             |
|-------------|-------------|
| 1. Nyanya   | 9. Shangazi |
| 2. Rinda    | 10. Mwavuli |
| 3. Suruari  | 11. Chura   |
| 4. Seremala | 12. Mwalimu |
| 5. Kwaheri  | 13. Glasi   |
| 6. Marahaba | 14. Kabati  |
| 7. Kichwa   | 15. Kengele |
| 8. Chakula  |             |

#### Soma sentensi hizi

1. Ng'ombe anatupa maziwa.
2. Meza ya mwalimu ina umbo gani?
3. Mtoto anakula chakula.
4. Mimi napenda kucheza.
5. Paka amemshika panya.

#### Soma hadithi

Baada ya safari ndefu tulifika kwenye kijito cha maji baridi chini ya milima. Hapo tulioga na kula kishuka.