

SCHOOL BASED EVALUATION TEST

PENPLUS
MK2 - 2016

STD 2 - TERM 2 - 2016

MATHEMATICS

Name School

Fill in the missing numbers

1. 32, _____, _____, _____, 36

2. 49, _____, 47, _____, _____

Write in numbers or in figures.

3. 62 = _____

4. Forty eight = _____

5. Fifteen = _____

6. 60 = _____

7. Seventy three = _____

Add:-

8.
$$\begin{array}{r} 9 \\ + 4 \\ \hline \end{array}$$

9.
$$\begin{array}{r} 6 \\ + 5 \\ \hline \end{array}$$

10.
$$\begin{array}{r} 30 \\ + 10 \\ \hline \end{array}$$

11.
$$\begin{array}{r} 8 \\ + 9 \\ \hline \end{array}$$

12.
$$\begin{array}{r} 9 \\ 2 \\ + 6 \\ \hline \end{array}$$

13.
$$\begin{array}{r} 8 \\ 0 \\ + 3 \\ \hline \end{array}$$

Subtract

14.
$$\begin{array}{r} 9 \\ - 3 \\ \hline \end{array}$$

15.
$$\begin{array}{r} 12 \\ - 9 \\ \hline \end{array}$$

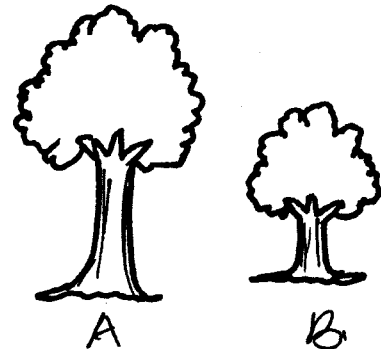
16.
$$\begin{array}{r} 16 \\ - 8 \\ \hline \end{array}$$

17.
$$\begin{array}{r} 15 \\ - 8 \\ \hline \end{array}$$

18.
$$\begin{array}{r} 83 \\ - 2 \\ \hline \end{array}$$

19.
$$\begin{array}{r} 61 \\ - 0 \\ \hline \end{array}$$

20. Which is the short one? _____



Fill in the missing number

21. $3 + \square = 9$

22. $4 + \square = 18$

23. $15 + \square = 15$

24. $11 + \square = 17$

25. $\square + 6 = 12$

26. $\square + 11 = 15$

What is the next number in the pattern?

27. 60, 70, 80, _____

28. 3, 6, 9, _____

29. 30, 40, 50, _____

30. 0, 2, 4, 6, 8, _____

31. 3, 6, 9, 12, 15, _____

Multiply:-

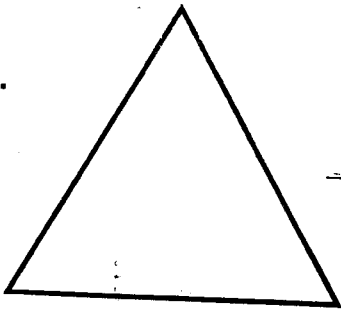
32. $3 \times 5 =$ _____

33. $5 \times 4 =$ _____


34. $3 \times 6 =$ _____

Name the shapes.


35.



36.



37.



38. $90 =$ _____ tens + _____ ones

39. $69 =$ _____ tens + _____ ones

40. $11 +$ $= 15$

41. $15 -$ $= 12$

Divide

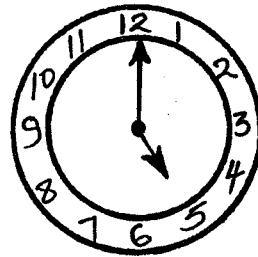
42. $8 \div 4 =$ _____

43. $6 \div 2 =$ _____

44. $15 \div 3 =$ _____

45. $10 \div 5 =$ _____

46. What is the time? _____

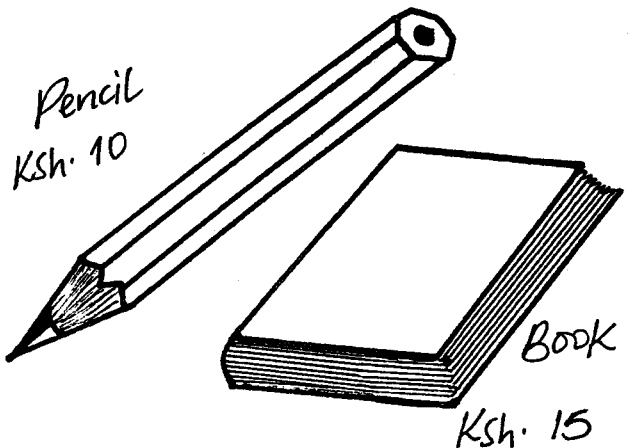


_____ o'clock.

47. Two cows have _____ legs.

48. How many ten shillings are there in Sh 20 coin? _____

49. Which is the last month of the year? _____



50. The cost of a pencil and a book is _____ shillings.

SCHOOL BASED EVALUATION TEST

PENPLUS
MK2 - 2016

STD 2 - TERM 2 - 2016


SCIENCE

Name School

1. We have _____ senses. (4, 5, 6)
2. The _____ is the sense organ for tasting. (eye, tongue, skin)
3. We use _____ and water to wash our handkerchief. (soap, fat, ash)
4. We should keep our fingernails _____ and clean. (long, short, dirty)
5. When seeds grow into new plants we say that the seeds have _____ (grown, germinated, died)
6. The weather is _____



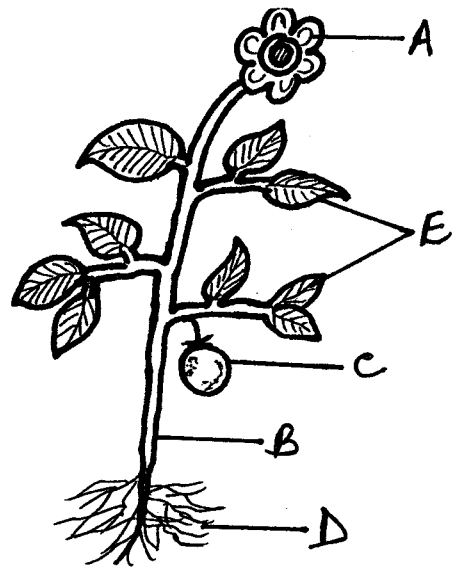
- (calm, windy, rainy)
7. To brush our teeth we need a _____ and toothpaste. (milk, brush, polish)
 8. This is a _____ leaf.



- (bean, maize, banana)
9. All rubbish picked up in the compound should be thrown in the _____ (rubbish pit, classroom, desk)
 10. We should not share _____ (classroom, handkerchief, books)
 11. Which of these is a wild animal? _____ (Cow, Lion, Dog)

12. People wear _____ on a cold day. (heavy clothes, light clothes, wet clothes)

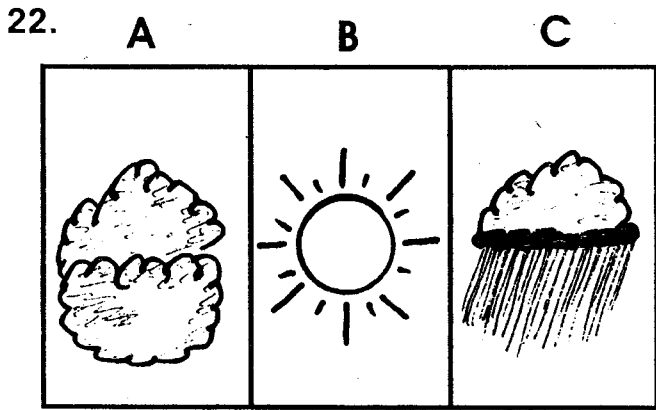
Name the parts of a plant



13. Part E is called _____
14. Part A is called _____
15. Part B is called _____
16. Part C is called _____
17. Part D is called _____ (stem, roots, flower, leaf, fruit)
18. We cook _____ before eating. (oranges, maize, mangoes)
19. People carry _____ when it is raining. (coat, umbrella, panga)
20. The eyes are a sense organ for _____




- (hearing, tasting, seeing)
21. Ripe mango tastes _____ (bitter, sour, sweet)



Which day was best for washing _____ clothes. (cloudy, sunny, rainy)

23. People plant seeds on a _____ day. (sunny, rainy, cloudy)
24. We model with _____ soil. (clay, sand, loam)
25. Moving _____ is called wind. (water, air, cloud)
26. We boil water to kill _____. (lice, germs, fleas)
27. A rat lives in a _____. (water, grass, hole)
28. We eat the stem of a _____. (carrot, sugarcane, cabbage)
29. We wash our hands _____ visiting the latrine. (before, after, when)
30. This is a _____



(fruit, seed, vegetable)


31. Plants that grow where they are not wanted are called _____. (grass, weeds, seeds)
32. A _____ is used to carry things. (donkey, cow, goat)
33. Mouth, eyes, ears and nose are found on the _____. (head, chest, stomach)

34. We smell with our _____ (eyes, ears, nose)
35. Lemon juice tastes _____. (sour, bitter, sweet)
36. This is a _____ leaf.



(bean, maize, banana)

37. _____ come out of the nose. (Wax, Water, Mucus)
Name four personal items:
38. _____
39. _____
40. _____
41. _____ (books, handkerchief, cup, toothbrush, rubber, socks, desk, comb, balls, plate)
42. _____ makes holes in maize and beans. (Lice, weevils, ticks)
43. Socks are worn in the _____. (hands, feet, head)
44. New plants grow from the _____. (flowers, fruits, seeds)
45. Always wash hands _____ eating. (before, during, after)
46. Plants that grow where they are not wanted are called _____. (wind, fruits, weed)
47. _____ is a sense organ. (Hair, Mouth, Nose)
48. Waste papers make our school compound _____. (dirty, clean, beautiful)
49. This is a _____



(kettle, watering can, jerrycan)

50. Those who cannot see are _____. (blind, deaf, dumb)

SCHOOL BASED EVALUATION TEST

STD 2 - TERM 2 - 2016

ENGLISH

PENPLUS
MK2 - 2016

Name School.....

Dictation.

1. _____
2. _____
3. _____
4. _____
5. _____

Singular

Plural

- | | | | |
|-----|-------|---|-------|
| 6. | Ox | - | _____ |
| 7. | Tooth | - | _____ |
| 8. | Woman | - | _____ |
| 9. | Box | - | _____ |
| 10. | Fruit | - | _____ |

Match the words.

- | | |
|------------|---------|
| 11. Police | room |
| 12. Eye | side |
| 13. Out | lashes |
| 14. Bed | teacher |
| 15. Class | man |

Write the words in opposite.

16. Outside - _____
17. Thin - _____
18. Down - _____
19. Close - _____
20. Sell - _____

Use 'has' or 'have'

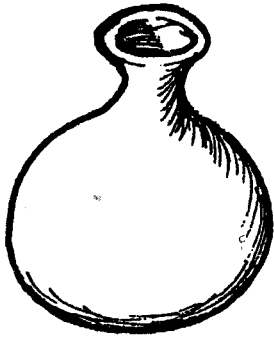
21. _____ he gone to school.
22. We _____ just finished.
23. I _____ passed my exam.
24. Who _____ seen my pen.
25. She _____ a nice doll.

Write the doing word (ing)


26. Work - _____
27. Jump - _____
28. Laugh - _____
29. Sit - _____
30. Go - _____

Name these pictures.


31.




32.



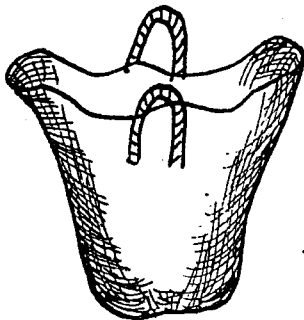
33.



34.



35.



(basket, pot, door, chair, glass)

Fill in the gaps.

36. Pl ____ t ____

37. H ____ us ____

38. Kn ____ f ____

39. P ____ t

40. Sw ____ at ____ r

Use 'is' or 'are'.

41. She _____ playing.

42. We _____ reading .

43. Who _____ calling?

44. The pupils _____
going home.

45. It _____ my pet.

Write in words.

46. 9 - _____

47. 6 - _____

48. 17 - _____

49. 14 - _____

50. 5 - _____

SCHOOL BASED EVALUATION TEST

DARASA LA PILI MUHULA WA PILI - 2016

PENPLUS
MK2 - 2016

KISWAHILI

Jina..... Shule

Imla.

1. _____
2. _____
3. _____
4. _____
5. _____

Chora picha.


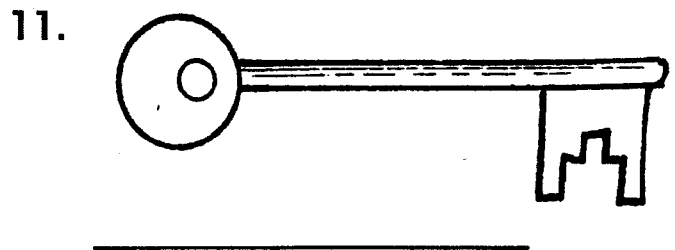
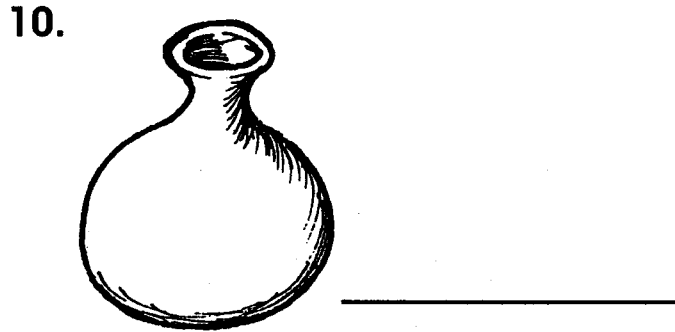
6. Chupa 7. Kikapu

--	--

8. Nyoka 9. Jua

--	--

Andika majina ya picha.



Jaza pengo.

14. D ___ w ___ ti
15. Mp ___ r ___
16. P ___ ng ___
17. Kal ___ m ___

Andika kwa umoja.

Umoja

Wingi

18. _____ - Miguu
19. _____ - Mikate
20. _____ - Viberiti
21. _____ - Vitabu
22. _____ - Wanafunzi

Andika majina haya vizuri.

23. totom - _____
24. masaki - _____
25. bukita - _____
26. kekam - _____

Unda maneno ukianza na

27. P - _____
28. Mw - _____
29. Da - _____
30. Me - _____

Andika kinyume.

31. Simama - _____
32. Kuja - _____
33. Teremka - _____
34. Lia - _____

(keti, cheka, panda, enda)

Andika jibu sahihi.

35. Hamjambo _____
36. Shikamoo _____
37. Habari gani _____

**Kamilisha sentensi hizi
ukitumia:-**

(cha, la, wa, ya)

38. Kitabu _____ mwalimu.
39. Uteo _____ mama.
40. Mtoto _____ nyoka.
41. Kiota _____ ndege.

Andika tarakimu kwa maneno.

42. 20 - _____
43. 15 - _____
44. 55 - _____
45. 6 - _____

**Kamilisha methali na
vitendawili**

46. Fuata nyuki ule _____
47. Nyumba yangu haina mlango

48. Dawa ya moto ni _____
49. Pole pole ndio _____
50. Bendera hufuata _____

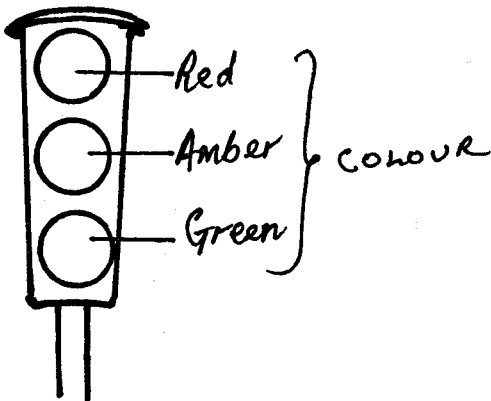
SCHOOL BASED EVALUATION TEST

PENPLUS
MK2 - 2016

STD 2 - TERM 2 - 2016 SOCIAL STUDIES/C.R.E.

Name School

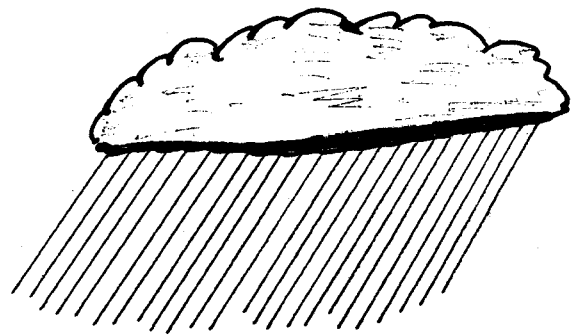
1. We go to school to _____ many things. (learn, cheat, play)
2. Our national flag has _____ colours. (2, 4, 8)
3. The room where teachers meet and do their work is called _____. (staffroom, school, store)
4. We wear gumboots when the weather is _____. (windy, sunny, rainy)
5. Animals kept at home are called _____ animals. (wild, domestic, dangerous)
6. We should keep our school compound _____. (dirty, clean, untidy)
7. We should _____ our school rules. (disobey, obey, hate)
- 8.



This is a _____ (road sign, traffic light, advert)

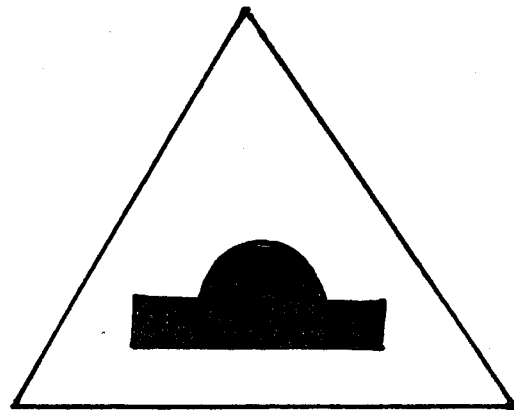
9. When we fall sick we go to _____. (school, hospital, church)
10. We rub the blackboard using a _____. (broom, duster, paint)
11. We put _____ in the dustbin. (book, rubbish, pencil)

12. We wear _____ when we are going to school. (uniform, suit, dress)
13. The weather is _____



(sunny, wind, rainy)

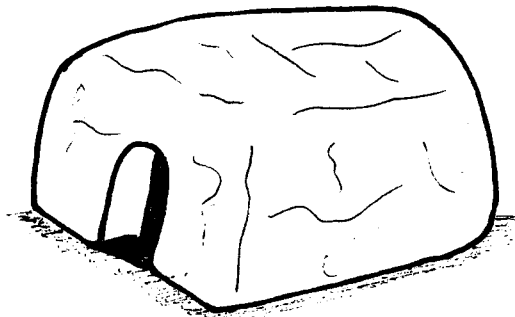
14. _____ is used for sweeping. (Broom, Brush, Chair)
15. We _____ our hands after using the toilet. (wipe, wash, wave)
16. We need a _____ to play on at school. (wall, playground, desks)
17. This road sign shows _____



(bend, bumps, children crossing)

18. We should cross the road at the _____ crossing. (corner, junction, zebra)

19. A _____ is kept at home.
(goat, lion, zebra)
20. We should _____ when the traffic light shows green. (stop, go, get ready)
21. The walls of this house are made of _____




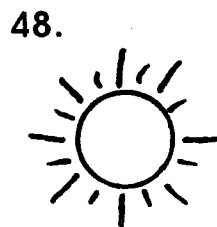
(cowdung, timber, stone)

22. Playing on the road can cause _____ (accidents, health, running)
23. When I play I become _____ (sick, weak, strong)
24. They grow crops and keep animals. They are _____ (farmers, traders, teachers)
25. The house for cooking food is called _____ (kitchen, office, granary)
26. The school flag is raised on _____ (Monday, Thursday, Sunday)
27. The people who live near our school are our _____ (enemies, neighbours, strangers)
28. All children should go to _____ to learn. (hospital, school, shamba)
29. When the _____ ring we change from one activity to another. (flag, bell, timetable)
30. Many trees growing together make a _____ (bush, forest, river)

C.R.E.

31. _____ are a gift from God. (Children, Books, Cows)
32. There are _____ books in the Bible. (66, 27, 39)

33. _____ is the day a person was born. (Birthday, Worship, Christmas)
34. Jesus was born on _____ day. (Christmas, Monday, January)
35. Worship is showing _____ to God. (respect, disobedience, hatred)
36. Zaccheaus was a _____ rich man. (tall, short, fat)
37. God made man using _____ (soil, stem, stone)
38. We are sons of _____ (Adam, God, Satan)
39. Jesus taught his _____ the Lord's prayer. (disciples, christian, enemies)
40. A good leader tells _____ (lies, truth, nothing)
41. When I see a poor man I should not _____ at him. (look, laugh, cry)
42. We should _____ our enemies. (hate, love, fight)
43. Ruth's mother-in-law was _____ (Peninnah, Naomi, Tabitha)
44. Jesus Christ came to _____ us. (kill, help, save)
45. The father of Abel and Cain was _____ (Abraham, Adam, Jacob)
46. Adam and _____ were the first parents. (Sarah, Eve, Mary)
47. We talk to God through _____ (players, prayers, dancing)
- Name the pictures.



- _____ (house, church, moon, sun)
50. Jesus was tempted by _____ (Judas, Satan, Peter)

SCHOOL BASED EVALUATION TEST

PENPLUS
MK2 - 2016

STD 2 - TERM 2 - 2016

READING

Name School

Read the words.

- | | |
|--------------|------------|
| 1. Butcher | 9. Smaller |
| 2. Carpenter | 10. Chalk |
| 3. Spoon | 11. Tailor |
| 4. People | 12. Right |
| 5. Housefly | 13. Grass |
| 6. Organise | 14. Maize |
| 7. Perform | 15. Drop |
| 8. Eleven | |

Read the sentences.

1. Who is your neighbour?
2. The carpenter is in his workshop.
3. Our school compound is big.
4. I like porridge.
5. Yes, we can.

Read the story.

John was given a duck by his grandfather. A duck eats worms and fish.

KUSOMA

Soma maneno haya

- | | |
|---------------|--------------|
| 1. Mashariki | 9. Zidisha |
| 2. Upepo | 10. Runinga |
| 3. Mstatili | 11. Suruali |
| 4. Binadamu | 12. Kipepeo |
| 5. Oktoba | 13. Laghai |
| 6. Thelathini | 14. Shughuli |
| 7. Msimamo | 15. Adhuhuri |
| 8. Kivuko | |

Soma sentensi hizi

1. Mkuki wa mwindaji.
2. Gari lake lilinunuliwa kwa bei ghali.
3. Kipendacho roho ni dawa.
4. Ana wasiwasi kama mwasi?
5. Kuwa na siku njema.

Soma hadithi

Siku moja Juma alienda kuwinda. Aliandamana na mbwa wake wawili ambao walikuwa wakali sana.