



HIGH FLYER SERIES EVALUATION TEST
DARASA LA TATU – MWAKA 2016
KUSOMA

TAREHE:

JINA: SHULE:

Soma maneno haya:-

- | | | |
|----------------|--------------|--------------|
| 1. Pwaguzi | 8. Farasi | 15. Samahani |
| 2. Kipepeo | 9. Kichinjio | 16. Nywele |
| 3. Kiatu | 10. Sungura | 17. Zabibu |
| 4. Kisogo | 11. Sebuleni | 18. Gwaride |
| 5. Nyama | 12. Sokoni | 19. Papai |
| 6. Wanapendana | 13. Mbweha | 20. Maembe |
| 7. Zulia | 14. Shimo | |

Soma sentensi zifuatazo:-

21. Mrembo apambwe.
22. Baiskeli hizi haziendi.
23. Mmea hupandwa kwenye udongo.
24. Chakula hiki ni changu.
25. Alianguka sakafuni pu!





HIGH FLYER SERIES EVALUATION TEST
STANDARD THREE. – YEAR 2016
READING

DATE:

NAME: SCHOOL:

Read these words

- | | | |
|------------|-------------|----------------|
| 1. Poem | 8. Chair | 15. Ground |
| 2. Train | 9. Knife | 16. Toothbrush |
| 3. Kitten | 10. Dustbin | 17. Register |
| 4. Packet | 11. Learn | 18. Kettle |
| 5. Evening | 12. Knife | 19. Hammer |
| 6. Sister | 13. Holiday | 20. Store |
| 7. Train | 14. Doctor | |

Read these sentences

21. Who won the race?
22. I have never been to this home.
23. My teacher is tall and strong.
24. I helped in washing dishes.
25. She is smarter than her friend.





HIGH FLYER SERIES EVALUATION TEST
STANDARD THREE – YEAR 2016
CHRISTIAN RELIGIOUS EDUCATION

DATE:

NAME: SCHOOL:

1. God wants all His creation to _____ Him.
(fear, worship, hide from)
2. Zacheaus was a _____.
(fisherman, disciple, tax-collector)
3. Cain and Abel were the sons of _____. (Noah, Adam, Eli)
4. Another name for Tabitha was _____. (Dorcas, Mary, Ruth)
5. Muslims worship on a _____. (Sunday, Saturday, Friday)
6. Jacob loved his son _____ more than others.
(Benjamin, Reuben, Joseph)
7. The last book in the Bible is _____. (Genesis, Mark, Revelation)
8. Adam and Eve _____ God.
(hated, disobeyed, obeyed)
9. God asked Abraham to sacrifice his _____. (son, wife, brother)
10. The promised land of the Israelites was in _____. (Egypt, Canaan, Bethlehem)
11. Angel _____ appeared to Mary and Joseph and told them about Jesus birth.
(Isaiah, Gabriel, Michael)
12. Prophet _____ was helped by the widow of Zarephath.
(Elijah, Isaiah, Nehemiah)
13. Daniel prayed _____ times a day.
(five, three, four)
14. God _____ to be with us always.
(refused, promised, hated)
15. We celebrate the birth of Jesus on _____ day.
(Pentecost, Easter, Christmas)
16. _____ led the Israelites from Egypt. (Moses, Aaron, Job)
17. Jacob's name changed to _____. (Israel, rock, Emmanuel)
18. We should _____ our sins.
(hide, repent, ignore)
19. _____ and Esau were brothers.
(Jacob, Joseph, Shem)
20. God created _____ to be giving us light at night. (moon, sun, clouds)





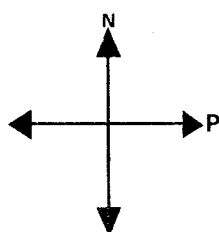
HIGH FLYER SERIES EVALUATION TEST
STANDARD THREE – YEAR 2016
SOCIAL STUDIES

DATE:

NAME: SCHOOL:

1. Two or more locations make a _____
(district, division, sub-location)

2.



The point marked
P shows _____ direction.
(South, East, West)

3. We add _____ to the soil to
make fertile.
(water, sand, manure)

4. My mother's sister is my _____.
(aunt, grandmother, sister)

5.



The weather today
is _____.
(cloudy, windy, rainy)

6. Heavy rain causes _____.
(drought, famine, floods)

7. _____ is not a means of
transport.
(Car, Bicycle, Telephone)

8. Green colour in our national flag
stands for _____.
(blood, land, people)

9. We should drink water that has
been _____ and cooled.
(dirty, coloured, boiled)

10. During dry season, farmers
_____ the crops.
(irrigate, uproot, weed)

11. Bananas, maize and mangoes
are some of the _____ in our
district. (fruits, estates, crops)

12. Dairy cows are mainly kept
for _____.
(meat, milk, skin)

13. When there is no peace, people
are _____.
(happy, celebrate, unhappy)

14. An assistant chief is in charge of
a _____.
(sub-location, division, location)




15. Churches and mosques are places of _____.
(playing, worship, meetings)

16. We should protect soil from being carried away by the _____.
(light, rain, animals)

17. A _____ is an animal that helps us to carry goods.
(Horse, Bull, Camel)

18. _____ is the movement of people and goods from one place to another.
(Transport, Communication, Walking)

19.



The diagram shows _____.
(zebra crossing, four roads, roundabout)

20. On 1st June, we celebrate _____ holiday.
(Jamhuri, Madaraka, labour)

21. Aeroplanes land in _____.
(seaport, airport, bus-station)

22. People who do bad things to children should be _____.
(killed, arrested, praised)

23. _____ are places where we buy and sell things.
(Market, Farm, Schools)

24. River, rain and lakes are _____ of water.
(uses sources storage)

25. The national anthem has _____ verses. (2, 3, 4)

26. We cross a river using a _____.
(road, bridge, car)

27. Children should stop moving alone _____.
(at night, in the house, at school)

28. _____ help us in ploughing the farm. (Goat, Sheep, Oxen)

29. _____ guards our homes.
(Cats, Dogs, Donkeys)

30. I have many trees. I give you firewood and timber. I am a _____.
(river, swamp, forest)





HIGH FLYER SERIES EVALUATION TEST

STANDARD THREE – YEAR 2016

SCIENCE

DATE:

NAME: SCHOOL:

1. We cannot see the _____ at night in the sky. (moon, clouds, sun)
2. _____ is not a special sound. (Screaming, Singing, Hooting)

Use the weather chart below to answer questions 3-6

Days	Morning	Evening
Monday		
Tuesday		
Wednesday		
Thursday		
Friday		

3. It was _____ throughout on Wednesday. (cloudy, rainy, sunny)
4. How many days did it rain? (4, 3, 5)
5. Umbrellas were used on _____ in the morning. (Monday, Thursday, Friday)
6. The best day for drying maize was on _____. (Friday, Thursday, Wednesday)
7. Our sense organ for touch is the _____. (Nose, tongue, skin)

Draw the following sense organs:


8. Ear



9. Eye



10. Nose



11. An elephant appears small when it is _____. (near, far)

12. _____ cannot burn. (Charcoal, Kerosene, Water)

13. Deaf people use _____ for communication. (light, gestures, letters)

14. Rotten eggs smell _____. (good, bad)

15.



This is a _____ face. (sad, happy)

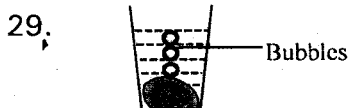
16. _____ is not good for our health. (Food, Excess Sleep, Rest)

17. We eat roots of _____. (cassava, onion, sugarcane)

18. _____ is not a fruit. (Pawpaw, Orange, Carrot)



19. _____ keeps away bad smell in the latrine. **(Soap, Water, Hot Ash)**
20. Sisal plant grows in _____ areas. **(wet, dry)**
21. Unwanted plants on the farm are called _____. **(weeds, crops, fruits)**
22. Herbal medicine is got from _____. **(animals, chemicals, plants)**
23. Feathers are body coverings of _____. **(fish, chicken, dogs)**
24. _____ cannot fly. **(Flamingo, Ostrich, Weaver Bird)**
25. _____ is an example of a crop that is used for making cooking oil. **(Sisal, Sunflower, Cotton)**
26. The best weather for winnowing is _____. **(rainy, cloudy, windy)**
27. A doctor who treats our eyes is called _____. **(nurse, dentist, optician)**
28. A fish lives in _____. **(water, air, soil)**





The experiment shows that soil has _____. **(water, air, animals)**

Match these animals with how they protect themselves.

- | Animal | How it protects itself. |
|-------------------------------------------------------------------------|--------------------------------|
| 30. Chameleon | Playing dead |
| 31. Wasp | Coiling |
| 32. Lady bird | Changing colour |
| 33. Millipede | Stinging |
| 34. We must _____ a whistle to produce sound. (hit, blow, shake) | |

35. The sun sets in the _____. **(south, west, east)**
36. Wild animals live in _____ habitats. **(man made, natural)**
37. A frog moves by _____. **(crawling, flying, hopping)**
38. A _____ reflects a lot of light. **(mirror, clear glass, wood)**
39. Which soil feels sticky when wet? **(loam, clay, sand)**
40. Cement mixes easily with _____. **(clay, loam, sand)**
41. We should drink _____ water. **(boiled, clean, sweet)**
42. _____ makes work easier. **(Food, Machines, Energy)**

Name these simple tools

43.  44. 

45.  **(Axe, Saw, Hammer)**

46. We cannot see _____. **(smoke, air, dust)**
47. Things that vibrate produce _____. **(sound, heat, light)**
48. _____ keeps water cold. **(Tank, Bottle, Pot)**
49. Pipes are used for _____ water. **(storing, transporting, keeping)**
50. Which small animal does not have a shell? **(snail, tortoise, millipede)**





HIGH FLYER SERIES EVALUATION TEST
DARASA LA TATU – MWAKA 2016
KISWAHILI: LUGHA

TAREHE:

JINA: SHULE:

Imla

1. _____
2. _____
3. _____
4. _____
5. _____

Andika vizuri

6. sape _____
7. chanamsi _____
8. boau _____
9. shlue _____
10. kapa _____

Andika wingi

11. Kiazi _____
12. Chombo _____
13. Mama _____
14. Kalamu _____
15. Kioo _____

Tumia "hiki" na "hivi"

16. Kiatu _____ ni changu.

17. Vitabu _____ vimeraruka.

18. Kisu _____ kimenikata.

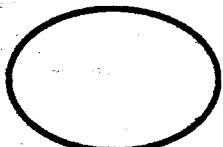
Kanusha maneno

19. Amekula _____
20. Kimbia _____
21. Cheka _____
22. Simama _____
23. Angalia _____

Andika kwa nambari au jina

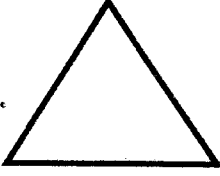
24. 58 _____
25. Sitini na moja _____
26. Mia mbili _____
27. 0 _____
28. 103 _____

Maumbo


29.  _____



30.



31.



Unda maneno

32. M _____

33. Ka _____

34. Tha _____

35. Ba _____

Andika kwa wakati uliopita

36. Mama ataenda sokoni _____

37. Nitalala kitandani _____

38. Huyu anacheza _____

Kamilisha sentensi

39. Rangi ya maziwa ni _____

40. Mimi huandika na _____

41. Nina macho mangapi _____

Andika kinyume

42. Shangazi _____

43. Mnene _____

44. Nyeusi _____

45. Mrefu _____

Tumia "kile au "vile"

46. _____ ni kioo changu.

47. _____ ni vitu vyetu.

Jaza pengo

48. Ng ___ o

49. D ___ wat ___

50. K ___ f ___ a





HIGH FLYER SERIES EVALUATION TEST
STANDARD THREE – YEAR 2016
ENGLISH: LANGUAGE

DATE:

NAME: SCHOOL:

Dictation

1. _____
2. _____
3. _____
4. _____
5. _____

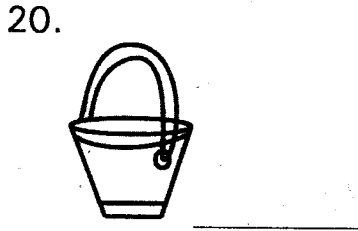
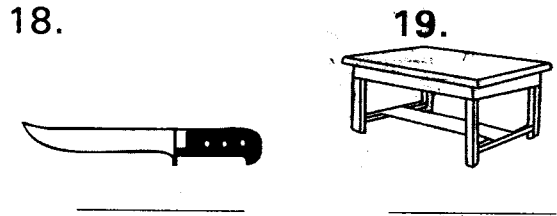
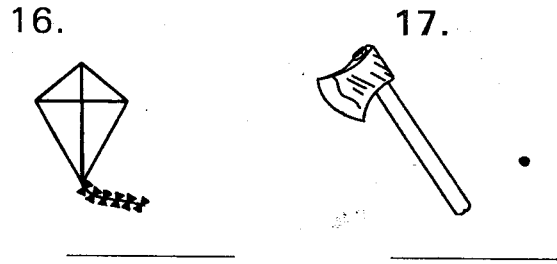
Fill in the missing letters

6. Ch ___ ld
7. A ___ le
8. Stat ___ on
9. Hospit ___ l
10. W ___ m ___ n

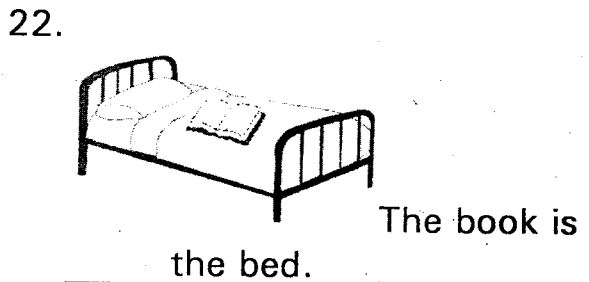
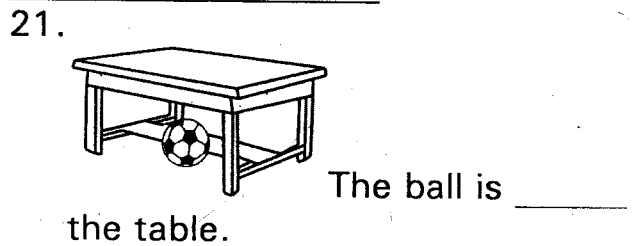
Find the endings

11. Arm _____
 12. Tooth _____
 13. Head _____
 14. Some _____
 15. Sun _____
- (set, where, brush, teacher, chair)

Name the pictures



Use 'in', 'on', 'under'




23.



The water is _____ the glass

24.



The clothes are _____
the box

25.



The boy is _____ the tree

Complete

26. As _____ as honey

27. As _____ as ice

28. As _____ as a king

29. As _____ as charcoal

30. As _____ as a feather
(happy, cold, black, sweet, light)

Choose the correct word

31. The baby _____ crying.
(are, is, were)

32. Give me _____ egg. (is, an, a)

33. Kamau _____ a teacher.
(has, is, were)

34. The girls _____ absent.
(was, are, is)

35. He has _____ umbrella.
(an, a, is)

Write well

36. okob _____

37. puc _____

38. gato _____

39. batle _____

40. ligr _____

Complete

41. A _____ sells fish.

42. A _____ sells meat.

43. A _____ looks after sick people.

44. A _____ sells in a shop.

45. A _____ is a place of worship.
(butcher, church, fishmonger,
shopkeeper, nurse)

Use 'was' or 'were'

46. The ball _____ lost.

47. John _____ riding a bicycle.

48. Where _____ you yesterday?

49. They _____ going to the market.

50. All the pawpaws _____ bad.





HIGH FLYER SERIES EVALUATION TEST
STANDARD THREE – YEAR 2016
MATHEMATICS



DATE:

NAME: SCHOOL:

1.
$$\begin{array}{r} 428 \\ - 13 \\ \hline \end{array}$$

2.
$$\begin{array}{r} 245 \\ + 245 \\ \hline \end{array}$$

3.
$$\begin{array}{r} 592 \\ - 290 \\ \hline \end{array}$$

4. $46 + 2 = \underline{\quad}$

Write in figures

5. Three thousand and eighty =

6. Four thousand, two hundred and sixteen =

7. 2 weeks = days

Expand

8. $7024 = \underline{\quad} + \underline{\quad} + \underline{\quad} + \underline{\quad}$

9. Share 45 sweets among 5 children. Each will get sweets

10. 428, , 430, 431

11. $\frac{2}{8} + \frac{3}{8} = \underline{\quad}$

12. $7 \times \underline{\quad} = 28$

13. What number comes before 463?

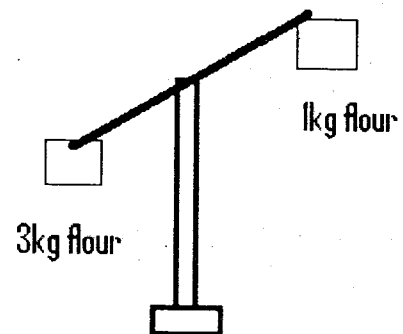
14. $132 + 17 + 6 = \underline{\quad}$

15. Take away 300 from 800 =

16.	Sh	cts
	99	60
	<u>- 29</u>	<u>40</u>


17. A pencil costs sh 5. What is the cost of 5 pencils?

18.



1kg flour is than 3kg flour. (heavier, lighter, same)

19. Shade $\frac{2}{5}$



20. thousands hundreds
 tens ones = 2073

21. John had 63 goats. He sold 25 goats. He was left with _____ goats

22. $23 + 12 =$ _____

23. $480 + 32 =$ _____

24. _____ + 30 = 70

25. $600 -$ _____ = 200

26. 2 tens 4 ones = _____

27. Two years have _____ months

28. Monday, _____, Wednesday

29. $243 - 28 =$ _____

30. What is the difference between 560 and 340? _____

31.
$$\begin{array}{r} 2439 \\ + 104 \\ \hline \end{array}$$

32.
$$\begin{array}{r} 438 \\ - 100 \\ \hline \end{array}$$

What is the next number

33. 0, 2, 4, 6, _____

34. 4, 8, 12, 16, _____

35. The fourth month of the year is _____

36.
$$\begin{array}{r} 93 \\ + 17 \\ \hline \end{array}$$

37.
$$\begin{array}{r} 56 \\ - 28 \\ \hline \end{array}$$

38. Subtract 9 from 20 = _____

39. Saidi has 36 balls and Otieno has 86 balls. How many balls do they have altogether? _____

40. $27 \div 9 =$ _____

41.
$$\begin{array}{r} 8 \\ \times 4 \\ \hline \end{array}$$

42.
$$\begin{array}{r} 10 \\ \times 6 \\ \hline \end{array}$$

43. $\frac{8}{8} - \frac{2}{8} =$ _____

44. $\frac{1}{3}$ of 30 = _____

45. What is a quarter of 12 = _____

46. $58 - 39 =$ _____

47. Write 113 in words _____

48. What is the place value of digit 5 in 2573? _____

49. Circle the biggest number 346, 839, 389, 643

50. Share 10 bananas between 2 boys. Each boy will get _____ bananas









HIGH FLYER
SERIES
003

HIGH FLYER SERIES EVALUATION TEST

STANDARD THREE – YEAR 2016

MARKING SCHEME

ENGLISH	KISWAHILI	MATHS	SCIENCE	SOCIAL STUDIES	C.R.E.
1. –	1. Upepo	1. 415	1. Sun	1. Division	1. Worship
2. –	2. Fedha	2. 490	2. Singing	2. East	2. Tax-collector
3. –	3. Buriani	3. 302	3. Sunny	3. Manure	3. Adam
4. –	4. Ushanga	4. 48	4. 3	4. Aunt	4. Dorcas
5. –	5. Dereva	5. 3080	5. Friday	5. Rainy	5. Friday
6. Child	6. Pesa	6. 4216	6. Wednesday	6. Floods	6. Joseph
7. Apple	7. Msichana	7. 14	7. Skin	7. Telephone	7. Revelation
8. Station	8. Ubao	8. 7000 + 000 + 20	8. 	8. Land	8. Disobeyed
9. Hospital	9. Shule	9. 9	9. 	9. Boiled	9. Son
10. Woman, women	10. Paka	10. 429	10. 	10. Irrigate	10. Canaan
11. Armchair	11. Viazi	11. 5/8	11. Far	11. Crops	11. Gabriel
12. Toothbrush	12. Vyombo	12. 4	12. Water	12. Milk	12. Elijah
13. Head teacher	13. Wamama	13. 462	13. Gestures	13. Unhappy	13. Three
14. Somewhere	14. Kalamu	14. 155	14. Bad	14. Sub-location	14. Promised
15. Sunset	15. Vioo	15. 500	15. Happy	15. Worship	15. Christmas
16. Kite	16. hiki	16. Sh 70 20cts	16. Excess sleep	16. Rain	16. Moses
17. Axe	17. hivi	17. Sh 25	17. Cassava	17. Camel	17. Israel
18. Knife	18. hiki	18. Lighter	18. Carrot	18. Transport	18. Repent
19. Table	19. Hajakula	19. 	19. Hot ash	19. Roundabout	19. Jacob
20. Bucket	20. Usikimbie	20. 2 thousands 0 hundreds 7 tens 3 ones	20. Dry	20. Madaraka	20. Moon
21. under	21. Usicheke	21. 38	21. Weeds	21. Airport	
22. on	22. Usisimame	22. 35	22. Plants	22. Arrested	
23. in	23. Usiangalie	23. 512	23. Chicken	23. Market	
24. in	24. Hamsini nane	24. 40	24. Ostrich	24. Sources	I.R.E.
25. under	25. 61	25. 400	25. Sunflower	25. 3	1. Fajr
26. sweet	26. 200	26. 24	26. Windy	26. Bridge	2. Adhana
27. cold	27. Sufuri	27. 24	27. Optician	27. At night	3. Allah
28. happy	28. Mia moja na tatu	28. Tuesday	28. Water	28. Oxen	4. Prophet
29. black	29. Duara dufu	29. 215	29. Air	29. Dogs	5. Uncle
30. light	30. Pembe tatu	30. 220	30. Changing colour	30. Forest	6. Makka
31. is	31. Nyota	31. 2543	31. Stinging		7. Zakariya
32. an	32. Mvulana ...	32. 328	32. Playing dead		8. Salat
33. is	33. Kaka ...	33. 8	33. Coiling		9. Nur
34. are	34. Thamani ...	34. 18	34. Blow		10. Wudhu
35. an	35. Babu ...	35. April	35. West		11. Respects
36. Book	36. Mama alienda sokoni	36. 100	36. Natural		12. Dhul-Hijja
37. Cup	37. Nihilala kitandani	37. 28	37. Hopping		13. Idd
38. Goat	38. Huyu alicheza	38. 11	38. Mirror		14. Taurat
39. Table	39. Nyeupe	39. 122	39. Clay		15. Firaun
40. Girl	40. Kalamu	40. 3	40. Sand		16. Ali
41. Fishmonger	41. Mawili	41. 32	41. Boiled		17. Faith
42. Butcher	42. Mjomba	42. 60	42. Machines		18. Worship
43. Nurse	43. Mwembamba	43. 6/8	43. hammer		19. Idols
44. Shopkeeper	44. Nyeupe	44. 10	44. Axe		20. Allah
45. Church	45. Mfupi	45. 4	45. Saw		
46. was	46. kile	46. 19	46. Air		
47. was	47. vile	47. One hundred and thirteen	47. Sound		
48. were	48. Nguo	48. Hundreds	48. Pot		
49. were	49. Dawati	49. 839	49. Transporting		
50. were	50. Kifua au kofia	50. 5	50. Millipede		