

Jaza kifungu hiki kwa kuchagua jibu sahihi zaidi.


Jua 1 na kupenyeza 2 yake baina ya miti 3 ya matunda iliyosimama 4 haiba katika 5 ya mzee Tambo, baada ya usiku 6 wa gharika. Ndege 7 wakiimba 8 furaha. Vyura hali kadhalika 9 na maji yaliyojaza mito na visima yakaunga mkono 10 uliokuwa ukiimbwa na viumbe 11. Ama kweli sasa ilionyesha 12 kwamba mvua ambayo iliwatia wakulima jakamoyo imesasili.

- | | | | | |
|-----|----------------|---------------|-----------------|----------------|
| 1. | A. illichomoza | B. ulichomoza | C. lilichomozwa | D. kilichomoza |
| 2. | A. mwanga | B. mionzi | C. mwangaza | D. ukali |
| 3. | A. marefu | B. ndefu | C. refu | D. mirefu |
| 4. | A. ya | B. kwa | C. na | D. kwenye |
| 5. | A. nyumbani | B. makaasi | C. makazi | D. mahali |
| 6. | A. kucha | B. kutwa | C. yote | D. kubwa |
| 7. | A. zilisikika | B. ilisikika | C. yalisikika | D. walisikika |
| 8. | A. na | B. kwa | C. wa | D. kwenye |
| 9. | A. vililia | B. yalilia | C. walilia | D. zililia |
| 10. | A. wimbo | B. kelele | C. kamsa | D. nyimbo |
| 11. | A. hivi | B. hizi | C. hawa | D. hivo |
| 12. | A. wasi | B. wazi | C. washi | D. waasi |

Chagua jibu sahihi

13. Msimu wa mvua kidogo ni _____ nao _____ ni msimu wa baridi nyingi.
A. kipupwe, masika B. masika kipupwe
C. vuli, kipupwe D. masika, vuli
14. Upinde, mshale na manati ni _____
A. zana za kilimo

- B. ala za muziki
C. vifaa vya seremala
D. zana za vita
15. Hali ya kuwa kike au kiume ni _____
A. jinsia B. umbo
C. utu D. jinsi

16. Jengo la nta ambalo nyuki huwekea asali huitwa
 A. seka B. sega
 C. saga D. kisali
17. Kupata jiko ni _____
 A. kula B. kuowa
 C. kupika D. kuoia
18. Mwanamke _____ ndiye aliyemzalisha shangazi.
 A. mkunga B. mkungu
 C. mkonga D. mkongwe
19. Mimi sina _____
 A. wajamaa wowote B. jamaa zozote
 C. jamaa yoyote D. jamaa yeyote
20. Amina amevaa shati _____
 A. leupe B. nycupe
 C. jeupe D. mweupe
21. Umbo hili linaitwa _____

- A. mistari mirefu B. mistari sambamba
 C. mistari sawa D. mistari miwili
22. Kipi ni kifaa cha ufundi?
 A. Patasi B. Ndara
 C. Teo D. Pafujo
23. Ndugu wa kike wa mamangu nitamwitaje?
 A. Shangazi B. Ami

- C. Mama D. Hale
24. *Andika kwa wingi;*
 Kijisu kile kimepotea chote.
 A. Majisu yale yamepotea yote
 B. Visu vile vile vimepotea vyote
 C. Vijisu vile vimepotea vyote
 D. Makisu yale yamepotea yote
25. Miezi minane ni _____ ya mwaka mzima?
 A. Sudusi nne B. Thuluthi mbili
 C. Humusi nne D. Tumusi nne
26. Kumi na moja elfu na mia moja na kumi;
 A. 11010 B. 11110
 C. 1110 D. 1101110
27. Nini wingi wa ukumbi?
 A. Makumbi B. Mikumbi
 C. Kumbi D. Umbi
28. Mwezi wa Disemba wakristo _____ siku kuu ya
 Krismasi.
 A. husheherekea B. husherehekea
 C. hushekeya D. usherehekea
29. Vitu vya chuma huingia _____ upesi.
 A. kitu B. katu
 C. kuntu D. kutu
30. Ni ipi isiyo sehemu ya jicho?
 A. Kope B. Nyusi
 C. Mbori D. Mboni

Soma taarifa hii kisha ujibu maswali yafuatayo

Ulegevu ni adui, kwa maisha ya faraja
Mtu haumnyanyui, toka chini juu kuja
Kisha hautuzindui, kufariji zetu haja
Ulegevu ni adui, nyumba ya umaskini

Kila aina ya dhiki, i ndani ya ulegevu
Moyo kukosa ashiki, kutenda kitu kwa nguvu
Hukosekana riziki, nyumba ya watu wavivu
Ulegevu ni adui, nyumba ya umaskini

Hautufai uzembe, waila ni jitimai
Kukaa kutwa tuombe, jambo halituokoi
Jamani tushike jembe, ulegevu haufai
Ulegevu ni adui, nyumba ya umaskini

31. Shairi hili ni la aina gani? A. Tathlitha B. Tarbia C. Takhmisa D. Ngonjera	A. 64 B. 192 C. 54 D. 44
32. Shairi hili lina beti ngapi? A. Nne B. Tatu C. Nae D. Kumi na mbili	37. Bingwa wa kuandika shairi huitwa A. sogora B. manju C. malenga D. mwimbaji
33. Mshororo wa mwisho katika kila ubeti wa shairi hili huitwa A. kibwagizo B. ngojera C. utenzi D. utao	38. Shairi ambalo ni la kujibizana huitwa A. Ghuni B. Ngonjera C. Tathlitha D. Tarbia
34. Kitikio cha shairi hili kina mizani mingapi? A. 18 B. 20 C. 17 D. 16	39. Mshairi anatuambia kuwa ulegevu ni chanzo cha A. ubepari B. upweke C. uzembe D. umaskini
35. Taja vina vya kati na mwisho katika ubeti wa kwanza A. u, ja B. i, ja C. i, kwa D. i, a	40. Mwandishi ametumia neno <u>ashiki</u> ambalo lina maana sawa na _____ A. hamu, tamaa B. hasira, gadhabu C. kushika, pamoja D. asiyeshika, anayeshika
36. Ubeti wa kwanza wa shairi hili una jumla ya mizani mingapi?	

Soma ufahamu huu kisha ujibu maswali yafuatayo

Chakula nikipendacho ni ugali kwa sukumawiki. Nakipenda chakula hiki kwa sababu ninapokika hashiba sana tena ni rahisi kupika.

Ugali kwa sukumawiki ni chakula ambacho kinafaa sana mwilini. Vile vile hakigharimu pesa nyingi. Pakiti moja

ya unga wa mahindi inatosha kwa familia nzima, majani matano ya sukumawiki ni kitoweo cha kutosha mtu mmoja.

Upishi wa chakula hiki ni rahisi sana. Ugali hupikwa kwa kuchemsha maji na kuyaongeza unga wa mahindi. Anayepika huusonga mchanganyiko huu kwa mwiko ukashikamana kabisa. Ugali huhukua kama dakika kumi na tano kuiva. Lakini chungu cha kupikia kikiwa kikubwa unaweza kuchukua muda mwingi zaidi.

Nazo sukumawiki ni rahisi kupika pia. Mtu huzikatakata vizuri. Baada ya kufanya hivyo huzikaanga kwa mafuta ya kutosha. Sukumawiki hupendeza zikikaangwa na kuongezwa bizari, nyanya na vitunguu. Hupendeza zaidi zikiongezewa nyama.

Watu wa Mombasa houngeza nazi katika chakula hiki. Sukumawiki za nazi zina ladha nzuri na huwa ni kitoweo cha kuburudisha kwa sababu ya ubora wa ugali na sukumawiki, watu wengi wanavipenda sana. Ni watu wachache nchini ambao hawali ugali kwa sukumawiki.

- | | |
|--|---|
| <p>41. Ugali kwa sukumawiki ni chakula kizuri kwa sababu</p> <p>A. bei ni rahisi na kinafaa mwilini</p> <p>B. hupatikana kote nchini</p> <p>C. huliwa na watu wote</p> <p>D. kinauzwa katika mahoteli yote</p> | <p>45. Vifuatavyo ni viungo muhimu vya kufanya sukumawiki zipendeze</p> <p>A. pilipili, vitunguu na nyanya</p> <p>B. bizari, nyanya na nyama</p> <p>C. karafuu, maharagwe, tangawizi</p> <p>D. unga, viazi na mihongo</p> |
| <p>42. Mtu mmoja anatoshwa na</p> <p>A. kitoweo cha majani mawili ya sukumawiki</p> <p>B. pakiti moja ya unga wa mahindi</p> <p>C. majani matano ya sukumawiki kama kitoweo</p> <p>A. jani moja la sukumawiki kama kitoweo</p> | <p>46. Kubandika chungu jikoni ili kupika chakula ni</p> <p>A. kuinjika B. kuwekelea</p> <p>C. kuepua D. kutia</p> |
| <p>43. Ugali hupikwa kwa</p> <p>A. kutia unga ndani ya maji</p> <p>B. kuchemsha maji na kuyaongeza unga</p> <p>C. kutia unga ndani ya sufuria na kuuoka</p> <p>D. kukoroga unga</p> | <p>47. Kitendo cha kusababisha chakula kipikike ni</p> <p>A. kupikisha B. kubanika</p> <p>C. kuivisha D. kukanza</p> |
| <p>44. Chungu cha kupikia ugali kikiwa kikubwa mpishi huhukua</p> <p>A. dakika kumi na tano</p> <p>B. zaidi ya dakika kumi na tano</p> <p>C. dakika ishirini</p> <p>D. saa nzima</p> | <p>48. Tunasema: Jana nilikula sukumawiki ___ nyama.</p> <p>A. na B. kwa</p> <p>C. ya D. bila</p> |
| | <p>49. Mtu anapoivisha sukuma kwa kutumia mafuta ni</p> <p>A. kukaranga B. kuchoma</p> <p>C. kukaanga D. kuunga</p> |
| | <p>50. Kichwa kinachofaa taarifa hii ni</p> <p>A. Chakula chetu</p> <p>B. Chakula nikipendacho</p> <p>C. Kupika sukumawiki</p> <p>D. Kupika ugali</p> |

Read the passage below. It contains blank spaces numbered 1-10. For each blank space, choose the

BEST answer from the choices given

My 1 Shani Gitara and if anyone had told me that I 2 be offered a free trip to the coast, never mind out of the country I would have 3 that they were 4. Jacky and I were not the type of 5 that 6 sorts of things happened to. Yes 7 when we were 8 we used to fantasize 9 flying 10 to exotic places, but we knew that it was 11 just a game.

Then 12 extraordinary happened to Jackie. Well, not to Jackie, but to 13 mother. She got married to 14 incredibly wealthy man. She is a really 15 lady.

- | | | | | |
|-----|--------------|--------------|---------------|--------------|
| 1. | A. names | B. names are | C. name is | D. name |
| 2. | A. will | B. can | C. would | D. could |
| 3. | A. said | B. told | C. guessed | D. whispered |
| 4. | A. right | B. insane | C. good | D. blessed |
| 5. | A. peoples | B. people | C. poeple | D. people |
| 6. | A. this | B. that | C. those | D. these |
| 7. | A. . | B. ! | C. , | D. ? |
| 8. | A. elder | B. older | C. younger | D. young |
| 9. | A. about | B. with | C. along | D. by |
| 10. | A. of | B. off | C. in | D. on |
| 11. | A. all | B. not | C. no | D. mostly |
| 12. | A. something | B. nothing | C. everything | D. anything |
| 13. | A. Jackie | B. Jackie's | C. Jackies' | D. Jackies |
| 14. | A. a | B. an | C. some | D. the |
| 15. | A. preety | B. pritty | C. pretty | D. prity |

For questions 16 -18, choose the part of speech the underlined word belongs to.

16. An old woman was walking slowly.
A. pronoun B. noun
C. adverb D. preposition
17. A bird flew silently to the nest.
A. verb B. preposition
C. adverb D. pronoun
18. The lady was robbed of her purse.
A. pronoun B. noun
C. adjective D. adverb

For questions 19-20 complete the sentences with the correct word

19. Amos said he would neither dance ____ recite the poem.
A. or B. nor
C. but D. and
20. The little girl was _____ tired to walk.
A. very B. too
C. also D. but

For questions 21 and 22 complete with the correct tag

21. You have also bought mother a present, _____?
A. did you B. haven't you
C. hav'ent you D. didn't you

22. The cat did not steal the meat, _____?
A. did it B. didn't it
C. could it D. isn't it

For questions 23-24, complete correctly

23. Do you know
A. when are the schools closing?
B. when was Langat here?
C. who is the founder of the scouting movement?
D. the train is arriving when?
24. Can you remember
A. where the keys are?
B. where was the map?
C. when here was Makanyaga?
D. did it rain yesterday?

For question 25 complete correctly

25. When we got to the train station, we were given a _____ ticket.
A. two-hundred shillings
B. two-hundreds shillings
C. two-hundred-shilling
D. two-hundreds-shillings

Read the passage below and answer questions 26-38.

In the United States of America, nearly a hundred years ago, bulls were used to pull heavy wagon in the wagon trains, because they could withstand the hardships of the plains better than the horse did. They could go longer without water and needed less food for they could live on the poor prairie grasses much better than horses or mules could.

Bull trains usually travelled ten to twelve kilometres a day when loaded but when returning empty wagons, they travelled as many as twenty kilometres a day.

At night, the bulls were allowed to graze after they had been unyoked, but they were always guarded by the men taking turns at the work. Often bulls were made sick when they were bitten on the noses or feet by rattle snakes that struck at them as they grazed.

26. Give a reason why bulls were better than mules or horses?
- They couldn't go for a long distance without water.
 - They were bigger in size
 - They could go longer without water
 - They could sleep outside
27. About how far could a team of bulls pull a loaded wagon in one day?
- Ten kilometres
 - Twelve kilometres
 - Twelve to fifteen kilometres
 - Ten to twelve kilometres
28. Which words would you use instead of unyoked?
- Set free
 - given water to drink
 - Given food to eat
 - Put together
29. What did the bulls feed on?
- Oat cuttings
 - Grass
 - Beans
 - Water
30. What made the bulls sick?
- Hardships of the plain
 - Heavy wagons
 - Poor prairie grass
 - rattle snake bites
31. Which word can you use instead of guarded?
- Look after
 - Look at
 - Beaten
 - Yoked
32. At what time did the bulls graze?
- Morning
 - Night
 - Afternoon
 - Evening
33. Who guarded the bulls as they were grazing?
- The men
 - Policemen
 - Big boys
 - Dogs
34. Bull-trains would travel about _____ kilometres on their return journey a day.
- twenty
 - twelve
 - ten
 - more than 30
35. According to the passage _____ are grasslands in the U.S.A.
- stepps
 - savanna
 - prairies
 - pampous
36. The word plains has been used in the passage to mean?
- Land with steep slopes
 - Flat land
 - Land with deep valleys
 - Highlands
37. The word men taking turns means
- men turning to their leader
 - men turning to see who has called
 - men taking the duty to guard the cattle one at a time
 - men turning around to see their work
38. According to the passage mules were
- never used for pulling wagons
 - sometimes used instead of horses
 - too weak to be used
 - better than horses

Read the passage below and answer questions 39-50.

Musila heard the loud ring of the bell indicating the end of the lesson before break. Musila's heart leapt in joy as the teacher went out of the classroom. Immediately the door closed after the teacher, Musila leapt out of his chair and ran outside. Behind him his friends followed.

They were all eager to start their favourite game, football. After a busy stressful morning, they were all grateful to have a break. They all ran to the field to look for a space in order to commence their game, but every space was occupied by other pupils playing different games.

They felt disappointed and were all about to go back to class when one of the boys suggested, "We don't have to go to class when we can still play our games behind one of the classrooms. Anyway none will ever know we played behind the classrooms."

They looked at each other and quickly shook their heads. They all gave reasons why they should not play behind the classrooms but the temptation was too great. They could not imagine themselves caught and taken to the headmaster.

39. Why was Musila happy when the bell rang?
A. He was going out for lunch
B. He was going to eat pizza
C. He was going to watch a match
D. He wanted to go and play
40. With whom did Musila go out?
A. The teacher B. His friends
C. The fellow players D. The girls in class
41. What was their favourite game?
A. Bowling B. Handball
C. Netball D. Soccer
42. The word commence is underlined. What is the opposite?
A. Halt B. Start
C. Begin D. Began
43. Who did the boys find in the field?
A. Other schools playing
B. Class eight pupils playing
C. Class five pupils playing
D. Other pupils playing
44. Musila and his friends did not find a space for playing _____?
A. did they B. didn't they
C. isn't it D. didn't he
45. How did the boys feel when they could not find a space?
A. Excited B. Thrilled
C. Terrified D. Miserable
46. One of the boys had a suggestion, What was it?
A. Play in class
B. Play on the road
C. Play in the staffroom
D. Play behind classes
47. What temptation was being referred to in the passage?
A. Stealing
B. Playing in the field
C. Playing without balls
D. Playing behind classes
48. What fear did the boys have?
A. Facing the prefects
B. Facing the headmaster
C. Being punished by fellow pupils
D. Facing their parents
49. The opposite of the word 'shook' is
A. swung B. trembled
C. nodded D. shaken
50. The best summary for this passage would be
A. Once bitten twice shy
B. The early bird catches the worm
C. Look before you leap
D. Birds of a feather flock together


STEGA SUPREME SERIES

STANDARD SIX 2016

SCIENCE

Time: 1 hour 40 min

1. What is the function of the tooth drawn below?



- A. Gripping and cutting
- B. Cutting and biting
- C. Crushing and chewing
- D. Gripping and tearing

2. Which one of the following functions is **NOT** carried out by all plant leaves?

- A. Losing excess water
- B. Gaseous exchange
- C. Food storage
- D. Manufacture of food

3. The process by which green plants lose water through the small holes in the leaves is called

- A. photosynthesis
- B. transpiration
- C. respiration
- D. stomata

4. Which of the following is **NOT** a method of grazing under rotational grazing?

- A. Paddocking
- B. Stall feeding
- C. Tethering
- D. Strip grazing

5. Clouds that indicate fine weather have three of the following characteristics **EXCEPT**

- A. having a flat base
- B. being mountainous
- C. being high in the sky
- D. looking like bundles of cotton

6. Which one of the following planets are in the 6th and 8th positions from the sun respectively?

- A. Neptune and Saturn
- B. Venus and Mars
- C. Neptune and Jupiter
- D. Saturn and Neptune

7. Which of the following changes are caused by a decrease in temperature?

- A. Freezing and condensation
- B. Evaporation and freezing
- C. Melting and evaporation
- D. Melting and freezing

8. The vaccine D.P.T vaccine gives the child protection against all the following diseases **EXCEPT**

- A. Whooping cough
- B. Diphtheria
- C. Polio
- D. Tetanus

9. Heat from a jiko reaches Nichorus' hands placed above the jiko through

- A. convection
- B. conduction
- C. radiation
- D. radiation and convection

10. Which one of the following is **NOT** a use of water at home?

- A. Watering animals
- B. Watering flowerbeds
- C. Cooking
- D. Bathing

11. Which part of the female reproductive system is **CORRECTLY** matched with its function?

<u>Part</u>	<u>Function</u>
A. Uterus	Fusion of sex cells
B. Vagina	Passage for baby at birth
C. Oviduct	Production of female sex cells
D. Ovary	Growth of a fertilised ovum

12. Pupils came across the following plants during a nature walk in the school compound. Which one was a non-green plant?

- A. Moss
- B. Algae
- C. Mould
- D. Fern

13. The chart below shows animals and their products.

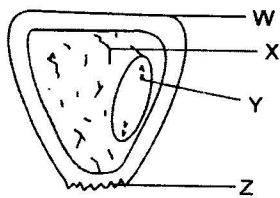
Which animal is **CORRECTLY** matched with its product?

<u>Animal</u>	<u>Products</u>
A. Broilers	Meat and eggs
B. Sheep	Wool and beef
C. Goat	Mohair and mutton
D. Cattle	Milk and mutton

14. Which one of the following foods is correctly matched with the nutrients it provides?

<u>Type of food</u>	<u>Food group</u>
A. Groundnuts	energy giving
B. Apple	body building
C. Potato	body building
D. Green grams	protectives

15. The diagram below represents a monocot seed. The part labelled X represents the



- A. cotyledon
- B. endosperm
- C. testa
- D. embryo

16. Std five pupils were asked to come with metal sheets for pointers, piece of wood, wires and nails. Which weather instruments were they expected to make?

- A. Windsock
- B. Raingauge
- C. Thermometer
- D. Windvane

17. Which one of the following plants has separate male and female flowers on different plants?

- A. Maize
- B. Pineapple
- C. Beans
- D. Pawpaw

18. Which one of the following physical changes takes place in boys **ONLY** during adolescence?

- A. Hips broaden
- B. Growth of pubic hair

C. Enlargement of Adam's apple

D. Attraction to opposite sex

19. A teacher stood at the middle of the field and shouted at the pupils who were all over the field. The pupils got the teacher's instructions because

- A. Sound travels best in air
- B. Sound travels in one direction
- C. Sound travels in all directions
- D. There was an echo

20. During breathing in,

- A. the volume of the chest decreases
- B. the lungs shrinks
- C. the diaphragm moves upwards
- D. the diaphragm flattens

21. Which one of the following is not a use of light?

- A. Reading
- B. Communication
- C. To keep away pests
- D. Warming

22. The amount of matter contained in an object is referred to as

- A. mass
- B. kilograms
- C. volume
- D. weight

23. A big piece of wood floats on water while a small nail sinks because of the difference in

- A. size
- B. shape
- C. material
- D. weight

24. Which food nutrients is responsible for repairing worn out body tissues and making new body cells?

- A. Carbohydrates
- B. Proteins
- C. Vitamins
- D. Starch

25. The following are signs and symptoms of anaemia **EXCEPT**

- A. Pale white eyes
- B. Breathlessness
- C. Muscle wastage
- D. Tiredness

26. Which one of the following animals can be classified in the same group with ticks?

- A. Mosquito B. Millipede
C. Crab D. Spider

27. Which one of the following is not a source of water?

- A. River B. Tap
C. Well D. Rain

28. Which one of the following is **not** a characteristic of a wind pollinated flowers?

- A. Sticky stigmas B. Feathery stigma
C. Dull coloured petals D. No scent

29. The following are signs and symptoms of a certain disease;

(i) Pain in the joints

(ii) Fever

(iii) Loss of appetite

(iv) Shivering

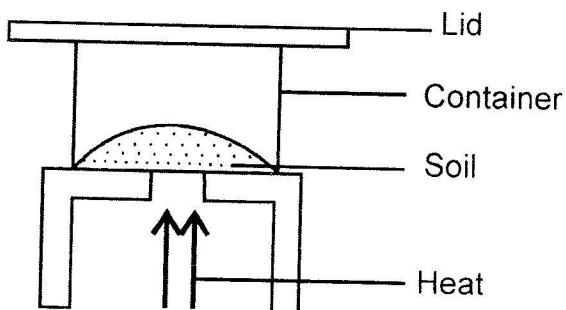
The disease with the above signs and symptoms can be prevented by

- A. taking a B.C.G vaccine at birth
B. wearing gloves and gumboots when working in rice farms

C. abstaining from sexual intercourse

D. Draining stagnant water

30. The activity below on components of soil was carried out by pupils in class four.



What were the pupils investigating? Presence of

A. mineral particles in the soil

B. water in the soil

C. organic matter in the soil

D. air in the soil

31. A certain weed has the following characteristic;

(i) Has green fruits with thorns

(ii) Has large white flowers

(iii) It produces poisonous fruits

The weed described above is likely to be

- A. Sodom apple B. Mexican marigold
C. Thorn apple D. Wandering jew

32. Absorption of water in the alimentary canal of human beings takes place in the

- A. large intestine B. stomach
C. duodenum D. small intestine

33. Which one of the following statements about vertebrates is **TRUE**?

- A. Fish and amphibians have scales
B. Amphibians and reptiles lay their eggs on land
C. Fish and birds have constant body temperature
D. Reptiles and birds lay fertilised eggs

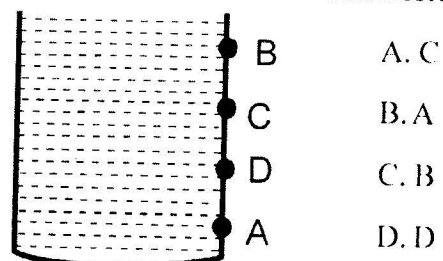
34. The following are ways of maintaining tools **EXCEPT**

- A. using them regularly B. greasing
C. sharpening D. cleaning after use

35. Which plant stores food in the stem?

- A. Cassava B. Carrot
C. Irish potato D. Sweet potato

36. Which of the holes labelled A, B, C and D will the jet of water be thrown second farthest?



A. C

B. A

C. B

D. D

37. Plants differ from animals is that they
- A. respire B. move
C. make food D. excrete
38. Which one of the following soil components is **LEAST** affected when soil is burnt?
- A. Water B. Air
C. Organic matter D. Mineral particles
39. The diagram below represents a certain type of root.



Which one of the following plants does **not** have the root shown above?

- A. Rice B. Peas
C. Millet D. Maize
40. Which one of the following is **NOT** an importance of HIV testing?
- A. To know one's status
B. To plan for the future
C. For behaviour change
D. To start the treatment early
41. Which one of the following types of soil has best water retention?
- A. Sand B. Silt
C. Loam D. Clay
42. The instrument used to measure mass is called
- A. spring balance B. Newton metre
C. beam balance D. see-saw
43. The word prescription is a medical term which means
- A. the amount of medicine to be taken at once
B. the document written by the doctor explaining

the dose to be taken by the patient

- C. the period between the entry of disease causing organism and the first appearance of signs
D. the date when medicine is ready for consumption
44. Clouds are classified according to the following **except**
- A. height B. shape
C. size D. appearance
45. Which one of the following parts protects a young flower?
- A. Corolla B. Anthers
C. Stalk D. Sepals
46. The best method of weed control is
- A. uprooting B. using chemicals
C. digging out D. slashing
47. Which of the animals listed below is **not** a reptile?
- A. Snake B. Salamander
C. Lizard D. Gecko
48. Which one of the following is **not** a condition necessary for germination?
- A. Suitable temperature B. Oxygen
C. Moisture D. Soil
49. Which of the following is **not** a stage of HIV infection?
- A. Incubation stage B. Infection stage
C. Symptomatic stage D. Full blown stage
50. Which state of matter expands **least** when heated?
- A. Liquids B. Gases
C. Gases and liquids D. Solids

STEGA SUPREME SERIES

STANDARD SIX 2016

MATHEMATICS

Time: 2 Hours

1. Which of the following numbers is two hundred and thirty and two thirds?

- A. $230\frac{2}{3}$ B. $230\frac{1}{3}$
C. $2302\frac{1}{3}$ D. $232\frac{2}{3}$

2. Which of the following numbers has the largest value?

- A. 19.01 B. 11.2
C. 9 D. 3.9876

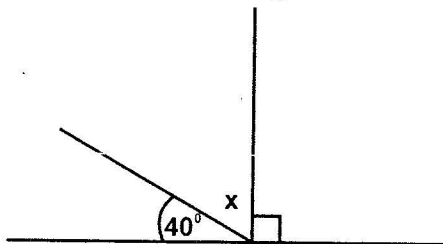
3. Subtract $2\frac{3}{5}$ from 5

- A. $5\frac{1}{5}$ B. $3\frac{2}{5}$
C. $2\frac{2}{5}$ D. $1\frac{3}{5}$

4. Which of the following numbers is not a prime number?

- A. 31 B. 29
C. 53 D. 39

5. What is the value of the angle marked x?



- A. 40 B. 90
C. 50 D. 60

6. What is the value of 0.18×2.3 correct to one decimal place?

- A. 0.5 B. 0.4
C. 0.41 D. 4.0

7. What is the product of 9 and $1\frac{1}{3}$?

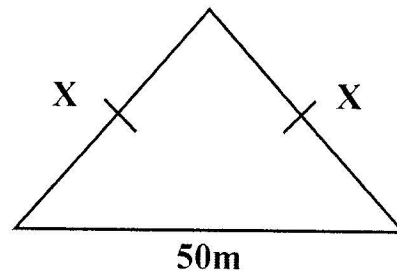
- A. $9\frac{1}{3}$ B. $7\frac{2}{3}$

- C. 12 D. 6

8. The cost of 5 mathematics books is sh 2000. What is the cost of 7 such books?

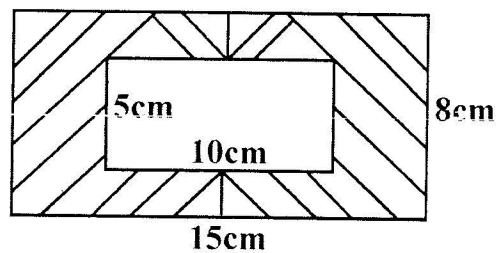
- A. Sh 2800 B. Sh 1800
C. Sh 400 D. Sh 3500

9. If the perimeter of the figure below is 120 metres, what is the length marked X?



- A. 70m B. 170m
C. 85m D. 35m

10. What is the area of the shaded region?



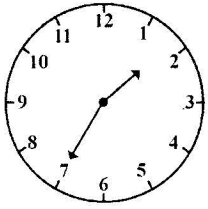
- A. 120cm^2 B. 70cm^2
C. 190cm^2 D. 50cm^2

11. Find the value of the unknown in

$$3x - 6 = 14 - 2x$$

- A. 20 B. 6
C. 5 D. 4

12. What is the time shown on the clockface?



- A. Ten past seven o'clock
- B. Quarter to two o'clock
- C. Twenty five minutes to two o'clock
- D. Ten minutes past eight o'clock

13. How many legs do ten cows have written in Roman Numerals?

- A. LX
- B. XL
- C. LXX
- D. XXX

14. The area of a triangle is 50cm^2 . If the base is 10 cm, what is its height?

- A. 10cm
- B. 60cm
- C. 40cm
- D. 25cm

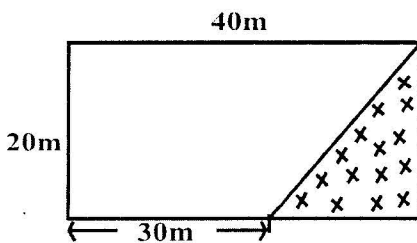
15. Express $\frac{175}{300}$ in its simplest form.

- A. $\frac{3}{4}$
- B. $\frac{25}{30}$
- C. $\frac{7}{12}$
- D. $\frac{5}{6}$

16. A baby slept at 8pm and woke up at midnight. For how long did she sleep?

- A. 40mins.
- B. 5hrs
- C. 24hrs
- D. 4hrs

17. Calculate the area of the unshaded region.



- A. 100m^2
- B. 700m^2
- C. 800m^2
- D. 600m^2

18. A trader had sh 4800 in his cash box. He changed

this amount into 50 shilling notes. How many 50 shilling notes did he get?

- A. 96
- B. 960
- C. 9.6
- D. 96000

19. The scale on a map is 1cm represents 5Km. What actual length will be represented by a line measuring 10cm?

- A. 500km
- B. 100km
- C. 50km
- D. 2.5km

20. If $\frac{5x}{3} = 10$; What is the value of x?

- A. 15
- B. 30
- C. $1\frac{2}{3}$
- D. 6

21. In a family of 5 people, each person bought a bottle of soda everyday. How many bottles altogether did they buy in the month of February 2012?

- A. 145
- B. 140
- C. 136
- D. 450

22. Find the missing number

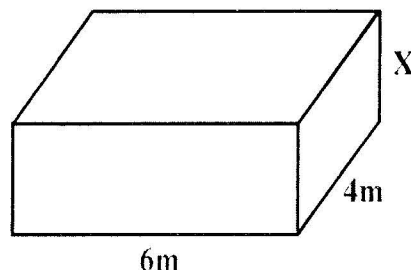
$$90 + 30 + 20 + 40 + 30 + \underline{\hspace{2cm}} + 20 = 270$$

- A. 30
- B. 40
- C. 50
- D. 60

23. What is $\frac{2}{5}$ of 100?

- A. 90
- B. 45
- C. 40
- D. 60

24. The volume of the cuboid below is 96m^3 .



What is the height of the cuboid?

- A. 5m B. 3m
C. 24m D. 4m

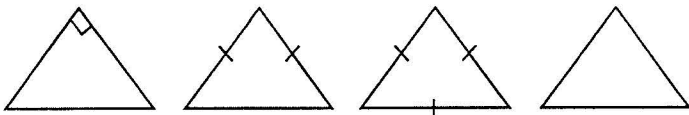
25. A driver covered 80km in 1hr. What distance did he cover in $2\frac{1}{2}$ hours?

- A. 40km B. 160km
C. $82\frac{1}{2}$ D. 200km

26. What is the reciprocal of $3\frac{1}{4}$?

- A. $\frac{4}{13}$ B. $3\frac{4}{1}$
C. $4\frac{1}{3}$ D. $\frac{13}{4}$

27. Which of the following triangles is equilateral



- A. B. C. D.

28. Wanjira bought 200 mangoes for sh. 1800. What was the cost of one mango?

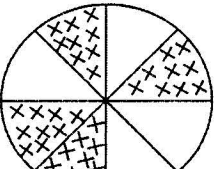
- A. Sh. 14 B. Sh. 20
C. Sh. 9 D. Sh. 90

29. Which of the following measurements represents a cube

- A. 3cm x 4cm x 5cm B. 4cm x 4cm x 1cm
C. 1m x 100cm x 1m D. 2m x 2cm x 2m


30. Change 0.14 tonnes into kilogrammes

- A. 0.014 B. 140kg
C. 1.4kg D. 1400kg

31.  The diagram shows parts of a circle which have been shaded. Express the shaded part as a percentage.

- A. 50% B. $\frac{4}{5}\%$
C. 4% D. 40%

32. Calculate the perimeter of the figure below in kilometres.



- A. 2800km B. 1400km
C. 1.4km D. 2.8km

33. A certain figure has the following properties .

- (i) All sides are equal
(ii) All angles are equal
(iii) Has four sides

The figure is

- A. Rectangle B. Square
C. Triangle D. Circle

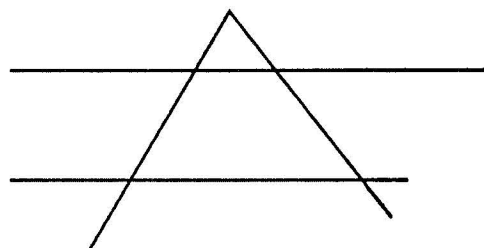
34. Subtract ten from the square root of 121

- A. 11 B. 31
C. 21 D. 1

35. How many millilitres are there in 2.5L?

- A. 0.25 B. 250
C. 2500 D. 25

36. How many points of intersection are there in the figure below?



- A. 4 B. 3
C. 6 D. 5

37. How many $\frac{1}{4}$ kg packets can be made from 40 kg?

- A. 80 B. 160
C. 20 D. 10

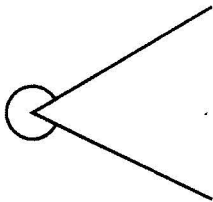
38. Simplify : $2(3x + 3p - 3x)$

- A. 6p B. $6x - 12p$
C. $6p - 6x$ D. $12x - 6p$

39. Find the value of x : $\frac{16}{48} = \frac{x}{6}$

- A. 32 B. 3
C. 2 D. 32

40. The angle below is called _____ angle .

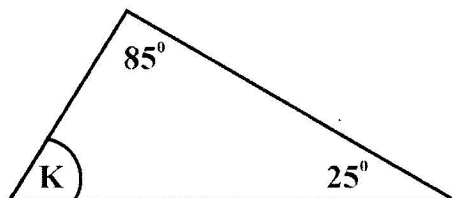


- A. acute B. obtuse
C. reflex D. right angle

41. What is the value of $8^2 + \sqrt{9}$?

- A. 67 B. 17
C. 289 D. 145

42. Find the value of the angle marked K.



- A. 50° B. 110°
C. 60° D. 70°

43. What is the sum of all the prime numbers between 10

and 20?

- A. 36 B. 60
C. 82 D. 70

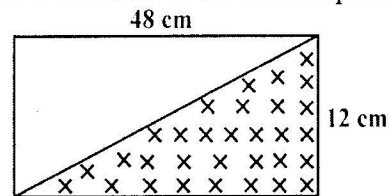
44. Multiply 4 by 0.86. What is the place value of digit 3?

- A. Hundreds B. Tens
C. Ones D. 3.40

45. What is the total value of digit 7 in 47836 ?

- A. 7000 B. 70
C. 700 D. Thousands

46. Find the area of the shaded part.



- A. 576cm^2 B. 144cm^2
C. 288cm^2 D. 72cm^2

47. What is the GCD of 20, 30 and 45

- A. 3 B. 15
C. 180 D. 5

48. Round off 10996 to the nearest thousand.

- A. 10100 B. 12000
C. 11000 D. 10,000

49. What is the value of $913032 \div 18$?

- A. 51724 B. 50724
C. 5724 D. 5275

50. Work out : $4\frac{1}{2} - 2\frac{3}{5}$

- A. $1\frac{9}{10}$ B. $2\frac{2}{5}$
C. $2\frac{9}{10}$ D. $3\frac{1}{2}$

STEGA SUPREME SERIES

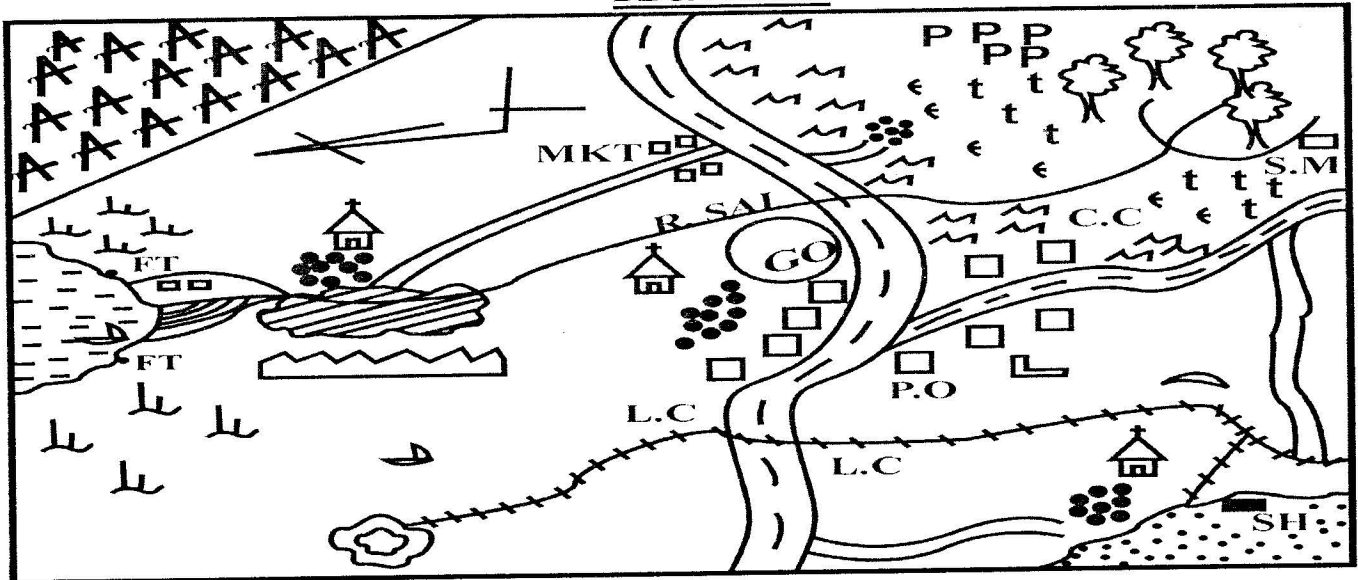
STANDARD SIX 2016

SOCIAL STUDIES

Time: 2 hours :15 Min

Study the map of Bega area and answer questions 1 - 7

BEGA AREA



SCALE: 1 cm rep 2km

KEY

	- Forest		- Level crossing
	- River		- Church
	- Tarmac road		- Post office
	- Irrigation		- Railway station
	- Bridge		- Saw mill
	- Game Park		- Boat
	- Air strip		- Creameries
	- Permanent Buildings		- Hospital
	- Settlements		- Maize
	- Settlements		- Quarry
	- Ginnery		- Fish Trap
	- School		- Governors office
			- Market

- The climatic conditions experienced in the western part of Bega area is
 - Hot and dry
 - Cool and dry
 - Hot and wet
 - Cool and wet
- The railway line in Bega area is likely to be used in transporting all the following **EXCEPT** ?
 - Beef products
 - Stones
 - Timber
 - Cotton wool
- Which is the staple food of most people in Bega area?
 - Fish
 - Maize
 - Cotton
 - Beans
- The feature at the mouth of R. Sai is Known as
 - Delta
 - Confluence
 - Estuary
 - Tributary
- Which of the following is **NOT** a means of transport in Bega area?
 - Road
 - Railway
 - Cable
 - Air
- Which crop is likely to be grown in the irrigation scheme found in Bega farea?
 - Sisal
 - Sugar cane
 - Robusta coffee
 - Cotton
- Which is the **MAIN** religion in Bega area?
 - Hinduism
 - Christianity
 - Islam
 - Budhism
- The title for the Abawanga king was
 - Elureko
 - Orkoiyot
 - Ntemi
 - Nabongo
- Which of the following is **NOT** an element of the weather?
 - Altitude
 - Air pressure
 - Temperature
 - Wind
- Which of the following is the highest court of law in Kenya?
 - Court of appeal
 - Court martial
 - Supreme court
 - High court
- Which of the following features is found in Kenya?
 - Lake Tana
 - Lake Paradise
 - Mt. Ruwenzori
 - Mt. Meru
- The modern fishing method shown below is known as

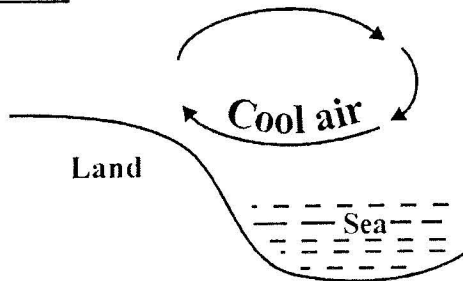
SEA

 - Purse seing
 - Net drifting

- C. Long lining
D. Trawling

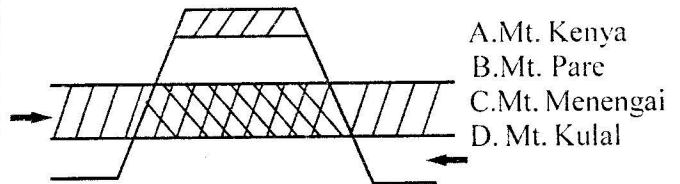
13. A slogan showing the aims of a school is known as
A. School motto B. Loyalty pledge
C. School routine D. School anthem
14. The highland Nilotes of Uganda are collectively known as _____
A. Dadogue B. Tatonga
C. Sabing D. Kalenjin
15. Which of the following is a traditional cultural artefact?
A. Gun B. Calabash
C. Bicycle D. Ball
16. Who among the following leaders did not collaborate with the European colonialists?
A. Nabongo Mumia B. Karuri wa Gakure
C. Oloibon Lenana D. Koitalel arap Samoei
17. Which of the following is a traditional way of interaction
A. Wars and Raids B. Seminars
C. Workshops D. Religious crusades
18. The Kenya - Uganda railway line was built between 1896 and 1901 by?
A. The Asians B. Indians
C. The British D. Arabs
19. The next national census in Kenya will be held in the year?
A. 2009 B. 2019
C. 2017 D. 2013
20. Which is the main invisible export of Kenya?
A. Tea B. Carbon dioxide
C. Soda ash D. Tourism
21. Which one of the following political parties led Kenya to Independence?
A. KANU B. NARC
C. O.D.M D. KADU
22. Which is the leading tourist attraction along the coast of Kenya?
A. Fort Jesus B. Makaya
C. Sandy beaches D. Wildlife

Use the diagram below to answer questions 23 and 24

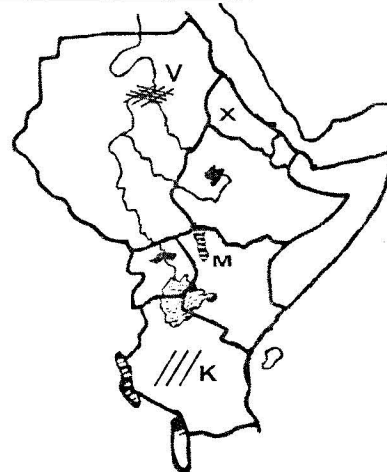


23. The diagram above shows the formation of _____
A. Convectional rainfall B. sea breeze
C. Land breeze D. Relief rainfall
24. Which of the following towns is **NOT** likely to experience the occurrence shown above?
A. Mombasa B. Lamu
C. Dar-es-salaam D. Murang'a
25. Three of the following are branches of the National government. Which one is **NOT**?
A. Cabinet B. Executive

- C. Legislature D. Judiciary
26. The capital city of Uganda is located at?
A. Dodoma B. Jinja
C. Kampala D. Addis Ababa
27. Which one of the following mountains was formed through the process shown in the diagram below?



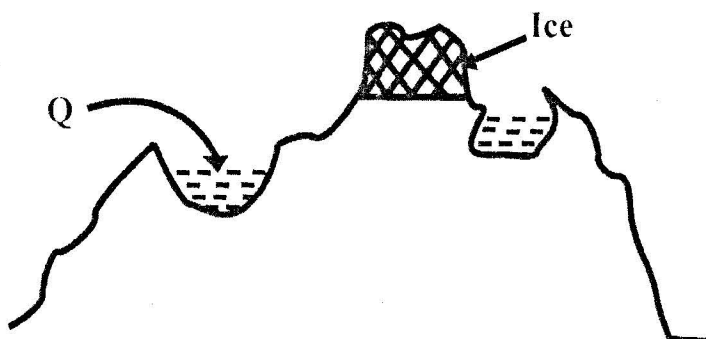
- A. Mt. Kenya
B. Mt. Pare
C. Mt. Menengai
D. Mt. Kulal
28. Which is the leading import of Kenya today?
A. Tea B. Wheat
C. Machines D. Oil
29. Wapogoro, Wangindo and Wanyamwezi are Bantu communities from?
A. Tanzania B. Uganda
C. South Sudan D. Somalia
30. Kenya was declared a British protectorate in the year
A. 1920 B. 1952
C. 1895 D. 1963
31. Which is the National language of Ethiopia?
A. Arabic B. Amharic
C. Tigrinya D. Kiswahili
32. Arabs and portuguese had come to the coast of Kenya to _____
A. Spread christianity B. Look for fertile land
C. Preach the word of Allah D. Take part in trade
- Use the map below to answer questions 33 to 36**



33. The country marked X is
A. Eritrea B. Rwanda
C. Ethiopia D. Djibouti
34. The region marked K is sparsely populated mainly because
A. It receives inadequate rainfall always
B. It is set aside for wildlife.
C. It is infested with tse tse flies
D. It is prone to floods
35. Which is the area marked V
A. Cotton B. Sugar cane
C. Coffee D. Bananas
36. The lake marked M is known as
A. L. Albert B. L. Baringo

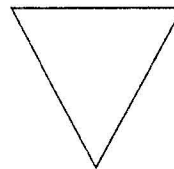
- C. L. Malawi D. L. Turkana
37. Which of the following is **NOT** a traditional methods of preserving fish?
 A. Boiling B. Salting
 C. Smoking D. Sun-drying
38. Which of the following is a tributary of River Nile?
 A. R. Malagarasi B. R. Shebelle
 C. R. Atbara D. R. Awash
39. Who was the first prime minister of Kenya?
 A. Raila Odinga B. Jomo Kenyatta
 C. Eliud Mathu D. Oginga Odinga
40. Three of the following are elements of a good citizen **except** ?
 A. Hardworking B. Patriotic
 C. Honesty D. Revenging
41. In Kenya elections are conducted and supervised by
 A. I.E.B.C B. Parliament
 C. Judiiciary D. E.C.K
42. Which of the following is **NOT** an electronic media?
 A. Mobile phones B. Televisions
 C. Newspapers D. Radios
43. Intercropping of trees and crops in the same piece of land is known as _____
 A. Mixed farming B. Agro-forestry
 C. Reafforestation D. Arable farming
44. Alluvial soil is also known as _____
 A. Clay soil B. Loam soil
 C. Black cotton soil D. Silt soil
45. Which of the following practises encourage peace in a society?
 A. Democracy B. Nepotism
 C. Corruption D. Tribalism
46. Which of the following communities had cyclic age-set systems?
 A. Akamba B. Luo
 C. Nandi D. Gabbra
47. Which of the following is **NOT** a fresh water fish?
 A. Dagaa B. mullet
 C. Tilapia D. Nile perch
48. The floating vegetation on river Nile in South Sudan is known as _____
 A. Mangrove B. Water hyacinth
 C. reeds D. Sudd

Use the diagram below to answer questions 49 and 50



49. The lake marked Q was formed through a process

- known as
 A. Erosion B. Volcanicity
 C. Down-warping D. Deposition
50. Which of the following is an example of the lakes formed through the process above?
 A. L. Kanyaboli B. L. Natron
 C. L. Speke D. L. Tana
51. Which of the following countries is **NOT** found on the northern hemisphere?
 A. Eritrea B. Tanzania
 C. Sudan D. Djibouti
52. Which is the **MAIN** problem facing cotton farming in Kenya?
 A. Inadequate rainfall
 B. Poor farming methods
 C. Lack of harvesting machines
 D. Stiff competition from the artificial fibres
53. Which of the following is the oldest town in Kenya?
 A. Mombasa B. Kisumu
 C. Nairobi D. Moyale
54. The sun is overhead the tropic of cancer in the month of?
 A. November B. September
 C. June D. March
55. How many elected members are there in the national assembly today?
 A. 210 B. 290
 C. 350 D. 47
56. Which of the following methods is used in mining of soda ash
 A. Open cast B. Drilling
 C. Shaft method D. Dredging
57. Which of the following is **NOT** a highland crop?
 A. Cotton B. Pyrethrum
 C. Arabic coffee D. Tea
58. Special skills in traditional African societies were taught through
 A. Listening B. Observing
 C. Apprenticeship D. Story telling
59. Which is the largest country in Eastern Africa
 A. Ethiopia B. Sudan
 C. Djibouti D. Somalia
60. The road sign shown below indicates



- A. Road junction ahead B. Bumps ahead
 C. Road is clear D. Road is expanded

C.R.E

61. An agreement between two people is called
 A. Covenant B. Baptism
 C. Law D. Passover
62. Which one of the following is **NOT** a deed of darkness
 A. Stealing B. Loving others
 C. Beating others D. Telling lies

63. A prophet who was sent to the Israelites to tell them about the new covenant is
 A. Hezekiah B. Jeremiah
 C. Hosea D. Elisha
64. A person suffering from HIV/AIDS should be
 A. hated B. ignored
 C. loved D. honest
65. Christians grow spiritually with the help of the
 A. friends B. wealth
 C. pride D. holy spirit
66. Which one is not a talent?
 A. Preaching B. Singing
 C. Praying D. Stealing
67. New life is
 A. Getting a gift
 B. Talking together
 C. Celebrating together
 D. Changing old ways to new ones
68. Which of the following actions shows irresponsible behaviour?
 A. Talking to friends B. Taking drugs
 C. Visiting relatives D. Obeying your parents
69. _____ is not a good quality that Jesus had as a leader
 A. Kindness B. Sinful
 C. Mercifulness D. Patience
70. New life in traditional African Society was marked in various stages **except**
 A. Birth of a new child B. Initiation
 C. Marriage D. Baptism
71. True friendship in the Bible is demonstrated by
 A. James and John
 B. David and Jonathán
 C. Visiting relatives
 D. Obeying your parents Ananias
72. Which prophet prophesied about the prince of peace?
 A. Moses B. Jeremiah
 C. Isaiah D. Angel Gabriel
73. Jesus had one disciple that the loved most. He was called
 A. Peter B. James
 C. John D. Paul
74. Jesus is called the good shepherd because
 A. He cares for his followers
 B. He cares for his sheep
 C. He cares for others shepherds
 D. He cares for believers only
75. There are _____ books in the old testament and _____ books in the New testament.
 A. 66,27 B. 27,39
 C. 27,33 D. 39,27
76. Which statement is **NOT** true according to traditional African society
 A. Boys and girls should not engage in sex before marriage
 B. Boys and girls should respect their bodies
 C. Boys and girls should express their love through sex
 D. Boys and girl should exercise self-control when dealing with each other.
77. God commands us to Love
 A. relatives and friends
 B. ourselves
 C. those who love us only
 D. others as we love ourselves
78. Which one of the following is **NOT** a name of God
 A. Creator B. Provider
 C. Son of God D. Almighty God
79. What was the work of Joseph the father of Jesus?
 A. Priest B. Teacher
 C. Doctor D. Carpenter
80. Which two qualities of Abraham made God love him?
 A. He was kind and caring
 B. His obedience and hardworking
 C. His riches and generosity
 D. His faithfulness and obedience to God
81. All the following were disciples of Jesus except
 A. Stephen B. Andrew
 C. Philip D. Batholomew
82. The work we do willingly and without expecting payment is called
 A. Employment B. Slavery
 C. Voluntary service D. Unemployment
83. Jesus was tempted by satan in the
 A. Sea B. Temple
 C. Jerusalem D. Wilderness
84. When Jesus healed the blind man he told him to go and wash in the pool of
 A. Siloam B. Jericho
 C. Sycchar D. Bethsaida
85. The paralysed man was helped by Jesus because
 A. He had alot of faith
 B. His friends had faith
 C. He was brought through the roof
 D. He was sick for along time
86. Jacob ran away from his brother Essau after taking his blessing because of
 A. anger B. honesty
 C. fear D. courage
87. The father of David was called
 A. Jesse B. Ezekiel
 C. Fear D. Saul
88. Conflicts among ourselves should be avoided by
 A. argument B. agreement
 C. dislike D. anger
89. The first human beings were created on the ____ day.
 A. 3rd B. 6th
 C. 4th D. 5th
90. The Luo call their God
 A. Ngai B. Wele
 C. Nyasaye D. Enkai

1. Three of the following verses are found in suratul zilzala **except**
 - A. "wa qaalal insanu ma'alaha"
 - B. "bianna rabby'ka auhalaha"
 - C. "ayha kutubun qayyima"
 - D. "liyucan aannalahum"
2. "On that day she shall report whatever had happened to her." This verse is from her suratul
 - A. Baqarah
 - B. Zilzalah
 - C. Asr
 - D. Fatiha
3. Which of the following terms is wrongly matched with its meaning?
 - A. Muttaqiin - those who fear Allah (S.W)
 - B. Mutawaqifin - those who rely on Allah (S.W)
 - C. Mu'aminin - those who believe in Allah (S.W)
 - D. Mutahahirin - those who fight in the course of Allah (S.W)
4. Complete this ayah from surah Al-humaza
Waylun likuli humazatin
 - A. Humaza
 - B. Lumaza
 - C. Adadah
 - D. Haamiyat
5. Why do muslims perform Ghusul on Fridays?
 - A. It is sunnah
 - B. Good months
 - C. Ibadah months
 - D. Sacred months
6. Ash-hurul are also called
 - A. Holy months
 - B. Good months
 - C. Ibadah months
 - D. Sacred months
7. All of the following people are recipients of sadaqa. Who is the best to be given sadaqa according to the teachings of the prophet (p.b.u.h)?
 - A. Poor
 - B. Widows
 - C. Orphans
 - D. Relatives
8. Which of the following is **not** an example of Najjis?
 - A. Saliva from an old man
 - B. Urine of a baby feeding on milk only
 - C. Blood of a goat slaughtered on Idd day
 - D. Cow dung
9. According to Islamic shariah, Mahr in marriage refers to
 - A. property or money given to bride's parents
 - B. property or money given too groom's parents
 - C. property or money given to the Waali
 - D. property or money given to the bride
10. Who of the following people mentioned below is a mother of all humankind?
 - A. Halima
 - B. Hawa
 - C. Khadija
 - D. Amina
11. Who among the following angels is in charge of rain?
 - A. Jibril
 - B. Izrail
 - C. Mikail
 - D. Malik
12. Muharram is the sacred months in Islam. 10th of Muharram is also known as
 - A. Ashura
 - B. Tenth
 - C. Lailatul Badr
 - D. Yaumul Haqq
13. The prayer of the muslims performed when there is an eclipse of the sun is called
 - A. Istikhara
 - B. Istisqui
 - C. Kusuf
 - D. Malik
14. In Islam, zamzam is considered as one of the sacred places. Who of the following people is not associated with it?
 - A. Adam
 - B. Hajur
 - C. Ismail
 - D. Ibrahim
15. The journey of the prophet (p.b.u.h) from Jerusalem to the seventh heaven is called
 - A. Isra
 - B. Miiraj
 - C. Hijra
 - D. Safar
16. How many of classes of najaasat do muslims observe?
 - A. 5
 - B. 4
 - C. 2
 - D. 3
17. Four pupils of standard six were asked by their IRE teacher to name a battle in which muslims were defeated. Who among them was right?
 - A. Ali - uhud
 - B. Juma - badr
 - C. Miryam - khandaq
 - D. Khadija - hunain
18. The main reason why Qabila killed Habel was due to
 - A. jealous
 - B. honesty
 - C. pride
 - D. rudeness
19. The caliph of Islam referred to as Dhun-Nurain is
 - A. Ali
 - B. Umar
 - C. Uthman
 - D. Abubakr
20. The celebration done to thank Allah for a newly born baby is referred to as
 - A. Aqiqah
 - B. Miraaj
 - C. Israi
 - D. Khitan
21. Backbiting is like eating the flesh of your dead brother. Which surah of the Quran condemns this?
 - A. Ikhlas
 - B. Nas
 - C. Humaza
 - D. Quraish
22. Which one of the following is **NOT** a teaching from surah Al-kauthar?
 - A. We should follow the prophet (S.A.W)
 - B. The prophet is assured of Allah's favours
 - C. Allah gave wisdom, patience and victory
 - D. Obeying Allah
23. Going for Hajj and Ihram are a sign of
 - A. equality
 - B. tolerance
 - C. truth
 - D. obedience
24. Why was the prophet's first Hajj known as Hijjatul widaa?
 - A. It was attended by many
 - B. He made an important speech
 - C. All his caliphs were not there
 - D. It was his first and last
25. Which of the following is among the islamic ceremonies and festivals?
 - A. Christmas
 - B. New year
 - C. Nikah
 - D. Diwali
26. Which propeht of Allah is also known as the friend of Allah?
 - A. Nabii Isa (a.s)
 - B. Prophet Muhhammad (saw)
 - C. Nabii Yusuf (as)
 - D. Nabii Ibrahim (as)
27. The sunnah of the pilgrim running from safa and marwa was first done by
 - A. lady Sarah (a.s)
 - B. Nabii Ibrahim (a.s)
 - C. lady Hajar (a.s)
 - D. Nabii Mohammad(a.s)
28. Why did Sarah tell Nabii Ibrahim to marry Hajar?
 - A. She was unable to give birth
 - B. She was a hypocrite
 - C. She was selfish
 - D. She wanted to divorce Nabii Ibrahim
29. Who among the prophets below observed the sun, moon and the stars while searching for Allah?
 - A. Suleiman (a.s)
 - B. Ibrahim (a.s)
 - C. Musa (a.s)
 - D. Daud (a.s)
30. Why was Sarah jealous of Hajar? Because
 - A. She was loved by Ibrahim
 - B. She gave birth to a baby boy
 - C. She was beautiful
 - D. She was troublesome



JINA LAKO	
JINA LA SHULE YAKO	




STEGA SUPREME SERIES
KISWAHILI SEHEMU YA PILI: INSHA
DARASA LA SITA 2016

MUDA: DAK 40

Andika insha ya kulisimua kuhusu;

MWEZI WA DISEMBA




NAME	
NAME OF YOUR SCHOOL	



STEGA SUPREME SERIES
ENGLISH SECTION B: COMPOSITION
STD 6 2016 Time : 40 Mins

Write an interesting story about;

A FUNERAL I ATTENDED



MARKING SCHEME 2016

<u>ENGLISH</u>		<u>KISWAHILI</u>		<u>MATHS</u>		<u>SCIENCE</u>		<u>SOCIAL STUDIES</u>		
1. C	31. A	1. C	31. B	1. A	31. A	1. D	31. C	1. A	31. B	61. A
2. C	32. B	2. B	32. B	2. A	32. D	2. C	32. A	2. D	32. D	62. B
3. A	33. A	3. D	33. A	3. C	33. B	3. B	33. D	3. B	33. A	63. B
4. B	34. A	4. B	34. D	4. D	34. D	4. B	34. A	4. A	34. C	64. C
5. D	35. C	5. C	35. B	5. C	35. C	5. B	35. C	5. C	35. B	65. D
6. C	36. B	6. A	36. A	6. B	36. D	6. D	36. D	6. D	36. D	66. D
7. C	37. C	7. D	37. C	7. C	37. B	7. A	37. C	7. B	37. A	67. D
8. D	38. B	8. B	38. B	8. A	38. A	8. C	38. D	8. D	38. C	68. B
9. A	39. D	9. C	39. D	9. D	39. C	9. A	39. B	9. A	39. B	69. B
10. B	40. B	10. A	40. A	10. B	40. C	10. A	40. D	10. C	40. D	70. D
11. A	41. D	11. C	41. A	11. D	41. A	11. B	41. D	11. B	41. A	71. B
12. A	42. A	12. B	42. C	12. C	42. D	12. C	42. C	12. D	42. C	72. C
13. B	43. D	13. C	43. B	13. B	43. B	13. C	43. B	13. A	43. B	73. C
14. B	44. A	14. D	44. B	14. A	44. C	14. A	44. C	14. C	44. D	74. A
15. C	45. D	15. A	45. A	15. C	45. A	15. B	45. D	15. B	45. A	75. B
16. B	46. D	16. C	46. A	16. D	46. C	16. D	46. C	16. D	46. C	76. C
17. C	47. D	17. D	47. C	17. B	47. D	17. D	47. B	17. A	47. B	77. D
18. A	48. B	18. A	48. B	18. A	48. C	18. C	48. D	18. C	48. D	78. C
19. B	49. C	19. D	49. C	19. C	49. B	19. C	49. B	19. B	49. A	79. D
20. B	50. B	20. C	50. B	20. D	50. A	20. D	50. D	20. D	50. C	80. D
21. B		21. B		21. A		21. D		21. A	51. B	81. A
22. A		22. A		22. B		22. A		22. C	52. D	82. C
23. C		23. D		23. C		23. C		23. B	53. A	83. D
24. A		24. C		24. D		24. B		24. D	54. C	84. A
25. C		25. B		25. D		25. C		25. A	55. B	85. B
26. C		26. B		26. A		26. D		26. C	56. D	86. C
27. D		27. C		27. C		27. B		27. B	57. B	87. A
28. A		28. A		28. C		28. A		28. D	58. C	88. B
29. B		29. D		29. D		29. D		29. A	59. A	89. B
30. D		30. C		30. B		30. B		30. C	60. A	90. C

A COMPOSITION MARKING SCHEME

MARKING CRITERION

1. The composition will be assessed according to the following guidelines.

- The maximum mark will be 40 and the minimum (mark 0!)

- Does the script show that the candidate can communicate accurately, fluently and imaginatively in English?

Accuracy (8 marks)

a) Correct tenses and agreement of verbs (4 marks) b) Accurate use of vocabulary (4 marks)

(16) c) Following a sequence (4 marks)

d) Correct punctuation (4 marks)

Fluency (8 marks)

a) Words in the correct order (4 marks)

b) Sentence connection and paragraphs (4 marks)

c) Correct spelling (4 marks)

d) Ideas developed in logical sequence (4 marks)

Imagination (8 marks)

a) Unusual but appropriate use of words and phrases (4 marks)