



HIGH RANK EXAM SERIES

STANDARD FIVE

YEAR 2016

[5]
ENGLISH

Time: 1Hr. 40 Min.

Fill in the blank spaces numbered 1 - 15 with the best alternative:-

My name is Charo and I 1 in Malindi. We 2 a big family of 3 members. My 4 name is Abed, and 5 has a shop in Malindi town. My mother's name is Mrs. Abedi. She 6 not work anywhere 7 sometimes helps 8 father in the shop.

I have four 9 and three sisters. Three 10 my 11 and one sister 12 studying in high school. My eldest brother 13 at a bank. My mother takes 14 interest in 15 studies.

- | | | | |
|----------------|-------------|--------------|-------------|
| 1. A. leave | B. leaves | C. live | D. living |
| 2. A. has | B. have | C. having | D. is |
| 3. A. one | B. once | C. much | D. ten |
| 4. A. father's | B. father | C. fathers's | D. fathers |
| 5. A. they | B. we | C. he | D. him |
| 6. A. do | B. does | C. doesn't | D. didn't |
| 7. A. even | B. such | C. of | D. but |
| 8. A. my | B. mine | C. hers | D. then |
| 9. A. brother | B. sister | C. aunt | D. brothers |
| 10. A. to | B. for | C. of | D. in |
| 11. A. bother | B. brothers | C. sister | D. parents |
| 12. A. are | B. is | C. was | D. or |
| 13. A. work | B. working | C. works | D. walk |
| 14. A. kin | B. keenn | C. ken | D. keen |
| 15. A. there | B. our | C. them | D. then |

Choose the opposite of the underlined words in questions 16 - 18

16. The girl dug a shallow hole.
A. deep B. broad
C. wide D. thin
17. The road is very narrow.
A. long B. wide
C. large D. high
18. The wealthy man has come.
A. rich B. kind
C. honest D. poor

For questions 19 - 21, complete the question tags

19. We are going home, _____?
A. are we B. aren't we
C. isn't it D. do we
20. She cannot run very fast, _____?
A. can't she B. is she
C. can she D. aren't we
21. He did not see them, _____?
A. did he B. didn't them
C. isn't he D. do he

For questions 22 - 24, complete the sentences with the best answer

22. The young one of a goat is a _____.
A. calf B. lamb
C. kid D. cub
23. A person who repairs cars is a _____.
A. cobbler B. mechanic
C. conductor D. plumber

24. A dog lives in a _____.
A. den B. byre
C. hutch D. kennel

For questions 25 - 27, choose the general term of the given words:

25. Car, bus, taxi, lorry.
A. Machines
B. Houses
C. Engines
D. Vehicles
26. Pencil, rubber, exercise books, ruler.
A. Stationary
B. Items
C. Stationery
D. Shopping
27. Plates, cups, sufurias, spoons.
A. Kitchen
B. Utensils
C. Furniture
D. Clothing

For questions 28 - 30, complete the sentences correctly

28. She is the _____ girl in our class.
A. tallest B. tall
C. taller D. better
29. What is the _____ news?
A. late B. later
C. latter D. latest
30. I go to school _____ foot
A. by B. in
C. on D. at

Read the passage below and then answer questions 31 to 40:-

It was a Friday afternoon. The children were going home from school. They were talking about the games which they had played during the English lesson. James was unhappy because he had not won one of the games.

“Let us play some other games now,” said another child. “It is Friday today so we do not have any lesson tomorrow.”

In a couple of minutes, one girl came with an idea. “I will show items of different measurements to you. You must guess their length, height and weight. You should also use the words metre, litre or kilogram in your answer.” James, Mweni and the other children played this game together?

- | | |
|---|--|
| <p>31. Which day was it? A. Saturday B. Friday C. Sunday D. Thursday</p> | <p>37. The following day the children were not going to have A. any lesson B. enough food C. friends D. games</p> |
| <p>32. Where were the children from? A. Home B. Market C. Farm D. School</p> | <p>38. One girl came up with an idea to play which game? A. Football B. Hide and seek C. Running D. Measuring game</p> |
| <p>33. What was the children talking about? A. Games B. Examinations C. Work D. Food</p> | <p>39. The children in the passage are likely to be A. teachers B. pupils C. policemen D. parents</p> |
| <p>34. Who was unhappy? A. Mweni B. James C. Amos D. Thomas</p> | <p>40. While playing, the children were to use these words except A. fat B. litre C. kilogram D. metre</p> |
| <p>35. The games were played during which lesson? A. Mathematics B. Kiswahili C. English D. Science</p> | |
| <p>36. At what time of the day were the children going home? A. Morning B. Night C. Afternoon D. Dawn</p> | |

Read the passage below and then answer questions 41 - 50:-

A long time ago, in the village of Kanga, there lived a tortoise, hare and hyena. They were great friends. Tortoise had a workshop where he made tools and furniture using metal and wood. He used broken horns to make handles for the tools. There was a huge heap of these horns in one corner of his workshop. Many animals used to buy the tools and furniture.

Tortoise employed his friend hyena and hare to help him. Hyena made the metal tools and furniture. He used his strong teeth to cut the metal. Hare made the handles for the tools. Hare noticed that hyena kept chewing as he worked. When he asked hyena what he was chewing, he said that he was chewing metal to shape it.

- | | |
|--|---|
| 41. How many animals are mentioned in the passage? A. Two B. Four C. Five D. Three | 46. Broken horns were used in making A. cutting edges B. handles C. clothes D. metallic parts of tools |
| 42. According to the passage, Kanga is the name of a A. person B. workshop C. forest D. village | 47. How many animals were employed by tortoise? A. Three B. Four C. One D. Two |
| 43. Tortoise and hyena were great A. foes B. friends C. enemies D. sibblings | 48. The animals that used to buy tools and furniture were A. only two B. very many C. very few D. three |
| 44. The workshop belonged to A. tortoise B. hyena C. lion D. hare | 49. What did the hyena use to cut the metal? A. Tinsnip B. Claws C. Teeth D. Chisel |
| 45. The tools and furniture were made using A. clay and metal B. wood and plastic C. wood and metal D. clay and wood | 50. Hyena said that he was chewing A. horns B. metal C. food D. stone |



HIGH RANK EXAM SERIES

DARASA LA TANO

MWAKA 2016

[5]
KISWAHILI

Muda: Saa 1 Dk. 40

Jaza nafasi zilizo wazi katika habari ifuatayo kwa vitenzo sahihi:-

Hapo zamani 1 mababu zetu 2 kijiji 3 Bidii kulizaliwa 4
wawili pacha. 5 walifanana kama 6 kwa ya pili. 7 na mila 8
desturi za Watharaka, vijana 9 walipewa majina 10 watu wa 11
wao ambao 12 washaaga 13. 14 alitwa Tito na 15 Tatu.

- | | | | |
|-----------------|-------------|--------------|--------------|
| 1. A. wa | B. na | C. za | D. la |
| 2. A. kwa | B. katika | C. ndani | D. mle |
| 3. A. ya | B. wa | C. za | D. cha |
| 4. A. mtoto | B. vijana | C. msichana | D. mvulana |
| 5. A. Wao | B. Yeye | C. Nyinyi | D. Sisi |
| 6. A. moja | B. shilingi | C. kwanza | D. mama |
| 7. A. Ingawa | B. Ilhali | C. Ijapokuwa | D. Kulingana |
| 8. A. na | B. hadi | C. pengine | D. vilivyo |
| 9. A. huyo | B. zao | C. hawa | D. hayo |
| 10. A. za | B. ya | C. vya | D. wa |
| 11. A. ukoo | B. koo | C. familia | D. mzazi |
| 12. A. alikuwa | B. walikua | C. walikuwa | D. ilikua |
| 13. A. kwaheri | B. buriani | C. mzima | D. dunia |
| 14. A. Moja | B. Wote | C. Yote | D. Mmoja |
| 15. A. mwengine | B. nyingine | C. ingine | D. mengine |

Kutoka swali la 16 - 30, jibu swali kulingana na maagizo:-

16. Neno kucha liko katika ngeli gani?

- A. I - ZI B. U - ZI
C. LI - YA D. KI - VI

17. Tegua kitendawili:

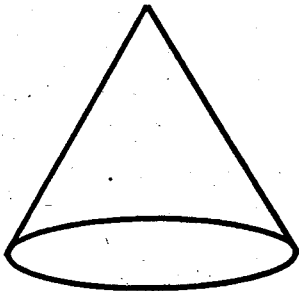
Akiuawa atafufuka tena.

- A. Maiti B. Uhai
C. Pumzi D. Nywele

18. Makao ya kuku ni _____

- A. mzinga B. tundu
C. kizimba D. kasri

19. Umbo hili ni gani?



- A. Pembe tatu B. Duara dufu
C. Pia D. Mraba

20. Mtoto wa ami au shangazi huitwa _____

- A. amu B. shemeji
C. mpwa D. binamu

21. Kamilisha sentensi ifuatayo;

Mgeni _____ anakuja ametoka nchi ya mbali.

- A. ndiye B. ambao
C. mwenye D. ambaye

22. Kinyume cha neno "Kijana" ni _____

- A. msichana B. mzee
C. mzazi B. mkongwe

23. Akisami $\frac{1}{6}$ kwa maneno ni

- A. thumni B. humusi
C. robo D. sudusi

24. Jua huchomoza upande wa

- A. Magharibi B. Mashariki
C. Kaskazini D. Kusini

25. Kanusha:

Ninaenda sokoni.

- A. Sitaenda sokoni
B. Siwezi enda sokoni
C. Siendi sokoni
D. Sijaenda sokoni

26. Maradhi ya Malale husababishwa na

- A. mbung'o B. mbu
C. chawa D. kunguni

27. Mavazi rasmi ya shule huitwa

- A. Karo B. Kanchiri
C. Sare D. Kaptura

28. Kamilisha sentensi;

Penseli imekanyagwa na kuvunjika

- A. pu B. tifu
C. kwa D. kacha

29. Andika kwa wingi;

Mbuzi yule ni mkubwa

- A. Mambuzi wale ni wakubwa
B. Mbuzi zile ni kubwa
C. Mbuzi wale ni wakubwa
D. Mambuzi yale ni wakubwa

30. Kamilisha methali:

Mvumilivu hula _____

- A. yote B. mbichi
C. kitamu D. mbivu

Soma habari ifuatayo kisha ujibu maswali 31- 40:-

Ali ni mwanaume wa umri wa miaka thelathini na mitano. Ameoa na ana watoto watatu. Mmoja wa kiume na wawili ni wa kike. Mvulana ndiye kitinda mimba. Watoto wake wameanza masomo yao katika shule ya msingi ilhali kitinda mimba yuko katika darasa la chekechea.

Bwana Ali ni yatima. Hata hivyo, hali hiyo haimwathiri sana kwani jamaa yake humtuliza moyo. Ali ni seremala. Anatengeneza samani na kuwauzia wateja wake naye hupata hela za kukimu mahitaji ya familia yake. Yeye ni mwenye bidii kazini na pia mwaminifu kwa wateja wake.

Ana moyo wa utu. Kila anapongea na wateja wake huwaheshimu kwa kujua heshima si utumwa. Kazi hii alisomea baada ya kufika katika darasa la nane. Hangeweza kuendeleza masomo yake kwa sababu ya ukosefu wa pesa.

31. Kulingana na taarifa, Ali _____

- A. hana bibi
- B. ana bibi
- C. ni mwanafunzi
- D. hana utu

32. Watoto wa Ali ni _____

- A. wawili
- B. wanne
- C. mmoja
- D. watatu

33. Ali ana wasichana wangapi?

- A. Mmoja
- B. Watatu
- C. Wawili
- D. Watano

34. Kati ya watoto wa Ali, kitinda mimba ni

- A. mvulana
- B. msichana
- C. binti
- D. mwalimu

35. Watoto wote wa Ali _____

- A. hawaendi shuleni
- B. wanaenda shuleni
- C. ni wasichana
- D. wanafanya kazi

36. Bwana Ali ni yatima kwani _____

- A. hana watoto
- B. ameo
- C. ana wazazi
- D. hana wazazi

37. Ali hufanya kazi ya _____

- A. useremala
- B. uhunzi
- C. udereva
- D. ualimu

38. Kazi ya Ali humsaidia kupata

- A. hela
- B. watoto
- C. gari
- D. ujuzi

39. Ali alisoma hadi darasa la

- A. nne
- B. sita
- C. pili
- D. nane

40. Ali hakuweza kuendeleza masomo yake kwa sababu ya ukosefu wa

- A. marafiki
- B. mifugo
- C. pesa
- D. bidii

Soma habari ifuatayo kisha ujibu maswali 41-50

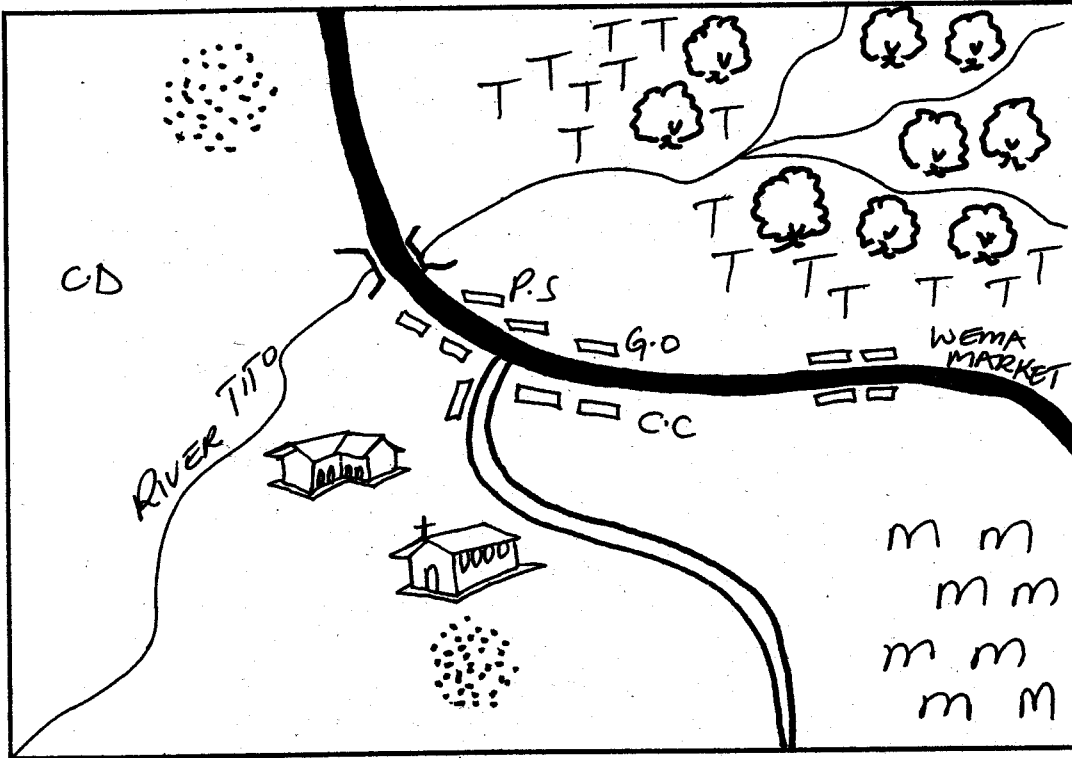
Siku moja Amina na Zainabu walipokuwa wamelala, mama yao alikwenda mtoni kuteka maji. Walishikwa na usingizi wakalala fofofu. Katika usingizi, watoto waliota ndoto ambapo waliona jitu likiwakemea huku likiwapigia kelele. Hapo waligutuka kwa pamoja na kwa kweli walisikia kelele zikitoka kila upande. Katika hali hii ya hofu kubwa, waliruka kutoka kitandani na kujificha darini. Mara kelele zikatokomea.

Mama alijikaza kisabuni ili afike nyumbani akihofia kuwa wanawe wanatishika na mlio wa ngurumo za radi na mvua iliyokuwa ikinyesha. Alipofika nyumbani, aliyakuta matandiko tu yalivyokuwa yametupwa ovyoovyo kitandani. Aliwatafuta watoto wake kila mahali lakini hakuwapata. Akadhani labda walienda kwa majirani. Baadaye walishuka kutoka darini. Mamao alipowaona alifurahi sana.

- | | |
|--|--|
| 41. Amina na zainabu walipokuwa wakilala, mamao alienda wapi? A. Sokoni B. Mtoni C. Shambani D. Dukani | 46. Amina na Zainabu walijificha wapi? A. Mvunguni mwa kitanda B. Darini C. Jikoni D. Shambani |
| 42. Mama alienda mtoni kufanya nini? A. Kupiga mbizi B. Kutema kuni C. Kufua nguo D. Kuteka maji | 47. Mama alihofia kuwa wanawe wanatishika na A. giza B. mlio wa ngurumo za radi C. kiu D. njaa |
| 43. Ndotoni waliona nini? A. Simba B. Watoto C. Jitu D. Nyoka | 48. Mama alipokuwa akirudi nyumbani kulikuwa na A. mvua B. jua kali C. vumbi D. kiangazi |
| 44. Amina na Zainabu walipogutuka walisikia A. kelele B. wimbo C. radio D. mama yao | 49. Mama alipofika nyumbani, alipata nini kitandani? A. Chakula B. Matandiko C. Wadudu D. Maji |
| 45. Waliposikia kelele, Amina na Zainabu walishikwa na _____ A. njaa B. hasira C. hofu D. furaha | 50. Mama alidhani kuwa Amina na Zainabu wameenda wapi? A. Shuleni B. Kanisani C. Kwa majirani D. Msituni |

PATA AREA

KEY



| | |
|--|---------------------|
| | Tarmac Road |
| | Murrum Road |
| | River & Bridge |
| | Permanent Buildings |
| | School |
| | Church |
| | Forest |
| | Settlements |
| | Tea |
| | Maize |
| | Police Station |
| | Governor's Office |
| | County Commissioner |
| | Cattle Dip |

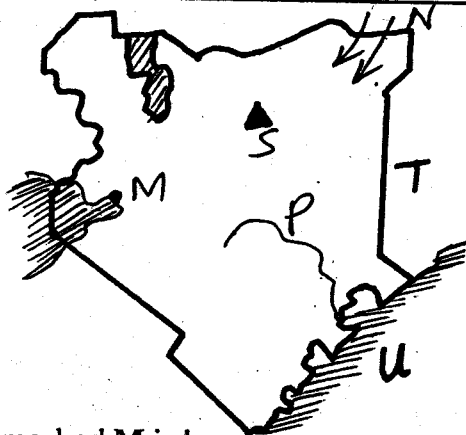
SCALE 0 1 2 3 4 5 6 7 8 9 10 km

Use the map of PATA AREA above to answer question 1 - 7:-

- River Tito flows from _____
 A. North West B. South East
 C. South West D. North East
- Pata area is headed by a _____
 A. Governor
 B. Senator
 C. County representative
 D. Women representative
- Most people in Pata area are _____
 A. Muslims B. Hindus
 C. Christians D. Traditionalists
- The main means of transport in Pata area is _____
 A. air B. road
 C. railway D. water
- Which cash crop is grown in Pata area?
 A. Tea B. Maize
 C. Coffee D. Pyrethrum
- The climate of the North Eastern Region of Pata area is
 A. hot and dry B. cool and dry
 C. hot and wet D. cool and wet
- Which economic activity is not carried out in Pata area?
 A. Crop growing B. Trade
 C. Mining D. Cattle keeping
- The following are Bantus except
 A. Pokomo B. Luhya
 C. Ameru D. Samburu
- The largest relief region in Kenya is
 A. coastal lowlands B. the lake basin
 C. Nyika plateau D. the highlands
- The following are cultural artefacts except
 A. guns B. gourds
 C. shields D. spears
- People who have a common ancestor form
 A. an age-set B. a family
 C. a clan D. a society

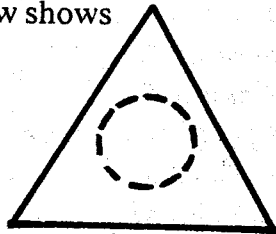
12. The following are basic family needs **except**
- | | |
|-------------|----------|
| A. shelter | B. radio |
| C. clothing | D. food |
13. Who among the following is **not** a member of a nuclear family?
- | | |
|-----------|-----------|
| A. Father | B. Mother |
| C. Child | D. Uncle |
14. The growing of crops for home use is known as
- A. cash crop farming
B. subsistence farming
C. commercial farming
D. horticultural farming
15. The colour of the national flag that symbolises the people is
- | | |
|----------|----------|
| A. white | B. red |
| C. green | D. black |
16. Which climate is experienced at the coastal lowland region?
- | | |
|-----------------|-----------------|
| A. Warm and wet | B. Cool and dry |
| C. Cool and wet | D. Warm and dry |
17. Which of these crops grows well in black cotton soil?
- | | |
|--------------|-----------|
| A. Tea | B. Rice |
| C. Pyrethrum | D. Coffee |
22. The country that borders Kenya marked T is
- | | |
|-------------|-------------|
| A. Uganda | B. Tanzania |
| C. Ethiopia | D. Somalia |
23. The water body marked U is known as
- A. lake Turkana
B. Indian Ocean
C. Lake Victoria
D. Lake Baringo
24. The only River-Lake Nilote in Kenya is the
- | | |
|----------|-------------|
| A. Tugen | B. Abagusii |
| C. Luo | D. Nandi |
25. Kenya is divided into how many counties?
- | | |
|--------|--------|
| A. 47 | B. 350 |
| C. 290 | D. 60 |
26. The following are cash crops commonly grown in Kenya **except**
- | | |
|-----------|--------------|
| A. tea | B. yams |
| C. coffee | D. pyrethrum |
27. Cattle kept **mainly** for milk production are known as
- | | |
|----------|-------------|
| A. beef | B. poultry |
| C. dairy | D. broilers |
28. Moral values in the past helped in promoting
- | | |
|-------------------|---------------|
| A. indiscipline | B. dishonesty |
| C. good behaviour | D. corruption |
29. Which mineral is mined in lake Magadi?
- | | |
|--------------|--------------|
| A. Diatomite | B. Soda ash |
| C. Limestone | D. Flourspar |
30. Which of the following can lead to conflict in a school?
- | |
|--------------------------|
| A. Finishing homework |
| B. Respecting teachers |
| C. Obeying school rules |
| D. Abusing fellow pupils |
31. Cultural artefacts are kept in the
- | | |
|--------------|--------------|
| A. game park | B. museum |
| C. hotels | D. libraries |
32. The **main** economic activity in Kenya is
- | | |
|----------------|-----------|
| A. agriculture | B. trade |
| C. fishing | D. mining |
33. The following are traditional industries **except**
- | | |
|-------------|-----------------|
| A. basketry | B. glass making |
| C. pottery | D. wood carving |
34. Tourists come to Kenya **mainly** to see
- | | |
|-------------|-----------|
| A. wildlife | B. hotels |
| C. ocean | D. roads |
35. Which of these communities is a Cushite?
- | | |
|-----------|------------|
| A. Maasai | B. Giriama |
| C. Keiyo | D. Oromo |

Use the map below to answer questions 18 - 23:



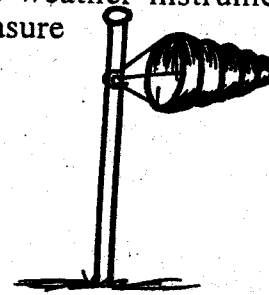
18. The town marked M is known as
- | | |
|-----------|------------|
| A. Busia | B. Nakuru |
| C. Kisumu | D. Eldoret |
19. The language group that followed the route marked N is
- | | |
|------------|-------------|
| A. Nilotes | B. Cushites |
| C. Bantus | D. Semites |
20. The river marked P is known as river
- | | |
|------------|-----------|
| A. Tana | B. Athi |
| C. Turkwel | D. Nyando |
21. The physical feature marked S is known as
- | | |
|-------------------|----------------------|
| A. mount Kenya | B. mount Elgon |
| C. mount Marsabit | D. mount Kilimanjaro |

36. Which crop grows best in the red volcanic soil?
 A. Sugarcane B. Rice
 C. Cotton D. Tea
37. Which community paints the body with the red ochre soil?
 A. Maasai B. Marakwet
 C. Akamba D. Somali
38. Road accidents are mainly caused by
 A. overstocking
 B. careless use of roads
 C. overloading
 D. lack of traffic police
39. The cutting of trees without planting others is known as
 A. agro-forestry B. reforestation
 C. deforestation D. afforestation
40. Towns are also known as
 A. villages B. urban centres
 C. markets D. bus stops
41. The fastest means of transport is
 A. air B. railway
 C. road D. water
42. Tea is mainly grown in
 A. Kisumu B. Malindi
 C. Meru D. Kericho
43. Communities in Kenya before the coming of Europeans mainly interacted through
 A. intermarriage B. trade
 C. raids D. ceremonies
44. A person who belongs to a country is known as a
 A. citizen B. patriot
 C. politician D. student
45. A good citizen should not be
 A. kind B. respectful
 C. corrupt D. generous
46. The road sign below shows



- A. bumps ahead
 B. round about
 C. pedestrian crossing
 D. hospital ahead
47. The main duty of the police is to
 A. kill criminals B. arrest drunkards
 C. keep law and order D. beat up people
48. Who among the following is not elected into office?
 A. County Commissioner
 B. Governor

- C. Senator
 D. Member of Parliament
49. Dairy farming is conducted in areas that are
 A. hot and dry B. cool and dry
 C. hot and wet D. cool and wet
50. The lake which is not found within the Rift Valley among the following is lake
 A. Naivasha B. Baringo
 C. Victoria D. Magadi
51. The first president of Kenya was
 A. Daniel Moi B. Mwai Kibaki
 C. Jomo Kenyatta D. Oginga Odinga
52. The rite of passage from childhood into adulthood is known as
 A. marriage B. birth
 C. death D. initiation
53. Pupils go to school mainly to
 A. eat B. learn
 C. play D. sing
54. Relief rainfall is mainly experienced in
 A. dry areas
 B. highland areas
 C. towns
 D. areas near large water bodies
55. The means of communication used by most people nowadays is
 A. mobile phone B. radio
 C. newspaper D. television
56. The following factors influence climate of a place except
 A. longitude B. altitude
 C. latitude D. relief
57. Beef cattle are kept in large enclosed areas called
 A. farms B. plantations
 C. ranches D. cages
58. The weather instrument below is used to measure



- A. speed of wind B. strength of wind
 C. temperature D. rainfall
59. A person who loves his/her country and is ready to die for it is known as a
 A. patriot B. leader
 C. foreigner D. tourist
60. Flowers are transported to foreign countries using
 A. railway B. road
 C. water D. air

SECTION II - C.R.E

61. Adam and Eve lived in the garden of
A. Olives B. Gethsemane
C. Eden D. Bethlehem
62. Noah had the following sons **except**
A. Shem B. Seth
C. Japheth D. Ham
63. On which day did God create the sun, moon and stars?
A. Fifth B. Sixth
C. Third D. Fourth
64. Ahab wanted to take _____ vineyard.
A. Naboth's B. Solomon's
C. Isaiah's D. Jeremiah's
65. The **last** book in the Old Testament is
A. Revelation B. Malachi
C. Psalms D. Luke
66. The **best** gift that king Solomon asked God is
A. wisdom B. wealth
C. women D. power
67. The first king in Israel was
A. David B. Saul
C. Ahab D. Solomon
68. Who was thrown into the den of lions?
A. Daniel B. Samuel
C. Isaiah D. Jonah
69. Where did the Israelites celebrate the first Passover feast?
A. Jerusalem B. Wilderness
C. Egypt D. Canaan
70. Hannah promised to take her _____ to the temple to serve God
A. son B. husband
C. parent D. friend
71. John the Baptist preached about _____
A. hell B. repentance
C. pride D. disobedience
72. How many gifts were given to baby Jesus?
A. Five B. Two
C. Four D. Three
73. Who wanted to kill Baby Jesus?
A. Pilate B. Pharaoh
C. Herod D. Judas
74. In the wilderness, Satan told Jesus to change stones into
A. wine B. honey
C. bread D. meat
75. How many days and nights did Jesus take in the wilderness?
A. Forty B. Thirty
C. Fifty D. Twenty
76. The first disciples of Jesus were
A. priests B. farmers
C. fishermen D. carpenters
77. The disciple whom Jesus loved most was
A. Peter B. John
C. Judas D. Andrew
78. Who **among** the following worked as a tax collector before being called?
A. Levi B. Phillip
C. Thomas D. James
79. Jesus raised a widow's son in the town of
A. Cana B. Nazareth
C. Jericho D. Nain
80. The following are gifts of the Holy Spirit **except**
A. joy B. preaching
C. wisdom D. healing
81. Jesus calmed the storm to show that He had power over
A. earth B. diseases
C. nature D. Satan
82. Where was Jesus crucified?
A. Gethsemane B. Olives
C. Golgotha D. Cana
83. Lazarus and his sisters lived in the town of
A. Bethany B. Samaria
C. Jericho D. Nazareth
84. Jesus washed the feet of His disciples to teach about
A. sacrifice B. honesty
C. cleanliness D. service
85. A good leader should be
A. humble B. greedy
C. selfish D. rude
86. The Akamba call their God
A. Asis B. Mulungu
C. Enkai D. Were
87. In the past, people worshipped God in the
A. mosque B. church
C. shrines D. temple
88. We should _____ people living with HIV/AIDS.
A. hate B. abuse
C. beat D. help
89. Who among the following is **not** a needy person?
A. Poor B. Lame
C. Blind D. Rich
90. If your friend has stepped on your feet without knowing, you should
A. beat the person
B. hate the person
C. forgive the person
D. abuse the person

1. Digestion of food ends in the
 - A. anus
 - B. large intestines
 - C. small intestines
 - D. stomach

2. Which teeth is never shed?
 - A. Molars
 - B. Premolars
 - C. Canines
 - D. Incisors

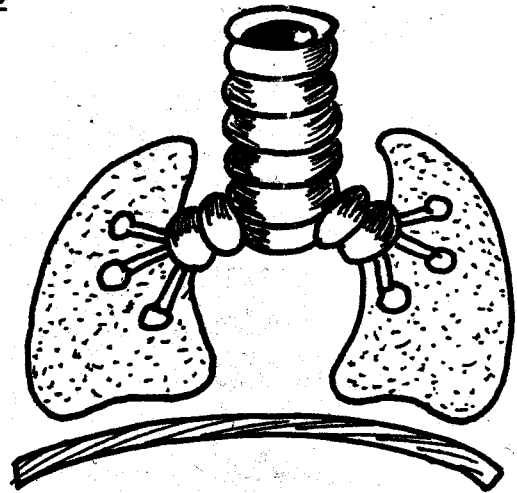
3. The date before which medicine should be used is known as the
 - A. delivery date
 - B. expiry date
 - C. disposal date
 - D. manufacturing date

4. In which stage of HIV/AIDS development will a victim test negative?
 - A. Full blown
 - B. Window
 - C. Incubation
 - D. Symptomatic

5. A snake and a newt have one thing in common. It is that they both
 - A. have scales
 - B. lack the backbone
 - C. have constant body temperature
 - D. lay eggs

Use the diagram below to answer questions

6 - 8



6. Which part is kept open by the C-shaped rings of cartilages?

| | |
|------|------|
| A. P | B. M |
| C. N | D. K |

7. The part marked L is known as

| | |
|--------------|-------------|
| A. trachea | B. bronchus |
| C. diaphragm | D. alveoli |

8. When breathing in the part marked N becomes

| | |
|----------------|---------|
| A. dome shaped | B. flat |
| C. thin | D. red |

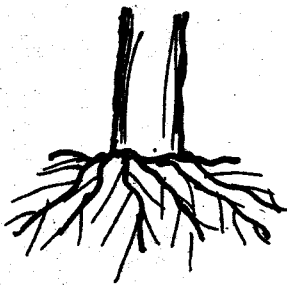
9. Which of the following stings to scare away its enemy?
 - A. Tick
 - B. Wasp
 - C. Butterfly
 - D. Mosquito

10. Which of the following is not a characteristic of animals?
- A. They reproduce
 - B. They make their own food
 - C. They remove waste
 - D. They feed

11. During digestion, food mixes with bile juice in _____
- A. stomach
 - B. rectum
 - C. duodenum
 - D. small intestine

12. Which of these animals is an invertebrate?
- A. Lizard
 - B. Frog
 - C. Turtle
 - D. Snail

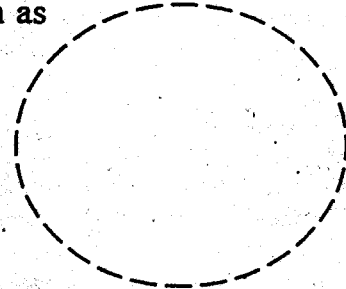
13. The root below belongs to which plant?



- A. maize
 - B. beans
 - C. carrots
 - D. cassava
14. The type of teeth used for tearing food is
- A. molars
 - B. canines
 - C. incisors
 - D. premolars
15. Which of these plants is green and non-flowering?
- A. Mould
 - B. Maize
 - C. Algae
 - D. Mushroom
16. Which of these organisms is not found living in soil?
- A. Butterfly
 - B. Spring tail
 - C. Beetle
 - D. Ant lion

17. The following are natural sources of light except
- A. firefly
 - B. moon
 - C. sun
 - D. glowworm

18. The phase of the moon shown below is known as



- A. gibbous
 - B. new moon
 - C. crescent
 - D. first quarter
19. Which of the following is a harmful animal?
- A. Mosquito
 - B. Butterfly
 - C. Fish
 - D. Lizard
20. A ship is big but it floats on water mainly because of its
- A. mass
 - B. size
 - C. shape
 - D. weight
21. Absorption of water and mineral salts takes place in the
- A. stomach
 - B. colon
 - C. ileum
 - D. duodenum
22. Which one is not a special sound?
- A. Ringing of a phone
 - B. Screaming
 - C. Hooting of a vehicle
 - D. Ambulance siren
23. Below are sources of water except
- A. rainfall
 - B. tap
 - C. ocean
 - D. dam

24. Which of the following types of soil is best for modelling?

- A. Clay
- B. Sand
- C. Loam
- D. Silt

25. The following is a weed used as vegetable. Which one?

- A. Oxalis
- B. Sodom apple
- C. Pigweed
- D. Thorn apple

26. Which of the following is the sense of sight?

- A. Ear
- B. Nose
- C. Tongue
- D. Eye

27. The part of the leaf marked P is



- A. petiole
- B. lamina
- C. apex
- D. midrib

28. The handle of any tool should be

- A. rough
- B. loosely fixed
- C. smooth
- D. broken

29. Which of these animals produces mohair?

- A. Sheep
- B. Goat
- C. Pig
- D. Cow

30. Fibre in diet helps to prevent

- A. constipation
- B. dehydration
- C. diarrhoea
- D. hunger

31. Which of these substances can best be used to reflect light?

- A. Stone
- B. Paper
- C. Mirror
- D. Cloth

32. Gaseous exchange in the breathing system takes place in the

- A. trachea
- B. alveoli
- C. bronchioles
- D. nostrils

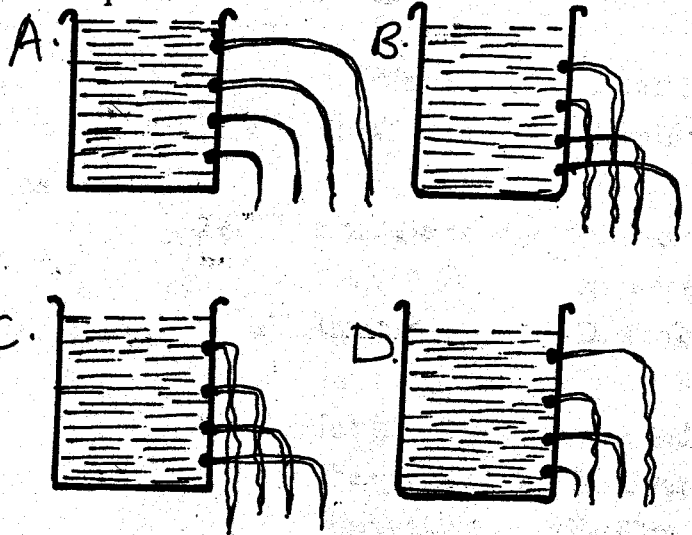
33. Which of the following is a source of heat?

- A. Gas
- B. Firefly
- C. Torch
- D. Moon

34. Which of the following is a sea mammal?

- A. Shark
- B. Crocodile
- C. Bat
- D. Whale

35. Which of the following diagrams best shows that pressure in liquids increases by depth?



36. Which of these animals is an amphibian?

- A. Salamander
- B. Tortoise
- C. Millipede
- D. Spider

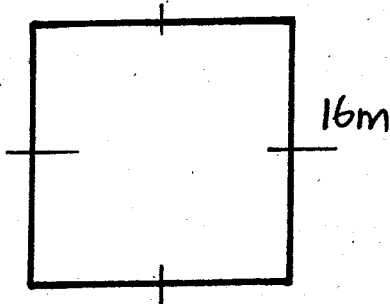
37. Layers are mainly kept for
 A. meat B. eggs
 C. milk D. wool
38. Filtering water helps in removing
 A. germs
 B. colour
 C. dirt
 D. living organisms
39. A true insect has how many pairs of legs?
 A. Six B. Four
 C. Eight D. Three
40. The following are body building foods **except**
 A. rice B. eggs
 C. fish D. meat
41. Which one is a tuber crop?
 A. Sunflower B. Coffee
 C. Irish potato D. Sisal
42. Digestion of proteins begins in the
 A. mouth B. small intestines
 C. stomach D. duodenum
43. Which one is a recreational use of water?
 A. Surfing
 B. Irrigation
 C. Cooking
 D. Cooling machines
44. The following are personal items **except**
 A. socks
 B. toothpaste
 C. toothbrush
 D. handkerchief
45. The type of cloud shown below is known as
-
- A. nimbus B. cirrus
 C. stratus D. cumulus
46. We can take care of animals in the following ways **except**
 A. watering them
 B. sheltering them
 C. slaughtering them
 D. giving them food
47. Which one is a beverage crop?
 A. Wheat B. Coffee
 C. Rice D. Peas
48. Which one is a protective food?
 A. Apple B. Pork
 C. Beans D. Ugali
49. For us to see well we need
 A. water B. heat
 C. light D. darkness
50. Medicine should **not** be kept
 A. in a lockable cupboard
 B. in a labelled container
 C. out of children's reach
 D. in soda bottles



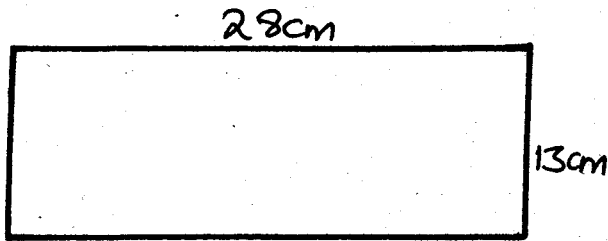
[5]

004 - MATHEMATICS

Time : 2 Hours.

- What is five hundred thousand two hundred and eighty in symbols?
A. 528000 B. 500208
C. 500280 D. 502080
- What is the place value of digit 5 in 62.153?
A. Tenths
B. Hundredths
C. Thousandths
D. Hundreds
- What is 44 in Roman numerals?
A. XLVI B. LXIV
C. LXVI D. XLIV
- What is the GCD of 18, 24 and 30?
A. 360 B. 6
C. 3 D. 180
- What is the next number in the pattern below?
15, 21, 27, 33, _____
A. 39 B. 37
C. 41 D. 44
- Convert 426m into centimetres
A. 42600 B. 42.6
C. 4.26 D. 0.426
- What is $\frac{4}{5}$ as a decimal?
A. 4.5 B. 0.8
C. 0.08 D. 0.5
- Find the sum of odd numbers between 10 and 30.
A. 200 B. 160
C. 112 D. 300
- Calculate the area of the square below.

A. 64 m² B. 246 m²
C. 256 m² D. 156 m²
- Write down $7\frac{3}{8}$ as an improper fraction.
A. $\frac{73}{8}$ B. $\frac{18}{8}$
C. $\frac{56}{8}$ D. $\frac{59}{8}$
- Add:
 $4.09 + 16 + 0.123 = \underline{\hspace{2cm}}$
A. 5.929 B. 20.213
C. 84.2 D. 59.29
- Arrange these fractions from the largest to the smallest; $\frac{2}{5}, \frac{1}{4}, \frac{3}{7}, \frac{5}{6}, \frac{4}{9}$
A. $\frac{5}{6}, \frac{4}{9}, \frac{3}{7}, \frac{2}{5}, \frac{1}{4}$
B. $\frac{1}{4}, \frac{2}{5}, \frac{3}{7}, \frac{4}{9}, \frac{5}{6}$
C. $\frac{5}{6}, \frac{3}{7}, \frac{4}{9}, \frac{1}{4}, \frac{2}{5}$
D. $\frac{4}{9}, \frac{1}{4}, \frac{2}{5}, \frac{5}{6}, \frac{3}{7}$

13. What is the perimeter of the rectangle below?



- A. 364 cm B. 41 cm
C. 82 cm D. 94 cm
14. What is the total value of digit 9 in the number 49856?
- A. 90000
B. 90
C. 900
D. 9000
15. Which one is a multiple of 12?
- A. 6 B. 36
C. 26 D. 3
16. Lenah packed tea leaves weighing 12 kg into packets of $\frac{1}{4}$ kg. How many packets did she get?
- A. 3 B. 24
C. 48 D. 42
17. Add: m cm
- | | |
|------|-----|
| 28 | 76 |
| + 14 | 43 |
| 42 | 119 |
- A. 43m 119cm
B. 42 m 19 cm
C. 43 m 19 cm
D. 43 m 9 cm

18. Jomo left home at 8.00 p.m and returned after six hours. At what time did he return?

- A. 2.00 a.m B. 1.00 a.m
C. 2.00 p.m D. 3.00 p.m

19. Work out:

$3685 - 1269 = \underline{\hspace{2cm}}$

- A. 3416 B. 2416
C. 2516 D. 2426

20. What is $3\frac{2}{6} - 1\frac{5}{6}$?

- A. $1\frac{5}{6}$ B. $2\frac{1}{2}$
C. $1\frac{1}{5}$ D. $1\frac{1}{2}$

21. Round off 36669 to the nearest hundred.

- A. 36700 B. 37000
C. 36600 D. 36670

22. The angle shown below is known as



- A. obtuse angle B. acute angle
C. right angle D. reflex angle

23. Which of the numbers is divisible by both 2 and 5?

- A. 285 B. 168
C. 350 D. 296

24. How many five shilling coins are there in a two hundred shilling note?

- A. 1000 B. 40
C. 50 D. 20

39. How many weeks are there in 112 days?

- A. 14 B. 16
C. 12 D. 18

40. Twenty five people collected Sh. 2000 to buy a table. If they paid equal amounts of money, how much did each pay?

- A. Sh. 800
B. Sh. 808
C. Sh. 202
D. Sh. 80

41. Subtract:

$$60518 - 25637 = ?$$

- A. 34981 B. 35881
C. 34881 D. 34871

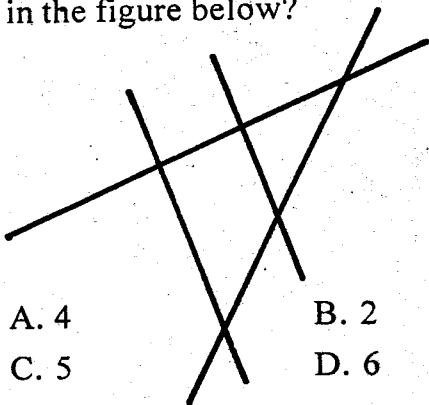
42. How many hours are there in six days?

- A. 72 B. 120
C. 60 D. 144

43. Atieno bought a book worth Sh. 582. She gave the shopkeeper a thousand shilling note. How much balance did she get?

- A. Sh. 428
B. Sh. 418
C. Sh. 480
D. Sh. 410

44. How many points of intersection are there in the figure below?



- A. 4 B. 2
C. 5 D. 6

45. What is 68×9 ?

- A. 612 B. 620
C. 512 D. 610

46. How many hours and minutes are there in 330 minutes?

- A. 6 hrs 30 min B. 5 hrs 30 min
C. 6 hrs D. 5 hrs 20 min

47. Which of these numbers is the largest?

- A. 4000 B. 4040
C. 4044 D. 4404

48. Work out:

| | |
|------------|------------|
| m | cm |
| 13 | 24 |
| <u> x</u> | <u> 5</u> |
| | |

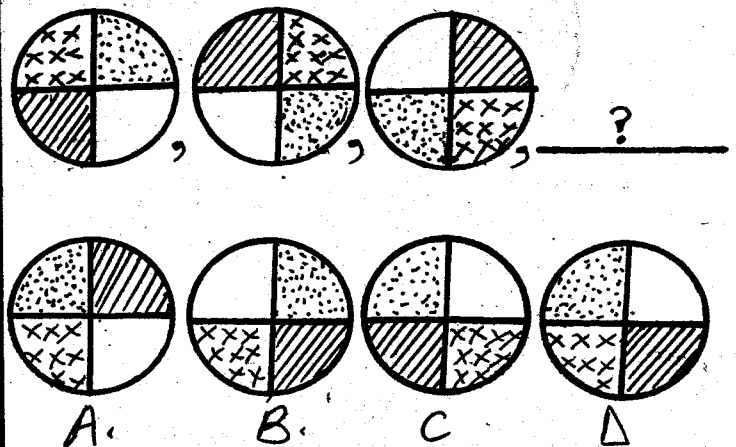
- A. 65m 20 cm B. 66 m 120 cm
C. 66m 20 cm D. 65m 10 cm

49. Add:

$$68 + 183 + 296 =$$

- A. 547 B. 437
C. 457 D. 536

50. What is the next shape in the pattern below?



25. Write $77/12$ as a mixed fractions.

A. $77/12$ B. $61/12$

C. $5\frac{1}{2}$ D. $6\frac{5}{12}$

26. In a school there are k girls and m boys.
How many pupils are there in the school?

A. $k - m$ B. km
C. $k + m$ D. $k \times m$

27. Which of these was a leap year?

A. 2002 B. 2006
C. 2009 D. 2012

28. Work out;

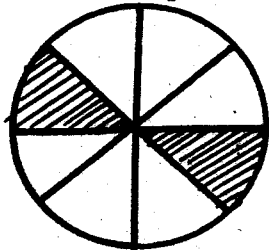
$486 \times 21 = \underline{\hspace{2cm}}$

A. 10206 B. 12006
C. 10106 D. 10026

29. Which one is a prime number?

A. 27 B. 51
C. 32 D. 17

30. Which of these fractions is equivalent to the unshaded part?



A. $6/7$ B. $5/8$
C. $3/4$ D. $1/2$

31. What do I take away from two hundred and eight to get eighty seven?

A. 121 B. 295
C. 101 D. 112

32. Rono had 948 oranges. He shared the oranges equally among 35 children. How many oranges did he remain with?

A. 27 B. 3
C. 13 D. 6

33. Work out:

| | |
|-----|----|
| m | cm |
| 29 | 52 |
| -13 | 84 |
| | |
| | |

A. 16 m 32 cm B. 16m 68 cm
C. 15m 68 cm D. 15m 32 cm

34. What is the sum of 285 and 59?

A. 16815 B. 226
C. 334 D. 344

35. Multiply;

$6 \times 1\frac{3}{4} =$

A. $10\frac{1}{2}$ B. $4\frac{1}{2}$
C. $10\frac{1}{4}$ D. $2\frac{1}{4}$

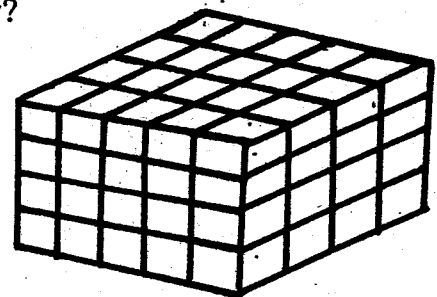
36. Write 0.27 as a fraction

A. $0.27/100$ B. $27/10$
C. $27/1000$ D. $27/100$


37. How many months are there in six years?


A. 60 B. 144
C. 72 D. 84

38. How many small cubes make up the stack below?



A. 80 B. 100
C. 64 D. 125







{5}
MARKING SCHEMES

HIGH RANK EXAM SERIES
STANDARD EIGHT
YEAR 2016

| <u>MATHS</u> | | <u>ENGLISH</u> | | <u>KISWAHILI</u> | | <u>SCIENCE</u> | | <u>SOCIAL STUDIES & CRE</u> | | |
|--------------|-------|----------------|-------|------------------|-------|----------------|-------|---------------------------------|-------|-------|
| 1. C | 31. A | 1. C | 31. B | 1. C | 31. B | 1. C | 31. C | 1. D | 31. B | 61. C |
| 2. B | 32. B | 2. B | 32. D | 2. B | 32. D | 2. A | 32. B | 2. A | 32. A | 62. B |
| 3. D | 33. C | 3. D | 33. A | 3. D | 33. C | 3. B | 33. A | 3. C | 33. B | 63. D |
| 4. B | 34. D | 4. A | 34. B | 4. B | 34. A | 4. B | 34. D | 4. B | 34. A | 64. A |
| 5. A | 35. A | 5. C | 35. C | 5. A | 35. B | 5. D | 35. C | 5. A | 35. D | 65. B |
| 6. A | 36. D | 6. B | 36. C | 6. B | 36. D | 6. D | 36. A | 6. D | 36. D | 66. A |
| 7. B | 37. C | 7. D | 37. A | 7. D | 37. A | 7. B | 37. B | 7. C | 37. A | 67. B |
| 8. A | 38. A | 8. A | 38. D | 8. A | 38. A | 8. B | 38. C | 8. D | 38. B | 68. A |
| 9. C | 39. B | 9. D | 39. B | 9. C | 39. D | 9. B | 39. D | 9. C | 39. C | 69. C |
| 10. D | 40. D | 10. C | 40. A | 10. B | 40. C | 10. B | 40. A | 10. A | 40. B | 70. A |
| 11. B | 41. C | 11. B | 41. D | 11. A | 41. B | 11. C | 41. C | 11. C | 41. A | 71. B |
| 12. A | 42. D | 12. A | 42. D | 12. C | 42. D | 12. D | 42. C | 12. B | 42. D | 72. D |
| 13. C | 43. B | 13. C | 43. B | 13. D | 43. C | 13. A | 43. A | 13. D | 43. B | 73. C |
| 14. D | 44. C | 14. D | 44. A | 14. D | 44. A | 14. B | 44. B | 14. B | 44. A | 74. C |
| 15. B | 45. A | 15. B | 45. C | 15. A | 45. C | 15. C | 45. D | 15. D | 45. C | 75. A |
| 16. C | 46. B | 16. A | 46. B | 16. B | 46. B | 16. A | 46. C | 16. A | 46. B | 76. C |
| 17. C | 47. D | 17. B | 47. D | 17. D | 47. B | 17. B | 47. B | 17. B | 47. C | 77. B |
| 18. A | 48. C | 18. D | 48. B | 18. C | 48. A | 18. B | 48. A | 18. C | 48. A | 78. A |
| 19. B | 49. A | 19. B | 49. C | 19. C | 49. B | 19. A | 49. C | 19. B | 49. D | 79. D |
| 20. D | 50. D | 20. C | 50. B | 20. D | 50. C | 20. C | 50. D | 20. A | 50. C | 80. A |
| 21. A | | 21. A | | 21. D | | 21. B | | 21. C | 51. C | 81. C |
| 22. B | | 22. C | | 22. B | | 22. A | | 22. D | 52. D | 82. C |
| 23. C | | 23. B | | 23. D | | 23. B | | 23. B | 53. B | 83. A |
| 24. B | | 24. D | | 24. B | | 24. A | | 24. C | 54. B | 84. D |
| 25. D | | 25. D | | 25. C | | 25. C | | 25. A | 55. A | 85. A |
| 26. C | | 26. C | | 26. A | | 26. D | | 26. B | 56. A | 86. B |
| 27. D | | 27. B | | 27. C | | 27. C | | 27. C | 57. C | 87. C |
| 28. A | | 28. A | | 28. D | | 28. C | | 28. C | 58. B | 88. D |
| 29. D | | 29. D | | 29. C | | 29. B | | 29. B | 59. A | 89. D |
| 30. C | | 30. C | | 30. D | | 30. A | | 30. D | 60. D | 90. C |

COMPOSITION MARKING SCHEME
MARKING CRITERIA

1. The composition will be assessed according to the following guidelines.

- The maximum mark will be 40 and the minimum mark 01

- Does the script show that the candidate can communicate accurately fluently and imaginatively in English?

- | | |
|---|--|
| Accuracy (8 marks) | (8 marks) |
| (a) Correct tenses and agreement of verbs (4 marks) | (b) Accurate use of vocabulary (4 marks) |
| (16) (c) Following a sequence (4 marks) | (d) Correct punctuation (4 marks) |
| Fluency (8 marks) | (8 marks) |
| (a) Words in the correct order (4 marks) | (b) Sentence connected and paragraphs (4 marks) |
| (b) Correct spelling (4 marks) | (d) Ideas developed in logical sequence (4 marks) |
| Imagination (8 marks) | |
| (a) Unusual but appropriate use of words and phrases (4 marks) | |
| (b) Variety of structure (4 marks) | |

NB: Please, teachers are requested to scrutinize this marking scheme before use. It is worth.