



HIGHRANK EXAM SERIES

STANDARD ONE

YEAR 2016

[1]

004 MATHEMATICS

NAME: _____


SCHOOL: _____


DATE: _____

Count and write

1.  = _____

2.  = _____

3.  = _____

4.  = _____

Write these numbers in symbols

5. Ten = _____

6. Eight = _____

7. Five = _____

8. Seven = _____

9. Two = _____

Write the missing numbers

10.

1		3		5	
---	--	---	--	---	--

11.

10		30			60
----	--	----	--	--	----

12. $1 + 1 =$ _____

13. $6 + 3 =$ _____


14. $2 + 3 =$ _____

15. $6 - 3 =$ _____

16. $5 - 4 =$ _____

17. $9 - 4 =$ _____

18. Which one is bigger? _____



19.
$$\begin{array}{r} 2 \\ +6 \\ \hline \end{array}$$

20.
$$\begin{array}{r} 1 \\ +5 \\ \hline \end{array}$$

21.
$$\begin{array}{r} 5 \\ +2 \\ \hline \end{array}$$

22.
$$\begin{array}{r} 3 \\ +3 \\ \hline \end{array}$$

23. $\begin{array}{r} 8 \\ -8 \\ \hline \end{array}$

24. $\begin{array}{r} 9 \\ -8 \\ \hline \end{array}$

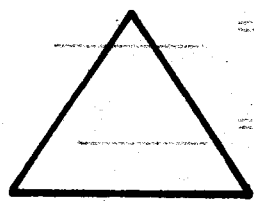

25. $\begin{array}{r} 7 \\ -1 \\ \hline \end{array}$



26. $\begin{array}{r} 4 \\ -3 \\ \hline \end{array}$

27. Two girls have eyes.


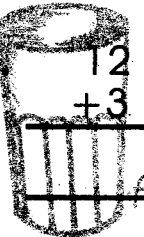
28. One boy has legs.

Name the shapes

29.  30. 

31.  32. 

(Square, Triangle, Circle, Rectangle)

33. $\begin{array}{r} 10 \\ +6 \\ \hline \end{array}$  34. $\begin{array}{r} 12 \\ +3 \\ \hline \end{array}$ 

35. $\begin{array}{r} 11 \\ -5 \\ \hline \end{array}$ 36. $\begin{array}{r} 55 \\ +2 \\ \hline \end{array}$

37. $\begin{array}{r} 25 \\ -5 \\ \hline \end{array}$ 38. $\begin{array}{r} 18 \\ -2 \\ \hline \end{array}$

40. $\begin{array}{r} 4 \\ -1 \\ \hline \end{array}$


41. $\begin{array}{r} 1 \\ -3 \\ \hline \end{array}$

42. $\begin{array}{r} 4 \\ -3 \\ \hline \end{array}$

43. $\begin{array}{r} 2 \\ -3 \\ \hline \end{array}$

44. $\begin{array}{r} 5 \\ -2 \\ \hline \end{array}$



45. $1 + 10 =$ 

46. $20 + 5 =$ 

47. This is a line. (straight, curved)

48. One cow has legs. 

49. Write these symbols $1 + 8 =$

50. Which one is shorter?  





HIGHRANK EXAM SERIES

STANDARD ONE

[1]

YEAR 2016

004 SOCIAL STUDIES & C.R.E

NAME: _____


SCHOOL: _____

DATE: _____


1. A family lives in a _____
(bush, home, hole)

2. We should _____ our parents
(obey, hate, beat)

3. Father, mother and _____
make up a family.
(children, trees, animals)

4.  This is a _____
(manyatta, hut, car)

5. At school children learn in a _____
(toilet, store, classroom)

6.  The weather is _____
(sunny, rainy, windy)

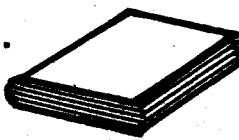
7. The brother to my father is my _____
(uncle, aunt, grandfather)

8. We sleep in the _____
(sitting room, kitchen, bedroom)

9. At home we sit on a _____
(table, chair, bucket)

10. A _____ is a wild animal.
(lion, cow, sheep)

11. The roof of a hut is made of _____
(tiles, grass, iron sheets)

12.  At school we write in
a _____
(book, ruler, pen)

13. Pupils go to school to _____
(learn, play, sleep)


14. Children wear school uniform
when going to _____
(market, farm, school)

15. Children should not play with
_____ (toys, balls, fire)

16. Many trees growing together
form a _____ (forest, hill, shamba)

17. Pupils should _____ class rules
(hate, obey, ignore)

Name the kitchen utensils



(Knife, Glass, Plate, Cup)

22. We should keep our classroom
_____ (untidy, clean, dirty)


23. Food is cooked in the _____
(toilet, kitchen, bathroom)

24. At school we sit on _____
(tables, desks, beds)

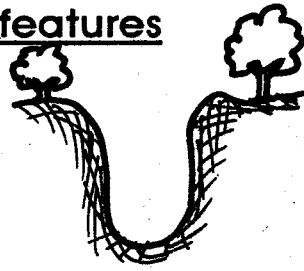
25. Mother and father are my _____
(children, parents, babies)

Name the physical features

26.



27.



 (Valley, River, Hill)

28. A _____ is a cloth girls wear.
(dress, pot, cup)

29. We get water from a _____
(river, valley, forest)

30. We carry umbrellas when the
weather is _____
(cloudy, rainy, windy)

C.R. E

31. God gave me _____ to see.
(eyes, nose, ears)

32. We were created by _____
(satan, angels, God)

33. Our first parents were Adam and
_____ (Mary, Eve, Elizabeth)

34. Adam and Eve lived in the
garden of _____
(Gethsemane, Olives, Eden)

35. Abraham had a son called _____
(Isaac, Jacob, Joseph)

36.  This is a _____
(church, Bible, cross)

37. _____ led the Israelites from
Egypt. (Moses, Caleb, David)

38. Cain killed his brother _____
(Esau, Abel, Seth)

39. We talk to God through _____
(sleeping, eating, prayer)

40. God gave me _____ to walk.
(legs, ears, nose)

41. Jesus was born in _____ (Nazareth,
Jerusalem, Bethlehem)

42. The wisemen gave baby Jesus
_____ (gifts, care, clothes)

43. The mother of Jesus was called
_____ (Elizabeth, Mary, Deborah)

44. Jesus chose _____ disciples.
(10, 12, 6)

45. God is happy when we _____
(fight, obey, hate)

46. We celebrate the birth of Jesus
during _____ (Pentecost,
Christmas, Sabbath)

Name these creations of God

47.




48.



49.



50.



 (Fish, Tree, Moon, , Bird)



HIGHRANK EXAM SERIES

[1]

004 ENGLISH

STANDARD ONE

YEAR 2016

NAME: _____

SCHOOL: _____

DATE: _____

Dictation

1. _____
2. _____
3. _____
4. _____
5. _____

Write in capital letters


6. sheep - _____
7. shirt - _____
8. head - _____
9. farmer - _____
10. potato - _____

Write names of the pictures


11.




12.



13.



14.



15.



(Short, Pot, Cup, Leaf, Jug)

Fill in the gaps using (a, e, i, o, u)

16. B _____ y

17. C _____ t

18. F _____ ther

19. P _____ n

20. B _____ s

Write in small letters

21. SPOON - _____
22. GOAT - _____
23. HEN - _____
24. CAR - _____
25. FIRE - _____

Add "s" to write plural

- | <u>One</u> | | <u>Many</u> |
|------------|---|-------------|
| 26. Tree | - | _____ |
| 27. House | - | _____ |
| 28. Bed | - | _____ |
| 29. Table | - | _____ |
| 30. Head | - | _____ |

Write numbers in words






31. 6 - _____
32. 10 - _____
33. 3 - _____
34. 9 - _____
35. 8 - _____

Use "a" or "an"

36. _____ apple
37. _____ egg

38. _____ cow
39. _____ bag
40. _____ umbrella

Draw these pictures

41. **House** 
42. **Book** 
43. **Bottle** 
44. **Glass** 
45. **Ruler** 

Complete the sentences

46. Blood is _____ in colour.
(white, red, yellow)
47. A _____ drives a bus.
(teacher, driver, pilot)
48. My name is _____
49. I am a _____ (girl, boy)
50. I am in class _____
(three, one, two)



HIGH RANK EXAM SERIES DARASA LA KWANZA MWAKA 2016

[1]
KISWAHILI

JINA _____ SHULE: _____ TAREHE: _____

Imla


1. _____
2. _____
3. _____
4. _____
5. _____

Andika kwa herufi kubwa


6. chupa - _____
7. sahani - _____
8. wingu - _____
9. hospitali - _____
10. kiatu - _____

Andika majina ya picha hizi:-

11.



12.




13.



14.



15.



(Chupa, Samaki, Nyoka, Gari, Mti)

Andika tarakimu kwa maneno

16. 7 _____
17. 10 _____
18. 6 _____
19. 5 _____
20. 2 _____



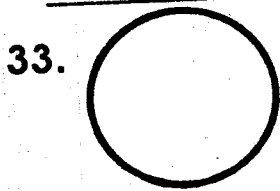
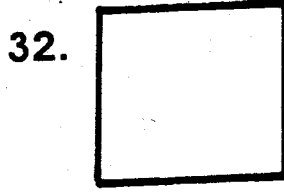
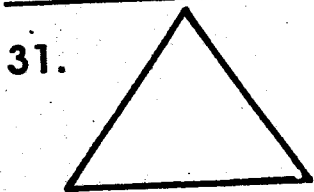
Unqanisha silabi uunde neno

21. ku + ku = _____
 22. ma + ji = _____
 23. pa + ka = _____
 24. ki + su = _____
 25. mo + to = _____

Andika "huyu" au "hawa"

26. Watoto _____ wanacheza.
 27. Mgeni _____ anakula.
 28. Wazazi _____ wanalima.
 29. Wanafunzi _____ wanakimbia
 30. Mwalimu _____ anaandika.

Andika majina ya maumbi haya



(Mstatili, Pembe tatu, Mraba, Duara, Duara dufu)

Linganisha maneno

36. Kaka Kiti
 37. Mama Saa
 38. Saa Mama
 39. Kuku Kaka
 40. Kiti Kuku

Andika kwa herufi ndogo

41. JICHO - _____
 42. KISIGINO - _____
 43. ULIMI - _____
 44. MAUA - _____
 45. SHAMBA - _____

Kamilisha sentensi hizi

46. Rangi ya maziwa ni _____
 (nyeupe, nyeusi, nyekundu)
 47. Anayetufundisha shuleni ni _____
 (mkulima, daktari, mwalimu)
 48. Mimi ni _____
 (mvulana, msichana)
 49. Jina langu ni _____
 50. Niko katika darasa la _____
 (tatu, pili, kwanza)



HIGHRANK EXAM SERIES

[1]

004 SCIENCE

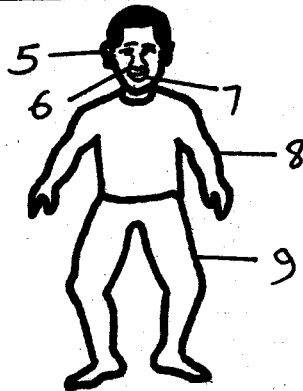
STANDARD ONE

YEAR 2016

NAME: _____ SCHOOL: _____ DATE: _____

- We take a bath to be _____
(dirty, untidy, clean)
- Dirty hair keeps _____
(jiggers, lice, houseflies)
- Fingernails must be kept _____
(long, short, dirty)
- A _____ is a big animal.
(cow, tick, butterfly)

Name parts of the body




- _____
- _____
- _____
- _____

(mouth, leg, nose, arm, ear)

- We eat the _____ of cabbage.
(leaves, stem, roots)
- I have _____ eyes.
(two, six, four)

- Most leaves are _____ in colour.
(yellow, white, green)

-  This is a bird's _____
(leg, beak, feather)

- We should eat _____ food.
(clean, dirty, rotten)

- A cow has two _____
(tails, legs, horns)



- A bird flies using its _____
(wings, horns, legs)

-  A snake has _____ legs. (0, 4, 10)

- We wash our hands _____ visiting the toilet. (before, when, after)

- Sugar tastes _____
(sweet, bitter, sour)

Name the weather symbols



- _____
- _____

(Calm, Rainy, Sunny, Windy)

24. Dirty hands make us _____
(strong, healthy, sick)

25. We eat the _____ of
sugarcane.
(stem, leaves, roots)

26. Every home must have a _____
(toilet, car, radio)


27. I should eat _____ food.
(clean, dirty, bad)

28. I brush my teeth using _____
and toothpaste.
(comb, toothbrush, grass)

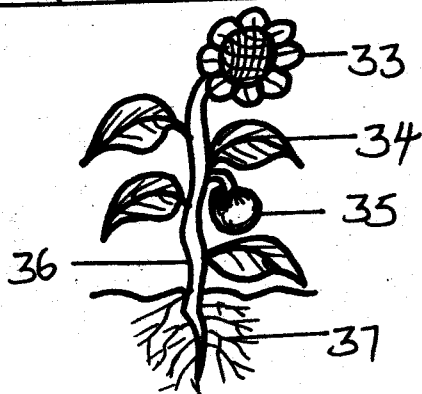
29. A rotten egg smells _____
(good, bad, nice)

30. I have _____ fingers.
(10, 5, 2)

31. My hair is _____ in colour.
(black, white, brown)

32.  Fish lives in _____
(soil, water, grass)

Name parts of the plant



33. _____

34. _____

35. _____

36. _____

37. _____
(Stem, Flower, Roots, Leaf, Fruit)

38. My teeth are in my _____
(nose, mouth, ears)

39. I walk using my _____
(legs, hands, head)

40. Dirty feet is a home of _____
(lice, jiggers, butterflies)

41. We should drink _____ water
(clean, dirty, bad)

42. We use an umbrella when it is _____
(cloudy, rainy, windy)

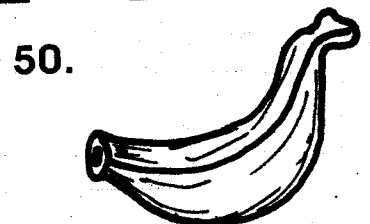


43. We eat the _____ of maize.
(seeds, leaves, stem)

44. A _____ has a long neck.
(leopard, giraffe, cat)

45. A mango fruit has _____ seed.
(one, many, two)

46. I bathe using soap and _____
(soil, water, grass)

Name the foods we eat



(Banana, Pineapple, Apple, Carrot)



HIGHRANK EXAM SERIES

STANDARD ONE

[1]

YEAR 2016

004 READING & KUSOMA

NAME: _____

SCHOOL: _____

DATE: _____

READING

Read these words

- | | | | |
|---------|----------|------------|----------|
| 1. Boy | 6. Home | 11. Look | 16. Pot |
| 2. Tree | 7. Rope | 12. Arm | 17. Stop |
| 3. Cup | 8. House | 13. Yellow | 18. Jug |
| 4. Book | 9. Car | 14. Head | 19. Cat |
| 5. Hen | 10. Neck | 15. Wall | 20. Dog |

Read these sentences

21. This is a big hat.
22. That is my ball.
23. She is a good girl.
24. He can run very fast.
25. We are going out.

KUSOMA

Soma majina haya

- | | | | |
|----------|-----------|------------|-----------|
| 1. Uji | 6. Maji | 11. Kichwa | 16. Jenga |
| 2. Kuku | 7. Saa | 12. Miguu | 17. Osha |
| 3. Paka | 8. Jua | 13. Jicho | 18. Mkono |
| 4. Usiku | 9. Weka | 14. Wimbo | 19. Shati |
| 5. Wema | 10. Kiatu | 15. Pua | 20. Embe |

Soma sentensi hizi

21. Sisi ni watoto wadogo.
22. Mama anapika chakula kitamu.
23. Kikapu kile ni cha babu.
24. Baba amebeba kijiko.
25. Kuna matunda mengi sokoni.