

NAIROBI INTERPRIVATE SCHOOLS EXAM

STANDARD THREE - YEAR 2016

MATHEMATICS



NAMES: _____ SCHOOL: _____ DATE: _____

Write in words

1. $39 =$ _____

2. $709 =$ _____

Subtract

3.
$$\begin{array}{r} 680 \\ - 29 \\ \hline \end{array}$$

Add

4.
$$\begin{array}{r} 318 \\ + 23 \\ \hline \end{array}$$

5. $3 + 5 + 7 =$ _____

6.
$$\begin{array}{r} 493 \\ - 193 \\ \hline \end{array}$$

7. Take away 42 from 90. _____

8. $9 \times 9 =$ _____

9. 50 sweets were shared among 5 people. How many did each get _____

10. $90 \div 3 =$ _____

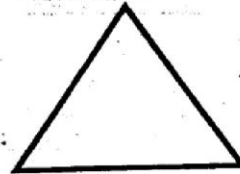
11. How many weeks are there in 14 days? _____

12. Weeks	Days
$\begin{array}{r} 3 \\ - 1 \\ \hline \end{array}$	$\begin{array}{r} 6 \\ 2 \\ \hline \end{array}$


13.
$$\begin{array}{r} 193 \\ + 24 \\ \hline \end{array}$$

Name these shapes

14.



15.




16.

shs.	cts.
$\begin{array}{r} 30 \\ + 2 \\ \hline \end{array}$	$\begin{array}{r} 50 \\ 30 \\ \hline \end{array}$

17.

What is the time? _____



18.

What is the next number in the pattern? 5, 9, 13, 17, _____

19.

$$\begin{array}{r} 49 \\ - 18 \\ \hline \end{array}$$

20.

$999 - 455 =$ _____

21.

$93 =$ _____ tens _____ ones

22.

$440 =$ _____ hundreds _____ tens _____ ones

23.

$28 \div 7 =$ _____

24. 240 litres
 $- 120 \text{ litres}$

25. Juma had 20 sweets. He gave Mary 4 sweets and Moses 6 sweets. How many sweets did he remain with? _____


26. There are _____ days in the month of February every leap year.

27. $888 - 333 =$ _____

28. $37 + 75 + 60 =$ _____

29.
$$\begin{array}{r} 5 \\ \times 8 \\ \hline \end{array}$$

30. _____ $\times 10 = 70$



_____ \times _____ $=$ _____

32. Arrange from the smallest to the biggest.
 235, 177, 115, 89, 310

33. A farmer had 128 goats. He sold 99 of them. How many goats remained? _____

34. Work out.

sh.	cts.
34	50
<u>- 23</u>	<u>25</u>
_____	_____

35. Which holds less milk? _____



36. How many days are there in 7 weeks? _____

37. A 500 shillings note is = _____ 100 shilling notes.

38. _____ = 8 hundreds 7 tens 0 ones

39. $35 \div$ _____ $= 7$

40. If one donkey has four legs, how many legs do five donkeys have? _____

41. $8 \times$ _____ $= 40$

42. How many days are there in the months of January, September and December? _____

43. $6 \times 0 =$ _____

44. $16 \div$ _____ $= 4$

45.
$$\begin{array}{r} 76 \\ + 8 \\ \hline \end{array}$$

46. $349 + 218 =$ _____

47.
$$\begin{array}{r} 642 \\ - 213 \\ \hline \end{array}$$

48. $6 \times 3 =$ _____

49. $64 =$ _____ $\times 8$

50. I bought a ruler for Sh. 25 and gave the shopkeeper a Sh.100 note. How much change did I get? _____

NAIROBI INTERPRIVATE SCHOOLS EXAM
STANDARD THREE - YEAR 2016
READING & KUSOMA



NAME: _____

SCHOOL: _____

DATE: _____

READING

Read these words

- | | | | |
|-------------|--------------|--------------|---------------|
| 1. Feathers | 6. Apples | 11. Between | 16. Walking |
| 2. heavy | 7. Fast | 12. Kennel | 17. Elephant |
| 3. Dust | 8. Digging | 13. November | 18. Umbrella |
| 4. Ship | 9. Garden | 14. Everyday | 19. Behind |
| 5. Watch | 10. Birthday | 15. Capital | 20. Yesterday |

Read these sentences

21. There are six flowers on the table.
22. I bought two open boxes yesterday.
23. There will be a holiday on Thursday.
24. Have you seen an antelope in the forest?
25. The oxen is red in colour.

KUSOMA

Soma majina haya

- | | | | |
|-----------|------------|---------------|-----------------|
| 1. Kinga | 6. Fagio | 11. Majembe | 16. Bakuli |
| 2. Mito | 7. Umeme | 12. Mchana | 17. Adhabu |
| 3. Uso | 8. Mweusi | 13. Atamshika | 18. Penseli |
| 4. Chungu | 9. Kabati | 14. Mahakama | 19. Sanduku |
| 5. Nyanya | 10. Tafuta | 15. Vikapu | 20. Televisheni |

Soma sentensi hizi

21. Nyanya alipika uji jana usiku.
22. Je, utawafuata kukwea mlima?
23. Nina shilingi mia nne hamsini na tano.
24. Vitabu vyote vimo ndani ya kabati lake.
25. Kuna mbwa mkali karibu na nyumba yetu.

NAIROBI INTERPRIVATE SCHOOLS EXAM

STANDARD THREE - YEAR 2016

ENGLISH



NAME: _____ SCHOOL: _____ DATE: _____

Dictation

1. _____
2. _____
3. _____
4. _____
5. _____

Use "a" or "an"

6. _____ elephant is a big animal.
7. She bought _____ umbrella.
8. Peter is _____ good boy.
9. My father bought _____ ox.

Complete the sentences

10. A person who cuts people hair is called _____
11. A young one of a goat is called _____
12. A house of a dog is called _____
13. A person who look after our teeth _____
14. We post letters in a _____
(kennel, postoffice, dentist, barber, kid)

Name these pictures



umbrella, ladder, giraffe, feet)

Find the ends of these words

19. Coco _____
20. Head _____
21. Play _____
22. Tooth _____

(paste, ground, teacher, nut)

Write the plural of these words

One Many

23. Goose _____
24. Mouse _____

Write "am" "is" or "are"

25. The teacher _____ sick.
26. These _____ good children.
27. I _____ years old.

Fill in the missing letters

28. C _ _ m _ _ r _ _
29. L _ _ d _ _ er
30. P _ _ ss _ _ ng _ _ r
31. G _ _ ou _ _ d
32. Ph _ _ t _ _ gr _ _ p _ _

Write well

33. cilpen _____
34. ertsdu _____
35. lettbo _____

Write the past tense

36. laugh _____
37. change _____
38. allow _____

Fill the gaps

39. Please _____ me to lift the box.
40. I cannot _____ where I kept my pencil.

41. My father and mother are my _____
42. We use a _____ to light fire.
(parents, matchbox, help, remember)

Write the opposites

43. Daughter - _____
44. Far - _____
45. Bitter - _____

Use "was" or "were" in these sentences:-

46. We _____ coming to your party yesterday.
47. She _____ not in the class in the afternoon.

Complete the following

48. tall, _____, tallest
49. small, smaller, _____
50. long, _____, longest

NAIROBI INTERPRIVATE SCHOOLS EXAM
DARASA LA TATU - MWAKA 2016
KISWAHILI



JINA _____ SHULE: _____ TAREHE: _____

Imla

1. _____
2. _____
3. _____
4. _____
5. _____

Andika wingi wa sentensi hizi:-

6. Kitabu kimepotea.

7. Mwanafunzi huyu ni mwerevu.

8. Kuku ametaga.

9. Baba analima

10. Kitabu chake ni kichafu

Jaza pengo

11. S _____ aki
12. Ki _____ bu
13. M _____ iwa

14. H _____ b _____ r _____
15. D _____ r _____ sh _____

Andika kinyume

16. Mrefu - _____
17. Cheka - _____
18. Chini - _____
19. Simama - _____
20. Joto - _____

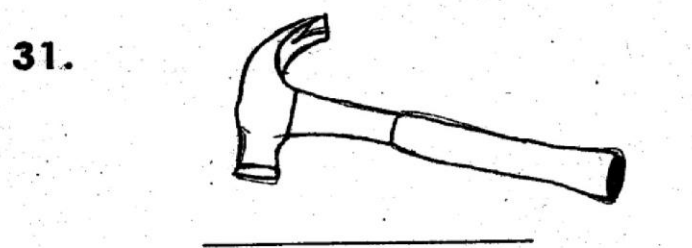
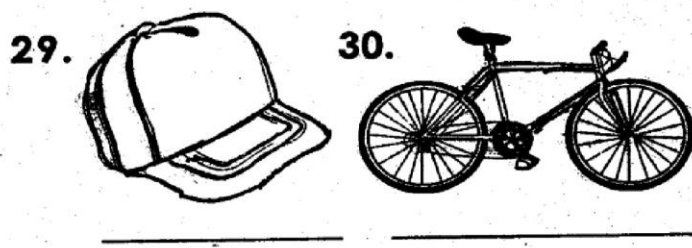
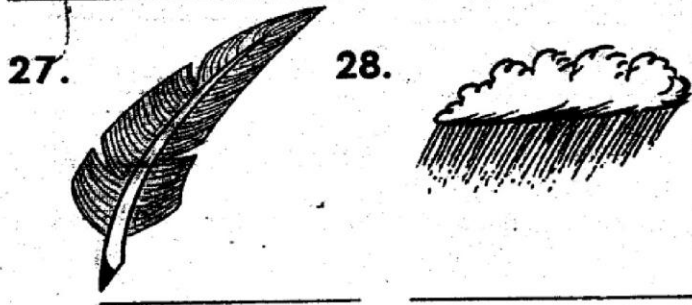
Jaza pengo

21. Mimi ni _____
(mvulana, msichana)
22. Mimi huandika kwa _____
(kalamu, kitabu)
23. Baba na mama ni _____
wangu. (wazazi, rafiki)

Tunga maneno ukitumia mianzo hii

24. S. _____
25. nd _____
26. ch _____

Andika majina ya picha hizi:-



(baiskeli, mvua, nyundo, kofia, unyoya)

Kanusha:-

32. Babu ni mzee sana.

33. Nyumba haijateketea.

34. Dada anafua nguo.

35. Chakula hiki ni kitamu.

36. Gari limeanguka mtaroni.

Kamilisha methali hizi:-

37. Mtaka yote _____
38. Maji yakimwagika _____

39. Haba na haba _____
40. Kidole kimoja _____
41. Fadhila za punda _____

(ni mateke, hujaza kibaba, hayazoleki, hukosa yote, hakifunji chawa)

Andika kwa maneno:-

42. 745 = _____
43. 808 = _____

Andika kwa tarakimu:-

44. Mia tano na kumi na tano

45. Mia nane na tisini na sita

Je, utamwitaje?

46. Mtoto wa ng'ombe ni ndama naye wa ndege ni _____
(kiota, kindu, ndege)
47. Mzazi wa kike wa baba _____
(bibi, amu, halafi)
48. Kakake baba yako _____
(babu, baba, ami)
49. Jina jingine la ndovu ni _____
(ng'ombe, mkonga, tembo)
50. Fundi anayetengeza meza, kabati na viti _____
(mwashu, seremala, mhunzi)



NAIROBI INTERPRIVATE SCHOOLS EXAM

STANDARD THREE - YEAR 2016

SCIENCE







NAME: _____ SCHOOL: _____ DATE: _____

1. A sunny day has _____
(rain, sunshine, muddy)
2.  This is the house of a spider. It is called _____
(nest, hive, web)
3. Food helps us to grow _____
(weak, healthy, sick)
4. Broken bottles and tins should be _____
(buried, burnt, recycled)
5. An insect is a _____ animal.
(small, big, higher)
6. We boil water to kill _____
(germs, food, thirst)
7. _____ soil is used for modelling.
(loam, clay, soil)
8. Wind is moving _____
(water, air, soup)
9.  The weather is _____
(calm, sunny, windy)
10. _____ water is safe for drinking. (Dirty, Filtered, Boiled)
11. Farmers plant their crops during _____ season.
(rainy, hot, dry)
12. All fruits should be _____ before eating.
(eaten, boiled, washed)
13. Which of the following is not a personal item? _____
(toothbrush, shoes, latrine)

14. We use our _____ to taste.
(eyes, ears, tongue)
15. _____ is not a requirement for good health.
(Sleep, Rest, Dirt)
16. _____ makes a place look beautiful.
(Flowers, a fence, Trees)
17. A _____ forms when something blocks the light.
(picture, image, shadow)
18. We eat raw _____
(meat, carrots, cabbage)
19. _____ is not a good use of moving air. (winnowing, windmill, blowing roofs off)
20. When you put water in a can with soil, bubbles come out show that soil has _____
(water, air, heat)
21. Which one of these is not a harmful animal? _____
(termite, tick, fish)
22. _____ is not a source of water. (Tap, Rain, Well)

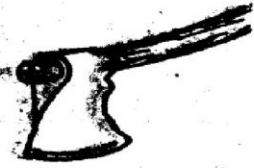
23.

	Monday	Tuesday
Morning		
Afternoon		

The weather was _____ Tuesday afternoon
(cloudy, sunny, windy)

24. We wear heavy jackets on a _____ day. (hot, cold, dry)

25.

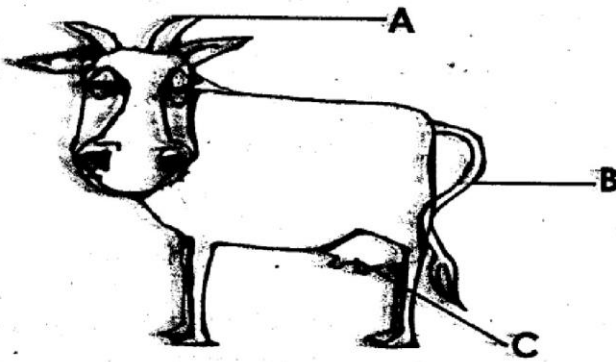


This is a _____ (jembe, panga, axe)

26. We fill balloons with _____ (water, soil, air)

27. When clothes are hanged outside on a windy day, they dry _____ (slowly, quickly, none)

Use this diagram to answer questions 28-30:-



28. Part A is the _____ (ear, leg, horn)

29. Part B is the _____ (udder, tail, mouth)

30. Part C is the _____ (horn, tail, udder)

31. Soil with the largest particles feels _____ when touched. (smooth, rough, soft)

32. We can make rollers using _____ (maize cobs, square sticks, rectangular wood)

33. Filtering water removes _____ (germs, dirt, colours)

34. Cows, goats and sheep are _____ animals. (wild, domestic, home)

35. Talking with food in the mouth may cause _____ (coughing, sneezing, chocking)

36. A house of a bird is called _____ (nest, wed, hole)

37. _____ makes our teeth strong. (sugar, Milk, Ice cream)

38. A person who cannot hear is called _____ (blind, deaf, dumb)

39. A _____ is a harmful animal to man. (rat, bee, hen)

40. Washing the kitchen removes _____ (sugar, dust, hair)

41. The body needs rest after _____ (hardwork, sleep, food)

42. People who cannot hear or talk say things using _____ (gestures, kicks, sounds)

43. Coughing and sneezing spreads _____ (saliva, germs, mucus)

44. Blood is _____ in colour. (red, black, white)

45.



We eat the _____ of this plant. (leaves, roots, seeds)

46. Which of the following animals has no legs _____ (termite, butterfly, snail)

47. Food must be _____ well before swallowing. (bitten, chewed, eaten)

48. Sickness is caused by _____ (food, germs, animals)

49.



This face of shows that the person is _____ (happy, angry, excited)

50. Young plants are called _____ (crops, seeds, seedlings)

NAIROBI INTERPRIVATE SCHOOLS EXAM

STANDARD THREE - YEAR 2016


SOCIAL STUDIES & C.R.E



NAME: _____

SCHOOL: _____

DATE: _____


1. Many Locations makeup a _____
(District, Division, Village)
2. The head of the family is the _____
(father, mother, children)
3.  The weather is _____
(windy, calm, rainy)
4. We should _____ the wildlife
around us. (protect, kill, poach)
5. The police provides _____
(food, shelter, security)

Name the parts of compass



6. A _____
7. B _____
8. C _____
9. D _____
10. Rivers which have water only when
it rains are called _____ rivers.
(permanent, seasonal, streams)
11. People who abuse the children
should be _____ (praised,
reported to police, killed)
12. We should cycle our bicycles on
the _____ side of the road.
(left, right, any)


13. Children without both parents are
called _____ (orphans,
street children, window)

14.  This diagram is found
on our roads. It is a
_____ crossing.
(level, bridge, zebra
crossing)

15. People with special needs are also
called people with _____
(difficulties, disabilities, sick)

Name these water sources

16.



17.



(river, lake, rain, sun, road)

18. Fishermen are found along the
_____ (mountains, shops, lakes)
19. A _____ is a man made
physical feature.
(dam, lake, mountain)
20. Coffee and tea are _____
crops. (food, cash, oil)
21. During marriage ceremony
people are _____
(happy, sad, unhappy)

22. The three important basic needs do not include _____
(food, shelter, school)

23. Wild animals are kept in _____ parks.
(game, home, market)

24. Planting of trees is called _____
(deforestation, afforestation, farming)

25. The National Anthem is a prayer of our _____
(school, country, home)

26. A group of people living together is called _____
(people, relatives, community)

27. Places where people buy and eat food are called _____
(shops, markets, hotels)

28. Which one is not made in factories _____
(sugar, nails, potatoes)

29. We add _____ to make the soil fertile. (water, salt, manure)

30. People who live in areas with high rainfall _____
(stay on top of hills, go fishing, grow crops)

C. R.E

31. The head of a church is the _____
(pastor, prefect, teacher)

32. A _____ is a person who follows Jesus Christ.
(disciple, teacher, preacher)

33. Solomon asked for _____
(food, wisdom, family)

34. Jesus died on the _____
(cross, bed, road)

35. Giving _____ is a way of worshipping God.

(stories, offerings, stones)
36. Forgetting bad things done to us by others is _____
(unforgiveness, forgiveness, sins)

37. Jesus turned water into wine at a wedding in _____
(Jerusalem, Jericho, Cana)

38. _____ climbed a tree to see Jesus:
(Peter, Zacchaeus, John)

39. Who tempted Jesus 3 times?
_____ (God, satan, devil)

40. Who betrayed Jesus _____
(Peter, John, Judas)

41. _____ were the first people to see Baby Jesus.
(shepherds, women, followers)

42. Jesus was crucified at _____
(Bethlehem, Golgotha, Egypt)

43. _____ is the first book in the Bible.
(Genesis, Luke, John)

44. _____ wanted to kill baby Jesus.
(Shepherds, Herod, Wisemen)

45. Jesus was born in _____
(Nazareth, Bethlehem, Judea)

46. Jesus was crucified with _____ thieves. (2, 3, 5)

47. We should always _____ others. (Cheat, help, beat)

48. David killed _____
(Jethro, Goliath, John)

49. The shepherds found baby Jesus lying in a _____
(bed, manger, room)

50. All christians pray in a _____
(mosque, church, shrine)