

**GATUNDU SUB – COUNTY EXAMINATION  
STANDARD FOUR – TERM I 2016**

**ENGLISH**

Time: 1 hour 40 minutes

Choose the correct word to fill in the blank spaces 1-15

The 1 was a clever animal. 2 were 3 with fox. They 4 not working. At 5 hare was 6 carrots from the farm of elephant. One day, the elephant put a trap to 7 the 8 but the hare did not 9. He came 10 night and he 11 caught. The fox 12 away and did not help the hare. The hare was 13 by the elephant the following morning. From that day, fox 14 hare 15 not friends again.

- |    | <b>A</b> | <b>B</b> | <b>C</b> | <b>D</b> |
|----|----------|----------|----------|----------|
| 1. | Hair     | hare     | heir     | here     |
| 2. | They     | there    | their    | it       |
| 3. | Frinds   | frends   | friends  | freinds  |
| 4. | Was      | arc      | were     | wore     |
| 5. | Morning  | nite     | night    | day      |
| 6. | Stilling | stealing | stolen   | steeling |
| 7. | Cot      | Catched  | catches  | catch    |

PRINTED BY HIGHFLYER SERIES Tel: 0723 499860

**Funded By: C.D.F. Gatundu South Constituency,  
Patron Hon. Moses Kuria, Mp Gatundu South.**

8.	Theaf	thief	their	thife
9.	Knew	known	no	know
10.	With	for	at	in
11.	Is	are	were	was
12.	Ren	runned	ran	run
13.	Beten	beating	beaten	bitten
14.	With	and	or	an
15.	Was	were	ware	wore

**Choose the past tense of the following**

16. Cry  
 A. Cryed  
 C. Cries  
 B. Cried  
 D. Cry
17. Drink  
 A. Drank  
 C. Drinks  
 B. drunk  
 D. drinked
18. Eat  
 A. Eated  
 C. Eating  
 B. eats  
 D. ate

**What sound is made by**

19. Dog  
 A. Cry  
 B. neigh  
 C. Bark  
 D. hiss
20. Pig  
 A. Mews  
 C. Quacks  
 B. grunts  
 D. brays

**Choose the odd one out**

21. A. Soda  
 C. Carrot  
 B. Juice  
 D. Milk
22. A. Egg  
 C. Orange  
 B. Mango  
 D. Banana

23. A. Oval  
 C. Circle  
 B. House  
 D. Star

**Choose the opposite of the given word.**

24. Early  
 A. Late  
 C. First  
 B. earlier  
 D. earliest
25. Present  
 A. Away  
 C. Upsent  
 B. absent  
 D. never

**Write the plurals of the underlined words**

26. Mr. Mambo has three ox  
 A. Oxes  
 C. Oxeses  
 B. Oxen  
 D. Oxies
27. The thief stole the shoes.  
 A. Thiefs  
 B. thieves  
 C. Theves  
 D. thiefes
28. The sheep are grazing  
 A. Sheeps  
 B. Ships  
 C. Sheep  
 D. Sheepes

29. My tooth is paining

- A. Tooths
- B. teeth
- C. Teeths
- D. toothes

30. The mango tastes sweet

- A. Mangos
- B. mangoes
- C. Mangoes
- D. Mangose

***Read carefully and answer the questions that follow 31-40***

Once upon a time, there lived an old man with his wife Waceke. He lived with his four sons in a Village He had a garden but the family was poor. The four sons were lazy to cultivate but were always busy fighting. So, the old man was unhappy.

One day he called his sons and asked them to sit down. He told them that he had hidden a lot of money in his land. He asked them to go back and dig in the farm to get the money. So the boys did as they were told. After digging, they did not get the money. Instead, they planted and harvested. They sold the harvest and got a lot of money. They were never lazy again.

31. The old man lived with his

- A. Wife alone
- B. Wife and sons
- C. Wife and daughters
- D. Children only

32. The old man was called

- A. Waceke
- B. Njoroge
- C. We are not told
- D. Joshua

33. Tha family had \_\_\_\_\_ members

- A. Six
- B. Five
- C. Three
- D. Four

34. The man was always \_\_\_\_\_ with his sons.

- A. Unhappy
- B. Happy
- C. Good
- D. Fair

35. Where did the old man say he had hidden his money? In the \_\_\_\_\_

- A. Bank
- B. House
- C. Shamba
- D. Roof

36. What did his sons always do?

- A. Fight
- B. Work
- C. Sleep
- D. Dig

37. The old man's sons got money after \_\_\_\_\_

- A. Looking for money
- B. Fighting
- C. Digging
- D. Selling the crops

38. Why did the boys dig the shamba?

- A. To plant crops
- B. To search for the money
- C. To please the father
- D. Not old

39. Do you think the man had hidden the money?  
 A. Yes  
 B. No  
 C. Not sure  
 D. Some

40. What did the old man want the sons to do?  
 A. To plant crops  
 B. To search for money  
 C. To fight  
 D. To marry

**Read the passage below and answer questions 41-50**

The name of my dog is Tumbo. He is six years old. He is black and brown in colour. He is tall and runs very fast. Every day after school, I do my homework. Then I go out to play with him. He is very brave and sends thieves away. He also barks at strangers. During the day, I keep him in the kennel. At night, I set him loose to guard our home. Tumbo eats bones and meat. He is friendly to our cat. I love Tumbo very much. He is my dear pet.

41. The colour of my dog is \_\_\_\_\_

- A. Black and white  
 B. Black and brown  
 C. White  
 D. Brown only

42. My dog barks at \_\_\_\_\_

- A. Me  
 B. Strangers  
 C. Relatives  
 D. Neighbours

43. The young one of a dog is a \_\_\_\_\_

- A. Kitten  
 B. Puppy  
 C. Calf  
 D. Piglet

44. My dog is \_\_\_\_\_ and runs very fast.

- A. Tall  
 B. Fat  
 C. Short  
 D. Slim

45. After doing my \_\_\_\_\_, I play with my dog.

- A. Classwork  
 B. Housework  
 C. Homework  
 D. Fieldwork

46. Dogs love eating \_\_\_\_\_

- A. Bones  
 B. Fruits  
 C. Vegetables  
 D. Birds

47. A dog barks but a pig \_\_\_\_\_

- A. Mews  
 B. Grunts  
 C. Moos  
 D. Neighs

48. The dog stays in the kennel at \_\_\_\_\_

- A. Day  
 B. Noon  
 C. Night  
 D. Evening

49. Tumbo is my \_\_\_\_\_ pet

- A. Only  
 B. Dear  
 C. Quiet  
 D. Best

50. Which other animal can be kept as a pet?

- A. Donkey  
 B. Fish  
 C. Cat  
 D. Cow

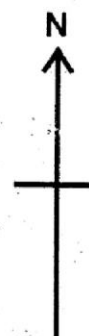
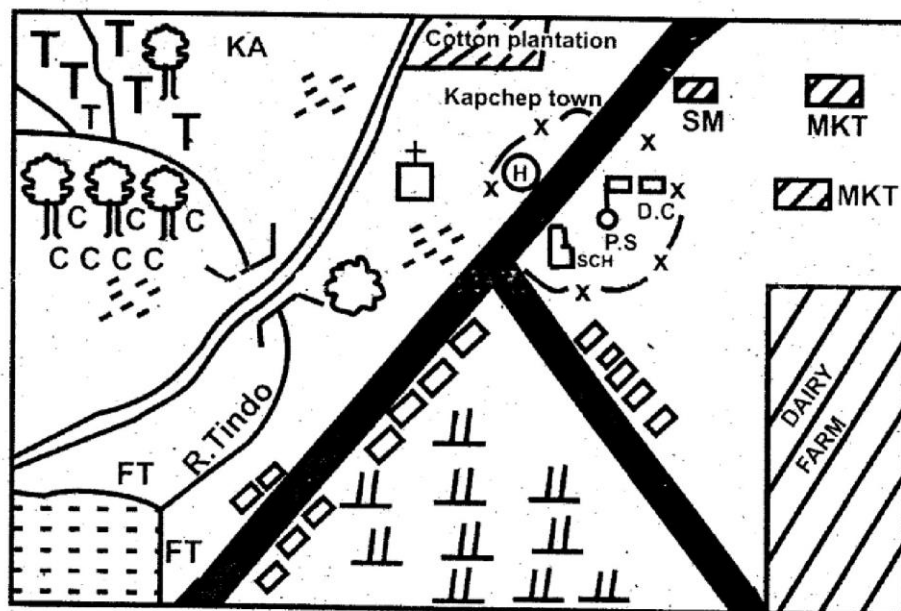
# GATUNDU SUB – COUNTY EXAMINATION

## STANDARD FOUR – TERM I 2016

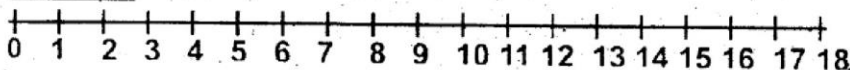
### SOCIAL STUDIES & C.R.E

Time: 2 hours 15 minutes

#### KAPCHEROP AREA



#### SCALE



#### KEY

- |                |               |          |
|----------------|---------------|----------|
| Forest         | Town boundary | Hospital |
| Coffee         | School        | Church   |
| Tea            | Market        | Saw Mill |
| Settlement     | Tarmac road   | Hills    |
| Fish Trap      | Murram road   | River    |
| Police Station | Quarry        | Lake     |
| Scrub          |               |          |

PRINTED BY HIGHFLYER SERIES Tel: 0723 499860

Funded By: C.D.F. Gatundu South Constituency,  
Patron Hon. Moses Kuria, Mp Gatundu South.

**Use the map of Cheza area to answer question 1 - 7.**

1. The main form of transport in Kapcherop area is \_\_\_\_\_  
A. road  
B. railway  
C. air  
D. water
2. The type of animal kept in the area are \_\_\_\_\_  
A. cows  
E. pigs  
C. donkeys  
D. carmel
3. What is the direction of the quarry from the lake?  
A. South West  
B. North East  
C. South  
D. North
4. The people of Kapcherop Area are \_\_\_\_\_  
A. Christians  
B. Muslims  
C. Pagans  
D. Traditionalists
5. Which one of the following is not a **cash** crop grown in Kapcherop area?  
A. Tea                      B. Coffee  
C. Cotton                  D. Sugarcane
6. The climate of the Southern part of the map is likely to be \_\_\_\_\_  
A. cool and wet  
B. hot and dry  
C. hot and wet  
D. cool and day
7. Law breakers in the area are taken to the \_\_\_\_\_  
A. police station  
B. market  
C. saw mill  
D. fish trap
8. Which one is **not** a cardinal point?  
A. South                      B. North East  
C. West                        D. East
9. I stand facing South. My back is pointing \_\_\_\_\_  
A. West                        B. East  
C. North                       D. South
10. Which of these is a basic need?  
A. phone                      B. clothes  
C. radio                        D. car
11. A district is made up of many \_\_\_\_\_  
A. villages  
B. divisions  
C. locations  
D. sub - locations
12. Which one is a sad ceremony?  
A. birthday  
B. wedding  
C. initiation  
D. funeral
13. The crops that are grown for sale are known as \_\_\_\_\_ crops.  
A. cash  
B. money  
C. food  
D. grains
14. We make baskets and mats from \_\_\_\_\_  
A. wood                        B. glass  
C. paper                        D. sisal



64. Which miracle did Jesus perform in Cana of Galilee?

- A. Raising Lazarus
- B. Turning water into wine
- C. Healing the sick
- D. Feeding people.

65. What should we do to orphans?

- A. Love them
- B. Mistreat them
- C. Hate them
- D. Beat them

66. The name Emmanuel means

- A. God with us
- B. Saviour
- C. laughter
- D. drawn from water

67. The young boy called Samuel was working under Priest

- A. Elikanah
- B. Saul
- C. Eli
- D. Jethro

68. Jesus was born in \_\_\_\_\_

- A. Nazareth
- B. Jerusalem
- C. Canaan
- D. Bethlehem

69. The twelve followers of Jesus were called \_\_\_\_\_

- A. disciples
- B. teachers
- C. learners
- D. workers

70. A good leader should do the following except \_\_\_\_\_

- A. Help the poor
- B. Tell the truth
- C. Does not steal
- D. Hates others

71. Jesus washed the disciples

- A. hands
- B. feet
- C. heads
- D. face

72. Lazarus had two sisters. These were Mary and \_\_\_\_\_

- A. Sarah
- B. Hannah
- C. Martha
- D. Tabitha

73. Which one shows that God cares for His creation?

- A. Giving enough rain.
- B. Not healing the sick.
- C. Causing drought.
- D. Causing floods.

74. Which is the last book in the Old Testament?

- A. Genesis
- B. Revelation
- C. Malachi
- D. Matthew

75. We worship God through the following except \_\_\_\_\_

- A. Praying
- B. Singing
- C. Reading the Bible
- D. Gossiping

76. \_\_\_\_\_ said, "Let the children come to me."

- A. Abraham
- B. Moses
- C. Jesus
- D. Joshua

77. The wisest King in Israel was \_\_\_\_\_

- A. Saul
- B. Solomon
- C. David
- D. Ahab

78. The Holy spirit came upon the disciples on the day of \_\_\_\_\_

- A. Pentecost
- B. Christmas
- C. Advent
- D. Passover

79. Who was asked by God to sacrifice his only son?  
A. Moses                      B. Elikanah  
C. Zachariah                D. Abraham

80. Who among these was not among the disciples of Jesus?  
A. Thomas  
B. John the Baptist  
C. James  
D. Andrew

81. Jesus is a good \_\_\_\_\_  
A. shepherd  
B. sailor  
C. pilot  
D. carpenter

82. The mother of John the Baptist was called \_\_\_\_\_  
A. Elizabeth                B. Peninah  
C. Lydia                      D. Sarah

83. Moses received the ten commandments on Mt. \_\_\_\_\_  
A. Elgon                      B. canaan  
C. Sinai                      D. Olives

84. How many thieves were crucified with Jesus?  
A. Three                      B. Two  
C. four                        D. One

85. The brother of Moses was called \_\_\_\_\_  
A. Aaron                      B. Joseph  
C. Jacob                      D. Joshua

86. The birth of Jesus was announced by \_\_\_\_\_  
A. Angel Gabriel  
B. Prophet Isaiah  
C. Angel Michael  
D. Prophet Jeremiah

87. You see your friend stealing from the teacher's desk. What step would you take?  
A. Shout for help.  
B. Report to the head teacher.  
C. Tell him to return what he has stolen.  
D. Share what he has stolen.

88. The Agikuyu name for God is \_\_\_\_\_  
A. Enkai  
B. Enkoro  
C. Asis  
D. Ngai

89. Long ago, people worshipped God in \_\_\_\_\_.  
A. churches  
B. mosques  
C. shrines  
D. temple

90. "I will make you \_\_\_\_\_ of men."  
A. fishers  
B. teachers  
C. farmers  
D. thieves





13. 8 thousands 3 hundreds 0 tens  
9 ones = \_\_\_\_\_  
A. 8039                      B. 8309  
C. 8903                      D. 3809

14. Komen ran for  $\frac{1}{2}$  an hour and  
walked for  $\frac{1}{2}$  an hour. How  
long did he take altogether?  
A.  $\frac{1}{2}$  h                      B.  $\frac{3}{4}$  h  
C.  $\frac{1}{4}$  h                      D. 1 hour

15.  $74 \div \square = 8$   
A. 56                      B. 72  
C. 8                      D. 6

16. A bottle of soda cost sh.35.  
How much will 5 sodas cost?  
A. sh.175                      B. sh.7  
C. sh.40                      D. sh.150

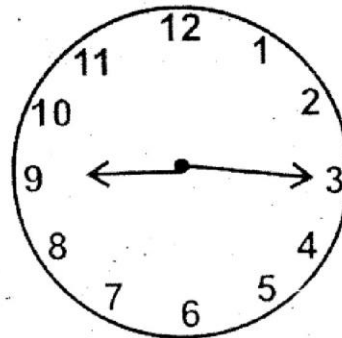
17. Sh    ct  
  213 65  
- 88 40  
-----

- A. sh.135 25ct  
B. sh.225 25ct  
C. sh.125 15ct  
D. sh.125 25ct

18. Kwame paid sh.18 75ct for 3  
cakes. How much did each  
cake cost?  
A. sh.6 15ct  
B. sh6 25ct  
C. sh.5 55ct  
D. sh7 25ct

19. 4  $\overline{\text{sh.36 40ct}}$   
A. sh.8 10ct  
B. sh.12 10ct  
C. sh.9 10ct  
D. sh.9 40ct

20. What time is it?



- A. Quarter past 9 o'clock  
B. Quarter past 3 o'clock  
C. Quarter to 9 o'clock  
D. Quarter to 3 o'clock

21. Write in words 863.  
A. Eight thousand and sixty  
three  
B. Eight hundred and thirty six  
C. Eight hundred and sixty  
three.  
D. Eight thousand and thirty  
six.

22. Write in symbols: Nine hundred  
and nine.  
A. 990                      B. 999  
C. 9009                      D. 909

23. Which is the seventh month of  
the year?  
A. June                      B. July  
C. August                      D. October

24. Add  $\begin{array}{r} 39 \\ 76 \\ + 93 \\ \hline \end{array}$

- A. 208                      B. 198  
C. 188                      D. 207

25. Work out  $801 - 468 =$  \_\_\_\_\_  
A. 433                      B. 343  
C. 334                      D. 333

26. A boy had sh.440. he spent sh.285. How much money was he left with?  
 A. sh.165                      B. sh.255  
 C. sh.155                      D. sh.255

27. What is the next number in the pattern 12, 16, 21, 27, \_\_\_\_\_?  
 A. 33                              B. 34  
 C. 35                              D. 36

28. Half of 24 is \_\_\_\_\_  
 A. 12                              B. 48  
 C. 14                              D. 16

29. A quarter of 36 is \_\_\_\_\_  
 A. 18                              B. 12  
 C. 9                                D. 6

30. Nine cows produced six litres each. How many litres did they produce altogether?  
 A. 56                              B. 72  
 C. 63                              D. 54

31.  $81 = \underline{\hspace{2cm}} \times 9$   
 A. 9                                B. 8  
 C. 7                                D. 6

32. If I divide 56 marbles equally among seven boys, how many marbles will each boy get?  
 A. 7                                B. 8  
 C. 6                                D. 9

33.  $\frac{3}{8} + \frac{4}{8} = \underline{\hspace{2cm}}$   
 A.  $\frac{1}{8}$                                 B.  $\frac{6}{8}$   
 C.  $\frac{7}{8}$                                 D. 1

34.  $\frac{8}{8} - \frac{3}{8} = \underline{\hspace{2cm}}$   
 A.  $\frac{11}{8}$                                 B.  $\frac{3}{8}$   
 C.  $\frac{4}{8}$                                 D.  $\frac{5}{8}$

35. What is the next number after 9999?  
 A. 10000  
 B. 1000  
 C. 9990  
 D. 99999

36. 
$$\begin{array}{r} 346 \\ 289 \\ + 414 \\ \hline \end{array}$$

- A. 949                              B. 1049  
 C. 1039                            D. 939

37. A man had 8406 chickens. He sold 2488 of them. How many chickens remained?  
 A. 6918  
 B. 5918  
 C. 5818  
 D. 5928

38. How many days are there in 9 weeks?  
 A. 63                                B. 90  
 C. 72                                D. 67

39. How many weeks are there in 42 days?  
 A. 4                                B. 8  
 C. 7                                D. 6

40. 
$$\begin{array}{r} \text{Weeks} \quad \text{days} \\ 13 \quad 2 \\ - 4 \quad 6 \\ \hline \end{array}$$

- A. 8 weeks 6 days  
 B. 8 weeks 4 days  
 C. 8 weeks 3 days  
 D. 9 weeks 3 days

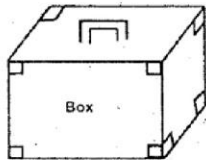
41.  $10m \times 7 = \square m$   
 A. 17                                B. 107  
 C. 70                                D. 170

42. A 50 shilling note = \_\_\_\_\_ ten shilling coins.  
 A. 5                                      B. 50  
 C. 500                                      D. 10
43. What is the shape of a full moon?  
 A. Oval                                      B. Circle  
 C. Rectangle                              D. Triangle

**Price list**



Dress sh.440



sh.555



Ball sh.285

44. From sh.500, Tom bought a ball. How much money was he left with?  
 A. sh.60                                      B. sh.285  
 C. sh.315                                      D. sh.215
45. How much money do I need to buy a dress and a box?  
 A. sh.995                                      B. sh.840  
 C. sh.440                                      D. sh.555
46. How much money did Sheila spend to buy the three items?  
 A. sh.840                                      B. sh.1280  
 C. sh.1180                                      D. sh.1080

47. Sh.    Ct  
 9        40  
 ×        2  
 \_\_\_\_\_

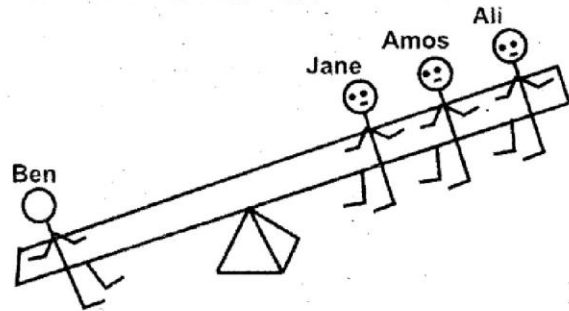
- A. sh.18 40ct  
 B. sh.9 80ct  
 C. sh.18 80ct  
 D. sh.16 80ct

48. Fill in the missing number.

$$\begin{array}{r} 69 \\ + \square 5 \\ \hline 94 \end{array}$$

- A. 4    B. 1  
 C. 3    D. 2

49. Who is heavier?



- A. Jane    B. Ben  
 C. Amos    D. Ali

50. How many legs do 9 goats have?

- A. 9    B. 18  
 C. 27    D. 36

**GATUNDU SUB – COUNTY EXAMINATION  
STANDARD FOUR – TERM I 2016**

**ENGLISH**

Time: 1 hour 40 minutes

Choose the correct word to fill in the blank spaces 1-15

70  
8

The 1 was a clever animal. 2 were 3 with fox. They 4 not working. At 5 hare was 6 carrots from the farm of elephant. One day, the elephant put a trap to 7 the 8 but the hare did not 9. He came 10 night and he 11 caught. The fox 12 away and did not help the hare. The hare was 13 by the elephant the following morning. From that day, fox 14 hare 15 not friends again.

- |    | <b>A</b> | <b>B</b> | <b>C</b> | <b>D</b> |
|----|----------|----------|----------|----------|
| 1. | Hair     | hare     | heir     | here     |
| 2. | They     | there    | their    | it       |
| 3. | Frinds   | frends   | friends  | freinds  |
| 4. | Was      | are      | were     | wore     |
| 5. | Morning  | nite     | night    | day      |
| 6. | Stilling | stealing | stolen   | steeling |
| 7. | Cot      | Catched  | catches  | catch    |
- 56

PRINTED BY HIGHFLYER SERIES Tel: 0723 499860

**Funded By: C.D.F. Gatundu South Constituency,  
Patron Hon. Moses Kuria, Mp Gatundu South.**

8. Theaf	thief	theif	thife
9. Knew	known	no	know
10. With	for	at	in
11. Is	are	were	was
12. Ren	runned	ran	run
13. Beten	beating	beaten	bitten
14. With	and	or	an
15. Was	were	ware	wore

**Choose the past tense of the following**

16. Cry  
 A. Cryed  
 C. Cries  
 B. Cried  
 D. Cry
17. Drink  
 A. Drank  
 C. Drinks  
 B. drunk  
 D. dranked
18. Eat  
 A. Eated  
 C. Eating  
 B. eats  
 D. ate

**What sound is made by**

19. Dog  
 A. Cry  
 B. neigh  
 C. Bark  
 D. hiss
20. Pig  
 A. Mews  
 C. Quacks  
 B. grunts  
 D. brays

**Choose the odd one out**

21. A. Soda  
 C. Carrot  
 B. Juice  
 D. Milk
22. A. Egg  
 C. Orange  
 B. Mango  
 D. Banana

23. A. Oval  
 C. Circle  
 B. House  
 D. Star

**Choose the opposite of the given word.**

24. Early  
 A. Late  
 C. First  
 B. earlier  
 D. earliest
25. Present  
 A. Away  
 C. Upsent  
 B. absent  
 D. never

**Write the plurals of the underlined words**

26. Mr. Mambo has three ox  
 A. Oxes  
 C. Oxeses  
 B. Oxen  
 D. Oxies
27. The thief stole the shoes.  
 A. Thiefs  
 B. thieves  
 C. Theves  
 D. thiefes
28. The sheep are grazing  
 A. Sheeps  
 B. Ships  
 C. Sheep  
 D. Sheepes



29. My tooth is paining

- A. Tooths
- B. teeth
- C. Teeths
- D. toothes

30. The mango tastes sweet

- A. Mangos
- B. mangoes
- C. Mangoes
- D. Mangosc

***Read carefully and answer the questions that follow 31-40***

Once upon a time, there lived an old man with his wife Waceke. He lived with his four son in a Village He had a garden but the family was poor. The four sons were lazy to cultivate but were always busy fighting. So, the old man was unhappy.

One day he called his sons and asked them to sit down. He told them that he had hidden a lot of money in his land. He asked them to go back and dig in the farm to get the money. So the boys did as they were told. After digging, they did not get the money. Instead, they planted and harvested. They sold the harvest and got a lot of money. They were never lazy again.

31. The old man lived with his

- A. Wife alone
- B. Wife and sons
- C. Wife and daughters
- D. Children only

32. The old man was called

- A. Waceke
- B. Njoroge
- C. We are not told
- D. Joshua

33. Tha family had \_\_\_\_\_ members

- A. Six
- B. Five
- C. Three
- D. Four

34. The man was always \_\_\_\_\_ with his sons.

- A. Unhappy
- B. Happy
- C. Good
- D. Fair

35. Where did the old man say he had hidden his money? In the \_\_\_\_\_

- A. Bank
- B. House
- C. Shamba
- D. Roof

36. What did his sons always do?

- A. Fight
- B. Work
- C. Sleep
- D. Dig

37. The old man's sons got money after

- A. Looking for money
- B. Fighting
- C. Digging
- D. Selling the crops

38. Why did the boys dig the shamba?

- A. To plant crops
- B. To search for the money
- C. To please the father
- D. Not old

39. Do you think the man had hidden the money?  
A. Yes  
B. No  
C. Not sure  
D. Some

40. What did the old man want the sons to do?  
A. To plant crops  
B. To search for money  
C. To fight  
D. To marry

**Read the passage below and answer questions 41-50**

The name of my dog is Tumbo. He is six years old. He is black and brown in colour. He is tall and runs very fast. Every day after school, I do my homework. Then I go out to play with him. He is very brave and sends thieves away. He also barks at strangers. During the day, I keep him in the kennel. At night, I set him loose to guard our home. Tumbo eats bones and meat. He is friendly to our cat. I love Tumbo very much. He is my dear pet.

41. The colour of my dog is \_\_\_\_\_

- A. Black and white  
B. Black and brown  
C. White  
D. Brown only

42. My dog barks at \_\_\_\_\_

- A. Me  
B. Strangers  
C. Relatives  
D. Neighbours

43. The young one of a dog is a \_\_\_\_\_

- A. Kitten  
B. Puppy  
C. Calf  
D. Piglet

44. My dog is \_\_\_\_\_ and runs very fast.

- A. Tall  
B. Fat  
C. Short  
D. Slim

45. After doing my \_\_\_\_\_, I play with my dog.

- A. Classwork  
B. Housework  
C. Homework  
D. Fieldwork

46. Dogs love eating \_\_\_\_\_

- A. Bones  
B. Fruits  
C. Vegetables  
D. Birds

47. A dog barks but a pig \_\_\_\_\_

- A. Mews  
B. Grunts  
C. Moos  
D. Neighs

48. The dog stays in the kennel at \_\_\_\_\_

- A. Day  
B. Noon  
C. Night  
D. Evening

49. Tumbo is my \_\_\_\_\_ pet

- A. Only  
B. Dear  
C. Quiet  
D. Best

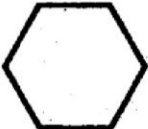
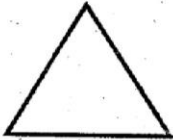


50. Which other animal can be kept as a pet?

- A. Donkey  
B. Fish  
C. Cat  
D. Cow


**GATUNDU SUB – COUNTY EXAMINATION  
STANDARD FOUR – TERM I 2016**

**SCIENCE**

Time: 1 hour 40 minutes

1. We should wash our hands  
A. Before visiting the toilet  
B. After visiting the toilet  
C. After eating food  
D. Before handling books
2. The best soil for modeling is  
A. Loam  
B. Sand  
C. Clay  
D. Mixture of sand and clay
3. Animals that feed on plants only are called  
A. Omnivores  
B. Insectivores  
C. Carnivores  
D. Herbivores
4. Our sense organ of sight is the  
A. Eye  
B. nose  
C. Ear  
D. Mouth
5. The scientists who study weather are called  
A. Weatherists  
B. Astronomers  
C. Meteorologists  
D. Fore casters
6. Which one of the following shapes is good for making rollers?  


7. Which one of the following is NOT a domestic animal?  
A. Elephant  
B. Goat  
C. Camel  
D. Sheep
8. Study the diagram below













- Which one of the following animal lives in the above structure?
- A. Housefly  
B. cockroach  
C. Bee  
D. Spider
  9. The first set of teeth in a baby is called  
A. Secondary teeth  
B. Baby teeth  
C. false teeth  
D. Milk teeth
  10. Which one of the following items should not be shared?  
A. Plates  
B. Towels  
C. Spoons  
D. Cups
  11. From which of the following plants can we get cooking oil?  
A. Kale  
B. arrow root  
C. Coconut palm  
D. Yams

PRINTED BY HIGHFLYER SERIES Tel: 0723 499860

**Funded By: C.D.F. Gatundu South Constituency,  
Patron Hon. Moses Kuria, Mp Gatundu South.**

12. Use the weather chart below to answer the questions that follow

Day	Morning	Afternoon
Monday		
Tuesday		
Wednesday		
Thursday		
Friday		

13. Which day was sunny in the morning and rainy in the afternoon?

- A. Monday
- B. Wednesday
- C. Thursday
- D. Tuesday

14. Which two days were sunny in the morning?

- A. Monday and Wednesday
- B. Monday and Thursday
- C. Thursday and Friday
- D. Tuesday and Thursday

15. Which one of the following foods destroy our teeth?

- A. Banana
- B. Cabbage
- C. Sugarcane
- D. Sweets

16. Fish breathe through \_\_\_\_\_

- A. Gills
- B. Scales
- C. Skin
- D. Lungs

17. The type of tool shown below is called \_\_\_\_\_



- A. Canine
- B. Incisor
- C. Premolar
- D. Molar

18. Which one of the following is a useful insect?

- A. Weevil
- B. Cockroach
- C. Housefly
- D. Bee

19. Too much rain may cause \_\_\_\_\_

- A. drought
- B. earthquake
- C. floods
- D. dust

20. Which one of the following animals has strong hind legs for hopping?

- A. Locust
- B. Mosquito
- C. Bee
- D. Ants

21. Which one of the following animals moves by slithering?

- A. Termite
- B. Snake
- C. Mosquito
- D. Snail

22. A millipede protects itself by \_\_\_\_\_

- A. Hiding in the shell
- B. Biting
- C. Stinging
- D. Coiling

23. Which of the following pairs show animals that protect themselves by stinging?

- A. Bees and wasps
- B. Bees and beetles
- C. Cockroaches and Ladybirds
- D. Wasps and spiders

24. Dogs live in a structure called \_\_\_\_\_

- A. Shed
- B. Hutch
- C. Kennel
- D. Sty

25. Three of the following are ways of transporting water EXCEPT?

- A. Using water tankers
- B. Using taps
- C. Using pipes
- D. Using cans

26. To make water safe for drinking it should be \_\_\_\_\_.

- A. Boiled
- B. warmed
- C. Roasted
- D. Filtered

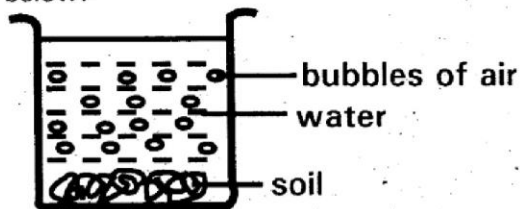
27. The type of soil that feels smooth and sticky is \_\_\_\_\_.

- A. Sandy soil
- B. Loam soil
- C. Clay soil
- D. Silt

28. Which one of the following is not a special sound?

- A. Hooting of a car
- B. Birds singing
- C. Ambulance siren
- D. A bell ringing

29. Class 3 pupils put dry soil in a tin. They then added water into it as shown below:-



The appearance of the bubbles shows that soil contains \_\_\_\_\_.

- A. Water
- B. Dead plants and animals
- C. Living thing
- D. Air

30. How many wheels does a wheelbarrow have?

- A. 2
- B. 3
- C. 1
- D. 4

31. \_\_\_\_\_ is used to make baskets, mats, ropes and sacks.

- A. Rubber
- B. Coffee
- C. Tea
- D. Sisal

32. Which one of the following will float on water

- A. Stone
- B. Paper
- C. Nail
- D. Spoon

33. People who cannot talk communicate using \_\_\_\_\_.

- A. Gestures
- B. Whispering
- C. Words
- D. Kicks

34. A caterpillar feeds on \_\_\_\_\_.

- A. Soil
- B. Leaves
- C. Insects
- D. Ants

35. Unwanted plants are called

- A. Beans
- B. Weeds
- C. Wastes
- D. Maize

36. \_\_\_\_\_ is found in dirty hair.

- A. Lice
- B. Fleas
- C. Jiggers
- D. Cockroaches

37. Which of the following plants is found in a dry area?

- A. Arrowroot
- B. Wheat
- C. Maize
- D. Cactus

38. Which part of the banana plant do we eat?

- A. Roots
- B. Stem
- C. Fruits
- D. Leaves

39. The body of an insect is divided into \_\_\_\_\_ parts.

- A. 4
- B. 2
- C. 3
- D. 5

40. Which of the following should be sprinkled around the hole of a pit latrine?

- A. Sand
- B. Ash
- C. Salt
- D. Dust

41. Simple machines make work \_\_\_\_\_.

- A. easier
- B. difficult
- C. hard
- D. impossible

42. Birds move by \_\_\_\_\_.

- A. Slithering
- B. Walking
- C. Flying
- D. hopping

43. Insects breathe through \_\_\_\_\_.

- A. Spiracles
- B. Gills

C. Lungs

D. Skin

44. A person who cannot hear is said to be

- A. lame
- C. dumb

- B. deaf
- D. blind

45. A young plant is called


- A. Fingering
- B. Foal
- C. Leaf
- D. Seedling

46. Which of these plants is used to make a drink?

- A. Sisal
- C. Maize

- B. Coffee
- D. Carrot

47.



Which of the following types of soil is the best for making the pot above?

- A. Loam
- B. Mixture of sand and loam
- C. Clay
- D. Sand

48. A place where a plant grows naturally is its

- A. Area
- B. Habitat
- C. Field
- D. Surrounding

49. Big things look \_\_\_\_\_ when they are far away

- A. small
- C. smooth
- B. heavy
- D. big

50. Light enters our eyes through the

- A. retina
- C. eye ball
- B. eyelids
- D. pupil



**GATUNDU SUB – COUNTY EXAMINATION**  
**STANDARD FOUR – TERM I - 2016**  
**MARKING SCHEME**

ENGLISH	KISWAHILI	MATHS	SCIENCE	SOCIAL STUDIES	
1. B	1. B	1. A	1. B	1. A	51. C
2. A	2. A	2. C	2. C	2. A	52. B
3. C	3. C	3. B	3. D	3. B	53. B
4. C	4. A	4. D	4. A	4. A	54. D
5. C	5. C	5. C	5. C	5. D	55. B
6. B	6. B	6. B	6. B	6. A	56. B
7. D	7. C	7. A	7. A	7. A	57. B
8. B	8. A	8. D	8. D	8. B	58. C
9. D	9. C	9. B	9. D	9. C	59. D
10. C	10. B	10. C	10. B	10. B	60. B
11. D	11. A	11. D	11. C	11. B	
12. C	12. C	12. A	12. A	12. D	
13. C	13. A	13. B	13. C	13. A	<b>C.R.E</b>
14. B	14. D	14. D	14. B	14. D	
15. B	15. B	15. C	15. D	15. A	61. C
16. B	16. D	16. A	16. A	16. A	62. B
17. A	17. B	17. D	17. B	17. C	63. A
18. D	18. C	18. B	18. D	18. D	64. B
19. C	19. A	19. C	19. C	19. C	65. A
20. B	20. C	20. A	20. A	20. B	66. A
21. C	21. C	21. C	21. B	21. C	67. C
22. A	22. B	22. D	22. D	22. D	68. D
23. B	23. D	23. B	23. A	23. D	69. A
24. A	24. B	24. A	24. C	24. C	70. D
25. B	25. C	25. D	25. B	25. A	71. B
26. B	26. B	26. C	26. A	26. C	72. C
27. B	27. D	27. B	27. C	27. C	73. A
28. C	28. D	28. A	28. B	28. B	74. C
29. B	29. B	29. C	29. D	29. C	75. D
30. C	30. C	30. D	30. C	30. C	76. C
31. B	31. A	31. A	31. D	31. A	77. B
32. C	32. D	32. B	32. B	32. A	78. A
33. A	33. B	33. C	33. A	33. B	79. D
34. A	34. A	34. D	34. B	34. D	80. B
35. C	35. C	35. A	35. B	35. A	81. A
36. A	36. D	36. B	36. A	36. C	82. A
37. D	37. A	37. B	37. D	37. A	83. C
38. B	38. C	38. A	38. C	38. C	84. B
39. B	39. D	39. D	39. C	39. B	85. A
40. A	40. A	40. C	40. B	40. A	86. A
41. B	41. B	41. C	41. A	41. D	87. C
42. B	42. C	42. A	42. C	42. C	88. D
43. B	43. A	43. B	43. A	43. C	89. C
44. A	44. B	44. D	44. B	44. B	90. A
45. C	45. C	45. A	45. D	45. C	
46. A	46. D	46. B	46. B	46. D	
47. B	47. B	47. C	47. C	47. D	
48. C	48. A	48. D	48. B	48. C	
49. B	49. C	49. B	49. A	49. C	
50. C	50. D	50. D	50. D	50. D	