

CHRISTIAN RELIGIOUS EDUCATION

1. _____ is a way of caring for plants.
(Pruning, Burning, Cutting)
2. _____ were created on the fifth day.
(Man, Animals, Sky)
3. God commanded animals to _____.
(kill, fight, produce)
4. We should treat all animals _____.
(unkindly, unhappily, kindly)
5. Tom was seen hitting a dog with a stone, he was _____ to it.
(kind, cruel, happy)
6. God gave us _____ to make places look beautiful.
(flowers, papers, roots)
7. We know God has _____ plans for us.
(good, bad, small)
8. I should _____ in the Lord.
(fight, trust, shout)
9. We recite memory verses from the _____.
(Kamusi, Newspaper, Bible)
10. _____ is the word of God.
(House, Text, Bible)
11. We should give _____ always to God.
(sweets, thanks, drinks)
12. Love your God with your strength, heart and _____.
(feet, hair, soul)
13. _____ thanked God for a son.
(Patricia, Halis, Hannah)
14. The priest who was given presents was called _____.
(Elisha, Eli, Eliud)
15. He was born when his parents were very old, who was he?
(Samuel, Sam, Mark)
16. The _____ has another name which is church.
(cave, temple, tree)
17. How old was Jesus when he went to Jerusalem?
(14 years, 12 years, 8 years)
18. Samuel was left in the temple to _____ God.
(laugh, play, serve)
19. _____ teachers were with Jesus in the temple.
(Kenyan, Jewish, Nairobian)
20. Most of the Christians worship God by _____.
(playing, praying, shouting)
21. We are commanded to keep the _____ holy.
(Sabbath, Monday, Labour day)
22. On the Sabbath we must _____.
(gossip, rest, steal)
23. The people of _____ were given the commandments.
(Jerusalem, Jericho, Israel)


24. Giriama people call God _____
(Enkai, Were, Mulungu)
25. _____ obeyed God and went to receive the laws.
(Paul, Moses, Peter)
26. _____ listens when we call him for help.
(Ann, God, Teacher)
27. We belong to different _____
(communities, cars, houses)
28. The word Saviour means _____.
29. In traditional African society people prayed near _____.
(roofs, rivers, windows)
30. _____ was offered in the traditional African society as a sign of worship.
(Clothes, Food, Cars)
31. _____ and _____
32. _____ were the first parents of the Agikuyu.
(Kamau and Alice, Moses and Mary, Gikuyu and Mumbi)
33. Esau was the son of _____
(Jacob, Isaac, Joseph)
34. _____ was the brave warrior of the Luos.
(Samoei, Lwanda Magere, Gikuyu)
35. _____ was the first patriarch of Israel.
(Moses, David, Abraham)
36. David had _____ to kill Goliath.
(fear, courage, pride)
37. _____ is another name we call God.
(Samaritan, Christ, Jehovah)
38. The wise men brought _____ kinds of gifts. (6,3,4)
39. _____ was interpreting dreams to the king.
(Michael, Job, Joseph)
40. Jesus birthday is celebrated on _____. (24th June, 25th May, 25th December)
41. We should not accept gifts from _____.
(teachers, strangers, parents)
42. Jesus had _____ followers.
(12, 11, 14)
43. Lydia had a _____ heart. (cruel, kind, ungrateful)
44. God created _____ to give us water for his creation.
(wind, rain, soil)
45. _____ was the first human being to kill.
(Abel, Adam, Cain)
46. Sarah was the wife of _____
(Paul, Allan, Abraham)
47. We should plant _____ to make our environment beautiful.
(weeds, trees, stones)
48. The wife of Anania was _____
(Tabitha, Sapphira, Sarah)
49. A good leader is _____
(disobedient, polite, cruel)
50. We should _____ our leaders.
(honour, fight, abuse)

ISLAMIC RELIGIOUS EDUCATION

1. Complete this
"Audhu billahi mina _____ **Rajiim**"
(Llahi, Rasuuli, Sheitwaani)
2. "Ara-Aita Iladhii Yukadhibu-biddiin" is the first verse of surah _____ . (Al-Kaafirun, Al-Maun, Al-Kauthar)
3. Allah (s.w) showed the Qureish people the best way of _____
(trade, modelling iron, reciting poems)
4. Which ones are surahs of "protection of Allah"? _____
(Nas and Falaq, Nasr and Kauthar, Fatiha and Lahab)
5.

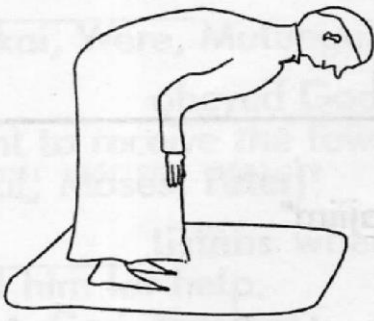
<input checked="" type="checkbox"/> Enter with a left foot
<input checked="" type="checkbox"/> Crouch facing away from Qibla
<input checked="" type="checkbox"/> Say Ghufraanaka when you come out

 Where is this?

(kitchen, forest, toilet)
6. In the dua, "Assalaam Aleikum" we wish others _____
(the mercy, the peace, the wisdom)
7. The strongest pillar of Islamic religion is _____
(Swalat, Zakkat, Hajj)
8. Which Islamic teaching is **WRONG**?
(Food:eat whats in front of you, Drink: pause when you finish drinking,
Greetings: start with greating before other talks)
9.  Which salaah _____ is marked at a wrong time? (Fajr, Dhuhr, Asr)
10. Choose the cloth that will cover the Aura of a person.



11. In Kenya Qibla is on the _____. (East, North, West)

12.  This posture of swalat is the _____. (Sujud, Qiyam, Rukuu)

13. Adhan and Iqama are two announcements made _____ swalat. (before, in, after)

14. When Imaam says in Surah Fatiha "Wala-dhwaaliin" we answer _____. (Attahiyyaatu, Aamiin, Allahu Akbar)

15. The _____ Allah makes Him to give us Rizq easily like He gives to birds. (reliance on, fear of, remembrance of)

16. _____ showed that what prophets gave us came from Allah. (Magic, Miracles, Power)

Match this information with the correct prophet

17. His brothers threw him into a deep well _____ Prophet Zakariya

18. His body was cut into two parts _____ Prophet Suleiman

19. He was swallowed by a big fish _____ Prophet Yusuf

20. He knew the languages of animals and birds _____ Prophet Yunus

21. The Hindus pray in a _____. (shrine, temple, cathedral)

22. The foster mother of prophet Muhammad in his childhood was _____. (Ummul Jamil, Lady Khadija, Halima)

23. The first month of Islamic calendar is _____. (Muharram, Dhul Hijja, Ramadhan)

24. When Muslims pray together in one group we call it _____ prayer. (Jum'a, Jamia, Jamaa)

25. _____ is a call for Muslims at prayer time. (Adhaan, Qira-a, Himd)

Jaza pengo

1. b ___ sk ___ ti

2. Mg ___ njw ___

3. P ___ pa ___

4. Mj ___ k ___

5. ___ k ___ o

Andika kwa wingi

6. Mwalimu mzuri

7. Msumeno umeoza

8. Yai hili ni la nani?

9. Huyu ni chura mkubwa.

10. Sahani imetoboka

Kanusha sentensi hizi

11. Mimi ninafua

12. Mkoba huu ni wako.

13. Kamau amepanda farasi.

Andika kwa umoja

14. Viranja wanavuka mito.

15. Maembe mepesi ni haya.

Tumia silabi hizi kuunda maneno

16. Mw -

17. gh -

Tumia gani au nani

18. Tunda ___ tamu?

19. Mwalimu anawaita ___ ?

20. Shule ___ iliyotia fora?

Andika akisami hii kwa maneno

21. $\frac{1}{3}$

22. $\frac{1}{2}$

23. $\frac{1}{4}$

Tumia sifa - baya

24. Kiatu _____ ni hiki.

25. Mfuko _____
umepatikana.

26. Swali hili ni _____.

Tegua vitendawili hivi

27. Mama ribebe _____

28. Nyumba yangu yenye
madirisha mengi
_____.

29. Konokono anayeacha
alama _____.

30. Kuku wangu hutagia
mibani _____.

Chagua jibu sahihi
kukamilisha sentensi

31. Babu am _____
_____ mwingine.
(bunda, unda)

32. Shangazi amejifunga
_____ kiunoni.
(chuka, sika)

33. Wanafunzi wana
madaftari _____
kila mmoja.
(saba, saba)

34. Si vyema kutumia
_____ za kulevya.
(madawa, dawa)

35. Mlango hukufungwa
kwa _____.
(kifuli, kufuli)

Andika kwa maneno
tarakimu hizi

36. Kuku 43 - _____

37. Vikombe 171 - _____

38. Nguo 888 - _____

Andika kwa herufi ndogo

39. CHUMVI - _____

40. PARACHICHI - _____

Kamilisha methali hizi

41. _____ hauna mfupa.

42. Mkono _____
haulabwi.

43. Kawia _____

Chagua jibu lisilofaa

44. Shati, tai, tufaha, soksi

45. Kifutio, samawati, rula,
daftari _____

Soma kifungu hiki kisha jibu maswali

Kila mwanafunzi anafaa kuwa mwenye nidhamu, kila mahali na kila wakati. Nidhamu ni muhimu hasa shuleni, barabarani, nyumbani na hata sehemu za kuabudia kama Msikitini na Kanisani.

Mtoto ambaye hana nidhamu huwa hapendwi na wengine kama ni shuleni. Mtoto huyu husumbua walimu, hivyo basi ni jukumu la kila mwanafunzi kuwa na nidhamu kwani itamsaidia kuishi vyema na watu wengine.

Jibu maswali haya

46. Kifungu ulichokisoma kinahusu _____.
47. Mtoto mwenye nidhamu ni _____.
(mrefu, mnene, mwema)
48. Mwalimu hapendi mtoto ambaye ni _____.
(msumbufu, mwema, mkarimu)
49. _____ ni pahali ambapo watu huabudu.
(Sebuleni, Kanisani, Bafuni)
50. Wanafunzi husoma _____.
(kiotani, kizimbani, shuleni)

Fill the gaps

1. C__rr__ts

2. T__rm__te

3. Ch__rch

4. P__ct__re

5. El__ph____t

Write these words correctly


6. eezesn -

7. eamures -

8. jectin -

9. raew -

10. tainp -



Use 'has' or 'have'

11. How many shirts do you _____?

12. Martha _____ four apples.

13. The room _____ many beds.

14. What do they _____ in their bags?

15. My book _____ a picture.

Match the words correctly

16. hard tank

17. dust board

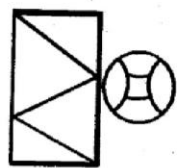
18. pocket bin


19. notice brush

20. water money

Use on, under, behind

21.  The jug is _____ table.

22.  The ball is _____ the door.

23.  The pencil is _____ chair.

Write the opposite of the underlined word in the following sentences

24. The branch is too high for Kamau to cut.

25. Today is a bad day for me. _____

26. Can I have your empty bucket. _____

27. That's an expensive dress. _____

Write in plural

28. That is an envelope. _____

29. I love eating a mango in the morning _____

30. The box is too heavy to lift _____

31. Chief - _____

32. Mouse - _____

What do you call them ?

33. A person who treats sick animals _____.

34. A person who sells flowers _____.

35. A person who builds houses using stones _____.

(carpenter, mason, teacher)

Which sound do they make?

36. An owl _____

37. A snake _____

38. An elephant _____


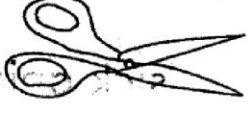


Complete the similes

39. As sweet as _____.

40. As _____ as a tortoise.

41. As proud as a _____

Name these pictures

42.  _____	43.  _____	44.  _____	45.  _____
---	---	--	---

Read the story and answer the questions

Long ago there was a young man who had built a big house. Inside, there were three bedrooms and a big kitchen.

He did not like cooking in the kitchen because he did not have a stove or a gas cooker. He liked eating wild fruits and roasted meat.

46. What is the opposite of the word young ? _____

47. How many rooms were in the house? _____.

48. A _____ was not found in the house.
(bed, stove)

49. The young man liked eating _____.
(roots, wild fruits, papers)

50. The present tense of the word built is _____.

Soma maneno haya:

- | | |
|---------------|---------------|
| 1. Kifafa | 11. Polepole |
| 2. Upanga | 12. Sahihisha |
| 3. Gurudumu | 13. Kunguru |
| 4. Utambi | 14. Bundi |
| 5. Mwangwi | 15. Madoadoa |
| 6. Shirikisho | 16. Kitambaa |
| 7. Sadaka | 17. Lugha |
| 8. Tetemeka | 18. Gharama |
| 9. Pipi | 19. Adabu |
| 10. Dirishani | 20. Ndugu |

Soma sentensi hizi

21. Andika sentensi unazozijua hapa.
22. Inatupasa kuweka mili yetu safi.
23. Mwalimu ameuliza swali gani?
24. Amina ni msichana mwenye nidhamu.
25. Kalamu hii ni nzuri.



This is the sense organ of _____.

(tasting, sight, hearing)

2. When we see an object very close it looks _____.

(beautiful, far, big)

3. Sugarcane helps our teeth to be _____.

(white, strong, weak)

4. _____ is an example of a vegetable (Maize, Tomato, Mint)

5. Exercises help our bodies to _____.

(relax, grow, jump)

6. We use disinfectants to kill _____.

(flies, rats, germs)

7. We get _____ from some animals.

(food, timber, roots)

8. Clothes are made from _____.

(wax, fibre, cotton)

9. A _____ sinks when thrown into water.

(stone, rubber, leaf)

10.



This plant grows in _____ areas.

(dry, wet, cold)

11. A caterpillar moves by _____.

(walking, hopping, crawling)

12. A _____ is an animal that changes depending on its surrounding.

(chameleon, lion, tick)

13. Models are best put in the _____.

(sun, pot, shade)

14. In towns water is mostly transported by _____.

(pipes, donkeys, cans)

15. Tom is talking with food in his mouth, this is _____ table

manners.

(good, bad, proper)

Name three sources of light

16. _____

17. _____

18. _____

19. _____ is done to muddy water to make it clean.
(Boiling, Colouring, Filtering)

20. When I hear the siren of an ambulance someone is being taken to _____.
(church, hospital, bush)

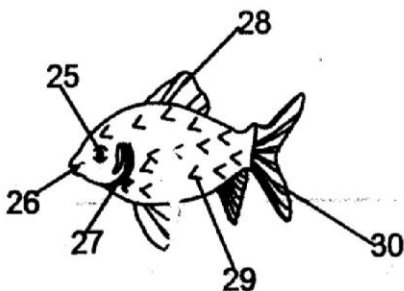
21. _____ is keeping of animals and growing of crops.
(Poultry, Farming, Watering)

22. The main source of water is _____.
(tap, lake, rain)

23. A _____ plant grows in water.
(mangrove, maize, eucalyptus)

24. We use _____ as a spice.
(cloves, cabbages, kales)

Name the parts of a fish



25. _____

26. _____

27. _____

28. _____

29. _____

30. _____

31. We use a _____ plant to make cooking oil. (arrowroot, yam, coconut)

32. _____ is the sending back of light when using a mirror.
(Painting, Reflection, Shining)

33. A _____ best tool for cutting grass.
(panga, axe, slasher)

34. The best soil for building is _____.
(sand, clay, loam)

35. _____ soil has tiny particles.
(loam, clay, sand)


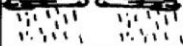



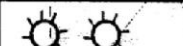
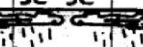
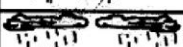
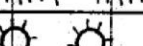
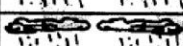
36. _____ and

37. _____ must be washed clean before eating or cooking.
(fruits, branches, shoes, vegetables)

38. Short nails look _____.
(dirty, clean, untidy)

39. The best time for farmers to harvest is _____ season.
(wet, cold, dry)

Use the chart to answer the following questions

Day	Morning	Afternoon
Monday		
Tuesday		
Wednesday		
Thursday		
Friday		

40. On _____ afternoon children played in the rain.
(Monday, Wednesday, Tuesday)

41. Which day was best for separating husks from the grains? _____

42. On _____ morning people started sweating early.
(Wednesday, Friday, Monday)

43. Which day did vehicles get stuck in the mud? _____.
(Tuesday, Wednesday, Thursday)

44. The mouth of a bird is called a _____.
(mouth, feather, beak)

45. _____ and

46. _____ have one seed.
(Grapes, Guava, Mango, Orange, Plum)

47. When we sleep our minds _____.
(sleep, fight, relax)

48. A pig lives in a _____.
(kennel, sty, nest)

49. A clean toilet does not _____.
(shine, smell, fall)

50. We eat the _____ of a carrot.
(stem, leaves, roots)

Read these words

1. Calabash

2. Holiday

3. Ferry

4. Exit

5. Patient

6. Arrow

7. September

8. Family

9. Exchange

10. Pour

11. Flock

12. Porridge

13. Grate

14. Telephone

15. Cabinet

16. Jelly

17. Direct

18. Colour

19. Clothes

20. Verandah

Read these sentences

21. The grains are drying in the sun.

22. Who painted these walls.

23. The baby has a stomach ache

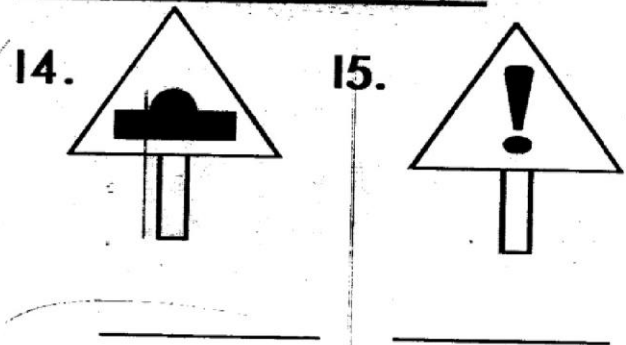
24. My hair is black in colour.

25. She took a bitter pill.

1. During _____ season many animals die. (rainy, dry, cold)
2. My school is in _____ district.
3. A _____ is an example of a man-made feature. (lake, dam, sea)
4. River Kawe flows only the rainy season it is a _____ river. (lake, seasonal, permanent)
5. _____ are plants growing in the swamp. (weeds, flowers, reeds)
6. _____ is how people's life way is. (Clapping, Culture, Dancing)
7. The flag has _____ colours.
8. We _____ plants when the weather is very hot. (dry, irrigate, burn)
9. The dark clouds usually brings _____. (wind, rain, sun)
10. The Maasai call God _____ (Mulungu, Ngai, Enkai)

11. Sunshine, rain, clouds and wind are weather _____ (charts, symbols, elements)
12. _____ is an activity that can be done when the weather is hot or dry. (Planting, Weeding, Fishing)
13. _____ are people carried in a bus. (Luggage, Pedestrians, Passengers)

This road sign shows



16. _____ is not a part of compass. (North, Green, South)
17. We depend on each other, this is called _____. (borrowing, farming, interdependence)
18. _____ is a wild animal. (Donkey, Wolf, Cat)
19. A plain is a _____ land. (high, flat, long)

20. On 1st May we celebrate

_____.
(Jamhuri day, Mashujaa day, Labour day)

21. Air that moves in one direction is called

_____.
(rain, clouds, wind)

22. The sun sets in the

_____.

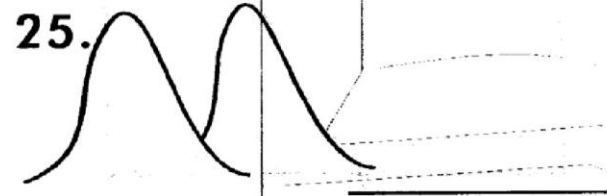
23. Crops that we grow for eating are called

_____.
(food, cash, much)

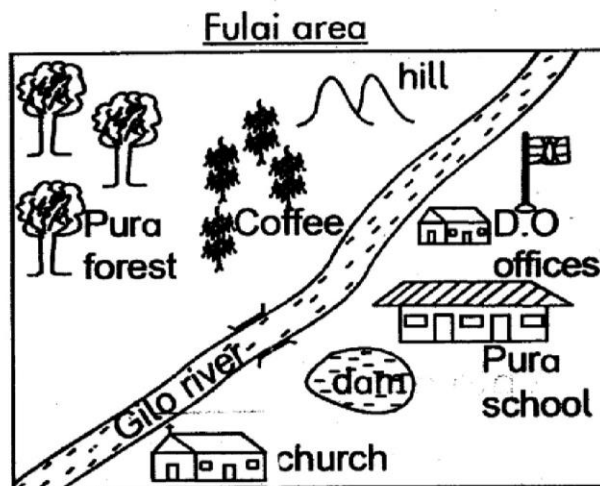
24. Hindus worship in a

_____.
(Church, Mosque, Temple)

Name this feature



Use the map to answer the questions below



26. _____ is the head of Fulai area.
(Chief, D.O. D.C.)

27. People in the area worship in a _____.

28. The cash crop grown in the area is _____.

29. Fulai area is a _____.
(county, district, division)

30. People use a _____ to cross the river.
(canoe, bridge, sticks)

31. _____

32. _____

33. _____ are physical features in the area.

34. Animals kept for milk are called _____.
(beef, dairy, poultry)

35. We throw rubbish in a _____.
(toilet, latrine, dust bin)

36. When a child is given, food, education, shelter are called _____ of a child.
(fun, rights, abuse)

37. Tourists bring _____ exchange to our country.
(clothes, foreign, tax)

38. _____ are people who kill our wild animals.
(Farmers, Strangers, Poachers)

39. When trees grow together make a _____.
(shrub, bush, forest)

40. Too much rain causes _____.
(drought, famine, floods)

41. On a cold day we wear _____ clothes.
(heavy, light, pink)

42. On a muddy day we wear _____.
(slippers, papers, gumboots)

43. Monthly weather changes is called _____.
(symbols, seasons, signs)

44. Our president is called _____.

45. The green light in the traffic light tell us to _____.
(walk, stop, sleep)


Name the weather signs below



48. Rivers and lakes give us _____ as food.
(fish, rice, cotton)

49. The meat we get from a cow is called _____.
(pork, mutton, beef)

50. Draw a valley.



1. Which digit is in the place value of hundreds in the following number 2359? _____

What is the place value of 6 in following ?

2. 1600 - _____

3. 6873 - _____

4. 496 - _____

5. 8162 - _____

Work out

$$\begin{array}{r} 6. \quad 1377 \\ + \quad 142 \\ \hline \end{array}$$

$$\begin{array}{r} 7. \quad \quad 284 \\ + \quad 9691 \\ \hline \end{array}$$

$$\begin{array}{r} 8. \quad 3407 \\ + \quad \quad 9 \\ \hline \end{array}$$

$$\begin{array}{r} 9. \quad \quad 58 \\ + \quad 138 \\ \hline \end{array}$$

10. $353 + 8 =$ _____

Use equal to, lighter than or heavier than

11. 200kg is _____
105kg.

12. 91kg is _____ 191kg

13. 504kg is _____ 504kg

14. There are 81 bags in a store. How many bags are there in 9 such stores? _____

15. Caro paid sh. 72 for 6 rubbers. How much did one rubber cost? _____

16. $\square \times 9 = 81$

$$\begin{array}{r} 17. \quad 13 \\ \times \quad 4 \\ \hline \end{array}$$

$$\begin{array}{r} 18. \quad \quad 20 \\ \times \quad \quad 9 \\ \hline \end{array}$$

19. $4 \times \square = 28$

20. $7 \times 5 = \square$

21. $341 - 71 =$ _____

$$\begin{array}{r} 22. \quad 9431 \\ - \quad 229 \\ \hline \end{array}$$

$$\begin{array}{r} 23. \quad \quad 842 \\ - \quad \quad 17 \\ \hline \end{array}$$

24. $\square - 37 = 73$

25. Peter had 562 marbles.
He lost 26 of them.
How many was he left
with? _____

26. 3 hundreds 9 tens 4
ones = _____

27. 1763 = _____ thousands
_____ hundreds _____
tens _____ ones.

28. Expand 6400 = _____

29. $9000 + 200 + 10 + 4$
= _____

How many weeks are there in

30. 28 days _____

31. 70 days _____

32. 35 days _____

33. There are 490 girls and
128 boys in Kamweru
primary school. How
many pupils are there
altogether in the school?
_____.

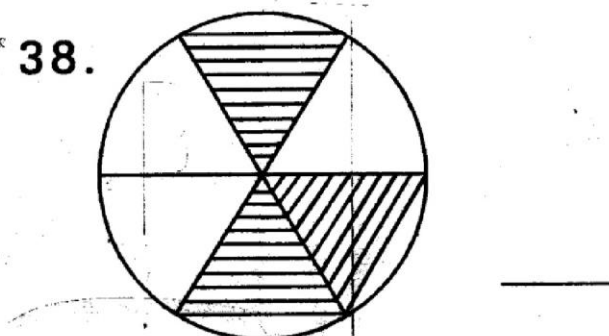
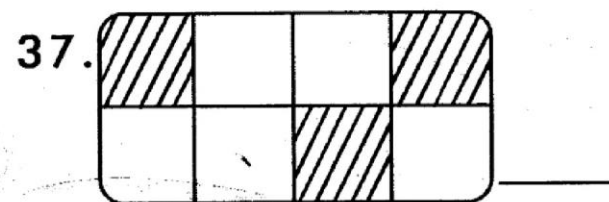
Complete the pattern

34. 35, 28, 21, _____, _____

35. 161, 261, 361, _____, _____

36. _____, _____, 61, 51, 41

What fraction is unshaded?



39. $\frac{7}{8} + \frac{1}{8} =$ _____

40. $\frac{3}{4} - \frac{2}{4} =$ _____

41. $\frac{1}{3}$ of 9 = _____

42. $\frac{1}{5}$ of 10 = _____


43. $\frac{1}{4}$ of 12 = _____

44. The length of a field is 20 metres. What is the total length of 7 same plots?


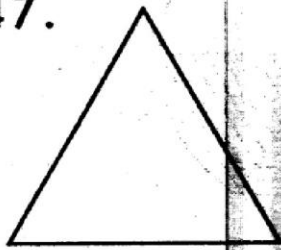
45. $45m \div 9 =$ _____

Name the shapes

46.



47.



48. Anita was number 8 in her class. What position was she? _____

Arrange from the largest to the smallest

49. 315, 170, 551, 185, 252

50. 505, 50, 550, 115, 151

STANDARD THREE 2015 MARKING SCHEME

<u>MATHS</u>	<u>ENGLISH</u>	<u>KISWAHILI</u>	<u>SCIENCE</u>	<u>SOCIAL STUDIES</u>	<u>C.R.E</u>	<u>ISLAMIC</u>
1. 3	1. carrots	1. biskuti	1. sight	1. dry	1. pruning	1. Sheitwaani
2. hundreds	2. termites	2. mgonjwa	2. big	2. —	2. animals	2. Al-Maun
3. thousands	3. church	3. papai	3. strong	3. dam	3. produce	3. trade
4. ones	4. picture	4. mjukuu	4. tomato	4. seasonal	4. kindly	4. Nas and Falaq
5. tens	5. elephant	5. ukoo	5. relax	5. reeds	5. cruel	5. Toilet
6. 1519	6. sneeze	6. walimu	6. germs	6. culture	6. flowers	6. the peace
7. 9975	7. measure	7. misumeno	7. food	7. 4	7. good	7. swalat
8. 3416	8. inject	8. mayai haya ni ya nani?	8. cotton	8. irrigate	8. trust	8. Drink: pause when you finish drinking
9. 196	9. wear	9. Hawa ni vyura wakubwa	9. stone	9. rain	9. Bible	9. Fajr
10. 361	10. paint	10. Sahani zimetoboka	10. dry	10. Enkai	10. Bible	10. drawings
11. heavier than	11. have	11. Mimi sifui	11. crawling	11. elements	11. thanks	11. north
12. lighter than	12. has	12. Mkoba huu si wako	12. chameleon	12. fishing	12. soul	12. Rukuu
13. equal to	13. has	13. Kamau hajapanda farasi	13. shade	13. passengers	13. Hannah	13. before
14. 729	14. have	14. Kiranja anavuka mto	14. pipes	14. bump	14. Eli	14. Amin
15. 12	15. has	15. Embe jepesi ni hili	15. bad	15. danger	15. Samuel	15. reliance on
16. 9	16. hard brush	16. Mwili, mwalimu	16. sun/lenses	16. green	16. temple	16. miracles
17. 52	17. dust bin	17. ghalu gharama	17. moons	17. interdependence	17. 12 years	17.
18. 180	18. pocket money	18. gani	18. candle/ torch	18. wolf	18. serve	18.
19. 7	19. notice board	19. nani	19. electricity	19. flat	19. Jewish	19. Diagram
20. 35	20. water tank	20. gani	20. filtering	20. Labour day	20. praying	20.
21. 270	21. on	21. thuluthi	21. hospital	21. wind	21. Sabbath	21.
22. 9202	22. behind	22. nusu	22. farming	22. west	22. rest	22.
23. 825	23. under	23. robo	23. rain	23. food	23. Israel	23.
24. 110	24. low	24. kibaya	24. mangrove	24. temple	24. Mulungu	24.
25. 536	25. good	25. mbaya	25. clove	25. hill/ mountain	25. Moses	25.
26. 394	26. full	26. baya	26. eye	26. D.O.	26. God	26.
27. 1th, 7th, 6t, 3ones	27. cheap	27. kitanda	27. mouth	27. church	27. communi- ties	27.
28. 6000+400+00+0	28. those are envelopes	28. chandaria	28. gills	28. coffee	28. Jesus	28.
29. 9214	29. We love eating mandeshi in the morning	29. kalamu ya wino	29. fins	29. division	29. rivers	29.
30. 4 weeks	30. The boxes are too heavy to lift	30. nanasi	30. scales	30. bridge	30. food	30.
31. 10 weeks	31. chiefs	31. punda	31. tall	31. forest	31. Gikuyu	31.
32. 5 weeks	32. mice	32. shuka	32. coconut	32. river	32. Mumbi	32.
33. 618	33. veterinary	33. saba	33. reflection	33. hill	33. Isaac	33.
34. 14, 7	34. florist	34. dawa	34. slasher	34. diary	34. Lwanda Magere	34.
35. 461, 561	35. mason	35. kufuli	35. sand	35. dust bin	35. Abraham	35.
36. 81, 71	36. hoots	36. arobaini na tatu	36. clay	36. right	36. courage	36.
37. 5/8	37. hisses	37. mia moja sabini na moja	37. fruits	37. foreign	37. Jehovah	37.
38. 3/6	38. trumpets	38. mia nane themanini na nane	38. vegetables	38. poachers	38. 3	38.
39. 8/8	39. honey	39. chumvi	39. clean	39. forest	39. Joseph	39.
40. 1/4	40. slow	40. parachichi	39. dry	40. floods	40. 25 th December	40.
41. 3	41. peacock	41. ulimi	40. Wednesday	41. heavy	41. strangers	41.
42. 2	42. feather	42. mtupu	41. Tuesday	42. gumboots	42. 12	42.
43. 3	43. scissors	43. ufike	42. Friday	43. seasonal	43. kind	43.
44. 140	44. hut	44. tufaha	43. Thursday	44. Uhuru	44. rain	44.
45. 5	45. bottle	45. samawati	44. beak	45. walk	45. Cain	45.
46. oval	46. old	46. nidhamu	45. mango	46. rainy	46. Abraham	46.
47. triangle	47. fair	47. mwema	46. plum	47. calm	47. trees	47.
48. eighth	48. store	48. msumbufu	47. relax	48. fish	48. Sapphira	48.
49. 551, 315, 252, 185, 170	49. wild fruits and roasted meat	49. kanisani	48. sty	49. beef	49. polite	49.
50. 550, 505, 151, 115, 50	50. build	50. shuleni	49. smell	50. drawing	50. honour	50.