

TARGETER WINGS EVALUATION TEST

STANDARD THREE - YEAR 2015

SCIENCE











003

Date:

NAME SCHOOL

1. People who can see things clearly have _____ eyesight.
(strong, weak, small)
2. People who can see things that are near only are _____ sighted (long, short, near)
3. The place where plants grow well is its _____
(home, habitat, garden)

Use the weather chart and answer questions 4-8.

Day	Weather	
	Morning	Afternoon
Monday		
Tuesday		
Wednesday		
Thursday		
Friday		

4. Which day was the best for washing clothes?
(Monday, Friday, Tuesday)
5. Which day did pupils carry umbrella when going to school?
(Monday, Wednesday, Friday)

6. Which day was sunny and calm in the morning?
(Monday, Tuesday, Friday)
7. How was the weather on Wednesday afternoon?
(windy, calm, rainy)
8. How many days did it rain?
(2, 3, 4)
9. A _____ coils itself when touched.
(chameleon, millipede, snail)
10. Animals found in the forest are called _____ animals.
(domestic, wild, tamed)
11. _____ is not a requirement for good health.
(sleep, exercise, sweets)
12. _____ is a plant that give us medicine.
(neem, cassava, carrot)
13. We eat the leaves of _____
(yams, sukuma wiki, sugarcane)
14. _____ can be eaten raw.
(maize, carrots, beans)
15. A child of your age should sleep at least _____ hours.
(6, 8, 10)
16. We wash our hands with soap and _____ (milk, juice, water)
17. This picture shows a _____ face.



(happy, smiling, crying)

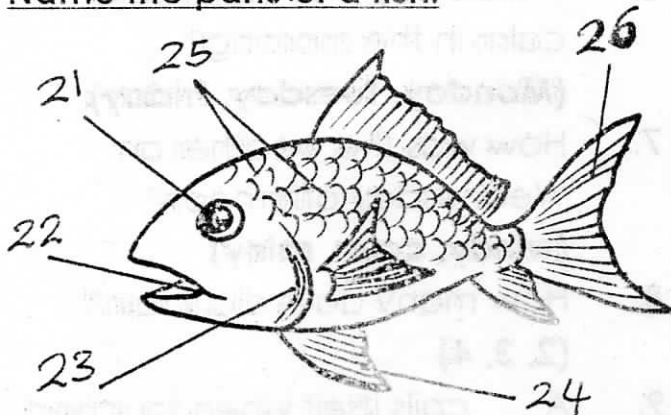
18. Personal items should not be

(washed, shared, bought)

19. Good food makes our body grow _____ (weak, big, slowly)

20. _____ soil has large particles.
(clay, loam, sand)

Name the parts of a fish.



21. _____ 22. _____

23. _____ 24. _____

25. _____ 26. _____

(tail, fin, gills, mouth, scales, eye)

27. A wasp protect itself by _____
(flying, stinging, running)

28. A _____ changes its colour.
(frog, tortoise, chameleon)

29. We get coffee from _____.
(stem, leaves, berries)

30. You should **not** make _____
gestures.
(good, funny, annoying)

31. We sprinkle _____ around the
hole of a pit latrine.
(water, ash, soil)

32. Cactus and acacia grow in
_____ area. (dry, wet, cool)

33. A cow moos but a dog _____
(barks, cries, mews)

34. _____ are made from sisal.
(bricks, ropes, tables)

35. _____ are common in rural
areas.
(toilets, latrines, water closets)

36. Birds kept for eggs are called

(domestic, poultry, birds)

The following animals move by.

37. Mosquito _____

38. Cockroach _____

39. Snake _____

40. Locust _____

(Hopping, Flying, Walking, Coiling)

41. When the sun is hot we sit
under a _____ (tree, car, hole)

42. The body of a fish is covered
with _____ (gills, scales, fins)

43. Plants make it's food through
the _____.

(roots, leaves, flower)

44. Farmers _____ crops during dry
season.

(grow, harvest, weed)

45. Doctors take care of our
_____ (rooms, health, stores)

46. Which one does **not** come
from plants _____?

(cotton, bread, meat)

47. Tortoise protect themselves by
hiding inside their _____.

(shell, hole, skin)

48. The sense organ for sight is _____
(eye, nose, hand)

49. Raw food should be _____
before eating.

(washed, cooked, smoked)

50. A tick has _____ legs.

(6, 3, 8)

TARGETER WINGS EVALUATION TEST

STANDARD THREE - YEAR 2015

READING / KUSOMA

003



Date:

NAME SCHOOL

READING

1. Read these words

- | | | | |
|---------------|---------------|---------------|---------------|
| 1. Island | 6. community | 11. diagram | 16. rubber |
| 2. Aeroplane | 7. religion | 12. latrine | 17. filtering |
| 3. Bracket | 8. exchange | 13. tractor | 18. weather |
| 4. correct | 9. drought | 14. mining | 19. donkey |
| 5. Activities | 10. groundnut | 15. guardians | 20. market |

2. Read these sentences.

21. A bird lives in a nest.
22. The dog broke the bone itself.
23. This river is very deep.
24. Our school compound is dirty.
25. The weather yesterday was wet.

KUSOMA

1. Soma maneno haya.

- | | | | |
|-------------|---------------|--------------|------------|
| 1. Chungwa | 6. tunaupenda | 11. spana | 16. farasi |
| 2. mjomba | 7. maktaba | 12. makanika | 17. afya |
| 3. maembe | 8. mbuni | 13. shikamoo | 18. Buibui |
| 4. magonjwa | 9. jekundu | 14. sukari | 19. kiwiko |
| 5. kunguni | 10. Askari | 15. mshazari | 20. ndevu |

2. Soma sentensi hizi.

21. Mtoto umleavyo ndivyo akuavyo.
22. Vioo vipya vimenunuliwa.
23. Mgonjwa atakunywa dawa.
24. Wino umemwagika.
25. Rangi ya mbingu ni samawati.

TARGETER WINGS EVALUATION TEST

STANDARD THREE - YEAR 2015

MATHEMATICS

003



Date:

NAME SCHOOL

1. $8964 + 9 =$

2. $843 + 758 =$

3.
$$\begin{array}{r} 560 \\ +342 \\ \hline \\ \hline \end{array}$$

4. $8 \times 2 \times 0 =$

5. $9 \times 5 =$

6.
$$\begin{array}{r} 12 \\ \times 3 \\ \hline \\ \hline \end{array}$$

7. **Add**
 $112 + 346 =$

8.
$$\begin{array}{r} 9781 \\ -3460 \\ \hline \\ \hline \end{array}$$

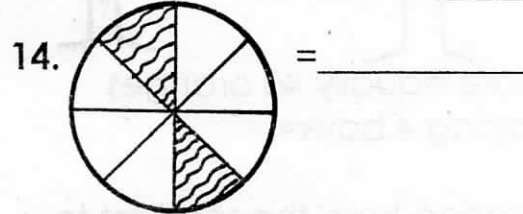
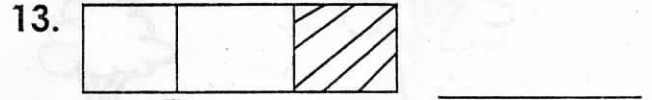
9.
$$\begin{array}{r} 874 \\ -323 \\ \hline \\ \hline \end{array}$$

10. $490 - 80 =$

11. Take away 72 from 136 =

12. What is the next number in the pattern?
7, 14, 21, 28, _____.

What fraction is not shaded?



15. $14 + 26 + 3 =$

16. $89 - 40 =$

17. A half of 20 = _____

18. $81 \div 9 =$

19. $64 \div 8 =$

20. $2 \overline{)16}$

21. 47 = _____ hundreds _____ tens _____ ones

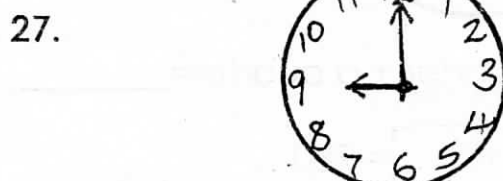
22. 3 thousands 0 hundreds 4 tens 1 ones = _____

23. $\frac{1}{4} + \frac{1}{4} + \frac{1}{4} =$

24. $\frac{6}{8} - \frac{3}{8} =$

25. A spider has 8 legs. How many legs do 5 spiders have _____?

26. 1 hour = _____ minutes.




_____ o'clock.
MATHEMATICS STD 3

28. The last month of the year is _____.

29. Multiply 7 by 9 = _____

30. Which is shorter?



31. Share equally 40 oranges among 4 boys = _____


32. Arrange from the smallest to the largest.

708, 729, 714, 790, 776 = _____

33. Write eight hundred and one in symbols _____.

34. Subtract 4811 from 5612 _____.

Name the shapes.

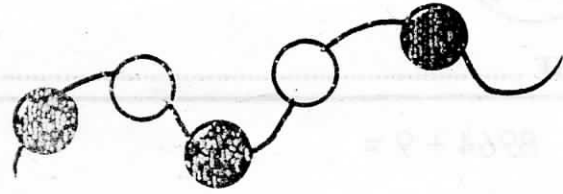


38. A quarter + a quarter = _____

39. $642 + \square = 780$

40. Write 900 in words _____

41. What fraction is shaded?



42. Which number comes after 70? _____

43. 24 months = _____ years.

44.
$$\begin{array}{r} 266 \\ +416 \\ \hline \end{array}$$

Fill in the missing numbers.

45. 920, 930, 940, 950, _____.

46. 264, 262, 260, _____.

47.
$$\begin{array}{r} 80 \\ -7 \\ \hline \end{array}$$

48. $56 - \square = 14$

49. $7 \times \square = 49$

50. $56 \div \square = 7$

TARGETER WINGS JARIBIO LA MTHANI



DARASA LA TATU - MWAKA 2015

003

KISWAHILI

Tarehe:

JINA SHULE

Andika idadi hizi kwa maneno.

1. Siku 65 _____
2. Vikombe 24 _____
3. Miti 32 _____
4. Watoto 87 _____
5. Ng'ombe 51 _____

Chagua jibu sahihi.

6. Maji _____ ni meusi.
(hizo, hayo)
7. Miti _____ ni yetu.
(huu, hii)
8. Jicho _____ ni jekundu.
(hili, hiki)
9. Mapera _____ ni mabichi.
(haya, hili)
10. mpira _____ ni mwangu.
(huu, hii)

Andika kwa umoja au wingi.

11. Miti mirefu _____
12. Mtoto mzuri _____
13. Mbuzi anakula _____

14. Matunda yameoza _____

15. Kichwa kinauma _____

Kamilisha sentensi zifuatazo.

16. Njoo _____ chakula.
(tukule, tule)

17. Mama anaenda _____
(yupi, wapi)

18. _____ hunyoa nywele.
(mvuvi, kinyozi, dobi)

19. _____ hutupatia asali.
(nyuki, mbuzi)

20. Umeshindaje? _____
(nzuri, njema, salama)

Tumia "na", "ta" au "li" kujaza nafasi.

21. Mwalimu a _____ funza sasa

22. Mgeni a _____ kuja kesho.

23. Watoto wa _____ funga shule jana.

24. Mkono wake u _____ umia jana.

25. Maji ya _____ kuja kesho.

Andika kinyume.

26. Ingia _____.

27. Mwanafunzi _____.

28. Chafu _____.

29. Tia _____.

30. Mrefu _____.

Kamilisha methali na vitendawili.

31. Mtoto wa nyoka ni _____.

32. Kikulacho ki nguoni _____.

33. Adui _____.

34. Akitolewa nje hufa _____.

35. Mzee mwenye mishale _____.

Andika maneno haya vizuri.

36. mbowi _____.

37. Imemfa _____.

38. riponi _____.

39. thidiha _____.

40. oredi _____.

Tumia "ya", "wa", "cha", "la" au "kwa".

41. Mtoto _____ baba.

42. Gari _____ moshi.

43. Pika _____ mafuta haya.

44. Chupa _____ maji.

45. Kiti _____ mwalimu.

Jaza pengo.

46. M__g__njwa.

47. Ch__ngw__.

48. M__ __mb__.

49. Mj__mb__.

50. Adh__h__r__.

TARGETER WINGS EVALUATION TEST

STANDARD THREE - YEAR 2015

ENGLISH

003



Date:

NAME SCHOOL

Use "am," "is," or "are".

1. I _____ a girl.
2. She _____ washing her clothes.
3. John and Peter _____ playing football.
4. They _____ watching television.
5. He _____ a good singer.

Write in words.

6. 48 _____
7. 170 _____
8. 369 _____
9. 89 _____
10. 515 _____

Choose the odd one out.

11. John, Peter, James, Andrew, Mary _____
12. Cup, Plate, Chalk, Spoon, Fork _____
13. Radio, television, chapati, computer _____

14. Bicycle, Jembe, Panga, Spade, axe _____
15. Apple, onion, orange, mango, pawpaw. _____

Write in past tense.

16. Teach _____
17. Buy _____
18. Catch _____
19. Pay _____
20. Sit _____

Use "there is" or "there are" to fill in the gaps.

21. _____ no tea in the cup.
22. _____ two birds in the cage.
23. _____ many girls in the class.
24. _____ no space for all of you.

25. _____ children outside.

Write in plural.

26. This is an egg.

27. That is an ox.

28. I am going

29. This is knife is sharp.

30. Donkey _____.

Write their homes.

31. Cow _____

32. Sheep _____

33. Lion _____

34. Rabbit _____

35. Pig _____

Add - ing

36. Talk _____

37. Take _____

38. cry _____

39. sleep _____

40. walk _____

Write in capital letters.

41. clothes _____

42. sentence _____

43. honey _____

44. table _____

45. feather _____

Add "er" or "est" to the word in bracket to fill in the gaps.

46. Mary is the _____ girl in our class **(tall)**

47. John is _____ than James **(small)**

48. This tree is _____ than that one. **(big)**

49. Elephant is the _____ wild animal. **(fat)**

50. A lizard is _____ than a crocodile. **(thin)**

TARGETER WINGS EVALUATION TEST

STANDARD THREE - YEAR 2015

SOCIAL STUDIES / C.R.E



003

Date:

NAME SCHOOL


1. The sun sets in the _____.
(East, South, West)
2. The needle of a compass always point _____.
(South, North, East)
3. _____ is a happy occasion.
(funeral, birthday, burial)
4. We record weather using _____.
(charts, symbols, signs)
5. There are _____ seasons.
(2, 4, 3)
6. Rivers that have water throughout the year are called _____ rivers.
(seasonal, permanent, always)
7. Buying and selling of things is called _____.
(stealing, trading, spending)
8. Street children have no _____.
(homes, parents)
9. _____ gives us light and warmth.
(rain, clouds, sun)
10. Fish lives in _____.
(air, water, soil)
11. We get timber from _____.
(trees, lake, air)
12. Winnowing is done when the weather is _____.
(windy, sunny, calm)
13. Too much rain causes _____.
(floods, drought, famine)
14. The work of the police is to maintain law and _____.
(order, thieves, peace)

15. _____ is the coldest month of the year.
(June, September, July)
16. The second president of Kenya was _____.
(Uhuru, Moi, Kibaki)
17. Side of the hills are called _____.
(valley, slopes, forest)
18. This is a _____




(hut, manyatta, house)

19. Watering of crops during dry season is known as _____.
(planting, irrigation, harvesting)
20. Exchange of goods for goods is called _____ trade.
(sell, cash, barter)
21. _____ is the head of a division.
(D.O, D.C, Chief)
22. People live and work happily when there is _____.
(war, peace, anger)
23. These are _____ they grow in swamp.



(trees, reeds, grass)

24. The weather is _____



(windy, rainy, calm)

25. Police arrest people who _____ the law (**obey, respect, disobey**)
26. People who worship together form a _____ community. (**farming, religious, trading**)
27. When it is hot we wear _____ clothes. (**light, heavy, dull**)
28. Which one of the following is an element of weather?
_____. (**cloudy, water, rain**)
29. White colour in our flag stand for _____. (**people, vegetation, peace**)
30. A _____ is a physical feature. (**river, soil, water**)

C.R.E

31. God created man on the _____ day. (**7th, 3rd, 6th**)
32. _____ were created on the 3rd day. (**animals, fish, plants**)
33. Cain killed _____. (**Abei, John, James**)
34. Jesus died on the _____. (**tree, cross, road**)
35. When Jesus was born he was laid in a _____. (**trough, bucket, manger**)
36. _____ is the first book in the new testament: (**Genesis, Mathew, Revelation**)
37. Kamba call their God _____. (**Ngai, Mulungu, Tororok**)
38. Another name for Tabitha is _____. (**Mary, Elizabeth, Dorcas**)

39. The name Jesus means _____. (**killer, Emmanuel, Saviour**)
40. We should _____ for God's creation. (**care, kill, destroy**)
41. The new testament has _____ books. (**39, 27, 66**)
42. The first disciples of Jesus were _____. (**farmers, businessmen, fishermen**)
43. Zaccheaus was a _____ collector. (**tax, stone, pins**)
44. The disciples received the holy spirit on the day of _____. (**sabbath, pentcost, sunday**)
45. _____ was the father of Joseph. (**Elikana, Abraham, Jacob**)
46. Worshipping is showing _____ to God. (**respect, concern, hatred**)
47. _____ built an ark. (**Moses, Joshua, Noah**)
48. Jesus was tempted _____ times by the devil. (**3, 2, 4**)
49. Jesus stayed in the wilderness for _____ days and night. (**20, 30, 40**)
50. When you are given something you should say _____. (**sorry, thank you, please**)