

TARGETER WINGS EVALUATION TEST



STANDARD TWO - YEAR 2015

003


SOCIAL STUDIES & C.R.E

Date:

NAME SCHOOL

- _____ helps us to carry things.
(camels, lions, cats)
- _____ is my mother's sister.
(grandmother, uncle, aunt)
- We must cook _____ before eating.
(maize, stones, sugarcane)
- Black, red, white, green. These are colours of our national _____.
(rainbow, hut, flag)
- A cow's meat is called _____.
(beef, chicken, pork)
- Social studies is the subject where we study our _____.
(tenses, health, counting)
- We keep _____ at home.
(rats, cats, hares)

Name these physical features.



- _____ (hill, dam, forest, valley)
- Every child has a right to _____.
(work, fight, play)
- People should cross the road at the _____ crossing.
(animal, high, zebra)

- The wall of a hut is made of _____.
(grass, stones, mud)

Name two buildings in your school.

- _____ 15. _____
- Playing with my friends make me _____.
(healthy, sick, unhealthy)
- The children of my aunt are my _____.
(sisters, uncles, cousins)
- We wear _____ when going to school.
(hots, skirts, uniform)
- Tools like axe, spade, panga and hammer are kept in the _____.
(cupboard, fridge, store)

- A _____ is a sad ceremony.
(wedding, burial, birthday)
- Today is 12th December. We are celebrating _____.
(Christmas, Moi day, Jamhuri day)

- We raise the flag on _____.
(Tuesday, Friday, Thursday)
- This tool is used for _____.




- _____ (cutting, slashing, digging)
- "Oh God of all _____."
(army, land, creation)

25. People walking along the road are called _____.
(**motorist, pedestrians, passengers**)
26. We put all our rubbish in the _____ in class.
(**desk, plate, dustbin**)
27. My father flies aeroplanes. He is a _____.
(**driver, motorist, pilot**)
28. We must _____ of school property.
(**throw, take care, burn**)
29. _____ is the person who takes care of our school at night.
(**headteacher, cook, watchman**)
30. A _____ eats grass.
(**cow, cat, lion**)

C.R.E

31. I thank God for giving me _____ to hear.
(**eyes, ears, hands**)
32. Christians pray in a _____.



(**temple, mosque, church**)

33. "Give us this day our daily _____"
(**road, bread, room**)
34. The greatest gift God has given us is _____.
(**John, Jesus, Rain**)
35. Jesus fed 5000 people with _____ loaves of bread and 2 fish.
(**2, 7, 5**)
36. We celebrate the death and resurrection of Jesus during _____.
(**Christmas, Easter, New year**)

37. A _____ is a person who lives near us.
(**stranger, neighbour, relative**)
38. Children should _____ their parents.
(**obey, abuse, disrespect**)
39. The first book in the Bible is _____.
(**Genesis, Exodus, Mathew**)
40. The New Testament has _____ books. (**39, 27, 66**)
41. _____ is happy when we take care of the environment.
(**God, Ministers, satan**)
42. We should _____ to our teachers at school.
(**argue, listen, disobey,)**)
43. Say _____ when someone gives you something.
(**sorry, thank you, excuse me**).
44. We should read the Bible _____.
(**everyday, rarely, never**)
45. A neighbour is a _____ from God.
(**blessing, curse**)
46. My _____ shares things with me in school.
(**parents, strangers, schoolmates**)

Draw four things that God created.

47.
48.
49.
50.

TARGETER WINGS EVALUATION TEST



STANDARD TWO- YEAR 2015

READING/KUSOMA

003

NAME SCHOOL Date:

READING

1. Read the following words.

- | | | | |
|------------|------------|--------------|---------------|
| 1. counter | 6. work | 11. beyond | 16. flour |
| 2. market | 7. valley | 12. beside | 17. touch |
| 3. square | 8. happily | 13. firewood | 18. shoulders |
| 4. buffalo | 9. field | 14. heavy | 19. heel |
| 5. clothes | 10. colour | 15. shopping | 20. truck |

2. Read the following sentences.

21. Show me thirty rabbits.
22. I saw her yesterday.
23. What are you doing?
24. I want to buy onions.
25. They must go home now.

KUSOMA

1. Soma maneno haya

- | | | | |
|-------------|------------|------------|------------|
| 1. sabuni | 6. nanasi | 11. wembe | 16. ongea |
| 2. ufagio | 7. blauzi | 12. nyota | 17. chagua |
| 3. rangi | 8. bendera | 13. dukani | 18. mbolea |
| 4. Alhamisi | 9. nguruwe | 14. njugu | 19. umoja |
| 5. Kondoo | 10. pure | 15. tumbo | 20. msitu |

2. Soma sentensi hizi.

21. Mfoto wake anatembea.
22. Je, utakunywa nini?
23. Haraka haraka haina baraka.
24. Bendera inapepea.
25. Mvuvi anavua samaki.

TARGETER WINGS JARIBIO LA MTHANI



DARASA LA PILI - MWAKA 2015

003

KISWAHILI

Tarehe:

JINA

SHULE

IMLA

1. _____
2. _____
3. _____
4. _____
5. _____

Jaza herufi zilizoachwa.

6. p__z__a
7. dak__ar__
8. k__ch__
9. mb__g__
10. ch__mb__

Tumia "hiki", "hili", "hii" au

"huu".

11. _____ni kiatu kipyua.
12. Mti_____ni mrefu.
13. _____ni mikoba yake.
14. Jani_____limekauka.
15. Sahani_____imevunjika.

Andika kinyume.

16. vaa _____
17. funika _____
18. mfupi _____
19. shuka _____
20. meza _____

Kanusha.

21. Soma _____
22. Anacheka_____
23. Mtoto analia_____
24. Baba alifagia_____

Andika wingi.

25. ndizi _____
26. kalamu _____
27. mmea _____
28. chumba _____
29. shamba _____
30. ua _____

Tarakimu.

31. Sabini na tisa

32. Mia mbili na hamsini

33. 60

34. 51

Kamilisha herufi za alfabeti.

35. a, b, _____, _____, dh, e, _____.

36. l, _____, _____, _____, m, n, ng'.

37. r, s, _____, _____, u, v.

Kamilisha methali.

38. Aliye juu mngoje _____


39. Dalili ya mvua ni _____

40. Akili ni _____

(haiozi, mali, mawingu,
chini)

Andika jina la umbo.

41.

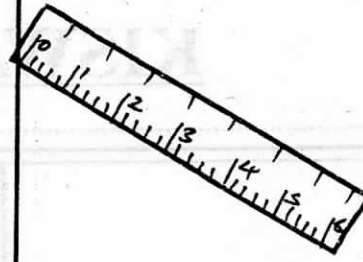


42.

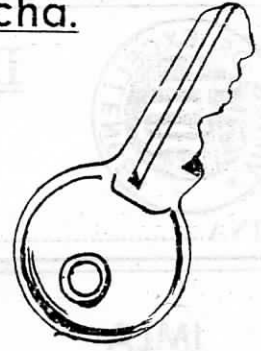


Andika jina la picha.

43.



44.



45.



Kamilisha sentensi.

46. Niko katika darasa la _____

47. Wasichana huvaa _____
(rinda, kaptura, suruali)

48. Mtoto wa ng'ombe ni _____
(kifaranga, ndama)

49. Unga wa mahindi hupika

(chapati, ugali,
maharagwe)

50. Sare ni nguo za _____
(kulala, shule, kutembea)

TARGETER WINGS EVALUATION TEST



STANDARD TWO - YEAR 2015

003

ENGLISH

Date:

NAME SCHOOL

DICTATION.

1. _____
2. _____
3. _____
4. _____
5. _____

Fill in the gaps

6. porr__ag__
7. r__v__r
8. c__rt
9. p__nk
10. st__l

Use "a" or "an"

11. I saw _____ elephant.
12. This is _____ green mat.
13. Use _____ clean cup.

Write in singular.

14. sheep _____

15. children _____

16. dishes _____

17. shoes _____

18. dresses _____

Match words.

19. Book _____ brush

20. match _____ bag

21. tooth _____ mat

22. hand _____ shop

23. table _____ box

Draw these items

24. stool 25. bag

26. blackboard

27. banana

Write the opposite.?

28. tall _____

29. inside _____

30. near _____

31. over _____

(short, under, far, between,
small, outside)

Use "is", "am", "are"

32. He _____ coming to town.

33. This _____ a bad story.

34. _____ the visitors here?

35. I _____ not well.

Write these numbers in words.

36. 102 _____

37. 43 _____

Arrange in ABC order.

38. Elephant, dog, cat, ass

39. Cow, sheep, hen, goat

Write in past tense.

40. is _____

41. eat _____

42. play _____

43. cut _____

44. need _____

Use "to", "two", or "too".

45. It is _____ hot

46. My _____ brothers are
crying.

47. I want _____ clean my
room.

Complete these sentences.

48. He sells meat. He is a _____
(mason, teacher, butcher)

49. I sleep on _____ bed.
(a, an, is)

50. A _____ barks.
(cow, cat, dog)

TARGETER WINGS EVALUATION TEST

STANDARD TWO - YEAR 2015

003

MATHEMATICS

Date:

NAME SCHOOL

Fill in the numbers.

1. $24 + 22 =$ _____

2. $29 + 10 =$ _____

3. $45 - 35 =$ _____

4. 93
 $+15$

Write in words or figures.

5. 200 _____

6. 120 _____

7. forty nine _____

8. thirty one _____

9. $56 - 14 =$ _____

10. $45 - 3 =$ _____

11. $\square + 12 = 14$

12. 3 girls have _____ lips.

13. $50 + 4 + 10 =$ _____

14. $106 =$ _____ hundred _____ tens
_____ ones.

15. $293 =$ _____ hundred _____ tens
_____ ones

16. $17 - \square = 10$


17. $\square + 3 = 7$

18. A cat has four legs. How many legs do three cats have? _____


Shopping list



Geisha
soap
sh 20



sweet
sh 5



pencil
sh 7



egg
sh 10

19. Mary bought a **sweet** and an **egg**. How much money did she pay? _____

20. I bought **soap** and **two sweets**. How much money did I pay? _____

21. What will you pay, if you buy **two** pencils? _____

22. $127 - 107 =$

Fill in the missing numbers.

23. 101, _____, _____, _____, 105, 106,
107.

24. 100, 200, 300, _____, _____.

25. Subtract 5 from 75 =

26. April is the _____ month of
the year.
(first, last, fourth)

27. 7 tens + 3 ones = _____

28. Which one is bigger
608 or 806? _____.

29. $17 + 52 =$ _____

30. Add 20 to 60 = _____

31. 2 weeks = _____ days

32.
$$\begin{array}{r} 105 \\ +430 \\ \hline \end{array}$$

33.
$$\begin{array}{r} 905 \\ -402 \\ \hline \end{array}$$

34.
$$\begin{array}{r} 89 \\ -42 \\ \hline \end{array}$$

35. Two boys have _____ toes.

36.
$$\begin{array}{r} 968 \\ -43 \\ \hline \end{array}$$

37.
$$\begin{array}{r} 635 \\ -234 \\ \hline \end{array}$$


38.
$$\begin{array}{r} 94 \\ -32 \\ \hline \end{array}$$

39. $56 - 33 =$ _____

40. Add one hundred and
thirteen to sixteen.

41. January, February, _____,
April, _____, June.

42. It is _____ o'clock.



43. Write the symbol for ninety
eight _____.

44. There are 48 pupils in a class.
23 are boys. How many girls
are there?

45. Draw a circle.

46. The last month of the year is

**(December, January,
October)**

47. The door has a _____ shape.
(square, rectangle, oval)

48. - 7 = 10

49. $25 + 33 =$ _____

50.
$$\begin{array}{r} 82 \\ +14 \\ \hline \end{array}$$

TARGETER WINGS EVALUATION TEST



STANDARD TWO - YEAR 2015

003











SCIENCE

Date:

NAME SCHOOL

- I cannot see the sun. It must be a _____ day.
(windy, sunny, cloudy)
- Ripe bananas are _____ in colour. (white, green, yellow)

Use the weather chart and answer questions 3-7.

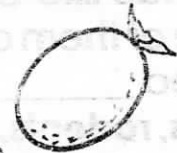
Day	Weather	
	Morning	Afternoon
Monday		
Tuesday		
Wednesday		
Thursday		
Friday		

- The weather on Wednesday afternoon was _____.
(cloudy, sunny, windy)
- The **best** day to wash clothes was _____.
(Monday, Thursday, Wednesday)
- The weather was _____ on Thursday morning.
(sunny, cloudy, rainy)
- Which day was calm in the morning _____.
(Monday, Wednesday, Friday)
- It was rainy on _____ afternoon.
(Tuesday, Thursday, Monday)

- If you don't have toothpaste you can use _____ to clean your teeth. (oil, soap, salt)
- We can _____ air.
(see, feel, touch)
- We brush our teeth after _____.
(breakfast, dinner, every meal)

Name two things for cleaning our teeth.

- _____ 12. _____
- _____ is the sense organ for hearing. (eye, mouth, ear)
- Sweets and sugary things will spoil our _____.
(tongue, teeth, taste)
- There is _____ in this balloon.



- (milk, water, air)
- We eat the _____ of cabbage.
(stem, leaves, fruit)
- We use water for _____.
(fighting, writing, cooking)
- Sun, fire, torch, moon are sources of _____.
(air, light, sound)
- This leaf is likely to be a _____ leaf.



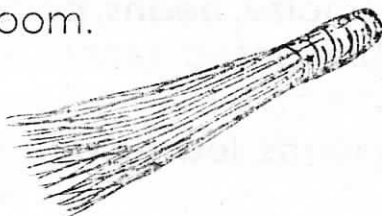
- (maize, beans, potato)
- Unwanted plants in the farm are called _____.
(seeds, leaves, weeds)

21. Rounded wheels move _____ than rectangular wheels.
(slowly, clearly, easily)
22. A handcart has _____ wheels
(2, 4, 3)
23. A young plant is called a _____
(plant, tree, seedling)
24. The body of a bird is covered with _____.
(scales, hair, feathers)
25. When a seed grows, we say it is _____.
(ripening, germinating)
26. We care for plants by _____ them.
(cutting, burning, watering)
27. Draw the main source of light
28. When we stand in front of a light our bodies will make a _____.
(sound, light, shadow)
29. Animals like cats that we take care of them at home are called _____.
(pets, rodents, pests)
30. A _____ is a harmful animal.
(goat, snake, rabbit)

Draw these items.

31. dustbin 32. toothbrush

33. We plant seeds in the _____.
(soil, water, air)
34. _____ are found inside the fruit
(roots, seeds, flowers)
35. We use this _____ to sweep our classroom.



- (mop, duster, broom)
36. Weather keeps _____ from time to time.
(raining, changing, shining)
37. On rainy day we wear _____ on our feet.
(gumboots, slippers, sandals)
38. Lion, giraffe, elephant and hyena are _____ animals.
(domestic, wild, tame)
39. _____ is the best for building.
(loam, clay, sand)
40. When we put modelled items under the sun, they will _____.
(shine, crack, smell)
41. Too much rain will cause _____.
(drought, weather, floods)
42. Jane is wearing a vest. It must be a _____ day.
(hot, cold, rainy)
43. Bees give us honey and _____.
(milk, meat, wax)
44. _____ water has no germs in it.
(boiled, muddy, oiled)
45. If you do not have a toothbrush you can use a _____ to clean your teeth.
(cotton wool, handkerchief, chewed stick)
46. We eat the _____ of a tomato. (stem, fruit, leaves)
47. People who cannot hear are _____ (blind, dumb, deaf)
48. We eat the _____ of this plant.



- (root, leaf, stem)
49. _____ is mixed with water to make mud.
(flour, soil, air)
50. A _____ is a useful animal.
(rat, tick, dog)