

INTERCOUNTRIES JOINT EVALUATION TEST

STANDARD THREE 2015

MARKING SCHEME

OPTIMAL  
002

ENGLISH	SCIENCE	MATH	KISWAHILI	SOCIAL STUDIES	CRE
1. Animal	1. energy	1. four hundred and four	1. Seremala	1. East	1.gift
2. Nut,corn&buds	2. strong	2. 249,259,267,278	2. mwanafunzi	2. Headteacher	2.help
3. Among trees	3. Ear	3. tens	3. Dawati	3. Wind	3.2
4. False	4. hyena	4. third	4. daftari	4. North	4.7 <sup>th</sup>
5. Stores food	5. round	5. 652	5. Kalamu	5. North	5.27
6. Big	6. cloudy	6. 211	6. Pembe tatu	6. West	6.genesis
7. Girl	7. hopping	7. 100	7. mfringo	7. East	7.2
8. Walk	8. flying	8. 755	8. Duara dofu	8. South	8.God
9. Bitter	9. swimming	9. ¼	9. mstatili	9. nucleus	9. ancestors
10. tall		10. 3 o'clock	10. Wangu	10. Extended	10.christians
11. Home	10. walking	11. 45	11. Yule	11. Road	11. evil
12. Reading	11. raining	12. 58	12. Yao	12. Sun, rain	12.Jacob
13. Pencil	12. blindnes	13. 18	13. Chake	13. Wind, clouds	13.Saul
14. Cow	13. germs	14. 8	14. Hluu	14. Plateau	14.Daniel
15. Ambulance	14. poorhaelth	15. 102	15. Lia	15. 4	15.wine
16. Ate	15. relax	16. 200	16. Ketu	16. Physical	16.sabath
17. Caught	16. Farming	17. 737	17. Neda	17. -permanent	17.12
18. Gave	17. Flies	18. ¼	18. Amka	18. -floods	18. -Jordan
19. Flew	18. After	19. 6	19. Panda	19. camel donkey	19. census
20. went	19. Sound	20. 450l.	20. Hawa ni wasichana	20. Donkey camel	20.Body
21. An	20. mirror	21. ÷	21. Hivi ni vitabu	21. Clean	21.Enkai
22. A	21. sleeping	22. 5203	22. Hizi ni meza	22. Dry	22.fairly
23. A	22. rainy& windy	23. 10	23. Hii ni miguu	23. Cousins	23.David
24. An	23. monday	24. 865	24. Watoto wanalia	24. Food/clothing	24.December
25. An	24. Wenesday&friday	25. 35	25. Viti vimevunjika	25. Shelter clothing	25.disciples
26. Women	25. optician	26. 4	26. Mia nne sabim na sita	26. Shelter/food/cloth	26. __
27. Ladies	26. Fly	27. 25	27. 983	27. Left	27. __
28. Geese	27. weeds	28. 5000	28. Mia moja tisainii na tano	28. Transport	28. __
29. Baby	28. rubbish pit	29. 14	28. Mia saba hamsini nameja	28. Reeds	29.Yahweh
30. Boxes	29. stem	30. 6	30. 237	30. Father	30.water
31. Have	30. hand	31. -	31. maji	31. Sunny	31.Canaan
32. Has	31. clay	32. 3	32. kalamu	32. Warm	32.patriachs
33. Has	32. sugary	33. 4	33. shule	33. Pastoralists	33.Samuel
34. Have	33. water	34. 18	34. mvulaña	34. Police	34.love
35. Have	34. weather symbol	35. 91	35. darasa	35. Zebra	35.God with us
36. Sister	35. house	36. ½	36. Haongei	36. Buy	36.trees
37. Taste	36. mosquitoes	37. 24	37. hanameno	37. Sell	37.blind
38. pilot	37. nose	38. rectangle	38. haoni	38. Pilots	38.resurrection
39. meow	38. spectacles	39. circle	39. hatembe	39. Mondays	39.Bible
40. Kitchen	39. see	40. 40	40. hasikii	40. Dry	40.pentacost
41. Fly plane	40. dry	41. July	41. ulimi	41. Rivers	41.wisemen
42. Treat people	41. 5	42. 120	42. vidole	42. Thermometer	42.prayers
43. Preach in church	42. swimming	43. 63	43. kisigino	43. -	43.Joseph
44. Makes furniture	43. wind	44. 8	44. barabara	44. -	44.faiith
45. Cook food	44. 6	45. 8	45	45. West	45.Sinai
46. Is	45. balanced	46. ½	46. shuleimani	46. Uses	46.Jordan
47. Was	46. rake	47. 50	47. la	47. Home	47.
48. Seen	47. Tap	48. 60	48. mganga	48. Timber	48.Jesus
49. Beautiful	48. hot	49. 2/5	49. Kuku meusi	49. Firewood	49.obey
50. have	49. wash hand short	50. Atieno	50. hakubahatika	50. sun	50.3

**OPTIMAL INTERCOUNTIES JOINT  
EVALUATION TEST  
STANDARD THREE  
SCIENCE**

NAME.....SCHOOL.....DATE.....

1. Food give us \_\_\_\_\_  
(sickness, energy, sleep)
2. Exercise makes us \_\_\_\_\_  
(strong, weak, tall)
3. The part of the body that has the sense of hearing is \_\_\_\_\_  
(eye, ear, nose)
4. Which one of the following is a wild animal? \_\_\_\_\_  
(sheep, hyena, goat)
5. \_\_\_\_\_ wheels make things move easily. (Oval, Rectangular, Round)
6. The weather is \_\_\_\_\_



(cloudy, windy, rainy)

Match the animals with their way of movement


- |         |          |
|---------|----------|
| 7. Flea | walking  |
| 8. Bee  | swimming |
| 9. Fish | flying   |
| 10. Man | hopping  |
11. Farmers plant crops during the \_\_\_\_\_ season.  
(cloudy, rainy, dry)
  12. Looking at the sun directly can cause \_\_\_\_\_  
(long sight, blindness, good eye sight)
  13. Dirty water contains \_\_\_\_\_ which cause diseases.

14. A person who is always sick is said to be in \_\_\_\_\_  
(good health, poor health, strong)
15. Rest makes us \_\_\_\_\_  
(relax, sleep, sick)
16. Loam soil is good for \_\_\_\_\_  
(modeling, farming, eating)
17. We should clean our toilets in order to keep \_\_\_\_\_ away  
(birds, flies, mosquitoes)
18. We should brush our teeth \_\_\_\_\_ meal.  
(before, after, when)
19. \_\_\_\_\_ travels in all directions (Light, Sound, Water)
20. \_\_\_\_\_ reflects the light. (Wall, Mirror, Combs)
21. Animals protect themselves in the following ways a part from \_\_\_\_\_ (coiling, running, biting, sleeping)

Day	Morning	Afternoon
Monday		
Tuesday		
Wednesday		
Thursday		
Friday		

22. Wednesday was \_\_\_\_\_  
(windy and cloudy, sunny and rainy, rainy and windy)
23. On which day did it rain in the afternoon? \_\_\_\_\_  
(Tuesday, Monday, Wednesday)

24. Which two days, were windy? \_\_\_\_\_ (Monday and Friday, Wednesday and Friday, Wednesday and Friday)
25. A doctor who treat eyes is called \_\_\_\_\_ (optician, dentist, surgeon)
26. Birds, bees and butterflies have one thing in common. It is that they all \_\_\_\_\_ (swim, fly, walk)
27. \_\_\_\_\_ are plants that grow where they are not wanted. (Maize, Weeds, Vegetables)
28. All rubbish picked up in the compound should be thrown in the \_\_\_\_\_ (water tank, corner, rubbish pit)
29. We eat the \_\_\_\_\_ of the sugar cane. (leaves, stem, roots)
30. We can share the following items except \_\_\_\_\_ (books, handkerchief, food)
31. \_\_\_\_\_ soil is used for modelling. (Sandy, Clay, Loam)
32. \_\_\_\_\_ food are bad for our teeth. (Salty, Sweet, Sugary)
33. All plants needs \_\_\_\_\_ to grow. (food, water, wind)
34. \_\_\_\_\_ is used to show how weather is. (Weather record, Weather symbol)
35. Which of the following is not a weather symbol? \_\_\_\_\_ (House, Clouds, Sun)
36. Malaria is caused by \_\_\_\_\_ (housefly, birds, mosquitoes)
37. Walhome was walking near a


- hotel. He could tell that they were cooking madazi. Which sense organ did he use \_\_\_\_\_ (nose, eye, ear)
38. People who have bad eyes sight wear \_\_\_\_\_ (goggles, glasses, spectacles)
39. Sight is the ability to \_\_\_\_\_ (hear, see, smell)
40. When there is no rain we say it is a \_\_\_\_\_ season. (wet, cold, dry)
41. We have \_\_\_\_\_ sense organs. (5, 4, 6)
42. The animal drawn here move by  \_\_\_\_\_ (walking, flying, swimming)
43. \_\_\_\_\_ is the moving air. (Rain, Wind, Weather)
44. A true insect has \_\_\_\_\_ legs. (3, 8, 6)
45. We should eat a \_\_\_\_\_ diet. (balanced, protein, equal)
46. Which one of these tools is used to clean school compound? \_\_\_\_\_ (Jembe, Rake, Panga)
47. Which of the following is not a source of water? \_\_\_\_\_ (Tap, Bore hole, Well)
48. People sweat on a \_\_\_\_\_ day. (wet, hot, cold)
49. After using a toilet one must \_\_\_\_\_ (wash face, wash legs, wash hands)
50. We should keep our finger nails \_\_\_\_\_ clean, long, short)



OPTIMAL  
002

# OPTIMAL INTERCOUNTIES JOINT EVALUATION TEST STANDARD THREE MATHEMATICS

2015  
{3}

NAME \_\_\_\_\_ SCHOOL \_\_\_\_\_ DATE \_\_\_\_\_

1. What is 404 written in words? \_\_\_\_\_  
(Four hundred and Fifty, Four hundred and Four, Four hundred and Forty)
2. Order the numbers below from the smallest to the greatest. 267, 259, 278, 249, \_\_\_\_\_
3. What is the place value of 3 in 2031? \_\_\_\_\_  
(tens, hundreds, ones, thousands)
4. Wednesday is the \_\_\_\_\_ day of the week. (second, fifth, fourth, third)
5. What is the next number after 651? \_\_\_\_\_ (662, 650, 652, 653)
6.  $576 - 365 =$  \_\_\_\_\_  
(941, 211, 311, 121)
7. Add; 47 to 53 = \_\_\_\_\_
8.  $238 + 517 =$  \_\_\_\_\_
9. What is  $\frac{1}{4} + \frac{2}{4} =$  \_\_\_\_\_ ( $\frac{3}{8}$ ,  $\frac{3}{4}$ ,  $\frac{4}{4}$ )
10. What is time shown in the clock face?  
  
(12 o'clock, 3 o'clock)
11.  $5 \times 9 =$  \_\_\_\_\_  
(35, 63, 54, 45)
12. A Sunday school class has 31 boys and 27 girls. How many children were there

- altogether? \_\_\_\_\_  
(68, 58, 48, 4)
13. What is the next number in 10, 12, 14, 16, \_\_\_\_\_  
(13, 19, 18, 17)
14. 
15. Peter had 127 oranges. He gave out 25 oranges to his friend John. How many orange was Peter left with?  
(102, 112, 97, 100)
16. Kamau had 47 cows. Ole Kiyapi had 153 cows. How many cows do they have altogether? \_\_\_\_\_  
(202, 300, 200, 100)
17.  $700 + 30 + 7 =$  \_\_\_\_\_  
(7307, 737, 637, 837)
18. What is the fraction of the shaded?  
  
( $\frac{1}{2}$ ,  $\frac{1}{3}$ ,  $\frac{1}{4}$ ,  $\frac{2}{3}$ )
19. 9 boys shared 54 oranges equally. How many oranges did each boy get?  
(7, 5, 6, 8)
20. In which number is the digit 5 is in hundreds?  
(3051, 4501, 5021, 2345)
21. Put a sign to make the sum correct  
 $72, \underline{\hspace{2cm}} 9 = 8$   
( $\times$ ,  $+$ ,  $\div$ ,  $-$ )

22. Write in figures; five thousands, two hundred and three. \_\_\_\_\_

(5023, 5203, 523, 5302)

23. How many groups of tens are there in 100? \_\_\_\_\_

(9, 10, 8, 100)

24. What is 8 hundred, 6 tens and 5 ones? \_\_\_\_\_

(856, 685, 865)

25. Fill in the blank space.

$$\underline{\quad} - 15 = 20$$

(40, 35, 25, 45)

26. 6 pencils cost 32 shillings.

How much does one pencil cost? \_\_\_\_\_

(3, 6, 4, 5)

27. Kanini bought a toy costing shs 25. She gave the shopkeeper shs 50 note. How much change did she get? \_\_\_\_\_

(35, 45, 25, 15)

28. Add: 2000 to 3000 = \_\_\_\_\_

(4000, 6000, 5000, 23000)

29. How many days are there in 2 weeks? \_\_\_\_\_

(7, 14, 16, 12)


30. \_\_\_\_\_ x 7 = 42

(3702, 5637, 4637)

32.  $27 \div 9 =$  \_\_\_\_\_

(4, 5, 3, 6)

33. How many triangles are there in the figure below? \_\_\_\_\_



(3, 4, 5, 6)

34. Half of 36 is \_\_\_\_\_

(9, 4, 12, 18)

35. How many days are there in April, May and June? \_\_\_\_\_

(90, 91, 92, 93)


36. Which one is bigger  $\frac{1}{4}$  and  $\frac{1}{2}$ ? \_\_\_\_\_

37. How many legs do 6 cows have? Name the shapes.

38.



39.



40. A pencil cost 5 shillings. What will be the total cost for 8 such pencils? \_\_\_\_\_

(30, 20, 40, 60)

41. \_\_\_\_\_ is the seventh month of the year.

(August, June, July, September)

42. Papa Shirandura planted 155 seedlings 35 seedlings did not grow. How many seedlings grew? \_\_\_\_\_

(130, 120, 140, 115)

43. Multiply 7 by 9 = \_\_\_\_\_

(35, 36, 40)

44. Divide: 88 by 11 = \_\_\_\_\_

(7, 8, 9, 10)

45. How many months of the year have 31 days? \_\_\_\_\_

(5, 7, 8, 12)

46. Which of the following fractions shows a half? \_\_\_\_\_

( $\frac{1}{8}$ ,  $\frac{1}{4}$ ,  $\frac{1}{2}$ ,  $\frac{1}{5}$ )

47. Mary had 80 shillings. She lost 30 shillings. How much money was she left with? \_\_\_\_\_

(40, 30, 50, 60)

48. How many minutes are there in one hour? \_\_\_\_\_

(30, 120, 90, 60)

49. What is  $\frac{4}{5} - \frac{2}{5} =$  \_\_\_\_\_?

( $\frac{6}{10}$ ,  $\frac{2}{10}$ ,  $\frac{2}{5}$ ,  $\frac{3}{5}$ )

50. Atieno has 1260 sacks of beans while Achieng has 465 sacks of beans and 620 sacks of maize. Who has many sacks than the other?

**OPTIMAL INTERCOUNTIES JOINT  
EVALUATION TEST  
STANDARD THREE  
ENGLISH**

NAME.....SCHOOL.....DATE.....

Read the following passage and answer the questions that follows.

The squirrel is a bright little animal. It has a reddish brown coat, two pointed ears and a long bushy tail. It feed on nuts, corn and buds. It hold a nut or a corn with its hands and split it in half. Sometimes it makes a large hole on a nut using its large sharp teeth. Most of the time the squirrel live among the trees where it builds a nest like a bird. It is not easy to catch a squirrel because it leaps from branch to branch and runs very fast along the ground. The squirrel is a very cleaver animal, because it stores food for the bad season.

1. The squirrel is a bright little \_\_\_\_\_.
2. The squirrel feed on \_\_\_\_\_ and \_\_\_\_\_.

3. Where does the squirrel live? It lives \_\_\_\_\_

Answer true or false.

4. It is very easy to catch a squirrel. \_\_\_\_\_

5. The squirrel is a cleaver animal because it \_\_\_\_\_.

Write the opposite of these words

6. Small \_\_\_\_\_
7. Boy \_\_\_\_\_
8. Run \_\_\_\_\_
9. Bitter \_\_\_\_\_
10. Short \_\_\_\_\_

Fill in the gaps

11. H \_\_\_\_\_ m \_\_\_\_\_
12. R \_\_\_\_\_ ding
13. P \_\_\_\_\_ n \_\_\_\_\_ l
14. C \_\_\_\_\_ w \_\_\_\_\_
15. Am \_\_\_\_\_ ul \_\_\_\_\_ nc \_\_\_\_\_

Write the past tense of these words

16. Eat \_\_\_\_\_
17. Catch \_\_\_\_\_
18. Give \_\_\_\_\_

19. Fly \_\_\_\_\_

20. Go \_\_\_\_\_

Use 'a' or 'an' in the gaps

21. He ate \_\_\_\_\_ orange.

22. My father is \_\_\_\_\_ doctor.

23. This is \_\_\_\_\_ book.

24. Show me \_\_\_\_\_ egg.

25. Did you see \_\_\_\_\_ umbrella here?

Write in plural

26. Woman \_\_\_\_\_

27. Lady \_\_\_\_\_

28. Goose \_\_\_\_\_

29. Baby \_\_\_\_\_

30. Box \_\_\_\_\_

Fill in 'has' or 'have' in the following

31. Those boys \_\_\_\_\_ good toys.

32. This monkey \_\_\_\_\_ along tail.

33. An elephant \_\_\_\_\_ two tusks.

34. Where \_\_\_\_\_ you been?

35. I \_\_\_\_\_ a bad headache.

Write the missing words to complete the sentences

36. Mother is to father as brother is to \_\_\_\_\_.

37. Ear is hear as tongue is to \_\_\_\_\_.

38. Car is to driver as an aeroplane is to \_\_\_\_\_.

39. a dog is to bark as a cat is to \_\_\_\_\_.

40. Sleeping is to bedroom as cooking is to \_\_\_\_\_.

Match the following people with the work they do

41. Pilot \_\_\_\_\_ cook food

42. Doctor \_\_\_\_\_ preach in Church

43. Priest \_\_\_\_\_ makes furnitures

44. Carpenter \_\_\_\_\_ treat sick people

45. Cook \_\_\_\_\_ fly the aeroplane

Choose the correct word to fill in the blank spaces

46. He \_\_\_\_\_ a hardworking boy. (is, are)

47. The boy \_\_\_\_\_ afraid of dogs. (were, was)

48. We have never \_\_\_\_\_ an elephant. (see, seen)

49. This flower is very \_\_\_\_\_. (beautiful, beautiful, beutiful)

50. I can't play because I \_\_\_\_\_ a bad leg. (has, have)

OPTIMAL  
002

**OPTIMAL INTERCOUNTIES JOINT  
EVALUATION TEST  
STANDARD THREE**

2015

**C. R. E**

**{3}**

**NAME**.....**SCHOOL**.....**DATE**.....

1. Children are \_\_\_\_\_ from God.  
(goodies, wealth, gift)
2. We should \_\_\_\_\_ those in needs.  
(disobey, hate, help)
3. The Bible is divided into  
\_\_\_\_\_ parts. (12, 3, 2)
4. God rested on the \_\_\_\_\_ day.  
(6th, 7th, 8th)
5. The New Testament has \_\_\_\_\_  
books. (39, 27, 37)
6. The first book of the Bible  
is called \_\_\_\_\_  
(Timothy, Psalm, Genesis)
7. Jesus was crucified together  
with \_\_\_\_\_ thieves. (5, 2, 3)
8. \_\_\_\_\_ is the creator of  
heaven and earth.  
(satan, God, Adam)
9. People who lived and died  
before us are called  
\_\_\_\_\_. (grandparent,  
ancestors, relative)
10. \_\_\_\_\_ worship in a  
Church (Hindus, Christians,  
Muslims)
11. Demons are \_\_\_\_\_  
spirits. (good, evil,  
heavenly)
12. \_\_\_\_\_ was the father of  
Joseph. (Isaac, Jacob, Esau)
13. \_\_\_\_\_ was the first king  
of Israel. (David, Elijah,  
Saul)
14. \_\_\_\_\_ was locked in a  
den of lions. (Jacob,  
David, Daniel)
15. Jesus changed water into  
\_\_\_\_\_ in Galilee.  
(juice, soda, wine)
16. Another day for the Lord's  
day is \_\_\_\_\_ (Easter,  
Christmas, Sabath)
17. Joseph had \_\_\_\_\_ brothers.  
(7, 12, 10)
18. Jesus was baptised in the  
river \_\_\_\_\_ (Tana, Athi,  
Jordan)
19. \_\_\_\_\_ is the counting  
of people.  
(Election, Census, Katiba)
20. Our \_\_\_\_\_ is the Temple  
of God. (heart, body, mind)
21. \_\_\_\_\_ is the God of  
Maasai.  
(Nyasaye, Ngai, Enkai)



22. God want us to treat other people \_\_\_\_\_  
(fairly, rudely, badly)
23. Goliath was killed by \_\_\_\_\_  
(David, Joseph, Cain)
24. Christmas comes in the month of \_\_\_\_\_  
(January, June, December)
25. The followers of Jesus were called \_\_\_\_\_  
(disciples, followers, Pentecost)

Name 3 books of the Bible

26. \_\_\_\_\_
27. \_\_\_\_\_
28. \_\_\_\_\_
29. \_\_\_\_\_ is God's name.  
(Adam, Eve, Yahweh)
30. God creations live in land air and in \_\_\_\_\_  
(heaven, water, holes)
31. \_\_\_\_\_ was the promised land. (Canaan, Egypt, Jordan)
32. The fore-fathers of Israel were called \_\_\_\_\_  
(guardians, Angels, patriachs)
33. \_\_\_\_\_ was called by God 3 times. (Isaack, Joseph, Samuel)
34. We should \_\_\_\_\_ our neighbours. (hate, love, laugh)
35. Emmanuel means \_\_\_\_\_  
(a boy, God with us, Sabbath)
36. African worshiped God under \_\_\_\_\_  
(trees, mountains, Churches)
37. Bartimaeus was a \_\_\_\_\_

- man. (blind, mad, dead)
38. During Easter holiday we celebrate the \_\_\_\_\_  
of Christ. (birth, death, resurrection)
39. \_\_\_\_\_ is the holy book of Christians. Bible, Quran, C.R.E)
40. The Holy Spirit came of the day of \_\_\_\_\_ (Easter, Christmas, Pentecost)
41. \_\_\_\_\_ were the first people to see baby Jesus. (wisemen, shepherd, soldiers)
42. We talk to God through \_\_\_\_\_ (Prayers, songs, Church)
43. \_\_\_\_\_ was the earthly father of Jesus. (David, Joseph, Jacob)
44. Abraham was said to be a man of great \_\_\_\_\_ (love, patience, faith)
45. Moses was given the ten commandment at Mt. \_\_\_\_\_ (Elgon, Kenya, Sinai)
46. Jesus was baptised at river \_\_\_\_\_ (Jordan, Nile, Tana)
47. Isaac had \_\_\_\_\_ sons. (4, 12, 11)
48. \_\_\_\_\_ is our saviour. (Judas, Justus, Jesus)
49. We should \_\_\_\_\_ our parents. (obey, disobey, hate)
50. Peter denied Jesus \_\_\_\_\_ times. (2, 3, 5)

**OPTIMAL INTERCOUNTIES JOINT  
EVALUATION TEST  
STANDARD THREE  
READING / KUSOMA**

2015

{3}

NAME.....SCHOOL.....DATE.....

Read these words

- |              |               |                 |                  |
|--------------|---------------|-----------------|------------------|
| 1. ambulance | 2. enormous   | 3. organization | 4. motor vehicle |
| 5. bicycle   | 6. blackboard | 7. honour       | 8. English       |
| 9. welcome   | 10. goodbye   | 11. furniture   | 12. yesterday    |
| 13. remember | 14. beautiful | 15. wrestling   | 16. senses       |
| 17. health   | 18. surprised | 19. squirrel    | 20. creature     |

Read these sentences

1. The big yellow bus is ours.
2. He cannot walk. He has a broken leg.
3. You cannot catch me. The little boy said.
4. The sick old lady limped to her bedroom.
5. No one called the two men to put out the fire.
6. His grandfather died last week.
7. My birth day is tomorrow.
8. Children are often reminded to obey the elders.
9. I am nine years old.
10. They were not happy.

**KUSOMA**

Soma maneno yafuatayo

- |                  |               |               |                 |
|------------------|---------------|---------------|-----------------|
| 1. kugawanya     | 2. daktari    | 3. tafadhali  | 4. hadithi      |
| 5. kabati        | 6. mlango     | 7. wanyama    | 8. kibogoyo     |
| 9. kufunganya    | 10. mgonjwa   | 11. seremara  | 12. kiziwi      |
| 12. mwanafunzi   | 14. mkeka     | 15. kusoma    | 16. salama      |
| 17. kugawanya    | 18. kamilisha | 19. maumbo    | 20. mapengo     |
| 21. alitengeneza | 22. pangoni   | 23. alitamani | 24. kitendawili |

Soma sentensi hizi

1. Mtoto amelala sana.
2. Kijana huyu ni mkorovi.
3. Sasa ni wakati wa kulala.
4. msitu huu unaogopesha sana.
5. Swara alikamatwa na simba.
6. Mzee huyu anaitwa Shakombo.
7. Mimi sili tena.
8. huyu ni kaka yangu mkubwa.

OPTIMAL  
002


**MTIHANI WA MUUNGANO WA MAJIMBO**  
**MTIHANI WA MAJARIBIO** 2014  
**DARASA LA TATU**  
**KISWAHILI** {3}

NAME.....SCHOOL.....DATE.....

Jaza pengo

1. S \_ \_ r \_ \_ mala
2. Mw \_ \_ n \_ \_ f \_ \_ nzi
3. D \_ \_ w \_ \_ ti
4. D \_ \_ ft \_ \_ ri
5. K \_ \_ l \_ \_ mu

Andika majina ya maumbo haya



6. \_\_\_\_\_ 7. \_\_\_\_\_



8. \_\_\_\_\_ 9. \_\_\_\_\_

Chagua neno sahihi

10. Mbwa \_\_\_\_\_ amepatikana.  
(yangu, wangu)
11. Mdudu \_\_\_\_\_ ana sumu kali.  
(ile, yule)
12. Nyumba \_\_\_\_\_ imeanguka.  
(zao, yao)
13. Kitabu \_\_\_\_\_ kimepotea.  
(yake, chake)
14. Mkono \_\_\_\_\_ unauma.  
(huyu, huu)

Andika kinyume cha maneno

haya

15. Cheka \_\_\_\_\_
16. Simama \_\_\_\_\_
17. Kuja \_\_\_\_\_
18. Lala \_\_\_\_\_
19. Shuka \_\_\_\_\_

Andika wingi wa sentensi  
hizi.

20. Huyu ni msichana

(huyu ni wasichana, hawa ni msichana, hawa ni wasichana)

21. Hiki ni kitabu.

(Hiki ni vitabu, Hivi ni vitabu, Hivi ni kitabu)

22. Hii ni meza

(hivi ni meza, hizi ni meza, haya ni mameza)

23. Huu ni mguu.

(Hizi ni miguu, Hii ni

miguu, Hawa ni maguu)

24. Mtoto analia \_\_\_\_\_

(vitoto vinalia, mtoto wanalia, watoto wanalia)

25. Kiti kimevunjika. \_\_\_\_\_

(Kiti vimevujika, Viti vimevujika, Vitikimevujika)

Andika kwa tarakimu au maneno

26. 476 \_\_\_\_\_

27. Mia tisa themanini na tatu \_\_\_\_\_

28. 195 \_\_\_\_\_

29. 751 \_\_\_\_\_

30. Mia mbili thelathini na saba \_\_\_\_\_

Andika maneno haya vizuri

31. mija \_\_\_\_\_

32. kaluma \_\_\_\_\_

33. leshu \_\_\_\_\_

34. mulvana \_\_\_\_\_

35. sadara \_\_\_\_\_

Ambatanisha

36. Bubu hasikii

37. Kibogoyo hatembei

38. Kipofu hanameno

39. Kiwete haoni

40. Kižiwi haongi

Tegua vitendawili hivi

41. Nyoka pangoni \_\_\_\_\_

42. Mishale mitano \_\_\_\_\_

43. Kipo lakini sikioni \_\_\_\_\_

44. Kamba ndefu lakini haifungi kuni \_\_\_\_\_

45. Bubu anayesema \_\_\_\_\_

Soma hadithi kisa ujibu maswali yaliyofuata

Shuleimani alikuwa babu mzee sana. Hakuwa na watoto. Alitamani sana kupata mtoto wa kiume ili amridhi atakapoiyaaga dunia.

Siku moja shuleimani alienda kwa mganga kutafuta usaidishi. Mganga alimuitisha kuku mweusi lakini Shuleimani hakubahatika.

46. Jina la mzee huyu ni \_\_\_\_\_

47. Jibu ndiyo au la Shuleimani alitamani apate mtoto wa kike \_\_\_\_\_.

48. Shuleimani alienda kutafuta usaidishi kwa nani? \_\_\_\_\_.

49. Mganga alimwitisha Shuleimani \_\_\_\_\_.

50. Baada ya kwenda kwa mganga, Shuleimani \_\_\_\_\_

(alibahatika, hakubahatika)

**OPTIMAL INTERCOUNTIES JOINT  
EVALUATION TEST  
STANDARD THREE  
SOCIAL ~~SCIENCE~~**

NAME..... SCHOOL..... DATE.....

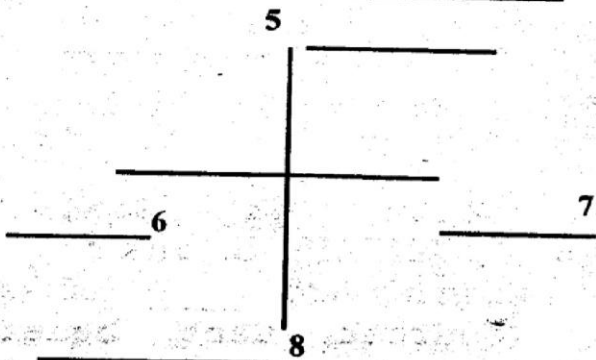
1. The sun rises in the \_\_\_\_\_ (West, East, South)

2. The head of a school is the \_\_\_\_\_ (deputy, busar, headteacher)

3. Moving air is called \_\_\_\_\_ (mist, wind, rain)

4. The needle of a compass always point to the \_\_\_\_\_ (South, East, North)

Name the points of a compass shown below.



Name two types of families

9. \_\_\_\_\_

10. \_\_\_\_\_

11. Which one of the following is a man-made feature? \_\_\_\_\_ (Road, Swamp, River)

Name two elements of weather

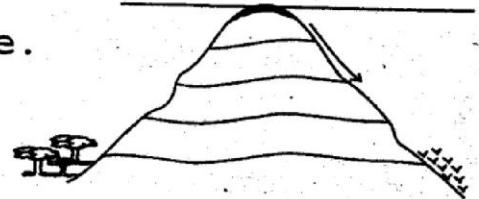
12. \_\_\_\_\_

13. \_\_\_\_\_

14. A low lying land is called \_\_\_\_\_ (plain, plateau, slope)

15. Our national flag has \_\_\_\_\_ colours. (5, 4, 6)

16. This is a \_\_\_\_\_ feature.



(physical, man made, land)

17. Rivers that have water transport the year and called \_\_\_\_\_ rivers.

(big, seasonal, permanent)

18. Too much rain causes \_\_\_\_\_

(rain, floods, diseases)

Name two animals used in transport

19. \_\_\_\_\_

20. \_\_\_\_\_

21. We should keep our home compound \_\_\_\_\_

(dirty, clean, holy)

22. Crops are harvested during

the \_\_\_\_\_ season.

(wet, dry, cold)

23. The children of ~~your aunt~~ are called \_\_\_\_\_

(brothers, cousins, nice)

Name 3 basic needs of a family.

24. \_\_\_\_\_

25. \_\_\_\_\_

26. \_\_\_\_\_

27. When crossing a road we should look at left, right and \_\_\_\_\_ again. (right, left, up)

28. Carrying of goods and people from one place to another is called \_\_\_\_\_


(movement, transport, location)

29. Plants growing in swamps are called \_\_\_\_\_

(vegetables, reeds, trees)

30. \_\_\_\_\_ is the head of the family. (Mother, Father, Big brother)

31. The weather is \_\_\_\_\_



(windy, cloudy, sunny)

32. When it is cold we should wear \_\_\_\_\_ clothes. (wet, warm, hot)

33. People who keep animals only are called \_\_\_\_\_ (farmers, pastralists, animal keepers)

34. The \_\_\_\_\_ arrest criminals in our county. (army, pastors, police)

35. We should cross the road at the \_\_\_\_\_ crossing. (lion, zebra, white)

36. A market is a place where people \_\_\_\_\_ and 37. \_\_\_\_\_ things.

38. \_\_\_\_\_ uses compass to find their way in the sky. (pilots, drivers, captains)

39. The national anthem is sang on \_\_\_\_\_ in our school. (Monday, Thursdays)

40. Cactus trees grow in \_\_\_\_\_ place. (wet, dry, cold)

41. Which one of the following is a physical feature? \_\_\_\_\_ (Dam, Tall building, Rivers)

42. A \_\_\_\_\_ is an instrument used to measure temperature. (raingauge, thermometer, windvane)

Name two sources of water

43. \_\_\_\_\_

44. \_\_\_\_\_

45. The sun sets in the \_\_\_\_\_ (North, West, East)

46. Cleaning, drinking and washing are \_\_\_\_\_ of water. (sources, uses, benefits)

47. Domestic animals are found at \_\_\_\_\_ (wild, forest, home)

48. Trees give us \_\_\_\_\_ and

49. \_\_\_\_\_

50. The shade from trees protect us from the \_\_\_\_\_

(moon, rain, sun)