

GATUNDU SOUTH DISTRICT END OF TERM 1 2015

STD. 5 ANSWERS

<u>MATHS</u>		<u>ENGLISH</u>		<u>KISWAHILI</u>		<u>SCIENCE</u>	
1. B	26. B	1. B	26. C	1. B	26. D	1. B	26. D
2. A	27. C	2. A	27. D	2. D	27. A	2. C	27. A
3. C	28. D	3. A	28. B	3. A	28. B	3. C	28. B
4. D	29. A	4. C	29. C	4. A	29. A	4. D	29. A
5. A	30. B	5. A	30. C	5. B	30. B	5. A	30. A
6. D	31. C	6. D	31. C	6. C	31. D	6. C	31. D
7. B	32. B	7. B	32. D	7. D	32. B	7. A	32. C
8. D	33. A	8. A	33. A	8. B	33. C	8. C	33. B
9. B	34. C	9. A	34. B	9. A	34. A	9. B	34. C
10. A	35. D	10. D	35. B	10. D	35. C	10. A	35. A
11. C	36. C	11. C	36. D	11. A	36. D	11. D	36. B
12. D	37. A	12. A	37. C	12. B	37. B	12. B	37. A
13. B	38. C	13. B	38. C	13. C	38. A	13. C	38. B
14. C	39. D	14. C	39. B	14. B	39. B	14. D	39. C
15. A	40. C	15. D	40. D	15. D	40. D	15. A	40. B
16. D	41. D	16. C	41. A	16. B	41. B	16. C	41. B
17. A	42. C	17. C	42. D	17. A	42. C	17. D	42. C
18. A	43. A	18. D	43. D	18. B	43. A	18. D	43. D
19. A	44. D	19. D	44. B	19. A	44. B	19. C	44. C
20. C	45. A	20. A	45. A	20. D	45. A	20. A	45. C
21. B	46. C	21. C	46. C	21. B	46. B	21. B	46. C
22. B	47. D	22. B	47. C	22. A	47. D	22. B	47. B
23. A	48. A	23. C	48. D	23. D	48. C	23. B	48. C
24. D	49. C	24. A	49. B	24. B	49. A	24. C	49. D
25. D	50. A	25. B	50. B	25. C	50. D	25. A	50. C

SOCIAL STUDIES

1. C	21. A	41. B	61. C	81. C
2. B	22. C	42. D	62. C	82. B
3. C	23. A	43. D	63. B	83. B
4. D	24. B	44. A	64. D	84. D
5. A	25. C	45. A	65. A	85. B
6. D	26. D	46. C	66. C	86. A
7. A	27. B	47. D	67. B	87. D
8. B	28. B	48. C	68. C	88. C
9. C	29. B	49. C	69. D	89. C
10. A	30. C	50. D	70. A	90. D
11. D	31. D	51. C	71. B	
12. C	32. A	52. A	72. C	
13. A	33. D	53. D	73. D	
14. B	34. B	54. B	74. A	
15. D	35. C	55. B	75. B	
16. A	36. A	56. D	76. C	
17. A	37. A	57. A	77. D	
18. B	38. A	58. A	78. B	
19. B	39. A	59. B	79. A	
20. D	40. D	60. C	80. D	

GATUNDU SOUTH DISTRICT
ASSESSMENT TEST END OF TERM 1 2015
STD. 5 ENGLISH

Fill in the blank spaces 1 to 15 using the best answers from the choices given below

Friends 1 very important people in our lives. They give 2 to us fully. Friends will always be there for you when you 3 them. It is important to keep your 4 close to you. We should try hard to 5 our neighbours our 6 friends. If your neighbours are 7 friends, they can let you know when 8 is a problem 9 your place in your absence.

That is why we must 10 peacefully with our friends as 11 as our neighbours. 12 in a while, we should share a 13. Sharing will make 14 become 15 friends.

- | | | |
|-----|---------------|--------------|
| 1. | A. am | B. are |
| | C. is | D. was |
| 2. | A. themselves | B. herself |
| | C. himself | D. ourselves |
| 3. | A. need | B. knead |
| | C. needs | D. needing |
| 4. | A. enemies | B. friendly |
| | C. friends | D. enemy |
| 5. | A. make | B. made |
| | C. making | D. maker |
| 6. | A. bad | B. bud |
| | C. ugly | D. good |
| 7. | A. our | B. your |
| | C. you | D. yours |
| 8. | A. there | B. their |
| | C. here | D. where |
| 9. | A. at | B. of |
| | C. off | D. with |
| 10. | A. leave | B. leaves |
| | C. lives | D. live |
| 11. | A. will | B. wells |
| | C. well | D. while |
| 12. | A. once | B. ones |
| | C. one | D. won |
| 13. | A. mill | B. meal |
| | C. meals | D. mills |
| 14. | A. as | B. ass |
| | C. us | D. has |
| 15. | A. butter | B. bud |
| | C. bad | D. better |

Fill in the gaps with the correct answer

16. There are _____ big jerry cans than small ones
 A. smaller B. least
 C. more D. most
17. The tourists are in the hotel, _____?
 A. are they B. do they
 C. aren't they D. isn't it
18. They grow tea in Kericho, _____?
 A. isn't it B. do they
 C. does it D. don't they

Choose the opposite of the underlined words

19. Does Kenya export raw materials?
 A. sell B. calm
 C. grow D. import
20. The small children were swimming in the shallow end
 A. deep B. calm
 C. full D. difficult

Fill in the gaps with the correct words

21. My father wore a _____ jacket.
 A. leather black long
 B. black long leather
 C. long black leather
 D. leather long black
22. The waiter spread some _____ table clothes
 A. wide cotton white
 B. wide white cotton
 C. white wide cotton
 D. cotton white wide

Choose the sentence that is properly punctuated

23. A. Did you clean the dogs kennel?
 B. did you clean the Dog's kennel?
 C. Did you clean the dog's kennel?
 D. Did you clean the dogs kennel?

Choose the correct answer

24. A man whose wife is dead is called _____
 A. widower B. widow
 C. orphan D. window
25. As blind as a _____
 A. bee B. bat
 C. cow D. cat
26. Taxi is to passenger as hearse is to _____
 A. dead B. funeral
 C. coffin D. mourners
27. This girl is very careful. She does her work _____
 A. care B. careful
 C. caring D. carefully
28. Suleiman is too tired _____ walk
 A. very B. to
 C. two D. too
29. The desk is missing one of _____ legs
 A. it's B. their
 C. its D. his
30. Can he _____ that work?
 A. does B. did
 C. do D. don't

Read the following passage and then answer questions 31-40

Although the home is supposed to be safe place for children; it is not always the case. Members of the family or other close relatives can abuse children. It is therefore important for the parents to know. The people who lived with them well. It is also important to know where the child is at all times. People who help at home should be from families or homes that are known to us. This will help us know how they behave. Children should report to adults each time they are treated badly

Parents should be careful how they punish their children at home. They should avoid injuring their children when they punish them. If you know a child who is beaten many times at home, tell your teacher. If a member of your family including your father and mother injures you, report to your teacher.

Children should be protected from child labour. Child labour is when children have to work for payment. Sometimes they are made to work that is too hard for their age. This is unhealthy. They do not develop fully into healthy adults

and they miss school. If you know a child who does not go to school but instead works, tell your teacher.

Children should be protected from early marriages. Their bodies are not developed well enough for them to have babies. They can die. If you know a child who has been forced to marry, report to the teacher.

31. Which of the following statements is true?
 - A. The home is always the safest place
 - B. The home is never the safest place
 - C. Sometimes a home can be unsafe
 - D. safe homes are always the case
32. Who can abuse children?
 - A. close relatives only
 - B. family members only
 - C. Neither relatives nor family members
 - D. Family members or close relatives
33. Is it important for parents to know where the child is all the time?
 - A. yes
 - B. No
 - C. maybe
 - D. Never
34. What should children do when they are treated badly?
 - A. run away from home
 - B. report to adults
 - C. fight back
 - D. cry and then forget
35. The word injuring in paragraph two means the same as
 - A. punishing
 - B. hurting
 - C. injecting
 - D. slapping
36. When a family member injures a child, what should the child do?
 - A. cry loudly
 - B. go to live in the streets
 - C. fight back
 - D. report to the teacher
37. Child labour in the passage refers to
 - A. When children pay people to work
 - B. When children help parents at home
 - C. When children work for payment
 - D. When children work in a factory only
38. What should you do if you know a child who works instead of going to school?
 - A. join them in work
 - B. work with them to get money
 - C. report to your teacher
 - D. tell your parents to employ him
39. Children should be protected from early marriages because
 - A. they are not young to get married
 - B. they are not old enough to have babies
 - C. marriage is allowed in the world
 - D. they are just like adults
40. The best title for the passage is
 - A. protecting children from school
 - B. why children should not be protected
 - C. the home is always safe
 - D. protection of children

Read the following passage then answer questions 41-50

One day Okoth was walking in the garden. He came upon a young tree that was crying.

"ulu!ulu!" the tree cried

Okoth asked, "why are you crying, young tree?"

"I am tired and unhappy, boy. Your people are bad. How could they do this to me?"

Okoth was surprised to hear a tree talking. But he was even more disturbed to see the young tree cry. So he asked the tree, "What is it my people have done?"

They have killed all my family. Look at me. Now I'm an orphan. What shall I do? u!u!u!"

Okoth felt pity for the tree

The tree continued, "You forgot the good things my parents gave you. My mother gave you fruits, my father cleaned the air, my grandfathers were the homes of animals and birds."

"Now, how can I help?" Okoth asked.

"Promise me. Tell your people not to kill my cousins. Every time you see one of my brothers and sisters, give us some water. please! please!

From that time Okoth always took some water and gave to the tree. He also knew that it is unkind to cut trees.

41. When Okoth was walking in the garden
 - A. he saw a tree crying
 - B. he started crying
 - C. he begun to cut a tree
 - D. there were some of people cutting trees
42. The tree was crying because
 - A. it was tired
 - B. somebody was cutting it
 - C. all people are bad
 - D. its relatives were cut down by people
43. The tree said, "I am an orphan," An orphan is
 - A. a person who likes crying
 - B. a person who doesn't know what to do
 - C. a tree that talks
 - D. a person who has no mother or father
44. To feel pity for someone means;
 - A. to be disturbed by someone
 - B. to feel sorry for someone
 - C. to like someone
 - D. to cry
45. People kill trees when
 - A. they cut them down
 - B. they fail to to plant new trees
 - C. they don't give the trees water
 - D. they don't see the good things about trees
46. How could Okoth help the tree's family?
 - A. by cutting them
 - B. by telling his co usins not to kill people
 - C. by giving them some water
 - D. by not eating fruits
47. Which of these sentences is not true?
 - A. Trees give us fresh air
 - B. We get fruits from trees
 - C. People do not like the things trees give them
 - D. Trees have parents and other relatives
48. Three of the following sentences are false. Which one is true
 - A. Okoth asked people not to kill his cousins
 - B. Okoth used to cut trees
 - C. Trees do not need water
 - D. Okoth learnt why it is good to plant and take care of trees
49. What do we learn from this story?
 - A. trees also feel pain when cut
 - B. we should take care of our trees
 - C. we should not eat fruit
 - D. trees have parents and other relatives
50. This story is not real in one way because
 - A. people do not destroy trees
 - B. trees do not talk or cry
 - C. trees cannot clean the air
 - D. a tree cannot have parents

GATUNDU SOUTH DISTRICT
ASSESSMENT TEST END OF TERM 1 2015
DARASA LA TANO KISWAHILI

Jaza pengo kwa neno lifaalo

1 mwanafunzi 2 afaulu 3 ni sharti 4 na nidhamu ya hali ya juu. Ahakikishe nafajata sheria 5 za shule na awatii walimu 6 na wote wanaomzidi 7. Asikilize kwa makini awapo darasani na 8 mazoezi yote 9 kwa wakati 10. Mwanafunzi 11 hatii atajikuta 12 kila wakati. Masomoni atakuwa 13 na kila mwisho wa mhula ataweza kushika 14. Ni vyema walimu na wazazi wahimimize watoto kuwa 15.

1. A. Ndio B. Ili
C. Iwapo D. Ikiwa
2. A. wowote B. lolote
C. yoyote D. yeyote
3. A. masomoni
B. ndani ya masomo
C. katika masomoni
D. kwenye masomoni
4. A. awe B. akuwe
C. akuwenge D. asiwe
5. A. yote B. zote
C. chote D. pote
6. A. chake B. zao
C. wake D. lake
7. A. hirimu B. rika
C. kichwa D. umri
8. A. asifanye B. ayafanye
C. wafanye D. wasifanye
9. A. anayopewa B. anazopewa
C. wafanye D. wasifanye
10. A. inayofaa B. zinazofaa
C. panapofaa D. unaofaa
11. A. ambaye B. ambao
C. ambazo D. ambako
12. A. furahani B. mashakani
C. binguni D. pema
13. A. juu B. mbele
C. nyuma D. sawa
14. A. usukani B. mkia
C. bahati D. bendera
15. A. watundu B. wakorofi
C. bahati D. watiifu

Kutoka swali la 16-40, Jibu kulingana na maagizo

Jibu maamkizi haya

16. Shikamoo baba
A. marahaba mjukuu wangu
B. marahaba mwanagu
C. marahaba babu yangu
D. Marahaba kitukuu
17. Habari ya siku nyingi?
A. nzuri sana
B. Sijambo
C. Ahsante
D. Shikamoo

18. Barua rasmi huwa na anwani ngapi?
A. moja B. mbili
C. tatu D. nne
19. Katika msamiati wa ukoo, mjombako atakuwa
A. mpwa B. halati
C. wifi D. mkoi

Kamilisha methali

20. Mgeni njoo mwenyeji
A. aone B. afurahi
C. apike D. apone

Tumia kiulizi "pi" kwa usahihi

21. Mtoto mwema ni _____?
A. upi B. yupi
C. wapi D. kipi

Andika tarakimu hii kwa maneno

22. 69,999
A. Elfu sitini na tisa, mia tisa tisini na tisa
B. Mia sita na tisa tisini na tisa
C. Sita tisa mia tisa tisini na tisa
D. Mia sita tisini na tisa, mia sita na tisini

Andika kwa wingi

23. Mgeni amefika
A. Wageni amefika
B. Wageni hajafika
C. Mgeni wamefika
D. Wageni wamefika

Tegua kitendawili


24. Mama nieleke _____
A. gari B. kitanda
C. shuka D. kiti
25. Sehemu ya jicho ambayo inaona huitwa _____
A. utosi B. kisogo
C. mboni D. nyusi
26. Kuanzia mwezi Julai hadi Agosti kuna baridi nyingi sana. Msimu huo unaitwa _____
A. vuli B. mchoo
C. kiangazi D. kipupwe
27. Mtaalamu anayetibu wagonjwa hospitalini huitwa _____
A. tabibu B. mwuguzi
C. taratibu D. tibabu
28. Neno lingine lenye maana sawa na ukuta ni _____
A. kizingiti B. kiambaza
C. mawe D. mbao

Tumia kiambishi "amba" kwa usahihi

29. Jiko lilitumiwa kupikia chakula ni lile _____
mimi ni jinunua
A. ambalo B. ambayo
C. ambazo D. ambao
30. Mtu ambaye anatengeneza vyungu kwa kutumia udongo anaitwa _____
A. mwashi B. mfinyanzi
C. mwosha D. sonora

31. Kati ya maneno haya ni lipi ambalo haliko katika ngeli ya ki-vi
 A. chuma B. kinanda
 C. kibeti D. chura

Tumia kiambishi "enye" kwa usahihi

32. Kiti _____ kilianguka na kuvunjika vipande vipande
 A. enye B. chenyewe
 C. wenyewe D. mwenyewe
33.  imbo hili
 A. hilali B. tao
 C. mraba D. duaradufu
34. Katika majina ya makundi tunasema tita la kuni lakini _____ ni cha barua
 A. kipeto B. safu
 C. kichala D. umati
35. Akisami $\frac{1}{6}$ katika maneno huitwa _____
 A. subui B. thuluthi
 C. sudusi D. ushuri
36. _____ ni mmea unaozaa ndizi
 A. mpapai B. mpareto
 C. mchai D. mgomba
37. Malipo unayotoa ya usafiri huitwa nauli ilhali yale yanayolipwa shuleni huitwa _____
 A. kiingilio B. karo
 C. ujira D. ada
38. Vazi la kike litumiwalo ndani ya nguo ambalo huanzia kiunoni kuteremka chini huitwa _____
 A. gaguro B. rinda
 C. surupwenye D. buibui
39. Msimu wa masika mimea hunawiri lakini wakati wa kiangazi mimea _____
 A. hukua B. hunyauka
 C. hupeperuka D. hustawi
40. Sekunde sitini huunda _____ moja
 A. siku B. mwaka
 C. saa D. dakika

Soma maelezo va ufahamu kisha ujibu maswali 41-50

Nchi ya mtu ni ya maana sana. Mimi ninajivunia nchi yangu kwasababu napenda uzalendo wangu. Nchi yangu inaitwa Kenya. Kenya ni nchi iliyo na mapambo mengi kama vile, milima, mabonde, miti, mito na wanyama wa kila aina.

Mapambo haya huvutia watu kutoka nchi mbalimbali ili kuja na kufurahia uzuri wa Kenya. Wanapokuja hutuletea fedha nyingi za kigeni. Watu hawa hutoka nchi za mbali na wengine wanatoka nchi jirani ambazo ni Uganda na Tanzania

Watu hawa hutembea kuona milima mpaka kwenye mlima Kenya ambao ndio mrefu zaidi nchini. Wao hukwea mlima mpaka juu kileleni. Wengine hupenda kuzuru mji wa Mombasa ili waogele kwenye bahari. Wengine huzuru ziwa Viktoria ili wajione samaki wa kila aina.

Ni vizuri kuifahamu nchi yako. Kutoijua nchi yako kunaonyesha wewe hujivunii nchi yako. Ni jambo la maana pia kuwajua viongozi wa nchi ili kuendeleza historia ya nchi yako vizuri.

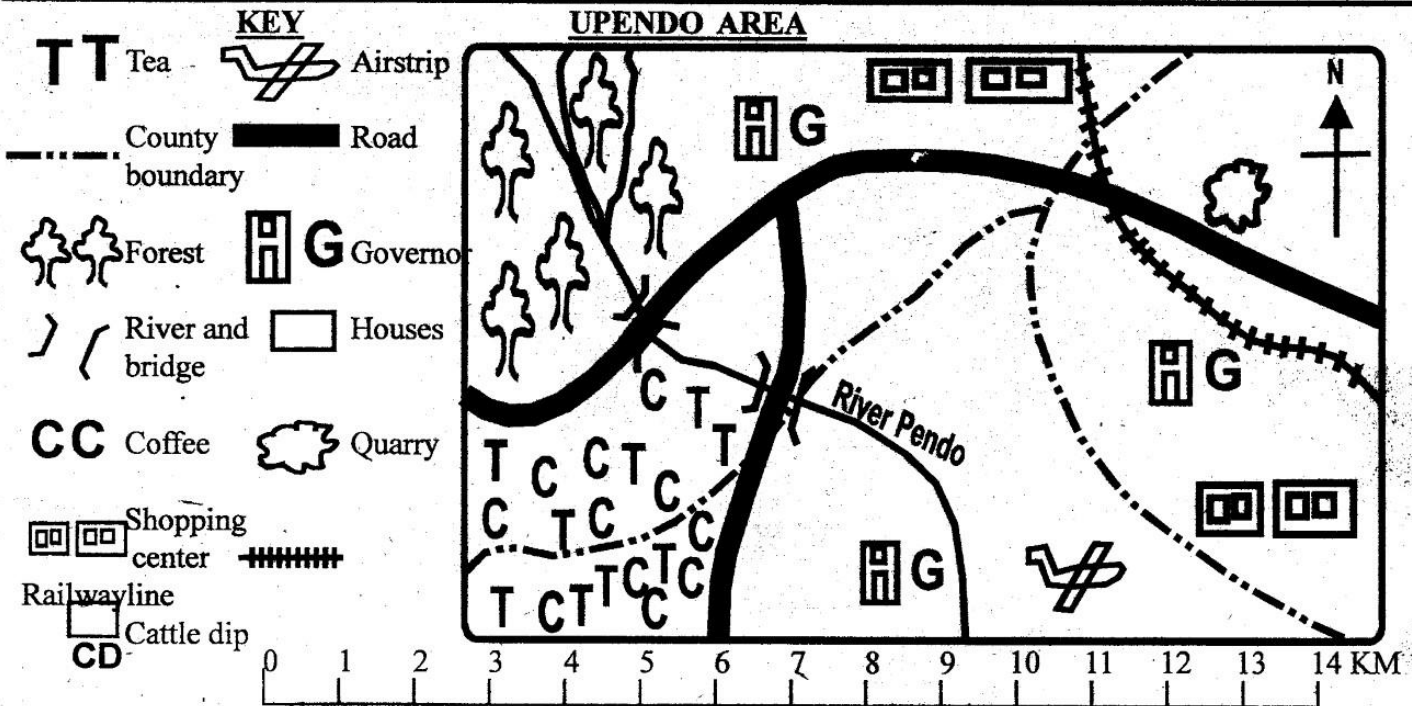
Wakenya walipigania uhuru wao kutoka kwa wakoloni na kushinda mpaka wakajinyakulia uhuru na kupandisha bendera yetu yenye rangi za kuvutia.

Heko kwa mashujaa waliopigania uhuru wetu. Nawahimiza wanafunzi wenzangu pia kupenda nchi na kuzuru maeneo mbalimbali na kujifunza mengi.

41. Mtu anayeipenda nchi yake sana anaitwa _____
 A. raia B. mzalendo
 C. balozi D. mwananchi
42. Mwandishi anasema nchi yake inaitwa _____
 A. Uganda B. Tanzania
 C. Kenya D. Mombasa
43. Unafikiri mwandishi wa makala haya ni nani?
 A. mwanafunzi
 B. mzazi
 C. mwalimu
 D. mgeni
44. Wageni wanaozuru nchi kujionea na kufurahia uzuri wake wanaitwa _____
 A. wazungu
 B. watalii
 C. maadui
 D. haramia
45. Mlima mrefu kuliko yote nchini Kenya unaitwa?
 A. Mlima Kenya
 B. Mlima Kilimanjaro
 C. Mlima Longonot
 D. Mlima Elgon
46. Ukikwea mlima hadi kileleni huenda ukapata _____ huko mwisho
 A. moto
 B. theluji
 C. chakula
 D. pesa
47. Kwenye bendera ya Kenya kuna rangi nne. Ni gani inasimamia amani?
 A. Nyeusi
 B. Nyekundu
 C. Kijani
 D. Nyeupe
48. Rais wa nchi yetu ya Kenya anaitwa _____
 A. Mwai Kibaki
 B. Daniel Arap Moi
 C. Uhuru Kenyatta
 D. Raila Odinga
49. Wakenya walipigania na kujinyakulia uhuru kutoka _____ kwa _____
 A. wakoloni
 B. wazalendo
 C. wazee
 D. wasanii
50. Kichwa kinachofaa zaidi kwa hii habari ni _____
 A. Heri kwenda ng'ambo
 B. Sipendi nchi yangu
 C. Kenya, Uganda, Tanzania
 D. Kenya nchi yangu

**GATUNDU SOUTH DISTRICT
ASSESSMENT TEST TERM I 2015**

STD. 5 SOCIAL STUDIES

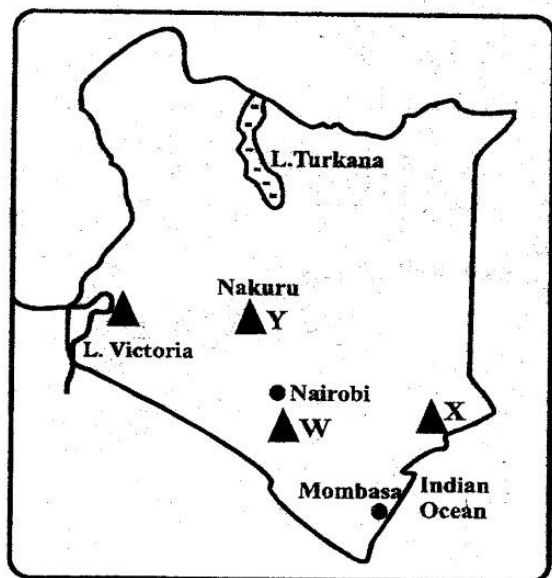


Study the map of Upendo area and answer questions 1-7

1. The main administrators of Upendo area are?
 - A. Members of County Assembly
 - B. Women Representatives
 - C. Governors
 - D. Chiefs
2. The main means of transport in Upendo area is _____
 - A. Water
 - B. Road
 - C. Railway
 - D. Air
3. River Pendo has _____ tributaries
 - A. 3
 - B. 4
 - C. 2
 - D. 1
4. The source of river Pendo is _____
 - A. Mountain
 - B. Lake
 - C. Ocean
 - D. Forest
5. The main economic activity of the people of Upendo area is _____
 - A. Crop farming
 - B. Trading
 - C. Mixed farming
 - D. Cattle keeping
6. The stones mined from the quarry are likely to be transported by _____ and _____
 - A. Air and road
 - B. Railway and air
 - C. Water and road
 - D. Road and railway
7. What is the direction of the forest from the Airstrip?
 - A. North West
 - B. South East
 - C. South West
 - D. North East
8. The national park found around Lake Turkana is _____
 - A. Marsabit National Park
 - B. Sibiloi National park
 - C. South Turkana National Park
 - D. Tsavo National Park

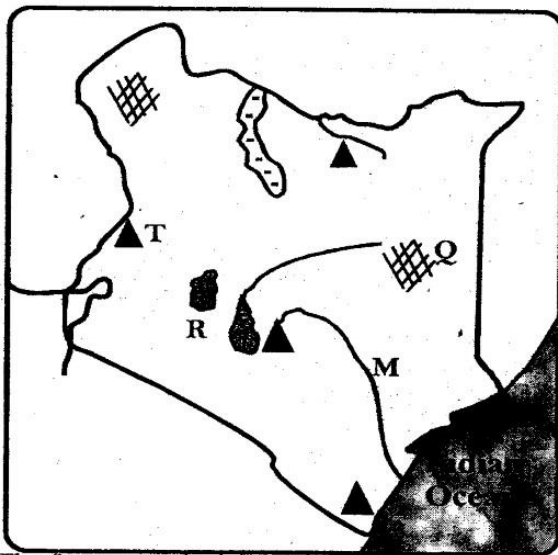
9. The main traditional methods of farming are _____ and _____
 - A. Shifting, subsistence
 - B. Horticulture, shifting
 - C. Shifting, bush following
 - D. Bush following, mixed farming
10. The following trees are all hardwood trees except _____
 - A. Cypress
 - B. Camphor
 - C. Nandi oak
 - D. Mahogany
11. Which of the following animal breeds is the odd one out?
 - A. Ayshire
 - B. Fresian
 - C. Jersey
 - D. Zebu
12. Which of the following is not part of wildlife?
 - A. Lion
 - B. Ostrich
 - C. Dog
 - D. Bushes
13. Which of the following towns started due to industrial activities?
 - A. Thika
 - B. Mombasa
 - C. Kisumu
 - D. Nairobi
14. All the following can be made at jua kali industry except
 - A. Furniture
 - B. Motor vehicles
 - C. Water cans
 - D. Wheel barrows
15. Which one of the following is not a problem facing wildlife?
 - A. Forest fires
 - B. Pests and diseases
 - C. Poaching
 - D. Poor roads

Use the map to answer questions 16-18

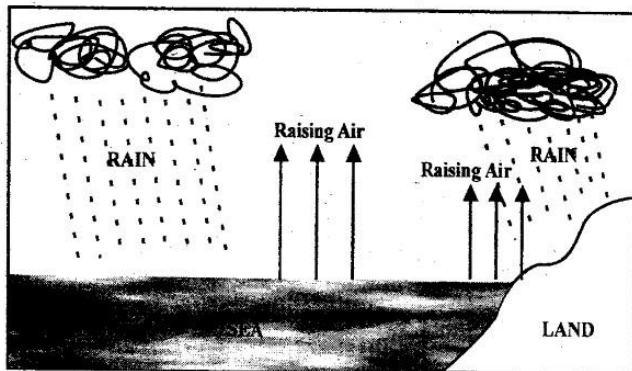


16. The mineral mined at the point marked W on the map is _____?
 - A. Soda ash
 - B. Salt
 - C. Flou spar
 - D. Diatomite
17. The mineral marked Y is diatomite. It is mined at _____?
 - A. Kariandusi
 - B. Ngomeni
 - C. Kerio valley
 - D. L. Magadi
18. Mineral marked X and mined at Bamburi is?
 - A. Salt
 - B. Limestone
 - C. Soda ash
 - D. Flourspar
19. Which of the following is the most expensive fish preservation method?
 - A. Canning
 - B. Freezing
 - C. Snoking
 - D. Sundrying
20. Among the following fishing methods, which one is suitable for deep sea fishing?
 - A. Traps
 - B. Harpooning
 - C. Bait and hook
 - D. Trawling
21. Perishable goods are mainly transported by _____
 - A. Air
 - B. Water
 - C. Railway
 - D. Road
22. Planting of trees after cutting them down is known as _____
 - A. Agroforestry
 - B. Deforestation
 - C. Re-afforestation
 - D. Afforestation
23. In audio-visual communication, the recipients
 - A. See and wear messages at the same time
 - B. Hear the messages only
 - C. Read the written messages
 - D. See the messages only
24. Kenya's main port is _____
 - A. Lamu
 - B. Mombasa
 - C. Kilindini
 - D. Malindi
25. The crop mainly grown in Trans Nzoia is
 - A. Cotton
 - B. Sugarcane
 - C. Maize
 - D. Tea
26. Which of the following crops is grown under irrigation
 - A. Sugarcane
 - B. Cotton
 - C. Sisal
 - D. Rice
27. The Waswahili people were as a result of intermarriage between _____
 - A. Indians and bantus
 - B. Arabs and bantus
 - C. Tachoni and Mijikenda
 - D. Mijikenda and Indians
28. The _____ migrated from Saudi Arabia to the horn of Africa
 - A. Semites
 - B. Cushites
 - C. Bantus
 - D. Nilotes
29. Which of the following statements describe age-set
 - A. Formed when there was war
 - B. Formed from many age groups
 - C. Formed to enable members own land
 - D. Formed when Europeans came
30. Which of the following areas in Kenya is densely populated?
 - A. Turkana
 - B. Mandera
 - C. Kericho
 - D. Wajir
31. The following are elements of a map except?
 - A. Frame
 - B. Key
 - C. Compass
 - D. Relief
32. Which of the following is a cultural artefact?
 - A. Sculptures
 - B. Glasses
 - C. Sufurias
 - D. Hot pots
33. One of the following is not a benefit of mountains to human beings
 - A. They are sources of rivers
 - B. Mountain slopes are good for farming
 - C. They attract tourists who bring foreign exchange
 - D. They are very good settlements locations
34. Which of the following rivers given below does not drain in L. Victoria? _____
 - A. R. Kuja
 - B. R. Turkwel
 - C. R. Mara
 - D. R. Nzoia
35. The Bantu community found in Nyamira is _____?
 - A. Abaluhya
 - B. Abawanga
 - C. Abagusii
 - D. Abakuria
36. Mangrove swamps are mostly found along the _____
 - A. The coast
 - B. River valley
 - C. The Lake Basin
 - D. The Inland swamps
37. The type of trade in which the Kenyan communities interacted in the past was _____
 - A. Barter trade
 - B. Currency trade
 - C. Regional trade
 - D. Import trade
38. The highlands, rift valley and coastal lowlands are _____
 - A. Relief regions
 - B. Drainage features
 - C. Physical regions
 - D. Relief features
39. The following is not a natural forest in Kenya. Which one is it?
 - A. Kinari
 - B. Mau
 - C. Kakamega
 - D. Arabuko-sokoke
40. Which of the following skills were taught to girls?
 - A. Hunting skills
 - B. Defence of clan during war
 - C. Iron working
 - D. Cooking and family care
41. Which aspect of our culture should be preserved
 - A. Encourage marriage between relatives and members of the same clan
 - B. Respect for both young and aged
 - C. African religious beliefs and practices
 - D. Initiation of boys for communities were practised.
42. The following were roles of same age-set except _____
 - A. Provide army for the clan
 - B. Formed a council of elders on growing older
 - C. Were in same age set for rest of their lives
 - D. Chose marriage partners for each other
43. Which way was not used to teach children in traditional society?
 - A. Legends
 - B. Riddles
 - C. Proverbs
 - D. Reading

Use the map below to answer questions 44-47



44. The feature marked Q on the map is a _____
 A. Swamp B. Valley
 C. Mountain D. Desert
45. The plain marked K on the map is _____
 A. Lotikipi B. Awara
 C. Woyamdero D. Kano
46. The river marked M is _____
 A. Athi B. Turkwel
 C. Tana D. Ewasonyiro
47. The feature marked T is called _____
 A. Mt. Kulal B. Cherengani hills
 C. Mt. Marsabit D. Mt. Elgon
48. Which is the correct description of Kenya's geographical position?
 A. $4^{\circ}\text{E}, 42^{\circ}\text{E}, 34^{\circ}\text{W}, 4^{\circ}\text{S}$
 B. $42^{\circ}\text{E}, 34^{\circ}\text{E}$ and 4°N
 C. $34^{\circ}\text{E}, 42^{\circ}\text{E}$ and $5^{\circ}\text{N}, 5^{\circ}\text{S}$
 D. $42^{\circ}\text{E}, 34^{\circ}\text{W}$ and $4^{\circ}\text{S}, 4^{\circ}\text{N}$
49. Which ministry is responsible for training of teachers in all schools
 A. Ministry of Health
 B. Ministry of ILands
 C. Ministry of Education
 D. Ministry of Planning and National Development
50. This is a description of a certain climate
 (i) Its rainfall is between 1,250mm-2,250mm
 (ii) Rainforests are found in this region
 Which climate region is described above?
 A. Equatorial climate
 B. Savanna climate
 C. Lake basin climate
 D. Mountain climate



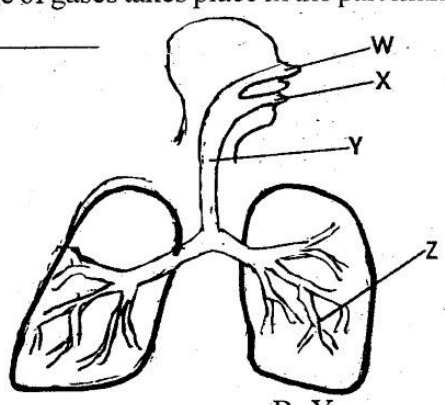
51. The type of rainfall shown above is _____
 A. Floods B. Acid rain
 C. Convectional D. Relief
52. The equator passes through the following towns except one. Which one is it?
 A. Nakuru B. Maseno
 C. Nyahururu D. Nanyuki

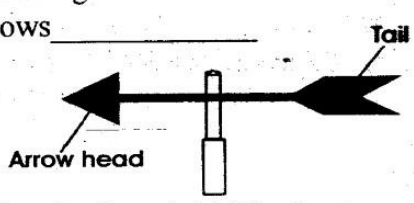

53. Which one of the following does not influence climate change?
 A. Irrigation farming B. Construction of dams
 C. Industrialisation D. General elections
54. One of the following rivers does not have its source from the Western highlands. Which one is it?
 A. River Yala
 B. River Ewaso Nyiro North
 C. River Sodu-Mirio
 D. River Nzoia
55. The element of a map that explains the symbols used in a map is the _____
 A. Title B. Key
 C. Compass D. Frame
56. Which of the following factors will not influence population distribution?
 A. Government policy
 B. Climate and soil
 C. Transport and communication
 D. Religious practices
57. _____ Used different parts of trees such as roots barks and leaves to treat diseases in the traditional communities
 A. Herbalists B. Blacksmiths
 C. Witchdoctors D. Diviners
58. Which of the ways below is a modern way of interaction in Kenya?
 A. Games and sports B. Wrestling
 C. Barter trade D. War and fights
59. We should avoid _____ people with HIV/AIDS
 A. Praying for B. Stigmatizing
 C. Loving D. Relating
60. In order to encourage someone who prefers to ALWAYS work alone, we can use the following proverb. Which one?
 A. Hurry Hurry has no blessings
 B. Once bitten twice shy
 C. Unity is strength
 D. Honour your elders

C.R.E

61. Jesus Christ's death brought to human kind _____
 A. Satisfaction B. Death
 C. Servation D. Torture
62. Complete this verse from Luke 22:42
 "Father, He said, if you will take this _____ of suffering away from me, not my will however but your will be done"
 A. Pain B. Cross
 C. Cup D. Bread
63. The followers of Jesus Christ were first called christians at _____
 A. Jerusalem B. Antioch
 C. Bethlehem D. Capernaum
64. The life of a baby begins _____
 A. When the baby opens school
 B. When the baby is born
 C. When the baby gets baptised
 D. In the mother's womb
65. Christians best express their faith in God through _____
 A. Actions B. Singing
 C. Praying D. Reading the Bible
66. In the story of the good Samaritan (Luke 10:25-27), who is your neighbour?
 A. Anyone who is your friend
 B. Anyone who lives next to you
 C. Anyone who needs your help
 D. Anyone who is from your family

67. God sent prophet _____ to pass judgement on Ahab and Jezebel for their actions.
 A. Jeremiah B. Elijah
 C. Nathan D. Jeremiah
68. Galatians 3:28 teaches us that whether men or women we are one in union with _____
 A. Angels B. Pastors
 C. Jesus Christ D. Prophets
69. Very strong feelings that we have are called _____
 A. Happiness B. Excitements
 C. Kindness D. Emotions
70. From the feast of the wedding in Cana of Galilee we learn that _____
 A. Jesus is the messiah the son of God
 B. Jesus wants us to enjoy life together
 C. Jesus has power over death
 D. Jesus wants us to get drunk during wedding feasts
71. Which one of the following shows what Jesus commands us to do?
 A. Stealing from the rich
 B. Loving our neighbours
 C. Respecting the old only
 D. Obeying our teachers only
72. I praise you because you are to be feared; all you do is strage and wonderful. I know it with all my heart. This verse is from the book of _____?
 A. Genesis 109:24 B. Exodus 19:14
 C. Psalms 139:14 D. 1 Corinthians 14:9
73. What is a covenant?
 A. It is treating people fairly
 B. It is taking bribes
 C. It is relating with people happily
 D. It is an agreement
74. Who among the following prophets sealed the covenant between the Israelites and God?
 A. Prophet Jeremiah B. Prophet Elisha
 C. Prophet Moses D. Prophet Ezekiel
75. Which one of the following brings out the true meaning of a christian?
 A. Refusing to face and endure temptatation
 B. Accepting to serve God even under difficult conditon
 C. Following Jesus and changing mind in hand situations
 D. Serving people who are rich only
76. The _____ tells us that God expects us to be responsible for our actions
 A. Lords prayer B. Apostles creed
 C. Bible D. Sermon on the mount
77. Vafueing and worshipping other things apart from God is called _____?
 A. Devil worship B. Property worship
 C. Lords prayer D. Idolatry
78. Why are human beings special in the eyes of God?
 A. They were created male and female
 B. They were created in God's image and likeness
 C. They were created on the sabbath day
 D. They were created last
79. Respect your father and mother so that your days may be added is commandment number _____?
 A. 5 B. 6
 C. 3 D. 4
80. Which of the following did not happen in the garden of Gethsemane
 A. The angel of the Lord strengthened Him
 B. Jesus produced sweat that looked like drops of blood
 C. Judas Iscariot came to arrest Him
 D. The soldiers divided his clothes amongst themselves
81. Judas Isacriot betrayed Jesus to the chief priest for _____ silver coins
 A. 12 B. 40
 C. 30 D. 50
82. Luke 22:19 "Then He took a piece of bread, gave thanks to God, broke it and gave it to them saying, this is my body, which is given for you, do this in memory of _____
 A. The feeding of the five thousand people
 B. The last supper
 C. The wedding at Cana of Galilee
 D. The raising of Lazarus
83. When Jesus was twelve years old He went to Jerusalem for _____ festival.
 A. Easter B. Passover
 C. Last supper D. Unleavened bread
84. A martyr is a person who dies because of his _____
 A. Unity B. Seriousness
 C. Kindness D. Faith
85. The first miracle that Jesus performed was _____
 A. Raising Jairus daughter
 B. Changing water into wine
 C. Feeding the five thousand people
 D. Walking on water
86. Which one of the following is a reason why we celebrate the Lord's supper?
 A. To remind us about Jesus' death on the cross which was the final sacrifice
 B. To take wine and eat bread
 C. To fear being judged by the church leaders
 D. To be like other religions
87. Your friends is suffering from HIV and AIDs. What should you do as a christian?
 A. Laugh at him
 B. Stop staying together
 C. Avoid his company
 D. Pray visit and encourage him/her
88. Telling lies is breaking God's _____ commandment
 A. 6th B. 7th
 C. 9th D. 8th
89. Which statement is correct?
 A. Traditionally boys and girls were allowed to engage in sex on special occasions
 B. Traditionally boys and girls played together
 C. Boys and girls were expected to have self control
 D. Sex outside marriage was allowed
90. Karisa who has moved from Nairobi to Mombasa has a problem in speaking English, as a christian you should _____
 A. Call him an illiterate boy
 B. Laugh at him whenever he makes a mistake
 C. Tell everyone in the school to bully him
 D. Be friendly and helpful to him.

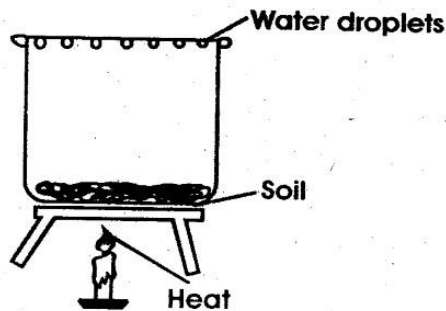
22. The following can be seen at the sky at night EXCEPT
 A. Moon B. Sun
 C. Stars D. Clouds
23. _____ is a virus that weakens the body's defence system
 A. Immunity B. HIV
 C. AIDs D. Syndrome
24. Which one of the following mammals lays eggs
 A. Whale B. Cow
 C. Spiny ant eater D. Bat
25. The function of the rectum is _____
 A. To store indigestible food
 B. To store digested food
 C. To absorb food
 D. To stop digestion
26. The sun is a star that looks bigger than all other stars because
 A. It is big than all other stars
 B. It is hot than all other stars
 C. It is shinny than all other stars
 D. It is closer to us than all other stars
27. HIV is transmitted mainly through _____
 A. body fluids B. insect bites
 C. toilet seat D. sharing food
28. The following animals are carnivores EXCEPT
 A. Lions B. Zebra
 C. Dog D. Leopard
29. Exchange of gases takes place in the part marked _____

- A. Z B. Y
 C. W D. X
30. Sheep are kept for meat and wool. Meat from a sheep is called _____
 A. Mutton B. Pork
 C. Bacon D. Beef
31. The last stage of HIV where the patient's body can not fight diseases is known as _____
 A. Window stage B. Incubation stage
 C. Symptomatic stage D. Full blown AIDS
32. Which one of the following is an invertebrate
 A. Fish B. Rat
 C. earthworm D. Cow

33. Scientist who study weather are known as _____
 A. Meteorology B. Meteorologist
 C. Earthworm D. cow
34. Which one of the following is a function of roots?
 A. photosynthesis
 B. transport of water and mineral salts
 C. absorption of water and mineral salts
 D. to produce seeds
35. AIDS stands for _____
 A. Acquired Immune Deficiency Syndrome
 B. Acquired Immune Deficiency System
 C. Acquired Immunity Deficiency Syndrome
 D. Acquired Immune Deficient Syndrome
36. The young one of a frog is known as _____
 A. Kid B. Tadpole
 C. Fingerling D. Lamb
37. A rain gauge measures rainfall in _____
 A. MM B. ML
 C. CM D. Inches
38. The first set of teeth that a baby grows is known as
 A. Permanent teeth B. Decidious teeth
 C. Wisdom teeth D. Shedding of teeth
39. _____ is an example of tuber crops
 A. Pawpaw B. Peas
 C. Yams D. Coffee
40. Birds have _____ instead of teeth.
 A. Claws B. Beak
 C. Feathers D. Incisors
41. Below is a diagram of weather instrument. The arrow head shows _____

- A. the direction the wind is blowing to
 B. the direction the wind is blowing from
 C. the opposite direction
 D. the direction without wind
42. How many premolars does an adult have on the upper jaw?
 A. Six B. Three
 C. Four D. Two
43. This is a kale plant. It is an example of _____

- A. legume
 B. Cereal
 C. fruit
 D. vegetable
44. The ability of the body to fight diseases is known as _____
 A. Virus B. Syndrome
 C. Immunity D. Deficiency

45. Below are uses of water. Which one is a use of water in the farm?

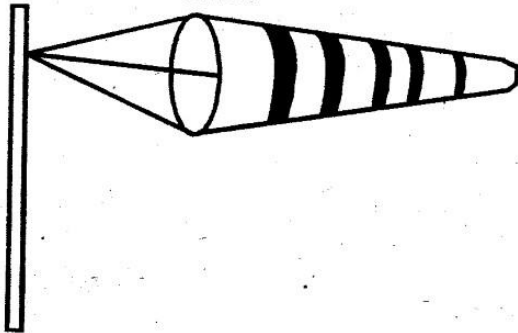
- A. washing B. cooking
C. mixing farm chemicals D. swimming

46. The diagram below shows an activity done by pupils. They were trying to find out whether _____



- A. soil contains air
B. air contains water
C. soil contains water
D. soil contains humus

47. A windsock should be painted in big bright stripes as shown below. This is



- A. to make it beautiful
B. to make it easy to be seen
C. to make it last longer
D. to make it heavier

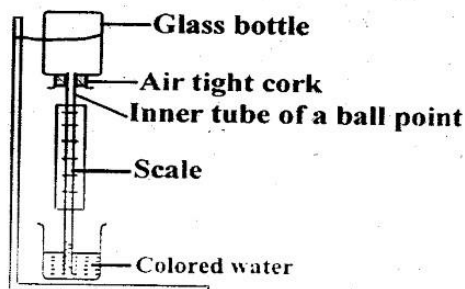
48. Supplying water to the plants is called _____

- A. recreation B. fishing
C. irrigation D. bathing

49. _____ is made of dead rotting plants and animals

- A. mineral particles B. living organism
C. water D. organic matter

50. Use the diagram below to answer question 50



The glass bottle above contains _____

- A. water B. coloured water
C. air D. nothing

**GATUNDU SOUTH DISTRICT
ASSESSMENT TEST END OF TERM I 2015
STD 5 MATHEMATICS**

What is the place value of digit 6 in the following number. 467819

- A. Hundred of thousands B. Tens of thousands
C. Thousands D. Tens

2. Read the number and write it in symbols. Five hundred and fifty five thousand five hundred and five

- A. 555505 B. 555005
C. 5005505 D. 5555005

3. Round off 73 to the nearest tens

- A. 73 B. 7
C. 70 D. 80

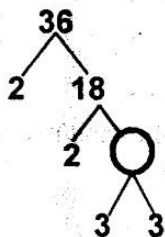
4. Which of the following numbers is divisible by 4?

- A. 306 B. 214
C. 322 D. 224

5. Which of the following numbers is a prime number

- A. 7 B. 9
C. 1 D. 15

6. Complete the factor tree



- A. 8
B. 12
C. 6
D. 9

7. What is the G.C.D of 45 and 60?

- A. 9 B. 15
C. 6 D. 12

8. Add

Km	M	Cm
8	770	25
+3	240	86

- A. 11km 011m 11cm
B. 11km 910m 11cm
C. 11km 010m 11cm
D. 12km 011m 11cm

9. Write 45 in Roman numerals

- A. XXXXX B. XLV
C. VXL D. VXXXX

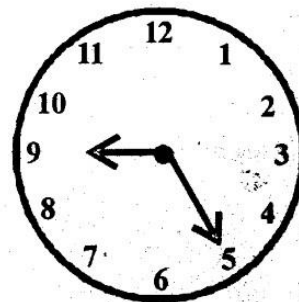
10. Simplify $\frac{2}{4}$

- A. $\frac{1}{2}$ B. $\frac{4}{8}$
C. $\frac{1}{4}$ D. $\frac{2}{8}$

11. What is the next number in the pattern below?

18, 16, 14, 12, _____
A. 13 B. 14

C. 10 D. 12
12. What is the time shown on the clock face below?



- A. 9:05 B. 9:20
C. 5:09 D. 9:25
13. What must be added to 75964 to make 437063?
A. 513027 B. 361099
C. 442901 D. 502927

14. Change $\frac{10}{3}$ into a mixed fraction

- A. $2\frac{2}{3}$ B. $2\frac{1}{3}$
C. $3\frac{1}{3}$ D. $4\frac{1}{3}$

15. Kanini cut 6 bananas into two pieces. She also cut each of the pieces into two. How many pieces did she have altogether?

- A. 24 B. 16
C. 12 D. 10

16. What is the value of $2 \times 2\frac{1}{2}$ in its simplest form

- A. 2 B. $4\frac{1}{2}$
C. $\frac{10}{2}$ D. 5

17. Complete the following statement: $2 \times 3 \times 3 \times 7$ is the prime factorization of _____

- A. 126 B. 42
C. 84 D. 105

18. Add

$$\begin{array}{r} 4.87 \\ + 3.39 \\ \hline \end{array}$$

- A. 8.26 B. 7.26
C. 8.27 D. 8.16

19. Change 9m into cm

- A. 900cm B. 900m
C. 90cm D. 9000cm

20. What is the L.C.M of 3 and 4?


- A. 19 B. 7
C. 12 D. 1

21. Divide 24km 12m by 9

- A. 26km 8m B. 2km 668m
C. 268km D. 268m

22. Which of the following numbers is EVEN?
 A. 8421 B. 1010
 C. 4783 D. 1609
23. Nyambane's land is rectangular. It is 100m long and 25m wide. What is its area in square metres?
 A. 2500m² B. 250m²
 C. 25m² D. 25000m²

24. What is the value of $1 - \frac{2}{7}$?
 A. $\frac{3}{7}$ B. $\frac{1}{7}$
 C. $1\frac{2}{7}$ D. $\frac{5}{7}$
25. What is the area of the shaded triangle?



- A. 14cm² B. 80cm²
 C. 40cm² D. 20cm²
26. Which fraction is equivalent to $\frac{3}{4}$?
 A. $\frac{3}{8}$ B. $\frac{6}{8}$
 C. $\frac{6}{12}$ D. $\frac{5}{8}$

27. Write 4.01 as a fraction

- A. $\frac{41}{100}$ B. $\frac{41}{10}$
 C. $\frac{401}{100}$ D. $\frac{401}{10}$

28. What is the perimeter of a rectangular garden measuring 29m long and 10m wide?
 A. 39m B. 58m
 C. 68m D. 78m

29. Subtract

Km	m	cm
28	64	78
-13	91	87

- A. 14km 972m 91cm
 B. 14km 73m 91cm
 C. 15km 33m 11cm
 D. 15km 972m 91cm
30. Round off 8049 to the nearest hundred
 A. 8050 B. 8000
 C. 8100 D. 800
31. Jane was born 3 hours after midnight. What time was she born?
 A. 3.00pm B. 3.00 noon
 C. 3.00am D. 3.00 midnight
32. Work out $1\frac{1}{2} + 3\frac{1}{4}$
 A. $4\frac{2}{6}$ B. $4\frac{3}{4}$

- C. $4\frac{2}{4}$ D. $\frac{3}{4}$
33. One crate of soda contains 24 bottles. How many bottles of soda are there in 357 crates?
 A. 8568 B. 381
 C. 2132 D. 1142

34. Mongina spent sh 722.70 to buy six dresses. If she spent the same amount on each dress. What was the cost of each dress?
 A. sh 722.70 B. sh 4336.20
 C. sh 120.45 D. sh 728.70

35. Which of the following numbers is exactly divisible by 6?
 A. 16 B. 472
 C. 69 D. 378

36. Subtract $\frac{4}{9}$ from $\frac{2}{3}$
 A. $\frac{2}{6}$ B. $\frac{10}{9}$
 C. $\frac{2}{9}$ D. $\frac{6}{12}$

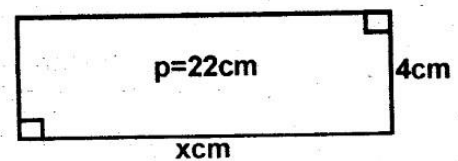
37. The length of a square land is 23m. What is its area?
 A. 529m² B. 92m²
 C. 46m² D. 111m²

38. Multiply 1.3×69
 A. 119.7 B. 2.197
 C. 219.7 D. 21.97

39. Arrange the following fractions from the smallest to largest $\frac{2}{3}, \frac{3}{4}, \frac{7}{12}$ and $\frac{1}{6}$

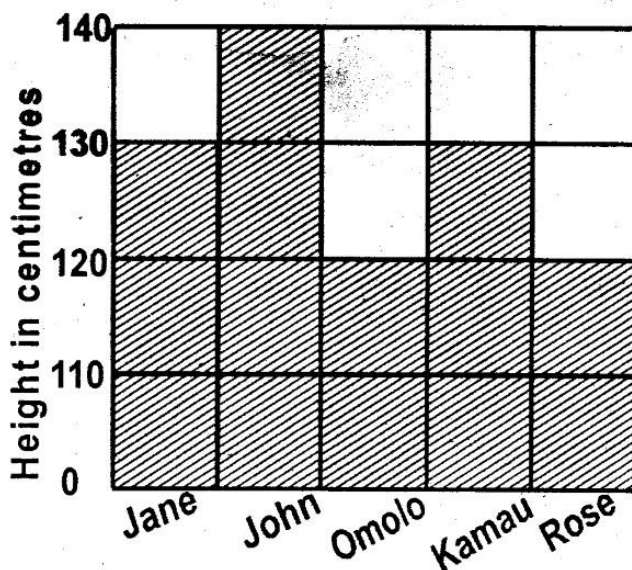
- A. $\frac{7}{12}, \frac{3}{4}, \frac{2}{3}, \frac{1}{6}$ B. $\frac{2}{3}, \frac{3}{4}, \frac{1}{6}, \frac{7}{12}$
 C. $\frac{1}{6}, \frac{2}{3}, \frac{3}{4}, \frac{7}{12}$ D. $\frac{1}{6}, \frac{7}{12}, \frac{2}{3}, \frac{3}{4}$

40. Find the value of x if the perimeter of the figure below is 22cm.



- A. 4cm B. 26cm
 C. 7cm D. 14cm
41. Kamau bought 1.3m of clothing material. If he used 0.828m of it, what was the length of the material that remained?
 A. 2.128m B. 0.528m
 C. 1.528m D. 0.472m
42. Change three and a half hours into minutes
 A. $3\frac{1}{2}$ min B. 180min
 C. 210min D. 240min

43. Peter worked in the garden for 360 minutes. For how many hours did he work in the garden?
- A. 6 hours
B. 60 hours
C. 9 hours
D. 90 hours
44. Work out: $966 \div 21 =$
- A. 36
B. 4 Rem 12
C. 45
D. 46
45. Convert 10m 65cm into centimetres
- A. 1065cm
B. 75cm
C. 165cm
D. 650cm
46. Add: $62397 + 309468 + 507$
- A. 362272
B. 371372
C. 372372
D. 371865
47. What is $\frac{2}{3} + \frac{1}{6}$
- A. $\frac{3}{9}$
B. $\frac{3}{6}$
C. $\frac{6}{6}$
D. $\frac{5}{6}$
48. Subtract: $2\frac{1}{8} - 1\frac{5}{8}$
- A. $\frac{4}{8}$
B. $\frac{6}{8}$
C. $1\frac{4}{8}$
D. $2\frac{4}{8}$
49. Write $4\frac{2}{5}$ as an improper fraction
- A. $\frac{11}{5}$
B. $\frac{20}{5}$
C. $\frac{22}{5}$
D. $\frac{40}{5}$
50. The following graph shows the height of five pupils



What is the total height of the 5 pupils?

- A. 640
B. 510
C. 520
D. 540