

STEGA SERIES 2015

KG2 7TH CODE

MATHEMATICS

NURSERY

NAME _____

DATE _____

Count

$$\begin{array}{l} g g g \\ g g g = \end{array}$$

$$\begin{array}{l} o o o o \\ o o o o = \end{array}$$

$$\begin{array}{l} c c c \quad c c \\ c c c + c c = \end{array}$$

$$b b + b b =$$

Work out

$$3 + 3 =$$

$$\begin{array}{r} 4 \\ + 6 \\ \hline \end{array}$$

$$8 - 3 =$$

$$\begin{array}{r} 12 \\ - 6 \\ \hline \end{array}$$

$$15 - 5 =$$

$$4 + 0 + 3 =$$

$$\begin{array}{r} 2 \\ + 2 \\ \hline 2 \\ \hline \end{array}$$

$$3 - 1 =$$

$$\begin{array}{r} 5 \\ + 5 \\ \hline \end{array}$$

Write in words

7 _____

6 _____

5 _____

1 _____

9 _____

STEGA SERIES 2015

KG2 7TH CODE


LANGUAGE

NURSERY


NAME _____

DATE _____

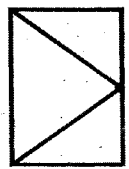
Fill in



gr ___ ss




b ___ k



d ___ r



dr ___ ss



m ___ t

b ___ lt

tr ___

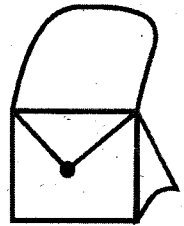

p ___ st

cr ___ p

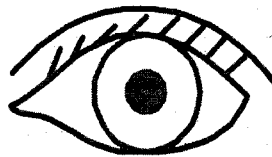


l ___ g

w ___ ll

b ___ sk ___ t



3



Write well

ipz _____

ilkm _____

uth _____

oofd _____

sslag _____

anp _____

urchch _____

ppale _____

STEGA SERIES 2015

KG2 7TH CODE

KISWAHILI

NURSERY

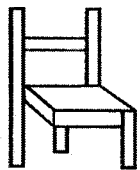
NAME _____

DATE _____

1. Jaza silabi

a _____ i _____ u
ta _____ to _____
_____ pe _____ pu
_____ mi _____ mu
ra _____ re _____ ri _____
ba _____ bo _____

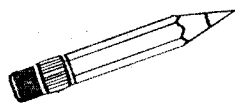
2. Jaza pengo



k _____ t _____



_____ s _____



k _____ l _____ m _____

1

m _____ ja



kis _____



mt _____

g _____ r _____

p _____ ka

pas _____

Andika majina








10









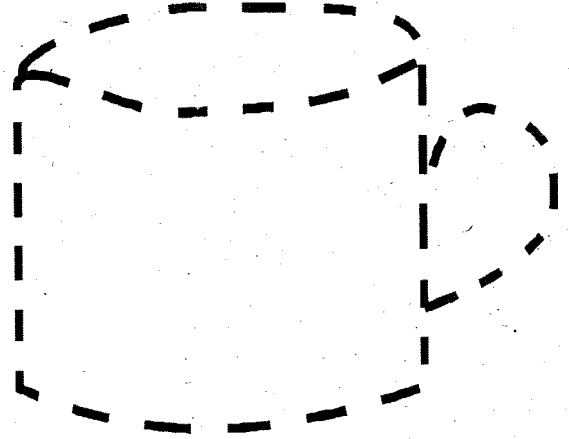

STEGA SERIES 2015

KG2 7TH CODE

CREATIVE & PATTERN NURSERY

NAME _____ DATE _____

1. Join dots

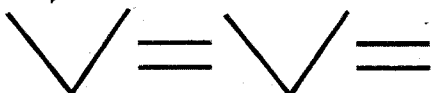
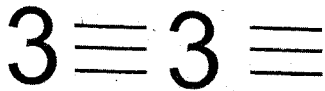


Read and draw

| | | | | |
|-----|-------|--------|--------|-----|
| bag | glass | flower | basket | jug |
| | | | | |

2.

Complete the pattern



STEGA SERIES - 2015

KG2 7TH CODE

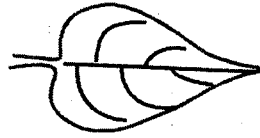
SCIENCE

NURSERY

NAME _____

DATE _____

1. This is a _____.



2. Name three parts of the body.

a) _____

b) _____


c) _____

3. This is a _____



4. Name the type of weather.


a)



b)



c)



5. We smell with our _____.

6. I walk with my _____.

7. A fish lives in _____.

8. We should _____ our hands before eating.

9. I have _____ eyes.

10. This is an _____



STEGA SERIES 2015

KG2 7TH CODE

SOCIAL & C.R.E

NURSERY

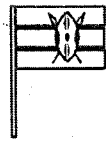
NAME _____

DATE _____

1. When we are sick we go to the _____.
2. Father and mother are my _____.
3. Many trees makes a _____.
4. Milk is _____ in colour.
5. This is a _____.



6. We wash our bodies with _____ and _____.
7. This is a _____.



8. _____ are animals that are kept at home.
9. We dry our bodies using a _____.
10. A hen gives us _____ and _____.

C.R.E


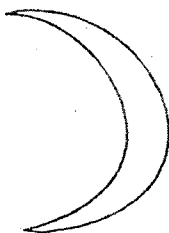
1. Jesus is the son of _____.
2. _____ This is a _____.



3. _____ was swallowed by a fish.
4. Cain killed his brother _____.
5. A _____ is a holy book of God.
6. God loves _____ children.
7. A _____ is a house of God.



8. _____ walked on water.
9. Name these things God created.



10. _____ is our father in heaven.

STEGA SERIES 2015

KG2 7TH CODE

READING/KUSOMA

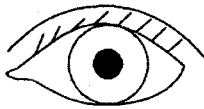
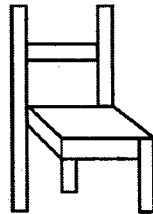
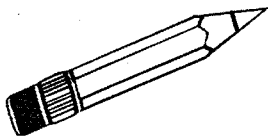


NURSERY

NAME _____

DATE _____

READING

1. Read the pictures



2. Read the words

gun dad drum

vest my wall



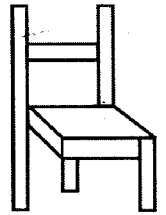
dress desk boot

Read these sentences

1. Dad is a fat man.
2. It is very hot.
3. My mum is good.

KUSOMA

1. Soma picha



Soma maneno

uji leo saa

paka gari mama

ule sita tena

Soma sentensi

1. Baba na mama.
2. Kata keki.
3. Beba hema ya kaka.

TARGETER WINGS EVALUATION TEST



NURSERY - YEAR 2015

007



NUMBER WORK

Date:.....

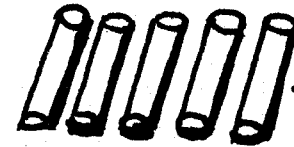
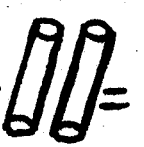
NAME..... SCHOOL.....

1. Write 1 - 20

2. Add

 +  = _____

 +  = _____

 +  = _____

 +  = _____

3. Add

$4 + 7 =$ _____

$2 + 2 =$ _____

$3 + 2 =$ _____

$5 + 4 =$ _____

$6 + 7 =$ _____

4. Take away

$$\begin{array}{r} 5 \\ - 2 \\ \hline \end{array}$$

$$\begin{array}{r} 9 \\ - 4 \\ \hline \end{array}$$

$$\begin{array}{r} 8 \\ - 8 \\ \hline \end{array}$$

$$\begin{array}{r} 6 \\ - 3 \\ \hline \end{array}$$

5. Add

$2 + 2 + 1 =$ _____

$3 + 1 + 2 =$ _____

$4 + 2 + 0 =$ _____

$5 + 1 + 3 =$ _____

(Total marks 100)