



001

SOLUTION TRIAL EXAMS 2015
Standard Three

NAME SCHOOL DATE.....

MATHS

1. What is the place value of 6 in 7672?

2. $172 + 14 =$

3.
$$\begin{array}{r} 49 \\ -28 \\ \hline \end{array}$$

4.
$$\begin{array}{r} 785 \\ -392 \\ \hline \end{array}$$

5. $582 \square = 320$

Arrange from the greatest to the least

6. 425, 808, 128, 78, 54

7. 101, 220, 22, 48, 178, 08

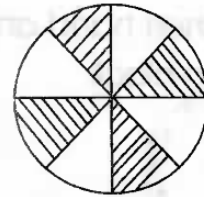
8. A cat has 4 legs. How many legs will 5 cats have?

9. A class has 54 pupils. If 32 are girls, how many boys are in that class?

10. $95 = 11 + \square$

11. $14 - 8 = \square$

12. What fraction is shaded?



13. $316 =$ _____ hundreds _____ tens _____ ones

14. A rectangle has _____ sides

15. Find the next number.
0, 4, 8, 12 _____

16. Name the shape



17. $18 \div 3 =$

18.
$$\begin{array}{r} 849 \\ + 649 \\ \hline \end{array}$$

19.
$$\begin{array}{r} 1000 \\ - 1 \\ \hline \end{array}$$

20. $10 \times 9 =$ _____

21. $4 \times 4 \times 2 =$

22. $6 \times 0 =$

23. Add 58 and 8 _____

24. _____ is the third day of the week.

25. Draw an oval

26. Write in words

222 = _____

27. Draw the short hand and long hand to show 3 o'clock



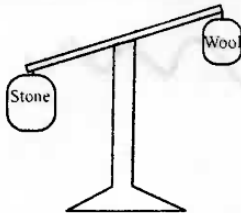
28. What is half of 20? _____

29. $\frac{1}{4} + \frac{1}{4} =$

30. $\frac{2}{8} - \frac{1}{8} =$

31. Which is the least 205 or 259?

32. Which one is heavier?



33. $12 \div 4 =$

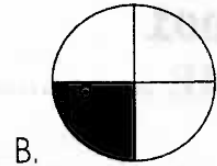

34. Take away 23 from 50. _____

35. 5278 = _____ thousands _____ hundreds _____ tens _____ ones

36. Mr Njoroge had 200 sheep. He sold 128 of them. How many were left? _____

37. Complete 3, 6, 9, _____, _____

38. Which one shows $\frac{1}{2}$ shaded?



39. Which numbers come after 319? _____

Complete

40. 211, 212, 213, 214, _____

41. 20, _____ 18, _____ 16, _____

42. $\begin{array}{r} 46 \\ - 33 \\ \hline \end{array}$

43. Two weeks have _____ days

44. $74 + 22 =$

45. $16 - 4 =$

46. $3 \times 3 \times 3 =$

47. $99 + \square = 100$

48. $\begin{array}{r} \text{Shs} \quad \text{cts} \\ 72 \quad 60 \\ -10 \quad 20 \\ \hline \hline \end{array}$

49. Mary had sh 390. Her uncle added her sh 250 more. How much did she have in total? _____

50. Five pupils shared 35 shillings. How much did each pupil get? _____



001

SOLUTION TRIAL EXAMS 2015
Standard Three

NAME SCHOOL DATE.....

ENGLISH

Read the story and fill in the correct words in the bracket.

Peter ___1___ (wear, wore, wearing) a black leather jeans and ___2___ (an, a, with) red-spotted T-shirt. The other normal attire he ___3___ (always, with, take) wears ___4___ (are, with, and) golden ___5___ (rangs, rings, rungs) around his neck.

Fill in the blanks

- 6. Acc__d__nt
- 7. D__m__ge
- 8. Br__k

Use past tense

- 9. Drink _____
- 10. Run _____
- 11. Rain _____

Use plurals

- 12. Apple _____
- 13. Leaf _____

14. Loaf _____

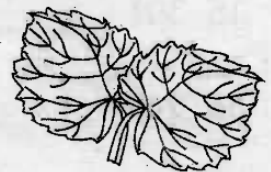

Use "an", "a" or "with"

- 15. This is _____ elephant.
- 16. There is _____ big snake next to the gate.
- 17. All the girls are playing _____ the boys.


Use opposites

- 18. Better _____
- 19. Ugly _____
- 20. Absent _____

Name the pictures



- 21. _____
- 22. _____



- 23. _____
- 24. _____

Write correctly

25. hrcuch

26. lchck

27. apphy

Add -ing

28. Write _____

29. Arrive _____

30. Watch _____

Choose the odd one out

31. Baker, pilot, cat, driver _____

32. Zebra, monkey, buffalo, egg _____

33. Red, green, apple, pink. _____

Write in words

34. 211 _____

35. 301 _____

36. 2401 _____

37. A person who sells vegetables is called _____

38. A person who repair shoes is called a _____

39. A car with three wheels is called _____

Use "has" or "have"

40. My father _____ bought a car.

41. Our children _____ a bad flu.

42. I _____ only one brother.

Write correct name of the young ones below.

43. A baby frog is called _____

44. A baby cat is called a _____

45. A baby cow us called a _____

Write in singular

46. Knives _____

47. These are girls _____

Read the story and answer the questions below.

One day on Thika super highway there was a serious accident. A motorbike hit a Nissan matatu. The cyclist and his two passengers died on the spot. It was a very saddening scene.

48. Which vehicles were involved in the accident ?

49. The accident involved which vehicles ?

50. How many people died in the accident ?

SOLUTION TRIAL EXAMS 2015

Standard Three

**001**

NAME SCHOOL DATE.....

READING

Read the words.

- | | | | |
|------------|-------------|---------------|--------------|
| 1. ugly | 6. appetite | 11. vision | 16. potter |
| 2. fine | 7. spoken | 12. afternoon | 17. sinking |
| 3. created | 8. shallow | 13. drought | 18. blurred |
| 4. hallo | 9. glue | 14. brave | 19. optician |
| 5. cruel | 10. coward | 15. parent | 20. hero |

Read the sentences.

21. My uncle was knocked down by a motor bike.
22. When we went abroad it was all fun.
23. These are my mother's jewelry.
24. Can you spot the yellow-glowing star in the sky.
25. There was a lot of fun and celebrations at my cousin's wedding.

KUSOMA

Soma maneno haya.

- | | | | |
|--------------|--------------|------------------|------------|
| 1. kitoweo | 6. baadhi | 11. kiboko | 16. nabii |
| 2. shirikizo | 7. tarumbeta | 12. fadhili | 17. kiziwi |
| 3. mbwembwe | 8. mawele | 13. rauka | 18. mizani |
| 4. samli | 9. kucha | 14. shamrashamra | 19. baraka |
| 5. kiwewe | 10. kisigino | 15. kelele | 20. geuka |

Soma sentensi hizi.

21. Mama yule alipoona askari alitimua mbio.
22. Wuui! Wuui! Sauti ya huzuni ikasikika.
23. Watoto wa shule walichapwa vilivyo.
24. Simba aliuliwa na genge la wahuni.
25. Wachuuzi walikimbizwa na askari wa jiji.



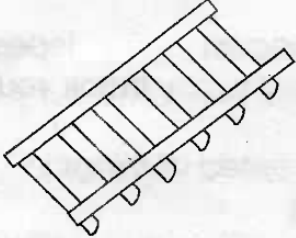
SOLUTION TRIAL EXAMS 2015

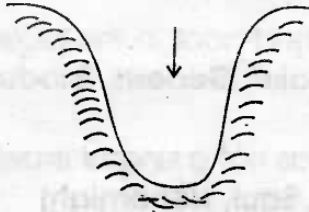
Standard Three

NAME SCHOOL DATE.....

SOCIAL STUDIES

1. Compass points are used to show _____ (speed, direction, area)
2. Which of the following is not a physical feature? _____ (Lake, Dam, Mountain)
3. When singing the National Anthem we should _____ (sit, run, stand)
4. People are sad in a _____ ceremony. (wedding, birthday, burial)
5. The sun rises in the _____ (South, West, East)
6. The main points of a compass are called _____ points (cardinal, compass, direction)
7. This is a _____ feature.


8. We go to school to _____ (play, run, learn)
9. A Maasai house is called a _____ (manyatta, simba, thingira)
10. A pedestrian should cross the road at a _____ crossing (red, zebra, traffic light)
11. Which one is not an element of weather? _____ (Soil, Clouds, Sunshine)
12. Mashujaa day is celebrated on _____ of October (20th, 10th, 18th)
13. Which one is a cash crop? _____ (Potatoes, Maize, Tea)
14. Too much rain causes _____ (drought, famine, floods)
15. People who died long ago are our _____ (fathers, relatives, ancestors)
16. _____ people belong to the bantu speakers. (Akamba, Luo, Kalenjin)
17. The Kikuyu call their God _____ (Mulungu, Nyasaye, Ngai)
18. The _____ is the head of a family (mother, uncle, father)
19. When its hot we wear _____ clothes (light, heavy, none)
20. We carry an _____ when it is raining (clothes, umbrella, jacket)
21. The quickest means of transport is _____ (air, road, water)
22. The drawn diagram is of a _____



(mountain, valley, river)

23. We should keep our houses _____
(tidy, untidy, muddy)
24. People who live near lakes are likely to be _____
(farmers, businessmen, fishermen)
25. When we are sick we go to a _____
(church, hospital, market)
26. A _____ is not a member of a family.
(mother, friend, father)
27. _____ is made up of two or more divisions (District, Location, Province)
28. People living together make a _____
(clan, community, group)
29. _____ is not a member of a nuclear family. (A mother, An uncle, A child)
30. A person who treats sick animals is called a _____
(pastor, nurse, veterinary)

C.R.E.

31. _____ died for our sins
(Jesus, Parents, Friends)
32. It is _____ is to obey our parents.
(bad, good, cruel)
33. The _____ is a prayer for our country
(National anthem, Lord prayers, grace)
34. The bible is divided into _____ parts
(2,4,6)
35. The second book in the bible is called _____
(Lake, Genesis, Exodus)
36. _____ was not a king of Israel
(David, Saul, Nehemiah)

37. Jill fell down. We should _____ for her
(laugh, throw stones, be sorry)
38. _____ was the in-law of Naomi
(Martha, Ruth, Jacob)
39. Prophet _____ spoke about the birth of Jesus Christ. (John, Isaiah, Mary)
40. Adam and _____ were put in the garden of Eden. (Sarah, Elizabeth, Eve)
41. My father's brother is my _____
(aunt, uncle, cousin)
42. The last book in the New Testament is _____
(Genesis, Malachi, Revelation)
43. _____ was the disciple whom Jesus loved (Peter, John, Judas)
44. Jesus grew up in _____
(Bethlehem, Nazareth, Judah)
45. _____ was Samuel's mother
(Hannah, Mary, Martha)
46. Jesus healed _____ lepers but only one went to say thank you(10,4,7)
47. God created all things in _____ days
(6,7,8)
48. _____ was sold by his brothers to Egypt (John, Lazarus, Joseph)
49. Who was not a son of Zebedee?
(James, John, Peter)
50. People who live near us are our _____
(friends, visitors, neighbours)



001

SOLUTION TRIAL EXAMS 2015

Standard Three

NAME SCHOOL DATE.....

SCIENCE


1. The eye is the sense organ for _____
(tasting, touching, seeing)

2 We don't share _____
(books, socks, classes)

3. A _____ is a useful animal at home.
(cow, lion, snake)

4. A _____ plant grows in water
(cactus, reed, deciduous)

5. The weather is _____




(sunny, cloudy, rainy)

6. Big things look small when they are _____
(near, far, beside you)

7. We eat the _____ of sugarcane.
(leaves, roots, stem)

8. _____ plants shed their leaves during winter. (Cactus, Water-lilly, Decidious)



9. Which animal stays in this? _____
(Cow, Ant, Spider)

10. People who grow crops and keep animals are called _____
(teachers, farmers, pastrolists)


11. The unwanted plants growing in the garden are called _____
(weeds, plants, crops)

12. People with eye problems wear _____
(goggles, darks, spectacles)

13. People who do not feel well should see a _____ (clinic, doctor, hospital)

14. Passing messages using body movement is called _____
(movement, gestures, cry)

15. The drawn plant is called _____



(cactus, reed, oyster).

16. The above drawn plant grows in _____ areas. (wet, moist, dry)

17. Food should be _____ before swallowing. (roasted, chewed, cooking)


18. Millipedes and snails moves by _____
(running, crawling, flying)

19. A place where a plant grows best is its _____ (shamba, forest, habitat)

20. Blind people cannot _____
(talk, eat, see)

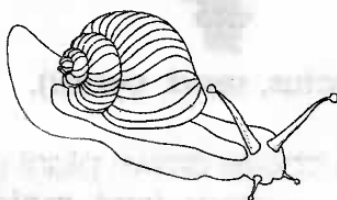
21. Which one is not necessary for germination of a seed ? _____
(water, soil, air)

22. A fruit develops from the _____
(leaves, flower, root)
23. Healthy leaves are _____ in colour.
(green, red, yellow)
24. Which animal protects itself by stinging? _____
(Bee, Snail, Housefly)
25. When we look at the sky at night we see the following except the _____
(Clouds, Stars, sun)
26. Which of these has scales ?
(cow, cat, lizard)
27. The drawn tool is called _____



(panga, fork, forked, jembe)

28. Germs make a person _____
(healthy, sick, fat)
29. The best soil for modelling is _____
(sand, loam, clay)
30. Sun, moon, stars are source of _____
(light, energy, brightness)
31. A true insect has _____ legs (8,9,6)
32. Good behaviour while having meals is called _____ manners
(table, kitchen, latrine)
33. The drawn animal protects itself by _____



(Hiding in the shell, running, flying)

34. Hygiene is the rule of _____
(first aid, cleanliness, walking)
35. A doctor who treats our eyes is called _____
(dentist, optian, surgeon)
36. The drawn diagram is a _____



(plane, kite, leaf)

- 37: The best time to fly the above is during a _____ day.
(Cloudy, rainy, windy)
38. _____ and water is used to wash toilet **(soap, milk, soil)**
39. Peter wore a heavy jacket. It must have been a _____ day.
(cold, sunny, calm)

Use the below chart to answers the questions below

Mon	Tue	Wed	Thur	Fri	Sat	Sun

40. Which two days were good for washing clothes ? **(Monday and Friday, Wednesday and Sunday, Tuesday and Friday)**
41. on which days did it rain? **(Sunday and Tuesday, Friday and Monday, Tuesday and Saturday)**
42. The best day to fly a kite was _____
(Monday, Sunday, Tuesday)
43. Which day was cloudy ?
(Wednesday, Friday, Sunday)
44. _____ is good for our health.
(Exercise, Feathers, Hardwork)
45. Removing dust from grains is called _____
(irrigation, farming, winnowing)
46. Small children should sleep for _____ hours in a day **(8-10, 24-30, 2-6)**
47. Part of a plant that absorbs water in the soil is called _____
(leaf, root, branch)
48. We use a _____ to drive nails.
(panga, jembe, hammer)
49. The first treatment given to an injured person is called _____
(ambulance, injury, first aid)
50. John was burnt by a hot liquid. He got a _____ **(burn, scald, bruise)**

JINA..... SHULE TAREHE.....

KISWAHILI

Soma taarifa kisha ujaze vifungu kwa neno lililo kwenye mabano kwa ufasaha

Siku moja mimi ___1___ (kwa, na, za) kaka yangu Chombo, ___2___ (tuliendaga, tulikwenda, tulienda) kumtembelea mjomba ___3___ (wangu, kwangu, wetu) Abdallah. Tulimkuta ___4___ (kwa, kwenye, kwake) bustani La boma lake. Alikuwa akipalilia miche ___5___ (zake, kwake, zao)

Jaza pengo

6. Mw ___ng___ z___

7. P ___ng___ ni

8. Ja ___id___


Andika kwa wingi

9. Mvuvi huyu _____


10. Tunda hili _____

11. Ugali huu _____

Andika majina ya picha/ Michoro.



12. _____ 13. _____



14. _____ 15. _____

Andika kinyume cha maneno haya

16. Mweusi _____

17. Kimbia _____

18. Mchana _____

Kamilisha sentensi hizi

19. Ninaona kwa _____

20. Wiki mbili ina siku _____

21. Tunatafuna kwa kutumia _____

Tumia sifa-angu

22. Huu ni ufunguo _____

23. Haya ni mayai _____

24. Huyu ni mzazi _____

Kamilisha methali zifuatazo.

25. Haba na haba hujaza _____.
26. Mwenda pole _____.
27. Mwenye _____ haambiwi tazama.

Chagua jibu sawa.

28. Vyakula _____ ni vyetu.
(hiki, hivi, haya)
29. Matunda _____ tunayapenda sana
(hiki, hii, haya)
30. Ng'ombe _____ ni wetu.
(hao, haya, hawa)

Andika kwa wakati uliopita.

31. Mgonjwa atapona _____
32. Uzi unakatika _____
33. Zainabu ataandika _____

Chagua jibu sahihi

34. Chakula cha asubuhi huitwa _____
35. Wakati baada ya aduhuri huitwa _____
36. Mwaka moja una miezi mingapi ? _____



Kanusha amri hizi

37. Juma fungua mlango _____
38. Rhoda chora picha ubaoni _____
39. Watoto ketini chini _____

Andika majina ya maumbo



40. _____ 41. _____



42. _____

Andika kwa umoja.

43. Kalamu _____
44. Maji _____
45. Wasichana _____

Tumia "huu" au "hii".

46. Mti _____ ni mrefu.
47. Mikeka _____ ni chafu.

Soma hadithi kisha ujibu maswali

Addah alikuwa ni msichana mrembo sana katika kijiji cha Butula. Wazee kwa vijana walimpenda sana kwa tabia nzuri aliyokuwa nayo. Aliheshimu wakubwa kwa wadogo. Sifa zake zikaenea kote wilayani.

48. Hadithi inanena kuhusu nani ? _____
49. Aliishi katita kijiji gani ? _____
50. Kwa nini watu walimpenda? _____