

**STANDARD FOUR 2015
MARKING SCHEME**

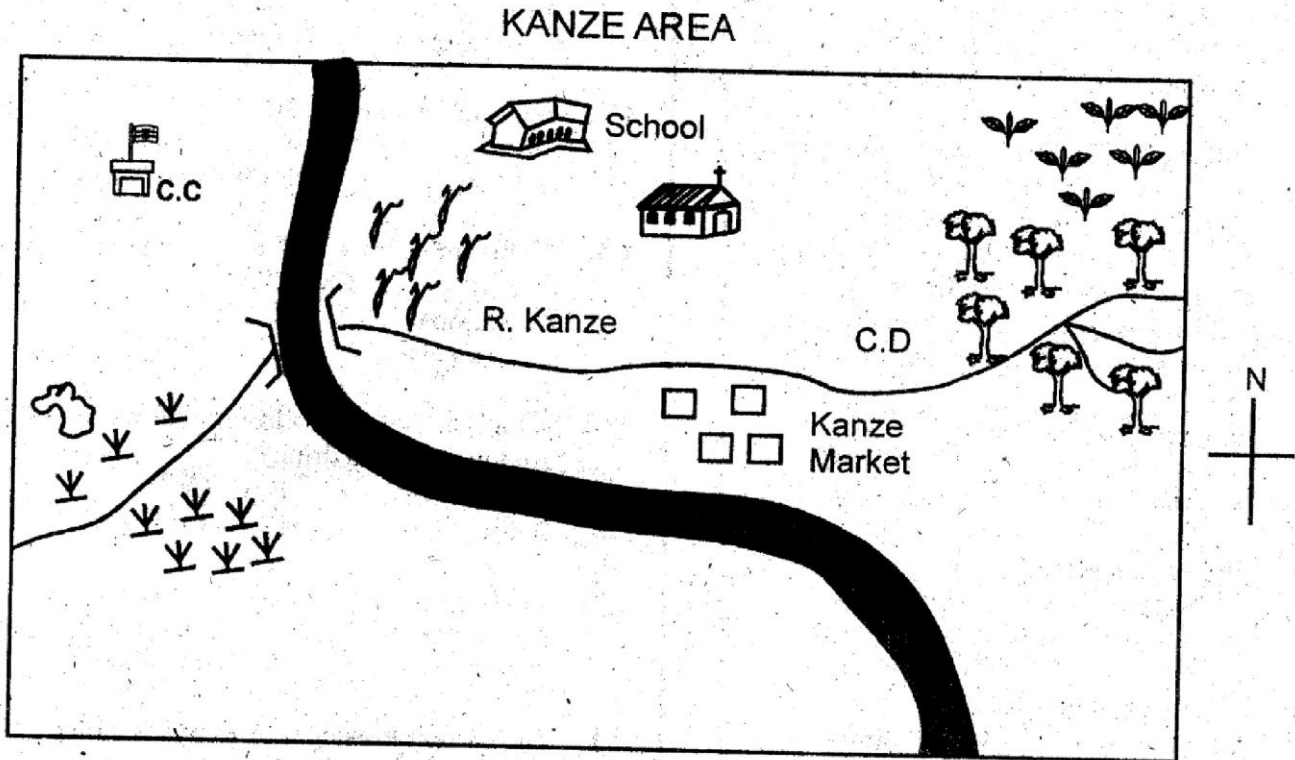
ENGLISH	KISWAHILI	MATHS	SCIENCE	SOCIAL STUDIES	
1. A	1. A	1. B	1. B	1. C	51. D
2. D	2. C	2. C	2. A	2. B	52. B
3. C	3. B	3. A	3. B	3. C	53. A
4. A	4. D	4. D	4. D	4. D	54. C
5. B	5. C	5. A	5. D	5. A	55. C
6. C	6. A	6. C	6. C	6. B	56. A
7. D	7. B	7. A	7. B	7. D	57. D
8. B	8. B	8. B	8. B	8. A	58. B
9. C	9. D	9. D	9. D	9. C	59. A
10. D	10. A	10. C	10. B	10. B	60. C
11. A	11. C	11. A	11. C	11. D	R.E.
12. B	12. B	12. B	12. C	12. B	61. A
13. C	13. C	13. A	13. A	13. A	62. B
14. C	14. D	14. A	14. B	14. D	63. A
15. A	15. A	15. D	15. D	15. D	64. B
16. C	16. C	16. A	16. C	16. C	65. C
17. A	17. A	17. B	17. D	17. B	66. D
18. B	18. C	18. B	18. C	18. C	67. B
19. B	19. C	19. C	19. D	19. B	68. B
20. D	20. B	20. D	20. A	20. C	69. D
21. D	21. D	21. A	21. C	21. C	70. C
22. C	22. A	22. D	22. A	22. A	71. A
23. A	23. C	23. B	23. C	23. D	72. D
24. B	24. D	24. C	24. B	24. C	73. A
25. C	25. B	25. B	25. C	25. C	74. B
26. D	26. C	26. B	26. A	26. B	75. C
27. B	27. B	27. C	27. A	27. D	76. C
28. A	28. A	28. A	28. C	28. A	77. A
29. C	29. B	29. A	29. B	29. C	78. D
30. B	30. D	30. D	30. D	30. D	79. C
31. B	31. C	31. A	31. A	31. B	80. D
32. D	32. A	32. C	32. A	32. B	81. B
33. A	33. A	33. C	33. C	33. C	82. A
34. B	34. D	34. A	34. C	34. B	83. D
35. C	35. B	35. C	35. D	35. A	84. B
36. A	36. C	36. A	36. A	36. C	85. B
37. C	37. D	37. C	37. C	37. C	86. A
38. B	38. C	38. C	38. D	38. D	87. C
39. D	39. A	39. B	39. D	39. B	88. C
40. A	40. B	40. C	40. A	40. A	89. D
41. A	41. C	41. A	41. A	41. B	90. A
42. C	42. D	42. A	42. C	42. A	
43. B	43. A	43. D	43. D	43. C	
44. D	44. B	44. D	44. B	44. B	
45. C	45. C	45. D	45. D	45. C	
46. D	46. B	46. B	46. A	46. D	
47. B	47. A	47. A	47. B	47. C	
48. B	48. B	48. B	48. A	48. A	
49. C	49. A	49. C	49. C	49. C	
50. D	50. C	50. D	50. D	50. A	

STANDARD FOUR 2015 SPECIAL EXAM

**SOCIAL STUDIES AND
RELIGIOUS EDUCATION**

Time: 2 hours 15mins

PART I: SOCIAL STUDIES



KEY

Forest	C.D - Cattle Dip	Tea
Grass	Maize	Chief's camp
River & bridge	School	Church
Quarry	Market	Tarmac road

E-mail: jesmaprintingpress@gmail.com

First Edition

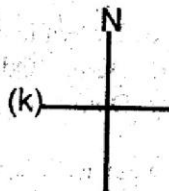
© Jesma Printingpress Ltd. T&E: 0775242042 Nairobi

TURN OVER

Use the map of Kanze area above to answer questions 1 - 7.

1. What is the direction of the market from the Chief's camp?
A. North West B. North East
C. South East D. South West
2. What cash crop is grown in Kanze area?
A. Maize B. Tea
C. Pyrethrum D. Coffee
3. What shows that cattle keeping is being practised at Kanze area?
A. Forest B. Grass
C. Cattle dip D. Market
4. Which facility is missing at Kanze area?
A. Church B. School
C. Village D. Hospital
5. People of Kanze area are
A. Christians B. Hindus
C. Traditionalists D. Islamic
6. A quarry is used to get
A. stones B. minerals
C. sand D. ashes
7. River Kanze flows from _____ to _____.
A. North to South B. West to East
C. South to North D. East to West
8. A fairly flat land is called
A. a plain B. a swamp
C. a plateau D. an escarpment
9. Which one of the following is **NOT** an example of natural physical feature?
A. River B. Towns
C. Mountain D. Lake
10. Kenya has _____ counties.
A. seven B. forty seven
C. eight D. seventeen
11. The highest mountain in Kenya is called
A. Mt Elgon B. Mt. Kilimanjaro
C. Mt. Marsabit D. Mt. Kenya
12. Crops grown for money or sale are called
A. food crops B. cash crops
C. perennial crops D. money crops
13. The Maasai call their God
A. Enkai B. Asis
C. Tororok D. Waga
14. Winnowing cereals can be best done on
A. cloudy day B. calm day
C. rainy day D. windy day
15. Beef cattle are kept in
A. ponds B. dips
C. shambas D. ranches
16. Illegal hunters of wild animals are called
A. hunters B. bandits
C. poachers D. thieves
17. The head of a county is called
A. President B. Governor
C. Chief D. Senator
18. Rivers in Kenya end up in three of the following areas **EXCEPT**
A. swamps B. lakes
C. mountains D. ocean
19. Which one of the following crops can be used in making a drink?
A. Wheat B. Coffee
C. Sisal D. Cotton
20. Elections in Kenya are conducted after every
A. ten years B. fifteen years
C. five years D. twenty years
21. The current President of Kenya is called
A. Jomo Kenyatta B. Oginga Odinga
C. Uhuru Kenyatta D. Daniel arap Moi
22. Food, clothes and houses are known as
A. basic needs B. secondary needs
C. luxury goods D. needs for the youth
23. We have three major types of communities in Kenya. Which one is **NOT**?
A. Cushites B. Nilotes
C. Bantus D. Kwa
24. The official counting of people is known as
A. nomination B. election
C. census D. head county.
25. Which of the following is **NOT** a cash crop?
A. Coffee B. Tea
C. Millet D. Sunflower

26. Luo called their God
 A. Ngai B. Nyasaye
 C. Akuj D. Engoro
27. The ceremony marking the beginning of adulthood is called
 A. circumcision B. matrimony
 C. marriage D. initiation
28. The laws set in traditional African societies to guide and teach the children on how to behave were called
 A. moral laws B. Kenyan laws
 C. traditional laws D. behaviour
29. Which one of the countries below borders Kenya to the south?
 A. Sudan B. Uganda
 C. Tanzania D. Somalia
30. Birds kept for eggs are called
 A. broilers B. poultry
 C. chicken D. layers
31. Supplying water to crops is called
 A. weeding
 B. irrigation
 C. washing
 D. spraying
32. Fill the compass direction below to complete the cardinal point below marked with letter "K"

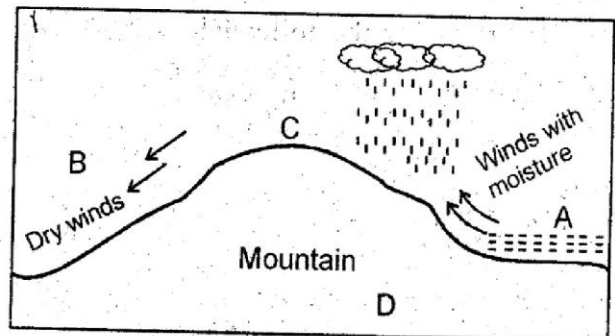


- A. North
 B. West
 C. East
 D. South

33. Rivers which have water flowing throughout the season are called
 A. sessional rivers B. seasonal rivers
 C. permanent rivers D. tributaries
34. Areas which receives little rainfall or none at all are called
 A. plains B. deserts
 C. plateaus D. arid areas
35. Which one of the following crops are grown at the Coastal parts in Kenya?
 A. Coconuts B. Coffee
 C. Pyrethrum D. Tea

36. The activity of exchanging goods for goods or services is called
 A. farming
 B. business
 C. trade
 D. mining
37. Which is NOT a national holiday celebrated in Kenya?
 A. Mashujaa Day B. Madaraka Day
 C. Moi Day D. Saba Saba Day
38. Which one of the following is NOT a common religion in Kenya?
 A. Hinduism
 B. Christianity
 C. Islamic
 D. Budhism
39. The plant life in a particular area is known as the
 A. plants
 B. vegetation
 C. forests
 D. scrubs
40. Three of the following are elements of a map. Which one is NOT?
 A. Colour
 B. Key
 C. Frame
 D. Scale

Study the diagram below and answer questions 41 - 43



41. The name of the feature above represents an example of _____ rainfall.
 A. frontal
 B. relief
 C. convectional
 D. heavy

42. The representing wind ward side is shown by letter
 A. A B. B
 C. C D. D
43. Side B is called leeward or
 A. dry side
 B. rainy side
 C. rain shadow
 D. grassland side
44. Three of the following are examples of Nilotes in Kenya. Which is NOT an example of a Nilote?
 A. River lake
 B. Maasai Nilotes
 C. Plain Nilotes
 D. Highland Nilotes
45. North, South, East and West are called _____ points.
 A. score
 B. eight compass
 C. cardinal
 D. four
46. Edward was going to school which was at the Eastern side of his home. His shadow was seen at which direction?
 A. East B. North
 C. South D. West
47. The sun sets in the
 A. North
 B. South
 C. West
 D. East
48. The largest lake in Kenya is
 A. L. Victoria
 B. L. Turkana
 C. L. Naivasha
 D. L. Nakuru
49. Which units are used for measuring rainfall?
 A. Kgs B. Metres
 C. Millilitres D. Decilitres
50. Small rivers that join up big rivers are known as
 A. tributaries
 B. joinery
 C. feeders
 D. seasonal rivers
51. When many trees grow together, they form a
 A. thicket
 B. mangrove
 C. bush
 D. forest
52. People who are born at the same time and initiated the same time are called
 A. age set
 B. age group
 C. initiates
 D. family
53. A group of people related to one another by blood make up a
 A. family
 B. clan
 C. extended family
 D. nucleus family
54. People who tell about the future are called
 A. doctors
 B. scientists
 C. prophets
 D. soothesayers
55. The head of a school is called
 A. Head master
 B. Head mistress
 C. Head teacher
 D. Deputy teacher
56. Father, mother and children form a
 A. Nuclear family
 B. Polygamous family
 C. Single parent family
 D. Polygamous family people
57. Which of the following is a good place to cross a busy road?
 A. At a corner
 B. At a round about
 C. At a darker place
 D. At a zebra crossing
58. Which one of the following instrument measures rainfall?
 A. Thermometer
 B. Raingauge
 C. Anemometer
 D. Windsock

59. The capital city of Kenya is called
- A. Nairobi
 - B. Mombasa
 - C. Nakuru
 - D. Kakamega
60. People who walk on roads on foot are known as
- A. drivers
 - B. hoteliers
 - C. pedestrians
 - D. cyclists

PART II RELIGIOUS EDUCATION

SECTION A: CHRISTIAN RELIGIOUS EDUCATION

61. God sent floods to punish people for their sins when _____ was six hundred years old.
A. Noah
B. Jacob
C. Solomon
D. David
62. During the storm, Jesus and His disciples were _____
A. in a house
B. in a boat
C. on a mountain
D. in the desert
63. Jesus was _____ when the storm started.
A. asleep
B. dreaming
C. sailing
D. praying
64. Which of the following is a good effect of weather on our lives?
A. The wind blows away roofs of buildings
B. The sun gives us warmth
C. During droughts, crops dry up
D. The wind blows away roofs of buildings
65. Jesus brought _____ back to life.
A. John the Baptist
B. Martha
C. Lazarus
D. Zacchaeus
66. _____ baskets of food were collected after the people had eaten enough.
A. 5
B. 10
C. 15
D. 12
67. From the miracle of Jesus calming the storm, we learnt that we should have _____
A. fear
B. power
C. honesty
D. faith
68. In which one of the following events in the life of Jesus did God confirm that Jesus was His beloved son?
A. Feeding of five thousand
B. Baptism of Jesus
C. The last supper
D. Entry into Jerusalem
69. When we are unselfish we feel _____
A. angry
B. sad
C. proud
D. free
70. Jesus was crucified on the cross outside which city?
A. Bethlehem
B. Jericho
C. Jerusalem
D. Nazareth
71. Christians mark Christ's victory over death during _____
A. Easter
B. Pentecost
C. Ascension
D. Nazareth
72. In the Bible we read about a woman named Hanah. She had a son whom she took to live in the Temple. What was the name of Hanah's son?
A. Job
B. Jeremiah
C. David
D. Samuel
73. Who served in the temple when he was young?
A. Samuel
B. Elijah
C. David
D. Moses
74. God provided Abraham with a _____ to be sacrificed instead of Isaac.
A. goat
B. ram
C. son
D. dove
75. Solomon asked God for _____
A. wealth
B. fame
C. wisdom
D. love
76. Which one of the following people made the wrong choice?
A. Ruth
B. Moses
C. Ananias
D. Abraham
77. _____ was the wife of Ananias.
A. Sapphira
B. Elizabeth
C. Mary
D. Sarah
78. After Jesus was baptized, he stayed in the desert for _____ days and nights.
A. thirty
B. twenty
C. twelve
D. forty
79. _____ baptised Jesus.
A. Simon
B. Mathew
C. John the Baptist
D. Andrew


80. We show obedience in school by
 A. teasing younger children
 B. reading story books as the teacher is writing on the chalkboard.
 C. making noise in class
 D. obeying the school bell
81. By the time Jesus reached the home of Mary and Martha, their brother Lazarus had been dead for _____ days.
 A. four
 B. three
 C. five
 D. two
82. _____ betrayed Jesus.
 A. Judas Iscariot B. Simon Peter
 C. John the Baptist D. Pontius Pilate
83. Abraham had a son named
 A. Jacob B. Joseph
 C. Samuel D. Isaac
84. Which of the following is a Christian sacred place?
 A. Mosque B. Church
 C. Synagogue D. Mountains
85. When we see wrong things happening, it is our duty to
 A. ignore them B. correct them
 C. complain D. be quiet
86. Which of the disciples of Jesus was a tax collector?
 A. Levi B. Peter
 C. John D. James
87. Moses lived with his father in law whose name was?
 A. Jacob B. Aaron
 C. Jethro D. Edwardo
88. The Ten Commandments were given to-
 A. Abraham B. Peter
 C. Moses D. Aaron
89. Jacob was the father of
 A. Jared
 B. David
 C. Esau
 D. Joseph
90. Who wrote the Bible?
 A. People inspired by God
 B. Jesus
 C. Angels
 D. Moses

SECTION B:

ISLAMIC RELIGIOUS EDUCATION

61. People might not realize the Truth until they reach in the graves. This caution is found in Surah _____
 A. Aadiyaat B. Takaathur
 C. Qaaria D. Alaq
62. The term "Al-Qaana" means
 A. Running horses
 B. The last day
 C. The elephant
 D. The earthquake
63. Which of the following is **NOT** a sign of Munafiq?
 A. Committing treasury
 B. Telling lies
 C. Stealing property
 D. Breaking promises
64. Which of these was **NOT** a Holy Book of Allah?
 A. Suhuf B. Injeel
 C. Furqaan D. Hadith
65. Islam is "Twahara", which of the following terms also means twahara?
 A. Diin B. Qudsi
 C. Nadhif D. Sunna
66. Zakkat given out at the end of the Holy month of Ramadhan is _____.
 A. Zakkat Maal
 B. Zakkat Fitr
 C. Zakkat Swaum
 D. Sadaqat jaaria
67. The uncle of the prophet who protected him though he never embraced Islam was _____.
 A. Abu Lahab B. Abu Talib
 C. Humza D. Abbas
68. "Acrazak" is an attribute of Allah's prophets. Which one is **NOT**?
 A. the creator B. the protector
 C. the powerful D. the provider
69. The following are attributes of Allah's prophets. Which one is **NOT**?
 A. They were trustworthy
 B. They never died
 C. They warned people
 D. They were honest


70. The correct description of the best Islamic women dress is _____.
- A. Tight fitting exposing body features
 B. Must be strictly black
 C. Any colour, loose fitting, covering the whole body
 D. Any size depending with the fashion
71. Laila tul-Qadr' is referred to as Night of Power because it is better than _____ months.
- A. 1000 B. 36
 C. 100 D. 360
72. By which of these ways can you not have a relative according to Islam?
- A. Neighbourhood B. Blood
 C. Marriage D. Fostering
73. On arrival to Madina the prophet settled the difference of two clans. They were _____.
- A. Bakr and Khuzaa
 B. Bakr and Nadhir
 C. Nadhir and Qainuqah
 D. Aws and Khazraj
74. When Adam (A.S) asked Allah to give him a companion, Allah gave him _____.
- A. Hawa B. Asiya
 C. Khadija D. Maryam
75. Nabii Issa (A.S) was born without a father, to show that
- A. he was the son of God
 B. we learn the word of God
 C. hit was the will of Allah
 D. he will never die
76. Which of the following prayers does NOT have four rakaats?
- A. Jumla B. Dhuh
 C. Isha D. Asr
77. The Angel of Allah incharge of the doors of paradise is called _____.
- A. Mikail B. Raqib
 C. Isra'el D. Ridhwan.
78. Muslims will easily go to paradise just incase their last words before death are _____.
- A. Laa Ilaha Illa Llah
 B. Innalilahi wa Inna ilaih raajiun
 C. Subuhana Ilah
 D. Allahu Akbar
79. The King who called himself God, during the time of Ibrahim was _____.
- A. Adzar B. Namrud
 C. Fraun D. Qaarun
80. One of the following practices will increase Love among Muslims. Which one?
- A. Teasing B. Fighting
 C. Grabbing D. Sharing
81. The following are three major impurities (Hadath Akbar). Which one is NOT?
- A. Nifas B. Haidh
 C. Manii D. Janaba
82. Islamic calendar has got twelve months. In which month did the prophet receive his first revelation of Qur'an?
- A. Rabiul Awwal B. Shaaban
 C. Ramadhan D. Safar
83. Neighbourhood in Islam extend upto _____ houses.
- A. 20 B. 30
 C. 40 D. 10
84. Khalid was shocked to see a wonderful creature of Allah. He exclaimed saying _____.
- A. Mashallah! B. Hamad!
 C. Gai! D. al-hamdulillah!
85. Why do Muslims fast ?
- A. Because fasting is a shield
 B. To change times of eating
 C. To remember the poor
 D. To slim up thier bodies
86. When a Muslim is in Major Impurity he must _____.
- A. Take a bath before sleeping
 B. Pray when it is time for prayers
 C. Take a bath before doing Ibadah
 D. Only pray Sunna
87. Muslims at first used to face _____ as their Qibla?
- A. Jerusalem. B. Makkah
 C. Madina D. Al-Qaaba
88. Which of the following activities of Ibada happen in the last month of Islamic calendar.
- A. Hajj B. Swaum
 C. Miladu-Nabii D. Isra wal Miraj
89. The prophet of Allah who was swallowed by a big fish was _____.
- A. Nabii Adam B. Nabii Issa
 C. Nabii Yunus D. Nabii Musa
90. We do not listen to Khutba (sermon) when we go for _____.
- A. Ied prayers B. Jum'a prayers
 C. Nikah D. Itkaf





1. The first set of teeth has the following names **EXCEPT**
A. Deciduous B. Permanent
C. Milk D. Temporary
2. Which one of the following is **NOT** a way of transporting water.
A. Well
B. Pipes
C. Tankers
D. Cans
3. Crops grown for sale are called
A. food
B. cash crops
C. domestic
D. subsistence

4. A class four pupil did the experiment shown below.



The pupil could not see the candle flame because

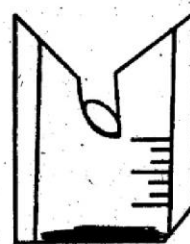
- A. light could not travel through the pipe
 - B. the pipe could not allow light to pass
 - C. the candle was very far
 - D. light travels in a straight line
5. Which of the following condition for germination is **INCORRECT**.
A. Air
B. Water
C. Warmth
D. Soil

6. Which of these sources of light is natural?
A. Bulb B. Candle
C. Sun D. Torch

7. Plants growing where they are not needed is called
A. seed B. weed
C. seedlings D. crops

8. The following can be roasted **EXCEPT**
A. Maize B. Tomatoes
C. Meat D. Cassava

9. The weather instrument drawn measures rainfall in



- A. mm B. litres
C. cm D. ml

10. Water can be made safe for drinking by
A. boiling B. filtering
C. sieving D. fetching

11. A guitar produces sound when it is
A. beaten B. blown
C. plucked D. warmed

12. _____ is not a way by which animals protect themselves from their enemies.
A. Biting B. Stinging
C. Crawling D. Coiling

13. Which of the following is **CORRECTLY** matched:

Food	What it gives
A. Beans	Proteins
B. Oranges	Fats
C. Maize	Vitamins.
D. Eggs	Carbohydrates


14. Water should be stored in _____ containers.

- A. big B. clean
C. small D. round

15. HIV is a virus that causes

- A. Typhoid B. Tuberculosis
C. Malaria D. Aids

16.



The instrument drawn is used to tell _____ of the wind.

- A. amount
B. weight
C. strength
D. speed

17. The following are ways of taking care of ourselves. Which one is **NOT**?

- A. Resting when tired
B. Eating balanced diet
C. Having enough sleep
D. Playing without resting

18. Things that are far away from us appear

- A. brighter B. bigger
C. smaller D. whiter

19. Which one of the following is **NOT** a use of water in the house?

- A. Cooking
B. Washing
C. Drinking
D. Irrigation

20. The weather is _____



- A. calm and sunny B. windy and rainy
C. cloudy and sunny D. windy and sunny

21. A worker was repairing telephone wire lines.

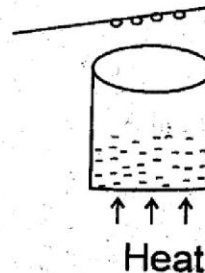
He climbed the pole using a

- A. crowbar B. axe
C. ladder D. wheelbarrow

22. Broilers are kept for

- A. meat
B. eggs
C. feathers
D. milk

23. The experiment below shows that soil contains



- A. air B. humus
C. water D. living things

24. The falling off of the first set of teeth is called

- A. losing teeth
B. shedding of teeth
C. falling of teeth
D. pulling out of teeth

25. Watering plants is called

- A. pruning
B. weeding
C. irrigation
D. farming

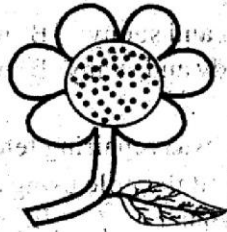
26. We can share all the following **EXCEPT**

- A. Tooth brush B. Tooth paste
C. Bed D. Plate

27. Weeds can be controlled by spraying chemicals called

- A. herbicide
- B. pesticide
- C. acaricide
- D. fertilizers

28. This plant is an example of _____ crop.

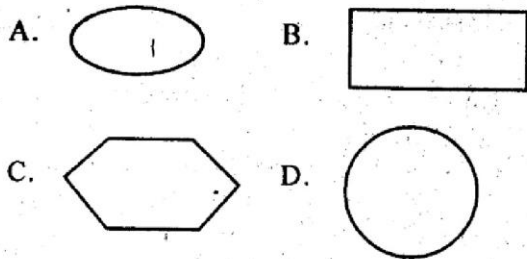


- A. beverage
- B. fibre
- C. legume
- D. oil

29. Planting of trees to replace those cut down is known as

- A. deforestation
- B. re-afforestation
- C. afforestation
- D. planting

30. Which of these can make a good toy wheel.



31. Which animal is **CORRECTLY** matched with their products?

- A. Sheep - wool
- B. Chicken - mutton
- C. Cattle - eggs
- D. Goats - pork

32. The following diagrams represents _____ of weather.



- A. symbols
- B. weather chart
- C. signs
- D. pictures

33. The following are reasons for eating food. Which one is **NOT**.

- A. Food gives us energy.
- B. Food builds our bodies.
- C. Food makes us grow fat.
- D. Food protect us from diseases.

34. The following are examples of tamed animals. Which one is **NOT**?

- A. Horse
- B. Donkey
- C. Lion
- D. Goat

35. Which ball will sink in water?



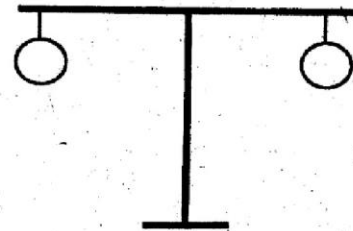
Plastic ball



Metallic ball

- A. Plastic ball
- B. Both of them
- C. None
- D. Metallic ball

36. The diagram below shows



- A. air in balloons
- B. papers in the balloons
- C. animals in the balloons
- D. soil in the balloons

37. Animals that feed on flesh only are called

- A. omnivorous
- B. herbivorous
- C. carnivorous
- D. none of these

38. The second colour of the rainbow from the top is

- A. indigo
- B. green
- C. orange
- D. blue

39. When light falls on a shiny surface it is

- A. absorbed
- B. refracted
- C. passing through
- D. reflected

40. The beak is of a _____ eating bird.



- A. grain
- B. insect
- C. mud
- D. flesh

41. The type of soil with very large particles is

- A. sand
- B. clay
- C. loam
- D. humus

42. Maize, wheat, rice, millet, sorghum are examples of

- A. fruits
- B. vegetables
- C. cereals
- D. legumes

43. Which one of the following is NOT seen at night?

- A. Clouds
- B. Moon
- C. Stars
- D. Sun

44. The animal below protects itself by




- A. slithering
- B. biting
- C. crawling
- D. stinging

45. The colour of a clear sky is

- A. black
- B. white
- C. grey
- D. blue

46. The container below is likely to be made of _____ soil.



- A. clay
- B. sand
- C. loam
- D. plastic

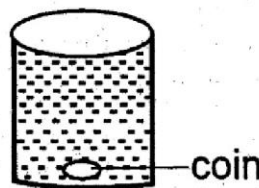
47. A diet that contains all the three food groups is said to be a _____ diet.

- A. proper
- B. balanced
- C. mixed
- D. good

48. An _____ treats our sick eyes.

- A. optician
- B. spectacles
- C. dentist
- D. veterinary

49. The coin is _____ in water



- A. floating
- B. sleeping
- C. sinking
- D. bending

50. The best soil for growing crops is

- A. sand
- B. clay
- C. silk
- D. loam

KISWAHILI

SEHEMU YA KWANZA:

LUGHA

Soma taarifa ifuatayo halafu ujaze nafasi 1 hadi 15 kwa kuchagua neno sahihi kati ya yale uliyopewa

Katika _____ 1 _____ yetu tukufu Kenya, ni wazi kuwa kilimo _____ 2 _____ huwafaidi wakulima sana kwa mapato _____ 3 _____. Watu wengi nchini ni wakulima. Wakulima hukuza mimea _____ 4 _____ sana. Kwa mfano kuna mawele _____ 5 _____ hutupatia unga wa uji na ugali _____ 6 _____ sana. Kuna ndengu, _____ 7 _____, choroko na hata maharagwe. Kila Mkenya anaulizwa atunze mchanga _____ 8 _____ na maji. Chimba migodi na upande _____ 9 _____ ya kuzuia kubebwa kwa mchanga wakati wa _____ 10 _____.


- | | | | |
|-----------------|-------------|------------|--------------|
| 1. A. nchi | B. rzi | C. inchi | D. nchini |
| 2. A. ndiyo | B. ndio | C. ndicho | D. ndiye |
| 3. A. nyingi | B. mengi | C. jingi | D. mingi |
| 4. A. mengi | B. nyingi | C. ingi | D. mingi |
| 5. A. ambazo | B. ambao | C. ambayo | D. ambacho |
| 6. A. mzuri | B. nzuri | C. kizuri | D. zuri |
| 7. A. mbazi | B. mbaazi | C. mbahazi | D. baazi |
| 8. A. usiobebwa | B. usibebwe | C. usibebe | D. usimbebwe |
| 9. A. nyazi | B. nyazini | C. unyasi | D. nyasi |
| 10. A. mvua | B. mbua | C. mfua | D. mvua |

Maembe ni aina ya matunda _____ 11 _____ huwa _____ 12 _____ sana. Kuna aina _____ 13 _____ sana _____ 14 _____ matunda. Kuna mapera, malimau, mananasi na mapapai. Tunda bora ni _____ 15 _____.

- | | | | |
|------------------|--------------|--------------|---------------|
| 11. A. ambazo | B. ambao | C. ambayo | D. ambalo |
| 12. A. tamu | B. matamu | C. mtamu | D. ntamu |
| 13. A. mingi | B. jingi | C. nyingi | D. mengi |
| 14. A. la | B. cha | C. za | D. ya |
| 15. A. lililoiva | B. zilizoiva | C. yaliyoiva | D. kilichoiva |

Jibu swali la 16 hadi 30 kulingana na maagizo ya kila swali:

16. Taja jina la umbo hili.



- A. Yai
- B. Mviringo
- C. Duara dufu
- D. Mstatili

17. Kamilisha methali.

- Mtoto umleavyo ndivyo
- A. akuavyo
 - B. akavyo
 - C. akupendavyo
 - D. anakaa

18. Mti unaotupa kahawa huitwa?

- A. Mparachichi
- B. Mkawa
- C. Mbuni
- D. Mgomba

19. Ni chombo gani si cha sebuleni?

- A. Kochi
- B. Runinga
- C. Seredani
- D. Zulia

20. Andika kwa wingi:

“unywele”

- A. nyele
- B. nywele
- C. manywele
- D. vinywele

21. Mtu ana miguu. Je gari huwa na

- A. matendeguu
- B. maguu
- C. miguu
- D. magurudumu

22. Jibu la salamu “hujambo” ni

- A. sijambo
- B. hujambo
- C. jambo
- D. mzuri

23. Andika kinyume cha “pakia”

- A. pakuwa
- B. pakiana
- C. pakua
- D. fauka

24. Siku ya pili baada ya leo Jumatano ni?

- A. Jumapili
- B. Alhamisi
- C. Jumamosi
- D. Ijumaa

25. Malipo ya shuleni ni

- A. mahali
- B. karo
- C. kiokozi
- D. fidia

26. Nyuki huishi katika

- A. kiota
- B. pango
- C. mzinga
- D. kizimba

27. Tumia ngapi?

Ni vipepeo _____?

- A. ngapi
- B. wangapi
- C. vingapi
- D. kingapi

28. Mtoto aliyefiwa na wazazi huitwa?

- A. Yatima
- B. Mfiwa
- C. Mfu
- D. Mpweke

29. Kanusha

“Mtoto analia.”

- A. Mtoto hulia
- B. Mtoto halii
- C. Mtoto hakulia
- D. Mtoto huliliwa

30. Ugonjwa wa kuhara na kutapika huitwa?

- A. Malaria
- B. Malale
- C. Upele
- D. Kipindupindu

Susana kwa kawaida si tabia yake kufuatana na watu wenye tabia mbaya. Lakini siku moja aliamua kwenda kwenye sherehe za sikukuu ya Krismasi. Aliandamana na watu vichwamaji. Watu hao hawakumjali mtu yeyote aliyepitia njiani. Kila mpitanjia alipopita walimcheka. Wengine waliwasukuma wajawazito bila kujali. Waliwatisha watoto wadogo na kuwangukurumia kama simba. Watoto waliposikia hivi, walilia na kukimbia ovyo ovyo.

Wengine walitoa sigara mifukoni mwao kisha kuzivuta. Susana alikichukia kila kitendo cha watu hao. Alizichukia nywele zao chafu zilizosokotana kama manyoya ya kondoo. Aliyachukia mavazi yao yasiyo ya adabu ila aibu. Baada ya sherehe, wanafunzi hao walirudi shuleni. Susana alienda moja kwa moja hadi kwenye majilisi. Alimwelezea mwalimu wa zamu mambo yote yaliyotokea. Mwalimu Kauli alimwelezea mwalimu mkuu Bwana Kwanja. Uchunguzi ulipofanyiwa, ukweli ulipatikana. Watukutu, wajeuri na vichwa maji waliadhibiwa vikali.

Je, wewe ni kama Susana ama uko je?

31. Susana
- ilikuwa tabia yake kufuatana na watu wabaya.
 - ni rahisi kufuatana na watu wabaya.
 - si tabia yake kufuatana na watu wabaya.
 - ilikuwa nadra kufuatana na watu wabaya.
32. Susana na wenzake waliamua kwenda
- kanisani kusali
 - shuleni kusoma
 - kwenye sherehe
 - kuvuta sigara
33. Ni lipi si la kweli?
- Watu hao walimjali mtu yeyote aliyepita njiani.
 - Walimcheka kila mpitanjia.
 - Kusukuma mama wajawazito.
 - Kutisha watoto
34. Kwa nini Susana aliyachukia mavazi ya wenzake?
- Yalikuwa haba kupatikana.
 - Yalikuwa yakupendeza.
 - Yalikuwa yameraruka.
 - Hayakuwa ya adabu
35. Neno zilizosokotana limepigwa mstari linamaanisha?
- Zilizonyooka
 - Zilizokunjana
 - Zilizokuukuu
 - Sijui
36. Sherehe hizo ziliandaliwa siku gani?
- Ya Madaraka.
 - Kuzaliwa kwa Susana.
 - Kukumbuka kuzaliwa kwa Yesu.
 - Kuzaliwa kwa baba.
37. Baada ya sherehe, wanafunzi hao walirudi
- manyumbani
 - sokoni
 - msikitini
 - shuleni
38. Susana alimweleza nani mambo hayo?
- Mwalimu wa darasa lake.
 - Mwalimu mkuu.
 - Mwalimu wa zamu.
 - Mwalimu wa darasa lake.
39. Neno majilisi limepigwa mstari, maana yake ni?
- Chumba cha walimu
 - Chumba cha kupokelea wageni
 - Chumba cha mwalimu mkuu
 - Chumba cha kupumzika
40. Ufahamu huu unatufundisha nini?
- Tuwaheshimu vichwa maji na kuwafuata.
 - Tujitenge na tabia bovu kama ya vichwa maji.
 - Kuabudu shetani.
 - Kujitenga na marafiki wazuri.

Kamau alikuwa amechelewa kuamka. "Amka! Kamau amka!" "Lo! umolala mpaka saa tatu asubuhi? Huendi shuleni?" Mama alimuuliza.

Kamau aliamka na kushangaa sana. "Kumbe usingizi ni kama kifo!" Alioga upesi upesi huku moyo ukimduda dūdudu!

Baada ya kuoga na kuvaa sare zake, aliuchukua mkoba wake na kutimua mbio kwenda shuleni. Ebo! Njiani hakumuona mwanafunzi yeyote! Alijua kwamba alichelewa kweli kweli!

Kufika shuleni, "ala!" Alishangaa ghaya. Hapakuwa na mtu yeyote shuleni! Zile mbio zake zilikuwa kazi bure. Kwa wakati huu, hakuwa amepiga viatu burashi wala kupiga meno mswaki. Baada ya kufikiria vizuri aligundua kuwa haikuwa siku ya shule bali ilikuwa -----.

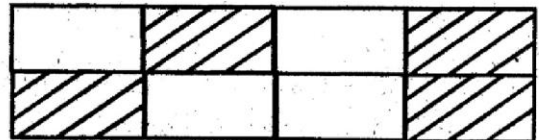
- | | |
|--|--|
| <p>41. Ni nani alikuwa amechelewa kuamka?
A. Mama
B. Baba
C. Kamau
D. Watoto</p> <p>42. Lo! katika ufahamu inamaanisha
A. kufurahi
B. kushtuka
C. salamu
D. kushangaa</p> <p>43. anayezungumziwa katika taarifa hii alilala mpaka saa ngapi?
A. Tatu
B. Mbili
C. Nne
D. Moja</p> <p>44. Alioga upesi upesi ni kusema alioga?
A. Mapema
B. Haraka haraka
C. Kwa maringo
D. Ovyo ovyo</p> <p>45. Mavazi rasmi ya shule huitwa
A. surupwenye
B. gauni
C. sare
D. champali</p> | <p>46. "Kumbe usingizi ni kama kifo" Nani aliyeyasema maneno haya?
A. Baba
B. Kamau
C. Mama
D. Hayakusemwa</p> <p>47. Kamau aliamshwa kwa _____?
A. fujo
B. haraka
C. fimbo
D. kucharazwa</p> <p>48. Kwa nini moyo wa Kamau ulimdunda dunda?
A. Wanafunzi wenzake wangefurahi.
B. Alikuwa anajua ataadhibiwa vikali.
C. Walimu walimwonea.
D. Ni furaha ya sherehe.</p> <p>49. "Kutimua mbio" ni maneno yaliyotumiwa katika ufahamu huu. Maana yake ni?
A. Kwenda huku amekimbia
B. Kwenda pole pole
C. Kuzubaa ukienda
D. Kuanza safari</p> <p>50. Ufahamu huu unamaanisha
A. Haraka haraka ndio mwendo.
B. Kutembea kwingi ni kuona mengi.
C. Haraka haraka haina baraka.
D. Haba na haba hujaza kibaba.</p> |
|--|--|

MATHEMATICS

Time: 2 hours

- Write three hundred and thirty three in figures.
A. 303
B. 333
C. 3333
D. 33
- What is the place value of 9 in 39210?
A. Tens
B. 9000
C. Thousands
D. Hundreds
- Fill in the blank with the correct factor.
 $13 \times \underline{\quad} = 52$
A. 4
B. 8
C. 13
D. 6
- Name the next multiple of 7 after 56.
A. 49
B. 84
C. 35
D. 63
- What is the total value of 7 in the number 87324?
A. 7000
B. 700
C. Thousands
D. Tens
- Which of these numbers is divisible by 2, 5 and 10?
A. 209
B. 205
C. 100
D. 17
- $18+27$ is
A. odd
B. even
C. multiple
D. impossible
- Work out: $48+32+16=$
A. 86
B. 96
C. 106
D. 186

- Write the next number in the pattern.
4, 5, 7, 10, 14, _____
A. 15
B. 18
C. 17
D. 19
- Arrange from smallest to greatest.
36, 28, 62, 19
A. 62, 36, 28, 19
B. 62, 28, 19, 36
C. 19, 28, 36, 62
D. 19, 28, 62, 36
- What fraction is shaded in the figure?



- A. $\frac{4}{8}$
B. $\frac{3}{8}$
C. $\frac{2}{8}$
D. $\frac{5}{8}$
- Work out: $34 \times 6 =$
A. 24
B. 204
C. 304
D. 404
- Complete the statement.
 $13 \times \underline{\quad} = 169$
A. 13
B. 12
C. 11
D. 15
- Even number \times even number =
A. even
B. odd
C. prime
D. impossible

15. Out of 9666 trees planted in the year 2014, 777 germinated. How many trees did not germinate?
 A. 1029 B. 9889
 C. 8111 D. 8889

24. 3 weeks 2 days = _____ days.
 A. 21 B. 22
 C. 23 D. 25

25. Expand: 8324

$$\begin{array}{r} \\ + \\ + \\ + \\ \hline \end{array}$$

 A. 800, 300, 20, 4
 B. 8000, 300, 20, 4
 C. 8000, 3000, 20, 04
 D. 8324

16. Add: $\frac{1}{6} + \frac{2}{6} + \frac{2}{6} =$
 A. $\frac{5}{6}$ B. $\frac{4}{6}$
 C. $\frac{6}{6}$ D. 1

26. One and half hours is equivalent to _____ minutes.
 A. 45 B. 90
 C. 120 D. 150

17. $6 \times 5 \times 4 =$
 A. 115 B. 120
 C. 15 D. 30

27. $36 \times 10 =$
 A. 46 B. 56
 C. 360 D. 260

18. How many legs do 40 goats have?
 A. 48 B. 160
 C. 80 D. 20

28.
$$\begin{array}{r} 1000 \\ - 168 \\ \hline \end{array}$$

 A. 832 B. 932
 C. 1168 D. 732

19. A number that can exactly divide two is called
 A. odd number B. prime number
 C. even number D. multiple of two

29. Work out $84 \div 6 =$
 A. 14 B. 12
 C. 90 D. 78

20. 24 is a multiple of 6. Give the next two multiples of 6.
 A. 24, 28 B. 18, 22
 C. 25, 30 D. 30, 36

29. Work out: $84 \div 6 =$
 A. 14 B. 12
 C. 90 D. 78

21. Seven books cost 245 shillings. What is the cost of one book?
 A. 35 B. 45
 C. 1715 D. 252

30. Which is heavier? 1kg of sugar or 1kg of cotton.
 A. 1kg of sugar
 B. 1kg of cotton
 C. 1kg of metal
 D. none


22. Fill in the blanks.
 $\underline{\quad} \times 8 = 72$
 A. 6 B. 14
 C. 8 D. 9

31. It is 8 o'clock. What time will it be after 2 hours?
 A. 10 o'clock B. 6 o'clock
 C. 12 o'clock D. 11 o'clock

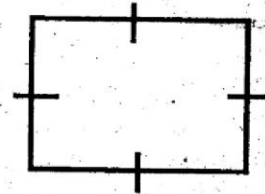
23. What is the difference between 535 and 280?
 A. 815 B. 255
 C. 825 D. 725

32. Which is greater? $\frac{1}{2}$ or $\frac{1}{3}$
- A. $\frac{3}{5}$ B. $\frac{2}{5}$
 C. $\frac{1}{2}$ D. $\frac{1}{3}$
33. Subtract 18kg from 96kg.
- A. 114 B. 68
 C. 78 D. 72
34. What is $\frac{1}{3}$ in words?
- A. One third B. One three
 C. A three D. Three ones
35. Which is the 9th month in a year?
- A. August B. October
 C. September D. July
36. $357 + 455 =$ _____
- A. 812 B. 922
 C. 9113 D. 1032
37. $\frac{3}{7} +$ _____ $= \frac{6}{7}$
- A. $\frac{3}{6}$ B. $\frac{7}{3}$
 C. $\frac{3}{7}$ D. $\frac{6}{7}$
38. A class received 64 books. How many books did 8 classes receive if each class received the same number of books?
- A. 412 B. 78
 C. 512 D. 402
39. Give one pair of factors of 48= _____ \times _____
- A. 24 and 4 B. 6 and 8
 C. 48 and 2 D. 14 and 2
40. Write three thousand two hundred and two in figures.
- A. 3002
 B. 302
 C. 3202
 D. 32002

41. Work out: $9 \overline{)29}$
- A. 3 rem 2
 B. 9 rem 2
 C. 2 rem 3
 D. 3



42. What is the name of the shape drawn below?



- A. Square B. Rectangle
 C. Circle D. Triangle

43. Work out:

Sh.	Cts.
134	25
+ 14	35

- A. Sh.248 60cts
 B. Sh.115 90cts
 C. Sh.120 60cts
 D. Sh.148 60cts

44. 1 kilogram= _____ half kilograms.

- A. 4
 B. 8
 C. 6
 D. 2

45. What is the next number

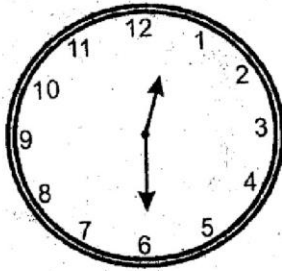
48, 44, 40, _____

- A. 42
 B. 44
 C. 45
 D. 36

46. Subtract sh.53 from sh.90.

- A. Sh.43
 B. Sh.37
 C. Sh.47
 D. Sh.27

47. What is the time shown?



- A. half past noon
- B. 12 o'clock
- C. half past three
- D. half past six

48. Work out: $\frac{7}{11} - \frac{3}{11} =$

- A. $\frac{10}{11}$
- B. $\frac{4}{11}$
- C. $\frac{2}{11}$
- D. $\frac{3}{11}$

49. Write 3 factors of 12.

- A. 12, 24, 36
- B. 12, 13, 14
- C. 2, 3, 4
- D. 3, 6, 12

50. A number is divisible by 5 if

- A. the last digit is an even number
- B. the first digit is a zero or five
- C. if the number is divisible by 2 and not 10
- D. if the number end with a zero or five



STANDARD FOUR 2015 SPECIAL EXAM

ENGLISH SECTION A: LANGUAGE

Time: 1hr 40mins

Fill in the blank spaces from the answers given from number 1 - 14

Stephen and _____ younger brother Thomas went _____ a walk
 _____ the forest one day. They took _____ did Mickey with _____
 Mickey ran on, in front _____ them. He _____ the way very well, for he
 had _____ there many times before. The children found _____ grapes
 growing in the forest so they _____ a bunch for _____ mother. While they
 were doing _____ Mickey saw a rabbit sitting _____ a tree. He barked
 loudly and _____ after it but did not catch it. The rabbit ran into a _____ in
 the ground.

- | | | | |
|----------------|-----------|-----------|-----------|
| 1. A. his | B. her | C. their | D. him |
| 2. A. from | B. far | C. four | D. for |
| 3. A. to | B. on | C. in | D. over |
| 4. A. their | B. there | C. them | D. they |
| 5. A. this | B. them | C. they | D. that |
| 6. A. off | B. at | C. of | D. in |
| 7. A. know | B. new | C. now | D. knew |
| 8. A. bean | B. been | C. bin | D. being |
| 9. A. sum | B. any | C. some | D. other |
| 10. A. picking | B. pick | C. peaked | D. picked |
| 11. A. their | B. parked | C. packed | D. park |
| 12. A. these | B. into | C. for | D. of |
| 13. A. over | B. was | C. has | D. have |
| 14. A. run | B. round | C. curled | D. sit |
| 15. A. run | B. round | C. curled | D. sit |

E-mail: jesmaprintingpress@gmail.com

First Edition

© Jesma Printingpress Ltd. Tel: 0775242042 Nairobi

TURN OVER

Choose the adjectives from the sentences

16. Adults like obedient children.

- A. children
- B. like
- C. obedient
- D. adults

17. Mary used a sharp knife.

- A. sharp
- B. Mary
- C. knife
- D. used

Write the plural of the underlined words

18. The baby are playing.

- A. babys
- B. babies
- C. babiys
- D. babbies

19. The sheep are on the farm.

- A. sheeps
- B. sheep
- C. sheepes
- D. ship

20. He came with his two wife.

- A. wive
- B. wifs
- C. wifes
- D. wives

Choose the correct occupation

21. A person who sells meat is called a _____.

- A. meatman
- B. butchery
- C. seller
- D. butcher

22. A person who defends people in court is called a _____.

- A. judge
- B. policeman
- C. lawyer
- D. mason

Choose the word with the correct spelling.

23. A. tailor B. tailer
C. taila D. tailar

24. A. dotar
B. daughter
C. daughtar
D. daughtor

Fill in the blanks with the correct word

25. The book belongs to Mark. It is _____.

- A. hers
- B. mine
- C. his
- D. yours

26. He is _____ tired to walk.

- A. so
- B. to
- C. very
- D. too

From the alternatives given, choose one that is the odd one out.

27. A. quickly
B. beautiful
C. seriously
D. sadly

28. A. donkey
B. furniture
C. fruits
D. vegetables

Choose the word that means the same as the underlined one

29. My aunt is a wealthy woman.

- A. huge
- B. happy
- C. rich
- D. poor

30. John offered to assist his sister.

- A. beat
- B. help
- C. show
- D. get

Use the following passage below to answer questions 31 - 40.

While reaching down to drink the water in a well one day, a fox fell in. He tried as much as he could but all was in vain. The walls of the well were too high.

Not long after a goat came along. Seeing the fox down there, he asked him the reason why. "I am enjoying the cool, pure water," replied the fox. "Wouldn't you like to jump down and taste it?" Without stopping to think, the foolish old goat jumped down. No sooner had he reached the bottom than the cunning old fox leaped on to his back and scrambled to the top.

Looking down at the unhappy goat, the fox laughed and said, "Next time, friend goat, be sure to look before you leap".

31. Where was the water?

- A. In the river
- B. In the well
- C. In the lake
- D. In the dam

32. What happened to the fox as he tried to drink water?

- A. He saw the goat
- B. He was unable to reach water
- C. He drank very quickly
- D. He fell into the water

33. Why could he not get out of the well?

- A. The walls were too high
- B. He was too tired
- C. The well was very wide
- D. There was no water

34. Which animal came along?

- A. Fox
- B. Goat
- C. Camel
- D. Lion

35. What did the goat do when the fox asked him to try the water?

- A. He went away
- B. He refused
- C. He jumped into the water
- D. He helped the fox out.

36. How did the fox get to the top again?

- A. By leaping on to the goat's back
- B. By climbing up
- C. By jumping out of the well
- D. By being helped by the goat

37. What did he tell the goat to do next time?

- A. He laughed at him.
- B. He said goodbye
- C. Be sure to look before you leap
- D. You are a good friend

38. Which is the best word to describe the action of the fox?

- A. Kind
- B. Unkind
- C. Funny
- D. Good

39. How many animals are mentioned in the story?

- A. One
- B. Three
- C. Four
- D. Two

40. What is the opposite of the underlined word in the story?

- A. Wise
- B. Big
- C. Tall
- D. Huge

Read the following passage below and answer questions 41 to 50.

Long ago there lived a king who really loved clothes. He had clothes for the morning and clothes for the afternoon. He had special clothes for the evening. In fact he had so many clothes that he didn't know what to wear.

One day two wicked weavers decided to make special magic cloth for the king who was impressed. The weaver asked for gold thread from the king. "You will have all the gold thread you require," replied the king. The wicked weaver tricked the king to sleep so that he could find the suit ready when he wakes up.

When he was deep asleep, they walked out with the bags full of gold threads never to be seen again.

-
41. Long time ago there lived
- A. a king
 - B. a magician
 - C. the weaver bird
 - D. the wicked magician
42. According to the passage, the king loved
- A. gold thread
 - B. sleeping
 - C. clothes
 - D. magician
43. The king has special clothes for
- A. the weavers
 - B. the evening
 - C. his wife
 - D. every morning
44. _____ is a home of a king.
- A. Statehouse
 - B. Convent
 - C. Barracks
 - D. Palace
45. According to the passage, it is true to say that the weaver asked for
- A. new cloth
 - B. a magic cloth
 - C. A special gold thread
 - D. food
46. What is the opposite of king?
- A. Prince
 - B. Princess
 - C. Empress
 - D. Queen
47. Which of the following statement is true according to the passage?
- A. The king was wicked
 - B. The wicked weavers tricked the king
 - C. the king tricked the wicked weavers
 - D. The wicked weavers made the cloth for the king
48. The past tense of the underlined word in the story is
- A. slept
 - B. slept
 - C. sleep
 - D. sleep
49. Where did the wicked weavers hid the gold threads?
- A. In the bush
 - B. In the house
 - C. In the bags
 - D. In the magic cloth
50. The best title for the passage is
- A. The wicked thread
 - B. The king's cloth
 - C. The golden thread
 - D. The king and the weavers