

**GATUNDU SOUTH DISTRICT**  
**ASSESSMENT TEST MID TERM 1 2015**  
**DARASA LA TANO KISWAHILI**

**Jaza pengo kwa neno lifaalo**

Amina aliachiwa 1 ili amlishe mama akienda kununua vyakula 2. Mama alikuwa amepika chakula cha 3 ili mtoto 4 njaa. Badala ya Amina kumpa mtoto 5 yeye 6. Mara mtoto akaanza 7 kwa njaa. Alianguka 8 zaidi alipoona hakuna dalili ya chakula. Amina alijaribu 9 anyamaze lakini aliambulia 10. Mama aliporudi 11 kwani alikuwa amemwachia mtoto chakula cha 12. Alimuuliza Maria kwa 13 aseme nani amekila chakula cha mtoto. Amina alianza kutetemeka na 14 aibu. Amina alichapwa mpaka akashika 15.

- |                   |                 |
|-------------------|-----------------|
| 1. A. mtoto       | B. mnyama       |
| C. shamba         | D. kuni         |
| 2. A. njiani      | B. sokoni       |
| C. mtoni          | D. kiwandani    |
| 3. A. kibaya      | B. kidogo       |
| C. kutosha        | D. kizito       |
| 4. A. ahisi       | B. aone         |
| C. asikie         | D. asihisi      |
| 5. A. aliitupa    | B. alikila      |
| C. alipika        | D. aliacha      |
| 6. A. mwenyewe    | B. chenyewe     |
| C. wenyewe        | D. zenyewe      |
| 7. A. kucheka     | B. kulala       |
| C. kulia          | D. kufurahi     |
| 8. A. kilio       | B. kifafa       |
| C. kitini         | D. kitandani    |
| 9. A. kumpiga     | B. kumbembeleza |
| C. kumwachibu     | D. kumchuna     |
| 10. A. patupu     | B. pabaya       |
| C. papana         | D. pakubwa      |
| 11. A. alishangaa | B. alifurahi    |
| C. aliridhika     | D. alishiba     |
| 12. A. chafu      | B. kutosha      |
| C. kidogo         | D. kioyu        |
| 13. A. amani      | B. furaha       |
| C. hasira         | D. mwelekeo     |
| 14. A. kuona      | B. kuangalia    |
| C. kurusha        | D. kuchunguza   |
| 15. A. mkono      | B. adabu        |
| C. chakula        | D. usingizi     |

**Jibu maswali ifuatayo**

16. Nyumbani m wazima?  
 A. Njema B. salama  
 C. Tu wazima D. vizuri
17. \_\_\_\_\_ hutandazwa sakafuni  
 A. zulia B. rafu  
 C. pazia D. kitambaa
18. Tumia kiulizi 'pi' kwa usahihi  
 Ni jambo \_\_\_\_\_ laweza kusababisha ugonjwa wa ukimwi?  
 A. upi B. ipi

- C. zipi D. lipi
19. \_\_\_\_\_ ni nguo za wafanyi kazi kama vile makanika au wahandisi  
 A. Joho B. surupwenye  
 C. Tarbushi D. bui bui
20. Anayetibu wagonjwa hospitalini ni \_\_\_\_\_  
 A. bawabu B. mwuguzi  
 C. tabibu D. vidonge

**Tumia amba kwa usahihi**

21. Milango \_\_\_\_\_ ilivunjika ni mibovu  
 A. ambayo B. ambaye  
 C. ambalo D. ambao
22. Andika kwa maneno:  $\frac{1}{4}$   
 A. sudusi B. robo  
 C. subui D. tusui
23. Mmea unaozaa kahawa unaitwa \_\_\_\_\_  
 A. mpera B. Ndizi  
 C. mbuni D. korosho
24. Kifungu kimoja cha shairi huitwa \_\_\_\_\_  
 A. mshororo B. ubeti  
 C. kibwagizo D. mizani
25. Kidole kikubwa cha mkono huitwa \_\_\_\_\_  
 A. chanda  
 B. cha kati  
 C. gamba  
 D. shahada
26. Chakula cha kwanza kutia tumboni wakati wa asubuhi huitwa \_\_\_\_\_  
 A. chamcha B. kiamsha kinywa  
 C. chajio D. kishiika
27. Malipo anayopewa mtu aliyekipata kitu kilichopotea huitwa \_\_\_\_\_  
 A. kiokosi B. ada  
 C. fidia D. faini
28. Sehemu kwenye jicho ya rangi nyeusi inayotumika kuona ni \_\_\_\_\_  
 A. ndewe B. kwapa  
 C. wayo D. mboni
29. Andika nambari hii kwa maneno 69,699  
 A. Elfu sitini na tisa mia sita tisini na tisa  
 B. Sita tisa sita tisa tisa  
 C. Sita elfu tisa mia sita tisini na tisa  
 D. Elfu tisini, mia sita tisini na tisa

**Kamilisha methali hii:**

30. Mtegemea nundu haachi \_\_\_\_\_  
 A. kupata  
 B. kukonda  
 C. kuona  
 D. kunona
31. Msimu wa jua kali bila mvua ni \_\_\_\_\_  
 A. kipupwe B. kiangazi  
 C. masika D. kusi

32. Harusi hiyo ilihudhuriwa na watu wengi kama \_\_\_\_\_  
 A. siafu B. matawi  
 C. maji D. jiwe
33. Nini maana ya kulala fofofu?  
 A. kulala vibaya  
 B. kulala kabisa  
 C. kulala kidogo tu  
 D. kukosa usingizi
34. Vyakula bora hufanya miili yetu \_\_\_\_\_ vyema  
 A. kukuwa B. kula  
 C. kukua D. kuwa
35. Katika msamiati wa ukoo, halati ni nani?  
 A. dadake baba B. dadake mama  
 C. kakaye baba D. kakaye mama
36. Kamilisha methali ifuatayo  
 Dawa ya moto ni \_\_\_\_\_  
 A. maji B. barafu  
 C. moto D. chakula
37. Eleza maana ya msemo ufuatao "kupata jiko"  
 A. kuo  
 B. kununua jiko la makaa  
 C. kupata mtoto  
 D. kuokota jiko

**Tumia kivumishi "Enye" kwa usahihi**

38. Nguo \_\_\_\_\_ tundu itapachikwa kiraka  
 A. kwenye B. wenye  
 C. yenye D. zenye

**Jaza pengo kwa kutumia "Ndi"**

39. Vijiko hivi \_\_\_\_\_ vilivyoshika kutu  
 A. ndivyo B. ndiyo  
 C. ndizo D. ndio

**Tumia alama sahihi ya uakifishaji**

40. "Kumbe Juma ni mwizi \_\_\_\_\_"  
 A. (?) B. (!)  
 C. (.) D. (,)

**Soma kifungu kifuatacho kisha ujibu maswali 41-50**

Mwami na Sheila wanaishi na wazazi wao mjini Nairobi katika mtaa wa Ziwani. Huko sio kwao hasa. Wanaishi huko kwa sababu wazazi wao hufanya kazi mjini Nairobi. Mashambani kwao ni huko bonde la ufa karibu na soko la Matunda.

Baada ya kufunga shule kwa muhula wa tatu, Mwami na Sheila walipelekwa mashambani kwa mara ya kwanza. Walishangaa kuona nyumbani mwao hamkuwa na taa za umeme au mifereji ya maji. Watoto hao walilalamikia wazazi wao eti kwa nini wamepelekwa huko. Wakauliza wanarudi kwao lini. Wazazi wao walicheka sana kusikia swali kama hilo. Baba yao aliwajibu kuwa hapo ndipo nyumbani kwao hasa.

Baada ya kuelewa ukweli kuhusu nyumbani kwao Mwami na Sheila walianza kupenda mahali pale. Walishiriki kuwachunga mbuzi na ng'ombe. Wakawinda ndege huko malishoni na kuwafanya kitoweo. Waliporudi nyumbani walipenda nyumba yao kubwa yenye vyumba mbalimbali kama vile, sebule, jikoni, vyumba vya kulala, stoo na choo.

Waliporudi mjini hawakufurahia maisha ya mjini tena.

Walitamani kuhamia mashambani kwa nyumba yao kubwa. Kweli nyumbani ni nyumbani.

41. Jina lingine lenye maana sawa na wazazi ni \_\_\_\_\_?  
 A. wakunga B. wazee  
 C. wavyele D. mabuda
42. Kwa nini Mwami na Sheila wanaishi Nairobi?  
 A. wazazi wao wako huko kikazi  
 B. hawana pengine pa kwenda  
 C. huko ndiko mashambani kwao  
 D. walifukuzwa nyumbani
43. Nyumbani haswa kwa familia hii ni wapi?  
 A. Mtaa wa Ziwani  
 B. katikati ya jiji la Nairobi  
 C. Bonde la ufa karibu na soko la Matunda  
 D. Kando ya barabara
44. Mwami na Sheila walipofunga shule muhula wa tatu walipelekwa wapi?  
 A. Ng'ambo  
 B. Nairobi  
 C. Mombasa  
 D. Mashambani
45. Mara ya kwanza watoto hawa hawakufurahia maisha ya mashambani kwasababu \_\_\_\_\_  
 A. hawakuwa na nyumba  
 B. kulikuwa na watu wengi wa kuogofya  
 C. hakukuwa na taa za umeme na mifereji ya maji  
 D. wazazi wao walitaka kuwaacha huko
46. Baada ya kuelewa ukweli kuhusu kwao, Miami na Sheila \_\_\_\_\_  
 A. walianza kupenda maisha ya mashambani  
 B. walitamani kurudi mjini  
 C. walitorokea msituni  
 D. walijifungia ndani bila kutoka nje
47. Chumba cha kukaribisha wageni huitwa \_\_\_\_\_  
 A. Sebuleni  
 B. Hamamuni  
 C. Jikoni  
 D. darini
48. Kulingana na hadithi hii  
 A. Nyumba ya mashambani ilikuwa kubwa kuliko ya mjini  
 B. Nyumba ya mjini ilikuwa kubwa kuliko ya mashambani  
 C. Mjini na mashambani hapakuwa na nyumba  
 D. Nyumba zote mbili zinatoshana
49. Kulingana na msimamo wa Mwami na Sheila tunaona ya kwamba  
 A. Maisha ya kijijini ni bora kuliko ya mjini  
 B. Maisha ya mashambani ni bora kuliko ya mjini  
 C. Hakuna haja ya kwenda mashambani  
 D. Mwami anapenda mashambani na Sheila mjini
50. Kifaa cha kuwindia ndege huitwa \_\_\_\_\_  
 A. kisu  
 B. Rungu  
 C. manati  
 D. bunduki

**GATUNDU SOUTH DISTRICT  
ASSESSMENT TEST MID TERM 1 2015**

**STD. 5 ENGLISH**

**Read the passage below and fill the blank spaces with the correct choice**

My 1 is a farmer. Although his farm is the 2 in the whole village, 3 produces alot. We 4 crops like beans, 5 potatoes and maize. We help our father on the farm. We usually go 6 the farm early 7 the morning and work until noon. When we go to the farm, we 8 dig the land using hoes. Sometimes father 9 a plough pulled by bulls. We 10 use a tractor because we cannot afford it. After we have 11 the land, we plant the seeds. We wait 12 some days until the seeds have 13. We then 14 to remove the unwanted plants. If there is 15 rain, we usually get a good harvest.

- |                |               |
|----------------|---------------|
| 1. A. mother   | B. farther    |
| C. aunt        | D. father     |
| 2. A. smallest | B. small      |
| C. smaller     | D. most small |
| 3. A. they     | B. him        |
| C. it          | D. we         |
| 4. A. growing  | B. grow       |
| C. grows       | D. grew       |
| 5. A. cabbages | B. garbage    |
| C. manure      | D. grass      |
| 6. A. from     | B. of         |
| C. to          | D. for        |
| 7. A. on       | B. in         |
| C. off         | D. with       |
| 8. A. fast     | B. first      |
| C. fastly      | D. second     |
| 9. A. use      | B. uses       |
| C. in use      | D. using      |
| 10. A. do      | B. doesn't    |
| C. didn't      | D. don't      |
| 11. A. dig     | B. has dug    |
| C. digging     | D. dug        |
| 12. A. with    | B. of         |
| C. for         | D. to         |
| 13. A. grew    | B. had grew   |
| C. grown       | D. grow       |
| 14. A. plant   | B. weed       |
| C. harvest     | D. plough     |
| 15. A. enough  | B. no         |
| C. little      | D. many       |

**Choose the correct word**

16. It was \_\_\_\_\_ to ride the bicycle without brakes  
A. dangerous  
B. safe  
C. easy  
D. fine
17. We waited \_\_\_\_\_ at the zebra crossing  
A. patient  
B. patiently  
C. carefully  
D. care

**Write the past tense of the underlined word**

18. The sad mourners cry loudly  
A. cry  
B. cries  
C. cried  
D. crying

19. The plane has just take off  
A. took  
B. take  
C. takes  
D. taken

**Choose the correct order of adjective**

20. Joshua lives in a \_\_\_\_\_ house  
A. brown large stone  
B. large brown stone  
C. stone large brown  
D. large stone brown
21. My mother lost her \_\_\_\_\_ gumboots  
A. old rubber green  
B. rubber old green  
C. green rubber old  
D. old green rubber

**Choose the correct word to fill in the blank space**

22. The medicine is \_\_\_\_\_ bitter to be taken  
A. so  
B. too  
C. two  
D. to

**Use the correct punctuation**

23. Where have you been  
A. !  
B. .  
C. "  
D. ?

**Choose the correct word to fill in the blank space**

24. The daughter of my aunt is my \_\_\_\_\_  
A. daughter  
B. aunt  
C. sister  
D. cousin

**Choose the correct question tag**

25. John sells cars  
A. doesn't he?  
B. does he?  
C. did he?  
D. didn't he?
26. They do not manufacture dairy products  
A. have they?  
B. haven't they?  
C. do they?  
D. don't they?

**Write the opposite of the underlined word**

27. Our teacher taught us how to add sums  
A. plus  
B. divide  
C. subtract  
D. sum
28. We found many guests at the entrance of the hall  
A. exit  
B. gate  
C. enter  
D. go in

**Write the correct preposition**

29. The top soil has been blown \_\_\_\_\_ by the strong wind  
A. on  
B. off  
C. away  
D. by
30. The big river flows \_\_\_\_\_ the lake  
A. into  
B. for  
C. on  
D. in

**Read this passage and answer questions 31-40**

Our school has other workers apart from teachers. These workers do different types of work in the school. One of the workers in our school is the secretary. The secretary types school letters and exam papers. She also answers the telephones and receives visitors. She also keeps the school records. Our secretary is called Amanda.

Another important worker is the school messenger. He is sent to take messages around the school. He also brings letters to the school. Our messenger has a bicycle which he rides when he is sent out of school compound. Our messenger is a kind man called Patrick.

We have a watchman who keeps the school safe.

He guards the school during the day and at night. Our watchman, Ben, wears a smart uniform and he carries a 'rungu'.

He keeps bad people away. George is our school bursar. A bursar is like a cashier in a bank. The bursar keeps school money safe. A bursar must be an honest person.

Clement is our cleaner. He makes sure that the school compound is clean. He cuts the grass, sweeps the compound and even sweeps our classrooms. He also picks up the rubbish around the school. Sometimes when some pupils make noise in class, the class teacher tells the noise makers to sweep the classroom.

31. What does a secretary do?  
A. Types school letters only  
B. Types exams only  
C. Types school letters and exam papers  
D. None of these
32. Who keeps the school money safe?  
A. Headteacher  
B. Secretary  
C. Bursar  
D. Messenger
33. The word important in paragraph two means the same as \_\_\_\_\_  
A. hardworking  
B. unimportant  
C. useful  
D. interesting
34. When does the messenger ride the bicycle?  
A. Anytime he is sent  
B. Anytime he wants  
C. When in school  
D. When he is sent outside the school
35. Bicycle is to ride as aeroplane is to \_\_\_\_\_  
A. ride  
B. fly  
C. drive  
D. cycle
36. What is the bursar's name?  
A. George  
B. Patrick  
C. Betty  
D. Ben
37. Who cleans the compound?  
A. Betty  
B. Clement  
C. George  
D. Patrick
38. According to the story, Patrick is the \_\_\_\_\_  
A. bursar  
B. messenger  
C. watchman  
D. cleaner
39. When does the watchman guard the school?  
A. During the day  
B. At night  
C. Either during the day or at night  
D. At night and during the day
40. According to this passage, who must be honest?  
A. Bursar  
B. Watchman  
C. Secretary  
D. Messenger

**Read the following passage then answer the questions that follow 41-50**

Many pupils do not enjoy games because they are unaware of the advantages. Apart from physical fitness and the fun, games have many other benefits to the young and even grown-ups.

Many games and sports involve two teams made up of several people. In order to win, all members of a team must play together. Thus a member learns how to relate well with the rest of the team

A game also teaches people about equal opportunities in life. A team wins depending on how they play and plan to


defeat the other. This shows that in life hardwork pays. Another important skill is that of fairness and playing by the rules. For any game to succeed all players are treated fairly and must stick to the rules. Anyone who does not follow the rules is punished. The same applies to real life.

Through games, one learns that sometimes the unexpected happens. When you have tried your best but you do not succeed, you accept the results and move on. There is always another time.

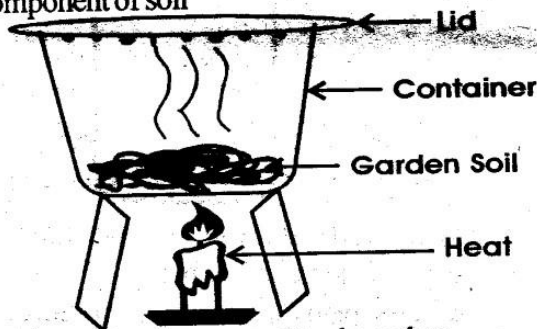
41. Why don't many pupils enjoy games?  
A. They know the benefits  
B. They are aware of the advantages  
C. They don't know the advantages  
D. They do not enjoy games
42. The word grown-ups in paragraph one means \_\_\_\_\_  
A. teachers  
B. youths  
C. adults  
D. men
43. For a team to win, all members \_\_\_\_\_  
A. must unite  
B. might unite  
C. may unite  
D. could unite
44. The success of a team depends on how well the members play. This shows that \_\_\_\_\_  
A. hardwork is optional  
B. hardwork payment  
C. hardwork is necessary  
D. hardwork is not important
45. When the writer says all players are treated fairly, he means \_\_\_\_\_  
A. players go to the same hospital  
B. the players are sick  
C. all players are harmful  
D. players are dealt with equally
46. Which of these proverbs supports teamwork?  
A. Every man for himself, God for us  
B. United we stand, divided we fall  
C. Too many cooks spoil the broth  
D. Hurry, hurry has no blessings
47. ".....stick to the rules....." in the passage means \_\_\_\_\_  
A. follow the rules  
B. to pin the rules  
C. use a ruler and a sticker  
D. give the rules
48. If you do your best but do not succeed, what should you do according to the passage?  
A. Blame yourself  
B. Try harder forever  
C. Accept the results  
D. Blame the team members
49. The expression move on means the same as \_\_\_\_\_  
A. continue walking  
B. continue with life  
C. move on in the field  
D. move to your team members
50. Choose the best title for the passage  
A. Games have few advantages  
B. Importance of games  
C. Why games are unnecessary  
D. Games for young people

**GATUNDU SOUTH DISTRICT**  
**ASSESSMENT TEST MID-TERM 1 2015**  
**STD 5 SCIENCE**

1. Body building foods are also known as \_\_\_\_\_  
 A. protective                      B. carbohydrates  
 C. proteins                          D. vitamins
2. The moon has different shapes and sizes at different times of the month called \_\_\_\_\_ of the moon  
 A. shapes                              B. colours  
 C. phases                              D. sizes
3. The diagram below represents a tooth whose function is \_\_\_\_\_



- A. chewing                              B. tearing  
 C. biting                                D. grinding
4. Which one of the following gases is breathed in during breathing  
 A. oxygen                              B. nitrogen  
 C. carbon dioxide                      D. neon
5. The set up below was used to investigate a certain component of soil



The experiment was used to show that  
 A. Soil has mineral particles  
 B. Soil has air  
 C. Soil has organic matter  
 D. Soil has water


6. Otieno ate the following foods:-  
 A Monday    maize + beans + cabbage  
 B Tuesday    ugali + beans + spinach  
 C Wednesday    ugali + meat + cabbage  
 D Thursday    maize + pumpkins + carrots  
 On which day was the meal not balanced
7. We use water at home for washing, bathing and \_\_\_\_\_  
 A. building                              B. irrigation  
 C. cooking                                D. spraying
8. The upper Jaw consists of \_\_\_\_\_ pre molars  
 A. two  
 B. four  
 C. three  
 D. eight
9. The air we breath in is usually cleaned in the \_\_\_\_\_

- A. lungs                                      B. bronchi  
 C. Air sacks                                D. Nose
10. Which of the following two small organisms help plants and animals remains to rot and become humus \_\_\_\_\_  
 A. Bacteria and fungi  
 B. Crickets and ants  
 C. Worms and beetles  
 D. Insects and insect larvae




11. The above foods represents \_\_\_\_\_  
 A. protective                              B. body building  
 C. energy giving                              D. balanced diet
12. Swimming and boat rowing are examples of \_\_\_\_\_ uses of water  
 A. Industry                                B. Transport  
 C. Farm                                      D. Recreational
13. \_\_\_\_\_ teeth are used for chewing and grinding  
 A. Molars  
 B. Mouth  
 C. Incisors  
 D. Canines
14. The exchange of gases during breathing process takes place in the \_\_\_\_\_  
 A. lungs                                      B. bronchi  
 C. air sac                                      D. nose
15. Which one of the following is not part of humus  
 A. Decaying plants  
 B. Broken pots, glass and plastics  
 C. Decaying animals  
 D. Cowdug from animals
16. Food substances that are required to keep the body in good health are called \_\_\_\_\_  
 A. medicines                                B. nutrients  
 C. poisons                                      D. balanced diet
17. Water in the farm is used for \_\_\_\_\_  
 A. Mixing chemicals                              B. washing utensils  
 C. Boat racing                                      D. Decorating
18. The first set of teeth is milk set. It can also be called \_\_\_\_\_  
 A. deciduous  
 B. babyset  
 C. permanent  
 D. shedding
19. When we breath in, the diaphragm  
 A. Moves upwards and outwards  
 B. Moves inward and form dome shape  
 C. Moves downwards and flatter

- D. Moves outwards and inwards
20. Which one of the following is not a way of lighting a house
- A. Using windows and doors  
 B. Using artificial sources like candles and lamps  
 C. Using lightning  
 D. Using translucent roofs or skylights
21. Three of the following belong to the same group. Which one does not \_\_\_\_\_
- A. sugar cane                      B. millet  
 C. maize                              D. spinach
22. Drinking water can be stored in a clay pot because \_\_\_\_\_
- A. clay pot keeps water cool  
 B. clay pot is not breakable  
 C. clay pot is transparent  
 D. clay pot is long lasting
23. Artificial teeth are also known as \_\_\_\_\_
- A. Milk teeth                      B. Dentures  
 C. Permanent teeth              D. Wisdom teeth
24. Which one of the following organs is NOT involved in digestion of food
- A. salivary glands                  B. pancreas  
 C. diaphragm                      D. ileum
25. Three of the following are uses of heat. Which one is not?
- A. Drying                              B. Cooking  
 C. Warming                          D. lightning
26. The simple tool below is a \_\_\_\_\_

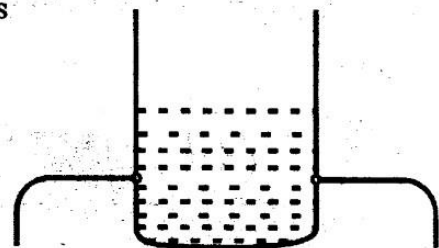


- A. Saw                                  B. Panga  
 C. Bottle opener                      D. hammer
27. The special thread used to clean between the teeth is called \_\_\_\_\_
- A. dental floss                      B. toothbrush  
 C. brushing twig                      D. toothpaste
28. Cash crops are mainly grown for \_\_\_\_\_
- A. family use                          B. sale  
 C. feeding animals                      D. manure
29. The date before which medicine should be used is known as the \_\_\_\_\_
- A. supply date                          B. Delivery date  
 C. Expiry date                          D. Manufacturing date
30. Which one of the following does not affect floating and sinking of objects?
- A. Type of material                      B. Size of material  
 C. Shape of material                      D. Weight of material

31. The type of crop below can be classified as \_\_\_\_\_ crop



- A. legume                              B. cereal  
 C. tuber                                  D. fibre
32. \_\_\_\_\_ is a sticky substance formed around the teeth and causes the bleeding gum
- A. cavities                              B. plague  
 C. decay                                  D. sensitivity
33. The best method of weed control is \_\_\_\_\_
- A. burning                              B. using herbicide  
 C. uprooting                              D. cutting
34. The amount of medicine to be taken at one time is known as \_\_\_\_\_
- A. First aid  
 B. Prescription  
 C. Dosage  
 D. Medicinal quality
35. Juliet used the setup below to investigate pressure in liquids



She realised that the Jets of water flow out equally in both directions. This is because

A. Pressure in liquids decreases with depth  
 B. Pressure in liquids is un equal at the same level  
 C. Pressure in liquids increases with depth  
 D. Pressure in liquids is equal at the same level or depth

36. The following are reasons why animals move from one place to another except
- A. feed  
 B. reproduce  
 C. escape from danger  
 D. ran away from animals
37. To prevent ourself form AIDS we should never share \_\_\_\_\_
- A. food                                  B. bed  
 C. toothbrush                          D. dishes
38. The type of weed shown below is




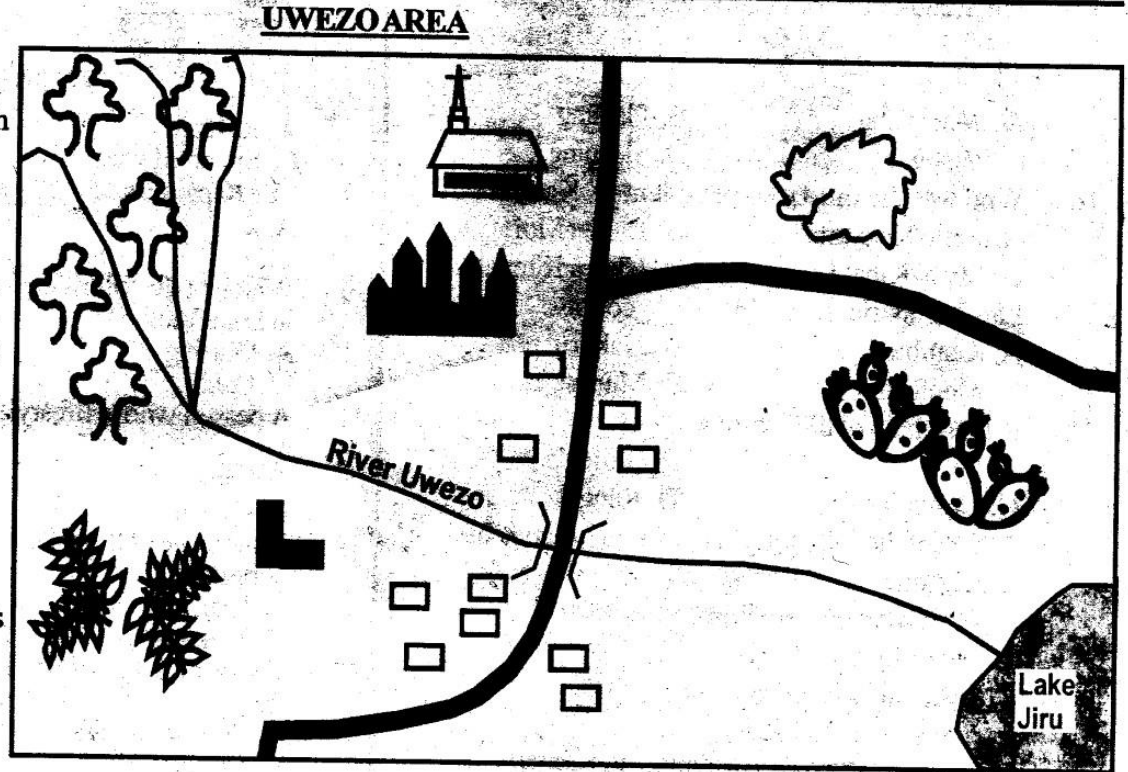
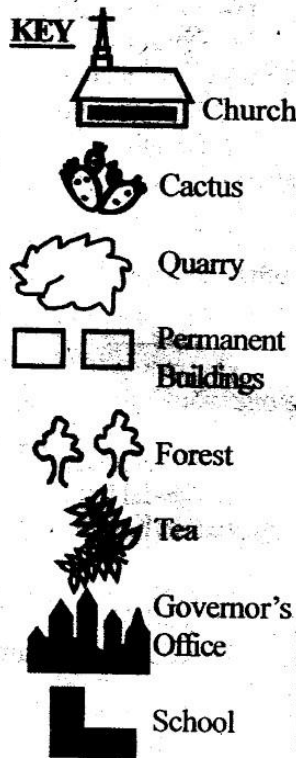
39. Which of the following statement is true about HIV/AIDS
- A. AIDS cannot be transmitted from one person to the other  
 B. Mosquitoes can transmit the HIV  
 C. AIDS has no cure  
 D. One can get AIDS through hugging on infected person
40. A sheep provide us with \_\_\_\_\_ and \_\_\_\_\_
- A. beef, milk  
 B. milk, mutton  
 C. wool, mutton  
 D. wool, beef
41. The sun looks larger than other stars because \_\_\_\_\_
- A. It is big  
 B. It is closer to the earth  
 C. It is very bright  
 D. It shines during the day
42. Which one of the groups of food crops contain legumes only
- A. Maize, beans, peas  
 B. Beans, peas, green grams  
 C. Peas, groundnuts, sorghum  
 D. Beans, millet, peas
43. Which of the following is the correct order in which HIV/AIDS stage occur from the first to last stage
- A. Incubation → Fullblown → symptomatic → Window stage  
 B. Symptomatic → Incubation → Fullblown → Window stage  
 C. Window stage → Incubation → Symptomatic → Fullblown  
 D. Symptomatic → Incubation → Window → Fullblown
44. A female sheep is called \_\_\_\_\_
- A. Ram  
 B. Bull  
 C. Heifer  
 D. Ewe
45. Clouds are grouped according to their appearance, \_\_\_\_\_ and height
- A. shape  
 B. weight  
 C. length  
 D. time
46. Which one of the following lists consist of body fluids through which HIV can be transmitted
- A. Blood, bile and pancreatic juice  
 B. Saliva, intestinal juice and blood  
 C. Blood, saliva and reproductive fluid  
 D. Digestive juice, mucus and saliva
47. Birds that are kept for meat, eggs or both are known as
- A. Birds  
 B. Poultry  
 C. Broilers  
 D. Layers
48. Dairy cattle provides us with \_\_\_\_\_
- A. Milk  
 B. Meat  
 C. Wool  
 D. Hooves

49. Which of the following organ is correctly matched with its digestive juice

Organ	Digestive Juice
A. mouth	intestinal juice
B. liver	pancreatic juice
C. small intestine	bile
D. stomach	gastric juice

50. Small intestines are also called \_\_\_\_\_
- A. colon  
 B. pistil  
 C. ileum  
 D. villi

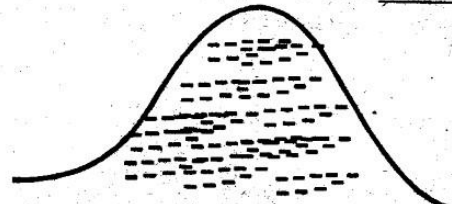
**GATUNDU SOUTH DISTRICT**  
**ASSESSMENT TEST MID- TERM I 2015**  
**STD. 5 SOCIAL STUDIES**



**Study the map of Uwezo area and answer questions 1-7**

1. The South East part of Uwezo Area has \_\_\_\_\_ climate  
 A. Cool and Wet                      B. Cool and Dry  
 C. Wet and Wet                        D. Dry and Wet
2. What are the people of Uwezo area likely to mine?  
 A. Gold                                    B. Stones  
 C. Oil                                        D. Sand
3. The people of Uwezo area use \_\_\_\_\_ as their main means of transport  
 A. Railway                                B. Water  
 C. Road                                     D. Air
4. The general direction flow of river Uwezo is?  
 A. South East to North West  
 B. North West to South East  
 C. South West  
 D. South West to North East
5. Uwezo area is a \_\_\_\_\_  
 A. County                                 B. Location  
 C. District                                 D. Division
6. What social need is most urgent in Uwezo area?  
 A. School                                 B. Hospital  
 C. Football field                         D. Mosque
7. Which is the main cashcrop grown in Uwezo area?  
 A. Coffee                                 B. Flowers  
 C. Tea                                        D. Sisal
8. Children who are only given one type of food are being denied their right to?

9. \_\_\_\_\_ is the practice of buying a favour from another person  
 A. Campaign                             B. Democracy  
 C. Isolation                              D. Corruption
10. Which of the following is not an importance of democracy to pupils in a school?  
 A. Deciding which club to join  
 B. Contributing in making class rules  
 C. Choosing leaders of their religious groups only.  
 D. Singing during classes
11. The feature shown below is a \_\_\_\_\_



12. A long study of the weather is known as \_\_\_\_\_  
 A. Climate                                B. Weather  
 C. Sunny                                 D. Rainfall
13. The longest river in Kenya is called river \_\_\_\_\_  
 A. Chania                                B. Tana  
 C. Athi                                     D. Subukia



14. Elections in Kenya are held after \_\_\_\_\_ years  
 A. 10  
 B. 5  
 C. 8  
 D. 20

15. The weather below is good for? \_\_\_\_\_



- A. Winnowing  
 B. Planting  
 C. Washing  
 D. Sleeping
16. Who was the third (3<sup>rd</sup>) president of Kenya?  
 A. Jomo Kenyatta  
 B. Daniel Moi  
 C. Mwai Kibaki  
 D. Uhuru Kenyatta

17. Lari is a district found in \_\_\_\_\_ county  
 A. Kiambu  
 B. Nakuru  
 C. Machakos  
 D. Murang'a

18. A long chain of hills form a \_\_\_\_\_  
 A. Set  
 B. Valley  
 C. Crown  
 D. Range

19. Which of the following is not an importance of vegetation?  
 A. It prevents soil erosion  
 B. It provides medicine  
 C. It damages river sources  
 D. It influences climate

20. \_\_\_\_\_ is the highest mountain in Kenya  
 A. Mt. Longonot  
 B. Mt. Kenya  
 C. Mt. Kilimanjaro  
 D. Mt. Elgon

21. In glassmaking industries, which type of soil is used?  
 A. Clay  
 B. Sand  
 C. Loam  
 D. Alluvial

22. When the coldest and hottest times of the day's readings are added together and divided by two, you get the \_\_\_\_\_ of the day  
 A. Annual temperature  
 B. Daily temperature  
 C. Average temperature  
 D. Normal temperature

23. Bamboo trees are usually found in which type of vegetation?  
 A. Savannah grassland  
 B. Semi-Desert  
 C. Savannah woodlands  
 D. Mountain

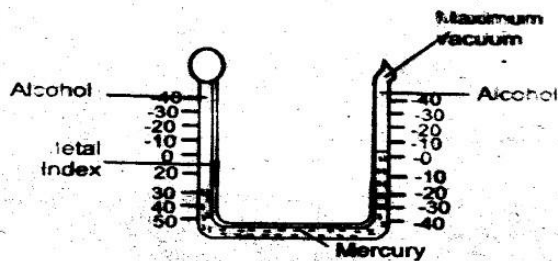
24. Which type of soil is used in making of ceramics?  
 A. Sand  
 B. Clay  
 C. Loam  
 D. Volcanic

25. Traditional medicine was obtained from \_\_\_\_\_  
 A. Foodstuffs  
 B. Animals  
 C. Herbs  
 D. Chemists

26. The quickest means of transport is \_\_\_\_\_  
 A. Road  
 B. Air  
 C. Water  
 D. Railways

27. The following are traditional methods of communication. Which one is not?  
 A. Newspaper  
 B. Drums  
 C. Smoke  
 D. Horns

28. The weather instrument below is used to measure \_\_\_\_\_?



- A. Rainfall  
 B. Temperature  
 C. Speed of wind  
 D. Length
29. The Kipsigis had \_\_\_\_\_ agesets  
 A. 2  
 B. 4  
 C. 5  
 D. 7


30. Which of the following human activities is conducted in Lake Victoria?  
 A. Grazing  
 B. Farming  
 C. Fishing  
 D. Trading

31. A person whose lifestyle one would wish to copy is a \_\_\_\_\_  
 A. King  
 B. Role model  
 C. Queen  
 D. Model king

32. Which one of the following areas in Kenya is sparsely populated?  
 A. Kiambu  
 B. Kisii  
 C. Turkana  
 D. Kericho

33. The river-lake Nilotes are believed to have originated from \_\_\_\_\_  
 A. Southern Sudan  
 B. Congo  
 C. Asia  
 D. Tanzania

34. The road sign below means



- A. No entry  
 B. Railway crossing  
 C. Road junction  
 D. Roundabout

35. Which of the following shows the right to shelter?  
 A. Living in the streets  
 B. Eating a balanced diet  
 C. Having a place to live in  
 D. Having many vehicles

36. The Executive county members are appointed by the County Governor and approved by the?  
 A. County Assembly speaker  
 B. Deputy speaker  
 C. County Assembly  
 D. County Assembly clerks

37. The \_\_\_\_\_ is in charge of making laws in the county.  
 A. County Assembly  
 B. Executive Committee  
 C. Deputy Governor  
 D. The speaker

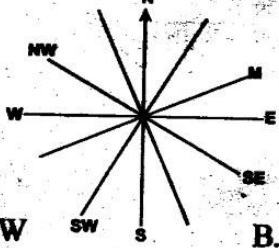
38. A \_\_\_\_\_ results from a difference in opinion between two people or two groups of people  
 A. Conflict  
 B. Disagreement  
 C. Birthday  
 D. Failure

39. The County Assembly should serve for a period of \_\_\_\_\_ years  
 A. 10  
 B. 3  
 C. 7  
 D. 5

40. People born around the same time form \_\_\_\_\_  
 A. Clan  
 B. Age group  
 C. Ageset  
 D. Politicians

41. In Kenya, the longest distance from the North to South is \_\_\_\_\_ Kms?

42. The main elements of a map are key, title, frame, scale and \_\_\_\_\_
43. A plateau is also known as a \_\_\_\_\_
44. Which of the following is an example of a hardwood?
45. The Semi-Desert climatic region is described as \_\_\_\_\_ and \_\_\_\_\_ throughout the year
46. The compass direction marked M is \_\_\_\_\_



47. Human settlement is mainly influenced by \_\_\_\_\_

*Use the map below to answer questions 48 and 49.*



48. The feature marked B is \_\_\_\_\_
49. The lake marked W is \_\_\_\_\_
50. Several age groups formed \_\_\_\_\_
51. Which of the following was taught to both boys and girls?
52. Which one of the following was not commonly done by the Traditional African Societies?
53. The following are examples of artefacts. Which one is not?
54. The \_\_\_\_\_ are the largest language group in Kenya

55. The official counting of people throughout Kenya is called \_\_\_\_\_
56. Which of the following is an example of a nuclear family?
57. All the Bantu groups of Kenya are believed to have originated from \_\_\_\_\_
58. The \_\_\_\_\_ built their fortified villages called Kaya to provide protection.
59. Population density is the \_\_\_\_\_
60. Three of the following may lead into a conflict among communities in Kenya. Which one can NOT?

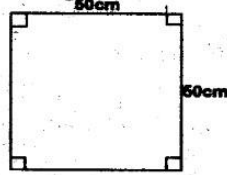
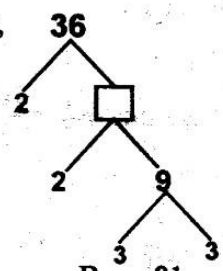
**C.R.E**

61. We respect the Sabbath day because \_\_\_\_\_
62. Irresponsible boy/girl relationships can lead to \_\_\_\_\_
63. Which one of the following is not a bad effect of weather?
64. "And now we will make human beings, they will be like us and resemble us." These words are found in the book of \_\_\_\_\_?
65. Paul said that faith without action is \_\_\_\_\_
66. The following are emotional changes. Which one is not?

67. \_\_\_\_\_ and \_\_\_\_\_ were sisters of Lazarus  
 A. Mary and Elizabeth      B. Martha and Mary  
 C. Tabitha and Miriam      D. Martha and Salome
68. Which one is not a fruit of the Holy Spirit  
 A. Peace  
 B. Self-control  
 C. Patience  
 D. Faith
69. Which of the following is NOT a reason why boys and girls grew up separately in the Traditional African Society?  
 A. To avoid pre-marital relations  
 B. To exercise self-control  
 C. They are different  
 D. To be taught different roles
70. Man is special in God's creation because  
 A. He was created first  
 B. He was created last  
 C. He was created in the image and likeness of God  
 D. He was put in the garden
71. You created every part of me; you put me together in my mother's womb. I praise you because you are to be feared all you do is \_\_\_\_\_  
 A. Great  
 B. Strange  
 C. Worrying  
 D. Good
72. From the story of Hannah we learn that \_\_\_\_\_  
 A. We should be selfish  
 B. We should cry when in trouble  
 C. We should not cry in church  
 D. We should not be selfish
73. Christians remember \_\_\_\_\_ during Easter.  
 A. The birth of Jesus  
 B. The ascension  
 C. The death of Jesus  
 D. The baptism of Jesus
74. Which one of the following disciples was asked by Jesus what they would do so as to feed the crowd  
 A. Philip      B. Andrew  
 C. John      D. Simon Peter
75. Responsible boy-girl relationship leads to \_\_\_\_\_  
 A. Drug abuse      B. School drop-outs  
 C. Early pregnancy      D. Good performance
76. By feeding the five thousand people, Jesus showed \_\_\_\_\_  
 A. He cared for their daily needs  
 B. He had power to preach  
 C. He loved men  
 D. He wanted people to follow Him
77. \_\_\_\_\_ coveted Naboth's vineyard  
 A. David      B. Ahab  
 C. Moses      D. Elijah
78. When Jesus washed the feet of the disciples it showed \_\_\_\_\_  
 A. The importance of cleanliness  
 B. He loved them  
 C. Service to others  
 D. Their legs were dirty
79. \_\_\_\_\_ broke the eighth commandment according to Exodus 20:15 by killing his brother.  
 A. Abraham      B. Cain  
 C. David      D. Saul
80. When we worship it is bad to \_\_\_\_\_  
 A. Give offerings      B. Baptise people  
 C. Sing to God      D. Judge evil doers
81. The fifth commandment says \_\_\_\_\_  
 A. Do not kill  
 B. Do not commit adultery  
 C. Do not steal  
 D. Honour your father and mother
82. Honesty is the habit of telling \_\_\_\_\_  
 A. Lies      B. The truth  
 C. Nice stories      D. Good news
83. According to (Mathew 22:36-40) the greatest commandment is \_\_\_\_\_  
 A. Observe the Sabbath day  
 B. Do not steal  
 C. Love the Lord your God  
 D. Do not kill
84. The first disciples of Jesus were \_\_\_\_\_ and \_\_\_\_\_  
 A. Peter and Andrew  
 B. Philip and John  
 C. James and Paul  
 D. Andrew and John
85. Which one of the following is the BEST reason why young christians should use their time wisely?  
 A. They will annoy their parents  
 B. They are responsible for their actions  
 C. Their body is the temple of the Holy Spirit  
 D. They can fail exams
86. Who was told by God to build an ark?  
 A. Adam  
 B. Abraham  
 C. Noah  
 D. Aaron
87. When Jesus sent His disciples, he told them to carry \_\_\_\_\_  
 A. Food  
 B. Water  
 C. Clothes  
 D. Nothing
88. After the last supper, Jesus and His disciples went to \_\_\_\_\_ to pray.  
 A. Mt. Moriah  
 B. Mt. Olives  
 C. Mt. Carmel  
 D. Mt. Kenya
89. In the traditional society girls did not \_\_\_\_\_  
 A. Fetch water  
 B. Herd cattle  
 C. Clean utensils  
 D. Cook
90. Your uniform is torn. You happen to find two thousand shillings in the school compound. You should \_\_\_\_\_  
 A. Take it to your parents  
 B. Share with friends  
 C. Buy uniform  
 D. Take it to the teachers.

**GATUNDU SOUTH DISTRICT**  
**ASSESSMENT TEST MID- TERM I 2015**  
**STD 5 MATHEMATICS**

- Write the number six hundred and sixty six thousand, six hundred and six in symbols.  
 A. 6666                      B. 600606  
 C. 666606                  D. 666666
- What is the total value of digit 8 in the 38079  
 A. 80  
 B. 8000  
 C. 800  
 D. 8
- Round off 7651 to the nearest hundreds  
 A. 7700                      B. 7600  
 C. 7650                      D. 7660
- Work out 
$$\begin{array}{r} 22906 \\ -2587 \\ \hline \end{array}$$
  
 A. 20481                      B. 20389  
 C. 20419                      D. 20319
- Write  $\frac{99}{100}$  as a decimal  
 A. 0.99                      B. 0.9  
 C. 99                          D. 0.099
- Work out  $5 \times 3 \times 2 =$   
 A. 15                          B. 10  
 C. 30                          D. 6
- Add  $0.6 + 0.2 + 0.1 =$   
 A. 1.0                          B. 0.9  
 C. 0.8                          D. 9
- Which of the following numbers is an odd number?  
 A. 522                          B. 841  
 C. 94                           D. 206
- What is the place value of 6 in the following 807.06?  
 A. Ones                          B. Hundreds  
 C. Hundredths                  D. Tens
- Which of the following numbers is divisible by 4?  
 A. 613                          B. 118  
 C. 234                          D. 108
- Convert 6 meters into cm  
 A. 600                          B. 60  
 C. 6000                          D. 6
- Work out 
$$\begin{array}{r} 3.84 \\ -1.42 \\ \hline \end{array}$$

- A. 2.48                          B. 4.26  
 C. 5.26                          D. 2.42
- Work out  $483 \div 21$   
 A. 63                           B. 24  
 C. 23                           D. 32
- Add 4km 605m to 3km 700m  
 A. 8km 305m                  B. 7km 1305m  
 C. 1km 105m                  D. 8km 205m
- What is the perimeter of a square below?  
  
 A. 100cm  
 B. 200cm  
 C. 2500cm  
 D. 150cm
- Which of the following numbers is a prime number?  
 A. 4                              B. 15  
 C. 30                              D. 17
- Add:  $9\text{kg} + 4\text{kg} =$   
 A. 14kg                          B. 5kg  
 C. 13kg                          D. 12kg
- Complete the factor tree,  
  
 A. 18                              B. 81  
 C. 11                              D. 12
- Work out 
$$\begin{array}{r} \text{m} \quad \text{cm} \\ 5 \quad 74 \\ + 5 \quad 23 \\ \hline \end{array}$$
  
 A. 1097cm                      B. 10m 51cm  
 C. 109m 7cm                  D. 10m 97cm
- Work out  $\frac{3}{4} - \frac{1}{5} =$   
 A.  $\frac{2}{20}$                               B.  $\frac{11}{20}$   
 C.  $\frac{2}{5}$                                 D.  $\frac{19}{20}$
- Work out: sh 86 ct  $75 \times 3$   
 A. sh258 cts25                  B. sh260 cts15  
 C. sh 2602 cts 5                  D. sh-260 cts 25
- What is the LCM of 10 and 15?

- A. 5  
C. 30  
B. 20  
D. 25

23. Mutiso had a 20 shilling coin. He bought a pen and a pencil. How much balance did he get?

Pen = sh15

Pencil = sh2.50

- A. sh 17.50  
C. sh 17.00  
B. sh 2.50  
D. sh 13.50

24. Work out

m	cm
9	96
$\times$	3
<hr/>	

- A. 29m 88cm  
C. 29m 78cm  
B. 27m 88cm  
D. 298m 8cm

25. Write 19 in Roman numerals

- A. IXI  
C. IXX  
B. XXI  
D. XIX

26. Convert sh 5 into cents

- A. 500cts  
C. 5000cts  
B. 50cts  
D. 5cents

27. In a tray there are 3 types of fruits p, t and b. What is the total number of fruits

- A.  $p \times t \times b$   
C.  $p + t + b$   
B.  $p - t - b$   
D.  $p + t - b$

28. Work out:  $7\frac{1}{2} + \frac{1}{5}$

- A.  $7\frac{2}{7}$   
C.  $\frac{7}{10}$   
B.  $7\frac{7}{10}$   
D.  $7\frac{3}{10}$


29. Add:  $\frac{1}{4}$  litres +  $\frac{1}{4}$  litres +  $\frac{1}{4}$  litres =

- A.  $\frac{1}{2}$  Litres  
B. 3 Litres  
C.  $\frac{3}{4}$  Litres  
D.  $\frac{1}{12}$  Litres

30. How many hours are there in 10 days?

- A. 2400 hrs  
C. 120hrs  
B. 24hrs  
D. 240hrs

31. This is a \_\_\_\_\_ angle.



- A. Triangle  
C. Obtuse angle  
B. Acute angles  
D. Right angle

32. This figure is made of \_\_\_\_\_ shapes



- A. Squares  
C. Circles  
B. Rectangles  
D. Triangles

33. There are M pupils in a school. The number of girls is x. How many boys are there in a school?

- A.  $m - x$   
C.  $x - m$   
B.  $m + x$   
D.  $m \times x$

34. Arrange the following in order from the smallest to largest?  $\frac{1}{2}, \frac{2}{3}, \frac{1}{4}, \frac{1}{3}$

- A.  $\frac{1}{2}, \frac{2}{3}, \frac{1}{4}, \frac{1}{3}$   
C.  $\frac{1}{4}, \frac{1}{3}, \frac{1}{2}, \frac{2}{3}$   
B.  $\frac{2}{3}, \frac{1}{2}, \frac{1}{3}, \frac{1}{4}$   
D.  $\frac{2}{3}, \frac{1}{4}, \frac{1}{3}, \frac{1}{2}$

35. Convert 24 months into years

- A. 48 years  
C. 36 years  
B. 2 years  
D. 12 years

36. Mwenda has 3-two hundred shillings notes. How many fifty shilling note can he get as change?

- A. 6  
C. 5  
B. 3  
D. 12

37. Write down the date 20.6.1964 in full

- A. 20th June 1964  
B. 20th.6.1964  
C. 20.6.1964  
D. 1964 July 20th

38. Change 13000metres into kilometres

- A. 130km  
C. 13km  
B. 1300km  
D. 1.3km

39. What is the next number in the pattern 35, 37, 39, 41, \_\_\_\_\_

- A. 42  
B. 43  
C. 40  
D. 45

40. Add:  $213 + 208$

- A. 401  
C. 124  
B. 411  
D. 421

41. Fill in the missing number in the following  $\frac{3}{5} = \frac{\square}{35}$

- A. 7  
C. 15  
B. 21  
D. 10

42. Convert 600 minutes into hours

- A. 60hrs  
C. 10hrs  
B. 6hrs  
D. 10min


43. Divide 28m 17cm by 9

- A. 31m 3cm
- B. 3m 13cm
- C. 313cm
- D. 313m

44. Change  $6\frac{3}{4}$  into improper fraction.

- A.  $\frac{24}{4}$
- B.  $\frac{13}{4}$
- C.  $\frac{72}{4}$
- D.  $\frac{27}{4}$

45. What is the total number of square units in the figure below?



- A. 36
- B. 6
- C. 12
- D. 25


46. Work out  $1\frac{1}{3} \times 5 =$

- A.  $\frac{4}{3}$
- B.  $6\frac{1}{3}$
- C. 16
- D.  $6\frac{2}{3}$

47. Divide sh 720 ÷ 9

- A. sh 80.10
- B. sh90
- C. sh80
- D. sh70

48. How many cubes are there in the shown stack?



- A. 32
- B. 16
- C. 8
- D. 10

49. Ogola has 137 cows and 208 goats on his farm. How many animals does he have on the farm altogether?

- A. 345
- B. 71
- C. 131
- D. 335

50. Use the table below to answer question 50.

Vehicle	Tally marks
Cars	
Buses	
Lorries	

How many more buses than lorries can you count?

- A. 5
- C. 11

- B. 15
- D. 7

**GAJUNDO SOCIETY**  
**STD. 5 ANSWERS**

<b>MATHS</b>		<b>ENGLISH</b>		<b>KISWAHILI</b>		<b>SCIENCE</b>	
1. C	26. A	1. D	26. C	1. A	26. B	1. C	26. C
2. B	27. C	2. A	27. C	2. B	27. A	2. <del>C</del> B	27. A
3. A	28. B	3. C	28. A	3. C	28. D	3. B	28. B
4. D	29. C	4. B	29. B	4. D	29. A	4. A	29. C
5. A	30. D	5. A	30. A	5. B	30. D	5. D	30. B
6. C	31. D	6. C	31. C	6. A	31. B	6. D	31. C
7. B	32. B	7. B	32. C	7. C	32. A	7. C	32. B
8. B	33. A	8. B	33. C	8. A	33. B	8. B	33. C
9. C	34. C	9. B	34. D	9. B	34. C	9. D	34. C
10. D	35. B	10. D	35. B	10. A	35. B	10. A	35. B
11. A	36. D	11. D	36. A	11. A	36. C	11. A	36. B
12. D	37. A	12. C	37. B	12. B	37. A	12. D	37. C
13. C	38. C	13. C	38. B	13. C	38. C	13. A	38. D
14. A	39. B	14. B	39. D	14. A	39. A	14. C	39. C
15. B	40. D	15. A	40. A	15. B	40. B	15. B	40. C
16. D	41. B	16. A	41. C	16. C	41. C	16. B	41. B
17. C	42. C	17. B	42. C	17. A	42. A	17. A	42. B
18. A	43. B	18. C	43. A	18. D	43. C	18. A	43. C
19. D	44. D	19. D	44. C	19. B	44. D	19. C	44. D
20. B	45. A	20. B	45. D	20. C	45. C	20. C	45. A
21. D	46. D	21. D	46. B	21. A	46. A	21. D	46. C
22. C	47. C	22. B	47. A	22. B	47. A	22. A	47. B
23. B	48. A	23. D	48. C	23. C	48. A	23. B	48. A
24. A	49. A	24. D	49. B	24. B	49. A	24. C	49. D
25. D	50. D	25. A	50. B	25. C	50. C	25. D	50. C

**SOCIAL STUDIES**

1. A	21. B	41. D	61. B	81. D
2. B	22. C	42. A	62. C	82. B
3. C	23. D	43. B	63. D	83. C
4. B	24. B	44. C	64. B	84. A
5. A	25. C	45. B	65. C	85. B
6. B	26. B	46. D	66. A	86. C
7. C	27. A	47. B	67. B	87. D
8. A	28. B	48. C	68. D	88. B
9. D	29. D	49. C	69. A	89. B
10. C	30. C	50. B	70. C	90. D
11. D	31. <del>A</del> B	51. D	71. B	
12. A	32. C	52. A	72. D	
13. B	33. A	53. A	73. C	
14. B	34. C	54. B	74. A	
15. C	35. C	55. B	75. D	
16. C	36. C	56. A	76. A	
17. A	37. A	57. D	77. B	
18. D	38. A	58. B	78. C	
19. C	39. D	59. D	79. B	
20. B	40. B	60. <del>B</del> A	80. D	