

GATUNDU SOUTH DISTRICT
ASSESSMENT TEST MID TERM 1 2015
DARASA LA NNE KISWAHILI

Jaza pengo kwa kutumia neno sahihi 1-15

Hapo zamani za 1 kaka Sungura na Fisi 2 marafiki wakubwa sana. Kila 3 walikuwa pamoja. Walishirikiana kwa 4 walichofanya. Wanyama wengine 5 kuwakemea kuwa wao walikuwa hawaachani 6 chanda na 7. Hata 8 rafiki hawa hawakujali 9 na dharau 10 wanyama wengine.

- | | |
|----------------|---------------|
| 1. A. kitambo | B. kare |
| C. kalee | D. kale |
| 2. A. walikuwa | B. walikua |
| C. walipatana | D. walizaliwa |
| 3. A. mala | B. mara |
| C. mahala | D. wakati |
| 4. A. hicho | B. hiki |
| C. kifa | D. mambo |
| 5. A. waliona | B. walinena |
| C. walitenda | D. walianza |
| 6. A. kama | B. kana |
| C. kaama | D. tena |
| 7. A. bangili | B. mkufu |
| C. pete | D. kipuli |
| 8. A. hayo | B. hivyo |
| C. hio | D. hao |
| 9. A. maono | B. maona |
| C. mambo | D. maoni |
| 10. A. za | B. ya |
| C. la | D. na |

Mimea hupamba 11 ikaonekana ya 12 pia huzuia 13 kwa jangwa na 14 wa 15.

- | | |
|-------------------|----------------|
| 11. A. inchi | B. nchi |
| C. nji | D. nichu |
| 12. A. kuvutia | B. kukasirisha |
| C. kuchekelewa | D. kuogofya |
| 13. A. kuharibika | B. kupotea |
| C. kudidimia | D. kuenea |
| 14. A. momonyoko | B. monyooko |
| C. mmomonyoko | D. mumomonyoka |
| 15. A. udongo | B. mchanga |
| C. mawe | D. kokoto |


Jibu maamkuzi

- | | |
|---------------|--------------|
| 16. Shikamoo? | B. marahaba |
| A. vizuri | D. poa |
| C. vyema | |
| 17. Hujambo? | B. hatajambo |
| A. salama | D. sijambo |
| C. vyema | |

Andika kwa nambari

- | | |
|--------------------------------|----------|
| 18. Mia tano, ishirini na tano | B. 50025 |
| A. 5025 | D. 5205 |
| C. 525 | |
| 19. Mia tisa tisini na tisa | B. 90099 |
| A. 999 | D. 969 |
| C. 9909 | |

Andika kwa wingi

20. Mtoto huyu ni mwerevu
A. watoto hawa ni warefu
B. watoto hawa ni werevu
C. watoto hawa ni mwerefu
D. watoto wale ni werevu
21. Umbo hili huitwaje?

A. mraba
B. mche
C. mstatili
D. duara
22. Jiko la makaa huitwa _____
A. seredani
B. bilauri
C. jiko la kuni
D. mbuzi
23. Kamilisha methali
Kikulacho ki _____
A. nguoni mwao
B. nguoni mwako
C. nguoni yako
D. nguoni kwako
24. Kanusha
Mimi nitaenda
A. mimi sitaenda
B. sisi tutaenda
C. sisi tunaenda
D. wewe nitaenda
25. Vichana _____ vipya vimenunuliwa
A. kingi
B. mingi
C. vingi
D. jingi
26. Tunda _____ limeiva ni langu
A. ambalo
B. ambazo
C. ambacho
D. ambaye
27. Mama ya baba yangu ni _____
A. mjukuu
B. nyanya
C. shangazi
D. binamu
28. Akisami hii huitwaje? $\frac{1}{4}$
A. nusu
B. tusui
C. robo
D. khumusi
29. Daima namsikia tu lakini simuoni
A. upepo
B. giza
C. wimbo
D. sauti
30. Popoo mbili zavuka mto
A. pua
B. macho
C. siafu
D. watoto
31. Bei ya gari hili ni _____
A. ngali
B. gari
C. ghali
D. gali
32. Maana ya semi ifuatayo ni:
Kufunga safari
A. kuanza safari
B. kufika unakopenda
C. kutumia kamba kufunga
D. kuacha kwenda

33. _____ tutaenda nyumbani jioni
 A. mimi B. sisi
 C. wewe D. nyinyi
34. Mzazi _____ ni wa Amina
 A. mle B. yule
 C. hicho D. wale
35. Wageni hao walichinjiwa _____ mkubwa
 A. pata B. vata
 C. bata D. fata
36. Ndege ni kwa kiota kama vile nyuki ni kwa _____
 A. msinga B. zizi
 C. masinga D. mzinga
37. Maziwa ni ya rangi gani?
 A. nyekundu
 B. nyeupe
 C. samawati
 D. manjano
38. Hakuna mtu _____ aliyeingia hapa
 A. wowote
 B. yoyote
 C. yeyote
 D. yoyote
39. Ni ng'ombe _____ aliye na maziwa mengi?
 A. zipi
 B. ipi
 C. lipi
 D. yupi
40. Mchi hutumiwa pamoja na _____
 A. mi B. kiru
 C. mcha D. mbuzi

Soma kifungu kifuatacho kisha ujibu maswali

Shule zinapofungwa kila mwanafunzi hufurahi sana kwani hupata wasaa wakwenda nyumbani na kupumzika. Kila mhula wa masomo huwa una shughuli nyingi sana. Kuna masomo, michezo na pia mitihani. Mambo haya yote humfanya mwanafunzi kuchoka sana katika mwili na akili vile vile. Wakati wa likizo, huwa unangonjewa kwa hamu sana na wanafunzi wote. Wanafunzi wanaosomea mbali na kwao hasa huwa ndio wenye kuifurahia likizo hasa pale wanapopata nafasi ya kurudi nyumbani kwao. Mara nyingi wakati wa likizo huwa ni wakati wa mapumziko isipokuwa pale nyumbani pawe na kazi kama ya kulima, ujenzi au kulinda mifugo. Likizo inapofika, wanafunzi wanaosomea mijini kama Nairobi, Mombasa na Nakuru husafiri hadi mashambani kwao.

MASWALI

41. Wanafunzi hufurahi sana wakati gani?
 A. shule zinapofunguliwa
 B. shule zinapofungwa
 C. wanapoenda shuleni
 D. wanapofanya mitihani
42. Muhula wa masomo huwa na shughuli _____
 A. chache B. nyingi
 C. mingi D. kidogo
43. Zifuatazo ni shughuli za shuleni isipokuwa _____
 A. kusoma B. kucheza
 C. kupika D. kufanya mitihani

44. Neno lingine lenye maana sawa na shule ni _____
 A. mafunzoni B. skuli
 C. ofisini D. zahanati
45. Ni wanafunzi wapi wanaofurahia likizo zaidi?
 A. wanaosomea karibu
 B. wanaosomea uwanjani
 C. wanaosomea mbali
 D. wasioenda shule
46. Likizo huwa ni wakati wa _____
 A. kusoma tu B. kufanya mitihani
 C. kushindana D. kupumzika
47. Ni shughuli gani ya nyumbani haijatajwa katika ufahamu?
 A. kufagia B. ujenzi
 C. kulima D. kulinda mifugo
48. Ni mji upi umetajwa katika taarifa?
 A. Mombasa B. Eldoret
 C. Machakos D. Garissa
49. Neno mashambani limepigwa mstari, maana yake ni _____
 A. barabarani B. kichakani
 C. nyumbani D. hospitalini
50. Kichwa kinachofaa taarifa hii ni _____
 A. Siku za likizo ya shule
 B. Safari za nyumbani
 C. Masomo mengi shuleni
 D. Wanafunzi wasiosoma

GATUNDU SOUTH DISTRICT
ASSESSMENT TEST MID TERM 1 2015
STD 4 SCIENCE

1. To be in good health one should have food, rest, sleep, exercise and _____

- A. Education B. Medical care
 C. Clothes D. Shoes

2. The tooth below is used for biting and _____



- A. crushing B. grinding
 C. cutting D. chewing

3. The eye is the sense organ for _____

- A. seeing B. smelling
 C. tasting D. hearing

4. Njoroge's stomach was aching because he was _____

- A. Healthy B. Tired
 C. Sick D. Parent

5. When a child is about six to seven years, the teeth start falling off. This is known as _____

- A. Shedding B. Dropping
 C. Removing D. Uprooting

6. A _____ is a small plant

- A. tree B. weed
 C. maize D. seedling

7. When one is sick he should see a _____

- A. doctor B. teacher
 C. pastor D. parent

8. The first set of teeth is known as _____

- A. permanent teeth B. milk teeth
 C. new teeth D. old teeth

9. People who cannot see are said to be _____

- A. deaf B. dumb
 C. blind D. sick

10. We use _____ to kill germs in latrines

- A. water B. soap
 C. soil D. ash

11. The body's ability to resist and destroy germ that causes diseases is called _____

- A. Immunity B. Strength
 C. Healthy D. Deficiency

12. _____ is a plant that grows in dry places

- A. palm tree B. acacia tree
 C. tea plant D. cotton plant

Use the weather chat below to answer and

Days	Morning	Evening
Mon		
Tue		
Wed		
Thur		
Fri		

13. Which day was windy through out

- A. Monday B. Tuesday
 C. Wednesday D. Thursday

14. Which day was the best for washing clothes

- A. Monday B. Tuesday
 C. Wednesday D. Friday

15. We get ropes from _____

- A. sisal fibre B. palm tree
 C. papyrus D. reeds

16. Which one of the following problems related to teeth is NOT CORRECTLY matched with its other name?

- A. Bleeding gum- Gum disease
 B. Cavities - holes
 C. Bad breath - bad smell
 D. Tooth decay - plague

17. Which one of the following food stuff below makes our teeth strong

- A. Soda and cake
 B. Sugarcane and cabbage
 C. Ice cream and fruit juice
 D. Sweets and biscuits

18. An example of a plant that grows in water is _____

- A. sugarcane B. water lilies
 C. Banana plant D. watermelon

19. When it rains, people _____

- A. uproots
 B. plant
 C. harvest
 D. weeds

20. HIV virus is NOT likely to be found in _____

- A. urine B. vaginal fluids
 C. semen D. blood

21. Mwarobaine is a common plant used as _____

- A. Medicine B. Juice
 C. Tea D. Coffee

22. Which of the following animals live in a shed

- A. Goat B. Cows
 C. Chicken D. Dogs

23. Permanent teeth are also called _____

- A. Wisdom teeth B. Primary teeth
 C. Deciduous teeth D. Milk teeth

24. Moving air is known as _____

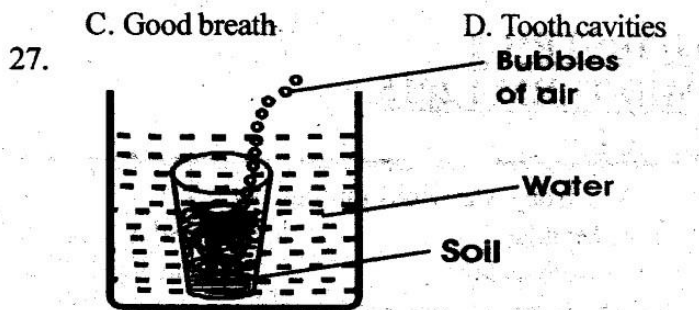
- A. Dust B. Gas
 C. Wind D. Vapour

25. A hutch is a house for _____

- A. Rabbit B. Cat
 C. Chicks D. Chicken

26. Which one of the following is NOT a problem related to poor dental hygiene

- A. Bleeding gums B. Tooth decay



The bubbles from the soil shows that soil has _____


- A. Air B. Water
C. Insects D. Smoke

28. Animals that are kept at home are called _____

- A. Domestic B. Home
C. shelter D. Wild

29. _____ is a special thread covered with wax used for cleaning between teeth

- A. Tooth pick B. Dental floss
C. Brush stick D. Tooth paste




When the glass was removed from the hot water bubbles were seen in the cold water in the glass.

This shows that water has _____

- A. Heat B. Bubbles
C. Air D. Warmth

31. The animal below protects itself by _____



- A. Hiding in shells B. Biting
C. Stinging D. Coiling

32. There are _____ molars on each side of the jaw of an adult

- A. 12 B. 6
C. 4 D. 3

33. Air is found _____

- A. All around us B. On trees only
C. In soil only D. In water only

34. Which one of the following is not used for transporting water _____

- A. Tankers B. Pipes
C. Animals D. tanks

35. Which one of the following soil becomes hard and cracks when dry?

- A. Clay soil B. Loam soil
C. Alluvial soil D. Sand soil

36. Meals bring family members _____

- A. peace B. friends
C. together D. sadness

37. Which is the BEST soil for modelling

- A. sandy soil B. Loam soil
C. alluvial soil D. clay soil

38. If one sneezes during meal time, he should cover his/her mouth with

- A. Handkerchief B. Tissue
C. Hands D. books

39. The following are characteristics of a certain soil

- (i) Has large soil particles
(ii) Dries quickly
(iii) Mixed with cement to make bricks


Which type of soil described above?

- A. Loam soil B. Sand soil
C. Alluvial soil D. Clay soil

40. Water can be made safe for drinking by _____

- A. Boiling B. Adding sugar
C. Adding salting D. Filtering

41. Name the parts the tooth below respectively from XYZ



- A. Root crown neck
B. Neck crown root
C. Crown neck root
D. Neck root crown

42. We should _____ when eating

- A. close our mouth B. open our mouth
C. talk and play D. sit on the table

43. Things that are smooth and shiny are _____ reflectors

- A. Good B. Bad
C. Poor D. Medium


44. Which town insects protect themselves by stinging?

- A. Bee and spider
B. Bee and wasp
C. Housefly and mosquitoes
D. Wasp and ant

45. Which of the following is not a special sound?

- A. Ambulance siren B. A hooting car
C. Police siren D. Yelling

46. The diagram below shows _____



- A. boiling B. cleaning
C. filtering D. storing

47. Which one of the following tools is used by a carpenter?

- A. Hammer B. Spade
C. Bottle opener D. An axe

48. When taking meals one should _____

- A. talk well B. eat fast
C. behave well D. play alot

49. A _____ is used for cutting big trees

- A. panga B. knife
C. matchete D. axe

50. _____ is a source of water

- A. Tap B. Rain
C. Tank D. Pot

GATUNDU SOUTH DISTRICT
ASSESSMENT TEST MID TERM 1 2015
STD. 4 ENGLISH

Fill in the spaces 1-15 using the best answer from the choices given

My mother 1 to go shopping 2 clothes with me. The 3 time we visited many 4 there were 5 many fashions 6 display that I could not 7 my mind what I wanted. Later mother 8 a beautiful pink outfit 9 me. To match she bought a 10 and bracelets for me. We needed to buy for grandmother a pair of 11 as a christmas 12. We were lucky to get a beautiful basket 13 different designs 14 her. It was 15 enjoyable afternoon.

- | | |
|----------------|----------------|
| 1. A. love | B. loves |
| C. loved | D. loving |
| 2. A. for | B. with |
| C. on | D. by |
| 3. A. more | B. most |
| C. last | D. least |
| 4. A. garage | B. boutiques |
| C. bakery | D. shops |
| 5. A. very | B. such |
| C. so | D. that |
| 6. A. on | B. in |
| C. of | D. by |
| 7. A. make out | B. make off |
| C. make to | D. make up |
| 8. A. choose | B. choice |
| C. chose | D. chosing |
| 9. A. for | B. of |
| C. on | D. by |
| 10. A. bangle | B. necklace |
| C. neck | D. lace |
| 11. A. catwalk | B. earrings |
| C. kitege | D. fashionable |
| 12. A. display | B. show |
| C. offer | D. gift |
| 13. A. at | B. on |
| C. above | D. with |
| 14. A. for | B. with |
| C. at | D. on |
| 15. A. an | B. a |
| C. the | D. that |

Use the best word to fill in the blanks

16. That is John's wheelbarrow. It is _____
 A. him B. his
 C. hers D. mine
17. This is _____ tractor. It belongs to you
 A. my B. his
 C. yours D. your

Choose the adverb in the following sentences

18. The patient was quickly rushed to hospital
 A. rushed B. patient
 C. quickly D. to
19. The nurse cleaned my wound gently
 A. gently B. would
 C. nurse D. cleaned

Use the correct word to complete the sentence

20. This teacher has worked here _____ seven years
 A. forever B. since
 C. of D. for
21. Mrs. James has been an Education Officer _____ 2005
 A. for B. since
 C. of D. with

Choose the correct answer

22. Which word means the same as beautiful
 A. ugly B. pretty
 C. thin D. handsome
23. Choose the opposite of empty
 A. full B. fool
 C. fil D. fully
24. Beatrice used a ruler to measure the _____ of the rope
 A. long B. length
 C. depth D. deep
25. Rose is the same _____ as her brother
 A. high B. weigh
 C. height D. length

Choose the correct word to fill in the blank

26. How _____ more sugar do we need to buy
 A. more B. must
 C. less D. much
27. How _____ more packets of milk shall I give
 A. many B. much
 C. more D. less

Choose the correct answer

28. Our teacher came across a _____ of monkeys
 A. pride
 B. troop
 C. shoal
 D. herd
29. A _____ of bees attacked the cattle
 A. swarm B. crowd
 C. group D. herd
30. I visited a _____ when my tooth was aching
 A. doctor B. nurse
 C. dentist D. patient

Read the passage below and answer questions 31- 40

Celebrations are occasions when people get together to share joy of happy events in their lives. For children, their birthdays are very exciting because this is when they turn a year older. With age comes new responsibilities and freedoms. Friends and relatives bring them presents. Parents often bake a cake for the child to share with his or her visitors.

As we grow older, birthdays are not so important because we have already experienced so many of them. One of the main functions that adults enjoy attending is a wedding where they see their friends and relatives getting married. The wedding ceremony is the most important part of the wedding. A priest or imam marries the couple and they sign a certificate of marriage which legally makes

them a man and wife. Then it is time for the party to begin. The guest usually share a meal and there are plenty of speeches by the bride and groom's relatives and friends. In the evening there is music and dancing which can continue into early hours.

31. What events do children enjoy most?
 - A. Wedding
 - B. Burial
 - C. Birthdays
 - D. School
32. What are visitors usually given on child's birthday?
 - A. Cake
 - B. Birthday
 - C. Books
 - D. Canning
33. Birthdays are not important as we get older. This is because we
 - A. old people don't have birthday
 - B. have experienced so many
 - C. Are expensive
 - D. don't know
34. What is the most important part of a wedding
 - A. wedding ceremony
 - B. Birthday
 - C. Priest
 - D. man and wife
35. Which of the following document is given during wedding?
 - A. Birth certificate
 - B. Cake
 - C. Friends
 - D. Certificate
36. What brings people together
 - A. celebrations
 - B. school
 - C. wedding
 - D. birthday
37. _____ marries the man and woman in church
 - A. priest
 - B. teacher
 - C. nurse
 - D. mothers
38. The man who is about to get married is called
 - A. Bride
 - B. Bridegroom
 - C. parents
 - D. maid
39. The opposite of the underlined word happy is _____
 - A. Joy
 - B. Sad
 - C. Exciting
 - D. Dancing
40. The best title of the passage is
 - A. Birthday
 - B. wedding
 - C. Celebration
 - D. Friends

Read the following passage and answer questions 41-50

Some insects are dangerous and we should protect ourselves from them. One of such insects is mosquito. Mosquitoes are dangerous because they bite us and make us sick, they spread malaria. We should use mosquito nets to stop mosquitoes from biting us.

Flies are also harmful insects. They are usually found in dirty places. Flies spread dirt and germ with their legs. They lay eggs in our food. Flies can make us sick because they spread the germs that can cause cholera and dysentery. We should always keep our food clean and covered in order to avoid flies.

Some ants are also dangerous because they can bite us. We should not sit or stand near ants because an ant-bite is very painful. Bees can also be dangerous although they provide us with honey, bees can sting. Their sting is very painful. When they sting us, they put poison in us. We should not make bees angry because they can kill us.


Scorpions are also dangerous insects. They sting with their tails and their sting has poison in it. The poison makes us sick and can even kill us. We should not go near scorpions

41. How many insects are mentioned in this story?
 - A. Three
 - B. four
 - C. Five
 - D. Six
42. The word dangerous in paragraph one means the same as _____
 - A. painful
 - B. biting
 - C. danger
 - D. harmful
43. Which of these insects spread malaria?
 - A. Mosquito
 - B. Scorpion
 - C. Flies
 - D. Ants
44. According to this passage, where do flies lay eggs?
 - A. In dirty places
 - B. In our food
 - C. In their legs
 - D. Anywhere
45. All the following sentences are wrong except
 - A. all ants are dangerous
 - B. no ants are dangerous
 - C. some ants can bite us
 - D. they can sting
46. Why are bees harmful?
 - A. They provide us with honey
 - B. They do not provide us with honey
 - C. They bite once in a while
 - D. They can sting
47. Why should we not make bees angry?
 - A. They can kill us
 - B. They are insects
 - C. They provide us with honey
 - D. They can bite us
48. Which one of the following insects can sting?
 - A. Mosquito
 - B. Scorpion
 - C. Flies
 - D. Ants
49. Which one of the following word have the same meaning as sick
 - A. dead
 - B. ill
 - C. dirty
 - D. sad
50. Which is the best title for the passage _____
 - A. Dangers of insect
 - B. Ants
 - C. Mosquitoes
 - D. Bees

**GATUNDU SOUTH DISTRICT
ASSESSMENT TEST MID- TERM I 2015
STD 4 MATHEMATICS**

1. Write in words 88899
 A. Eight thousand, eight hundred and ninety nine
 B. Eighty thousand, eight hundred and ninety nine
 C. Eighty eight thousand, eighty hundred and ninety nine
 D. Eighty eight thousand and ninety nine
2. What is the place value of digit 7 in 72493
 A. Thousands
 B. Ten thousands
 C. Hundreds
 D. Ones
3. Add $\begin{array}{r} 6540 \\ +5540 \\ \hline \end{array}$
 A. 11083
 B. 12183
 C. 10183
 D. 12088
4. $45M \div 5 = \underline{\hspace{2cm}} M$
 A. 9
 B. 8
 C. 40
 D. 50
5. Add $\frac{4}{10} + \frac{2}{10} = \underline{\hspace{2cm}}$
 $\frac{8}{10}$
 A. $\frac{10}{10}$
 B. $\frac{2}{10}$
 C. $\frac{6}{10}$
 D. $\frac{42}{10}$
6. Peter has 10 hens. Each hen laid 5 eggs. How many eggs did he get?
 A. 15
 B. 50
 C. 510
 D. 105
7. $75 + 24 =$
 A. 51
 B. 99
 C. 59
 D. 91
8. 7 hundreds 2 tens 9 ones = $\underline{\hspace{2cm}}$
 A. 297
 B. 729
 C. 279
 D. 927
9. Subtract $\begin{array}{r} 53276 \\ -3970 \\ \hline \end{array}$
 A. 51706
 B. 59306
 C. 59306
 D. 49306
10. $27 \div 3 = \underline{\hspace{2cm}}$
 A. 30
 B. 24

- C.8
 D.9
11. What do I take away from ninety five to get thirty three?
 A. 62
 B. 128
 C. 52
 D. 122
12. Subtract $\frac{10}{12} - \frac{3}{12}$
 A. $\frac{7}{12}$
 B. $\frac{13}{12}$
 C. $\frac{12}{7}$
 D. $\frac{12}{13}$
13. $0.6 + 0.2 + 0.1 = \underline{\hspace{2cm}}$
 A. 0.8
 B. 0.9
 C. 8.0
 D. 9.0
14. What fraction is unshaded?



- A. $\frac{1}{3}$
 B. $\frac{2}{3}$
 C. $\frac{3}{2}$
 D. $\frac{3}{1}$
15. $\begin{array}{r} \text{sh} \quad \text{ct} \\ 53 \quad 35 \\ -23 \quad 25 \\ \hline \end{array}$
 A. shs.76 60cts
 B. shs.30 10cts
 C. shs. 36 50cts
 D. shs.36 60cts
16. Kamau walks from home to the shops and back three times. How many metres does he walk?

 A. 200m
 B. 400m
 C. 600m
 D. 1200m
17. $\underline{\hspace{2cm}} \times 7 = 56$
 A. 7
 B. 49
 C. 63
 D. 8
18. Write in symbols. Forty four thousand, eight hundred and sixteen.
 A. 44816
 B. 404816
 C. 440816
 D. 40816
19. $\frac{1}{9}$ of 27 = $\underline{\hspace{2cm}}$
 A. 9
 B. 3
 C. 36
 D. 18

GATUNDU SOUTH DISTRICT MID TERM 1 2015

STD. 4 ANSWERS

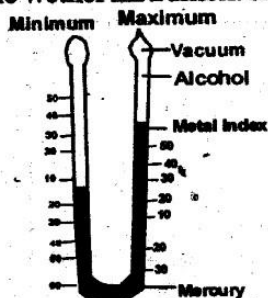
<u>MATHS</u>		<u>ENGLISH</u>		<u>KISWAHILI</u>		<u>SCIENCE</u>	
1. C	26. A	1. B	26. D	1. D	26. A	1. B	26. C
2. B	27. B	2. A	27. A	2. A	27. B	2. C	27. A
3. D	28. A	3. C	28. B	3. B	28. C	3. A	28. A
4. A	29. B	4. B	29. A	4. C	29. A	4. C	29. B
5. C	30. B	5. C	30. C	5. D	30. B	5. A	30. C
6. B	31. C	6. A	31. C	6. A	31. C	6. D	31. D
7. B	32. C	7. D	32. A	7. C	32. A	7. A	32. B
8. B	33. B	8. C	33. B	8. B	33. B	8. B	33. A
9. C ^Δ	34. B	9. A	34. A	9. D	34. B	9. C	34. D
10. D	35. A	10. B	35. D	10. A	35. C	10. D	35. A
11. A	36. D	11. B	36. A	11. B	36. D	11. A	36. C
12. A	37. C	12. D	37. A	12. A	37. B	12. B	37. D
13. B	38. B	13. D	38. B	13. D	38. C	13. D	38. A
14. A	39. C	14. A	39. B	14. C	39. D	14. B	39. B
15. B	40. C	15. A	40. C	15. A	40. B	15. A	40. A
16. D	41. D	16. B	41. C	16. B	41. B	16. D	41. C
17. D	42. C	17. D	42. D	17. D	42. B	17. B	42. A
18. A	43. A	18. C	43. A	18. C	43. C	18. B	43. A
19. B	44. A	19. A	44. B	19. A	44. B	19. B	44. B
20. A	45. A	20. D	45. C	20. B	45. C	20. A	45. D
21. C	46. B	21. B	46. D	21. C	46. D	21. A	46. C
22. D	47. C	22. B	47. A	22. A	47. A	22. B	47. A
23. D	48. D	23. A	48. B	23. B	48. A	23. B	48. C
24. B	49. B	24. B	49. B	24. A	49. C	24. C	49. D
25. D	50. C	25. C	50. A	25. C	50. A	25. A	50. D [Ⓟ]

SOCIAL STUDIES

1. B	21. D	41. B	61. B	81. C
2. C	22. B	42. D	62. D	82. B
3. A	23. C	43. C	63. B	83. A
4. B	24. A	44. A	64. A	84. B
5. D	25. D	45. D	65. C	85. B
6. A	26. C	46. A	66. B	86. A
7. C	27. B	47. B ^A	67. C	87. B
8. B	28. A	48. D	68. D	88. A
9. C	29. D	49. A	69. B	89. A
10. B	30. C	50. C	70. C	90. C
11. D	31. B	51. C	71. D	
12. A ^C	32. C	52. A	72. A	
13. D	33. A	53. C	73. D	
14. A	34. A	54. B	74. C	
15. C	35. B	55. D	75. B	
16. A	36. D	56. A	76. B	
17. D	37. C	57. B	77. D	
18. B	38. A	58. C	78. A	
19. A	39. D	59. D	79. D	
20. C	40. C	60. D	80. C	

18. Vegetation that grows in swampy areas is _____
 A. Scrub B. Papyrus reeds
 C. Riverine D. Wood land

19. The wether instrument shown below is a _____



- A. Thermometer
 B. Barometer
 C. Windvane
 D. Raingauge

20. The instrument above measures
 A. Rainfall B. Wind
 C. Temperature D. Distance
21. Areas where beef cattle are kept are known as _____
 A. Cattle pens B. Cattle dips
 C. Cattle troughs D. Cattle ranches
22. The main language group in our district is _____
 A. Nilotes B. Bantus
 C. Cushites D. Asians
23. When the weather is cold, we should wear _____ clothes
 A. Light B. Cold
 C. Warm D. Hot

24. _____ are freedoms and privileges that everyone is entitled to
 A. Human rights B. Democracy
 C. Powers D. Morals
25. People who walk with their goods selling to others are known as _____
 A. Buyers B. Sellers
 C. Traders D. Hawkers

26. Chickens give us _____
 A. Milk B. Skin
 C. Meat D. Mutton
27. People who use parts of trees to treat people are called _____
 A. Diviners B. Herbalists
 C. Nurses D. Doctors

28.



The road sign shows there is a _____ ahead

- A. Bump B. Corner
 C. Danger D. Hill
29. _____ are people who kill wildlife to get money
 A. Wardens B. Hunters
 C. Tourists D. Poachers
30. The head of a county is _____
 A. County Commissioner B. District Officer
 C. Governor D. President
31. A crop grown for sale is called _____
 A. Sale B. Cash
 C. Coffee D. Buying

32. The slowest means of transport is _____
 A. Road B. Air
 C. Railway D. Water


33. _____ values help us to have good behaviour
 A. Moral B. Obedience
 C. Wrong D. Unity

34. Cutting down of trees is called _____
 A. Deforestation B. Agroforestry
 C. Afforestation D. Re afforestation

35. Which of the following is a good habit?
 A. Stealing things B. Telling the truth
 C. Being lazy D. Being disobedient

36. If you find a hundred shillings note and take it to the teacher, this is a show of
 A. Corruption B. Bribery
 C. Harmony D. Honesty

37.



Many trees growing together form a _____

- A. Grassland B. Bushland
 C. Forest D. Scrub vegetation
38. A ceremony that prepared young people for adulthood was the _____ ceremony.
 A. Initiation B. Burial
 C. Wedding D. Birth and naming
39. Which of the following is a festival
 A. Hunting B. Naming
 C. Marriage D. Drama
40. Which of the following was a traditional food of the Agikuyu?
 A. Pilau B. Ugali
 C. Arrowroots D. Irish potatoes

41. People who speak in a similar way and use words related to each other form a _____ group.
 A. Community B. Language
 C. Word D. Bantu

42. _____ keep law and order in the society
 A. Teachers B. Drivers
 C. Chiefs D. Police

43. Which of these crops can be used in making bread?
 A. Tea B. Sisal
 C. Wheat D. Cotton



44. On 12th December, we celebrate _____
 A. Jamhuri day
 B. Labour day
 C. Mashujaa day
 D. Madaraka day

45. The national flag has _____ colours
 A. Three B. Two
 C. Five D. Four

46.



The man-made feature shown above is called _____?
 A. Bridge B. Hill
 C. Valley D. Road

47. Cattle that provide us with meat are known as _____
 A. Dairly cattle B. Valley
 C. Hill D. Road
48. Which of the following areas is NOT plain?
 A. Thika B. Juja
 C. Ruiru D. Kijabe
49. An area with many people is said to have _____ population.
 A. High B. Slow
 C. Low D. Density
50. Which of the following is not a resource?
 A. Soil B. Water
 C. Clouds D. Trees
51. Asians in Kiambu county are mainly found in _____
 A. Villages B. Small farms
 C. Towns D. Valleys
52. The 3rd president of Kenya was
 A. Kibaki B. Moi
 C. Uhuru Kenyatta D. William Ruto
53. 
 The drawing above shows it is
 A. Cloudy B. Windy
 C. Rainy D. Sunny
54. Which of the following is an example of a nuclear family?
 A. Father, cousin, son, daughter
 B. Mother, father, sons, daughters
 C. Mothers, grandmother, father, children
 D. Cousins, father, grandfather
55. 
 The road sign drawn shows there is a _____ around
 A. Church B. Bridge
 C. Shop D. Hospital
56. The following were traditional methods of communication. Which one is NOT?
 A. Mobile phone B. Horns
 C. Smoke D. Drums
57. Which one of the following is NOT a basic need?
 A. Food B. Mobile phone
 C. Shelter D. Clothing
58. The following animals are found in a game park except
 A. Leopard B. Rhino
 C. Horse D. Zebra
59. An example of cushites are the
 A. Kikuyu B. Maasai
 C. Luo D. Borana
60. Birds kept mainly for meat are called
 A. Layers B. Beef
 C. Cranes D. Broilers

CRE

61. Emmanuel means _____
 A. Holy God B. God with us
 C. The king of kings D. Prince of peace
62. After the feeding of the five thousand people, how many baskets remained _____
 A. Five B. Seven
 C. None D. Twelve
63. After creation, God rested on the _____ day
 A. Sixth B. Seventh
 C. First D. Second
64. _____ and _____ were the sons of Zebedee
 A. John and James
 B. Mathew and James
 C. Peter and Andrew
 D. John and Judas
65. The three sons of Noah were _____
 A. Cain, Abel, Shem
 B. John, James, Peter
 C. Ham, Shem, Japheth
 D. Ham, Saul, Shem
66. Jesus raised _____ from the dead, where he had stayed for four days.
 A. Darcas
 B. Lazarus
 C. Zacheaus
 D. John
67. The first disciples to be called by Jesus were _____ and _____
 A. Phillip and Judas
 B. Mary and Martha
 C. Simon and Andrew
 D. Andrew and Paul
68. Who among the following betrayed Jesus.
 A. John B. James
 C. Simon Peter D. Judas Iscariot
69. Jesus showed respect for the temple by exercising the authority when He _____
 A. Casted out demons
 B. Cleansed the temple
 C. Raised the dead
 D. Prayed for the sinners
70. Jesus fed the five thousand people with _____
 A. Five loaves of bread only
 B. Twelve loaves of bread
 C. Two fish and five loaves of bread
 D. Two fish and one loaf
71. Lazarus the friend of Jesus lived in a town called _____
 A. Jericho B. Joppa
 C. Jerusalem D. Bethany
72. The luo community call their God _____
 A. Nyasaye B. Ngai
 C. Were D. Enkai
73. Three of the following are bad effects of the weather and water. Which one is good _____
 A. Leads to spread of diseases.

- B. Causes animals and human death
C. Destroys building
D. Provides home for wild animals
74. Christians celebrate the resurrection of Jesus during _____
A. Sabbath day
B. Christmas
C. Easter
D. Boxing day
75. _____ was a forefather of Jesus
A. Judas Iscariot
B. Abraham
C. Simon of Cyrene
D. John
76. During the day of pentecost, the disciples were filled with _____
A. Great power
B. Holy spirit
C. Evil spirit
D. Human strength
77. "Where can we buy enough food to feed all these people?" Who did Jesus ask this question?
A. Peter
B. James
C. Andrew
D. Philip
78. When Jesus was being baptised a voice came from heaven and referred Him as _____
A. Son of God
B. King of Jews
C. The prince of peace
D. Wonderful counsellor
79. Prophet Elijah raised the son of _____ from the dead
A. The widow from Nain
B. The Shunamite woman
C. Jesus
D. The widow of Zarephath
80. After the last supper, Jesus and His _____ went to Mt. Olives to pray
A. Pharisees
B. Brothers
C. Disciples
D. Saducees
81. Jesus was crucified at a place called _____
A. Mt. Horeb
B. Mt. Moriah
C. Calvary
D. Mt Sinai
82. Which of the following is a miracle of Jesus?
A. He parted the water of river Jordan
B. He raised people from the death
C. He walked in the wilderness
D. He cursed the forty two boys
83. Who helped Jesus to carry the cross _____
A. Simon of Cyrene
B. Joseph of Arimathea
C. Simon Peter
D. Judas Iscariot
84. Which one of the following is a quality of a good leader
A. Rudeness
B. Hardworking
C. Laziness
D. Unkindness
85. _____ baptised Jesus in river Jordan
A. Simon Peter
B. John the Baptist
C. Mathew
D. Andrew
86. Who were the first people to see baby Jesus _____
A. Shepherds
B. Wisemen
C. The Levites
D. The robbers
87. Joseph's brothers sold him to _____ traders.
A. Sudanese
B. Egyptian
C. Somalis
D. Kenyan
88. Mutambu found two boys fighting during breaktime. As a christian, what was the best action for him to take?
A. Report to the headteacher
B. Join and fight the big boy
C. Cheer them up
D. Call other boys to see
89. When Jesus walked on water, it showed that
A. He had power over nature
B. He was a man of God
C. He had power over the dead
D. He liked God's creation
90. One day Milkah was sent to the shop. The shopkeeper gave her more change. As a christian she should?
A. Buy chips for lunch
B. Take the money to her mother
C. Return the money to the shopkeeper
D. Give it on Sunday as offering