

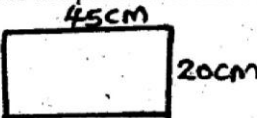
# PERFECT ENERGIZER SERIES

**PES**  
**008**


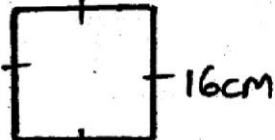
## STANDARD 4 - YEAR 2015

### MATHEMATICS

Time: 2Hrs

- What is the number 30758 written in symbols?  
A. Three hundred and seven thousand and fifty eight  
B. Three thousand seven hundred and fifty eight  
C. Thirty thousand seven hundred and fifty eight  
D. Thirty seven thousand and fifty eight
- What is the place value of digit 6 in the number 76058?  
A. thousand                      B. hundred  
C. ten thousand                  D. tens
- What is the total value of digit 8 in the number 48075?  
A. 80      B. 800      C. 8      D. 8000
- What is the next multiple of 9 after 72?  
A. 8                      B. 81  
C. 63                      D. 90
- Work out:  $7893 + 1465 + 72 =$   
A. 9430      B. 9358      C. 9420      D. 9330
- Fill the blank space with the correct factor  $12 \times \underline{\quad} = 216$   
A. 14                      B. 16  
C. 28                      D. 18
- Which of the following numbers is divisible by both 2 and 5?  
A. 52      B. 140      C. 96      D. 25
- Work out:  $207 \div 9 =$   
A. 27                      B. 33  
C. 13                      D. 23
- Which one of the following groups in numbers has odd number only?  
A. 145, 70, 172, 70      B. 48, 96, 140, 36  
C. 47, 81, 93, 75      D. 120, 140, 30, 180
- Add:  $\frac{2}{10} + \frac{1}{10} + \frac{3}{10} =$   
A.  $\frac{6}{10}$                       B.  $\frac{5}{10}$   
C.  $\frac{3}{10}$                       D.  $\frac{4}{10}$
- What is the next numbers in the pattern below?  
5, 6, 8, 11,           
A. 17      B. 15      C. 16      D. 13
- Convert 8m 16cm into cm.  
A. 24cm                      B. 96cm  
C. 816cm                      D. 8016cm
- What is the perimeter of rectangle below?  
  
A. 65cm  
B. 130cm  
C. 120cm  
D. 140cm
- Joyce had  $\frac{3}{7}$  litres of milk, she gave  $\frac{1}{7}$  litres of it to her son. How much milk was left?  
A.  $\frac{2}{7}$  litres                      B.  $\frac{1}{7}$  litres  
C.  $\frac{4}{7}$  litres                      D.  $\frac{5}{7}$  litres
- What is a ninth of 54?  
A. 9                      B. 63  
C. 7                      D. 6
- How many days are there in the months of January and February of a leap year?  
A. 60                      B. 61  
C. 59                      D. 58
- How many  $\frac{1}{4}$ kg are there in 8kg?  
A. 24                      B. 2  
C. 32                      D. 12
- What is the value of  $\frac{2}{5} \times 20 =$   
A. 40                      B. 4      C. 50      D. 8
- Work out:  


<u>Wks</u>	<u>days</u>
8	4
- 4	5

  
A. 4wks 6days                      B. 13wks 2days  
C. 3wks 6days                      D. 3wks 9days
- In a hall there are 8 rows. Each row had 26 chairs. How many chairs are there in the hall?  
A. 34      B. 168      C. 48      D. 208
- Work out:  $20 \times 34 =$   
A. 680      B. 140      C. 80      D. 860
- Write  $\frac{3}{5}$  in words:  
A. fifth                      B. three fifths  
C. three over five                      D. five thirds
- Work out:  
 $16 + 0.75 + 1.82 =$   
A. 2.73                      B. 16.75  
C. 18.57                      D. 4.17
- Change 0.04 into a fraction  
A.  $\frac{4}{100}$                       B.  $\frac{4}{1000}$   
C.  $\frac{4}{10}$                       D.  $\frac{40}{100}$
- What fraction is unshaded?  
  
A.  $\frac{4}{8}$   
B.  $\frac{2}{6}$   
C.  $\frac{4}{6}$   
D.  $\frac{2}{8}$
- Which of the fractions is equivalent to  $\frac{4}{5}$ ?  
A.  $\frac{16}{25}$       B.  $\frac{12}{15}$       C.  $\frac{8}{15}$       D.  $\frac{8}{20}$
- What is the perimeter of the square below?  
  
A. 54cm  
B. 64cm  
C. 44cm  
D. 32cm
- Work out:  


<u>M</u>	<u>cm</u>
8	50
x	6

  
A. 48m 56cm                      B. 51m 00cm  
C. 48m 00cm                      D. 50m 50cm

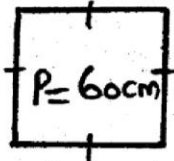
29. Change  $\frac{17}{100}$  into decimal.  
 A. 0.17    B. 0.017    C. 0.0017    D. 1.7
30. What is the name of the shape drawn below?



- A. cube    B. rectangle  
 C. cuboid    D. box
31. What is the value of  $x$ :  
 $x + 9 = 15$   
 A. 6    B. 8    C. 7    D. 24
32. What is the number 72.36 written in words  
 A. seven thousand two hundred and thirty eight  
 B. seventy two three six  
 C. seventy two point three six  
 D. seventy two point thirty six
33. How many minutes are there in  $1\frac{1}{2}$  hrs?  
 A. 100    B. 90  
 C. 120    D. 150
34. What is the time on the clock face below in long form?




- A. A quarter to six  
 B. Twenty minutes to six  
 C. Twenty five minutes past eight  
 D. A half past eight to six
35. Change 900 cts into shillings.  
 A. Sh. 10    B. Sh. 90  
 C. Sh. 19    D. Sh. 9
36. 14 pupils shared 840 bananas. How many bananas did each pupil get?  
 A. 60    B. 854  
 C. 80    D. 70
37. Work out:  $\frac{7}{12}\text{kg} - \frac{4}{12}\text{kg} =$   
 A.  $\frac{4}{12}\text{kg}$     B.  $\frac{3}{12}\text{kg}$   
 C.  $\frac{11}{12}\text{kg}$     D.  $\frac{2}{12}\text{kg}$
38. What is the place value of digit 2 in the number 86.72?  
 A. tenths    B. hundredths  
 C. thousandths    D. hundreds
39. The perimeter of the square below is 60cm. What is the length of one side?



- A. 10cm    B. 30cm  
 C. 20cm    D. 15cm
40. Divide:  
 $5 \overline{) 16m \ 30cm}$   
 A. 3m    6cm    B. 3m 26cm  
 C. 3m    36cm    D. 5m 26cm

41. How many 40 shillings are there in Sh. 200 note?  
 A. 5    B. 20  
 C. 50    D. 10
42. Which one is heavier? 5kg of feathers or 4kg of stones?  
 A. They are the same    B. 5kg of feather  
 C. both    D. 4kg of stones
43. If the year 2000 was a leap year, when was the next leap year?  
 A. 2004    B. 2008  
 C. 2001    D. 1996
44. How many small squares are there in the figure below.

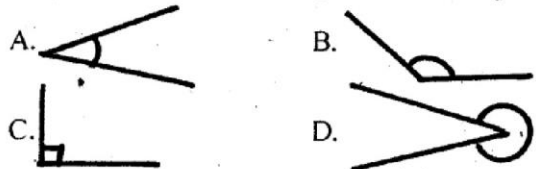


- A. 5  
 B. 18  
 C. 15  
 D. 20

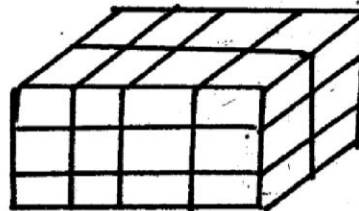
45. Name the point of intersection.  

 A. L  
 B. M  
 C. P  
 D. O

46. Work out:  
 $15n - 8n - 3n =$   
 A. 4n    B. 26n  
 C. 10n    D. 7n
47. Which one of the following is an acute angle?



48. One textbook cost Sh. 200. What is the cost of 6 such textbooks?  
 A. Sh. 206    B. Sh. 1200  
 C. Sh. 120    D. Sh. 600
49. How many cubes are there in the stack below?



- A. 8  
 B. 24  
 C. 32  
 D. 26

Use the table below to answer question vehicle tally marks quantity.

Buses	### /	6
Lorries	###	5
Cars	### ### /	11
Taxis	///	3

50. What is the total numbers of vehicles recorded?  
 A. 22    B. 25  
 C. 24    D. 19



# PERFECT ENERGIZER SERIES

**PES**  
**008**

**STANDARD 4 - YEAR 2015**

**ENGLISH**

Time: 1Hr 40Mins

Read the passage below. It contains blank spaces numbered 1 - 15. For each blank space, choose the correct answer from the four choices given.

Zipora was a pupil at Meta Primary school. She 1 in the zebra group 2 std. 4. One day, Zipora's father 3 home and told the family that 4 was going to work in another District so they 5 have to move 6 a new home. At first Zipora was 7 but then 8 realized 9 she would have to 10 all her friends. The next day she told 11 group the sad news. Her friends 12 also sad, I hope 13 won't forget us," said Joseph. Give 14 your new address so that we can 15 to you.

- |     |          |          |             |         |
|-----|----------|----------|-------------|---------|
| 1.  | A. is    | B. was   | C. were     | D. are  |
| 2.  | at       | with     | on          | in      |
| 3.  | come     | came     | will came   | coming  |
| 4.  | they     | she      | he          | we      |
| 5.  | will not | would    | won't       | have    |
| 6.  | at       | with     | by          | to      |
| 7.  | excited  | exciting | will excite | excite  |
| 8.  | he       | she      | we          | them    |
| 9.  | then     | which    | that        | when    |
| 10. | come     | left     | live        | leave   |
| 11. | his      | her      | was         | were    |
| 12. | are      | will     | was         | were    |
| 13. | she      | they     | you         | we      |
| 14. | us       | we       | they        | their   |
| 15. | written  | wrote    | write       | writing |

For question 16 to 18, choose the correct word to fill the blank spaces.

16. Kamau        to the market yesterday.  
A. go    B. going    C. went    D. goes
17. The pupils are running on the       .  
A. rod    B. road    C. rude    D. rud
18. Can you give        his book.  
A. his    B. him  
C. he    D. her

For questions 19 - 20, choose the words from the choices to complete the sentences.

19. My mother gave me        orange.  
A. a    B. un  
C. an    D. this
20. As hungry        a lion  
A. with    B. as  
C. same    D. at
21. I comb my        before going to school.  
A. air    B. hare  
C. hair    D. fair

In question 22 - 23, choose the correct sentences

22. A. I am twelve years old.  
B. Jane is short than Mary.  
C. Mother cooking in the kitchen.  
D. She has went to Kibwezi.
23. A. Mwikali was won the race.  
B. The cow was eat grass.  
C. He is lost his pen.  
D. Tom runs quickly.

Which is the best spelt word in question 24-25

24. A. sheep    B. Shep  
C. Soop    D. Beed
25. A. comittee    B. Committee  
C. Committee    D. Comittee
26. A. comfortable    B. comfatable  
C. camfortable    D. comforteble
27. A. Hapy    B. Happi  
C. Happy    D. Appy

Choose the word which is odd from the four

28. A. cup    B. sufuria  
C. plate    D. dish



29. A. lion      B. sheep      C. goat      D. cow

Choose the opposite of the underlined word

30. The bag is empty.

- A. fool                      B. faul  
C. full                        D. foal

Read the following passage carefully and then answer questions 30 - 40.

One day Tom and his friend took goats and cows out to graze. Their parents had given them food to eat at lunch time and they left the food in the bag under tree. They played games and watched goats and cows.

When they were hungry, they went to fetch the food, but there was nothing there, "Has anyone seen the bag?" but it could not be traced. Someone must have stolen it," said one of the boys. Just then, there was noise up on the tree.

A family of monkeys was enjoying their lunch. A few moments later, the biggest monkey threw the empty bag down. "That is why we could not see it anywhere," said Maina.

31. What were the children doing out?  
A. eating                      B. steeping  
C. grazing                      D. reading
32. Who had given the children food to eat?  
A. goats                        B. parents  
C. lunch                        D. monkey
33. Who were making noise up on the trees?  
A. goats and cows          B. the boys  
C. the lions                      D. monkeys
34. Where had the children left their food?  
A. under a tree                B. at home  
C. with goats                  D. in the field
35. "Someone must have stolen it." These words were said by \_\_\_\_  
A. one of the boys          B. monkeys  
C. goat                          D. Tom
36. The food was put in a \_\_\_\_  
A. sufuria                      B. lunch box  
C. basket                        D. bag
37. Which animals were the boys grazing?  
A. cows and monkeys  
B. sheep and goats  
C. goats and cows  
D. cows and sheep
38. The opposite of the word friend is \_\_\_\_  
A. parents                      B. enemy  
C. best                          D. loves

39. Why were children looking for food?  
A. to give goats              B. to take it home  
C. they were hungry        D. to play with it

40. Who threw the bag to the boys?  
A. a big bird                  B. the goat  
C. the stranger                D. the biggest monkey

Read the short passage below and answer questions 41 - 50.

The following five pupils are in std four. John, Jane, Ken, Martin and Joe. John likes reading and painting, Jane digs and paints afterwork Martin only enjoys digging. But Ken and Joe like eating chapati but only Joe can cook chapati.

41. Who enjoys doing only one activity?  
A. Joe                              B. Martin  
C. John                            D. Jane
42. Abungu can eat chapati when \_\_\_\_ has made it.  
A. Martin                        B. John  
C. Joe                              D. Jane
43. Which two pupils do the same activity?  
A. Ken and Joe  
B. Joe and Martin  
C. Jane and Ken  
D. Joe and John
44. Who can dig and also paint pictures?  
A. Martin                        B. Ken  
C. Jane                            D. John
45. It is true that Ojiko can \_\_\_\_  
A. cook and paint  
B. paint and read  
C. read and dig  
D. draw and paint
46. Who can grow crops?  
A. Joe                              B. Ken  
C. John                            D. Jane
47. Which activity is done by only one pupil?  
A. digging                        B. eating chapati  
C. cooking                        D. none
48. How many pupils do two different activities?  
A. one                              B. two  
C. three                          D. four
49. Painting is done by \_\_\_\_ and \_\_\_\_  
A. John and Jane              B. Jane and Martin  
C. John and Joe                D. Ken and Joe
50. Both Jane and Martin can \_\_\_\_  
A. cook                            B. paint  
C. dig                              D. read

# PERFECT ENERGIZER SERIES DARASA LA NNE - MWAKA 2015

PES

008

INSHA

*Muda: Dak. 40*

JINALAKO:

JINALASHULEYAKO:

Andika insha nzuri ya kuvutia kuhusu:-

RAFIKI YANGU NIMPENDAYE.

*FUNGUA UKURASA*

INSHA/ DARASA LA NNE

# PERFECT ENERGIZER SERIES

## DARASA LA NNE - MWAKA 2015

**PES**  
**008**

### KISWAHILI

Muda: Saa 1 Dakika 40

**Kamilisha kifungu kifuatacho ukijaza nafasi zilizochwa wazi.**

Maembe ni 1 sana mwaka 2. Miembe 3 imejaa 4 lakini bado ni 5 hayafai 6. Ukiwa maembe mabichi tumbo litakuuma. 'Umekula maembe mabichi 7! Tazama, 8 mgonjwa sasa! Ngoja nikupe chumvi 9 kesho 10.

	A.	B.	C.	D.
1.	nyingi	mengi	vingi	mingi
2.	hii	huyu	huu	haya
3.	zote	yote	wote	lote
4.	majina	mashina	matawi	matunda
5.	mabichi	mibichi	bichi	mbichi
6.	kukuliwa	kualwa	kiukulwa	kuliwa
7.	masita	masaba	sita	mingi
8.	yu	u	tu	aa
9.	uyanywe	ukanywe	uikunywe	unywe
10.	unapoona	umepona	utapona	ulipona

#### Jibu kulingana na maagizo

11. Andika kwa ukanushi "Nilikuona ukiwa na kofia".  
A. sitakuona ukiwa na kofia  
B. sikukuona ukiwa na kofia  
C. sikuoni ukiwa na kofia  
D. ninakuona ukiwa na kofia

#### Andika ngeli za maneno haya

12. Koti, vioo, mwizi  
A. i - zi, a-wa, u - i  
B. ya - ya, u - i, ki-vi  
C. li - ya, ki - vi, a-wa  
D. ki - vi, li - ya, a - wa
13. Andika kinyume:  
"Mtoto analala"  
A. mtoto halali  
B. mzee halali  
C. mtoto ameamka  
D. mzee anaamka
14. Jibu salamu ifuatayo:  
**Habari za utokako**  
A. mizuri  
B. msuri  
C. nzuri, njema  
D. mjema, njema
15. Kamilisha:  
Mti ulianguka \_\_\_\_\_  
A. kupu  
B. puku!  
C. ngu!  
D. pu!
16. Tegua kitendawili:  
"Msichana wangu amejishika kiuno".  
A. kikombe  
B. mkia  
C. sahani  
D. mkono

17. Ni neno lipi tofauti?

A. pole  
B. asante  
C. nipe  
D. naomba

18. Baba wa baba ni \_\_\_\_\_

A. shangazi  
B. nyanya  
C. babu  
D. mjomba

19. Kamilisha methali hii:

Siku za mwizi ni \_\_\_\_\_  
A. hamsini  
B. ishirini  
C. arobaine  
D. hazijulikani

20. Ni chombo gani hutumiwa mekoni?

A. mwiko  
B. mwavuli  
C. jembe  
D. daftari

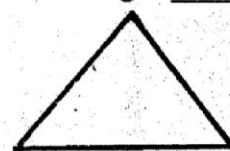
21. Kamilisha: Watu \_\_\_\_\_ uwanjani

A. alicheze  
B. nimecheza  
C. walicheza  
D. vilicheza

22. Saa moja ina dakika ngapi \_\_\_\_\_

A. 60  
B. 30  
C. 45  
D. 50

23. Hii ni umbo gani \_\_\_\_\_



A. mstatili  
B. pembe tatu  
C. mraba  
D. duara

24. Chagua jibu sawa.

Jana tulipiga \_\_\_\_\_ kumchagua kiongozi wetu.

A. gura  
B. kula  
C. kura  
D. gula

25. Ambatanisha na matumizi:  
Mkulima na \_\_\_\_\_  
A. kijiko B. kalamu  
C. jembe D. kitabu
26. Wanyama hawa hutupa nini, Kuku na ng'ombe \_\_\_\_\_  
A. maziwa na mayai B. mboga na nyama  
C. mayai na maziwa D. nyama na mayai
27. Tumia 'a' unganifu vyema:  
Chakula \_\_\_\_\_ mtoto.  
A. ya B. cha  
C. wa D. za
28. Ni yupi ndege? Mbuji, bata, swara, twiga  
A. bata B. mbuzi  
C. twiga D. swara
29. Watu huamka \_\_\_\_\_  
A. jioni B. mchana  
C. alasiri D. asubuhi
30. Tumia kihusishi sahihi katika sentensi ifuatayo:  
Mama alisubiri gari \_\_\_\_\_ barabara.  
A. mbele ya B. kando ya  
C. nyuma ya D. juu ya
31. Tumia kivumishi cha idadi kilicho sahihi.  
Hawa ni wanafunzi (12) \_\_\_\_\_  
A. kumi na mbili B. kumi wawili  
C. kumi na wawili D. kumi na mawili
32. Wageni walipewa chakula \_\_\_\_\_?  
A. gani B. kigani  
C. kipi D. vigani
33. Mtoto amelala \_\_\_\_\_  
A. katakata B. toloro  
C. kwakwa kwa D. fofofu
34. Andika kwa tarakimu  
Elfu tano mia nne na nane  
A. 5, 418 B. 5, 480  
C. 5, 408 D. 5, 804
35. Mti unaozaa tunda la nyanya ni \_\_\_\_\_  
A. mhindi B. mnyanya  
C. mharagwe D. mfenesi
36. Nini maana ya 'fyeka'?  
A. ongeza mbolea B. kata nyasi  
C. lima D. panda
37. Ndege huishi kwenye \_\_\_\_\_  
A. nyumba B. msitu  
C. kibanda D. kiota
38. Ni yupi mnyama wa porini?  
A. ngiri B. punda  
C. farasi D. kondoo
39. Jibu la salamu 'shikamoo'?  
A. masalikheri B. marahaba  
C. sabalkheri D. maraba
40. Mchezo wa kujificha wa watoto ni?  
A. kibe B. karate  
C. jugwe D. komiba

**Soma habari kisha ujibu maswali 41 - 50.**

Mbu ni mdudu mdogo sana lakini hatari kubwa katika maisha yetu. Anapofyonza damu ya mwanadamu, humwambukiza ugonjwa wa malaria. Ugonjwa wa malaria ni mbaya mno. Mtu akiambukizwa malaria anaweza kufa wakati wowote. Ugonjwa huu ni hatari sana kwa watoto wadogo.

Njia za kujikinga na malaria ni nyingi, kwanza ni kuharibu makao yote ya mbu. Makao hayo ni kama vile vichaka vilivyo karibu na nyumba zetu. Pili kufukia na kufunika mashimo yote yaliyo na maji machafu yaliyotulia na kuondoa mikebe yote ambayo imekusanya maji machafu na kuitupa mbali na kuharibu.

41. Mbu hutuambukiza ugonjwa wa \_\_\_\_\_  
A. sotoka B. surua  
C. inalaria D. kupooza
42. Ni ipi sio njia ya kuzuia mbu au malaria?  
A. kulala kwenye neti iliyotibiwa  
B. fyeka vichaka  
C. ondoa maji yaliyosimama  
D. weka maji nje
43. Ugonjwa wa malaria ni hatari kwa mama wajawazito na \_\_\_\_\_  
A. watoto wadogo B. wazee  
C. wavulana D. wasichana
44. Chakula cha mbu ni \_\_\_\_\_  
A. ugali B. maji  
C. mboga D. damu
45. Mbu ni mdudu \_\_\_\_\_  
A. mkubwa B. mzuri  
C. mdogo D. mweupe
46. Mdudu mbu ni \_\_\_\_\_  
A. hatari B. rafiki  
C. mwizi D. mkali
47. Ni yupi mdudu hapa?  
A. kuku B. samaki  
C. nzi D. kifani
48. Kuambukiza ni \_\_\_\_\_  
A. kuona B. kuelekea  
C. kueneza D. kuiba
49. Mtu mwenye malaria huwa ana \_\_\_\_\_  
A. umwa na kichwa B. kidonda  
C. aibu D. nguni
50. Kamilisha methali:  
Kulinga ni bora kuliko \_\_\_\_\_  
A. kupata B. kutibu  
C. kutafuta D. kufa



# PERFECT ENERGIZER SERIES

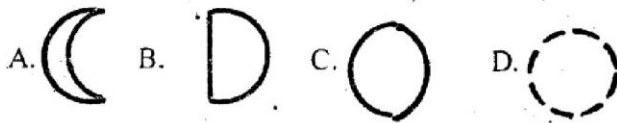
**PES**  
**008**

**STANDARD 4 YEAR 2015**

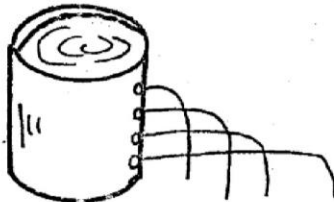
## SCIENCE

Time: 1Hr 40Mins

- Which animal is correctly matched with the way it moves?  
A. snake - crawling      B. dog - jumping  
C. horse - galloping      D. cow - slithering
- Which one of the following is **NOT** a source of water?  
A. rain      B. tap      C. ocean      D. river
- Three are examples of weed, which one is **NOT**?  
A. mexican marigold      B. oxalis  
C. millet      D. wandering jew
- Which one of the following is **NOT** a characteristic of clay soil.  
A. smooth      B. rough  
C. sticky      D. cracking when dry
- Which of the following shapes of the moon is a crescent?




- One can get HIV and AIDS through the following ways but not through \_\_\_\_  
A. blood transfusion      B. open wound  
C. playing together      D. sharing piercing tools
- Green plants make their own food through a process called?  
A. transpiration      B. evaporation  
C. respiration      D. photosynthesis
- Standard 4 pupils carried out an experiment during their science lesson as shown below.



The pupils concluded that?

- pressure decrease with depth
  - pressure increase with depth
  - there was no change
  - water did not flow
- Which one of the following is **NOT** true.  
A. light help to keep away pest in a house  
B. light in a house help us to see things  
C. light in a house makes it clean  
D. light helps us to avoid accidents

- Kiiri observed his mother pouring water into a container which had a piece of cloth wrapped over it as shown below.



This method of cleaning water is called?

- boiling      B. cooling      C. filtering      D. cleaning
- Which one of the following is a poultry?  
A. scarecrow      B. turkey      C. cat      D. snake
- Akinyi ate chips and soda for lunch, her friend Anyango ate ugali, beans and spinach. Who ate a better lunch?  
A. Akinyi      B. both      C. none      D. Anyango
- As a farmer, Tom uses a certain tool to level soil when preparing a seedbed identify the tool?  
A. sickle      B. jembe      C. rake      D. shears
- The recreational use of water from the list given below is?  
A. watering crops      B. dissolving salt  
C. cooking      D. swimming
- The tooth problem shown below is called?

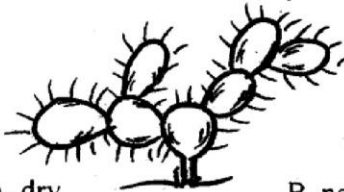


- dental cavity      B. dental carries  
C. plague      D. bleeding gum
- Which one of the following is **NOT** a product of plants?  
A. dress      B. book      C. polythene      D. coconut oil
- Which one of the following animals is kept at home?  
A. crocodile      B. lion      C. giraffee      D. dog
- Which of the following list consists of protective foods only?  
A. tomatoes, cabbage      B. fruits, chips  
C. meat, fish      D. chapati, rice
- The tool below is used for \_\_\_\_



- cutting vegetables      B. splitting wood  
C. cutting timber      D. trimming the hedge
- Which one of the following is **NOT** a use of light?  
A. enables us to see  
B. used by plant to make  
C. give us warmth  
D. used for cooking
- Which one of the materials **CANNOT** sink in water?  
A. stone      B. feather      C. coin      D. nail

22. An adult has got 32 teeth. These teeth are known as?  
 A. primary teeth                      B. temporary teeth  
 C. permanent teeth                    D. deciduous teeth
23. Three of the following are **NOT** examples of carnivores animals. Which one is a carnivore?  
 A. monkey    B. zebra    C. leopard    D. elephant
24. The best soil for farming is  
 A. sandy    B. loam    C. fine soil    D. clay
25. Cuts and open wounds on our bodies should be covered because \_\_\_\_\_ can get into our bodies.  
 A. germs    B. water    C. soil    D. malaria
26. The growing of a young plant from a seed is called?  
 A. germination                      B. plantation  
 C. seedling                            D. transpiration
27. The plant alongside grows in a \_\_\_\_\_ area?




- A. dry                                      B. near a river  
 C. on rocky                                D. on fertile

28. A diet that includes food from all the three groups is said to be \_\_\_\_\_  
 A. poor    B. mixed    C. balanced    D. proper
29. Which one of the following animals live in soil?  
 A. frog    B. earthworms    C. ostrich    D. zebra
30. The organic matter found in the soil are made by the following **EXCEPT**  
 A. waste from plants and animals  
 B. dead parts of animals  
 C. dead rotting plant  
 D. plastic papers
31. The experiment below shows that there is \_\_\_\_\_ in the soil.



- A. humus    B. air    C. water    D. animals
32. Which one of the following is **NOT** a use of wind?  
 A. moving boat                      B. destroying things  
 C. winnowing                        D. moving wind mill
33. The scientists who studies weather are called?  
 A. geologist                          B. scientists  
 C. astronants                        D. meteorologists
34. Which one of the following machines does **NOT** have a wheel?  
 A. plough                              B. wheel barrow  
 C. cart                                  D. crowbar
35. Which one of the following is **NOT** a good table manner?  
 A. talking while eating  
 B. covering your mouth when talking  
 C. putting your plate next you  
 D. washing hand before eating
36. Boss a std 4 pupil was going home on a sunny day, he was trying to observe his shadow but he found himself stepping on it. At what time was he going home?  
 A. at noon                              B. in the evening  
 C. morning                              D. night

37. A std 2 pupil put an empty bottle in water as shown below.



This shows that \_\_\_\_\_ in water.

- A. there is air                          B. there is water  
 C. there is a bottle                    D. there is glass
38. Sharing of toothbrushes is dangerous because it can cause \_\_\_\_\_  
 A. dental carries                      B. dental cavities  
 C. tooth decay                        D. AIDS
39. Farmers plant their crops during \_\_\_\_\_ season.  
 A. dry    B. rainy    C. windy    D. sunny
40. Which one of the following food gives us energy to work?  
 A. cooked bananas                    B. chicken, meat  
 C. tomatoes                            D. carrots
41. Std. 4 pupils observed dark - grey clouds which looked like mountains. What type of weather followed?  
 A. windy    B. calm    C. rainy    D. drizzling
42. Which one of the following is **NOT** a natural source of light?  
 A. matches    B. firefly    C. glow worm    D. sun
43. All the following stores water **EXCEPT**  
 A. pipes    B. dams    C. pots    D. drums
44. The liquid waste of an animal is called \_\_\_\_\_  
 A. dung    B. urine    C. droppings    D. water
45. The following are leguminous plants **EXCEPT**  
 A. sweet potatoes                    B. green grams  
 C. cow peas                            D. french beans
46. Three of the following are means of transport **EXCEPT**  
 A. motorcycle                        B. blowing horn  
 C. ferry                                D. boat
47. \_\_\_\_\_ and \_\_\_\_\_ are products of sisal plant.  
 A. mats and baskets                B. juice and mats  
 C. chair and stools                  D. desks and mats
48. The following statements are correct about the moon. Which one is **NOT** true?  
 A. it is commonly seen at night  
 B. it cause lightning  
 C. it appears in different shapes  
 D. it is sometimes seen in the day
49. One of the following is a source of heat energy from the trees. Which one?  
 A. gas    B. paraffin    C. firewood    D. electricity
50. Which one of the following is **NOT** a characteristic of animals?  
 A. move                                B. make own food  
 C. feed                                 D. reproduce

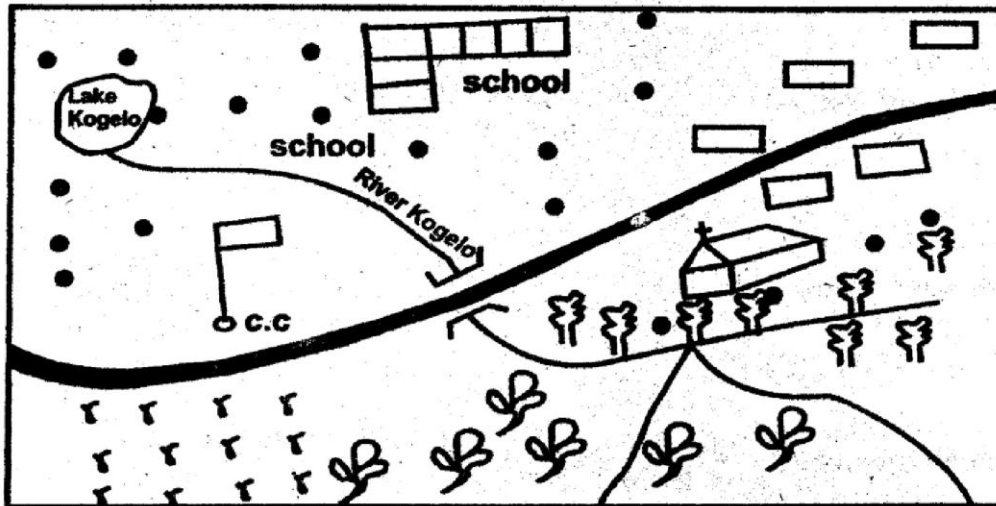
# PERFECT ENERGIZER SERIES

**PES**  
**008**

**STANDARD 4 - YEAR 2015**

**SOCIAL STUDIES & C.R.E : 2HRS 15MINS**

**KOGELO AREA**



**KEY**

- Forest
- Tarmac road
- Coffee
- Settlements
- Chiefs camp
- C.C.
- Permanent building
- river and bridge
- Maize
- Church



**Study the map of Kogelo area and answer questions**

**1-7**

1. Kogelo area is administered by a \_\_\_\_\_  
A. D. O    B. P.C    C. Chief    D. Police
2. The common religion in Kogelo area is \_\_\_\_\_  
A. Christianity    B. Islamic    C. Hindus    D. Pagans
3. The food crop grown in Kogelo area is \_\_\_\_\_  
A. coffee    B. maize    C. fish    D. beans
4. The mouth of river Kogelo is \_\_\_\_\_  
A. forest    B. mountain    C. swamp    D. lake
5. What is the direction of the school from the Chief's camp?  
A. South west                      B. North east  
C. South east                        D. North west
6. The main means of transport in Kogelo area is \_\_\_\_\_  
A. water    B. air    C. road    D. rail
7. The cash crop grown in Kogelo area is \_\_\_\_\_  
A. coffee    B. tea    C. pyrethrum    D. maize
8. The rivers that don't dry up during the dry season are called \_\_\_\_\_ rivers.  
A. seasonal                              B. permanent  
C. throughout                            D. tributaries
9. One of the following is not a food crop. Which one?  
A. cassava                                B. millet  
C. pyrethrum                              D. yam
10. The movement of people to look for better homeland is called \_\_\_\_\_  
A. tourism    B. migration    C. adventuring    D. visits
11. \_\_\_\_\_ ceremonies mark the end of childhood and beginning of adulthood.  
A. funeral    B. initiation    C. wedding    D. naming
12. The traditional food eaten by our people mostly depends on \_\_\_\_\_  
A. the choice by elders    B. their way of life  
C. the blessing by elders    D. their likes and dislikes
13. Large farms where crops are grown are called \_\_\_\_\_  
A. plantations                            B. ranches  
C. paddocks                                D. compounds
14. In traditional education, children were taught by \_\_\_\_\_  
A. teachers    B. adults    C. relatives    D. age mates
15. The head of the county is \_\_\_\_\_  
A. Governor    B. senator    C. chief    D. president
16. Elected members of the county assembly represent the \_\_\_\_\_  
A. wards    B. counties    C. parliament    D. senate
17. Three of the following are members of the county executive committee. Which one is **NOT**?  
A. members appointed by the county governor  
B. the speaker of the county assembly  
C. the county governor  
D. the deputy county governor



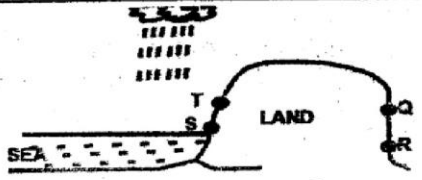
18. There are \_\_\_\_\_ counties in Kenya.  
A. 8 B. 16 C. 47 D. 68
19. Law and order is important because:  
A. the police do not arrest wrong-doers  
B. people live together in peace  
C. the laws favour other people  
D. children grow up in fear
20. We must obey and respect our parents because they \_\_\_\_  
A. are old B. know what is good for us  
C. take care of us D. will beat us
21. Which of the following is NOT a basic need?  
A. food B. shelter C. water D. bicycle
22. Which of the following human rights is provided freely to children in Kenya?  
A. shelter B. balanced diet  
C. education D. clean water
23. Which of the following is NOT a quality of a good client?  
A. being rich B. being cooperative  
C. being patriotic D. being respectful
24. Contributing money during a harambee meeting is a sign \_\_\_\_  
A. that one has a lot of money  
B. that one cares about other members of the society  
C. that one is obedient to the laws  
D. that one is hard working
25. Which of the following should Kenyan citizens NOT do?  
A. participate in elections B. pay tax  
C. give bribes D. be patriotic
26. Which of the following animals is found in a game park?  
A. cat B. hen C. cheetah D. dog
27. Which one of the following is NOT a traditional industry?  
A. iron working B. basketry  
C. glass making D. pottery
28. Exchange of goods for other goods is a method of trade called \_\_\_\_  
A. barter trade B. open air trade  
C. traditional trade D. cowrie shell trade
29. The Kikuyu called their God \_\_\_\_  
A. Aluj B. Were C. Tororok D. Enkai
30. A place where HIV/AIDS is tested is called \_\_\_\_  
A. HIV B. CVR C. VCT D. VCI
31. The green colour in our National Flag means \_\_\_\_  
A. vegetation B. peace C. co-operation D. kindness

32. Which one of the following is a traditional means of communication?  
A. horn blowing B. computers  
C. radio D. mobile phones
33. Pastoralists depend on their \_\_\_\_\_ for upkeep  
A. livestock B. rainfall C. grass D. crops
34. Lake Victoria is famous for \_\_\_\_  
A. flamingoes B. fish C. water D. minerals
35. Which one of the following ceremonies was marked with a sad mood in the past?  
A. naming ceremony B. birth ceremony  
C. harvesting ceremony D. death ceremony
36. The weather instrument drawn below is used for measuring \_\_\_\_  
A. strength of wind  
B. speed of wind  
C. rainfall  
D. humidity
- 
37. Chicken kept for egg production are called \_\_\_\_  
A. broilers B. layers C. poultry D. hens
38. We can protect water sources by \_\_\_\_  
A. cutting down trees  
B. planting more trees  
C. putting chemicals in water  
D. keeping many domestic animals
39. Who is the president of Kenya?  
A. Uhuru M'Wigai Kenyatta B. Raila Odinga  
C. Mwai Kibaki D. William Ruto
40. On 12th December of every year we celebrate \_\_\_\_  
A. Jamhuri Day B. Kenyatta Day  
C. Labour Day D. Maradaka Day
41. Which one of the following is NOT a traditional industry?  
A. basketry B. car assembly  
C. pottery D. iron working
42. The average weather condition of a place is known as \_\_\_\_  
A. climate B. rain C. temperature D. wind
43. What does this weather element indicate?  
A. cloudy  
B. rainy  
C. sunny  
D. windy
- 
44. In Kenya the main tourist attraction is \_\_\_\_  
A. mountains B. beaches  
C. wildlife D. culture



45. All the following are Cushites **EXCEPT** \_\_\_\_\_  
 A. Luo    B. Somalia    C. Galla    D. Oromo
46. \_\_\_\_\_ is the quickest means of transport.  
 A. air    B. water    C. road    D. railway
47. Which of the following is **NOT** an example of Bantu speaking group?  
 A. Somali    B. Kamba    C. Kisii    D. Mijikenda
48. Animals that help us to transport goods are \_\_\_\_\_  
 A. sheep    B. donkeys    C. cows    D. dogs

Use the diagram below to answer question 49 to 51.



49. According to the diagram above the town which receives most rainfall is \_\_\_\_\_  
 A. S    B. R    C. Q    D. T
50. Which town would you expect to have the lowest temperature?  
 A. R    B. Q    C. T    D. S
51. Towns Q and R are on the \_\_\_\_\_ side of the mountain.  
 A. table    B. lower    C. windward    D. leeward
52. Subsistence crop means \_\_\_\_\_  
 A. cash crops    B. bad crops  
 C. good crops    D. food crops
53. Which of the following is **NOT** a moral value in the society?  
 A. courage    B. corruption    C. honesty    D. respect
54. Which of the following plants is found in the swamp?  
 A. papyrus reeds    B. coconut plants  
 C. baobab trees    D. tea
55. The road sign drawn below shows \_\_\_\_\_



- A. zebra crossing  
 B. round about  
 C. road junction  
 D. bump ahead

56. Most medicines used to treat the sick in the past were got from ?  
 A. animals    B. birds    C. plants    D. soil
57. Hills, mountains, rivers and valleys are:  
 A. relief    B. altitude  
 C. physical features    D. highlands

58. The practice of hunting and killing wild animals illegally is known as ?  
 A. hunting    B. tourism  
 C. poaching    D. wildlife
59. Which of these acts will cause disagreements in a school?  
 A. being fair to all pupils  
 B. showing disrespect to others  
 C. listening to all people  
 D. obeying the school rules
60. Which one of the following is an importance of vegetation?  
 A. fishing    B. swimming  
 C. mining    D. home of wild animals

**C.R.E**

61. During the floods Noah was requested by God to build an \_\_\_\_\_  
 A. temple    B. ark    C. altar    D. church
62. The disciples of Jesus spoke in tongues when they were filled with \_\_\_\_\_  
 A. love    B. happiness    C. holy spirit    D. hatred
63. Lazarus stayed in the tomb for \_\_\_\_\_ days  
 A. two    B. five    C. three    D. four
64. Jesus was baptised in River \_\_\_\_\_  
 A. Nile    B. Euphrates    C. Jordan    D. Red Sea
65. Jesus performed the first miracle at \_\_\_\_\_ during a wedding feast.  
 A. Bethlehem    B. Canaan  
 C. Cana in Galilee    D. Nazareth
66. Who among the following kings of Israel was known for his wisdom \_\_\_\_\_  
 A. David    B. Joseph    C. Solomon    D. Saul
67. There are \_\_\_\_\_ books in the old testament.  
 A. 27    B. 39    C. 66    D. 2
68. When your friend wrongs you, you should \_\_\_\_\_ him/her.  
 A. forgive    B. fight    C. abuse    D. beat
69. When Jesus calmed the storm, he showed His power over?  
 A. weather    B. wind    C. death    D. nature
70. Jesus used five loaves of bread and two fishes to feed \_\_\_\_\_ people.  
 A. 1,000    B. 5,000    C. 3,000    D. 5,00

71. The followers of Jesus were first called Christians in a place called \_\_\_\_\_  
 A. Antioch                      B. Galatia  
 C. Jerusalem                    D. Bethlehem
72. The following are fruits of the holy spirit EXCEPT?  
 A. joy                              B. kindness  
 C. healing                         D. peace
73. Mary is walking to school and picks Sh.500 at the school gate. What should she do?  
 A. spend the money with friends  
 B. buy vaseline jelly  
 C. donate to the Church  
 D. look for the owner
74. Jesus taught that our neighbour is one who?  
 A. stay next to us at home  
 B. needs our help  
 C. sit next to us in class  
 D. those who love us
75. The first book in the Old Testament and the last book in the New Testament are:  
 A. Genesis and Malachi  
 B. Genesis and Revelation  
 C. Exodus and Revelation  
 D. Mathew and Kings
76. Who fasted for 40 days and nights in the wildness before his temptation?  
 A. Moses                          B. Elijah  
 C. Jesus                            D. Peter
77. "I AM" is another name for \_\_\_\_\_  
 A. Jacob                          B. God  
 C. Abraham                       D. Moses
78. Who were the sons of Naomi and Elimelech?  
 A. Esau and Malon  
 B. Jacob and Cleon  
 C. Chilion and Mahlon  
 D. Elimelech and Cleon
79. The curse that was given to snake (satan) by God in the garden of Eden was \_\_\_\_\_  
 A. live in the forest  
 B. crawl and eat dust  
 C. have pain while giving birth  
 D. till the land
80. The meal that was eaten by the Israelites in the night before they left Egypt is known as \_\_\_\_\_  
 A. Lord's Supper                B. balanced meal  
 C. passover meal                D. evening meal
81. Who planned to kill baby Jesus when he was born \_\_\_\_\_  
 A. Goliath                         B. Lazarus  
 C. King David                    D. King Herod
82. God called me four times while I was in the temple who am I \_\_\_\_\_  
 A. Samuel                         B. Moses  
 C. Abraham                        D. Haron
83. Peace in our country can be promoted by \_\_\_\_\_  
 A. hatred                          B. fighting  
 C. selfishness                      D. forgiveness
84. Who among the following chose to lie to the apostles and the holy spirit and then died \_\_\_\_\_  
 A. Solomon and David  
 B. Moses and Aoron  
 C. Levi and Mathew  
 D. Ananias and Sapphira
85. Christians should help the following people EXCEPT  
 A. Orphans  
 B. people living with HIV/AIDS  
 C. street boys and girls  
 D. rich people
86. Who among the following people worked as a tax collector before Jesus called him \_\_\_\_\_  
 A. Levi                              B. James  
 C. John                              D. Andrew
87. Solomon was given wisdom and \_\_\_\_\_ by God.  
 A. wives                          B. wealth  
 C. justice                         D. selfishness
88. Two traditional African sacred places were?  
 A. mosques and churches  
 B. hospitals and mosques  
 C. school and churches  
 D. shrines and caves
89. A good leader should be \_\_\_\_\_  
 A. cruel                              B. honest  
 C. dishonest                        D. selfish
90. Creation story is in the book of \_\_\_\_\_?  
 A. Mathew                         B. Genesis  
 C. Revelation                      D. Exodus

# PERFECT ENERGIZER SERIES

## STD 4 - YEAR 2015 MARKING SCHEME

MATHS		ENGLISH		KISWAHILI		SCIENCE		SOCIAL STUDIES & CRE		
1. C	31. A	1. B	31. C	1. B	31. C	1. C	31. B	1. C	31. A	61. B
2. A	32. C	2. D	32. B	2. C	32. A	2. B	32. B	2. A	32. A	62. C
3. D	33. B	3. B	33. D	3. B	33. D	3. C	33. D	3. B	33. A	63. D
4. B	34. B	4. C	34. A	4. D	34. C	4. B	34. D	4. D	34. B	64. C
5. A	35. D	5. B	35. A	5. A	35. B	5. A	35. A	5. B	35. D	65. C
6. D	36. A	6. D	36. D	6. D	36. B	6. C	36. A	6. C	36. A	66. C
7. B	37. B	7. A	37. C	7. C	37. D	7. D	37. A	7. A	37. B	67. B
8. D	38. B	8. D	38. B	8. B	38. A	8. B	38. D	8. B	38. B	68. A
9. C	39. D	9. C	39. C	9. D	39. B	9. C	39. B	9. C	39. A	69. D
10. A	40. B	10. D	40. D	10. C	40. A	10. C	40. A	10. B	40. A	70. B
11. B	41. C	11. B	41. B	11. B	41. C	11. B	41. C	11. B	41. B	71. A
12. C	42. B	12. D	42. C	12. C	42. D	12. D	42. A	12. B	42. A	72. C
13. B	43. A	13. C	43. A	13. D	43. A	13. C	43. A	13. A	43. B	73. D
14. A	44. C	14. A	44. C	14. C	44. D	14. D	44. B	14. B	44. C	74. B
15. D	45. D	15. C	45. A	15. D	45. C	15. B	45. A	15. A	45. A	75. B
16. A	46. A	16. C	46. D	16. A	46. A	16. C	46. B	16. A	46. A	76. C
17. C	47. A	17. B	47. C	17. C	47. C	17. D	47. A	17. B	47. A	77. B
18. D	48. B	18. B	48. C	18. C	48. C	18. A	48. B	18. C	48. B	78. C
19. C	49. B	19. C	49. A	19. C	49. A	19. C	49. C	19. B	49. D	79. B
20. D	50. B	20. B	50. C	20. A	50. B	20. C	50. B	20. B	50. C	80. C
21. A		21. C		21. C		21. B		21. D	51. D	81. D
22. B		22. A		22. A		22. C		22. C	52. D	82. A
23. C		23. D		23. B		23. C		23. A	53. B	83. D
24. A		24. A		24. C		24. B		24. B	54. A	84. D
25. C		25. C		25. C		25. A		25. C	55. D	85. D
26. B		26. A		26. C		26. A		26. C	56. C	86. A
27. B		27. C		27. B		27. A		27. C	57. C	87. B
28. B		28. B		28. A		28. C		28. A	58. C	88. D
29. A		29. A		29. D		29. B		29. D	59. B	89. B
30. C		30. C		30. B		30. D		30. C	60. D	90. B

### COMPOSITION MARKING SCHEME

#### MARKING CRITERIA

1. The composition will be assessed according to the following guidelines.

- The maximum mark will be 40 and the minimum mark 01

- Does the script show that the candidate can communicate accurately fluently and imaginatively in English?

**Accuracy** (8 marks)

(a) Correct tenses and agreement of verbs (4 marks) (b) Accurate use of vocabulary (4 marks)

(16) (c) Following a sequence (4 marks)

(d) Correct punctuation

(4 marks)

**Fluency** (8 marks)

(a) Words in the correct order (4 marks) (b) Sentence connected and paragraphs (4 marks)

(b) Correct spelling (4 marks)

(d) Ideas developed in logical sequence (4 marks)

(8 marks)

**Imagination** (8 marks)

(a) Unusual but appropriate use of words and phrases (4 marks)

(b) Variety of structure (4 marks)

**NB:** Please, teachers are requested to scrutinize this marking scheme before use. It is worth.