



[4]  
002

# TOP RANK SERIES DARASA LA NNE MWAKA 2015

## KISWAHILI

Muda: Saa 1 dak.40

### Soma kifungu kifuatacho kisha ujaze vihasho 1 - 12 kwa usahihi

Kila mahali kulikuwa 1 giza 2 ijapokuwa mwangaza 3 taa za barabarani pekee ndio uliowaka. Kimya 4 kote katika mji wa Njenga. Ni 5 wachache tu waliokuwa macho wakizungukazunguka mitaani katika shughuli 6 za kulinda 7. Karibu 8 wote walikuwa wamelala. Ni wachache wenye 9 walioamua kutoka 10 maana kulikuwa na 11 kali sana. Hawa wachache walikuwa 12 makwao kutoka sinema au dansini.

- |                 |              |             |                |
|-----------------|--------------|-------------|----------------|
| 1. A. na        | B. mwa       | C. la       | D. cha         |
| 2. A. maridadi  | B. ile       | C. ndogo    | D. kubwa       |
| 3. A. ya        | B. la        | C. cha      | D. wa          |
| 4. A. kilienea  | B. kilitamba | C. kilielea | D. kilionekana |
| 5. A. nyota     | B. polisi    | C. wezi     | D. wanyama     |
| 6. A. zao       | B. yao       | C. zake     | D. chao        |
| 7. A. amani     | B. usiku     | C. wezi     | D. hatari      |
| 8. A. wageni    | B. watu      | C. wezi     | D. motokaa     |
| 9. A. nyumba    | B. uhuru     | C. sura     | D. motokaa     |
| 10. A. nje      | B. ndani     | C. kule     | D. haraka      |
| 11. A. sauti    | B. giza      | C. baridi   | D. jua         |
| 12. A. wakirudi | B. wakicheza | C. wakitoka | D. wakitembea  |

### Kamilisha methali hizi

13. Mtoto akililia wembe \_\_\_\_\_  
A. mpe B. asipewe  
C. usimpe D. hapewi
14. Haraka haraka haina \_\_\_\_\_  
A. nafaka B. maana  
C. baraka D. mwisho
15. Mtu asiyeweza kuona huitwa \_\_\_\_\_  
A. kipofu B. kiziwi  
C. bubu D. kiwete

### Andika kinyume

16. Shangazi \_\_\_\_\_  
A. babu B. wifi  
C. binamu D. mjomba
17. Tajiri \_\_\_\_\_  
A. maskini B. upweke  
C. mpole D. mwerevu
18. Andika tarakimu. Elfu tatu na mia tano.  
A. 3050 B. 30550  
C. 3500 D. 3000500

### Andika jibu sahihi

19. Miezi kumi na miwili ni sawa na \_\_\_\_\_ mmoja.  
A. mwaka B. Disemba C. mwezi D. wiki
20. Daktari \_\_\_\_\_ ofisini.  
A. yuko B. yumo C. hako D. yupo
21. Umbo hili huitwaje?

- A. Hilali  
B. Pia  
C. Mstatili  
D. Mche mraba

22. Je, ni chombo gani hutumika kukunia nazi?  
A. Mchi B. Uteo  
C. Seredani D. Mbuzi
23. Utamwitaje mtoto wa dadako?  
A. Mpwa B. Umbu  
C. Shangazi D. Binamu
24. Wanafunzi wazuri husikiliza walimu \_\_\_\_\_  
A. wao B. wake  
C. huyu D. hizo
25. Mbwa walikuwa \_\_\_\_\_ usiku.  
A. wakicheka B. wakibweka  
C. wakilia D. zinauuu!

### Chagua wingi wa

26. Uta wangu umepotea  
A. Nyuta zangu zimepotea  
B. Nyuta zetu zimepotea  
C. Nyuta yetu imepotea  
D. Nyuta zenu zimepotea
27. Paka alikuwa \_\_\_\_\_ ya meza wakati alipoiba kipande cha nyama.  
A. upanda B. kando  
C. juu D. chini
28. Aliyekando haangukiwi na \_\_\_\_\_  
A. mambo B. timu  
C. mti D. mtama
29. Shikamoo? \_\_\_\_\_  
A. Asante B. Hongera  
C. Pole D. Marahaba
30. Jino \_\_\_\_\_ babu limeng'olewa.  
A. ya B. la  
C. kwa D. wa

Soma hadithi hii kisha ujibu maswali 31- 40:-

Maana ya ukimwi ni ukosefu wa kinga mwilini. Ukimwi ni ugonjwa unaosababishwa na virusi vinavyopunguza uwezo wa mwili wa kujikinga na maradhi. Kwa hivyo mtu akiambukizwa virusi hivi, huwa ni rahisi sana kupatwa na **maradhi** mengine. Ukimwi ni ugonjwa hatari sana kwa sababu hauchagui ni watu gani washikwe nao na hauna tiba. Mtu akishaugua ukimwi hujua tu **atakata kamba**. Ukimwi unaweza kumpata yeyote yule, awe mwanamke, mwanaume, msichana mvulana na hata mtoto wa shule. Ni muhimu kwa kila mtu kuchukua hatua za kujikinga nao.

- |   |  |
|---|--|
| 31. Ukimwi unasababishwa na _____<br>A. ngono<br>B. virusi<br>C. damu<br>D. sindano   | 37. Jinsi gani tunaweza kuepukana na ukimwi?<br>A. Kutofanya mapenzi<br>B. Kucheza pamoja<br>C. Kusaidia wazazi<br>D. Kula pamoja  |
| 32. Maana ya ukimwi ni _____<br>A. ukweli wa kuaminika milele<br>B. ukosefu wa kinga mwilini<br>C. ukosefu wa kiama mmezidi<br>D. ukosefu wa kanga na mwili | 38. Mtoto wa shule anaweza kuwaambia watu mkutanoni kuhusi ukimwi akitumia njia gani?<br>A. Kutoroka shuleni<br>B. Kutumia dawa za kulevya<br>C. Kusababisha vita<br>D. Mashairi |
| 33. Kwa nini ukimwi ni hatari?<br>A. Hauna tiba<br>B. Hauna ukweli<br>C. Mtu hukonda<br>D. Mtu huishi milele  | 39. Kulingana na hadithi hii kila mtu ana _____ la kupambana na ukimwi.<br>A. wazimu<br>B. hongo<br>C. jukumu<br>D. dosari   |
| 34. Ukimwi humshika _____<br>A. mzazi<br>B. mtakatifu<br>C. yeyote<br>D. muungwana  | 40. Kichwa kizuri cha habari hii ni _____<br>A. Kukata kamba<br>B. Ukimwi<br>C. Watu<br>D. Maradhi   |
| 35. Msemo " <b>kukata kamba</b> " una maana gani?<br>A. Kukonda<br>B. Kufa<br>C. Kujinyonga<br>D. Kuuza kamba   |  |
| 36. Neno maradhi ni sawa na _____<br>A. madaktari<br>B. virusi<br>C. mlo<br>D. magonjwa   |  |

Soma hadithi hii kisha ujibu maswali 41-50

Kengele ilipogongwa kwa minajili ya masomo ya alasiri angani kulitandazika mawingu meusi tititi ya mvua. Nao upepo mkali wenye ubaridi wa kufisha ganzi-ulivuma bila huruma wala imani. Katherina alifurahi kuingia ndani ya darasa lake ambamo mlikuwa shwari, tulivu na vuvungu. Aliwaona wendani wake Josephina na Hildah wakiyafunga madirisha.

Baada ya dakika tano hivi mwalimu wao bwana Mwamburi Mwashighadi aliacha kuzungumzia mmomonyoka wa udongo. Matone mazito ya mvua yalikuwa yakipiga kwa nguvu mno paa la zege kiasi cha kwamba Katherina hakuweza angaa kuyasikia maneno aliyokuwa akiambiwa na Hildah.

Umeme ulikuwa ukimulika mara kwa mara kwa miangaza mikali kiasi cha kupofusha macho. Umeme huo uliandamana na ngurumo za kutisha. Radi ziliguruma kwa milipuko ungedhani ni mabomu ya Osama Bin Laden jijini Nairobi na Darisalamu.

- |  |  |
|--|--|
| 41. Kengele iligongwa kwa minajili ya _____<br>A. masomo ya jioni<br>B. masomo ya alasiri<br>C. masomo ya mchana<br>D. masomo ya asubuhi   | 46. Mwalimu wao alikuwa anaitwa _____<br>A. Katherina<br>B. Hilda<br>C. Mwamburi<br>D. Josephina     |
| 42. Upepo ulivuma bila huruma wala _____<br>A. amani<br>B. amini<br>C. amana<br>D. imani   | 47. Umeme huo uliandamana na ngurumo za _____<br>A. radi<br>B. mvua<br>C. sauti<br>D. mwalimu        |
| 43. Mawingu yalikuwa _____<br>A. meusi<br>B. meupe<br>C. samawati<br>D. mekundu  | 48. Bwana Mwamburi alikuwa akizungumzia _____<br>A. mvua<br>B. matone<br>C. dirisha<br>D. mmomonyoko |
| 44. Wendani waliotajwa ni _____<br>A. Hildah na Josephina<br>B. Josephina na Katherina<br>C. Hildah na Katherina<br>D. Katherina peke yake | 49. Tunasema mweusi tititi, na vilevile mweupe _____<br>A. tititi<br>B. pepepe<br>C. ndi<br>D. ti    |
| 45. Wendani walikuwa wakifanya nini?<br>A. Wakifanya mazoezi<br>B. Wakifunga madirisha<br>C. Wakipunga upepo<br>D. Wakifurahi              | 50. Mlipuko ungedhani ni _____<br>A. mvua<br>B. radi<br>C. umeme<br>D. mabomu                        |



**[ 4 ]**  
**002**

**TOP RANK SERIES**  
**STANDARD FOUR**  
**MARKING SCHEME**  
**YEAR 2015**

MATHEMATICS		ENGLISH		KISWAHILI		SCIENCE		SOCIAL / CRE		
1. C	26. B	1. A	26. A	1. A	26. B	1. A	26. C	1. B	31. A	61. D
2. B	27. D	2. B	27. A	2. D	27. C	2. D	27. A	2. C	32. B	62. B
3. C	28. C	3. C	28. C	3. D	28. C	3. B	28. B	3. D	33. A	63. C
4. C	29. A	4. D	29. C	4. A	29. D	4. D	29. B	4. D	34. D	64. A
5. D	30. B	5. A	30. D	5. B	30. B	5. C	30. B	5. A	35. C	65. B
6. A	31. C	6. B	31. D	6. A	31. B	6. B	31. D	6. A	36. D	66. A
7. A	32. C	7. D	32. A	7. A	32. B	7. C	32. B	7. C	37. A	67. C
8. A	33. B	8. B	33. B	8. B	33. A	8. C	33. B	8. A	38. C	68. A
9. C	34. B	9. C	34. A	9. D	34. C	9. B	34. D	9. C	39. D	69. B
10. D	35. A	10. C	35. A	10. A	35. B	10. A	35. D	10. C	40. C	70. C
11. A	36. A	11. A	36. C	11. C	36. D	11. B	36. C	11. B	41. D	71. A
12. B	37. B	12. C	37. C	12. A	37. A	12. C	37. A	12. B	42. B	72. B
13. A	38. D	13. A	38. A	13. A	38. D	13. B	38. C	13. A	43. D	73. A
14. D	39. A	14. D	39. B	14. C	39. C	14. B	39. B	14. B	44. C	74. D
15. C	40. C	15. B	40. C	15. A	40. B	15. A	40. C	15. C	45. B	75. B
16. B	41. D	16. A	41. C	16. D	41. B	16. B	41. D	16. A	46. D	76. D
17. C	42. C	17. C	42. B	17. A	42. D	17. D	42. C	17. B	47. C	77. B
18. B	43. C	18. A	43. A	18. C	43. A	18. B	43. A	18. D	48. A	78. D
19. C	44. B	19. B	44. D	19. A	44. A	19. B	44. C	19. D	49. B	79. A
20. B	45. A	20. B	45. C	20. B	45. A	20. A	45. D	20. C	50. B	80. B
21. D	46. A	21. A	46. C	21. C	46. C	21. A	46. B	21. C	51. C	81. D
22. C	47. A	22. C	47. B	22. D	47. B	22. D	47. C	22. D	52. C	82. C
23. A	48. B	23. C	48. C	23. A	48. D	23. C	48. C	23. B	53. A	83. D
24. D	49. A	24. A	49. C	24. A	49. B	24. B	49. C	24. C	54. D	84. C
25. C	50. C	25. A	50. A	25. B	50. D	25. B	50. A	25. B	55. B	85. C
								26. B	56. B	86. D
								27. C	57. D	87. A
								28. A	58. C	88. D
								29. A	59. D	89. B
								30. B	60. A	90. C

**COMPOSITION MARKING SCHEME**  
**MARKING CRITERION**

1. The composition will be assessed according to the following guidelines.  
 - The maximum mark will be 40 and the minimum mark 01  
 - Does the script show that the candidate can communicate accurately, fluently and imaginatively in English?

**Accuracy (16 Marks)**

- a) Correct tenses and agreement of verbs (4 marks)      c) Accurate use of vocabulary (4 marks)  
 b) Following a sequence (4 marks)                                      d) Correct punctuation (4 marks)

**Fluency (16 marks)**

- a) Words in the correct order (4 marks)                                      c) Sentence connecting and paragraph (4 marks)  
 b) Correct spelling (4 marks)    d) Ideas developed in logical sequence (4 marks)

**Imagination (8 marks)**

- a) Unusual but appropriate use of words and phrases (4 marks)  
 b) Variety of structure (4 marks)

**N.B: Please, teachers are requested to scrutinize this marking scheme before use, it is worth.**








[4]  
002

# TOP RANK SERIES STANDARD FOUR YEAR 2015

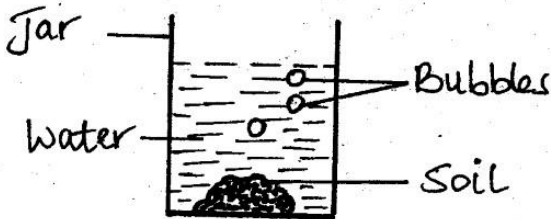
## SCIENCE

Time: 1 Hr 40 Minutes

- The sun sets in the \_\_\_\_\_.  
A. West B. North C. East D. South
- One of the following **cannot** give us milk. Which one is it?  
A. Goat B. Cow C. Camel D. Ostrich
- Which type of soil has the **largest** soil particles?  
A. Clay B. Sand  
C. Loam D. Mixture of clay and sand
- Which of the following is **not** a living thing?



- The experiment below shows that soil has \_\_\_\_\_



- A. water B. humus  
C. air D. mineral salts
- Plants are harvested during the \_\_\_\_\_ season.  
A. rainy B. dry C. wet D. cold
  - Clouds that usually bring heavy rain are called \_\_\_\_\_.  
A. cumulus B. dark grey  
C. nimbus D. black
  - The diagram below shows that the weather is:-



- A. windy  
B. rainy  
C. cloudy  
D. sunny

- Shedding teeth is \_\_\_\_\_.  
A. making teeth stronger  
B. loosing milk teeth  
C. loosing permanent teeth  
D. putting a shed on the teeth
- The mouth of a bird is called \_\_\_\_\_.  
A. beak B. stalk C. horn D. beaker
- We get wool from \_\_\_\_\_.  
A. poultry B. sheep C. cow D. turkey

- \_\_\_\_\_ is **not** a cereal crop.  
A. millet B. sorghum  
C. coconut D. maize
- The total number of incisors in the mouth is \_\_\_\_\_.  
A. 2 B. 8 C. 6 D. 4
- The phase of the moon below is called \_\_\_\_\_



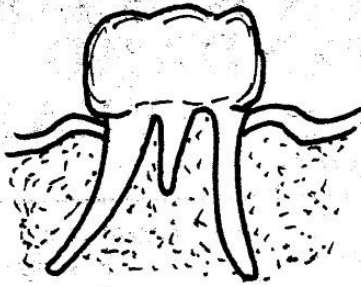
- A. crescent  
B. gibbous  
C. half  
D. new moon

- When we observe the sky at night, we are **not** able to see the \_\_\_\_\_.  
A. sun B. moon C. sky D. stars
- Weeds are \_\_\_\_\_ crops.  
A. useful B. harmful  
C. advantageous D. beneficial
- A young sheep is called \_\_\_\_\_.  
A. kid B. calf C. puppy D. lamb
- The best soil to model this cup is \_\_\_\_\_



- A. sand  
B. clay  
C. loam  
D. a mixture of loam and sand
- The best soil for planting crops is \_\_\_\_\_.  
A. clay B. loam C. sand D. all of them
  - One of the following animals can fly. Which **one** is it?  
A. Bat B. Ostrich  
C. Kiwi D. Tortoise
  - The rough layer formed by food remains on the teeth is called \_\_\_\_\_.  
A. plaque B. gum C. cavities D. carries
  - Which one of these is **not** a characteristic of living things?  
A. Grow B. Move  
C. Remove waste D. Swimming
  - The following are uses of water in the home **except?**  
A. Cooking B. Washing  
C. Irrigation D. Bathing
  - A barrier built across a river is called \_\_\_\_\_.  
A. ocean B. dam C. borehole D. well
  - All the following are heavenly bodies **except?**  
A. Stars B. Trees  
C. Sun D. Moon


Use the diagram below to answer questions 26 -28



26. The part marked C is called \_\_\_\_\_  
 A. gum B. ridges C. crown D. jaw
27. The part that protect the jaw bone is marked \_\_\_\_\_  
 A. K B. C C. B D. A
28. The part that help to chew food is marked \_\_\_\_\_  
 A. C B. B C. G D. K
29. Which one of the following is a root vegetable?  
 A. Potatoes B. Radishes  
 C. Maize D. Sweet potatoes
30. During which hour of the day would the shadow be shortest?  
 A. Morning B. Noon  
 C. Night D. Evening
31. How does the animal shown below move?



- A. Walking B. Swimming  
 C. Hopping D. Slithering
32. Which fluid **cannot** transmit HIV/AIDS?  
 A. Blood B. Urine C. Semen D. Saliva
33. Sound moves in \_\_\_\_\_ directions.  
 A. two B. all C. opposite D. some
34. Animals that feed only on the flesh of other animals are referred to as \_\_\_\_\_  
 A. omnivorous B. insectivorous  
 C. herbivorous D. carnivorous
35. The **main** difference between an animal and a plant is that \_\_\_\_\_  
 A. plants move from place to place  
 B. animals make their own food  
 C. animals have no sense organs  
 D. plants make their own food
36. The hotness or coldness of a place is known as:-  
 A. rainfall B. sunshine  
 C. temperature D. clouds
37. Which one of the following is **not** a way of water storage?




38. The body of the fish is covered by \_\_\_\_\_  
 A. skin B. feather C. scales D. wings
39. The people who study the weather pattern are called:-  
 A. predictors B. meteorologists  
 C. scientists D. prophets
40. This instrument below is used for measuring \_\_\_\_\_




- A. wind  
 B. temperature  
 C. rainfall  
 D. clouds

41. Too much rainfall **mainly** causes \_\_\_\_\_  
 A. drought B. storm C. harvest D. floods
42. Giving birth to young ones in animals is called:-  
 A. growth B. move  
 C. reproduction D. increasing
43. A housefly has \_\_\_\_\_ wings.  
 A. 4 B. 2 C. 3 D. 6
44. Which one of the following is **not** a fruit?  
 A. Coconut B. Mango  
 C. Pyrethrum D. Pineapple
45. Which plant has a leaf like the one shown below?



- A. Kales  
 B. Cabbages  
 C. Beans  
 D. Maize

46. The farm animal used for transporting goods is the:-  
 A. sheep B. donkey C. cow D. goat
47. The method of cleaning water used below is called?



- A. Distillation B. Decantation  
 C. Filtering D. Fetching
48. Which one of the following foods makes our teeth to be strong?  
 A. Chewing gum B. Biscuits  
 C. Carrots D. Sweets
49. Maize, rice and wheat are examples of a group of crops called:-  
 A. vegetables B. legumes  
 C. cereals D. tubers
50. Living things are both \_\_\_\_\_ and \_\_\_\_\_  
 A. plants and animals B. animals and wind  
 C. plants and clay D. animals and stones



[4]  
002

# TOP RANK SERIES STANDARD FOUR YEAR 2015

## ENGLISH

Time: 1 Hr 40 Minutes

Fill in the gaps with the correct word from the choices given below.

Long ago 1 was a chameleon and hare. They 2 friends and 3 in a forest. Mr. Lion was a king 4 the forest and he was staying 5 away. Only when there was a quarrel the animals would go to 6 him. One day he arranged a party at 7 house to 8 his daughters birthday. He invited 9 the animals and 10 whoever came first would get a 11. 12 hearing this the chameleon said 13 the hare I will be 14 to 15 there.

- |                 |               |                |               |
|-----------------|---------------|----------------|---------------|
| 1. A. there     | B. their      | C. the         | D. them       |
| 2. A. was       | B. were       | C. is          | D. by         |
| 3. A. living    | B. live       | C. lived       | D. liver      |
| 4. A. by        | B. with       | C. to          | D. of         |
| 5. A. far       | B. near       | C. by          | D. of         |
| 6. A. saw       | B. see        | C. show        | D. seen       |
| 7. A. he        | B. him        | C. her         | D. his        |
| 8. A. celebrate | B. celebrated | C. celebrating | D. celebrator |
| 9. A. one       | B. none       | C. but         | D. all        |
| 10. A. say      | B. saying     | C. said        | D. sayer      |
| 11. A. present  | B. precent    | C. plecent     | D. plesent    |
| 12. A. by       | B. with       | C. on          | D. for        |
| 13. A. to       | B. by         | C. on          | D. for        |
| 14. A. fast     | B. fist       | C. farst       | D. first      |
| 15. A. arrived  | B. arrive     | C. arrival     | D. arriving   |

For numbers 16 - 22 choose the correct answer:-

16. An elephant is \_\_\_\_\_ than a lion.  
A. bigger                      B. big  
C. biggest                      D. a big
17. Mr. Tembo bought six \_\_\_\_\_ from the market.  
A. sheeps                      B. sheeping  
C. sheep                      D. sheeped
18. My mother bought a \_\_\_\_\_ of soap yesterday.  
A. bar                      B. pair  
C. strip                      D. dozen
19. A young frog is called a \_\_\_\_\_  
A. frog                      B. tadpole  
C. frogling                      D. lizard
20. When the car broke down my dad took it to the \_\_\_\_\_  
A. hospital                      B. garage  
C. carpenter                      D. doctor
21. A place where wild animals are kept is a \_\_\_\_\_  
A. zoo                      B. shed  
C. hospital                      D. forest
22. A person who treats our teeth is known as \_\_\_\_\_  
A. nurse                      B. doctor  
C. dentist                      D. optician

Write the opposite of the underlined word

23. I bought a small doll yesterday.  
A. big                      B. today  
C. sold                      D. smaller

24. He came in the evening.  
A. day                      B. yesterday  
C. morning                      D. quickly
25. The tank is full of water.  
A. empty                      B. dry  
C. water                      D. half

Write the plural of the underlined word

26. The ox is sleeping.  
A. oxen                      B. cows  
C. bulls                      D. oxes
27. The pencil has broken.  
A. pencils                      B. pen  
C. book                      D. penciled
28. The woman is going to the market now.  
A. man                      B. womans  
C. women                      D. men

Complete the following questions

29. This is \_\_\_\_\_ elephant.  
A. be                      B. an  
C. a                      D. with
30. The boy is \_\_\_\_\_ now.  
A. sleep                      B. slept  
C. slept                      D. sleeping



**Read the passage below and answer questions 31- 40**

Once upon a time there was a crow called Pendo. He had not eaten for one week and he flew to town and arrived at 3 o'clock. He sat on a branch of a tree. While he was sitting on the branch he saw a man carrying cheese in his baskets. As the man came near he flew and picked the cheese. Keeping the piece in his mouth he flew back to the forest and ate the cheese happily.

- |  |  |
|--|--|
| <p>31. What was the name of the crow?<br/>A. Cheese                      B. Fox<br/>C. Pendo                        D. Not told</p> <p>32. Where was the crow living?<br/>A. In the forest<br/>B. In town<br/>C. In the basket<br/>D. In the cheese</p> <p>33. For how many days had the crow <u>not</u> eaten?<br/>A. Three                        B. Seven<br/>C. Two                          D. Four</p> <p>34. Where did the crow go to get food?<br/>A. Town                         B. Forest<br/>C. River                         D. Home</p> <p>35. At what time did the crow reach town? _____<br/>o'clock<br/>A. three                         B. twelve<br/>C. two                            D. seven</p> | <p>36. What was the man carrying?<br/>A. Basket                        B. Crow<br/>C. A jembe                      D. A gun</p> <p>37. What was in the basket?<br/>A. Eggs                         B. Fox<br/>C. Cheese                        D. Tomatoes</p> <p>38. Who picked the cheese from the man?<br/>A. The crow<br/>B. The man<br/>C. The fox<br/>D. The hyena</p> <p>39. The opposite of the word <u>near</u> is _____<br/>A. cheese                        B. far<br/>C. wide                          D. deep</p> <p>40. The <u>best</u> title for the passage is _____<br/>A. a big cheese<br/>B. a basket<br/>C. a hungry crow<br/>D. a man of cheese</p> |
|--|--|

**Read the story and answer questions 41-50**

Hare and hyena were good friends and were living in a den. One day they went to the farmer and asked him to give them some food so that they could work for him. The farmer agreed and gave them a pot of maize. The animals made fire and cooked the maize as they worked. When the food was ready the hare went to fetch water in the river and hyena ate all the food. When the hare came back he was very sad and since that time they became enemies. They went to stay separate places. Hyena was very greedy.

- |  |   |
|--|---|
| <p>41. Hyena and _____ were good friends.<br/>A. farmer<br/>B. elephant<br/>C. hare<br/>D. rabbit</p> <p>42. Where were the two friends living? In _____<br/>A. a home<br/>B. a town<br/>C. a den<br/>D. a forest</p> <p>43. What did the hare and hyena ask the farmer to give them?<br/>A. Honey<br/>B. Food<br/>C. Milk<br/>D. Nothing</p> <p>44. What did they promise the farmer?<br/>A. To beat him<br/>B. To cook for him<br/>C. To ran away<br/>D. To work for him</p> | <p>45. What type of food were the animals given?<br/>A. Maize                         B. Beans<br/>C. Honey                         D. Groundnuts</p> <p>46. The animals cooked food as they _____<br/>A. sang                          B. danced<br/>C. worked                        D. cried</p> <p>47. Who went to fetch water?<br/>A. Farmer                        B. Hare<br/>C. All of them                    D. Hyena</p> <p>48. Who ate all the food?<br/>A. Farmer                        B. Hare<br/>C. All of them                    D. Hyena</p> <p>49. The opposite of the word <u>sad</u> is _____<br/>A. crying                         B. dancing<br/>C. happy                         D. laughing</p> <p>50. The <u>best</u> title for the passage is _____<br/>A. the greedy hyena<br/>B. a pot of maize<br/>C. hare fetches water<br/>D. The three animals</p> |
|--|---|



[4]  
002

# TOP RANK SERIES STANDARD FOUR YEAR 2015

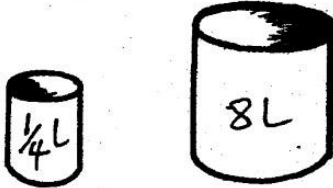
## MATHEMATICS

Time: 2 Hours

- Write sixteen thousand four hundred and four in figures?  
A. 16044                      B. 1600404  
C. 16404                      D. 164404
- What is the place value of digit 6 in 6450?  
A. Tens                      B. Thousands  
C. Hundreds                      D. Ones
- $0.4 + 0.3 =$   
A. 1.0                      B. 1.6                      C. 0.7                      D. 7.0
- What fraction is unshaded?

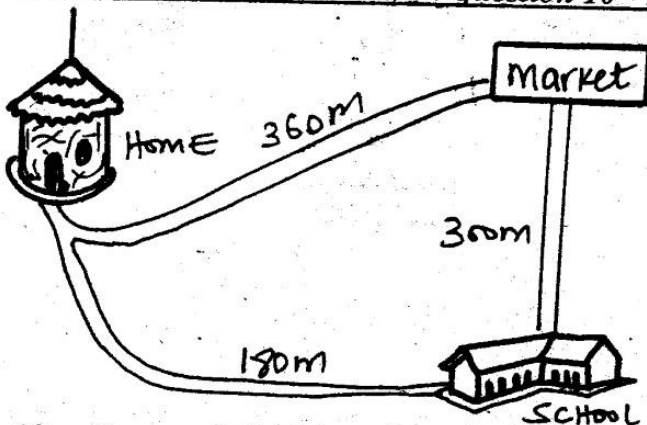


- A.  $\frac{4}{8}$                       B.  $\frac{5}{8}$                       C.  $\frac{3}{8}$                       D.  $\frac{6}{8}$
- In Wairuri school there are 498 boys and 417 girls. How many pupils are there altogether?  
A. 81                      B. 698                      C. 896                      D. 915
  - What is the total value of digit 7 in 607?  
A. 7                      B. 70                      C. 76                      D. 67
  - How many container A can fill container B?




- A. 32                      B. 4                      C. 16                      D. 8
- $\frac{1}{8} + \frac{3}{8} =$  \_\_\_\_\_  
A.  $\frac{4}{8}$                       B.  $\frac{4}{16}$                       C.  $\frac{3}{8}$                       D.  $\frac{7}{8}$
  - Which of these numbers is Even?  
A. 13                      B. 9                      C. 18                      D. 41

Use the figure below to answer question 10 - 11.



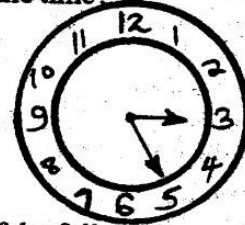
- Ocampo walked from his home to school and back home. What distance did he cover?  
A. 480m                      B. 960m  
C. 780m                      D. 360m
- Ocampo walked from his home to school through the market. What distance did he cover?  
A. 660m                      B. 480m  
C. 780m                      D. 360m

- In the fraction  $\frac{4}{9}$ , which number is the denominator?  
A.  $\frac{4}{9}$                       B. 9                      C. 4                      D. both
- What fraction is shaded?



- A.  $\frac{5}{8}$                       B.  $\frac{6}{8}$   
C.  $\frac{4}{8}$                       D.  $\frac{3}{8}$

- Find the sum of all the even numbers between 10 and 20?  
A. 75                      B. 80                      C. 90                      D. 60
- What is the time?



- A. 1.25  
B. 2.25  
C. 3.25  
D. 5.10

- Which of the following numbers is divisible by 2 and 5?  
A. 36                      B. 20                      C. 15                      D. 17
- Solve.
 

Wks	Days
2	5
+ 4	4

- A. 6wks 9days                      B. 6wks 2days  
C. 7wks 2days                      D. 6wks 12days
- What is  $60 + 0.07 + 0.2 =$ ?  
A. 27.60                      B. 60.27  
C. 60.2701                      D. 67.20
  - Convert 60 days into weeks and days.  
A. 4wks 2days                      B. 60wks 0days  
C. 8wks 4days                      D. 20wks 4days
  - What is an odd number + even number?  
A. even                      B. odd  
C. mixture                      D. prime
  - Write  $\frac{31}{100}$  as a decimal.  
A. 0.031                      B. 3.1  
C. 3.01                      D. 0.31
  - What is the next number in the sequence?  
14, 16, 18, 20, 22, \_\_\_\_\_  
A. 30                      B. 28                      C. 24                      D. 26
  - Which is smaller?  $\frac{1}{14}$  or  $\frac{1}{16}$   
A.  $\frac{1}{16}$                       B.  $\frac{1}{14}$   
C. equal                      D. none
  - What is  $\frac{1}{12}$  of 60?  
A. 60                      B. 12                      C. 72                      D. 5
  - Willy had 4 cartons of milk. Each carton had 15 packets. How many packets did he buy?  
A. 50                      B. 80                      C. 60                      D. 40



26. How many half-litres will fill the cup shown below?



- A. 20
- B. 40
- C. 10
- D. 80

27. Round off 457 to the nearest ten.

- A. 450
- B. 456
- C. 470
- D. 460

28. Add  $\frac{3}{8} + \frac{2}{8} + \frac{1}{8} =$  \_\_\_\_\_

- A.  $\frac{5}{24}$
- B.  $\frac{3}{24}$
- C.  $\frac{6}{8}$
- D.  $\frac{3}{4}$

29. Add 43m 45cm to 11m 70cm

- A. 55m 15cm
- B. 54m 15cm
- C. 35m 45cm
- D. 45m 45cm

30.  $9 \overline{)382}$

- A. 31 rem 8
- B. 42 rem 4
- C. 41 rem 4
- D. 31 rem 9

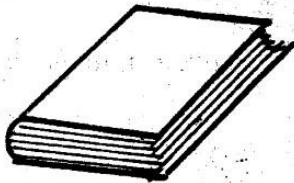
31.  $\frac{6}{7} - \frac{5}{7} =$  \_\_\_\_\_

- A.  $\frac{11}{14}$
- B.  $\frac{11}{7}$
- C.  $\frac{1}{7}$
- D.  $\frac{1}{14}$

32. Work out:  $467 + 426 =$  \_\_\_\_\_

- A. 983
- B. 041
- C. 893
- D. 8913

33. James bought the following items:-



Ksh. 15



Ksh. 5.

How much did he pay for the pen and book?

- A. Shs.35
- B. Shs.5
- C. Shs.75
- D. Shs.20

34. Weeks                      days

3                                      3  
x                                      6

- A. 18wks 18days
- B. 22wks 4days
- C. 23wks 3days
- D. 22wks 18days

35. Which one of the following fractions is the smallest?

- A.  $\frac{1}{6}$
- B.  $\frac{1}{3}$
- C.  $\frac{1}{5}$
- D.  $\frac{1}{5}$

36. How many  $\frac{1}{4}$ kgs are there in 8kgs?

- A. 32
- B. 16
- C. 2
- D. 64

37. What is the missing number?

\_\_\_\_\_ x 8 = 72

- A. 8
- B. 9
- C. 12
- D. 6

38. What is  $\frac{5}{12}$  in words:-

- A. five twelves
- B. one twelfths
- C. twelve fifths
- D. five twelfths

39. In a school there are 157 pupils in class one and 123 pupils in class two. What is the total number of pupils in the two classes?

- A. 280
- B. 270
- C. 34
- D. 370

40. Fill the blank space.

\_\_\_\_\_ x 5 = 60

- A. 55
- B. 10
- C. 12
- D. 300

41. Divide 108 by 3.

- A. 37
- B. 38
- C. 18
- D. 36

42. Mr.Nyakach had 94 hens. If 45 of them died, how many were left?

- A. 59
- B. 51
- C. 49
- D. 69

43. Add  $34567 + 29453 + 235 =$  \_\_\_\_\_

- A. 61515
- B. 53145
- C. 64255
- D. 63245

44. There are 693 fruits in a basket of which 257 are mangoes. How many are oranges?

- A. 415
- B. 436
- C. 257
- D. 500

45. How many hours are there in ten days?

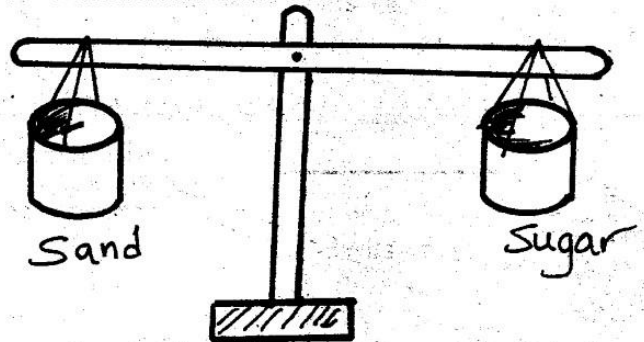
- A. 240
- B. 60
- C. 120
- D. 24

46. Add:

Shs.	Cts.
40	60
+ 2	70
<hr/>	

- A. Shs.43 30cts.
- B. Shs.43 130cts.
- C. Shs.62 30cts.
- D. Shs.42 130cts.

47. Which is heavier?



- A. Sand
- B. Sugar
- C. Same
- D. None

48. Add  $1246 + 5237 + 2245 =$  \_\_\_\_\_

- A. 2877
- B. 8728
- C. 7872
- D. 8277

49. There are 15 packets of salt in a carton. How many packets will be there in 6 cartons?

- A. 90
- B. 7
- C. 21
- D. 80

50. Change 480 minutes into hours?

- A. 10hrs
- B. 9hrs
- C. 8hrs
- D. 7hrs



[4]  
002


# TOP RANK SERIES STANDARD FOUR YEAR 2015

SOCIAL STUDIES & C.R.E

Time : 2 Hrs 15 Minutes

## GEMA AREA

## KEY






	Forest
	Settlements
	Cattle dip
	River & Bridge
	Maize
	Factory
	Tarmac Road
	Pyrethrum
	Grass

Study the map of GEMA AREA above and answer questions 1 to 7:-

- The economic activity carried out in Gema Area is:-  
A. fishing                      B. farming  
C. trading                      D. lumbering
- Which of the following food crops is grown in Gema Area?  
A. Pyrethrum                  B. Grass  
C. maize                        D. Beans
- In which direction is Fola dam from the forest?  
A. South West                B. North West  
C. South                        D. South East
- The main means of transport in the area is:-  
A. water                        B. railway  
C. air                             D. road
- The people of Gema Area are \_\_\_\_\_  
A. mixed farmers              B. pastoralists  
C. hunters                      D. miners
- River Gema pours its water into a \_\_\_\_\_  
A. swamp                        B. forest  
C. dam                            D. road
- The raw material taken to the factory is used to make:-  
A. beverage                    B. fertilizer  
C. insecticide                 D. perfumes

- Areas where people live close together are said to be:-  
A. densely populated      B. sparsely populated  
C. well populated          D. poorly populated
- Which one of the following is a traditional form of communication?  
A. Newspaper                B. Radio  
C. Drum                        D. Television
- A single parent family consists of \_\_\_\_\_  
A. father, mother, children  
B. father, mother, children, relatives  
C. one parent and children  
D. father, mother
- People who helped mothers to give birth in the villages were known as?  
A. rainmakers                B. midwives  
C. prophets                    D. witchdoctor
- The first African woman to set up the Green Belt was:-  
A. Wangu wa Makeri      B. Wangari Maathai  
C. Lucy Kibaki                D. Charity Ngilu
- From milk we get milk products like \_\_\_\_\_  
A. cheese                        B. meat  
C. glue                            D. skins
- In a society where there is law and order people:-  
A. hurt each other  
B. are friendly to each other  
C. do not agree with each other  
D. carry out their activities with fear

15. Which of the below means of communication would reach most people in Kenya?



16. Meat of a sheep is called:-

- A. mutton                      B. beef  
C. pork                          D. bacon

17. A \_\_\_\_\_ is a sad ceremony.

- A. birthday                      B. funeral  
C. wedding                      D. celebration

18. The colour of the flag which means peace is \_\_\_\_\_

- A. black                          B. red  
C. green                          D. white

19. The changing of the youth from childhood to adulthood is called \_\_\_\_\_

- A. death                          B. religion  
C. education                      D. initiation


20. \_\_\_\_\_ is watering of crops by artificial means.

- A. Canal                          B. Sprinkling  
C. Irrigation                      D. Farming

21. The compass is used for telling \_\_\_\_\_

- A. time                            B. distance  
C. direction                      D. latitude

*Use the diagram below to answer questions 22 - 24*



22. The type of rainfall shown above is \_\_\_\_\_

- A. convectional rainfall      B. cyclonic  
C. clouds                          D. relief rainfall

23. Side B is called \_\_\_\_\_

- A. leeward                        B. windward  
C. rainshadow                    D. nimbus

24. Side C is called \_\_\_\_\_

- A. clouds                          B. rainy  
C. rainshadow                    D. windward

25. A \_\_\_\_\_ is a wall built across a river to hold water back.

- A. bay                              B. dam  
C. island                          D. plateau

26. Planting trees in areas where there are none is called:-

- A. clearing                        B. afforestation  
C. deforestation                D. forestry

27. People walking along the road are called \_\_\_\_\_

- A. policemen                    B. walkers  
C. pedestrians                 D. pupils

28. Farmers plant their crops during \_\_\_\_\_ seasons.

- A. rainy                            B. dry  
C. flood                            D. cool

29. The four main compass points are known as \_\_\_\_\_

- A. cardinal points              B. latitudes  
C. end points                    D. meridians

30. The sign below drawn on the electric post means



- A. power  
B. danger  
C. good  
D. dead person

31. The fastest means of transport is by \_\_\_\_\_

- A. air    B. road                      C. sea                              D. bus

32. The people who live near the lake are likely to be:-

- A. farmers                        B. fishermen  
C. teachers                        D. hunters

33. Storage water tanks should be kept \_\_\_\_\_

- A. closed and clean            B. dirty and closed  
C. open and dirty                D. open and clean

34. Which crop is grown for its flowers?

- A. Vegetables                    B. Sisal  
C. Cotton                          D. Pyrethrum

35. Which of the following activities takes place during the wet season?

- A. Clearing bushes              B. Irrigation  
C. Planting                        D. Ploughing

36. Which one is a basic need?

- A. Car                                B. Education  
C. Radio                            D. Shelter

37. We should conserve our resources because \_\_\_\_\_

- A. we need them in future  
B. we are forced by the government  
C. we have enough time to do it  
D. we fear our parents

38. Grasslands are also called \_\_\_\_\_

- A. bushes                          B. papyrus reeds  
C. savannah                      D. thickets

39. Three of the following are allowed to treat people today except:-






- A. doctor                          B. dentist  
C. herbalist                        D. witchdoctor

40. Which of the following is an element of weather?

- A. Rain gauge                      B. Windvane  
C. Temperature                    D. Windsock




Use this diagram to answer question 41

Mon	Tue	Wed	Thur	Fri
				

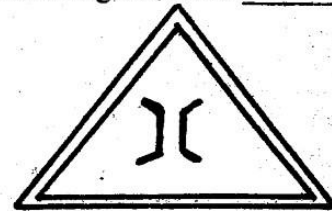
41. Which two days of the week was the weather cloudy?  
 A. Thursday, Friday  
 B. Monday, Friday  
 C. Wednesday, Tuesday  
 D. Monday, Thursday
42. One of the following is a way of caring for vegetation. Which one?  
 A. Cutting down of trees  
 B. Planting of trees  
 C. Burning up vegetation  
 D. Destroying forests
43. Law and order is important because \_\_\_\_\_  
 A. it helps people to marry from their clan  
 B. it helps people to know food they eat  
 C. it helps people to know the way they dress  
 D. it helps people to leave in peace
44. What is the compass point between North and East?  
 A. South East                      B. South West  
 C. North East                      D. North West
45. Which of the following physical features was used as a hiding place from enemies attack?  
 A. Lakes                              B. Valleys  
 C. Dams                                D. Plains

Use this diagram to answer question 46



46. Which element of weather is measured by the instrument shown above?  
 A. Rainfall                              B. Temperature  
 C. Sunshine                              D. Wind
47. Which of the following is a food crop?  
 A. Cotton                                B. Tea  
 C. Arrow roots                        D. Coffee
48. Which of the following can be got from trees?  
 A. Books                                B. Horns  
 C. Pots                                  D. Panga
49. Why is it important to have moral values in the society?  
 A. They help people to be irresponsible  
 B. They help people to behave well  
 C. Help people to know their enemies  
 D. help people to marry their relatives

50. The animals we keep give us the following **except**:-  
 A. meat                                      B. maize  
 C. milk                                        D. hides
51. Things that help us to get wealth are called \_\_\_\_\_  
 A. goods                                      B. money  
 C. resources                                D. land
52. Why is it important to work together in the community?  
 A. Makes people feel hated  
 B. Helps in supporting the rich only  
 C. Makes work easier  
 D. Helps to support the poor only
53. The Kenya National Anthem has \_\_\_\_\_ verses.  
 A. 3    B. 4  
 C. 2    D. 5
54. When the weather is \_\_\_\_\_ we wear heavy clothes.  
 A. warm                                        B. windy  
 C. calm                                        D. cold
55. This road sign shows a \_\_\_\_\_



- A. narrow road                      B. bridge  
 C. town                                      D. building
56. Which of the following crops is a subsistence crop?  
 A. Pineapple                                B. Maize  
 C. Cotton                                      D. Coffee
57. Our ancestors had holy places of offerings and sacrifices called \_\_\_\_\_  
 A. churches                                B. cemeteries  
 C. tombs                                      D. shrines
58. Which one of the following is **not** a natural feature?  
 A. Plain                                        B. Plateau  
 C. Dam                                        D. Escarpment
59. Maasai live in houses called \_\_\_\_\_  
 A. Igloo                                        B. hut  
 C. state house                              D. manyatta
60. When \_\_\_\_\_ light appears in traffic we should prepare to go.  
 A. amber                                      B. red  
 C. orange                                      D. green

**SECTION II - C.R.E**

61. Waiting without complaining is \_\_\_\_\_  
 A. forgiveness                              B. denial  
 C. humility                                    D. patience
62. Jesus was crucified with two \_\_\_\_\_  
 A. disciples                                B. thieves  
 C. soldiers                                 D. women
63. The first Christian martyr was \_\_\_\_\_  
 A. Peter                                        B. Judas  
 C. Stephen                                 D. James

64. \_\_\_\_\_ built the ark.  
A. Noah B. Joseph  
C. Abraham D. Solomon
65. We should \_\_\_\_\_ one another.  
A. abuse B. love  
C. dishonour D. hate
66. \_\_\_\_\_ denied Jesus.  
A. Simon Peter B. Judas  
C. Pilate D. Andrew
67. People who brought religion in our country were called:-  
A. tourists B. explorers  
C. missionaries D. christians
68. When sinners die they go to \_\_\_\_\_.  
A. hell B. heaven  
C. babylon D. Jerusalem
69. \_\_\_\_\_ is the light of the world.  
A. Holy spirit B. Jesus  
C. Adam D. Mary
70. \_\_\_\_\_ prophesied the birth of Jesus.  
A. Elijah B. Elisha  
C. Isaiah D. Jeremiah
71. Jesus fed \_\_\_\_\_ people with 2 fish and 5 loaves of bread.  
A. 5000 B. 4000  
C. 3000 D. 2000
72. The disciples of Jesus received the Holy Spirit on the day of \_\_\_\_\_.  
A. good Friday B. pentecost  
C. easter Monday D. resurrection
73. Moses received the ten commandments on Mt.  
A. Sinai B. Red sea  
C. Moriah D. Kilimanjaro
74. A good leader must be \_\_\_\_\_.  
A. lazy B. unkind  
C. unfaithful D. respectful
75. Abraham had a son named \_\_\_\_\_.  
A. Jacob B. Isaac  
C. Joseph D. Samuel
76. When christians are faced with problems they should:-  
A. fight others  
B. laugh at themselves  
C. run away  
D. pray to God
77. When Noah was six hundred years old, God sent floods. It rained for \_\_\_\_\_ days and nights.  
A. twenty B. forty  
C. thirty D. fifty
78. Who baptised Jesus?  
A. Simon B. Peter  
C. Matthew D. John
79. Who served in the Temple when he was young?  
A. Samuel B. David  
C. Elijah D. Moses
80. Ananias and his wife called \_\_\_\_\_ decided to cheat God.  
A. Sarah B. Sapphira  
C. Eve D. Ruth
81. The book of the Bible telling us about the world and everything created is \_\_\_\_\_.  
A. Leviticus B. Exodus  
C. Revelation D. Genesis
82. Whoever refuses to work should **not** be allowed to:-  
A. go to school B. sing  
C. eat D. cook food
83. Who **among** the following saw a burning bush?  
A. Jeremiah B. Joshua  
C. Levi D. Moses
84. Who **among** the following created the animals?  
A. Abraham B. Adam  
C. God D. Eve
85. David killed Goliath with \_\_\_\_\_.  
A. sword B. spear  
C. sling and a stone D. javelin
86. Who was raised from death by Jesus?  
A. Martha B. John  
C. Andrew D. Lazarus
87. Who **among** the following had refused to be washed his feet by Jesus?  
A. Peter B. John  
C. Judas D. James
88. One of the following was a way of expressing peace in African Traditional Society. Which one?  
A. Quarrelling  
B. Being selfish  
C. Staying alone  
D. Talking to each other
89. If your classmate helps you with a pencil after yours got lost you should \_\_\_\_\_.  
A. tell him not to be helpful  
B. be thankful  
C. abuse him  
D. hate him
90. Hannah prayed to be given a \_\_\_\_\_.  
A. wealth B. a husband  
C. a son D. food





