

STEGA SERIES

DARASA LA NNE 2015

KISWAHILI

MUDA: 1: DAKIKA 40

Soma kifungu kifuatacho. Kina nafasi 1-15. Kwa kila nafasi umepewa viteuzi vinne.


Chagua jibu lifaalo kujaza pengo.

Kila mtoto _____ 1 _____ haki ya kwenda shuleni ili apate _____ 2 _____. Mtoto anapofikisha _____ 3 _____ wa kwenda shuleni anastahili apelekwe na wazazi wake _____ 4 _____ kucheleweshwa. Iwapo hana _____ 5 _____ wake wawili, basi _____ 6 _____ jukumu la _____ 7 _____ ambao wanamlea mtoto _____ 8 _____ kumpeleka shuleni _____ 9 _____ elimu ni muhimu sana katika maisha _____ 10 _____ mtoto huyo siku za _____ 11 _____. Mtoto anastahili apate elimu ya _____ 12 _____, shule ya msingi, shule ya upili na hata chuo kikuu _____ 13 _____ apate mafunzo ya kazi atakayofanya ili ajenge _____ 14 _____ lake. Tukumbuke kuwa, elimu ni mwangaza na taa _____ 15 _____ maisha yetu.

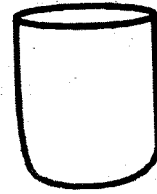
- | | | | |
|------------------|-------------|--------------|--------------|
| 1. A. wana | B. ana | C. una | D. kina |
| 2. A. walimu | B. chakula | C. elimu | D. kucheza |
| 3. A. umri | B. umli | C. umuri | D. umwili |
| 4. A. kabla | B. na | C. baada | D. bila |
| 5. A. mzazi | B. wasasi | C. wazazi | D. msasi |
| 6. A. si | B. ni | C. sio | D. ndio |
| 7. A. ule | B. yule | C. wale | D. ule |
| 8. A. hawa | B. huyu | C. huu | D. huo |
| 9. A. kwa sababu | B. ili | C. wala | D. bila |
| 10. A. za | B. cha | C. wa | D. ya |
| 11. A. usoni | B. kisogoni | C. awali | D. mgongoni |
| 12. A. chechea | B. chekekea | C. chekechea | D. chechekea |
| 13. A. ila | B. ili | C. wala | D. sababu |
| 14. A. nchi | B. inchi | C. mataifa | D. taifa |
| 15. A. kwa | B. katika | C. ndani | D. kwenye |

Jibu maswali kulingana na maagizo

16. Jibu la hujambo ni _____
A. jambo
B. sijambo
C. hatujambo
D. hamjambo
17. Andika sentensi ifuatayo kwa wingi
Kitovu cha mtoto kina kidonda
A. Vitovu cha watoto hakina kidonda
B. Vitovu vya mtoto vina vidonda
C. Vitovu vya watoto vina kindonda
D. Vitovu vya watoto vina vidonda
18. Jaza pengo kwa kiunganishi kifaacho:
Mwanafunzi hakuandika _____ hokusoma
A. bila B. sababu
C. ila D. wala
19. Alama hii ya barabarani inaonyesha ishara gani?



- A. Mshangao wa abiria
B. Kuna hatari mbele
C. Kuna shimbo mbele
D. Barabara imenyooka
20. Jaza pengo kwa kishiria sahihi
Kibogoyo _____ hakuweza kutamka maneno
A. kile B. hiki
C. huyu D. hichi
21. Jaza pengo kwa - pya
Gari _____ litambeba bwana arusi
A. mapya B. lipya
C. mpya D. jipya
22. Tambua jina la umbo katika mchoro



- A. mche duara B. pia
C. piramidi D. mche mraba
23. Kinyume cha neno werevu ni _____
A. uchochole B. chukia
C. ujinga D. hiari
24. Jiko la makaa huitwa _____
A. jiko B. seredani
C. meko D. stovu
25. Kanusha sentensi ifuatayo:-
Sisi tumechelewa kufika shuleni
A. Sisi hatukuchelewa kufika shuleni
B. Sisi hatutachelewa kufika shuleni
C. Sisi hatujachelewa kufika shuleni
D. Sisi hatumechelewa kufika shuleni
26. Ni sentensi ipi ambayo imeandikwa kati wakati wa mazoea?
A. Tunaandika isha ya barua
B. Mwalimu hutufundisha kwa ustadi
C. Tutacheza uwanjani
D. Gari kubwa limepita hapa
27. Kumi elfu na moja ni sawa na _____
A. 1,001 B. 10,001
C. 11,000 D. 11,001
28. Utamwitaje mtoto wa mtoto wako?
A. kitukuu B. mjukuu
C. mpwa D. shangazi
29. Tegua kitendawili: - Mama nieleke?
A. kitanda B. gari
C. usingizi D. maziwa
30. Ni mmea upi unaozaa mchele?
A. mchele B. mgomba
C. mhindi D. mpunga

Soma ufahamu kisha ujibu maswali 31-40

Binadamu ni kiumbe tofauti akilinganishwa na wanyama wengine. Yeye ana akili timamu inayomwezesha kutambua mema na mabaya. Binadamu aliumbwa na mwenyezi Mungu kwa maumbile ya kipekee kama Mungu mwenyewe. Kwa hivyo ana kila sababu ya kumheshimu kumpa sifa kila anapostahili kufanya hivyo.

Kwa kujua ya kwamba, ana uwezo zaidi ya viumbe wengine ameanza kuwa na kiburi cha kufanya mambo mengi mabaya duniani. Yeye hukata miti ovyo na kusababisha jangwa. Miti anayoikata anaitumia kuchoma makaa. Hali hii imesababisha maeneo anakoishi kuwa jangwa bila mvua ya kustawisha mimea. Vile vile amelima hadi kandokando ya mito.

Binadamu ametumia ujuzi wake kuunda zana hatari za vita kama vile: mabomu, maguruneti na mizinga vyote hivi husababisha vifo vya binadamu vinapotumiwa. Katika maziwa, bahari hata mito kuna uchofu mwingi mno kutoka viwandani. Uchafu wa vinyesi, moshi kutoka kwenye magari na viwandani, kemikali hatari, petroli na hata maji machafu, vyote huelekezwa kwenye mito, bahari na maziwa. Hali hii huua viumbe wanaoishi majini. Tusimame imara, tuungane mikono ili tupige vita uchafuzi wa mazingira. Tupande miti mingi ili kudumisha mazingira.

31. Kwa nini binadamu ni tofauti na viumbe wengine?
A. ana nywele B. ana akili timamu
C. ana mikono D. ana kiburi
32. Binadamu anafananishwa na nani kwa maumbile?
A. wanyama B. binadamu
C. Mungu D. uchafu
33. Binadamu anastahili kufanya nini kwa mwenyezi Mungu?
A. amtuuze B. asimsifu
C. asimheshimu D. amheshimu
34. Miti inapokatwa kwa wingi haisababishi nini?
A. jangwa B. janga
C. ukame D. mvua
35. Lengo la binadamu kukata miti ni _____
A. kuleta mvua B. kuunda viti
C. kuchoma makaa D. kulima shamba
36. Ipi si zana ya kivita katika taarifa uliosoma?
A. Mabomu B. Maguruneti
C. Bunduki D. Mizinga
37. Ziwa linalounganisha nchi za Kenya, Uganda, na Tanzania ni
A. Viktoria B. Baringo
C. Turkana D. Naivasha
38. Neneo ziwa liko katika ngeli ya _____
A. YA-YA B. LI-YA
C. U-ZI D. U-I
39. Kuungana mikono ni _____
A. kushikana mikono B. kutafuatana
C. kupigana vita D. kushirikiana
40. Shida nyingi zimeletwa na niani duniani?
A. zana za vita B. uchafu wa mazingira
C. binadamu D. viwanda

Soma kifungu hiki kisha ujibu maswali 41-50.

Katika mtaa wa Pokezi paliishi msichana mmoja kwa jina Kadzo. Alizaliwa katika mji wa Malimwengu. Baba yake alienda mjini humo akiwa na umri wa miaka thelathini. Tangu kuzaliwa kwa Kadzo alikuwa hajawahi kuenda kwa babu yake huko mashambani. Alikuwa hajaona nyumba za msonge zilizoezekwa kwa nyasi.

Wanyama kama vile: mbwa, paka, kondoo na mbuzi aliwaona tu kwenye televisheni, vitabu au magazeti. Siku moja aliamua kuenda kumtembelea babu mashambani akiwa ameandamana na rafiki yake wa chanda na pete kwa jina kigeugeu. Walipofika walikaribishwa kwa mikono miwili.

Huko walipewa vyakula vya kiasili. Walipewa viazi vitamu vya kuchemshwa, sima kwa mboga za mchicha na chai ya mkandaa. Asubuhi walipewa uji wa mtama uliotiwa sukari kiasi na maziwa yaliyoganda. Walifurahia pia asali iliyorinwa na babu aliyekuwa na mizinga ya nyuki. Kwa hakika walifurahia ziara yao ya mashambani.

Baada ya kula kishuka, walipelekwa malishoni ili kuwachunga: ngombe, mbuzi na kondoo. Walijifunza kuoga kwa kutumia karai. Chumba cha msala kilikuwa shimo lililozungushwa ukuta na kuezekwa nyasi. Kwa keli walifurahia maisha ya mashambani. Hawakutaka kurejea mjini.

41. Kadzo alizaliwa wapi?
A. Mashambani B. Mjini
C. Pokezi D. Hatujaelezwa
42. Baba alienda mjini akiwa na umri wa miaka wa miaka mingapi?
A. Themanini B. Ishrini
C. Thelathini D. Sitini
43. Nyumba ya msonge ni nyumba gani?
A. ya duara B. ya mstatili
C. ya pembe tatu D. ya kisasa
44. Tangu kuzaliwa, Kadzo alikuwa hajaenda wapi?
A. Malimwengu B. Mashambani
C. Mjini D. Kwa baba
45. Rafiki wa chanda na pete ni sawa na rafiki wa
A. majivuno B. ulimi na mate
C. juujuu D. usaliti
46. Miongoni mwa vyakula vilivyotajwa, ni kipi hawa kula?
A. viazi vitamu B. ugali
C. mchicha D. mihogo
47. Makao ya nyuki ni _____
A. kiota B. mzinga
C. pango D. kombe
48. Nini maana ya kishuka?
A. chakula cha mchana
B. chakula cha asubuhi
C. chakula cha jioni
D. chakula cha usiku
49. Sehemu ya juu ya nyumba ya msonge huwa na umbo la _____
A. piramidi B. mstatili
C. mche D. pia
50. Kichwa kifaacho kwa habari hii ni _____
A. Mtaa wa pokezi
B. Mji wa Malimwengu
C. Ubora wa Maisha ya Mashambani
D. Kadzo na Kigeugeu

STEGA SERIES

STANDARD FOUR 2015

MATHEMATICS

Time: 2 Hours

1. What is the place value of digit 6 in the number 56942?

A. Hundreds	B. Tens
C. Thousands	D. Ten thousands

2. $4392 + 675 + 18921 =$

A. 22988	B. 23988
C. 23889	D. 23898

3. Work out :-

$$\begin{array}{r} 38 \\ \times 24 \\ \hline \end{array}$$

A. 921	B. 62
C. 912	D. 291

4. How many $\frac{1}{4}$ kg packets are in 56kg?

A. 112	B. 224
C. 14	D. 108

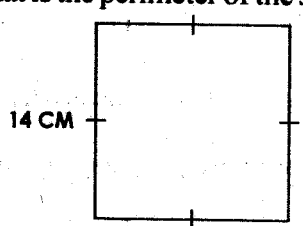
5. Which of the fraction below is seven ninths?

A. $\frac{7}{9}$	B. $\frac{5}{9}$
C. $\frac{9}{7}$	D. $\frac{4}{9}$

6. Subtract :- $39.3 - 14.38 =$

A. 24.29	B. 25.08
C. 25.48	D. 24.92

7. What is the perimeter of the square below?



A. 112 cm	B. 56cm
C. 196cm	D. 28cm

8. 48 half litres = _____ litres

A. 96	B. 24
C. 12	D. 192

9. How many minutes are in 4h 50min?

A. 290min	B. 340min
C. 450min	D. 4050min

10. How many days are in the months of March, June, and July?

A. 92	B. 91
C. 93	D. 90

11. Akinyi bought a dress for sh 230 and a pen for sh 18.50. How much did she pay for the items?

A. sh 254. 50	B. sh 248.50
C. sh 249.50	D. sh 252.50

12. Add:-

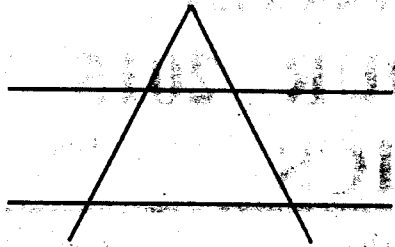
M	CM
4	13
+ 2	18
6	96

A. 13m 127 cm	B. 12m 127 cm
C. 12m 27cm	D. 13m 27cm

13. Convert 0.08 into fractions

A. $\frac{8}{10}$	B. $\frac{8}{100}$
C. $\frac{8}{1000}$	D. $\frac{0.8}{100}$

14. How many points of intersection are in the figure below?



- A. 6 B. 5
C. 8 D. 10

15. Work out :-

Sh	Ct
94	15
-38	80

- A. sh 55 35ct B. sh 56 95ct
C. sh 54 35ct D. sh 55 45ct

16. Evaluate:-

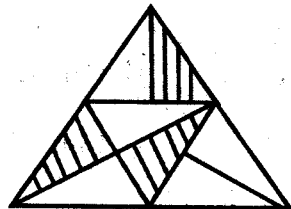
4.96
+ 8.24

- A. 12.120 B. 12.12
C. 13.2 D. 13.12

17. $\frac{3}{4} \times 60 =$

- A. 50 B. 120
C. 90 D. 45

18. What fraction is unshaded?



- A. $\frac{3}{8}$ B. $\frac{5}{8}$
C. $\frac{3}{10}$ D. $\frac{5}{11}$

19. What is the value of :-

$506 \div 23?$

- A. 220 B. 24

C. 22

D. 202

20. What is the next number in the pattern below?

13, 18, 22, 27 _____

- A. 31 B. 32
C. 84 D. 35


21. Arrange $\frac{1}{10}$, $\frac{1}{3}$, $\frac{1}{8}$ and $\frac{1}{6}$ from the largest to the smallest

- A. $\frac{1}{10}$, $\frac{1}{8}$, $\frac{1}{6}$, $\frac{1}{3}$ B. $\frac{1}{3}$, $\frac{1}{10}$, $\frac{1}{8}$, $\frac{1}{6}$
C. $\frac{1}{8}$, $\frac{1}{10}$, $\frac{1}{3}$, $\frac{1}{6}$ D. $\frac{1}{3}$, $\frac{1}{6}$, $\frac{1}{8}$, $\frac{1}{10}$

22. What is a ninth of 108?

- A. 9 B. 8
C. 12 D. 14

23. How many columns are in the figure below?



- A. 6 B. 30
C. 5 D. 35

24. $\frac{7}{9} - \frac{3}{9} =$

- A. $\frac{10}{9}$ B. 4
C. $\frac{9}{4}$ D. $\frac{4}{9}$

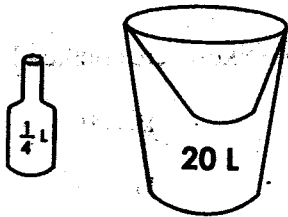
25. What is the place value of digit 7 in the number 963.47

- A. Tenths B. Oneths
C. Thousands D. Hundredths

26. Ali has 904 goats while Mohamed has 200 more goats than Ali. How many goats do both have altogether?

- A. 2080 B. 1104
C. 2008 D. 1114

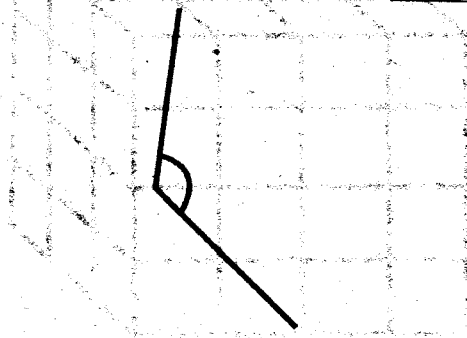
27. Convert 825cm into metres
- A. 8.25m B. 8m 25cm
C. $8\frac{1}{2}$ m D. 82500m
28. Which of the numbers below is NOT a factor of 96?
- A. 54 B. 16
C. 24 D. 48
29. A meeting took 345 minutes. How many hours and minutes did the meeting take?
- A. 4h 35min B. 3h 45min
C. 3h 5min D. 5h 45min
30. By how much is $\frac{9}{13}$ greater than $\frac{3}{13}$?
- A. $\frac{9}{13}$ B. $\frac{5}{13}$
C. $\frac{6}{13}$ D. $\frac{11}{13}$
31. How many bottles would fill the bucket with water?



- A. 80 B. 5
C. 100 D. 40
32. Work out :-
- $$4 \overline{) 79}$$
- A. 3 rem 19 B. 19 rem 3
C. 19 rem 4 D. 18 rem 6
33. Which of the fractions below is equal to a whole?
- A. $\frac{9}{9}$ B. $\frac{7}{10}$
C. $\frac{9}{2}$ D. $1\frac{1}{2}$
34. A party was attended by 250 women, 200 men while children were 100 more than the adults. How many people were at the party altogether?
- A. 950 B. 1000


C. 550 D. 850

35. The angle below is known as _____ angle.



- A. right B. acute
C. obtuse D. reflex
36. What is the number thirty three thousand three hundred and thirty three written in figures?
- A. 33033 B. 330303
C. 33333 D. 33303
37. How many months are in $4\frac{1}{2}$ years?
- A. 54 B. 48
C. 60 D. 56
38. Work out :-
- $$4 \overline{) 10 \text{ m } 40 \text{ cm}}$$
- A. 2m 80cm B. 2m 90cm
C. 3m 60cm D. 2m 60cm
39. How many twenty shilling coins are in 4-two hundred shilling notes?
- A. 400 B. 800
C. 40 D. 10
40. $24\text{kg} - 6\text{kg} =$ _____
- A. 19kg B. 18kg
C. 15kg D. 14kg
41. Which multiple of a 9 comes just before 81?
- A. 63 B. 90
C. 69 D. 72

42. How many small cubes are used to make the stack below?

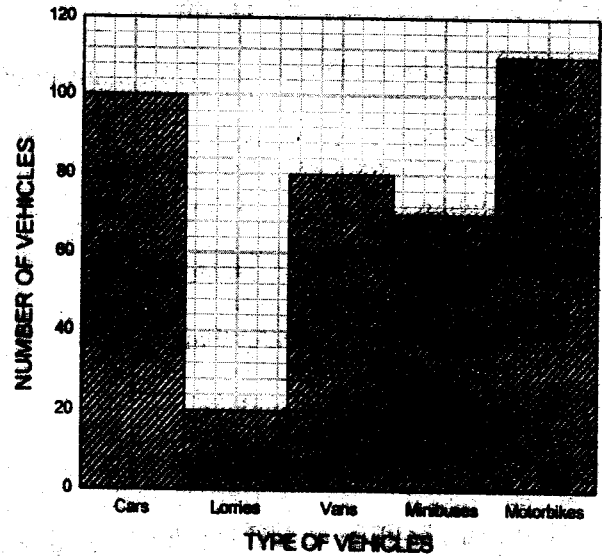


- A. 36 B. 48
C. 60 D. 30
43. Add :-
- $$\begin{array}{r} 67913 \\ 8364 \\ +92418 \\ \hline \end{array}$$
- A. 169695 B. 167695
C. 168695 D. 168659
44. $4 \times \frac{3}{11} =$
- A. $\frac{3}{44}$ B. $\frac{12}{11}$
C. $\frac{11}{12}$ D. $\frac{12}{44}$
45. Which of the decimal numbers below is the largest?
- A. 0.8 B. 0.08
C. 0.24 D. 0.12
46. Fill in the blank :-
- _____ x 18 = 216
- A. 234 B. 3888
C. 14 D. 12
47. Mukami bought 1.2kg of rice at sh 67.50. She gave the shopkeeper sh 200 note. What balance did she

get?

- A. sh 367.50 B. sh 133.50
C. sh 132.50 D. sh 134.50

The graph below shows the number of vehicles counted by pupils one afternoon. Use it to answer questions 48 to 50



48. How many motorbikes were counted?
- A. 110 B. 100
C. 95 D. 105
49. Which type of vehicle was LEAST counted?
- A. Motorbikes B. Lorries
C. Vans D. Car
50. How many vehicles were counted altogether?
- A. 390 B. 380
C. 375 D. 385

STEGA SERIES

STANDARD FOUR 2015

ENGLISH

Time: 1 hour 40 minutes

Read the broken passage below. and fill in the blank spaces with the most correct word.

A man walked 1 a restaurant and shouted his 2 to the 3. Please give me chicken and chips and give 4 here 5. 6 I eat, I want them to eat also.

The waiter brought the man's 7 and gave all the rest 8. After 9 it, the man said 'Give me a 10 of coke and all the rest here.

They all were happy and 11 the man's 12. Finally the man said, 'Give me my 13 and each one of them theirs. "That's 14 the man was killed. His 15 will be this Sunday.

- | | | | |
|-----------------|--------------|---------------|----------------|
| 1. A. at | B. on | C. into | D. outside |
| 2. A. older | B. order | C. menu | D. food |
| 3. A. manager | B. cashier | C. cook | D. waiter |
| 4. A. every one | B. all one | C. everyone | D. everybodies |
| 5. A. too | B. two | C. to | D. as me |
| 6. A. when | B. but | C. although | D. though |
| 7. A. mail | B. meel | C. mill | D. meal |
| 8. A. them | B. theres | C. theirs | D. his |
| 9. A. fishing | B. finishing | C. finalising | D. ending |
| 10. A. spoonful | B. glass | C. bottle | D. cup |
| 11. A. sing | B. song | C. signing | D. singing |
| 12. A. praise | B. price | C. prize | D. prise |
| 13. A. bale | B. bail | C. bill | D. boil |
| 14. A. what | B. how | C. who | D. which |
| 15. A. funeral | B. Final | C. bury | D. end |

Pick nouns from the given questions 16-17.

16. The hatred between them started along time ago
A. started
B. between
C. hatred
D. them
17. The height of the building was scaring
A. height
B. was
C. scaring
D. the

Fill in the blank spaces with the best preposition in question 18-19.

18. Most patients die _____ lack of urgent treatment.
A. by
B. with
C. of
D. for
19. The children were afraid _____ the lion.
A. because
B. of
C. for
D. with
20. Mona has not done her homework, _____ ?
A. she hasn't
B. hasn't she
C. has she
D. is it

Choose the opposite of the underlined word.

21. Mr Owino bought his son a very expensive watch.
A. cheap
B. dear
C. valuable
D. costly
22. Many people are purchasing second hand cars
A. buying
B. repairing
C. importing
D. selling

For questions 23-24, give a word that means the same as the underlined words.

23. My father has gone to the man who fixes water pipes.
A. mason
B. plumber

- C. waterman
D. mechanic

24. Hassan wants to become one who rides horses in races.
A. athlete
B. cowboy
C. pilot
D. jockey

In question 25-27 give a word similar to the underlined.

25. The chef cooked a very delicious food.
A. spiced
B. tasty
C. plenty
D. hot
26. Cherono was delighted to pass her exams.
A. eager
B. happy
C. proud
D. congratulated
27. Those flowers are very pretty.
A. large
B. sweet smelling
C. beautiful
D. coloured

What sound do these animals make?

28. Our dog _____ when it saw a stranger.
A. granted
B. neighed
C. brayed
D. barked
29. The bull _____ all night.
A. bellows
B. trumpets
C. bleats
D. billows
30. Becky _____ like a rabbit as she laughs.
A. hisses
B. hoots
C. roars
D. squeals

Read the passage below and answer questions 31-40.

The Takwa ruins are situated South of Manda Island in Lamu County. Takwa was founded around 1950. It was later abandoned in 1970. The inhabitants of Takwa settled at Shela on Lamu Island. The ruins consist of an ancient town that was abandoned mid this century. The ruins were first excavated by James Kirkman in 1971.

The Great Mosques at Takwa is well preserved and another important structure is the date 1956-1960. Twice a year, the people from Shela in Lamu visit the Pillar Tomb to pray for rain. The Takwa Ruins were designated at Kenya National Monument in 1982.

31. Where is Takwa Ruins found? _____
- A. North of Lamu County
 - B. South of Lamu County
 - C. North of Manda Island
 - D. South of Manda Island
32. To abandon is to _____
- A. leave a place
 - B. live at a place
 - C. build a place
 - D. decorate a place
33. Inhabitants are _____
- A. visitors to a place
 - B. people who live in a place
 - C. tourists
 - D. terrorists
34. Where did the first people live? _____
- A. at Manda
 - B. On an Island
 - C. at Shela
 - D. South of Lamu
35. The town that was abandoned _____
- A. is very modern
 - B. is very old
 - C. is very big
 - D. is very small
36. How old was Takwa before it was abandoned? _____
- A. 20 years
 - B. 1950 years
 - C. 1970 years
 - D. 1971 years
37. The people of Takwa were _____
- A. Christians
 - B. Hindus
 - C. Moslems
 - D. Pagans
38. How often do Shela people visit the Pillar Tomb? _____
- A. once every two years
 - B. yearly
 - C. in June and December
 - D. two times in a year
39. To the Shela people the Pillar Tomb is a _____
- A. cursed place
 - B. sacred place
 - C. haunted place
 - D. disrespected place
40. A good title for this story is _____
- A. The Takwa Ruins
 - B. Manda Island
 - C. Lamu County
 - D. Pillar Tomb

Read the passage below and then answer questions 41-50.

Yesterday a young man called Danson came to see me. He had a stomachache that would not go away. His stomach especially hurt when he woke up. The thought of eating would make him feel sick. For breakfast, he managed only juice, while lunch time was a few cups of coffee and something very light. He also had nausea and cramping. He had no energy. In the evening, he barely ate, since his appetite was very poor.

Strangely, he would become alert between 10 and 11pm, alert enough to get a fair amount of work done. Danson would then sleep around mid-night and wake up dog-tired. He suspected that his problem had something to do with poor digestion. He was rather surprised when I told him what he had described were symptoms related to stress.

41. The man Danson visited could be a
A. friend
B. work-mate
C. doctor
D. cook
42. The thought of eating made him sick because
A. he did not feel like eating
B. the food was no good
C. it was early in the morning
D. he had just woken up
43. What could the young man have eaten for lunch?
A. Ugali cabbages
B. Chapati, beef, stew
C. Chicken, chips
D. A samosa
44. When one has nausea, he/she feels
A. hungry
B. to vomit
C. satisfied
D. tired
45. He barely ate.....
The word barely is a /an
A. Noun
B. Adverb
C. Adjective
D. Verb
46. At what time is Danson alert?
A. In the morning
B. In the afternoon
C. Late in the evening
D. At mid-night
47. To be dog tired is to be
A. very tired
B. not very tired
C. fierce like a dog
D. as faithful as a dog
48. The main problem with Danson is
A. food poisoning
B. poor digestion
C. poor appetite
D. stress
49. The word symptoms means
A. problems
B. cause
C. result
D. signs
50. The passage mainly talks about
A. Education
B. Family life
C. Health
D. Security


STEGA SERIES

STANDARD FOUR 2015

SCIENCE

Time: 1 hour 40 min

- Tooth cavities are caused by
 - plague
 - teeth sensitivity
 - bleeding gums
 - acid
- Which of the words in the initials AIDS is NOT correctly matched with its meaning?
 - Acquired _____ get from
 - Immune _____ lack of
 - Deficiency _____ lack of
 - Syndrome _____ many signs
- Which one of the following is NOT an oil crop?
 - Cotton
 - Sunflower
 - Coconut
 - Palm tree
- The weed illustrated below is called



- sodom apple
 - oxalis
 - thorn apple
 - mexican marigold
- Which pair of teeth have similar function?
 - Molars and premolars
 - Canines and incisors
 - Premolars and incisors
 - Incisors and molars
 - Which animal is kept for meat and eggs

- Hen
 - Sheep
 - Cattle
 - Goats
- One of the following is NOT a characteristic of animals. Which one is it?
 - They die
 - They remove waste
 - They transpire
 - They all move
 - Which of the following is NOT a requirement for good health?
 - Medical care
 - Exercises
 - Food
 - Bathing
 - Which one is NOT a recreational use of water?
 - Boat racing
 - Swimming
 - Moving goods across a lake
 - Surfing
 - Goats are reared for
 - Mohair and milk
 - Milk and wool
 - Wool and mutton
 - Mutton and beef
 - Which of the following animals is CORRECTLY?

<u>Animal</u>	<u>The food it eats</u>
A. Tick	Decaying matter
B. Rat	Nectar
C. Butterfly	Grains
D. Spider	Insects

12. The clouds which are dark grey in colour and are found low in the sky

- A. are also dark grey in colour
- B. have a flat base
- C. form high in the sky
- D. look like bundles of cotton wool

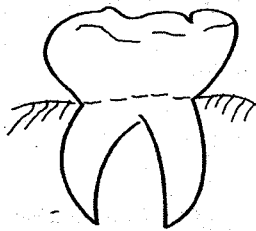
13. A human being develops _____ sets of teeth

- A. 2
- B. 20
- C. 32
- D. 8

14. Food remains between the teeth produces a harmful substance called

- A. acid
- B. plague
- C. gingivitis
- D. HIV

15. The tooth drawn below is used for



- A. tearing
- B. grinding
- C. biting
- D. cutting

16. On farms, fish are kept in

- A. tanks
- B. ponds
- C. lakes
- D. rivers

17. Substances found in foods which help to keep the body healthy are called

- A. nutrition
- B. diet
- C. meal
- D. nutrients

18. Kiliku carried chapati and beef for lunch. Which one of the the following would he include to make

his meal balanced?

- A. Ugali
- B. Rice
- C. Fish
- D. Ripe banana

19. Light is NOT useful in

- A. seeing clearly
- B. ironing
- C. photography
- D. safety

20. Which of the following foods is a source of energy?

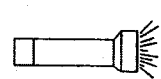

- A. Kales
- B. Termites
- C. Yams
- D. Oranges

21. Which one of the following is NOT a group of cash crop?

- A. Oil crop
- B. Fibre crop
- C. Cereal crop
- D. Beverage crop

22. Which one of the following is NOT an artificial

source of light



- A.
- B.
- C.
- D.

23. Which one of the animals below does NOT move by flying?

- A. Bee
- B. Mosquito
- C. Ostrich
- D. Bat

24. Which one of the following CANNOT be used to clean teeth?

- A. Warm water
- B. Tooth paste
- C. Chewed stick
- D. Sugary water

25. Which one of the following is NOT a component of

soil?

- A. Plastics
- B. Organic matter
- C. Water
- D. Minerals

26. The soil with very fine particles is

- A. silt
- B. clay
- C. sand
- D. loam

27. The flesh that holds the teeth is known as

- A. gum
- B. jaw bone
- C. crown
- D. root

28. A meal that contains the three groups of food is said to be

- A. balanced
- B. sweet
- C. nutritious
- D. healthy

29. The udder of the dairy goats should be

- A. small
- B. short
- C. large
- D. long

30. Which component of soil is investigated by adding water to a sample of soil?

- A. Water
- B. Humus
- C. Minerals
- D. Air

31. Washing, cleaning and drinking are all uses of water

- A. in industries
- B. at home
- C. for recreation
- D. on the farm


32. The teeth that grow to replace the deciduous teeth are called _____ teeth

- A. Permanent
- B. primary
- C. Wisdom
- D. Molar

33. Weeds should be

- A. allowed to grow in the field
- B. planted with the crops
- C. removed from the farms
- D. watered to grow faster

34. The animal below moves by



- A. hopping
- B. flying
- C. swimming
- D. galloping

35. Which one is a natural way of lighting a house?

Use of

- A. doors
- B. windows
- C. candles
- D. lamps

36. The **LEAST** effective method of controlling weeds is

- A. digging out
- B. use of chemicals
- C. uprooting
- D. slashing

37. Which one is **NOT** a group of food in a diet?

- A. Protective foods
- B. Body building foods
- C. Carbohydrates
- D. Cereals

38. Which instrument produces sound by plucking?

- A. guitar
- B. drum
- C. flute
- D. whistle

39. Which one of the following animals is found at home?

- A. Crocodile
- B. Ostrich
- C. Giraffe
- D. Donkey

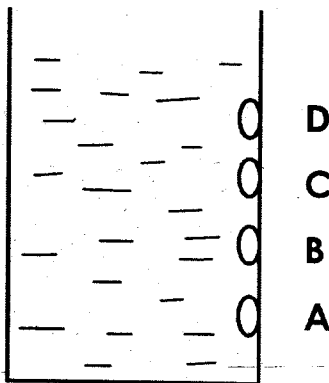
40. Which of the following is a product of fibre crops?

- A. Papers
- B. Baskets
- C. Pencils
- D. Plates

41. Which organ is a sense of touch?

- A. Skin
- B. Tongue
- C. Tear
- D. Eye

42. The diagram below represents an experiment done to investigate an aspect of water



Which hole threw water the farthest

- A. D
- B. A
- C. B
- D. C

43. A std 2 pupil is LIKELY to have _____ molars

- A. 12
- B. 6
- C. 4
- D. 0

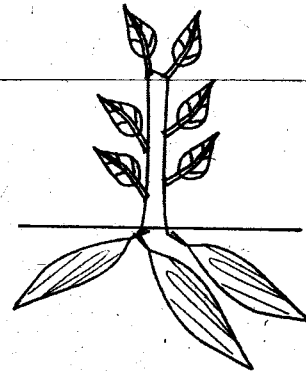
44. A spider has _____ pairs of legs

- A. 4
- B. 8
- C. 3
- D. 6

45. Which one of the following is a sinker?

- A. Feather
- B. Dry stick
- C. Coin
- D. Paper

46. The plant below is grouped as _____ crop



- A. oil
- B. tuber
- C. fibre
- D. fruit

47. Which type of teeth are the wisdom teeth?

- A. Molars
- B. Incisors
- C. Canines
- D. Premolars

48. Clouds are NOT grouped according to their

- A. height
- B. weight
- C. appearance
- D. shape

49. Which one of the following is NOT a legume?

- A. Bean
- B. Coffee
- C. Pease
- D. Green grams

50. Water is NOT stored in _____

- A. Pots
- B. Buckets
- C. Pipes
- D. Tanks

STEGA SERIES

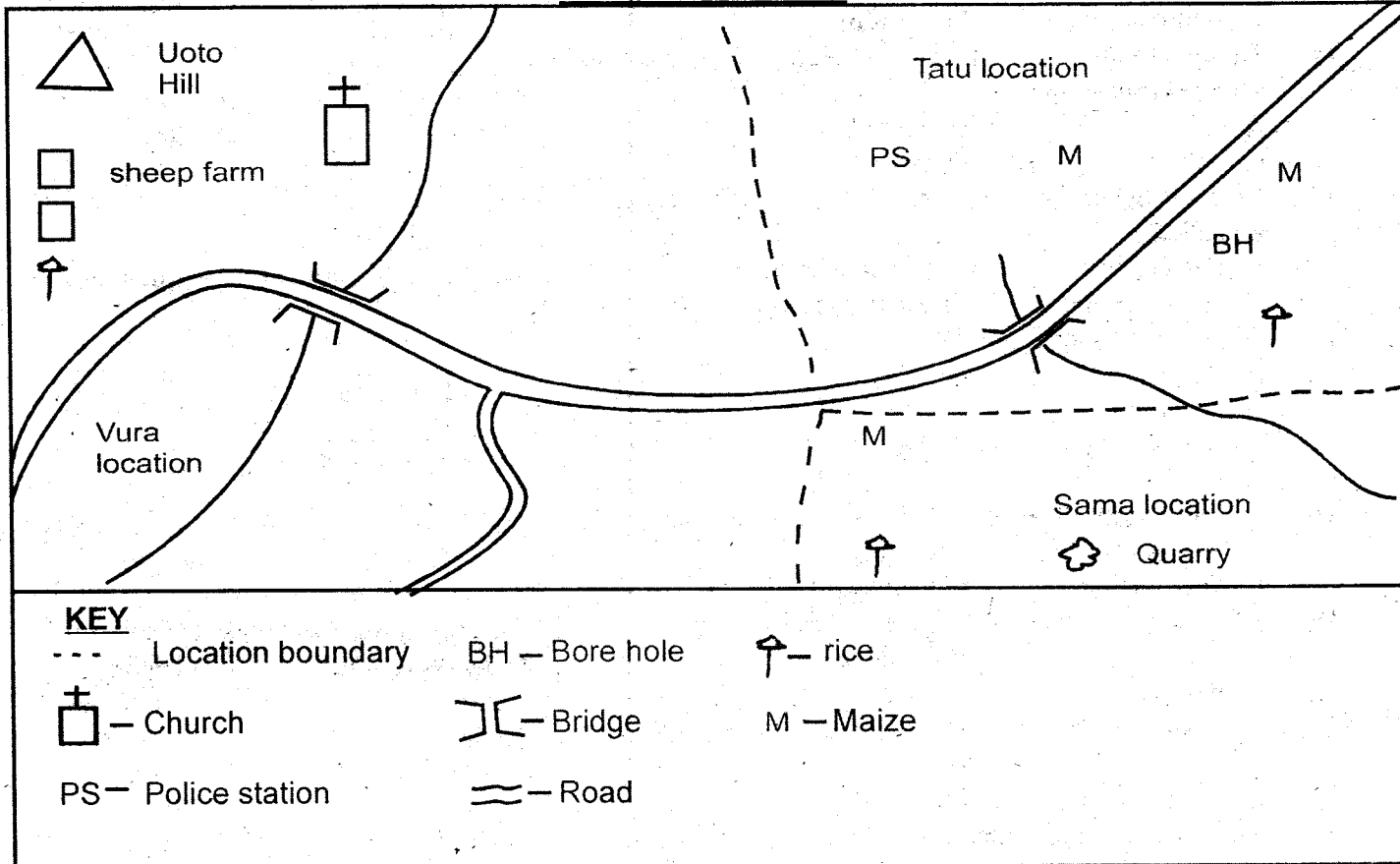
STANDARD FOUR 2015

SOCIAL STUDIES

Time: 2 hours :15 Min

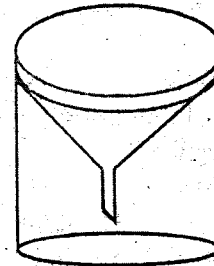
Use the map of Kigumo area to answer questions 1-7.

MAKUTO AREA



- What is the direction of the quarry from the sheep farm?
A. North East B. South East
C. North West D. South West
- The religion practised in Makuto area is
A. Islam B. Christianity
C. Hinduism D. Paganism
- How many bridges are there in Makuto area
A. one B. two
C. three D. four
- Makuto area has _____
A. one location B. two locations
C. three locations D. four locations
- The MOST common means of transport in Makuto area is
A. road B. railway station
C. water D. air
- The main food crop in Makuto area is
A. rice B. maize C. Sorghum D. Millet


- Which one of the following is a physical feature in Makuto area?
A. road B. maize
C. hill D. bridge
- Use the diagram below to answer questions 8 and 9



- The above diagram represents a weather instrument called
A. rain gauge B. windvane
C. windsock D. thermometer
- The weather element measured with the above instrument is

- A. wind direction B. speed of wind
C. Temperature D. amount of rainfall
10. The type of vegetation found along the river valley in our country are called
A. Mangrove B. Weeds
C. Riverine D. Water lily
11. The buying and selling of goods and services is known as
A. Trade B. Market
C. Communication D. Customs
12. The colour of our National flag that stand for economic activity in our country is
A. red B. black
C. white D. green
13. Rivers in our county which flow throughout the year are called
A. seasonal rivers B. permanent rivers
C. temporary rivers D. ever there rivers
14. The head of a location is the
A. Senator
B. Governor
C. Member of county assembly
D. Chief
15. The large farms where beef animals are kept are called
A. Bomas B. Ranches
C. Zero grazing D. Paddocks
16. Which one of the following is not a product from trees?
A. charcoal B. furniture
C. medicine D. ceramics
17. The four cardinal points of a compass do not include
A. North West B. East
C. South D. North
18. The direction that the needle of a compass always point is
A. South B. North
C. East D. West
19. Savanna vegetation is also called
A: desert vegetation B. forest vegetation
C. scrub vegetation D. grassland vegetation
20. Which one of the following is not a traditional industry?
A. weaving B. pottery
C. iron working D. printing
21. Which one of the following was not done by girls in traditional society?
A. fetching water B. collecting firewood
C. cooking D. raiding neighbours
22. Doctors who make medicine from vegetation are
A. Vegetarians B. Herbalists
C. Midwives D. Diviners
23. A skill taught through apprenticeship was
A. crops growing B. Medicine
C. Hunting D. Herding
24. The vegetation that grows on its own is called

- A. human made vegetation
B. planted vegetation
C. natural vegetation
D. artificial vegetation
25. The young ones of a fish are known as
A. fingerlings B. chicks
C. piglets D. puppies
26. Geese, chickens and ducks are called
A. poultry B. beef
C. dairy D. birds
27. Several constituencies make up
A. locations B. wards
C. counties D. sub-locations
28. The sun sets in the
A. East B. West
C. North D. South
29. A bad moral includes
A. honesty B. obedience
C. trust D. selfishness
- Use the diagram to answer questions 30 and 31**



30. The liquid used in the above instrument is
A. kerosine B. mercury
C. water D. petrol
31. The above instrument is used in units called
A. degress celcius B. mllilitres
C. litres D. centimeters
32. Which one of the following is not an example of a physical feature?
A. hill B. plains
C. dam D. river
33. The word weather means
A. the height above sea level
B. the daily changes of the atmosphere
C. the hotness of a place
D. the sunshine in a place
34. Which one of the following is not an example of a livestock product?
A. milk B. beef
C. silk D. mutton
35. Which one of the following is a soft wood tree?
A. Ceder B. Mahogany
C. Mvule D. Camphor
36. Birds kept for eggs are called
A. broilers B. layers
C. coupon D. locals
37. The direction between West and North is called
A. West North B. North West
C. South West D. North East
38. Which one of the following words means people's way of life?
A. democracy B. clan

39. Which one of the following is a traditional means of transport?
 A. air B. road
 C. road D. water
40. The destruction of forests is known as
 A. poaching B. afforestation
 C. deforestation D. desertification
41. The ceremony young people went through before becoming adults was
 A. wedding B. naming
 C. initiation D. marriage
42. In traditional society the youth were mainly taught by
 A. relatives B. warriors
 C. elders D. special teachers
43. Which one of the following can not use road transport?
 A. carts B. cars
 C. bicycles D. dhows
44. Wild animals and plants are found in a special place called
 A. Game parks B. Museums
 C. Orphanages D. Forest
45. Crops grown for sale are known as
 A. food crops B. subsistence crops
 C. cash crops D. fibre crops
46. A society with law and order has
 A. law breakers B. peace
 C. disputes D. conflicts
47. People walking along the road are known as
 A. pedestrians B. passengers
 C. police D. thieves
48. Which one of the following is not an example of a drainage feature?
 A. lake B. spring
 C. ocean D. hill
49. Area with a few people are said to be
 A. highly populated B. densely populated
 C. sparsely population D. thinly populated
50. Our National flag has ___ colours
 A. One B. Two
 C. Three D. Four
51. On which day do Kenyans celebrate Mashujaa day?
 A. 1st June B. 10th October
 C. 20th October D. 12th December
52. The coldness or hotness of a given place is referred to as its
 A. latitude B. altitude
 C. plateau D. temperature
53. Which one of the following is an importance of fishing?
 It _____
 A. leads to poverty
 B. is a source of minerals
 C. a source of proteins
 D. provides mutton to the people
54. Which one of the following is not a language group?
 A. Nilotes B. Maasai
 C. Cushites D. Bantus
55. A river ends at a place called
 A. Highland B. Source
 C. Mouth D. Valley
56. In our county most people travel using
 A. railway B. road
 C. air D. horses
57. In the traditional society the youth learnt at
 A. school B. church
 C. shrines D. home
58. A member of parliament represents an area known as
 A. sublocation B. constituency
 C. ward D. county
59. Which one of the following is used to move the metal indicator of the thermometer back to its original position?
 A. magnet B. glass
 C. water D. mercury
60. The common trees in savanna vegetation is
 A. Cedar B. Acacia
 C. Water lily D. Papyrus
- C.R.E**
61. Day and night was created by God on _____ day
 A. 1st B. 2nd
 C. 3rd D. 4th
62. "It must be a ghost" On which of the following occasions did the disciples of Jesus think that He was a ghost
 A. when He resurrected from the dead
 B. when he walked on water
 C. when he raised Lazarus from the dead
 D. when he fed five thousand people
63. _____ and _____ were the sons of Zebedee
 A. Levi and John B. John and James
 C. Mathew and James D. Isaac and John
64. During the times of Noah there was rain for _____ days and nights
 A. Forty B. Four hundred
 C. Four D. Fifty
65. Moses was given the ten commandments at Mount
 A. Morriah B. Sinai
 C. Olives D. Kenya
66. Who among the the following made the correct choice in he bible
 A. Adam
 B. Eve
 C. Cain
 D. Ruth

67. Who among the following was the first king of Israel?
 A. David
 B. Solomon
 C. Saul
 D. Herod
68. All the following people did not help Jesus to carry the cross **except**
 A. Judas
 B. Peter
 C. Simon of Cyrene
 D. John the Baptist
69. Jesus was crucified outside Jerusalem at a place called
 A. Golgotha
 B. Bethany
 C. Gethsemane
 D. Olives
70. During Easter, what do Christians remember?
 A. the birth of Jesus
 B. the death of Jesus
 C. the ascension of Jesus
 D. the anointing of Jesus
71. Jesus is our saviour, He saved us by _____
 A. walking on water
 B. calming the storm
 C. eating with sinners
 D. dying on the cross
72. The following are services carried out at home. Which one is not?
 A. washing clothes
 B. arranging books
 C. baby sitting
 D. carrying books to the staff room
73. Jethro was the father in law of
 A. Aaron
 B. Levi
 C. Moses
 D. Abraham
74. A group of people who believe in Jesus and follow his teaching is called _____
 A. an audience
 B. a team of champions
 C. a Christian community
 D. a troop of Christians
75. A good leader should not be _____
 A. selfish
 B. honest
 C. humble
 D. kind
76. According to 1 Peter 2:21 when serving others we should be ready to
 A. celebrate
 B. suffer
 C. travel
 D. pray
77. Levi was a _____
 A. Christian priest
 B. banker
 C. tax collector
 D. burglar
78. A man who was attacked by robbers and beaten badly was helped by a good
 A. priest
 B. Samaritan
 C. gentile
 D. Levite
79. Agikuyu call their God _____
 A. Ngai
 B. Were
 C. Enkai
 D. Mulungu
80. Jesus grew up in _____
 A. Bethlehem
 B. Jerusalem
 C. Nazareth
 D. Bethsaida
81. Adam and Eve lost the gift of the everlasting life when _____
 A. they ate the fruits
 B. they were cheated the snake
 C. they disobeyed God
 D. they realised they are naked
82. Who among the following Kings of Israel is regarded as the wisest?
 A. David
 B. Solomon
 C. Ahab
 D. Saul
83. Who said these words "Your people will be my people and your God will be my God"?
 A. Naomi
 B. Elimelech
 C. Ruth
 D. Orpah
84. Moses made three of the following excuses to God **except** one. Which one?
 A. He was not a good speaker
 B. He lacked authority
 C. He had killed an Egyptian
 D. He said that the people were willing to listen to him
85. Who among the following started serving God at an early age?
 A. Abraham
 B. Jonathan
 C. Samuel
 D. Solomon
86. Which is the second book of the Old Testament
 A. Exodus
 B. Mark
 C. Genesis
 D. Mathew
87. Who among the following was not a disciple of Jesus?
 A. Peter
 B. Philip
 C. James
 D. Joseph
88. When Jesus calmed the storm he showed His power over
 A. death
 B. water
 C. nature
 D. environment
89. We are required to _____ those who wrong us
 A. neglect
 B. jail
 C. forgive
 D. abuse
90. Mr John is a manager of a school in the city. He is rude, abusive, cruel and dishonest. He is a _____ leader
 A. kind
 B. good
 C. bad
 D. loved

JINA LAKO

JINA LA SHULE YAKO



STEGA SERIES
KISWAHILI SEHEMU YA PILI: INSHA
DARASA LA NNE 2015

MUDA: DAK. 40

Andika insha ya kupendeza juu ya:

SIKU NILIYOKUWA NA FURAHA SANA

A series of horizontal lines for writing an essay.

STEGA SERIES - STD 4

MARKING SCHEME 2015

<u>ENGLISH</u>		<u>KISWAHILI</u>		<u>MATHS</u>		<u>SCIENCE</u>		<u>SOCIAL STUDIES</u>		
1. C	31. D	1. B	31. B	1. C	31. A	1.D	31. B	1. B	31. A	61. A
2. B	32. A	2. C	32. C	2. B	32. B	2. B	32. A	2. B	32. C	62. B
3. D	33. B	3. A	33. D	3. C	33. A	3. D	33. C	3. B	33. B	63. B
4. C	34. C	4. D	34. D	4. B	34. B	4. B	34. C	4. C	34. C	64. A
5. A	35. B	5. C	35. C	5. A	35. C	5. A	35. B	5. A	35. A	65. B
6. A	36. A	6. B	36. C	6. D	36. C	6. A	36. D	6. B	36. B	66. D
7. D	37. C	7. C	37. A	7. B	37. A	7. C	37. D	7. C	37. B	67. C
8. C	38. D	8. B	38. B	8. B	38. D	8. D	38. A	8. A	38. C	68. C
9. B	39. B	9. A	39. D	9. A	39. C	9. C	39. D	9. D	39. D	69. A
10. C	40. A	10. D	40. C	10. A	40. B	10. A	40. B	10. C	40. C	70. B
11. D	41. C	11. A	41. B	11. B	41. D	11. D	41. A	11. A	41. C	71. D
12. A	42. A	12. C	42. C	12. D	42. B	12. A	42. B	12. D	42. C	72. D
13. C	43. D	13. B	43. A	13. B	43. C	13. A	43. D	13. B	43. D	73. C
14. B	44. B	14. D	44. B	14. B	44. B	14. A	44. A	14. D	44. A	74. C
15. A	45. B	15. C	45. B	15. A	45. A	15. B	45. C	15. B	45. C	75. A
16. C	46. C	16. B	46. D	16. C	46. D	16. B	46. B	16. D	46. B	76. B
17. A	47. A	17. D	47. B	17. D	47. C	17. D	47. A	17. A	47. A	77. C
18. D	48. D	18. D	48. A	18. B	48. A	18. D	48. B	18. B	48. D	78. B
19. B	49. D	19. B	49. D	19. C	49. B	19. B	49. B	19. D	49. C	79. A
20. C	50. C	20. C	50. C	20. A	50. B	20. C	50. C	20. D	50. D	80. C
21. A		21. D		21. D		21. C		21. D	51. C	81. C
22. D		22. A		22. C		22. A		22. B	52. D	82. B
23. B		23. C		23. A		23. C		23. B	53. C	83. C
24. D		24. B		24. D		24. D		24. C	54. B	84. D
25. B		25. C		25. D		25. A		25. A	55. C	85. C
26. B		26. B		26. C		26. B		26. A	56. B	86. A
27. C		27. B		27. A		27. A		27. C	57. D	87. D
28. D		28. B		28. A		28. A		28. B	58. B	88. C
29. A		29. A		29. D		29. C		29. D	59. A	89. C
30. D		30. D		30. B		30. D		30. B	60. B	90. C

A COMPOSITION MARKING SCHEME

MARKING CRITERION

1. The composition will be assessed according to the following guidelines.

- The maximum mark will be 40 and the minimum (mark 01)

- Does the script show that the candidate can communicate accurately, fluently and imaginatively in English?

Accuracy (8 marks)

a) Correct tenses and agreement of verbs (4 marks) b) Accurate use of vocabulary (4 marks)

(16) c) Following a sequence (4 marks)

d) Correct punctuation (4 marks)

Fluency (8 marks)

a) Words in the correct order (4 marks)

b) Sentence connection and paragraphs (4 marks)

c) Correct spelling (4 marks)

d) Ideas developed in logical sequence (4 marks)

Imagination (8 marks)

a) Unusual but appropriate use of words and phrases (4 marks)

b) Variety of structure (4 marks)

NB: Please, teachers are requested to scrutinize this marking scheme before use, it is worth